

9TH EDITION

Smith's Elements of Soil Mechanics



Ian Smith



WILEY Blackwell

Smith's Elements of Soil Mechanics

Smith's Elements of Soil Mechanics

9TH EDITION

Ian Smith

*Head of the School of Engineering and the Built Environment
Edinburgh Napier University*

WILEY Blackwell

This edition first published 2014
© 2014 by John Wiley & Sons, Ltd
© 2006 Ian Smith

Registered office: John Wiley & Sons, Ltd, The Atrium, Southern Gate, Chichester, West Sussex, PO19 8SQ, UK

Editorial offices: 9600 Garsington Road, Oxford, OX4 2DQ, UK
The Atrium, Southern Gate, Chichester, West Sussex, PO19 8SQ, UK
2121 State Avenue, Ames, Iowa 50014-8300, USA

For details of our global editorial offices, for customer services and for information about how to apply for permission to reuse the copyright material in this book please see our website at www.wiley.com/wiley-blackwell.

The right of the author to be identified as the author of this work has been asserted in accordance with the UK Copyright, Designs and Patents Act 1988.

All rights reserved. No part of this publication may be reproduced, stored in a retrieval system, or transmitted, in any form or by any means, electronic, mechanical, photocopying, recording or otherwise, except as permitted by the UK Copyright, Designs and Patents Act 1988, without the prior permission of the publisher.

Designations used by companies to distinguish their products are often claimed as trademarks. All brand names and product names used in this book are trade names, service marks, trademarks or registered trademarks of their respective owners. The publisher is not associated with any product or vendor mentioned in this book. This publication is designed to provide accurate and authoritative information in regard to the subject matter covered. It is sold on the understanding that the publisher is not engaged in rendering professional services. If professional advice or other expert assistance is required, the services of a competent professional should be sought.

ISBN: 9780470673393

A catalogue record for this book is available from the British Library and the Library of Congress.

Wiley also publishes its books in a variety of electronic formats. Some content that appears in print may not be available in electronic books.

Cover image courtesy of Ian Smith
Cover design by Sophie Ford, His and Hers Design

Set in 9/11.5 pt AvenirLTStd by Toppan Best-set Premedia Limited

[1 2014]

Contents

About the Author	ix
Preface	x
Notation Index	xi
About the Companion Website	xvi
1 Classification and Physical Properties of Soils	1
1.1 Agricultural and engineering soil	1
1.2 Engineering definitions	2
1.3 Clay soils	4
1.4 Field identification of soils	5
1.5 Laboratory classification of soils	6
1.6 Activity of a clay	14
1.7 Soil classification and description	14
1.8 Soil properties	21
Exercises	30
2 Permeability and Flow of Water in Soils	33
2.1 Subsurface water	33
2.2 Flow of water through soils	35
2.3 Darcy's law of saturated flow	36
2.4 Coefficient of permeability, k	36
2.5 Determination of permeability in the laboratory	36
2.6 Determination of permeability in the field	40
2.7 Approximation of coefficient of permeability	42
2.8 General differential equation of flow	42
2.9 Potential and stream functions	44
2.10 Flow nets	45
2.11 Critical flow conditions	49
2.12 Design of soil filters	51
2.13 Capillarity and unsaturated soils	54
2.14 Earth dams	59
2.15 Seepage through non-uniform soil deposits	62
Exercises	71
3 Total and Effective Stress	74
3.1 State of stress in a soil mass	74
3.2 Total stress	75
3.3 Pore pressure	76
3.4 Effective stress	77
3.5 Stresses induced by applied loads	80
Exercises	89

4	Shear Strength of Soils	91
4.1	Friction	91
4.2	Complex stress	91
4.3	The Mohr circle diagram	92
4.4	Cohesion	96
4.5	Coulomb's law of soil shear strength	96
4.6	Modified Coulomb's law	98
4.7	The Mohr–Coulomb yield theory	98
4.8	Determination of the shear strength parameters	99
4.9	Determination of the shear strength parameters from triaxial testing	106
4.10	The pore pressure coefficients A and B	112
4.11	The triaxial extension test	118
4.12	Behaviour of soils under shear	119
4.13	Operative strengths of soils	122
4.14	The critical state	124
4.15	Sensitivity of clays	129
4.16	Residual strength of soil	130
	Exercises	133
5	Eurocode 7	136
5.1	Introduction to the Structural Eurocodes	136
5.2	Introduction to Eurocode 7	138
5.3	Using Eurocode 7: basis of geotechnical design	139
5.4	Geotechnical design by calculation	139
5.5	Ultimate limit states	145
5.6	The EQU limit state	147
5.7	The GEO limit state and design approaches	150
5.8	Serviceability limit states	155
5.9	Geotechnical design report	155
6	Site Investigation	156
6.1	EN 1997-2:2007 – Ground investigation and testing	156
6.2	Planning of ground investigations	157
6.3	Site exploration methods	160
6.4	Soil and rock sampling	164
6.5	Groundwater measurements	170
6.6	Field tests in soil and rock	172
6.7	Geotechnical reports	179
7	Lateral Earth Pressure	183
7.1	Earth pressure at rest	183
7.2	Active and passive earth pressure	183
7.3	Rankine's theory: granular soils, active earth pressure	185
7.4	Rankine's theory: granular soils, passive earth pressure	190
7.5	Rankine's theory: cohesive soils	191
7.6	Coulomb's wedge theory: active earth pressure	195
7.7	Coulomb's wedge theory: passive earth pressure	202
7.8	Surcharges	205
7.9	Choice of method for determination of active pressure	210
7.10	Backfill material	210
7.11	Influence of wall yield on design	215
7.12	Design parameters for different soil types	216
	Exercises	219

8	Retaining Structures	221
8.1	Main types of retaining structures	221
8.2	Gravity walls	221
8.3	Embedded walls	224
8.4	Failure modes of retaining structures	225
8.5	Design of gravity retaining walls	226
8.6	Design of sheet pile walls	236
8.7	Braced excavations	248
8.8	Reinforced soil	250
8.9	Soil nailing	251
	Exercises	252
9	Bearing Capacity and Shallow Foundations	255
9.1	Bearing capacity terms	255
9.2	Types of foundation	255
9.3	Ultimate bearing capacity of a foundation	256
9.4	Determination of the safe bearing capacity	263
9.5	The effect of groundwater on bearing capacity	264
9.6	Developments in bearing capacity equations	265
9.7	Designing spread foundations to Eurocode 7	269
9.8	Non-homogeneous soil conditions	284
9.9	Estimates of bearing capacity from <i>in situ</i> testing	285
	Exercises	288
10	Pile Foundations	290
10.1	Introduction	290
10.2	Classification of piles	290
10.3	Method of installation	291
10.4	Pile load testing	294
10.5	Determination of the bearing capacity of a pile	296
10.6	Designing pile foundations to Eurocode 7	303
10.7	Pile groups	311
	Exercises	313
11	Foundation Settlement and Soil Compression	315
11.1	Settlement of a foundation	315
11.2	Immediate settlement	316
11.3	Consolidation settlement	325
11.4	Application of consolidation test results	335
11.5	General consolidation	336
11.6	Eurocode 7 serviceability limit state	343
11.7	Isotropic consolidation	344
11.8	Two-dimensional stress paths	346
	Exercises	352
12	Rate of Foundation Settlement	355
12.1	Analogy of consolidation settlement	355
12.2	Distribution of the initial excess pore pressure, u_i	355
12.3	Terzaghi's theory of consolidation	355
12.4	Average degree of consolidation	359
12.5	Drainage path length	359
12.6	Determination of the coefficient of consolidation, c_v , from the consolidation test	360
12.7	Determination of the permeability coefficient from the consolidation test	362

12.8	Determination of the consolidation coefficient from the triaxial test	362
12.9	The model law of consolidation	365
12.10	Consolidation during construction	366
12.11	Consolidation by drainage in two and three dimensions	369
12.12	Numerical determination of consolidation rates	369
12.13	Construction pore pressures in an earth dam	374
12.14	Numerical solutions for two- and three-dimensional consolidation	376
12.15	Sand drains	378
	Exercises	384
13	Stability of Slopes	386
13.1	Planar failures	386
13.2	Rotational failures	390
13.3	Slope stability design charts	408
13.4	Wedge failure	414
13.5	Slope stability analysis to Eurocode 7	416
	Exercises	421
14	Compaction and Soil Mechanics Aspects of Highway Design	432
14.1	Field compaction of soils	432
14.2	Laboratory compaction of soils	434
14.3	Specification of the field compacted density	441
14.4	Field measurement tests	442
14.5	Highway design	446
	Exercises	457
	References	460
	Index	466

About the Author

Ian Smith is Head of the School of Engineering and the Built Environment at Edinburgh Napier University. He has taught Geotechnical Engineering at the university for nearly 20 years, having spent some years beforehand working in the site investigation industry. He is an authority on the use of Eurocode 7 in geotechnical design and has instructed designers and academics in the use of the code throughout the UK, Europe and in China.

Preface

When I wrote the 8th Edition of this book in 2005, only Part 1 of Eurocode 7 had been published. In that Edition, I illustrated how geotechnical design to the new Eurocode was to be carried out and the feedback that I received indicated that readers found my approaches easy to follow. Between 2007 and 2010, Part 2 of the code and both UK National Annexes to the code were published and much of the new material in this 9th Edition has been developed around the now complete set of documents.

To help the reader fully understand the stages of a Eurocode 7 design, I have rearranged the sequence of chapters in the book and written two new chapters around the complete design process: Chapter 5 describes the design methods (aligning to Eurocode 7 Part 1) and Chapter 6 describes the ground investigation aspects (aligning to Part 2). The specific design methods to be used for various geotechnical structures are described in the later chapters, which cover retaining walls, shallow and deep foundations and slopes. The early chapters of the book cover the fundamentals of the behaviour of soils.

I have provided many worked examples throughout the book that illustrate the principles of soil mechanics and the geotechnical design processes. To help the reader further, I have produced a suite of spreadsheets and documents to accompany the book that match up against many of the worked examples. These can be used to better understand the analysis being adopted in the examples, which are particularly beneficial to understanding the Eurocode 7 design examples. In addition, I have produced the solutions to the exercises at the end of the chapters as a series of portable document format (pdf) files. All of these files can be freely downloaded from www.wiley.com/go/smith/soil

Whilst the full content of both parts of Eurocode 7 has driven the bulk of the new material in this edition, I have also updated other aspects of the text throughout. This was done in recognition that some aspects of the book had become dated as a result of the introduction of new methods and standards. Furthermore, the format of the book has been improved to aid readability and thus help the reader in understanding the material. All in all, I believe that I have produced a valuable and very up-to-date textbook on soil mechanics from which the learning of the subject should be made easier.

I must thank my colleagues Dr Daniel Barreto and Dr John McDougall for their advice on the revisions I have made to the sections on shear strength and unsaturated soils.

Notation Index

The following is a list of the more important symbols used in the text.

A	Area, pore pressure coefficient
A'	Effective foundation area
A _b	Area of base of pile
A _s	Area of surface of embedded length of pile shaft
B	Width, diameter, pore pressure coefficient, foundation width
B'	Effective foundation width
C	Cohesive force, constant
C _a	Area ratio
C _C	Compression index, soil compressibility
C _N	SPT Correction factor
C _r	Static cone resistance
C _s	Constant of compressibility
C _u	Uniformity coefficient
C _v	Void fluid compressibility
D	Diameter, depth factor, foundation depth, embedded length of pile
D _W	Depth of groundwater table
D _r	Relative density
D ₁ , D ₂	Cutting shoe diameters
D ₁₀	Effective particle size
E	Modulus of elasticity, efficiency of pile group
E _d	Eurocode 7 design value of effect of actions
E _{dst;d}	Eurocode 7 design value of effect of destabilising actions
E _{stb;d}	Eurocode 7 design value of effect of stabilising actions
E _M	Pressuremeter modulus
E _r	SPT Energy ratio
F	Factor of safety
F _b	Factor of safety on pile base resistance
F _{c;d}	Eurocode 7 design axial compression load on a pile
F _d	Eurocode 7 design value of an action
F _{rep}	Eurocode 7 representative value of an action
F _s	Factor of safety on pile shaft resistance
G _{dst;d}	Eurocode 7 design value of destabilising permanent vertical action (uplift)
G _s	Particle specific gravity
G _{stb;d}	Eurocode 7 design value of stabilising permanent vertical action (uplift)
G' _{stb;d}	Eurocode 7 design value of stabilising permanent vertical action (heave)
GWL	Groundwater level
H	Thickness, height, horizontal load
I	Index, moment of inertia
I _D	Density index

xii Notation Index

I_L	Liquidity index
I_p	Plasticity index
I_σ	Vertical stress influence factor
K	Factor, ratio of σ_3/σ_1
K_a	Coefficient of active earth pressure
K_0	Coefficient of earth pressure at rest
K_p	Coefficient of passive earth pressure
K_s	Pile constant
L	Length
L'	Effective foundation length
M	Moment, slope projection of critical state line, mass, mobilisation factor
M_s	Mass of solids
M_w	Mass of water
MCV	Moisture condition value
N	Number, stability number, specific volume for $\ln p' = 0$ (one-dimensional consolidation), uncorrected blow count in SPT
N_{60}	Number of blows from the SPT corrected to energy losses
$(N_1)_{60}$	Number of blows from the SPT corrected to energy losses and normalised for effective vertical overburden stress
N_{cr}, N_{qr}, N_γ	Bearing capacity coefficients
P	Force
P_a	Thrust due to active earth pressure
P_p	Thrust due to passive earth pressure
P_w	Thrust due to water or seepage forces
Q	Total quantity of flow in time t
Q_b	Ultimate soil strength at pile base
Q_s	Ultimate soil strength around pile shaft
Q_u	Ultimate load carrying capacity of pile
R	Radius, reaction
$R_{b,cal}$	Eurocode 7 calculated value of pile base resistance
$R_{b,k}$	Eurocode 7 characteristic value of pile base resistance
R_c	Eurocode 7 compressive resistance of ground against a pile at ultimate limit state
$R_{c,cal}$	Eurocode 7 calculated value of R_c
$R_{c,d}$	Eurocode 7 design value of R_c
$R_{c,k}$	Eurocode 7 characteristic value of R_c
$R_{c,m}$	Eurocode 7 measured value of R_c
R_d	Eurocode 7 design resisting force
R_o	Overconsolidation ratio (one-dimensional)
R_p	Overconsolidation ratio (isotropic)
$R_{s,cal}$	Eurocode 7 calculated value of pile shaft resistance
$R_{s,k}$	Eurocode 7 characteristic value of pile shaft resistance
S	Vane shear strength
$S_{dst;d}$	Eurocode 7 design value of destabilising seepage force
S_r	Degree of saturation
S_t	Sensitivity
T	Time factor, tangential force, surface tension, torque
T_d	Eurocode 7 design value of total shearing resistance around structure
U	Average degree of consolidation
U_z	Degree of consolidation at a point at depth z
V	Volume, vertical load
V_a	Volume of air
$V_{dst;d}$	Eurocode 7 design value of destabilising vertical action on a structure

V_s	Volume of solids
V_v	Volume of voids
V_w	Volume of water
W	Weight
W_s	Weight of solids
W_w	Weight of water
X_d	Eurocode 7 design value of a material property
X_k	Eurocode 7 representative value of a material property
Z	Section modulus
a	Area, intercept of MCV calibration line with w axis
b	Width, slope of MCV calibration line
c	Unit cohesion
c'	Unit cohesion with respect to effective stresses
c_b	Undisturbed soil shear strength at pile base
c'_d	Eurocode 7 design value of effective cohesion
c_r	Residual value of cohesion
c_u	Undrained unit cohesion
c_u	Average undrained shear strength of soil
$c_{u,d}$	Eurocode 7 design value of undrained shear strength
c_v	Coefficient of consolidation
c_w	Unit cohesion between wall and soil
d	Pile penetration, pile diameter
$d_{cr}, d_{qr}, d_{\gamma}$	Depth factors
e	Void ratio, eccentricity
f_s	Ultimate skin friction for piles
g	Gravitational acceleration
h	Hydrostatic head, height
h_c	Capillary rise, tension crack depth
h_e	Equivalent height of soil
h_w	Excess head
i	Hydraulic gradient
i_c	Critical hydraulic gradient
$i_{cr}, i_{qr}, i_{\gamma}$	Inclination factors
k	Coefficient of permeability
l	Length
m	Stability coefficient
m_B, m_L	Eurocode 7 load inclination factor parameters
m_v	Coefficient of volume compressibility
n	Porosity, stability coefficient
p	Pressure, mean pressure
p_a	Active earth pressure
p_c	Preconsolidation pressure (one-dimensional)
p'_e	Equivalent consolidation pressure (isotropic)
p_{LM}	Pressuremeter limit pressure
p_0	Earth pressure at rest
p'_m	Preconsolidation pressure (isotropic)
p'_o	Effective overburden pressure
p_p	Passive earth pressure
q	Unit quantity of flow, deviator stress, uniform surcharge, bearing pressure
q_a	Allowable bearing pressure
q_u	Ultimate bearing capacity


$q_{u \text{ net}}$	Net ultimate bearing capacity
r	Radius, radial distance, finite difference constant
r_u	Pore pressure ratio
s	Suction value of soil, stress parameter
s_{cr} s_{qr} s_γ	Shape factors
s_w	Corrected drawdown in pumping well
t	Time, stress parameter
u, u_w	Pore water pressure
u_a	Pore air pressure, pore pressure due to σ_3 in a saturated soil
u_d	Pore pressure due to $(\sigma_1 - \sigma_3)$ in a saturated soil
$u_{dst;d}$	Eurocode 7 design value of destabilising total pore water pressure
u_i	Initial pore water pressure
v	Velocity, specific volume
w	Water, or moisture, content
w_L	Liquid limit
w_P	Plastic limit
w_s	Shrinkage limit
x	Horizontal distance
y	Vertical, or horizontal, distance
z	Vertical distance, depth
z_a	Depth of investigation points
z_o	Depth of tension crack
z_w	Depth below water table
α	Angle, pile adhesion factor
β	Slope angle
Γ	Eurocode 7 over-design factor, specific volume at $\ln P' = 0$
γ	Unit weight (weight density)
γ'	Submerged, buoyant or effective unit weight (effective weight density)
γ_A	Eurocode 7 partial factor: accidental action – unfavourable
γ_b	Bulk unit weight (bulk weight density), Eurocode 7 partial factor: pile base resistance
γ'_c	Eurocode 7 partial factor: effective cohesion
γ_{cu}	Eurocode 7 partial factor: undrained shear strength
γ_d	Dry unit weight (dry weight density)
γ_F	Eurocode 7 partial factor for an action
$\gamma_{G;dst}$	Eurocode 7 partial factor: EQU permanent action – destabilising
$\gamma_{G;stb}$	Eurocode 7 partial factor: EQU permanent action – stabilising
$\gamma_{G;fav}$	Eurocode 7 partial factor: GEO permanent action – favourable
$\gamma_{G;unfav}$	Eurocode 7 partial factor: GEO permanent action – unfavourable
γ_M	Eurocode 7 partial factor for a soil parameter
γ_Q	Eurocode 7 partial factor: variable action – unfavourable
γ_{qu}	Eurocode 7 partial factor: unconfined compressive strength
γ_R	Eurocode 7 partial factor for a resistance
γ_{Re}	Eurocode 7 partial factor: earth resistance
γ_{Rh}	Eurocode 7 partial factor: sliding resistance
γ_{Rv}	Eurocode 7 partial factor: bearing resistance
γ_s	Eurocode 7 partial factor: pile shaft resistance
γ_{sat}	Saturated unit weight (saturated weight density)
γ_t	Eurocode 7 partial factor: pile total resistance
γ_w	Unit weight of water (weight density of water)
γ_γ	Eurocode 7 partial factor: weight density
γ_ϕ	Eurocode 7 partial factor: angle of shearing resistance

δ	Ground–structure interface friction angle
ε	Strain
θ	Angle subtended at centre of slip circle
κ	Slope of swelling line
λ	Slope of normal consolidation line
μ	Settlement coefficient, one micron
ν	Poisson's ratio
ξ_1, ξ_2	Eurocode 7 correlation factors to evaluate results of static pile load tests
ξ_3, ξ_4	Eurocode 7 correlation factors to derive pile resistance from ground investigation results
ρ	Density, settlement
ρ'	Submerged, buoyant or effective density
ρ_b	Bulk density
ρ_c	Consolidation settlement
ρ_d	Dry density
ρ_i	Immediate settlement
ρ_{sat}	Saturated density
ρ_w	Density of water
σ	Total normal stress
σ'	Effective normal stress
$\sigma_{a,} \sigma'_a$	Total, effective axial stress
σ'_e	Equivalent consolidation pressure (one-dimensional)
$\sigma_{r,} \sigma'_r$	Total, effective radial stress
$\sigma_{stb;d}$	Eurocode 7 design value of stabilising total vertical stress
$\frac{\sigma'_v}{\sigma_v}$	Effective overburden pressure
σ_v	Average effective overburden pressure
$\sigma_1, \sigma_2, \sigma_3$	Total major, intermediate and minor stress
$\sigma'_1, \sigma'_2, \sigma'_3$	Effective major, intermediate and minor stress
τ	Shear stress
ϕ_u	Angle of shearing resistance with respect to total stresses (=0)
ϕ'	Angle of shearing resistance with respect to effective stresses
ϕ_{cv}	Critical state, or constant volume, angle of shearing resistance
$\phi_{cv;d}$	Design value of critical state angle of shearing resistance
ϕ'_d	Design value of ϕ'
ψ	Angle of back of wall to horizontal

About the Companion Website

The book's companion website www.wiley.com/go/smith/soil provides you with resources and downloads to further your understanding of the fundamentals of soil mechanics and the use of Eurocode 7:

- A suite of editable spreadsheets which map onto the worked examples in the book, showing how they are solved.
- Solutions to the end-of-chapter exercises, including the full workings.
- Convenient tables with useful data and formulae.



Chapter 1

Classification and Physical Properties of Soils

In the field of civil engineering, nearly all projects are built on to, or into, the ground. Whether the project is a structure, a roadway, a tunnel, or a bridge, the nature of the soil at that location is of great importance to the civil engineer. *Geotechnical engineering* is the term given to the branch of engineering that is concerned with aspects pertaining to the ground. Soil mechanics is the subject within this branch that looks at the behaviour of soils in civil engineering.

Geotechnical engineers are not the only professionals interested in the ground; soil physicists, agricultural engineers, farmers and gardeners all take an interest in the types of soil with which they are working. These workers, however, concern themselves mostly with the organic topsoils found at the soil surface. In contrast, geotechnical engineers are mainly interested in the engineering soils found beneath the topsoil. It is the engineering properties and behaviour of these soils which are their concern.

1.1 Agricultural and engineering soil

If an excavation is made through previously undisturbed ground the following materials are usually encountered (Fig. 1.1).

Topsoil

A layer of organic soil, usually not more than 500 mm thick, in which humus (highly organic partly decomposed vegetable matter) is often found.

Subsoil

The portion of the Earth's crust affected by current weathering, and lying between the topsoil and the unweathered soil below.

Hardpan

In humid climates humic acid can be formed by rainwater causing decomposition of humus. This acid leaches out iron and alumina oxides down into the lower layers where they act as cementation agents to form a hard, rock-like material. Hardpan is difficult to excavate and, as it does not soften when wet, has a high resistance to normal soil drilling methods. A hardpan layer is sometimes found at the junction of the topsoil and the subsoil.

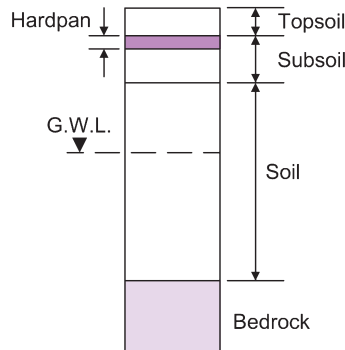


Fig. 1.1 Materials encountered during excavation.

Soil

The soft geological deposits extending from the subsoil to bedrock. In some soils there is a certain amount of cementation between the grains which affects the physical properties of the soil. If this cementation is such that a rock-hard material has been produced, then the material must be described as rock. A rough rule is that if the material can be excavated by hand or hand tools, then it is a soil.

Groundwater

A reservoir of underground water. The upper surface of this water may occur at any depth and is known as the water table or groundwater level (GWL).

1.2 Engineering definitions

Geologists class all items of the Earth's crust as rock, whether hard or soft deposits. Civil engineers consider rock and soil separately.

1.2.1 Rock

Rocks are made from various types of minerals. Minerals are substances of crystalline form made up from a particular chemical combination. The main minerals found in rocks include quartz, feldspar, calcite and mica. Geologists classify all rocks into three basic groups: *igneous*, *sedimentary* and *metamorphic*.

Igneous rocks

These rocks have become solid from a melted liquid state. *Extrusive* igneous rocks are those that arrived on the surface of the Earth as molten lava and cooled. *Intrusive* igneous rocks are formed from magma (molten rock) that forced itself through cracks into the rock beds below the surface and solidified there.

Examples of igneous rocks: *granite*, *basalt*, *gabbro*.

Sedimentary rocks

Weathering reduces the rock mass in to fragmented particles, which can be more easily transported by wind, water and ice. When dropped by the agents of weathering, they are termed sediments. These sedi-

ments are typically deposited in layers or beds called strata and when compacted and cemented together (lithification) they form sedimentary rocks.

Examples of sedimentary rocks: *shale, sandstone, chalk*.

Metamorphic rocks

Metamorphism through high temperatures and pressures acting on sedimentary or igneous rocks produces metamorphic rocks. The original rock undergoes both chemical and physical alterations.

Examples of metamorphic rocks: *slate, quartzite, marble*.

1.2.2 Soil

The actions of frost, temperature, gravity, wind, rain and chemical weathering are continually forming rock particles that eventually become soils. There are three types of soil when considering modes of formation.

Transported soil (gravels, sands, silts and clays)

Most soils have been transported by water. As a stream or river loses its velocity it tends to deposit some of the particles that it is carrying, dropping the larger, heavier particles first. Hence, on the higher reaches of a river, gravel and sand are found whilst on the lower or older parts, silts and clays predominate, especially where the river enters the sea or a lake and loses its velocity. Ice has been another important transportation agent, and large deposits of boulder clay and moraine are often encountered.

In arid parts of the world, wind is continually forming sand deposits in the form of ridges. The sand particles in these ridges have been more or less rolled along and are invariably rounded and fairly uniform in size. Light brown, wind-blown deposits of silt-size particles, known as loess, are often encountered in thin layers, the particles having sometimes travelled considerable distances.

Residual soil (topsoil, laterites)

These soils are formed *in situ* by chemical weathering and may be found on level rock surfaces where the action of the elements has produced a soil with little tendency to move. Residual soils can also occur whenever the rate of break up of the rock exceeds the rate of removal. If the parent rock is igneous or metamorphic the resulting soil sizes range from silt to gravel.

Laterites are formed by chemical weathering under warm, humid tropical conditions when the rainwater leaches out of the soluble rock material leaving behind the insoluble hydroxides of iron and aluminium, giving them their characteristic red-brown colour.

Organic soil

These soils contain large amounts of decomposed animal and vegetable matter. They are usually dark in colour and give off a distinctive odour. Deposits of organic silts and clays have usually been created from river or lake sediments. Peat is a special form of organic soil and is a dark brown spongy material which almost entirely consists of lightly to fully decomposed vegetable matter. It exists in one of three forms:

- *Fibrous*: Non-plastic with a firm structure only slightly altered by decay.
- *Pseudo-fibrous*: Peat in this form still has a fibrous appearance but is much softer and more plastic than fibrous peat. The change is due more to prolonged submergence in airless water than to decomposition.
- *Amorphous*: With this type of peat, decomposition has destroyed the original fibrous vegetable structure so that it has virtually become an organic clay.

Peat deposits occur extensively throughout the world and can be extremely troublesome when encountered in civil engineering work.

1.2.3 Granular and cohesive soils

Geotechnical engineers classify soils as either *granular* or *cohesive*. Granular soils (sometimes referred to as *cohesionless* soils) are formed from loose particles without strong inter-particle forces, e.g. sands and gravels. Cohesive soils (e.g. clays, clayey silts) are made from particles bound together with clay minerals. The particles are flaky and sheet-like and retain a significant amount of adsorbed water on their surfaces. The ability of the sheet-like particles to slide relative to one another, gives a cohesive soil the property known as *plasticity*.

1.3 Clay soils

It is generally believed that rock fragments can be reduced by mechanical means to a limiting size of about 0.002mm, so that a soil containing particles above this size has a mineral content similar to the parent rock from which it was created.

For the production of particles smaller than 0.002mm some form of chemical action is generally necessary before breakdown can be achieved. Such particles, although having a chemical content similar to the parent rock, have a different crystalline structure and are known as clay particles. An exception is rock flour, rock grains smaller than 0.002mm, produced by the glacial action of rocks grinding against each other.

1.3.1 Classes of clay minerals

The minerals constituting a clay are invariably the result of the chemical weathering of rock particles and are hydrates of aluminium, iron or magnesium silicate generally combined in such a manner, as to create sheet-like structures only a few molecules thick. These sheets are built from two basic units, the tetrahedral unit of silica and the octahedral unit of the hydroxide of aluminium, iron or magnesium. The main dimension of a clay particle is usually less than 0.002mm and the different types of minerals have been created from the manner in which these structures were stacked together.

The three main groups of clay minerals are as follows.

Kaolinite group

This mineral is the most dominant part of residual clay deposits and is made up from large stacks of alternating single tetrahedral sheets of silicate and octahedral sheets of aluminium. Kaolinites are very stable with a strong structure and absorb little water. They have low swelling and shrinkage responses to water content variation.

Illite group

Consists of a series of single octahedral sheets of aluminium sandwiched between two tetrahedral sheets of silicon. In the octahedral sheets some of the aluminium is replaced by iron and magnesium and in the tetrahedral sheets there is a partial replacement of silicon by aluminium. Illites tend to absorb more water than kaolinites and have higher swelling and shrinkage characteristics.

Montmorillonite group

This mineral has a similar structure to the illite group but, in the tetrahedral sheets, some of the silicon is replaced by iron, magnesium and aluminium. Montmorillonites exhibit extremely high water absorption,

swelling and shrinkage characteristics. Bentonite is a member of this mineral group and is usually formed from weathered volcanic ash. Because of its large expansive properties when it is mixed with water it is much in demand as a general grout in the plugging of leaks in reservoirs and tunnels. It is also used as a drilling mud for soil borings.

Readers interested in this subject of clay mineralogy are referred to the publication by Murray (2006).

1.3.2 Structure of a clay deposit

Macrostructure

The visible features of a clay deposit collectively form its macrostructure and include such features as fissures, root holes, bedding patterns, silt and sand seams or lenses and other discontinuities.

A study of the macrostructure is important as it usually has an effect on the behaviour of the soil mass. For example the strength of an unfissured clay mass is much stronger than along a crack.

Microstructure

The structural arrangement of microscopic sized clay particles, or groups of particles, defines the microstructure of a clay deposit. Clay deposits have been laid down under water and were created by the settlement and deposition of clay particles out of suspension. Often during their deposition, the action of Van der Waals forces attracted clay particles together and created flocculant, or honeycombed, structures which, although still microscopic, are of considerably greater volume than single clay particles. Such groups of clay particles are referred to as clay flocs.

1.4 Field identification of soils

Gravels, sands and peats are easily recognisable, but difficulty arises in deciding when a soil is a fine sand or a coarse silt or when it is a fine silt or a clay. The following rules may, however, help:

Fine sand	Silt	Clay
Individual particles visible	Some particles visible	No particles visible
Exhibits dilatancy	Exhibits dilatancy	No dilatancy
Easy to crumble and falls off hands when dry	Easy to crumble and can be dusted off hands when dry	Hard to crumble and sticks to hands when dry
Feels gritty	Feels rough	Feels smooth
No plasticity	Some plasticity	Plasticity

The dilatancy test involves moulding a small amount of soil in the palm of the hand; if water is seen to recede when the soil is pressed, then it is either a sand or a silt.

Organic silts and clays are invariably dark grey to blue-black in colour and give off a characteristic odour, particularly with fresh samples.

The condition of a clay very much depends upon its degree of *consolidation*. At one extreme, a soft normally consolidated clay can be moulded by the fingers whereas, at the other extreme, a hard over consolidated clay cannot. Consolidation is described in Chapter 11.

Common types of soil

In the field, soils are usually found in the form of a mixture of components, e.g. silty clay, sandy silt, etc. Local names are sometimes used for soil types that occur within a particular region. e.g. London clay.

6 Smith's Elements of Soil Mechanics

Boulder clay, also referred to as glacial till, is an unstratified and irregular mixture of boulders, cobbles, gravel, sand, silt and clay of glacial origin. In spite of its name boulder clay is not a pure clay and contains more granular material than clay particles. Moraines are gravel and sand deposits of glacial origin. Loam is a soft deposit consisting of a mixture of sand, silt and clay in approximately equal quantities. Fill is soil excavated from a 'borrow' area which is used for filling hollows or for the construction of earthfill structures, such as dams or embankments. Fill will sometimes contain man-made material such as crushed concrete or bricks from demolished buildings.

1.5 Laboratory classification of soils

Soil classification enables the engineer to assign a soil to one of a limited number of groups, based on the material properties and characteristics of the soil. The classification groups are then used as a system of reference for soils. Soils can be classified in the field or in the laboratory. Field techniques are usually based upon visual recognition as described above. Laboratory techniques involve several specialised tests.

1.5.1 Drying soils

Soils can be either oven or air dried. It has become standard practice to oven dry soils at a temperature of 105°C but it should be remembered that some soils can be damaged by such a temperature. Oven drying is necessary for water content and particle specific gravity (see Section 1.8.3) tests but air drying should be used whenever possible for other soil tests that also require the test sample to be dry.

1.5.2 Determination of water content, w

The most common way of expressing the amount of water present in a soil is the water content. The water content, also called the moisture content, is given the symbol w and is the ratio of the amount of water to the amount of dry soil.

$$w = \frac{\text{Weight of water}}{\text{Weight of solids}} = \frac{W_w}{W_s} \quad \text{or} \quad w = \frac{\text{Mass of water}}{\text{Mass of solids}} = \frac{M_w}{M_s}$$

w is usually expressed as a percentage and should be quoted to two significant figures.

Example 1.1: Water content determination

A sample of soil was placed in a water content tin of mass 19.52 g. The combined mass of the soil and the tin was 48.27 g. After oven drying the soil and the tin had a mass of 42.31 g.

Determine the water content of the soil.

Solution:

$$w = \frac{M_w}{M_s} = \frac{48.27 - 42.31}{42.31 - 19.52} = \frac{5.96}{22.79} = 0.262 = 26\%$$

1.5.3 Granular soils – particle size distribution

A standardised system helps to eliminate human error in the classification of soils. The usual method is based on the determination of the particle size distribution by shaking an oven dried sample of the soil (usually after washing the sample over a 63 μ m sieve) through a set of sieves and recording the mass retained on each sieve. The classification system adopted by the British Standards Institution is the Massachusetts Institute of Technology (MIT) system. The boundaries defined by this system can be seen on the particle size distribution sheet in Fig. 1.2. The results of the sieve analysis are plotted with the particle sizes horizontal and the summation percentages vertical. As soil particles vary in size from molecular to boulder it is necessary to use a log scale for the horizontal plot so that the full range can be shown on the one sheet.

The smallest aperture generally used in soils work is that of the 0.063 mm size sieve. Below this size (i.e. silt sizes) the distribution curve must be obtained by sedimentation (pipette or hydrometer). Unless a centrifuge is used, it is not possible to determine the range of clay sizes in a soil, and all that can be done is to obtain the total percentage of clay sizes present. A full description of these tests is given in BS 1377: Part 2.(BSI, 1990).

Examples of particle size distribution (or grading) curves for different soil types are shown in Fig. 1.9. From these grading curves it is possible to determine for each soil the total percentage of a particular size and the percentage of particle sizes larger or smaller than any particular particle size.

The effective size of a distribution, D_{10}

An important particle size within a soil distribution is the effective size which is the largest size of the smallest 10%. It is given the symbol D_{10} . Other particle sizes, such as D_{60} and D_{85} , are defined in the same manner.

Grading of a distribution

For a granular soil the shape of its grading curve indicates the distribution of the soil particles within it.

If the shape of the curve is not too steep and is more or less constant over the full range of the soil's particle sizes then the particle size distribution extends evenly over the range of the particle sizes within the soil and there is no deficiency or excess of any particular particle size. Such a soil is said to be *well graded*.

If the soil has any other form of distribution curve then it is said to be *poorly graded*. According to their distribution curves there are two types of poorly graded soil:

- if the major part of the curve is steep then the soil has a particle size distribution extending over a limited range with most particles tending to be about the same size. The soil is said to be *closely graded* or, more commonly, *uniformly graded*;
- if a soil has large percentages of its bigger and smaller particles and only a small percentage of the intermediate sizes then its grading curve will exhibit a significantly flat section or plateau. Such a soil is said to be *gap graded*.

The uniformity coefficient C_u

The grading of a soil is best determined by direct observation of its particle size distribution curve. This can be difficult for those studying the subject for the first time but some guidance can be obtained by the use of a grading parameter, known as the uniformity coefficient.

$$C_u = \frac{D_{60}}{D_{10}}$$

If $C_u < 4.0$ then the soil is uniformly graded.

If $C_u > 4.0$ then the soil is either well graded or gap and a glance at the grading curve should be sufficient for the reader to decide which is the correct description.

Example 1.2: Particle size distribution

The results of a sieve analysis on a soil sample were:

Sieve size (mm)	Mass retained (g)
10	0.0
6.3	5.5
2	25.7
1	23.1
0.6	22.0
0.3	17.3
0.15	12.7
0.063	6.9

2.3g passed through the 63µm sieve.

Plot the particle size distribution curve and determine the uniformity coefficient of the soil.

Solution:

The aim is to determine the percentage of soil (by mass) passing through each sieve. To do this the percentage retained on each sieve is determined and subtracted from the percentage passing through the previous sieve. This gives the percentage passing through the current sieve.

Calculations may be set out as follows:

Sieve size (mm)	Mass retained (g)	Percentage retained (%)	Percentage passing (%)
10	0.0	0	100
6.3	5.5	5	95
2	25.7	22	73
1	23.1	20	53
0.6	22.0	19	34
0.3	17.3	15	19
0.15	12.7	11	8
0.063	6.9	6	2
Pass 0.063	2.3	2	
Total mass	115.5		

e.g. sieve size 2 mm:

$$\text{Percentage retained} = \frac{25.7}{115.5} \times 100 = 22\%$$

$$\text{Percentage passing} = 95 - 22 = 73\%$$

The particle size distribution curve is shown in Fig. 1.2. The soil has approximate proportions of 30% gravel and 70% sand.

$$D_{10} = 0.17 \text{ mm}; \quad D_{60} = 1.5 \text{ mm}; \quad C_u = \frac{D_{60}}{D_{10}} = \frac{1.5}{0.17} = 8.8$$

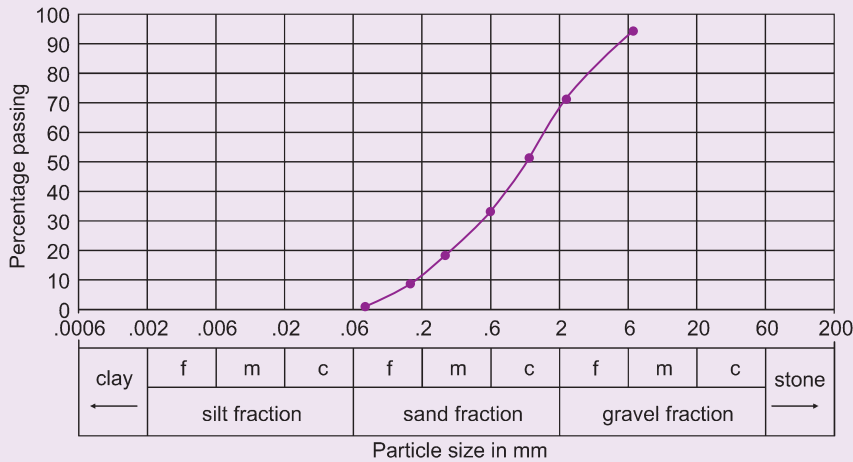


Fig. 1.2 Example 1.2.

1.5.4 Cohesive soils – consistency limit (or index) tests

The results of the grading tests described above can only classify a soil with regard to its particle size distribution. They do not indicate whether the fine grained particles will exhibit the plasticity generally associated with fine grained soils. Hence, although a particle size analysis will completely define a gravel and a sand it is necessary to carry out plasticity tests in order to fully classify a clay or a fine silt.

These tests were evolved by Atterberg (1911) and determine the various values of water content at which changes in a soil's strength characteristics occur. As an introduction to these tests let us consider the effect on the strength and compressibility of a soil as the amount of water within it is varied. With a cohesionless soil, i.e. a gravel or a sand, both parameters are only slightly affected by a change in water content whereas a cohesive soil, i.e. a silt or a clay, tends to become considerably stronger and less compressible, i.e. less easy to mould, as it dries out.

Let us consider a cohesive soil with an extremely high water content, i.e. a suspension of soil particles in water. The soil behaves as a liquid and if an attempt is made to apply a shear stress there will be continual deformation with no sign of a failure stress value. If the soil is allowed to slowly dry out a point will be reached where the soil just begins to exhibit a small shear resistance. If the shear stress were removed it will be found that the soil has experienced a permanent deformation; it is now acting as a plastic solid and not as a liquid.

Liquid limit (w_L) and plastic limit (w_P)

The water content at which the soil stops acting as a liquid and starts acting as a plastic solid is known as the *liquid limit* (w_L or LL); see Fig. 1.3c.

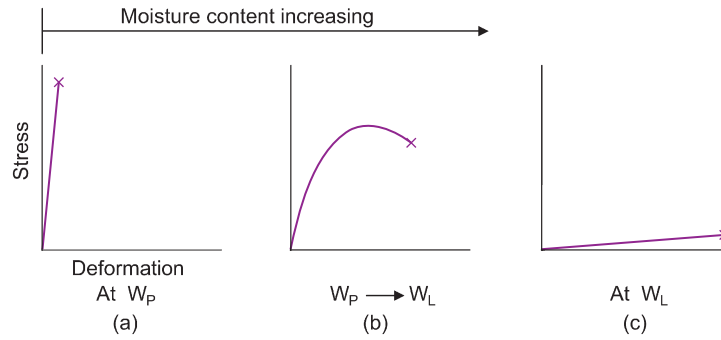


Fig. 1.3 Shear stress/deformation relationships at different water contents.

As further moisture is driven from the soil it becomes possible for the soil to resist large shearing stresses. Eventually the soil exhibits no permanent deformation and simply fractures with no plastic deformation, i.e. it acts as a brittle solid. The limit at which plastic failure changes to brittle failure is known as the *plastic limit* (w_p or PL); see Fig. 1.3a.

Plasticity index (I_p)

The *plasticity index* is the range of water content within which a soil is plastic; the finer the soil the greater its plasticity index.

Plasticity index = Liquid limit – Plastic limit

$$I_p = w_L - w_p$$

or

$$PI = LL - PL$$

The shearing strength to deformation relationship within the plasticity range is illustrated in Fig. 1.3b.

Note: The use of the symbols w_L , w_p and I_p follows the recommendations by the ISSMFE Lexicon (1985). However, the symbols LL, PL and PI are still used in many publications.

Liquidity index

The *liquidity index* enables one to compare a soil's plasticity with its natural water content (w).

$$I_L = \frac{w - w_p}{I_p}$$

If $I_L = 1.0$ the soil is at its liquid limit; if $I_L = 0$ the soil is at its plastic limit.

Shrinkage limit

If the drying process is prolonged after the plastic limit has been reached the soil will continue to decrease in volume until a certain value of water content is reached. This value is known as the shrinkage limit and

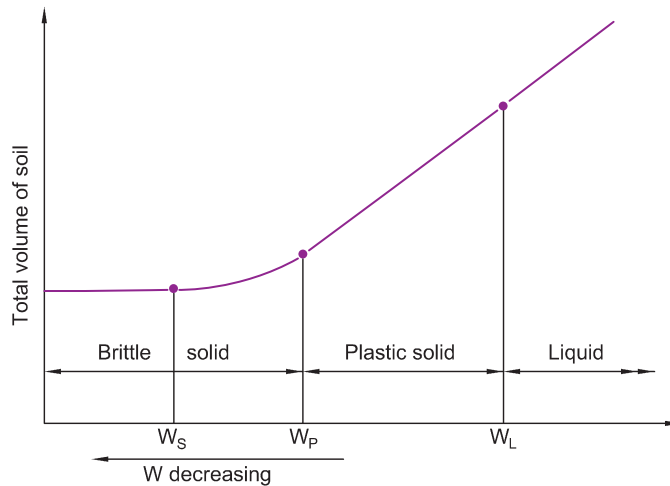


Fig. 1.4 Changes in total volume against water content.

at values of water content below this level the soil is partially saturated. In other words, below the shrinkage limit the volume of the soil remains constant with further drying, but the weight of the soil decreases until the soil is fully dried.

In Fig. 1.4 the variation of the total volume of a soil with its water content is plotted, showing the positions of the liquid, plastic and shrinkage limits.

Determination of liquid and plastic limits

Liquid limit test

BS 1377: Part 2 specifies the following three methods for determining the liquid limit of soil.

(1) Cone penetrometer method (definitive method)

Details of the apparatus are shown in Fig. 1.5. The soil to be tested is air dried and thoroughly mixed. At least 200 g of the soil is sieved through a $425\mu\text{m}$ sieve and placed on a glass plate. The soil is then mixed with distilled water into a paste.

A metal cup, approximately 55 mm in diameter and 40 mm deep, is filled with the paste and the surface struck off level. The cone, of mass 80 g, is next placed at the centre of the smoothed soil surface and level with it. The cone is released so that it penetrates into the soil and the amount of penetration, over a time period of 5 seconds, is measured.

The test is now repeated by lifting the cone clear, cleaning it and filling up the depression in the surface of the soil by adding a little more of the wet soil.

If the difference between the two measured penetrations is less than 0.5 mm then the tests are considered valid. The average penetration is noted and a water content determination is carried out on the soil tested.

The procedure is repeated at least four times with increasing water contents. The amount of water used throughout should be such that the penetrations obtained lie within a range of 15 to 25 mm.

To obtain the liquid limit the variation of cone penetration is plotted against water content and the best straight line is drawn through the experimental points. The liquid limit is taken to be the water content corresponding to a cone penetration of 20 mm (expressed as a whole number).

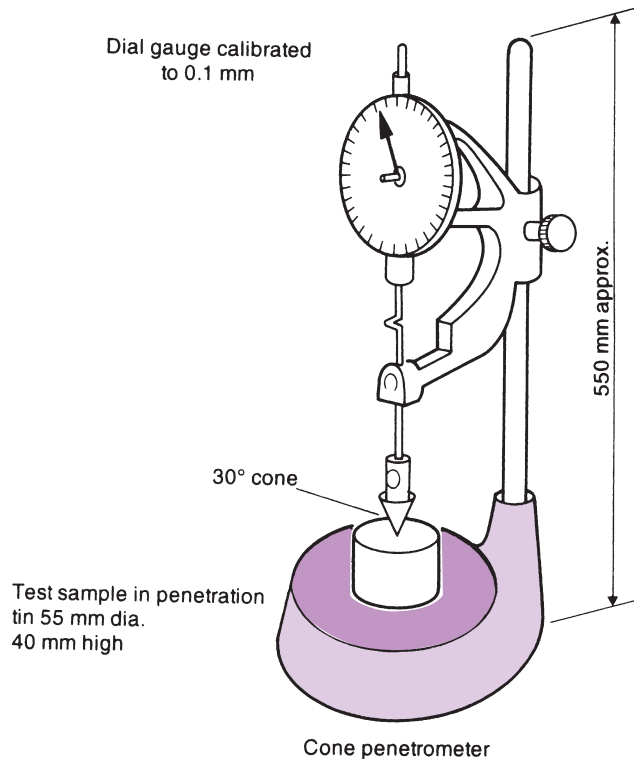


Fig. 1.5 Liquid limit apparatus.

(2) *One-point cone penetrometer method*

In this test the procedure is similar to that described above, with the exception that only one point is required. The test is thus fairly rapid. Once the average penetration for the point is established, the water content of the soil is determined. The water content is then multiplied by a factor to give the liquid limit. The value of the factor is dependent on both the cone penetration and the range of water content within which the measured water content falls. The factors were determined through experimental work performed by Clayton and Jukes (1978).

(3) *Method using the Casagrande apparatus*

Until 1975 this was the only method for determining liquid that was recognised by the British Standards Institution. Although still used worldwide the test is now largely superseded by cone penetration techniques.

Plastic limit test

About 20g of soil prepared as in the liquid limit test is used. The soil is mixed on the glass plate with just enough water to make it sufficiently plastic for rolling into a ball, which is then rolled out between the hand and the glass to form a thread. The soil is said to be at its plastic limit when it just begins to crumble at a thread diameter of 3mm. At this stage a section of the thread is removed for water content determination. The test should be repeated at least once more.

It is interesting to note that in some countries, the cone penetrometer is used to determine both w_L and w_P . The apparatus used consists of a 30° included angle cone with a total mass of 76g. The test is the same as the liquid limit test in Britain, a penetration of 17 mm giving w_L and a penetration of 2mm giving w_P .

Example 1.3: Consistency limits tests

A BS cone penetrometer test was carried out on a sample of clay with the following results:

Cone penetration (mm)	16.1	17.6	19.3	21.3	22.6
Water content (%)	50.0	52.1	54.1	57.0	58.2

The results from the plastic limit test were:

Test no.	Mass of tin (g)	Mass of tin wet soil + tin (g)	Mass of dry soil + tin (g)
1	8.1	20.7	18.7
2	8.4	19.6	17.8

Determine the liquid limit, plastic limit and the plasticity index of the soil.

Solution:

The plot of cone penetration to water content is shown in Fig. 1.6. The liquid limit is the water content corresponding to 20mm penetration, i.e. $w_L = 55\%$.

The plastic limit is determined thus:

$$w_p(1) = \frac{20.7 - 8.7}{18.7 - 8.1} \times 100 = 18.9$$

$$w_p(2) = \frac{19.6 - 17.8}{17.8 - 8.4} \times 100 = 19.1$$

$$\text{Average } w_p = 19\%$$

The plasticity index is the difference between w_L and w_p , i.e.

$$I_p = 55 - 19 = 36\%$$

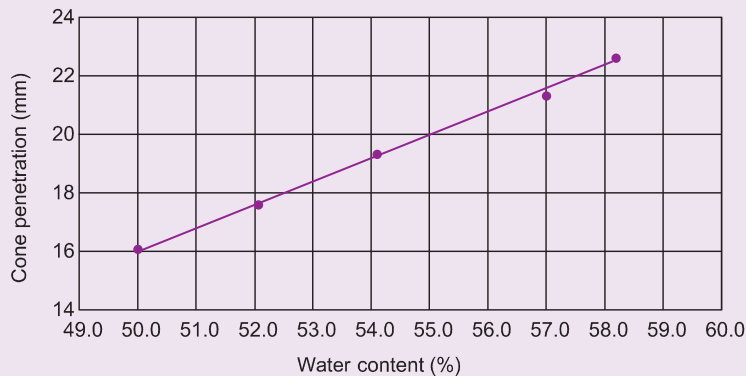


Fig. 1.6 Example 1.3.

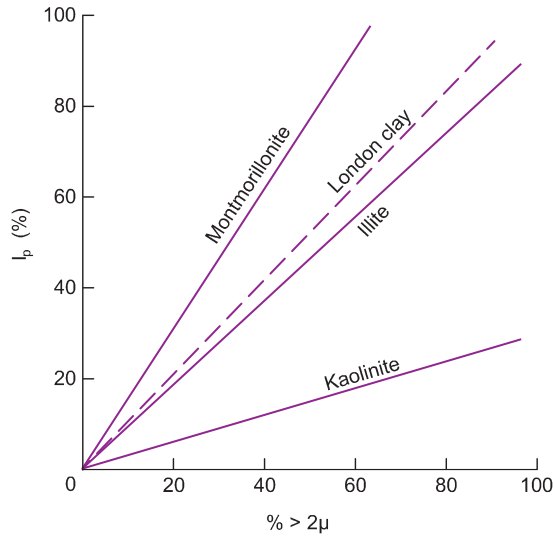


Fig. 1.7 Relationship between I_p and clay percentage (after Skempton, 1953).

1.6 Activity of a clay

In addition to their use in soil classification, the w_L and w_p values of a plastic soil also give an indication of the types and amount of the clay minerals present in the soil.

It has been found that, for a given soil, the plasticity index increases in proportion to the percentage of clay particles in the soil. Indeed, if a group of soils is examined and their I_p values are plotted against their clay percentages, a straight line, passing through the origin, is obtained.

If a soil sample is taken and its clay percentage artificially varied, a relationship between I_p and clay percentage can be obtained. Each soil will have its own straight line because, although in two differing soils the percentages of clay may be the same, they will contain different minerals.

The relationship between montmorillonite, illite, kaolinite and the plasticity index is shown in Fig. 1.7.

The plot of London clay is also shown on the figure and, from its position, it is seen that the mineral content of this soil is predominantly illite. London Clay has a clay fraction of about 46 per cent and consists of illite (70%), kaolinite (20%) and montmorillonite (10%). The remaining fraction of 54 per cent consists of silt (quartz, feldspar and mica: 44%) and sand (quartz and feldspar: 10%).

In Fig. 1.7 the slope of the line is the ratio

$$\frac{I_p}{\% \text{ clay}}$$

Skempton (1953) defined this ratio as the *activity* of the clay. Clays with large activities are called active clays and exhibit plastic properties over a wide range of water content values.

1.7 Soil classification and description

1.7.1 Soil classification systems

Soil classification systems have been in use for a very long time with the first recorded use being in China over 4000 years ago. In 1896 a soil classification system was proposed by the Bureau of Soils, United States Department of Agriculture in which the various soil types were classified purely on particle size and it is interesting to note that the limiting sizes used are more or less the same as those in use today. Further

improved systems allowed for the plasticity characteristics of soil and a modified form of the system proposed by Casagrande in 1947 is the basis of the soil classification system used in the UK.

The British Soil Classification System (BSCS)

The British Standard BS 5930 (1999), *Code of practice for site investigations*, gives a full description of the BSCS and the reader is advised to obtain sight of a copy.

The system divides soil into two main categories. If at least 35% of a soil can pass through a 63µm sieve then it is a *fine soil*. Conversely, if the amount of soil that can pass through the 63µm sieve is less than 35% then it is a *coarse soil*. Each category is divided into groups, depending upon the grading of the soil particles not passing the 63µm sieve and upon the plasticity characteristics of the soil particles passing the 425µm sieve.

A summary of the BSCS is shown in Table 1.1 and its associated plasticity chart in Fig. 1.8.

To use the plasticity chart it is necessary to plot a point whose coordinates are the liquid limit and the plasticity index of the soil to be identified. The soil is classified by observing the position of the point relative to the sloping straight line drawn across the diagram.

This line, known as the A-line, is an empirical boundary between inorganic clays, whose points lie above the line, and organic silts and clays whose points lie below. The A-line goes through the base line at $I_p = 0$, $W_L = 20\%$ so that its equation is:

$$I_p = 0.73(w_L - 20\%)$$

The main soil types are designated by capital letters:

- | | |
|--------------------|----------------|
| G Gravel | M Silt, M-soil |
| S Sand | C Clay |
| F Fine soil, Fines | Pt Peat |

The classification 'F' is intended for use when there is difficulty in determining whether a soil is a silt or a clay.

Originally all soils that plotted below the A-line of the plasticity charts were classified as silts. The term 'M-soil' has been introduced to classify soils that plot below the A-line but have particle size distributions not wholly in the range of silt sizes.

Behind the letter designating the main soil type additional letters are added to further describe the soil and to denote its grading and plasticity. These letters are:

- | | |
|------------------|---|
| W Well graded | L Low plasticity ($w_L < 35\%$) |
| P Poorly graded | I Intermediate ($35 \leq w_L \leq 70$) |
| P_u Uniform | H High plasticity ($50 \leq w_L \leq 70$) |
| P_g Gap graded | V Very high ($70 \leq w_L \leq 90$) |
| O Organic | E Extremely high ($w_L > 90\%$) |

The letter O is applied at the end of the group symbol for a soil, no matter what type, if the soil has a significant amount of organic matter within it.

Examples of the use of the symbols are set out below.

Soil description	Group symbol
Well graded silty SAND	SWM
Organic CLAY of high plasticity	CHO
Sandy CLAY of intermediate plasticity	CIS
Uniform clayey sand	SP_uF

Table 1.1 British Soil Classification System for Engineering Purposes (after BS 5930: 1999).

Soil groups		Subgroups and laboratory identification					Name
Group symbol	Subgroup symbol	Fines (% less than 0.06 mm)	Liquid limit %				
GRAVEL and SAND may be qualified Sandy GRAVEL and Gravelly SAND, etc. where appropriate (See 41.3.2.2)	G	GW	0 to 5			Well graded GRAVEL	
		GP	GPu GPg			Poorly graded/Uniform/Gap graded GRAVEL	
	G-F	G-M	GWM GPM	5 to 15		Well graded/Poorly graded silty GRAVEL	
		G-C	GWC GPC			Well graded/Poorly graded clayey GRAVEL	
GRAVELS – More than 50% of coarse material is of gravel size (coarser than 2 mm)	GF	GM	GML, etc	15 to 35		Very silty GRAVEL; subdivide as for GC	
		GC	GCL			Very clayey GRAVEL (clay of low, intermediate, high, very high, extremely high plasticity)	
			GCI				
			GCH				
			GCV				
SANDS – More than 50% of coarse material is of sand size (finer than 2 mm)	S	SW	SW	0 to 5		Well graded SAND	
		SP	SPu SPg			Poorly graded/Uniform/Gap graded SAND	
	S-F	S-M	SWM SPM	5 to 15		Well graded/Poorly graded silty SAND	
		S-C	SWC SPC			Well graded/Poorly graded clayey SAND	

COARSE SOILS – less than 35% of the material is finer than 0.06 mm

Very silty SAND	SF	SM	SML, etc	15 to 35	Very silty SAND; subdivided as for SC
Very clayey SAND	SC	SC	SCL SCI SCH SCV SCE		Very clayey SAND (clay of low, intermediate, high, very high, extremely high plasticity)
Gravelly SILT	MG	MG	MLG, etc		Gravelly SILT; subdivide as for CG
Gravelly CLAY	CG	CG	CLG CIG CHG CVG CEG	<35 35 to 50 50 to 70 70 to 90 >90	Gravelly CLAY of low plasticity of intermediate plasticity of high plasticity of very high plasticity of extremely high plasticity
Sandy SILT	MS	MS	MLS, etc		Sandy SILT; subdivide as for CG
Sandy CLAY	CS	CS	CLS, etc		Sandy CLAY; subdivide as for CG
SILT (M-SOIL)	M	M	ML, etc		SILT, subdivide as for C
CLAY	C	C	CL CI CH CV CE	<35 35 to 50 50 to 70 70 to 90 >90	CLAY of low plasticity of intermediate plasticity of high plasticity of very high plasticity of extremely high plasticity
ORGANIC SOILS	Descriptive letter 'O' suffixed to organic matter suspected to be a significant constituent. Example MHO: any group or sub-group symbol. Organic SILT of high plasticity.				
PEAT	Pt Peat soils consist predominantly of plant remains which may be fibrous or amorphous.				

FINE SOILS – more than 35% of the material is finer than 0.06 mm

SILT (M-SOIL), M, plots below A-line } M and C may be combined as FINE SOIL, F.
 CLAY, C, plots above A-line

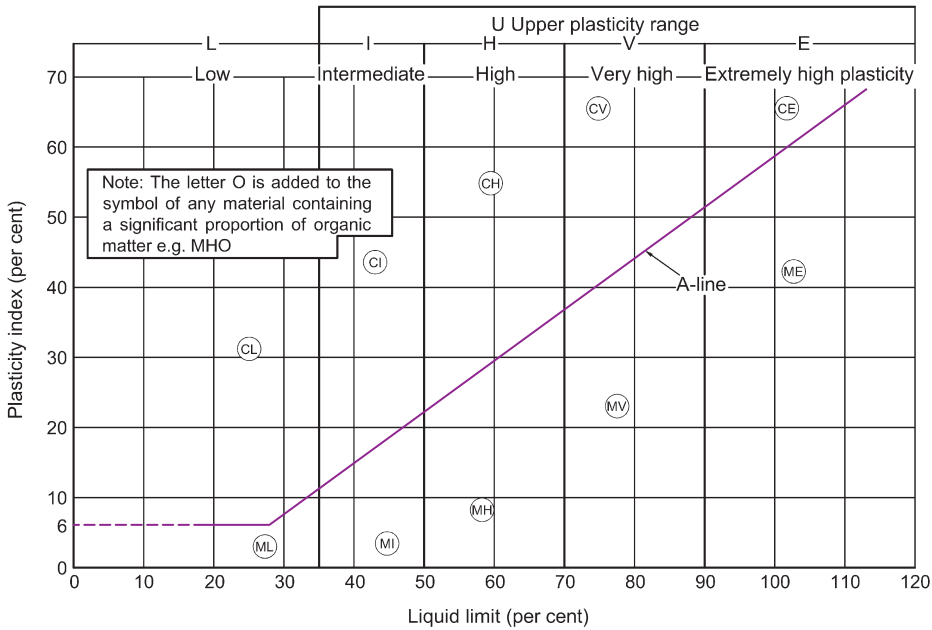


Fig. 1.8 Plasticity chart for the BSCS (after BS 5930: 1999).

When classification tests are carried out on a stony soil sample any particles nominally greater than 60mm are removed by sieving (with a standard 63mm sieve) and their percentage determined. The tests are then carried out on the remaining soil. The material removed is classed as cobbles, 66 to 200mm in size, with symbol Cb, or boulders, greater than 200mm in size, with the symbol B.

Fine and coarse soils that contain cobbles, or cobbles and boulders, are indicated in symbols by the use of the addition sign. For instance, a well graded SAND with gravel and cobbles would have the group symbol SWG + Cb.

Example 1.4: Soil classification (i)

Classify the soil of Example 1.2 whose particle size distribution curve is shown in Fig. 1.2.

Solutions:

The value for C_u already been found to be 8.8. From Fig. 1.2 it is seen that the grading curve has a regular slope and therefore contains roughly equal percentages of particle sizes. The soil is a well graded gravelly SAND with the group symbol SWG.

Note that when classifying the soil it is customary to indicate the main soil type in capital letters, i.e. SAND.

Example 1.5: Soil classification (ii)

A set of particle size distribution analyses on three soils, A, B and C, gave the following results:

Sieve size (mm)	Percentage passing		
	Soil A	Soil B	Soil C
20	90	–	–
10	56	–	–
6.3	47	–	–
2	44	–	–
0.6	40	95	–
0.425	–	80	–
0.300	29	10	–
0.212	–	3	–
0.150	–	–	100
0.063	5	1	91

Soil C: Since more than 10% passed the 63 μ m sieve, a pipette analysis (described in BS 1377: Part 2 and by Head (1992)) was performed. The results were:

Particle sizes (mm)	Percentage passing
	Soil C
0.04	78
0.02	61
0.006	47
0.002	40

Soil C was found to have a liquid limit of 48% and a plastic limit of 21%. Plot the particle size distribution curves and classify each soil.

Solution:

The particle size distribution curves for the three soils are shown in Fig. 1.9. The curves can be used to obtain the following particle sizes for soils A and B.

Soil	D ₁₀ (mm)	D ₃₀ (mm)	D ₆₀ (mm)
A	0.1	0.31	11.0
B	0.3	0.42	0.44

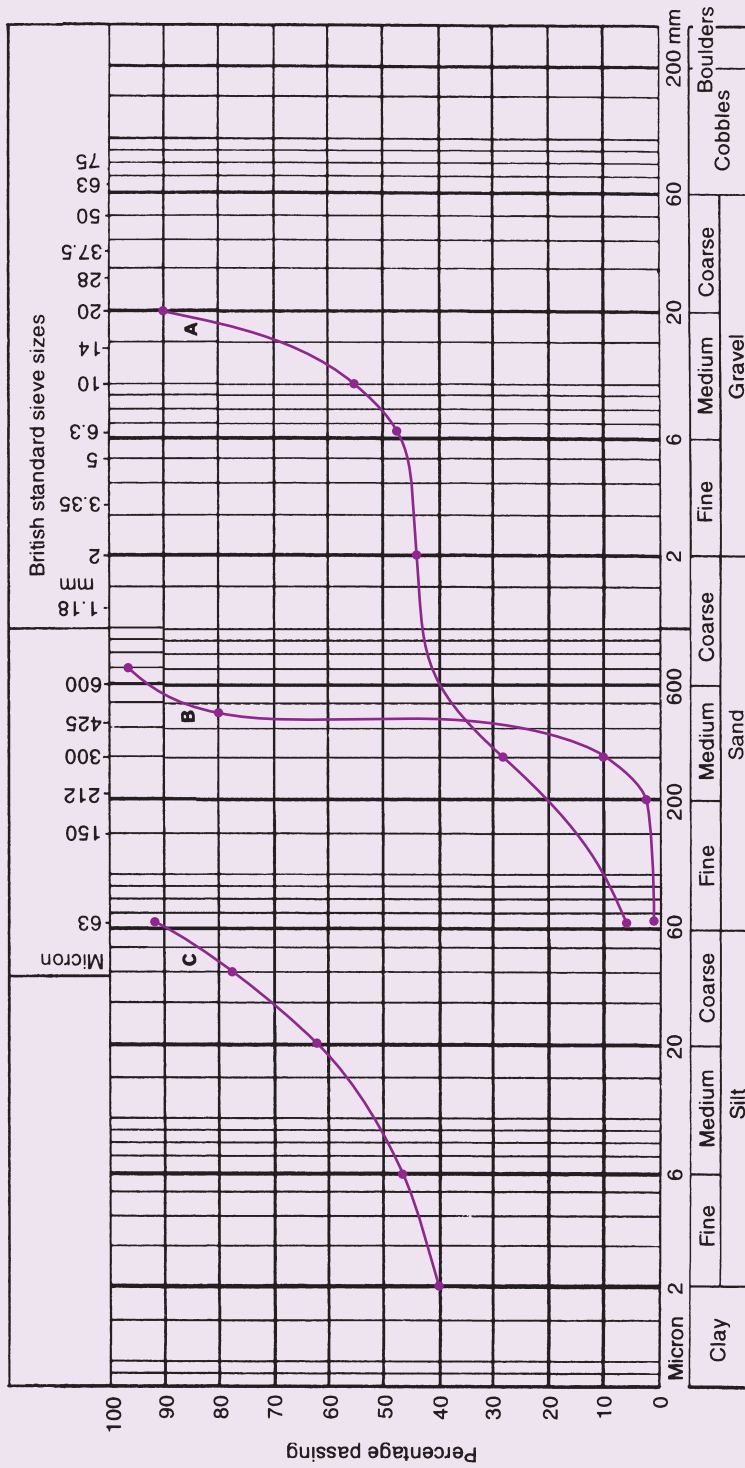


Fig. 1.9 Example 1.5.

Soil A: From the grading curve it is seen that this soil consists of 57% gravel and 43% sand and is therefore predominantly gravel. The curve has a horizontal portion indicating that the soil has only a small percentage of soil particles within this range. It is therefore gap graded.

The soil is a gap graded sandy GRAVEL. Group symbol GP_gS .

Soil B: From the grading curve it is immediately seen that this soil is a sand with most of its particles about the same size.

The soil is a uniformly graded SAND. Group symbol SP_u .

Soil C: It is interesting to note that, as the whole of soil C passed the $425\mu\text{m}$ sieve, there would be no need to remove any of the soil before subjecting it to the consistency limit tests. From the grading curve, by considering particle sizes only, the soil is a mixture of 10% sand, 50% silt and 40% clay. The soil is undoubtedly fine and the group symbol could be F, although, as the silt particles are more dominant than the clay, it could be given the symbol MC. The liquid limit of the soil is 48% which, according to BS 5930, indicates an intermediate plasticity. The group symbol of the soil could therefore be either FI or MCI.

However, for mixtures of fine soils BS 5930 suggests that classification is best carried out by the use of the plasticity chart shown in Fig. 1.8. The liquid limit of the soil = 48% and the plasticity index, $(w_L - w_p) = 27\%$. Using Fig. 1.8 it is seen that the British system classifies the soil as an inorganic clay with the group symbol CI.

1.7.2 Description of soils

Classifying and describing a soil are two operations which are not necessarily the same. An operator who has not even visited the site from which a soil came can classify the soil from the information obtained from grading and plasticity tests carried out on disturbed samples. Such tests are necessary if the soil is being considered as a possible construction material and the information obtained from them must be included in any description of the soil.

Further information regarding the colour of a soil, the texture of its particles, etc., can be obtained in the laboratory from disturbed soil samples but a full description of a soil must include its *in situ*, as well as its laboratory characteristics. Some of this latter information can be found in the laboratory from undisturbed samples of the soil collected for other purposes, such as strength or permeability tests, but usually not until after the tests have taken place and the samples can then be split open for proper examination. Other relevant information, such as bedding, geological details, etc., obtained from borehole data and site observations should also be included in the soil's description.

Further information is available in BS 5930 *Code of Practice for Site Investigations*, and Clayton *et al.* (1995).

1.8 Soil properties

From the foregoing it is seen that soil consists of a mass of solid particles separated by spaces or voids. A cross-section through a granular soil may have an appearance similar to that shown in Fig. 1.10a.

In order to study the properties of such a soil mass it is advantageous to adopt an idealised form of the diagram as shown in Fig. 1.10b. The soil mass has a total volume V and a volume of solid particles that summates to V_s . The volume of the voids, V_v , is obviously equal to $V - V_s$.

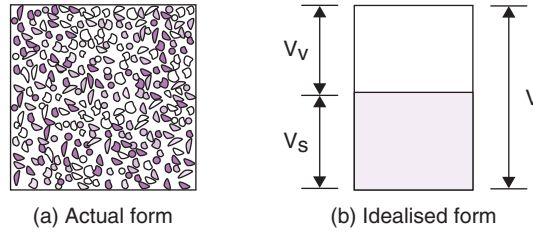


Fig. 1.10 Cross-section through a granular soil.

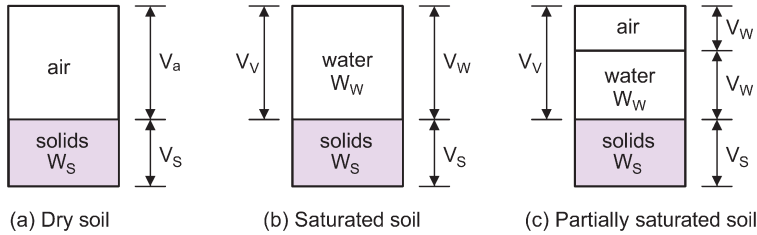


Fig. 1.11 Water and air contents in a soil.

1.8.1 Void ratio and porosity

From a study of Fig. 1.10 the following may be defined:

Void ratio

$$e = \frac{\text{Volume of voids}}{\text{Volume of solids}} = \frac{V_v}{V_s}$$

Porosity

$$n = \frac{\text{Volume of voids}}{\text{Total volume}}$$

$$n = \frac{V_v}{V} = \frac{V_v}{V_v + V_s} = \frac{e}{1 + e}$$

1.8.2 Degree of saturation (S_r)

The voids of a soil may be filled with air or water or both. If only air is present the soil is dry, whereas if only water is present the soil is saturated. When both air and water are present the soil is said to be partially saturated. These three conditions are represented in Figs 1.11a, b and c.

The degree of saturation is simply:

$$S_r = \frac{\text{Volume of water}}{\text{Volume of voids}} = \frac{V_w}{V_v} \quad (\text{usually expressed as a percentage})$$

1.8.3 Particle density (ρ_s) and specific gravity (G_s)

The specific gravity of a material is the ratio of the weight or mass of a volume of the material to the weight or mass of an equal volume of water. In soil mechanics the most important specific gravity is that of the actual soil grains and is given the symbol G_s .

From the above definition it is seen that, for a soil sample with volume of solids V_s and weight of solids W_s ,

$$G_s = \frac{W_s}{V_s \gamma_w}$$

where γ_w = weight of water and, if the sample has a mass of solids M_s ,

$$G_s = \frac{M_s}{V_s \rho_w}$$

where ρ_w = density of water (=1.0Mg/m³ at 20°C) i.e.

$$G_s = \frac{M_s}{V_s \rho_w} = \frac{W_s}{V_s \gamma_w}$$

The density of the particles ρ_s is defined as:

$$\rho_s = \frac{M_s}{V_s}$$

therefore,

$$G_s = \frac{\rho_s}{\rho_w}$$

BS 1377: Part 2 specifies methods of test for determining the particle density. For fine, medium or coarse soils the Standard specifies the use of a one litre gas jar fitted with a rubber bung and a mechanical shaking apparatus which can rotate the gas jar, end over end, at 50rpm (Fig. 1.12).

The test consists briefly of placing oven dried soil (approximately 200g for a fine soil and 400g for a medium or coarse soil) into the gas jar along with about 500ml of distilled water at room temperature. The jar is sealed with the bung and shaken, first by hand and then in the machine, for 20 to 30 minutes. The bung is then removed, the jar topped up carefully to full capacity with further distilled water and the glass plate slid on top to seal the jar without trapping any air inside. From various weighings that are made the specific gravity of the soil can be calculated. (See Example 1.6.)

If ρ_s is measured in units of Mg/m³ and the water temperature is assumed to be 20°C, it follows that ρ_s and G_s are numerically equal. G_s is dimensionless.

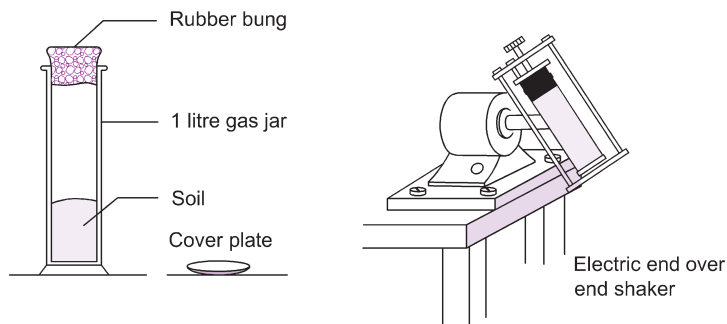


Fig. 1.12 Determination of particle density.

Soil contains particles of different minerals with consequently different specific gravities: G_s therefore represents an average value for the particles.

Generally sands have an average value of $G_s = 2.65$ and clays an average value of 2.75. The particle specific gravity of organic soils can vary considerably. An organic clay can have a G_s value of about 2.60 whereas a bog peat can have a value as low as 1.3.

For coal spoil heaps G_s can vary from about 2.0 for an unburnt shale with a high coal content, to about 2.7 for a burnt shale.

Example 1.6: Particle specific gravity

The mass of an empty gas jar, together with its glass cover plate, was 478.0g. When completely filled with water and the cover plate fitted the mass was 1508.2g. An oven dried sample of soil was inserted in the dry gas jar and the total mass, including the cover plate, was 676.6g. Water was added to the soil and, after a suitable period of shaking, was topped up until the gas jar was brim full. The cover plate was fitted and the total mass was found to be 1632.6g.

Determine the particle specific gravity of the soil.

Solution:

$$\text{Mass of soil + water} = 1632.6 - 478.0 = 1154.6 \text{ g}$$

$$\text{Mass of dry soil} = 676.6 - 478.0 = 198.6 \text{ g}$$

$$\text{Mass of water present with soil} = 1154.6 - 198.6 = 956.0 \text{ g}$$

$$\text{Mass of water when gas jar full} = 1508.2 - 478.0 = 1030.2 \text{ g}$$

$$\text{Therefore, mass of water of same volume as soil} = 1030.2 - 956.0 = 74.2 \text{ g}$$

$$G_s = \frac{\text{Mass of soil}}{\text{Mass of same volume of water}} = \frac{198.6}{74.2} = 2.68$$

Alternative solution

The specific gravity can be quickly found from a formula thus:

$$G_s = \frac{S}{[(J + W) - (J + W + S)] + S}$$

Where

$$S = \text{mass of dry soil (g)}$$

$$J + W = \text{mass of jar + water (g)}$$

$$J + W + S = \text{mass of jar + water + soil (g)}$$

i.e.,

$$G_s = \frac{198.6}{(1508.2 - 1632.6) + 198.6} = 2.68$$

1.8.4 Density and unit weight

The amount of material in a given volume, V , may be expressed in two ways:

the amount of mass, M , in the volume, or
 the amount of weight, W , in the volume.

If we consider unit volume, the two systems give the density and the unit weight of the material:

$$\text{Density, } \rho = \frac{\text{Mass}}{\text{Volume}} = \frac{M}{V}$$

$$\text{Unit weight, } \gamma = \frac{\text{Weight}}{\text{Volume}} = \frac{W}{V}$$

$$\text{Weight} = \text{mass} \times 9.81$$

As an example, consider water at 20°C:

$$\text{Density of water, } \rho_w = 1000 \text{ kg/m}^3 = 1.0 \text{ Mg/m}^3$$

Hence the unit weight of water, $\gamma_w = 1.0 \times 9.81 = 9.81 \text{ kN/m}^3$.

Soil densities are usually expressed in Mg/m^3 to the nearest 0.01.

Soil weights are usually expressed in kN/m^3 .

In soils work, it is generally more convenient to measure the density of a soil through test (e.g. Example 1.7) then to perform the geotechnical analysis using the unit weight derived from the density value.

Note: Weight density

With the introduction of Eurocode 7 to geotechnical design the term *weight density* is likely to eventually replace the term *unit weight*. The two terms are synonymous and since the term *unit weight* has been in use for many decades it will certainly remain in use for many years to come and for this reason it is used throughout this book.

Unit weight of soil

As mentioned, the unit weight of a material is its weight per unit volume. In soils work the most important unit weights are as follows:

Bulk unit weight (γ)

This is the natural *in situ* unit weight of the soil:

$$\begin{aligned} \gamma &= \frac{\text{Total weight}}{\text{Total volume}} = \frac{W}{V} = \frac{W_s + W_w}{V_s + V_v} \\ &= \frac{G_s V_s \gamma_w + V_v \gamma_w S_r}{V_s + V_v} = \gamma_w \frac{(G_s + e S_r)}{1 + e} \end{aligned}$$

Saturated unit weight (γ_{sat})

$$\gamma_{sat} = \frac{\text{Saturated weight}}{\text{Total volume}}$$

When soil is saturated $S_r = 1$, therefore

$$\gamma_{sat} = \gamma_w \frac{G_s + e}{1 + e}$$

Dry unit weight (γ_d)

$$\begin{aligned}\gamma_d &= \frac{\text{Dry weight}}{\text{Total volume}} \\ &= \frac{\gamma_w G_s}{1+e} \quad (\text{as } S_r = 0)\end{aligned}$$

Buoyant unit weight (γ')

When a soil is below the water table, part of its weight is balanced by the buoyant effect of the water. This upthrust equals the weight of the volume of the water displaced.

Hence, considering unit volume:

$$\begin{aligned}\text{Buoyant unit weight} &= \text{Saturated unit weight} - \text{Unit weight of water} \\ &= \gamma_w \frac{G_s + e}{1+e} - \gamma_w = \gamma_w \frac{G_s - 1}{1+e}\end{aligned}$$

Buoyant unit weight is often referred to as the submerged unit weight or the effective unit weight.

Density of soil

Similar expressions can be obtained for densities:

$$\text{Bulk density, } \rho_b = \rho_w \frac{(G_s + eS_r)}{1+e}$$

$$\text{Saturated density, } \rho_{\text{sat}} = \rho_w \frac{(G_s + e)}{1+e}$$

$$\text{Dry density, } \rho_d = \rho_w \frac{G_s}{1+e}$$

$$\text{Buoyant density, } \rho' = \rho_w \frac{G_s - 1}{1+e}$$

Relationship between density and unit weight values

In the above expressions, G_s , e , S_r and the number 1 are all dimensionless.

Hence a particular unit weight = γ_w times a constant.

The corresponding density = ρ_w times the same constant.

Example 1.7: Dry unit weight

A sample of wet soil was extruded from a sampling tube of diameter 100 mm in a soil testing laboratory. The length of extruded sample was 200 mm. The mass of the wet soil was 3.15 kg. Following a water content determination, the mass of the dry soil was found to be 2.82 kg.

Determine the bulk density, water content, dry density and dry unit weight of the soil.

Solution:

$$\text{Volume of sample} = \frac{\pi \times 0.1^2}{4} \times 0.2 = 0.0016 \text{ m}^3$$

$$\rho_b = \frac{M}{V} = \frac{3.15}{0.0016} = 1969 \text{ kg/m}^3 = 1.97 \text{ Mg/m}^3$$

$$w = \frac{3.15 - 2.82}{2.82} = 11.7\%$$

$$\rho_d = \frac{\rho_b}{1 + w} = \frac{1.97}{1.117} = 1.76 \text{ Mg/m}^3$$

$$\gamma_d = \rho_d \times 9.81 = 17.3 \text{ kN/m}^3$$

Relationship between w , γ_d and γ

$$\gamma = \frac{W_w + W_s}{V} \quad (1)$$

$$\gamma_d = \frac{W_s}{V} \quad (2)$$

$$w = \frac{W_w}{W_s} \quad (3)$$

From Equation (3) $W_w = wW_s$ and, substituting in Equation (1),

$$\gamma = \frac{W_s}{V}(1 + w)$$

i.e.

$$\gamma_d = \frac{\gamma}{1 + w}$$

Thus to find the dry unit weight from the bulk unit weight, divide the latter by $(1 + w)$ where w is the water content expressed as a decimal.

Relationship between e , w and G_s for a saturated soil

$$w = \frac{W_w}{W_s} = \frac{V_w \gamma_w}{V_s \gamma_s G_s} = \frac{V_v}{V_s G_s} = \frac{e}{G_s} \quad (V_w = V_v \text{ if the soil is saturated})$$

i.e.

$$e = wG_s$$

Relationship between e , w and G_s for a partially saturated soil

$$w = \frac{W_w}{W_s} = \frac{V_w \gamma_w}{V_s \gamma_w G_s} = \frac{V_v S_r}{V_s G_s} = \frac{e S_r}{G_s}$$

i.e.

$$e = \frac{w G_s}{S_r}$$

Example 1.8: Physical properties determination

In a bulk density determination a sample of clay with a mass of 683 g was coated with wax. The combined mass of the clay and the wax was 690.6 g. The volume of the clay and the wax was found, by immersion in water, to be 350 ml.

The sample was then broken open and water content and particle specific gravity tests gave respectively 17% and 2.73.

The specific gravity of the wax was 0.89. Determine the bulk density and unit weight, void ratio and degree of saturation.

Solution:

Mass of soil = 683 g

Mass of wax = 690.6 – 683 = 7.6 g

$$\Rightarrow \text{Volume of wax} = \frac{7.6}{0.89} = 8.55 \text{ ml}$$

$$\Rightarrow \text{Volume of soil} = 350 - 8.6 = 341.4 \text{ ml}$$

$$\rho_b = \frac{683}{341.4} = 2 \text{ g/ml} = 2.0 \text{ Mg/m}^3$$

$$\gamma_b = 2 \times 9.81 = 19.6 \text{ kN/m}^3$$

$$\rho_d = \frac{2}{1.17} = 1.71 \text{ Mg/m}^3$$

Now

$$\frac{\rho_w G_s}{1+e} = 1.71$$

$$\Rightarrow e = \frac{2.73 - 1.71}{1.71} = 0.596$$

Now

$$\rho_b = 2.0 = \rho_w \frac{(G_s + e S_r)}{1+e}$$

$$\Rightarrow 1.596 \times 2.0 = 2.73 + 0.596 \times S_r$$

$$\Rightarrow S_r = 77.0\%$$

1.8.5 Density index (I_D)

A granular soil generally has a large range into which the value of its void ratio may be fitted. If the soil is vibrated and compacted the particles are pressed close together and a minimum value of void ratio is obtained, but if the soil is loosely poured a maximum value of void ratio is obtained.

These maximum and minimum values can be obtained from laboratory tests and it is often convenient to relate them to the naturally occurring void ratio of the soil. This relationship is expressed as the density index, or relative density, of the soil:

$$I_D = \frac{e_{\max} - e}{e_{\max} - e_{\min}}$$

The theoretical maximum possible density of a granular soil must occur when $e = e_{\min}$, i.e. when $I_D = 1.0$. Similarly the minimum possible density occurs when $e = e_{\max}$ and $I_D = 0$. In practical terms this means that a loose granular soil will have a I_D value close to zero whilst a dense granular soil will have a I_D value close to 1.0.

1.8.6 Summary of soil physical relations

A summary of the relationships established in Section 1.8 is given below:

Water content	$w = \frac{W_w}{W_s} = \frac{M_w}{M_s}$
Void ratio	$e = \frac{V_v}{V_s}$
	$e = wG_s$ (saturated)
	$e = \frac{wG_s}{S_r}$ (partially saturated)
Porosity	$n = \frac{V_v}{V} = \frac{e}{1+e}$
Degree of saturation	$S_r = \frac{V_w}{V_v}$
Particle specific gravity	$G_s = \frac{W_s}{V_s \gamma_w} = \frac{M_s}{V_s \rho_w}$
Bulk density	$\rho_b = \rho_w \frac{(G_s + eS_r)}{1+e}$
Dry density	$\rho_d = \frac{\rho_w G_s}{1+e} = \frac{\rho_b}{1+w}$
Saturated density	$\rho_{\text{sat}} = \rho_w \frac{(G_s + e)}{1+e}$
Submerged density	$\rho' = \rho_w \frac{(G_s - 1)}{1+e}$
Bulk unit weight	$\gamma_b = \gamma_w \frac{(G_s + eS_r)}{1+e}$

$$\text{Dry unit weight} \quad \gamma_d = \frac{\gamma_w G_s}{1+e} = \frac{\gamma_b}{1+w}$$

$$\text{Saturated unit weight} \quad \gamma_{\text{sat}} = \gamma_w \frac{(G_s + e)}{1+e}$$

$$\text{Submerged unit weight} \quad \gamma' = \gamma_w \frac{(G_s - 1)}{1+e}$$

$$\text{Density index} \quad I_d = \frac{e_{\text{max}} - e}{e_{\text{max}} - e_{\text{min}}}$$

Exercises

Exercise 1.1

The results of a sieve analysis on a soil were:

Sieve size (mm)	Mass retained (g)
50	0
37.5	15.5
20	17
14	10
10	11
6.3	33
3.35	114.5
1.18	63.3
0.6	18.2
0.15	17
0.063	10.5

The total mass of the sample was 311 g. Plot the particle size distribution curve and, from the inspection of this curve, determine the effective size and uniformity coefficient. Classify the soil.

Answer $D_{10} = 0.7 \text{ mm}$; $D_{60} = 5.2 \text{ mm}$. $C_u = 7.4$. 70% gravel, 30% sand. Well graded sandy GRAVEL – symbol GWS.

Exercise 1.2

Plot the particle size distribution curve for the following sieve analysis, given the sieve sizes and the mass retained on each. Classify the soil.

Sample 642g. Retained on $425 \mu\text{m}$ sieve – 11 g, $300 \mu\text{m}$ sieve – 28 g, $212 \mu\text{m}$ sieve – 77 g, $150 \mu\text{m}$ sieve – 173 g, $63 \mu\text{m}$ sieve – 321 g.

Answer By inspection of grading curve soil is a uniform SAND – symbol SPu. This is confirmed from the value of $C_u = 2.35$.

Exercise 1.3

A BS cone penetrometer test carried out on a sample of boulder clay gave the following results:

Cone penetration (mm)	15.9	17.1	19.4	20.9	22.8
Water content (%)	32.0	32.8	34.5	35.7	37.0

Determine the liquid limit of the soil.

Answer $w_L = 35\%$

Exercise 1.4

A liquid and plastic limit test gave the following results:

Test No.	1	2	3	4	PL	PL
Wet mass (g)	33.20	32.10	28.20	31.00	11.83	15.04
Dry mass (g)	28.20	26.50	22.40	23.90	11.25	14.07
Tin (g)	7.02	7.04	7.10	7.02	7.04	7.25
Penetration (mm)	14.5	17.0	20.9	22.7	–	–

Determine the plasticity index of the soil and classify the soil.

Answer 22, CI

If the natural water content was 28%, determine the liquidity index in the field.

Answer 0.64, CI

Exercise 1.5

A sand sample has a porosity of 35% and the specific gravity of the particles is 2.73. What is its dry density and void ratio?

Answer $e = 0.54$, $\rho_d = 1.77 \text{ Mg/m}^3$

Exercise 1.6

A sample of silty clay was found to have a volume of 14.88 ml, whilst its mass at natural water content was 28.81 g and the particle specific gravity was 2.7. Calculate the void ratio and degree of saturation if, after oven drying, the sample had a mass of 24.83 g.

Answer $e = 0.618$, $S_r = 70\%$

Exercise 1.7

A sample of moist sand was cut out of a natural deposit by means of a sampling cylinder. The volume of the cylinder was 478 ml; the weight of the sample alone was 884 g and 830 g after drying. The volume of the dried sample, when rammed tight into a graduated cylinder, was 418 ml and its volume, when poured loosely into the same cylinder, was 616 ml. If the particle specific gravity was 2.67, compute the density index and the degree of saturation of the deposit.

Answer $I_D = 69\%$, $S_r = 32\%$

Exercise 1.8

In order to determine the density of a clay soil an undisturbed sample was taken in a sampling tube of volume 0.001664 m^3 .

The following data were obtained:

Mass of tube (empty) = 1.864 kg

Mass of tube and clay sample = 5.018 kg

Mass of tube and clay sample after drying = 4.323 kg

Calculate the water content, the bulk, and the dry densities. If the particle specific gravity was 2.69, determine the void ratio and the percentage saturation of the clay.

Answer $w = 28\%$, $\rho_d = 1.49 \text{ Mg/m}^3$, $\rho_b = 1.90 \text{ Mg/m}^3$, $S_r = 93\%$, $e = 0.82$

Chapter 2

Permeability and Flow of Water in Soils

2.1 Subsurface water

This is the term used to define all water found beneath the Earth's surface. The main source of subsurface water is rainfall, which percolates downwards to fill up the voids and interstices. Water can penetrate to a considerable depth, estimated to be as much as 12 000 metres, but at depths greater than this, due to the large pressures involved, the interstices have been closed by plastic flow of the rocks. Below this level, water cannot exist in a free state, although it is often found in chemical combination with the rock minerals, so that the upper limit of plastic flow within the rock determines the lower limit of subsurface water.

Subsurface water can be split into two distinct zones: *saturation zone and aeration zone*.

2.1.1 Saturation zone

This is the depth throughout which all the fissures and voids are filled with water under hydrostatic pressure. The upper level of this water is known as the water table, phreatic surface or groundwater level, and water within this zone is called phreatic water or groundwater.

The water table tends to follow in a more gentle manner than the topographical features of the surface above (Fig. 2.1). At groundwater level, the hydrostatic pressure is zero, so another definition of water table is the level to which water will eventually rise in an unlined borehole.

The water table is not constant but rises and falls with variations of rainfall, atmospheric pressure, temperature, etc., whilst coastal regions are affected by tides.

When the water table reaches the surface, springs, lakes, swamps, and similar features can be formed.

2.1.2 Aeration zone

Sometimes referred to as the vadose zone, this zone occurs between the water table and the surface, and can be split into three sections.

Capillary fringe

Owing to capillarity, water is drawn up above the water table into the interstices of the soil or rock. Water in this fringe can be regarded as being in a state of negative pressure, i.e. at pressure values below atmospheric. The minimum height of the fringe is governed by the maximum size of the voids within the soil. Up to this height above the water table, the soil will be sufficiently close to full saturation to be considered as such.

The maximum height of the fringe is governed by the minimum size of the voids. Between the minimum and maximum heights the soil is partially saturated.

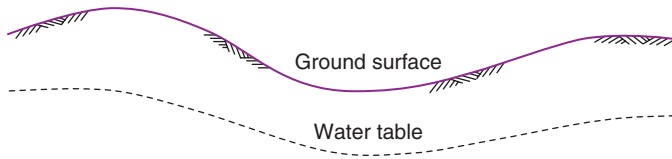


Fig. 2.1 Tendency of the water table to follow the earth's surface.

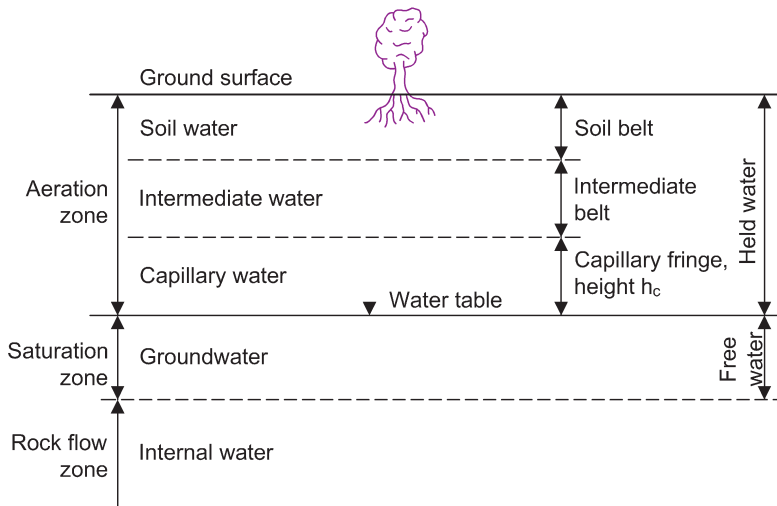


Fig. 2.2 Diagram illustrating types of subsurface water.

Terzaghi and Peck (1948) give an approximate relationship between the maximum height and the grain size for a granular soil:

$$h_c = \frac{C}{eD_{10}} \text{ mm}$$

where C is a constant depending upon the shape of the grains and the surface impurities (varying from 10.0 to 50.0 mm²) and D₁₀ is the effective size expressed in millimetres.

Intermediate belt

As rainwater percolates downward to the water table, a certain amount is held in the soil by the action of surface tension, capillarity, adsorption and chemical action. The water retained in this manner is termed held water and is deep enough not to be affected by plants.

Soil belt

This zone is constantly affected by precipitation, evaporation and plant transpiration. Moist soil in contact with the atmosphere either evaporates water or condenses water into itself until its vapour pressure is equal to atmospheric pressure. Soil water in atmospheric equilibrium is called hygroscopic water and its water content (which depends upon relative humidity) is known as the hygroscopic water content.

The various zones are illustrated in Fig. 2.2.

2.2 Flow of water through soils

The voids of a soil (and of most rocks) are connected together and form continuous passageways for the movement of water brought about by rainfall infiltration, transpiration of plants, unbalance of chemical energy, variation of intensity of dissolved salts, etc.

When rainfall falls on the soil surface, some of the water infiltrates the surface and percolates downward through the soil. This downward flow results from a gravitational force acting on the water. During flow, some of the water is held in the voids in the *aeration zone* and the remainder reaches the groundwater table and the *saturation zone*. In the aeration zone, flow is said to be *unsaturated*. Below the water table, flow is said to be *saturated*.

2.2.1 Saturated flow

The water within the voids of a soil is under pressure. This water, known as pore water, may be static or flowing. Water in saturated soil will flow in response to variations in hydrostatic head within the soil mass. These variations may be natural or induced by excavation or construction.

2.2.2 Hydraulic or hydrostatic head

The head of water acting at a point in a submerged soil mass is known as the hydrostatic head and is expressed by Bernoulli's equation:

Hydrostatic head = Velocity head + Pressure head + Elevation head

$$h = \frac{v^2}{2g} + \frac{p}{\gamma_w} + z$$

In seepage problems atmospheric pressure is taken as zero and the velocity is so small that the velocity head becomes negligible; the hydrostatic head is therefore taken as:

$$h = \frac{p}{\gamma_w} + z$$

Excess hydrostatic head

Water flows from points of high to points of low head. Hence flow will occur between two points if the hydrostatic head at one is less than the hydrostatic head at the other, and in flowing between the points the water experiences a head loss equal to the difference in head between them. This difference is known as the excess hydrostatic head.

2.2.3 Seepage velocity

The conduits of a soil are irregular and of small diameter – an average value of the diameter is $D_{10}/5$. Any flow quantities calculated by the theory of pipe flow must be in error and it is necessary to think in terms of an average velocity through a given area of soil rather than specific velocities through particular conduits.

If Q is the quantity of flow passing through an area A in time t , then the average velocity (v) is:

$$v = \frac{Q}{At}$$

This average velocity is sometimes referred to as the seepage velocity. In further work the term velocity will imply average velocity.

2.3 Darcy's law of saturated flow

In 1856, Darcy showed experimentally that a fluid's velocity of flow through a porous medium was directly related to the hydraulic gradient causing the flow, i.e.

$$v \propto i$$

where i = hydraulic gradient (the head loss per unit length), or

$$v = Ci$$

where C = a constant involving the properties of both the fluid and the porous material.

2.4 Coefficient of permeability, k

In soils we are generally concerned with water flow: the constant C is determined from tests in which the permeant is water. The particular value of the constant C obtained from these tests is known as the coefficient of permeability and is given the symbol k .

It is important to realise that when a soil is said to have a certain coefficient of permeability, this value only applies to water (at 20°C). If heavy oil is used as the permeant, the value of C would be considerably less than k .

Temperature causes variation in k , but in most soils work this is insignificant.

Provided that the hydraulic gradient is less than 1.0, as is the case in most seepage problems, the flow of water through a soil is linear and Darcy's law applies, i.e.

$$v = ki$$

or

$$Q = Atki$$

or

$$q = Aki \quad \left(\text{where } q = \text{quantity of unit flow} = \frac{Q}{t} \right)$$

From this latter expression a definition of k is apparent: the coefficient of permeability is the rate of flow of water per unit area of soil when under a unit hydraulic gradient.

BS 1377 specifies that the dimensions for k should be m/s and these dimensions are used in this chapter.

2.5 Determination of permeability in the laboratory

2.5.1 The constant head permeameter

The test is described in BS 1377: Part 5 and the apparatus is shown in Fig. 2.3. Water flows through the soil under a head which is kept constant by means of the overflow arrangement. The head loss, h , between two points along the length of the sample, distance l apart, is measured by means of a manometer (in practice there are more than just two manometer tappings).

From Darcy's law: $q = Aki$

The unit quantity of flow, $q = \frac{Q}{t}$

The hydraulic gradient, $i = \frac{h}{l}$

and A = area of sample

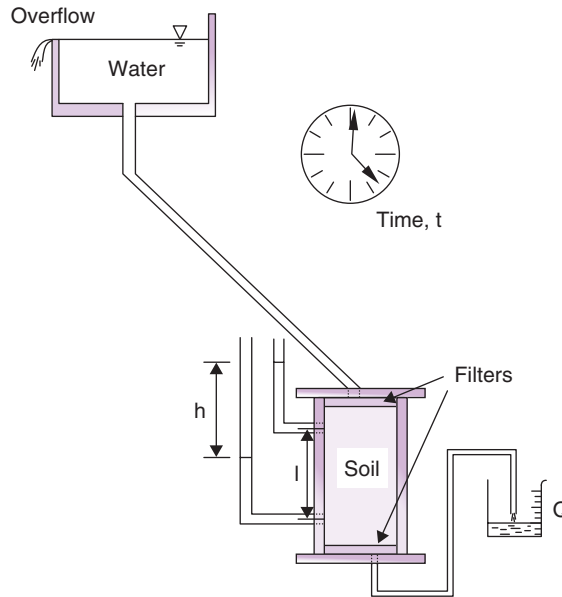


Fig. 2.3 The constant head permeameter.

Hence k can be found from the expression

$$k = \frac{q}{Ai} \quad \text{or} \quad k = \frac{Ql}{tAh}$$

A series of readings can be obtained from each test and an average value of k determined. The test is suitable for gravels and sand and could be used for many fill materials.

Example 2.1: Constant head permeameter

In a constant head permeameter test the following results were obtained:

Duration of test	= 4.0 min
Quantity of water collected	= 300 ml
Head difference in manometer	= 50 mm
Distance between manometer tapings	= 100 mm
Diameter of test sample	= 100 mm

Determine the coefficient of permeability in m/s.

Solution:

$$A = \frac{\pi \times 100^2}{4} = 7850 \text{ mm}^2 \quad q = \frac{300}{4 \times 60} = 1.25 \text{ ml/s}$$

$$k = \frac{ql}{Ah} = \frac{1250 \times 100}{7850 \times 50} = 3.18 \times 10^{-1} \text{ mm/s} = 3.2 \times 10^{-4} \text{ m/s}$$

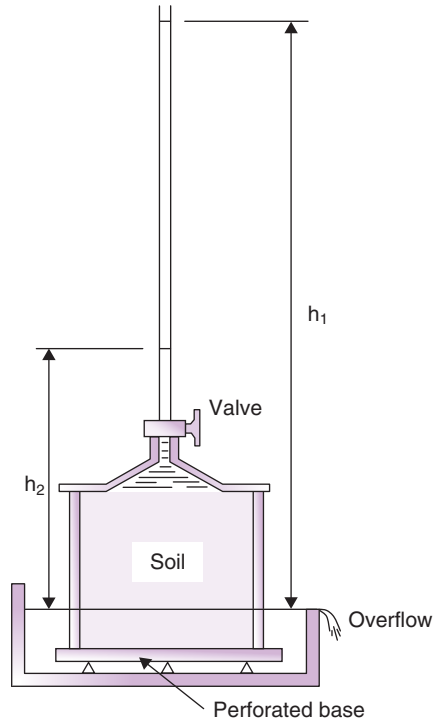


Fig. 2.4 The falling head permeameter.

2.5.2 The falling head permeameter

A sketch of the falling head permeameter is shown in Fig. 2.4. In this test, which is suitable for silts and some clays, the flow of water through the sample is measured at the inlet. The height, h_1 , in the stand-pipe is measured and the valve is then opened as a stop clock is started. After a measured time, t , the height to which the water level has fallen, h_2 , is determined.

k is given by the formula:

$$k = 2.3 \frac{al}{At} \log_{10} \frac{h_1}{h_2}$$

where

A = cross-sectional area of sample

a = cross-sectional area of stand pipe

l = length of sample.

During the test, the water in the stand-pipe falls from a height h_1 to a final height h_2 .

Let h be the height at some time, t .

Consider a small time interval, dt , and let the change in the level of h during this time be $-dh$ (negative as it is a drop in elevation).

The quantity of flow through the sample in time $dt = -adh$ and is given the symbol dQ . Now

$$\begin{aligned} dQ &= Aki \, dt \\ &= Ak \frac{h}{l} dt = -adh \end{aligned}$$

or

$$dt = -\frac{al}{Ak} \frac{dh}{h}$$

Integrating between the test limits:

$$\int_0^t dt = -\frac{al}{Ak} \int_{h_1}^{h_2} \frac{1}{h} dh$$

i.e.

$$t = -\frac{al}{Ak} \ln \frac{h_2}{h_1} = \frac{al}{Ak} \ln \frac{h_1}{h_2}$$

or

$$\begin{aligned} k &= \frac{al}{At} \ln \frac{h_1}{h_2} \\ &= 2.3 \frac{al}{At} \log_{10} \frac{h_1}{h_2} \end{aligned}$$

Example 2.2: Falling head permeameter

An undisturbed soil sample was tested in a falling head permeameter. The results were:

Initial head of water in stand pipe	= 1500 mm
Final head of water in stand pipe	= 605 mm
Duration of test	= 281 s
Sample length	= 150 mm
Sample diameter	= 100 mm
Stand-pipe diameter	= 5 mm

Determine the permeability of the soil in m/s.

Solution:

$$a = \frac{\pi \times 5^2}{4} = 19.67 \text{ mm}^2 \quad A = \frac{\pi \times 100^2}{4} = 7854 \text{ mm}^2$$

$$\log_{10} \frac{h_1}{h_2} = \log_{10} 2.48 = 0.3945$$

$$k = \frac{2.3 \times 19.67 \times 150 \times 0.3945}{7854 \times 281} = 1.21 \times 10^{-3} \text{ mm/s} = 1.2 \times 10^{-6} \text{ m/s}$$

2.5.3 The hydraulic consolidation cell (Rowe cell)

The Rowe cell (described in Chapter 11) was developed for carrying out consolidation tests. The apparatus can also be used for determining the permeability of a soil. The test procedure is described in BS 1377: Part 6.

2.6 Determination of permeability in the field

2.6.1 The pumping out test

The pumping out test can be used to measure the average k value of a stratum of soil below the water table and is effective up to depths of about 45 m.

A casing of about 400 mm diameter is driven to bedrock or to impervious stratum. Observation wells of at least 35 mm diameter are put down on radial lines from the casing, and both the casing and the observation wells are perforated to allow easy entrance of water. The test consists of pumping water out from the central casing at a measured rate (q), and observing the resulting drawdown in groundwater level by means of the observation wells.

At least four observation wells, arranged in two rows at right angles to each other should be used although it may be necessary to install extra wells if the initial ones give irregular results. If there is a risk of fine soil particles clogging the observation wells then the wells should be surrounded by a suitably graded filter material (the design of filters is discussed later in this chapter).

It may be that the site boundary conditions, e.g. a river, canal or a steep sloping surface of impermeable subsurface rock, a fault or a dyke, do not allow the two rows of observation wells to be placed at right angles. In such circumstances the two rows of wells should be placed parallel to each other and at right angles to the offending boundary.

The minimum distance between the observation wells and the pumping well should be ten times the radius of the pumping well and at least one of the observation wells in each row should be at a radial distance greater than twice the thickness of the ground being tested.

In addition to the observation wells an additional standpipe inside the pumping well is desirable so that a reliable record of the drawdown of the well itself can be obtained.

Figure 2.5 illustrates conditions during pumping.

Consider an intermediate distance r from the centre of the pumping well and let the height of the GWL above the impermeable layer during pumping be h .

The hydraulic gradient, i , is equal to the slope of the

$$h-r \text{ curve} = \frac{\partial h}{\partial r}$$

where $2\pi rh$ = area of the walls of an imaginary cylinder of radius r and height h . Now

$$q = Aki = 2\pi rhk \frac{\partial h}{\partial r}$$

i.e.

$$q \frac{\partial r}{r} = k2\pi h \partial h$$

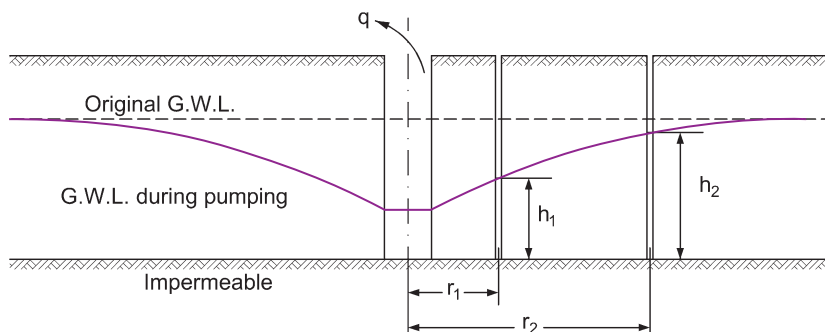


Fig. 2.5 The pumping out test.

and, integrating between test limits:

$$q = \int_{r_1}^{r_2} \frac{1}{r} \partial r = k2\pi \int_{h_1}^{h_2} h \partial h$$

$$= k2\pi \left[\frac{h_2^2 - h_1^2}{2} \right]$$

i.e.

$$q \ln \frac{r_2}{r_1} = k\pi(h_2^2 - h_1^2)$$

or

$$k = \frac{q \ln r_2 / r_1}{\pi(h_2^2 - h_1^2)} = \frac{2.3q \log_{10} r_2 / r_1}{\pi(h_2^2 - h_1^2)}$$

Pumping tests can be expensive as they require the installation of both the pumping and the observation wells as well as suitable pumping and support equipment. Care must be taken in the design of a suitable test programme and, before attempting to carry out any pumping test, reliable data should be obtained about the subsoil profile, if necessary by means of boreholes specially sunk for the purpose.

Suction pumps can be used where the groundwater does not have to be lowered by more than about 5 m below the intake chamber of the pump but for greater depths submersible pumps are generally necessary.

Where a pumping test has been completed in which there are no observation well data, it is still possible to obtain a very rough estimate of k with the formula proposed by Logan (1964), $k \approx 1.22q/(s_w/h_o)$, where h_o is the thickness of confined ground and s_w is the corrected drawdown in the pumping well.

(The observed value of drawdown in the well has to be corrected for head loss through the well screens before being used in calculation of permeability. It is usual to reduce the observed value by 25% to give s_w , unless the head losses from water entering the well are observed to be obviously much greater.)

Example 2.3: Pumping out test

A 9.15 m thick layer of sandy soil overlies an impermeable rock. Groundwater level is at a depth of 1.22 m below the top of the soil. Water was pumped out of the soil from a central well at the rate of 5680 kg/min and the drawdown of the water table was noted in two observation wells. These two wells were on a radial line from the centre of the main well at distances of 3.05 and 30.5 m.

During pumping the water level in the well nearest to the pump was 4.57 m below ground level and in the furthest well was 2.13 m below ground level.

Determine an average value for the permeability of the soil in m/s.

Solution:

$$q = 5680 \text{ kg/min} = 5.68 \text{ m}^3/\text{min} = 0.0947 \text{ m}^3/\text{s}$$

$$h_1 = 9.15 - 4.57 = 4.58 \text{ m} \quad h_2 = 9.15 - 2.13 = 7.02 \text{ m}$$

$$k = \frac{q \ln r_2 / r_1}{\pi(h_2^2 - h_1^2)} = \frac{0.0947 \times 2.3026}{28.3 \times \pi} = 2.45 \times 10^{-3} \text{ m/s}$$

2.6.2 The pumping in test

Where bedrock level is very deep or where the permeabilities of different strata are required, the pumping in test can be used. A casing, perforated for a metre or so at its end, is driven into the ground. At intervals during the driving, the rate of flow required to maintain a constant head in the casing is determined and a measure of the soil's permeability is obtained.

2.7 Approximation of coefficient of permeability

It is obvious that a soil's coefficient of permeability depends upon its porosity, which is itself related to the particle size distribution curve of the soil (a gravel is much more permeable than a clay). It would therefore seem possible to approximate the permeability of a soil given its particle size distribution, and typical ranges of k for different soil types are given below. In addition, k can be approximated for a clean sand thus:

$$k \cong 0.01D_{10}^2 \text{ m/s}$$

where D_{10} = effective size in mm.

Wise (1992) offered approximations for other soils based on pore size distribution but it should be remembered that no formula is as good as an actual permeability test.

Typical ranges of coefficient of permeability

Gravel	$> 10^{-1}$ m/s
Sands	10^{-1} to 10^{-5} m/s
Fine sands, coarse silts	10^{-5} to 10^{-7} m/s
Silts	10^{-7} to 10^{-9} m/s
Clays	$< 10^{-9}$ m/s

Example 2.4: Approximation of k

Compute an approximate value for the coefficient of permeability for the soil in Example 1.2.

Solution:

$$k = 0.01D_{10}^2 = 0.01 \times 0.17^2 = 2.9 \times 10^{-4} \text{ m/s}$$

2.8 General differential equation of flow

Figure 2.6 shows an elemental cube, of dimensions dx , dy and dz , in an orthotropic soil with an excess hydrostatic head h acting at its centre (an *orthotropic* soil is a soil whose material properties are different in all directions).

Let the coefficients of permeability in the coordinate directions x , y and z be k_x , k_y and k_z , respectively. Consider the component of flow in the x direction.

The component of the hydraulic gradient, i_x , at the centre of the element will be

$$i_x = -\frac{\partial h}{\partial x}$$

(Note that it is of negative sign as there is a head loss in the direction of flow).

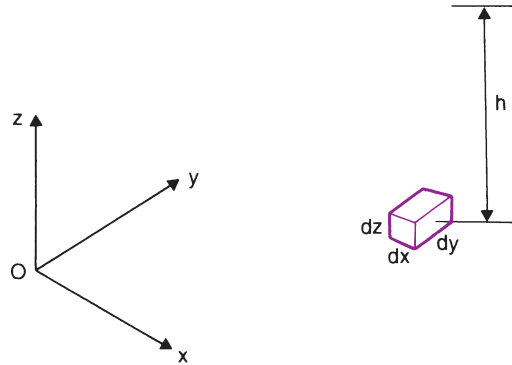


Fig. 2.6 Element in an orthotropic soil.

The rate of change of the hydraulic gradient i_x along the length of the element in the x direction will be:

$$\frac{\partial i_x}{\partial x} = -\frac{\partial^2 h}{\partial x^2}$$

Hence the gradient at the face of the element nearest the origin

$$\begin{aligned} &= -\frac{\partial h}{\partial x} + \left(\frac{\partial i_x}{\partial x}\right)\left(\frac{-dx}{2}\right) \\ &= -\frac{\partial h}{\partial x} + \frac{\partial^2 h}{\partial x^2} \frac{dx}{2} \end{aligned}$$

From Darcy's law:

$$\text{Flow} = Aki = k_x \left(-\frac{\partial h}{\partial x} + \frac{\partial^2 h}{\partial x^2} \frac{dx}{2} \right) dy \cdot dz \quad (1)$$

The gradient at the face furthest from the origin is

$$\begin{aligned} &-\frac{\partial h}{\partial x} + \left(\frac{\partial i_x}{\partial x}\right) \frac{dx}{2} \\ &= -\frac{\partial h}{\partial x} - \frac{\partial^2 h}{\partial x^2} \frac{dx}{2} \end{aligned}$$

Therefore

$$\text{Flow} = k_x \left(-\frac{\partial h}{\partial x} - \frac{\partial^2 h}{\partial x^2} \frac{dx}{2} \right) dy \cdot dz \quad (2)$$

Expressions (1) and (2) represent respectively the flow into and out of the element in the x direction, so that the net rate of increase of water within the element, i.e. the rate of change of the volume of the element, is (1) – (2).

Similar expressions may be obtained for flow in the y and z directions. The sum of the rates of change of volume in the three directions gives the rate of change of the total volume:

$$\left(\frac{k_x \partial^2 h}{\partial x^2} + \frac{k_y \partial^2 h}{\partial y^2} + \frac{k_z \partial^2 h}{\partial z^2} \right) dx \cdot dy \cdot dz$$

Under the laminar flow conditions that apply in seepage problems there is no change in volume and the above expression must equal zero:

$$\frac{k_x \partial^2 h}{\partial x^2} + \frac{k_y \partial^2 h}{\partial y^2} + \frac{k_z \partial^2 h}{\partial z^2} = 0$$

This is the general expression for three-dimensional flow.

In many seepage problems the analysis can be carried out in two dimensions, the y term usually being taken as zero so that the expression becomes:

$$\frac{k_x \partial^2 h}{\partial x^2} + \frac{k_z \partial^2 h}{\partial z^2} = 0$$

If the soil is isotropic, $k_x = k_z = k$ and the expression is:

$$\frac{\partial^2 h}{\partial x^2} + \frac{\partial^2 h}{\partial z^2} = 0$$

An *isotropic* soil is a soil whose material properties are the same in all directions.

It should be noted that these expressions only apply when the fluid flowing through the soil is incompressible. This is more or less the case in seepage problems when submerged soils are under consideration, but in partially saturated soils considerable volume changes may occur and the expressions are no longer valid.

2.9 Potential and stream functions

The Laplacian equation just derived can be expressed in terms of the two conjugate functions ϕ and ψ .

If we put

$$\frac{\partial \phi}{\partial x} = v_x = ki_x = -\frac{k \partial h}{\partial x} \quad \text{and} \quad \frac{\partial \phi}{\partial z} = v_z = -\frac{k \partial h}{\partial z}$$

then

$$\frac{\partial^2 \phi}{\partial x^2} = -\frac{k \partial^2 h}{\partial x^2} \quad \text{and} \quad \frac{\partial^2 \phi}{\partial z^2} = -\frac{k \partial^2 h}{\partial z^2}$$

hence

$$\frac{\partial^2 \phi}{\partial x^2} + \frac{\partial^2 \phi}{\partial z^2} = 0$$

Also, if we put

$$\frac{\partial \psi}{\partial z} = v_x = \frac{\partial \phi}{\partial x} \quad \text{and} \quad -\frac{\partial \psi}{\partial x} = v_z = \frac{\partial \phi}{\partial z}$$

then

$$\frac{\partial^2 \psi}{\partial z^2} = \frac{\partial^2 \phi}{\partial x \partial z} \quad \text{and} \quad \frac{\partial^2 \psi}{\partial x^2} = -\frac{\partial^2 \phi}{\partial x \partial z}$$

hence

$$\frac{\partial^2 \psi}{\partial x^2} + \frac{\partial^2 \psi}{\partial z^2} = 0$$

ϕ and ψ are known respectively as potential and stream functions. If ϕ is given a particular constant value then an equation of the form $h = \text{a constant}$ can be derived (the equation of an equipotential line); if ψ is given a particular constant value then the equation derived is that of a stream or flow line.

Direct integration of these expressions in order to obtain a solution is possible for straightforward cases. However, in general such integration cannot be easily carried out and a solution obtained by a graphical method in which a flow net is drawn has been used by engineers for many decades. Nowadays, however, much use is made of computer software to find the solution using numerical techniques such as the finite difference and finite element methods. Nevertheless, the method for drawing a flow net by hand is given in Section 2.10.3 for readers interested in learning the techniques involved.

2.10 Flow nets

The flow of water through a soil can be represented graphically by a flow net, a form of curvilinear net made up of a set of flow lines intersected by a set of equipotential lines.

Flow lines

The paths which water particles follow in the course of seepage are known as flow lines. Water flows from points of high to points of low head, and makes smooth curves when changing direction. Hence we can draw, by hand or by computer, a series of smooth curves representing the paths followed by moving water particles.

Equipotential lines

As the water moves along the flow line it experiences a continuous loss of head. If we can obtain the head causing flow at points along a flow line, then by joining up points of equal potential we obtain a second set of lines known as equipotential lines.

2.10.1 Hydraulic gradient

The potential drop between two adjacent equipotentials divided by the distance between them is known as the hydraulic gradient. It attains a maximum along a path normal to the equipotentials and in isotropic soil the flow follows the paths of the steepest gradients, so that flow lines cross equipotential lines at right angles.

Figure 2.7 shows a typical flow net representing seepage through a soil beneath a dam. The flow is assumed to be two dimensional, a condition that covers a large number of seepage problems encountered in practice.

From Darcy's law $q = Aki$, so if we consider unit width of soil and if Δq = the unit flow through a flow channel (the space between adjacent flow lines), then:

$$\Delta q = b \times l \times k \times i = bki$$

where b = distance between the two flow lines.

In Fig. 2.7 the figure ABCD is bounded by the same flow lines as figure $A_1B_1C_1D_1$ and by the same equipotentials as figure $A_2B_2C_2D_2$. For any figure in the net $\Delta q = bki = bk\Delta h/l$, where

Δh = head loss between the two equipotentials

l = distance between the equipotentials (see Fig. 2.8).

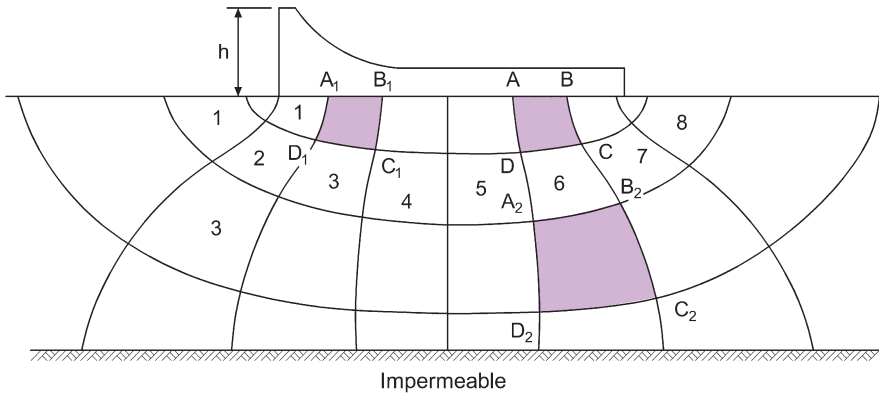


Fig. 2.7 Flow net for seepage beneath a dam.

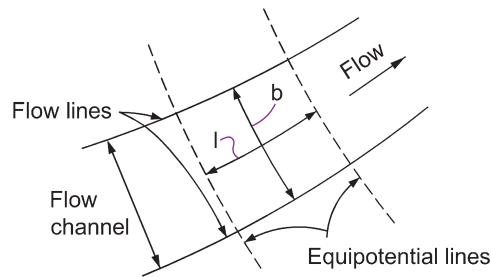


Fig. 2.8 Section of a flow net.

Referring to Fig. 2.7:

$$\text{Flow through } A_1B_1C_1D_1 = \Delta q_1 = k\Delta h_1 \frac{b_1}{l_1}$$

$$\text{Flow through } A_2B_2C_2D_2 = \Delta q_2 = k\Delta h_2 \frac{b_2}{l_2}$$

$$\text{Flow through } ABCD = \Delta q = k\Delta h \frac{b}{l}$$

If we assume that the soil is homogeneous and isotropic then k is the same for all figures and it is possible to draw the flow net so that $b_1 = l_1$, $b_2 = l_2$, $b = l$. When we have this arrangement the figures are termed 'squares' and the flow net is a square flow net. With this condition:

$$\frac{b_1}{l_1} = \frac{b_2}{l_2} = \frac{b}{l} = 1.0$$

Since square $ABCD$ has the same flow lines as $A_1B_1C_1D_1$,

$$\Delta q = \Delta q_1$$

Since square ABCD has the same equipotentials as $A_2B_2C_2D_2$,

$$\Delta h = \Delta h_2$$

$$\Rightarrow \Delta q_2 = k\Delta h_2 = k\Delta h = \Delta q = \Delta q_1$$

i.e.

$$\Delta q = \Delta q_1 = \Delta q_2 \quad \text{and} \quad \Delta h = \Delta h_1 = \Delta h_2$$

Hence, in a flow net, where all the figures are square, there is the same quantity of unit flow through each figure and there is the same head drop across each figure.

No figure in a flow net can be truly square, but the vast majority of the figures do approximate to squares in that the four corners of the figure are at right angles and the distance between the flow lines, b , equals the distance between the equipotentials, l . As will be seen, a little imagination is sometimes needed when asserting that a certain figure is a square and some figures are definitely triangular in shape, but provided the flow net is drawn with a sensible number of flow channels (generally five or six), the results obtained will be within the range of accuracy possible. The more flow channels that are drawn, the more the figures will approximate to true squares, but the apparent increase in accuracy is misleading and the extra work involved (if drawing by hand) perhaps twelve channels is not worthwhile.

2.10.2 Calculation of seepage quantities

Let

N_d = number of potential drops

N_f = number of flow channels

h = total head loss

q = total quantity of unit flow.

Then

$$\Delta h = \frac{h}{N_d}; \quad \Delta q = \frac{q}{N_f}$$

$$\Delta q = k\Delta h \frac{b}{l} = k\Delta h \quad \left(\text{as } \frac{b}{l} = 1 \right)$$

$$\Rightarrow k \frac{h}{N_d} = \frac{q}{N_f}$$

$$\Rightarrow \text{Total unit flow per unit length } (q) = kh \frac{N_f}{N_d}$$

2.10.3 Drawing a flow net

A soft pencil, a rubber and a pair of dividers or compasses are necessary. The first step is to draw in one flow line, upon the accuracy of which the final correctness of the flow net depends. There are various boundary conditions that help to position this first flow line, including:

- (i) Buried surfaces (e.g. the base of the dam, sheet piling), which are flow lines as water cannot penetrate into such surfaces.

- (ii) The junction between a permeable and an impermeable material, which is also a flow line; for flow net purposes a soil that has a permeability of one-tenth or less the permeability of the other may be regarded as impermeable.
- (iii) The horizontal ground surfaces on each side of the dam, which are equipotential lines.

The procedure is as follows:

- (a) Draw the first flow line and hence establish the first flow channel.
- (b) Divide the first flow channel into squares. At first the use of compasses is necessary to check that in each figure $b = 1$, but after some practice this sketching procedure can be done by eye.
- (c) Project the equipotentials beyond the first flow channel, which gives an indication of the size of the squares in the next flow channel.
- (d) With compasses determine the position of the next flow line; draw this line as a smooth curve and complete the squares in the flow channel formed.
- (e) Project the equipotentials and repeat the procedure until the flow net is completed.

As an example, suppose that it is necessary to draw the flow net for the conditions shown in Fig. 2.9a. The boundary conditions for this problem are shown in Fig. 2.9b, and the sketching procedure for the flow net is illustrated in Figs c, d, e and f of Fig. 2.9.

If the flow net is correct the following conditions will apply:

- (i) Equipotentials will be at right angles to buried surfaces and the surface of the impermeable layer.
- (ii) Beneath the dam the outermost flow line will be parallel to the surface of the impermeable layer.

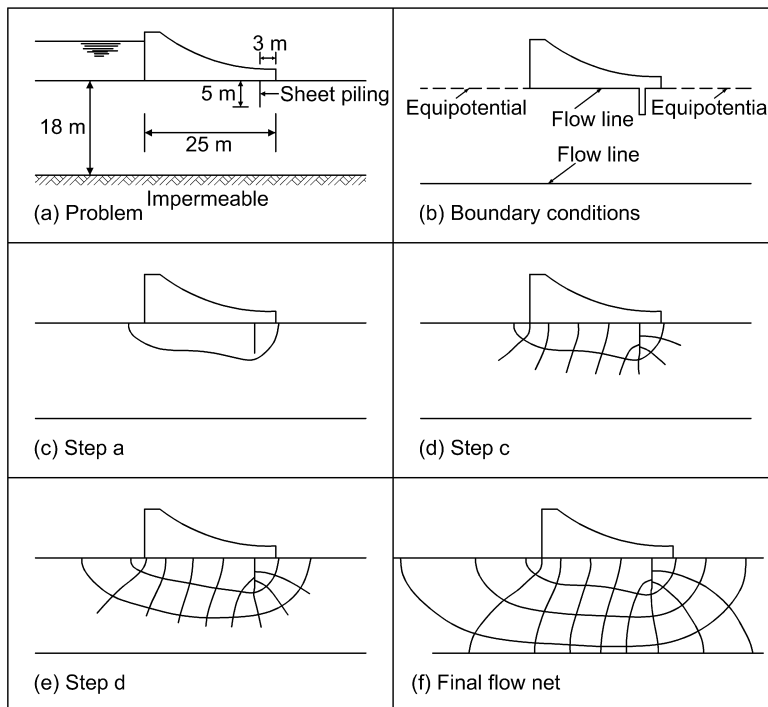


Fig. 2.9 Example of flow net construction.

After completing part of a flow net it is usually possible to tell whether or not the final diagram will be correct. The curvature of the flow lines and the direction of the equipotentials indicate if there is any distortion, which tends to be magnified as more of the flow net is drawn and gives a good indication of what was wrong with the first flow line. This line must now be redrawn in its corrected position and the procedure repeated again, amending the first flow line if necessary, until a satisfactory net is obtained.

Generally the number of flow channels, N_f will not be a whole number, and in these cases an estimate is made as to where the next flow line would be if the impermeable layer was lower. The width of the lowest channel can then be found (in Fig. 2.9f, $N_f = 3.3$).

Note: in flow net problems we assume that the permeability of the soil is uniform throughout the soil's thickness. This is a considerable assumption and we see therefore that refinement in the construction of a flow net is unnecessary, since the difference between a roughly sketched net and an accurate one is small compared with the actual flow pattern in the soil and the theoretical pattern assumed.

Example 2.5: Flow net seepage

Using Fig. 2.9f, determine the loss through seepage under the dam in cubic metres per year if $k = 3 \times 10^{-6}$ m/s and the level of water above the base of the dam is 10m upstream and 2m downstream. The length of the dam perpendicular to the plane of seepage is 300m.

Solution:

From the flow net $N_f = 3.3, N_d = 9$

Total head loss (h) = 10 – 2 = 8 m

$$q/\text{metre length of dam} = kh \frac{N_f}{N_d} = 3 \times 10^{-6} \times 8 \times \frac{3.3}{9}$$

$$= 8.8 \times 10^{-6} \text{ m}^3/\text{s}$$

$$\text{Total seepage loss per year} = 300 \times 8.8 \times 60 \times 60 \times 24 \times 365 \times 10^{-6} \text{ m}^3$$

$$= 83\,000 \text{ m}^3$$

2.11 Critical flow conditions

2.11.1 Critical hydraulic gradient, i_c

Figure 2.10 shows a sample of soil encased in a vessel of cross-sectional area A , with upward flow of water through the soil taking place under a constant head. The total head of water above the sample base = $h + 1$, and the head of water in the sample above the base = 1, therefore the excess hydrostatic pressure acting on the base of the sample = $\gamma_w h$.

If any friction between the soil and the side of the container is ignored, then the soil is on the point of being washed out when the downward forces equal the upward forces:

Downward forces = Buoyant unit weight \times Volume

$$= \gamma_w \frac{G_s - 1}{1 + e} A l$$

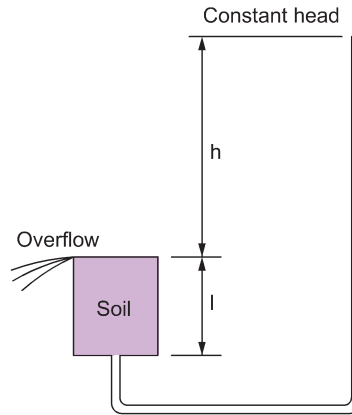


Fig. 2.10 Upward flow through a soil sample.

$$\text{Upward forces} = h\gamma_w A$$

i.e.

$$h\gamma_w A = \gamma_w \frac{G_s - 1}{1 + e} A l$$

or when

$$\frac{h}{l} = \frac{G_s - 1}{1 + e} = i_c$$

This particular value of hydraulic gradient is known as the critical hydraulic gradient and has an average value of about unity for most soils. It makes a material a quicksand, which is not a type of soil but a flow condition within the soil. Generally quicksand conditions occur in fine sands when the upward flow conditions achieve this state, but there is no theoretical reason why they should not occur in gravels (or any granular material) provided that the quantity of flow and the head are large enough. Other terms used to describe this condition are 'piping' or 'boiling', but piping will not occur in fine silts and clays due to cohesive forces holding the particles together; instead there can be a heave of a large mass of soil if the upward forces are large enough.

2.11.2 Seepage forces

Whenever water flows through a soil a seepage force is exerted (as in quicksands). In Fig. 2.10 the excess head h is used up in forcing water through the soil voids over a length of l ; this head dissipation is caused by friction and, because of the energy loss, a drag or force is exerted in the direction of flow.

The upward force $h\gamma_w A$ represents the seepage force, and in the case of uniform flow conditions it can be assumed to spread uniformly throughout the volume of the soil:

$$\frac{\text{Seepage force}}{\text{Unit volume of soil}} = \frac{h\gamma_w A}{Al} = i\gamma_w$$

This means that in an isotropic soil, the seepage force acts in the direction of flow and has a magnitude $= i\gamma_w$ per unit volume.

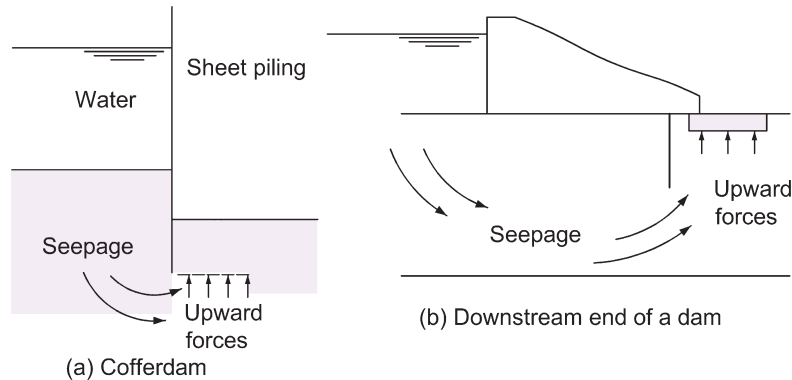


Fig. 2.11 Examples where piping can occur.

2.11.3 Alleviation of piping

The risk of piping can occur in several circumstances, such as a cofferdam (Fig. 2.11a) or the downstream end of a dam (Fig. 2.11b).

In order to increase the factor of safety against piping in these cases, two methods can be adopted. The first procedure involves increasing the depth of pile penetration in Fig. 2.11a and inserting a sheet pile at the heel of the dam in Fig. 2.11b; in either case there is an increase in the length of the flow path for the water with a resulting drop in the excess pressure at the critical section. A similar effect is achieved by laying down a blanket of impermeable material for some length along the upstream ground surface (Fig. 2.11b).

The second procedure is to place a surcharge on the ground surface of the downstream side, the weight of which increases the downward forces, or to install a drainage system (e.g. perforated pipe protected by a filter) at the downstream side.

2.12 Design of soil filters

As seen above, water seeping out of the soil can lead to piping and therefore drainage should be provided in such situations to ensure ground stability. To prevent soil particles being washed into the drainage system, soil filters can be provided as the interface between base material and drain. The design procedure for a filter is largely empirical, but it must comprise granular material fine enough to prevent soil particles being washed through it and yet coarse enough to allow the passage of water.

The following formulae are used in the specification of the filter material, based initially on the work of Terzaghi and developed through the experimental research of Sherard *et al.* (1984a, 1984b):

$$D_{15} \text{ filter} > 5 \times D_{15} \text{ of base material}$$

$$D_{15} \text{ filter} < 5 \times D_{85} \text{ of base material}$$

The first equation ensures that the filter layer has a permeability several times higher than that of the soil it is designed to protect. The requirement of the second equation is to prevent piping within the filter. The ratio $D_{15}(\text{filter})/D_{85}(\text{base})$ is known as the *piping ratio*.

The required thickness of a filter layer depends upon the flow conditions and can be estimated with the use of Darcy's law of flow. The filter material should be well graded, with a grading curve more or less parallel to the soil. All material should pass the 75 mm size sieve and not more than 5% should pass the 0.063 mm size sieve. (See Example 2.7 and Fig. 2.13).

Protective filters are usually constructed in layers, each of which is coarser than the one below it, and for this reason they are often referred to as reversed filters. Even when there is no risk of piping, filters are often used to prevent erosion of foundation materials and they are extremely important in earth dams.

Example 2.6: Buoyant uplift

An 8 m thick layer of silty clay is overlying a gravel stratum containing water under artesian pressure. A stand pipe was inserted into the gravel and water rose up the pipe to reach a level of 2 m above the top of the clay (Fig. 2.12).

The clay has a particle specific gravity of 2.7 and a natural water content of 30%. The permeability of the silty clay is 3.0×10^{-8} m/s.

It is proposed to excavate 2 m into the soil in order to insert a wide foundation which, when constructed, will exert a uniform pressure of 100 kPa on to its supporting soil.

Determine: (a) the unit rate of flow of water through the silty clay in m^3 per year before the work commences; (b) how safe the foundation will be against heaving (i) at end of excavation (ii) after construction of the foundation.

Solution:

- (a) Assume that GWL occurs at top of clay.

Head of water in clay = 8 m

Head of water in gravel = 10 m

\Rightarrow Head of water lost in clay = 2 m

$q = Aki$

Consider a unit area of 1 m^2 then:

$$\begin{aligned} q &= 1 \times 3 \times 10^{-8} \times \frac{2}{8} \\ &= 7.5 \times 10^{-9} \text{ m}^3/\text{s} \\ &= 7.5 \times 10^{-9} \times 60 \times 60 \times 24 \times 365 \\ &= 0.237 \text{ m}^3/\text{year per m}^2 \text{ of surface area} \end{aligned}$$

- (b) (i) $e = wG_s = 0.3 \times 2.7 = 0.81$

$$\begin{aligned} \gamma_{\text{sat}} &= \gamma_w \frac{G_s + e}{1 + e} = 9.81 \frac{3.51}{1.81} \\ &= 19.0 \text{ kN/m}^3 \end{aligned}$$

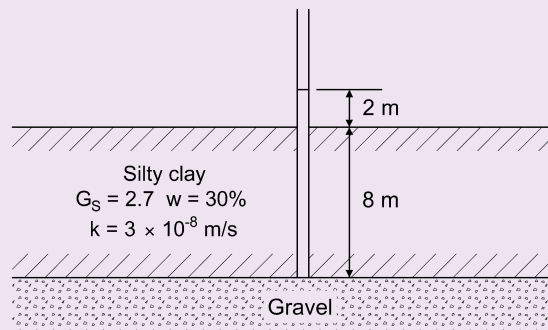


Fig. 2.12 Example 2.6.

Height of clay left above gravel after excavation = $8 - 2 = 6$ m
 Upward pressure from water on base of clay = $10 \times 9.81 = 98.1$ kPa
 Downward pressure of clay = $6 \times 19 = 114$ kPa

It is clear that the downward pressure exceeds the upward pressure and thus, on the face of it, the foundation will not be lifted by the buoyant effect of the upward-acting water pressure, i.e. it is safe. We can quantify how 'safe' the foundation is against buoyancy by introducing the term *factor of safety*, F :

$$\text{Factor of safety, } F = \frac{\text{Downward pressure}}{\text{Upward pressure}} = \frac{114}{98.1} = 1.16$$

(b) (ii) Downward pressure after construction = $114 + 100 = 214$ kPa

$$\text{Factor of safety, } F = \frac{214}{98.1} = 2.18$$

i.e. the factor of safety against buoyant uplift is higher after construction.

We can also assess the safety against buoyancy using the limit state design approach defined in Eurocode 7 (see Chapter 5). The solution to Example 2.6 when assessed in accordance with Eurocode 7 is available for download.

Units of pressure

The pascal is the stress value of one newton per square metre, 1.0N/m^2 , and is given the symbol Pa. In the example above, pressure has been expressed in kilopascals, kPa. Pressure could have equally been expressed in kN/m^2 as the two terms are synonymous.

$$1.0 \text{ kN/m}^2 = 1.0 \text{ kPa}$$

$$1.0 \text{ MN/m}^2 = 1.0 \text{ MPa}$$

Example 2.7: Filter material limits

Determine the approximate limits for a filter material suitable for the material shown in Fig. 2.13.

Solution:

From the particle size distribution curve:

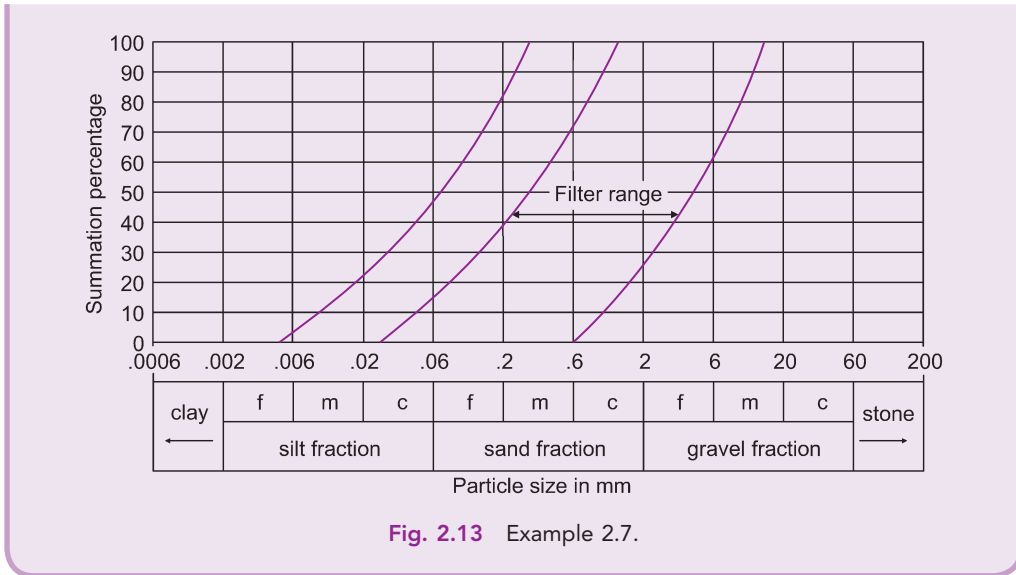
$$D_{15} = 0.01 \text{ mm}; \quad D_{85} = 0.2 \text{ mm}$$

Using Terzaghi's method:

$$\text{Maximum size of } D_{15} \text{ for filter} = 5 \times D_{85} \text{ of base} = 5 \times 0.2 = 1.0 \text{ mm}$$

$$\begin{aligned} \text{Minimum size of } D_{15} \text{ for filter} &= 5 \times D_{15} \text{ of base} = 5 \times 0.01 \\ &= 0.05 \text{ mm} \end{aligned}$$

This method gives two points on the 15% summation line. Two lines can be drawn through these points roughly parallel to the grading curve of the soil, and the space between them is the range of material suitable as a filter (Fig. 2.13).



2.13 Capillarity and unsaturated soils

The behaviour of unsaturated soils is a relatively specialised subject area and readers interested in gaining a good understanding of the topic are referred to the publications by Fredlund, Rahardo and Fredlund (2012) and Ng and Menzies (2007). Simple coverage of some of the key aspects involved are offered in the following sub-sections.

2.13.1 Surface tension

Surface tension is the property of water that permits the surface molecules to carry a tensile force. Water molecules attract each other and, within a mass of water, these forces balance out. At the surface, however, the molecules are only attracted inwards and towards each other, which creates surface tension. Surface tension causes the surface of a body of water to attempt to contract into a minimum area: hence a drop of water is spherical.

The phenomenon is easily understood if we imagine the surface of water to be covered with a thin molecular skin capable of carrying tension. Such a skin, of course, cannot exist on the surface of a liquid, but the analogy can explain surface tension effects without going into the relevant molecular theories.

Surface tension is given the symbol T , and can be defined as the force in Newtons per millimetre length that the water surface can carry. T varies slightly with temperature, but this variation is small and an average value usually taken for the surface tension of water is 0.000 075 N/mm (0.075 N/m).

The fact that surface tension exists can be shown in a simple laboratory experiment in which an open-ended glass capillary tube is placed in a basin of water subjected to atmospheric pressure; the rise of water within the tube is then observed. It is seen that the water wets the glass and the column of water within the tube reaches a definite height above the liquid in the basin.

The surface of the column forms a meniscus such that the curved surface of the liquid is at an angle α to the walls of the tube (Fig. 2.14a). The arrangement of the apparatus is shown in Fig. 2.14b.

The base of the column is at the same level as the water in the basin and, as the system is open, the pressure must be atmospheric. The pressure on the top surface of the column is also atmospheric. There are no externally applied forces that keep the column in position, which shows that there must be a tensile force acting within the surface film of the water.

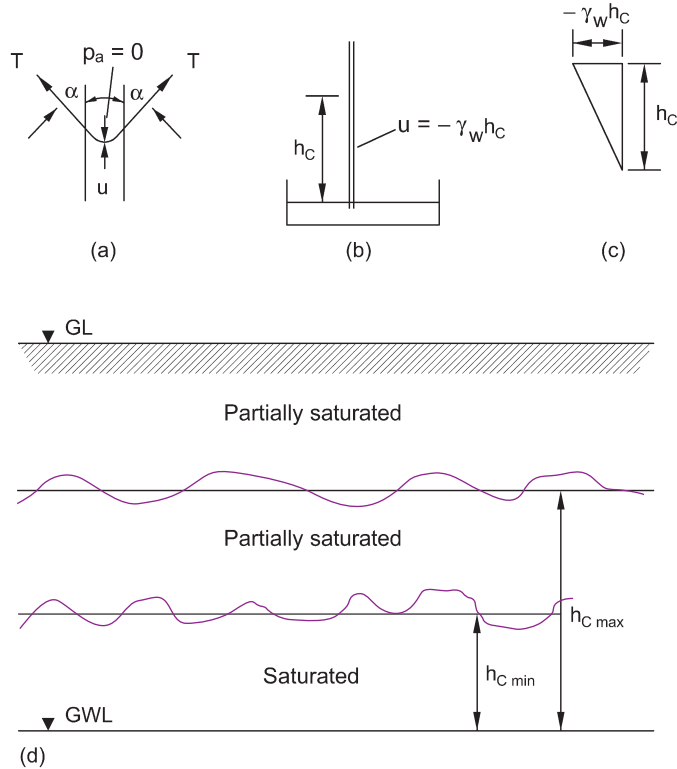


Fig. 2.14 Capillary effects.

Let

Height of water column = h_c

Radius of tube = r

Unit weight of water = γ_w

If we take atmospheric pressure as datum, i.e. the air pressure = 0, we can equate the vertical forces acting at the top of the column:

$$T2\pi r \cos \alpha + u\pi r^2 = 0$$

$$\Rightarrow u = \frac{-2T \cos \alpha}{r}$$

Hence, as expected, we see that u is negative which indicates that the water within the column is in a state of suction. The maximum value of this negative pressure is $\gamma_w h_c$ and occurs at the top of the column. The pressure distribution along the length of the tube is shown in Fig. 2.14c. It is seen that the water pressure gradually increases with loss of elevation to a value of 0 at the base of the column.

An expression for the height h_c can be obtained by substituting $u = -\gamma_w h_c$ in the above expression to yield:

$$h_c = \frac{2T \cos \alpha}{\gamma_w r}$$

From the two expressions we see that the magnitudes of both $-u$ and h_c increase as r decreases.

A further interesting point is that, if we assume that the weight of the capillary tube is negligible, then the only vertical forces acting are the downward weight of the water column supported by the surface tension at the top and the reaction at the base support of the tube. The tube must therefore be in compression. The compressive force acting on the walls of the tube will be constant along the length of the water column and of magnitude $2\pi T \cos \alpha$ (or $\pi r^2 h_c \gamma_w$).

It may be noted that for pure water in contact with clean glass which it wets, the value of angle α is zero. In this case the radius of the meniscus is equal to the radius of the tube and the derived formulae can be simplified by removing the term $\cos \alpha$.

With the use of the expression for h_c we can obtain an estimate of the theoretical capillary rise that will occur in a clay deposit. The average void size in a clay is about $3\mu\text{m}$ and, taking $\alpha = 0$, the formula gives $h_c = 5.0\text{m}$. This possibly explains why the voids exposed when a sample of a clay deposit is split apart are often moist. However, capillary rises of this magnitude seldom occur in practice as the upward velocity of the water flow through a clay in the capillary fringe is extremely small and is often further restricted by adsorbed water films, which considerably reduce the free diameter of the voids.

2.13.2 Capillary effects in soil

The region within which water is drawn above the water table by capillarity is known as the capillary fringe. A soil mass, of course, is not a capillary tube system, but a study of theoretical capillarity enables one to determine a qualitative view of the behaviour of water in the capillary fringe of a soil deposit. Water in this fringe can be regarded as being in a state of negative pressure, i.e. at pressure values below atmospheric. A diagram of a capillary fringe appears in Fig. 2.14d.

The minimum height of the fringe, $h_{c\text{min}}$, is governed by the maximum size of the voids within the soil. Up to this height above the water table the soil will be sufficiently close to full saturation to be considered as such.

The maximum height of the fringe $h_{c\text{max}}$, is governed by the minimum size of the voids. Within the range $h_{c\text{min}}$ to $h_{c\text{max}}$ the soil can be only partially saturated.

Terzaghi and Peck (1948) give an approximate relationship between $h_{c\text{max}}$ and grain size for a granular soil:

$$h_{c\text{max}} = \frac{C}{eD_{10}} \text{ mm}$$

where C is a constant depending upon the shape of the grains and the surface impurities (varying from 10.0 to 50.0 mm^2) and D_{10} is the effective size expressed in millimetres.

Owing to the irregular nature of the conduits in a soil mass it is not possible, even approximately, to calculate water content distributions above the water table from the theory of capillarity. This is a problem of importance in highway engineering and is best approached by the concept of soil suction.

2.13.3 Soil suction

The capacity of a soil above the ground water table to retain water within its structure is related to the prevailing suction and to the soil properties within the whole matrix of the soil, e.g. void and soil particle sizes, amount of held water, etc. For this reason it is often referred to as *matrix* or *matric* suction.

It is generally accepted that the amount of matric suction, s , present in an unsaturated soil is the difference between the values of the air pressure, u_a , and the water pressure, u_w .

$$s = u_a - u_w$$

If u_a is constant, then the variation in the suction value of an unsaturated soil depends upon the value of the pore water pressure within it. This value is itself related to the degree of saturation of the soil.

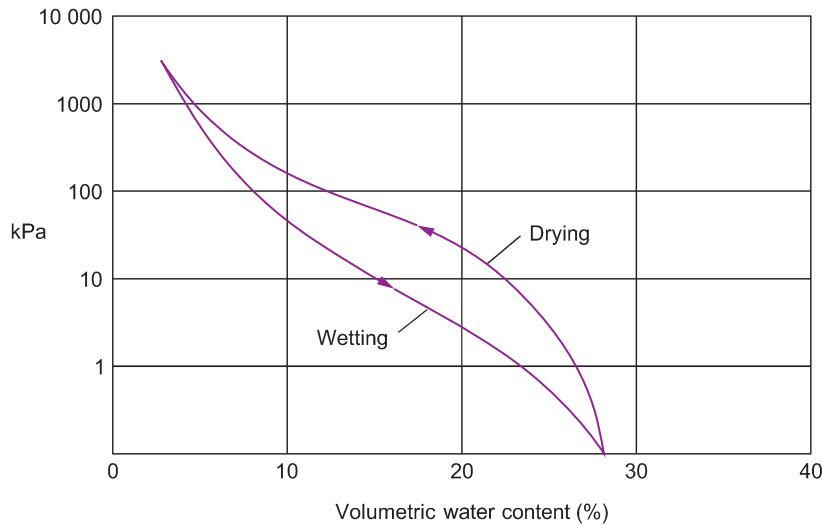


Fig. 2.15 Example wetting and drying water retention curves.

2.13.4 The water retention curve

If a slight suction is applied to a saturated soil, no net outflow of water from the pores is caused. However, as the suction is increased, water starts to flow out of the larger pores within the soil matrix. As the suction is increased further, more water flows from the smaller pores until at some limit, corresponding to a very high suction, only the very narrow pores contain water. Additionally, the thickness of the adsorbed water envelopes around the soil particles reduces as the suction increases. Increasing suction is thus associated with decreasing soil wetness or water content. The amount of water remaining in the soil is a function of the pore sizes and volumes and hence a function of the matric suction. This function can be determined experimentally and may be represented graphically as the *water retention curve*, such as the examples shown in Fig. 2.15.

The amount of water in the pores for a particular value of suction will depend on whether the soil is wetting or drying. This gives rise to the phenomenon known as hysteresis, and the shape of the water retention curve for each process is shown in Fig. 2.15. A full descriptive text on water retention curves and hysteresis is given by Fredlund, Rahardo and Fredlund (2012).

2.13.5 Measurement of soil suction

From a geotechnical point of view there are two components of soil suction as follows:

- (1) *Matric suction*: that part of the water retention energy created by the soil matrix.
- (2) *Osmotic suction*: that part of the water retention energy created by the presence of dissolved salts in the soil water.

It should be noted that these two forms of soil suction are completely independent and have no effect on each other.

The total suction exhibited by a soil is obviously the summation of the matric and the osmotic suctions.

If a soil is granular and free of salt there is no osmotic suction and the matric and total suctions are equal. However, clays contain salts and these salts cause a reduction in the vapour pressure. This results in an increase in the total suction, and this increase is the energy needed to transfer water into the vapour phase (i.e. the osmotic suction).

There are several types of equipment available which can be used to measure soil suction values. Amongst them are psychrometers, porous blocks, filter papers, suction plates, pressure plates and tensiometers, the last being the most popular for *in situ* measurements. A useful survey was prepared by Ridley and Wray (1995).

The psychrometer method

A psychrometer is used to measure humidity and is therefore suitable to measure total soil suction, i.e. the summation of the matric and the osmotic components. The equipment and its operation have been described by Fredlund, Rahardo and Fredlund (2012).

A sample of the soil to be tested is placed in a plastic container. A hole is then drilled to the centre of the specimen, a calibrated psychrometer inserted and the drilled hole backfilled with extra soil material.

The whole unit is finally sealed with plastic sheeting and placed in an air tight container, where it is left for three days with its temperature maintained at 25°C. After this time the soil sample is deemed to have achieved both thermal and vapour pressure equilibrium and relative humidity measurements can be taken.

The filter paper method

With this technique, described by Campbell and Gee (1986), both total and matric suctions can be measured. In a typical test the soil specimen is prepared in a cylindrical plastic container and a dry filter paper disc is placed over its upper surface. (Fig. 2.16). This filter will measure the matric suction.

A perforated glass disc is placed over the filter paper and a further filter paper is then placed over the glass. As this top filter paper is not in actual contact with the soil sample it can only measure the total suction.

The assembled specimen/filter paper is left for at least a month, at a temperature of 25°C, in order to obtain thermal and vapour equilibrium. At the end of this time the assembly is dismantled and the water contents of the specimen and the two filter papers determined. The water contents obtained for the filter papers can be converted into the required suction values by using a suction/water content curve for the filter paper material.

The tensiometer

Stannard (1992) presented a review of the standard tensiometer and covered the relevant theory, its construction and possible uses. The apparatus is mainly used for *in situ* measurements and consists of a porous ceramic cup placed in contact with the soil to be tested.

A borehole is put down to the required depth and the ceramic filter lowered into position. Water is then allowed to exit from a water reservoir within the tensiometer and to enter the soil. The operation continues until the tensile stress holding the water in the tensiometer equals the stress holding the water in the soil (i.e. the total soil suction).

The tensile stress in the water in the tensiometer is measured by a pressure measuring transducer and is taken to be the value of the total soil suction.

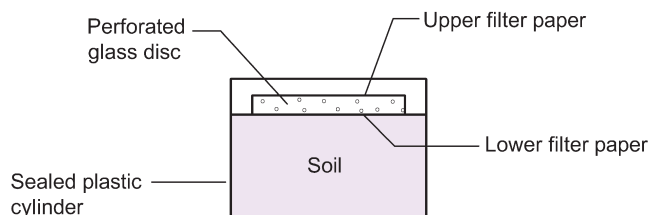


Fig. 2.16 Soil suction measurement – an arrangement for the filter paper method.

The tensiometer must be fully de-aired during installation, as one would expect, if accurate results are to be obtained. The response time of the type of apparatus described is only a few minutes but it has the disadvantage, until recently, that it could only be used to measure suctions up to about 100 kPa.

2.14 Earth dams

2.14.1 Seepage patterns through an earth dam

As the upper flow line is subjected to atmospheric pressure, the boundary conditions are not completely defined and it is consequently difficult to sketch a flow net until this line has been located.

Part of such a flow net is shown in Fig. 2.17. It has already been shown that the hydrostatic head at a point is the summation of velocity, pressure and elevation heads. As the top flow line is at atmospheric pressure the only type of head that can exist along it is elevational, so that between each successive point where an equipotential cuts an upper flow line there must be equal drops in elevation. This is the first of three conditions that must be satisfied by the upper flow line.

The second condition is that, as the upstream face of the dam is an equipotential, the flow line must start at right angles to it (see Fig. 2.18a), but an exception to this rule is illustrated in Fig. 2.18b where the coarse material is so permeable that the resistance to flow is negligible and the upstream equipotential is, in effect, the downstream face of the coarse material. The top flow line cannot be normal to this surface as water with elevation head only cannot flow upwards, so that in this case the flow line starts horizontally.

The third condition concerns the downstream end of the flow line where the water tends to follow the direction of gravity and the flow line either exits at a tangent to the downstream face of the dam (Fig. 2.19a) or, if a filter of coarse material is inserted, takes up a vertical direction in its exit into the filter (Fig. 2.19b).

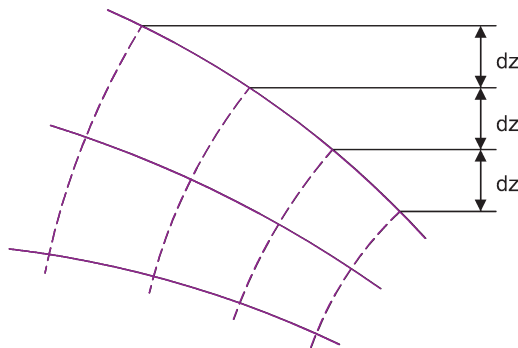


Fig. 2.17 Part of a flow net for an earth dam.

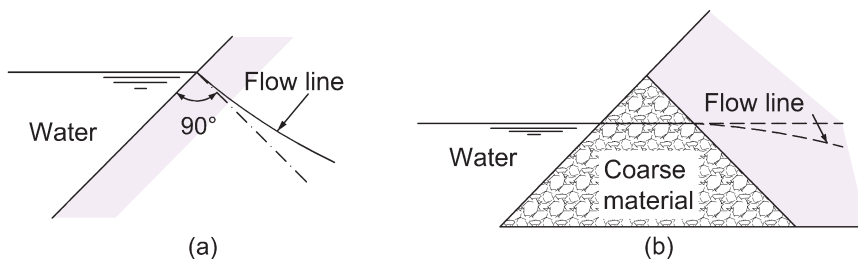


Fig. 2.18 Conditions at the start of an upper flow line.

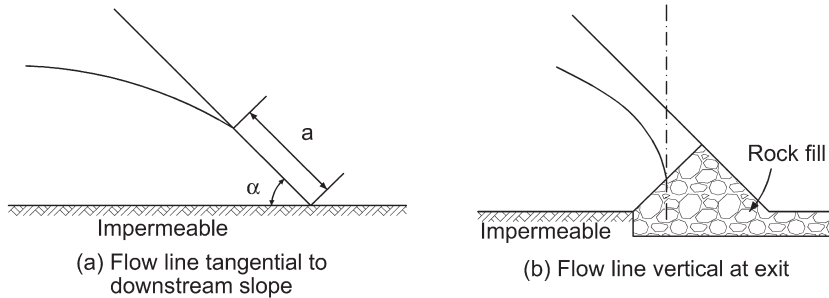


Fig. 2.19 Conditions at the downstream end of an upper flow line.

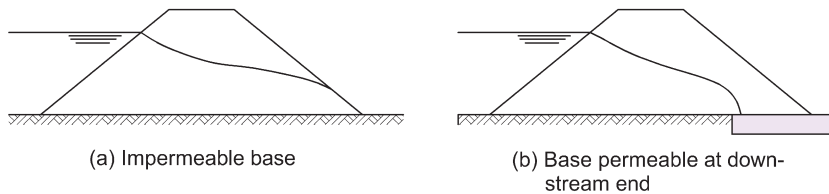


Fig. 2.20 Types of seepage through an earth dam.

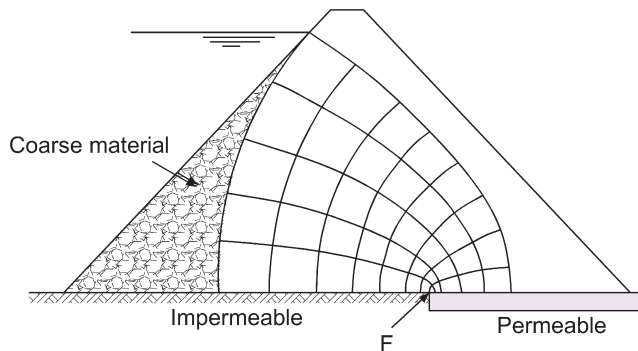


Fig. 2.21 Flow net for a theoretical earth dam.

2.14.2 Types of flow occurring in an earth dam

From Fig. 2.19 it is seen that an earth dam may be subjected to two types of seepage: when the dam rests on an impermeable base the discharge must occur on the surface of the downstream slope (the upper flow line for this case is shown in Fig. 2.20a), whereas when the dam sits on a base that is permeable at its downstream end the discharge will occur within the dam (Fig. 2.20b). This is known as the underdrainage case. From a stability point of view underdrainage is more satisfactory since there is less chance of erosion at the downstream face and the slope can therefore be steeper but, on the other hand, seepage loss is smaller in dams resting on impermeable bases.

2.14.3 Parabolic solutions for seepage through an earth dam

In Fig. 2.21 is shown the cross-section of a theoretical earth dam, the flow net of which consists of two sets of parabolas. The flow lines all have the same focus, F , as do the equipotential lines. Apart from the

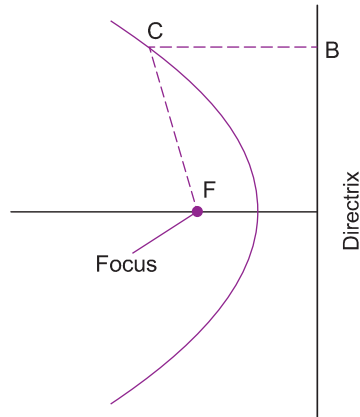


Fig. 2.22 The parabola.

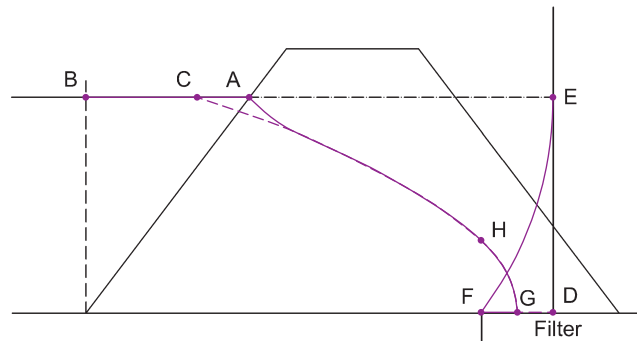
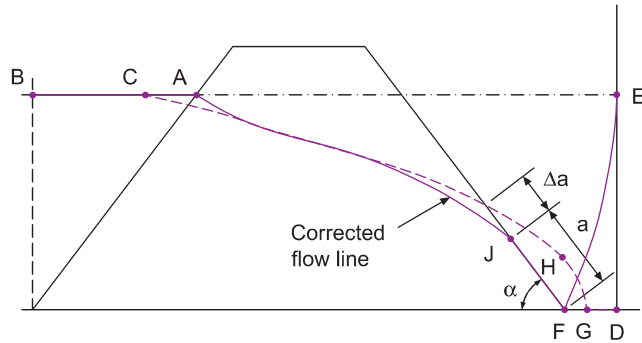


Fig. 2.23 Determination of upper flow line.

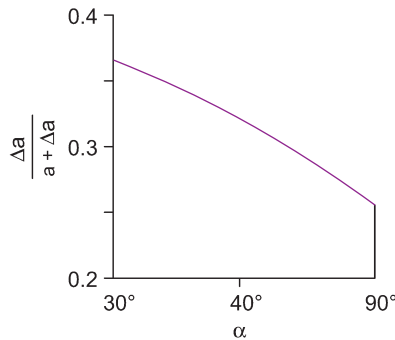
upstream end, actual dams do not differ substantially from this imaginary example, so that the flow net for the middle and downstream portions of the dam are similar to the theoretical parabolas (a parabola is a curve, such that any point along it is equidistant from both a fixed point, called the focus, and a fixed straight line, called the directrix). In Fig. 2.22, $FC = CB$.)

The graphical method for determining the phreatic surface in an earth dam was evolved by Casagrande (1937) and involves the drawing of an actual parabola and then the correction of the upstream end. Casagrande showed that this parabola should start at the point C of Fig. 2.23 (which depicts a cross-section of a typical earth dam) where $AC \approx 0.3AB$ (the focus, F, is the upstream edge of the filter). To determine the directrix, draw, with compasses, the arc of the circle as shown, using centre C and radius CF; the vertical tangent to this arc is the directrix, DE. The parabola passing through C, with focus F and directrix DE, can now be constructed. Two points that are easy to establish are G and H, as $FG = GD$ and $FH = FD$; other points can quickly be obtained using compasses. Having completed the parabola a correction is made as shown to its upstream end so that the flow line actually starts from A.

This graphical solution is only applicable to a dam resting on a permeable material. When the dam is sitting on impermeable soil the phreatic surface cuts the downstream slope at a distance (a) up the slope from the toe (Fig. 2.19a). The focus, F, is the toe of the dam, and the procedure is now to establish point C as before and draw the theoretical parabola (Fig. 2.24a). This theoretical parabola will actually cut the downstream face at a distance Δa above the actual phreatic surface; Casagrande established a



(a) Construction for upper flow line



(b) Relationship between a and Δa (after Casagrande)

Fig. 2.24 Dam resting on an impermeable soil.

relationship between a and Δa in terms of α , the angle of the downstream slope (Fig. 2.24b). In Fig. 2.24 the point J can thus be established and the corrected flow line sketched in as shown.

2.15 Seepage through non-uniform soil deposits

2.15.1 Stratification in compacted soils

Most loosely tipped deposits are probably isotropic, i.e. the value of permeability in the horizontal direction is the same as in the vertical direction. Present practice is to construct most embankments, spoil heaps and dams by spreading the soil in loose layers which are then compacted. This construction technique results in a greater value of permeability in the horizontal direction, k_x , than that in the vertical direction (the anisotropic condition). The value of k_z is usually 1/5 to 1/10 the value of k_x .

The general differential equation for flow was derived earlier in this chapter:

$$k_x \frac{\partial^2 h}{\partial x^2} + k_y \frac{\partial^2 h}{\partial y^2} + k_z \frac{\partial^2 h}{\partial z^2} = 0$$

For the two dimensional, i.e. anisotropic, case the equation becomes:

$$k_x \frac{\partial^2 h}{\partial x^2} + k_z \frac{\partial^2 h}{\partial z^2} = 0$$

Unless k_x is equal to k_z the equation is not a true Laplacian and cannot therefore be solved by a flow net.

To obtain a graphical solution the equation must be written in the form:

$$\frac{k_x}{k_z} \frac{\partial^2 h}{\partial z^2} + \frac{\partial^2 h}{\partial x_t^2} = 0$$

or

$$\frac{\partial^2 h}{\partial x_t^2} + \frac{\partial^2 h}{\partial z^2} = 0$$

where

$$\frac{1}{x_t^2} = \frac{k_x}{k_z} \cdot \frac{1}{x^2}$$

or

$$x_t^2 = x^2 \frac{k_z}{k_x}$$

i.e.

$$x_t = x \sqrt{\frac{k_z}{k_x}}$$

This equation is Laplacian and involves the two co-ordinate variables x_t and z . It can be solved by a flow net provided that the net is drawn to a vertical scale of z and a horizontal scale of

$$x_t = z \sqrt{\frac{k_z}{k_x}}$$

2.15.2 Calculation of seepage quantities in an anisotropic soil

This is exactly as before:

$$q = kh \frac{N_f}{N_d}$$

and the only problem is what value to use for k .

Using the transformed scale a square flow net is drawn and N_f and N_d obtained. If we consider a 'square' in the transformed flow net it will appear as shown in Fig. 2.25a. The same figure, drawn to natural scales (i.e. scale $x =$ scale z), will appear as shown in Fig. 2.25b.

Let k' be the effective permeability for the anisotropic condition. Then k' is the operative permeability in Fig. 2.25a.

Hence, in Fig. 2.25a:

$$\text{Flow} = ak' \frac{\Delta h}{a} = k' \Delta h$$

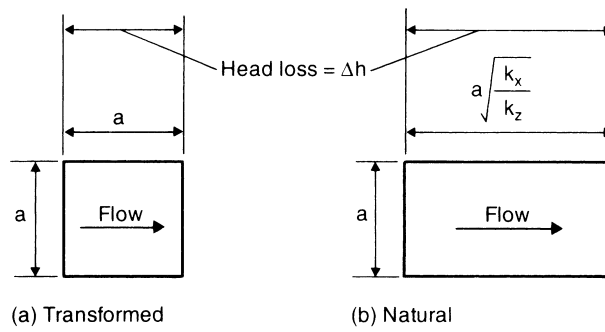


Fig. 2.25 Transformed and natural 'squares'.

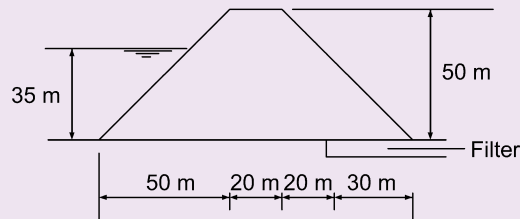
and, in Fig. 2.25b:

$$\text{Flow} = ak_x \frac{\Delta h}{a \cdot \sqrt{\frac{k_x}{k_z}}} = \sqrt{k_x k_z} \Delta h$$

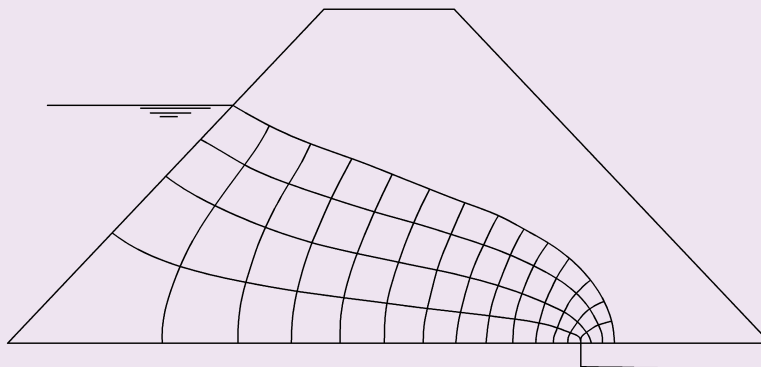
i.e. the effective permeability, $k' = \sqrt{k_x k_z}$.

Example 2.8: Seepage loss through dam (i)

The cross-section of an earth dam is shown in Fig. 2.26a. Assuming that the water level remains constant at 35m, determine the seepage loss through the dam. The width of the dam is 300m, and the soil is isotropic with $k = 5.8 \times 10^{-7}$ m/s.



(a) The problem



(b) Flow net

Fig. 2.26 Example 2.8.

Solution:

The flow net is shown in Fig. 2.26b, from it $N_f = 4.0$ and $N_d = 14$.

$$\begin{aligned} q/\text{metre width of dam} &= 5.8 \times 35 \times \frac{4.0}{14} \times 60 \times 60 \times 24 \times 10^{-7} \\ &= 5.0 \times 10^{-1} \text{ m}^3/\text{day} \end{aligned}$$

$$\begin{aligned} \text{Total seepage loss per day} &= 300 \times 5.0 \times 10^{-1} \\ &= 150 \text{ m}^3/\text{day} \end{aligned}$$

Example 2.9: Seepage loss through dam (ii)

A dam has the same details as in Example 2.8 except that the soil is anisotropic with $k_x = 5.8 \times 10^{-7}$ m/s and $k_z = 2.3 \times 10^{-7}$ m/s.

Determine the seepage loss through the dam.

Solution:

$$\begin{aligned} \text{Transformed scale for x direction } x_t &= x \sqrt{\frac{k_z}{k_x}} \\ &= x \sqrt{\frac{2.3}{5.8}} \\ &= 0.63x \end{aligned}$$

This means that, if the vertical scale is 1:500, then the horizontal scale is 0.63:500 or 1:794.

The flow net is shown in Fig. 2.27.

From the flow net, $N_f = 5.0$ and $N_d = 14$.

$$k' = \sqrt{k_x k_z} = \sqrt{5.8 \times 2.3 \times 10^{-7}} = 3.65 \times 10^{-7} \text{ m/s}$$

$$\begin{aligned} \text{Total seepage loss} &= 300 \times 3.65 \times 35 \times \frac{5.0}{14} \times 60 \times 60 \times 24 \times 10^{-7} \\ &= 118 \text{ m}^3/\text{day} \end{aligned}$$

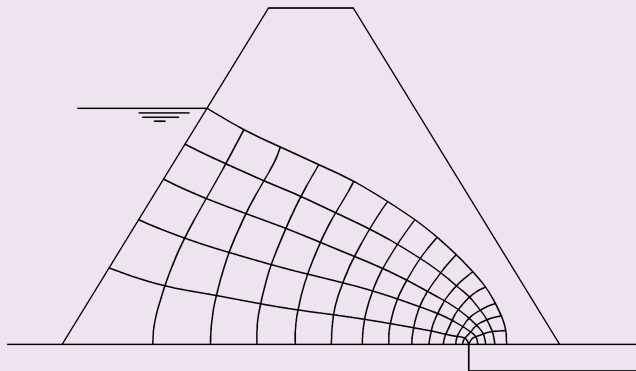


Fig. 2.27 Example 2.9.

Example 2.10: Seepage loss through dam (iii)

A dam has the same details as in Example 2.8, except that there is no filter drain at the toe.

Solution:

The flow net is shown in Fig. 2.28, from it $N_f = 4.0$ and $N_d = 18$ (average). From the flow net it is also seen that $a + \Delta a = 22.4$ m. Now $\alpha = 45^\circ$, and hence (according to Casagrande):

$$\frac{\Delta a}{a + \Delta a} = 0.34 \text{ (taken from Fig. 2.24b).}$$

Hence $\Delta a = 7.6$ m.

$$\begin{aligned} \text{Total seepage loss} &= 300 \times 5.8 \times \frac{4}{18} \times 35 \times 60 \times 60 \times 24 \times 10^{-7} \\ &= 117 \text{ m}^3/\text{day} \end{aligned}$$

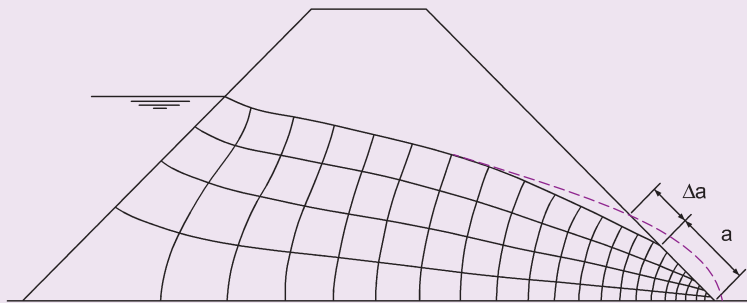


Fig. 2.28 Example 2.10.

2.15.3 Permeability of sedimentary deposits

A sedimentary deposit may consist of several different soils and it is often necessary to determine the average values of permeability in two directions, one parallel to the bedding planes and the other at right angles to them.

Let there be n layers of thicknesses $H_1, H_2, H_3, \dots, H_n$.

Let the total thickness of the layers be H .

Let $k_1, k_2, k_3, \dots, k_n$ be the respective coefficients of permeability for each individual layer.

Let the average permeability for the whole deposit be k_x for flow parallel to the bedding planes and k_z for flow perpendicular to this direction.

Consider flow parallel to the bedding planes:

$$\text{Total flow} = q = Ak_x i$$

where A = total area and i = hydraulic gradient.

This total flow must equal the sum of the flow through each layer, therefore:

$$Ak_x i = A_1 k_1 i + A_2 k_2 i + A_3 k_3 i + \dots + A_n k_n i$$

Considering unit width of soil:

$$Hk_x i = i(H_1 k_1 + H_2 k_2 + H_3 k_3 + \dots + H_n k_n)$$

hence

$$k_x = \frac{H_1 k_1 + H_2 k_2 + H_3 k_3 + \dots + H_n k_n}{H}$$

Considering flow perpendicular to the bedding planes:

$$\text{Total flow} = q = Ak_z i = Ak_1 i_1 = Ak_2 i_2 = Ak_3 i_3 = Ak_n i_n$$

Considering unit area:

$$q = k_z i = k_1 i_1 = k_2 i_2 = k_3 i_3 = k_n i_n$$

Now

$$k_z i = k_z \frac{(h_1 + h_2 + h_3 + \dots + h_n)}{H}$$

where h_1, h_2, h_3, \dots , are the respective head losses across each layer.

Now

$$\frac{k_1 h_1}{H_1} = q; \quad \frac{k_2 h_2}{H_2} = q; \quad \frac{k_3 h_3}{H_3} = q; \quad \frac{k_n h_n}{H_n} = q$$

$$\Rightarrow h_1 = \frac{qH_1}{k_1}; \quad h_2 = \frac{qH_2}{k_2}; \quad h_3 = \frac{qH_3}{k_3}; \quad h_n = \frac{qH_n}{k_n}$$

$$\Rightarrow \frac{k_z \left(\frac{qH_1}{k_1} + \frac{qH_2}{k_2} + \frac{qH_3}{k_3} + \dots + \frac{qH_n}{k_n} \right)}{H} = q$$

hence

$$k_z = \frac{H}{\frac{H_1}{k_1} + \frac{H_2}{k_2} + \frac{H_3}{k_3} + \dots + \frac{H_n}{k_n}}$$

Example 2.11: Quantity of flow

A three-layered soil system consisting of fine sand, coarse silt, and fine silt in horizontal layers is shown in Fig. 2.29.

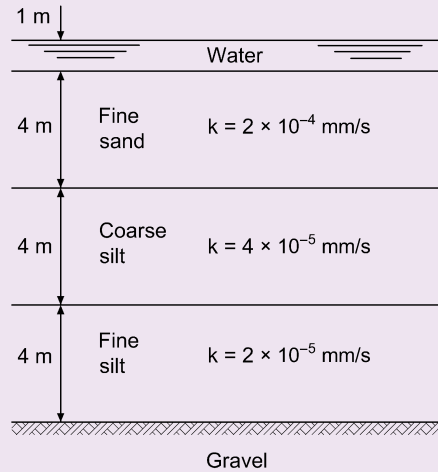


Fig. 2.29 Example 2.11.

Beneath the fine silt layer there is a stratum of water-bearing gravel with a water pressure of 155 kPa. The surface of the sand is flooded with water to a depth of 1 m.

Determine the quantity of flow per unit area in mm^3/s , and the excess hydrostatic heads at the sand/coarse silt and the coarse silt/fine silt interfaces.

Solution:

$$k_z = \frac{12}{\frac{4}{2.0 \times 10^{-4}} + \frac{4}{4.0 \times 10^{-5}} + \frac{4}{2.0 \times 10^{-5}}} = 3.75 \times 10^{-5} \text{ mm/s}$$

Taking the top of the gravel as datum:

Head of water due to artesian pressure = 15.5 m

Head of water due to groundwater = $3 \times 4 + 1 = 13 \text{ m}$

Therefore excess head causing flow = $15.5 - 13 = 2.5 \text{ m}$.

$$\text{Flow} = q = Aki = 3.75 \times \frac{2.5}{12} \times 10^{-5} = 7.8 \times 10^{-6} \text{ mm}^3/\text{s}$$

This quantity of flow is the same through each layer.

Excess head loss through fine silt:

$$\text{Flow} = 7.8 \times 10^{-6} = 2.0 \times 10^{-5} \times \frac{h}{4}$$

Therefore

$$h = \frac{31.2 \times 10^{-6}}{2 \times 10^{-5}} = 1.56 \text{ m}$$

Excess head loss through coarse silt:

$$h = \frac{7.8 \times 10^{-6} \times 4}{4 \times 10^{-5}} = 0.78 \text{ m}$$

Excess head loss through fine sand:

$$h = \frac{7.8 \times 10^{-6} \times 4}{2 \times 10^{-4}} = 0.16 \text{ m}$$

Excess head at interface between fine and coarse silt

$$= 2.5 - 1.56 = 0.94 \text{ m}$$

Excess head at interface between fine sand and coarse silt

$$= 0.94 - 0.78 = 0.16 \text{ m}$$

2.15.4 Seepage through soils of different permeability

When water seeps from a soil of permeability k_1 into a soil of permeability k_2 the principle of the square flow net is no longer valid. If we consider a flow net in which the head drop across each figure, Δh , is a constant then, as has been shown, the flow through each figure is given by the expression:

$$\Delta q = k \Delta h \frac{b}{l}$$

If Δq is to remain the same when k is varied, then b/l must also vary. As an illustration of this effect consider the case of two soils with $k_1 = k_2/3$.

Then

$$\Delta q = k_1 \Delta h \frac{b_1}{l_1}$$

and

$$\Delta q = k_2 \Delta h \frac{b_2}{l_2} = 3k_1 \Delta h \frac{b_2}{l_2}$$

i.e.

$$\frac{b_1}{l_1} = 3 \frac{b_2}{l_2}$$

If the portion of the flow net in the soil of permeability k_1 is square, then:

$$\frac{b_2}{l_2} = \frac{1}{3} \quad \text{or} \quad \frac{b_2}{l_2} = \frac{k_1}{k_2}$$

The effect on a flow net is illustrated in Fig. 2.30.

2.15.5 Refraction of flow lines at interfaces

An interface is the surface or boundary between two soils. If the flow lines across an interface are normal to it, then there will be no refraction and the flow net appears as shown in Fig. 2.30. When the flow lines meet the interface at some acute angle to the normal, then the lines are bent as they pass into the second soil.

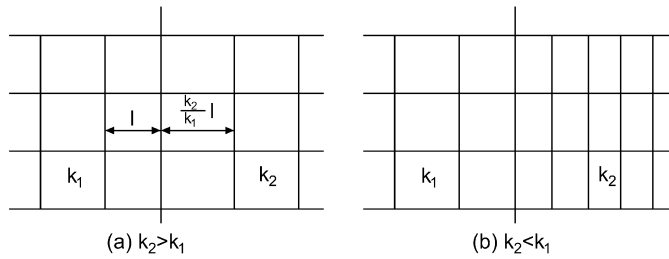


Fig. 2.30 Effect of variation of permeability on a flow net.

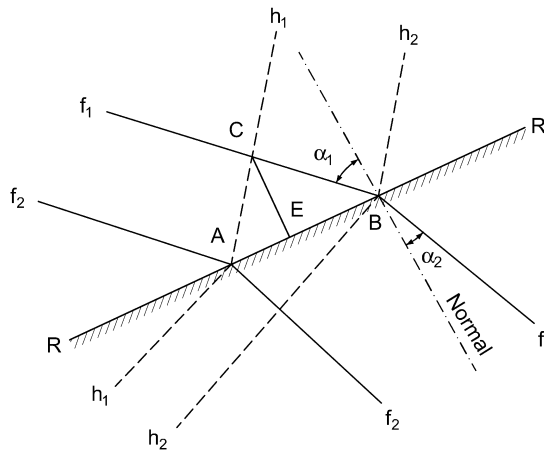


Fig. 2.31 Flow across an interface when the flow lines are at an angle to it.

In Fig. 2.31 let RR be the interface of two soils of permeabilities, k_1 and k_2 . Consider two flow lines, f_1 and f_2 , making angles to the normal of α_1 and α_2 in soils 1 and 2 respectively.

Let f_1 cut RR in B and f_2 cut RR in A.

Let h_1 and h_2 be the equipotentials passing through A and B respectively and let the head drop between them be Δh .

With uniform flow conditions the flow into the interface will equal the flow out. Consider flow normal to the interface.

In soil (1):

$$\text{Normal component of hydraulic gradient} = \frac{\text{head drop along CE}}{CE}$$

$$\text{Head drop from A to E} = \Delta h \frac{AE}{CE} = \text{Head drop from C to E}$$

$$\Rightarrow q_1 = ABk_1 \frac{\Delta h}{CE} \frac{AE}{AB} = k_1 \Delta h \frac{AE}{CE} = \frac{k_1 \Delta h}{\tan \alpha_1}$$

Similarly it can be shown that, in soil (2):

$$q_2 = \frac{k_2 \Delta h}{\tan \alpha_2}$$

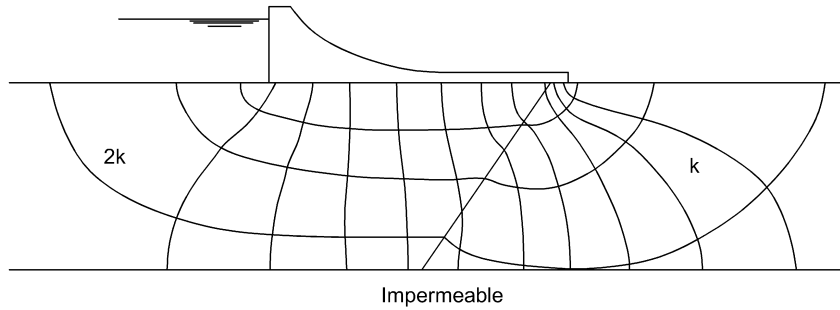


Fig. 2.32 Flow net for seepage through two soils of different permeabilities.

Now $q_1 = q_2$,

$$\Rightarrow \frac{k_1}{k_2} = \frac{\tan \alpha_1}{\tan \alpha_2}$$

A flow net which illustrates the effect is illustrated in Fig. 2.32.



Exercises

Exercise 2.1

In a falling head permeameter test on a fine sand the sample had a diameter of 76 mm and a length of 152 mm with a stand pipe of 12.7 mm diameter. A stopwatch was started when h was 508 mm and read 19.6 s when h was 254 mm; the test was repeated for a drop from 254 mm to 127 mm and the time was 19.4 s.

Determine an average value for k in m/s.

Answer 1.5×10^{-4} m/s

Exercise 2.2

A sample of coarse sand 150 mm high and 55 mm in diameter was tested in a constant head permeameter. Water percolated through the soil under a head of 400 mm for 6.0 s and the discharge water had a mass of 400 g.

Determine k in m/s.

Answer 1.05×10^{-2} m/s

Exercise 2.3

In order to determine the average permeability of a bed of sand 12.5 m thick overlying an impermeable stratum, a well was sunk through the sand and a pumping test carried out. After some time the discharge was 850 kg/min and the drawdowns in observation wells 15.2 m and 30.4 m from the pump were 1.625 m and 1.360 m respectively. If the original water table was at a depth of 1.95 m below ground level, find the permeability of the sand (in m/s) and an approximate value for the effective grain size.

Answer $k = 6.7 \times 10^{-4}$ m/s, $D_{10} \approx 0.26$ mm

Exercise 2.4

A cylinder of cross-sectional area 2500mm^2 is filled with sand of permeability 5.0mm/s . Water is caused to flow through sand under a constant head using the arrangement shown in Fig. 2.33.

Determine the quantity of water discharged in 10 min.

Answer $9 \times 10^6\text{mm}^3$

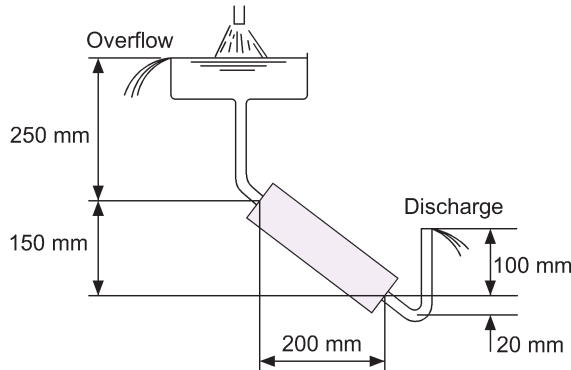


Fig. 2.33 Exercise 2.4.

Exercise 2.5

The specific gravity of particles of a sand is 2.54 and their porosity is 45% in the loose state and 37% in the dense state. What are the critical hydraulic gradients for these two states?

Answer 0.85, 0.97

Exercise 2.6

A large open excavation was made into a stratum of clay with a saturated unit weight of 17.6kN/m^3 . When the depth of the excavation reached 7.63m the bottom rose, gradually cracked, and was flooded from below with a mixture of sand and water; subsequent borings showed that the clay was underlain by a bed of sand with its surface at a depth of 11.3m.

Compute the elevation to which water would have risen from the sand into a drill hole before excavation was started.

Answer 6.45m above top of sand

Exercise 2.7

A soil deposit consists of three horizontal layers of soil: an upper stratum A (1 m thick), a middle stratum B (2 m thick) and a lower stratum C (3 m thick). Permeability tests gave the following values:

Soil A $3 \times 10^{-1}\text{mm/s}$

Soil B $2 \times 10^{-1}\text{mm/s}$

Soil C $1 \times 10^{-1}\text{mm/s}$

Determine the ratio of the average permeabilities in the horizontal and vertical directions.

Answer 1.22

Beneath the deposit there is a gravel layer subjected to artesian pressure, the surface of the deposit coinciding with the groundwater level. Standpipes show that the fall in head across soil A is 150 mm. Determine the value of the water pressure in the gravel.

Answer 80 kPa

Chapter 3

Total and Effective Stress

3.1 State of stress in a soil mass

3.1.1 Stress–strain relationships

Before commencing a study of the material in this chapter it is best to become familiar with the main terms used to describe the stress–strain relationships of a material. It is useful to begin by examining a typical stress–strain plot obtained for a metal (Fig. 3.1a).

Results such as those indicated in the figure would normally be obtained by subjecting a specimen of the metal to a tensile test and plotting the values of tensile strain against the nominal values of tensile stress, as the stress–strain relationship obtained is equally applicable in tension or compression in the case of a metal.

Note: Nominal stress = actual load/original cross-sectional area of specimen, i.e. no allowance is made for reduction in area, due to necking, as the load is increased.

From the plot it is seen that in the early stages of loading, up to point B, the stress is proportional to the strain. Unloading tests can also demonstrate that, up to the point A, the metal is elastic in that it will return to its original dimensions if the load is removed. The limiting stress at which elasticity effects are not quite complete, is known as the elastic limit, represented by point A. The limiting stress at which linearity between stress and strain ceases is known as the limit of proportionality, point B.

In most metals points A and B occur so close together that they are generally assumed to coincide, i.e. elastic limit is assumed equal to the limit of proportionality.

Point C in Fig. 3.1a represents the yield point, i.e. the stress value at which there is a sudden drop of load, as illustrated, or the stress value at which there is a continuing extension with no further significant increase in load.

Figure 3.1a can be approximated to Fig. 3.1b which represents the ideal elastic–plastic material. In this diagram, point 1 represents the limit of elasticity and proportionality and the point at which plastic behaviour occurs. The form of the compressive stress–strain relationships typical for all types of soil up to their peak values is as shown in Fig. 3.1c.

It is seen that the stress–strain relationship of a soil is never linear and, in order to obtain solutions, the designer is forced either to assume the idealised conditions of Fig. 3.1b or to solve a particular problem directly from the results of tests that subject samples of the soil to conditions that closely resemble those that are expected to apply *in situ*.

In most soil problems the induced stresses are either low enough to be well below the yield stress of the soil and it can be assumed that the soil will behave elastically (e.g. immediate settlement problems), or they are high enough for the soil to fail by plastic yield (bearing capacity and earth pressure problems), where it can be assumed that the soil will behave as a plastic material.

With soils, even further assumptions must be made if one is to obtain a solution. Generally it is assumed that the soil is both homogeneous and isotropic. As with the assumption of perfect elasticity these theoretical relationships do not apply in practice but can lead to realistic results when sensibly applied.

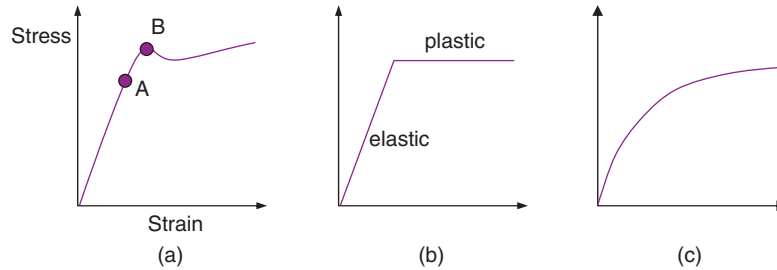


Fig. 3.1 Stress–strain relationships.

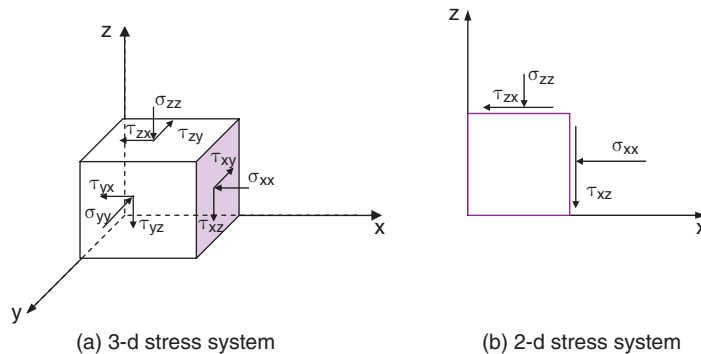


Fig. 3.2 Three- and two-dimensional stress states.

3.1.2 Stresses within a soil mass

A major problem in geotechnical analysis is the estimation of the state of stress at a point at a particular depth in a soil mass.

A load acting on a soil mass, whether internal, due to its self-weight, or external, due to a load applied at the boundary, creates stresses within the soil. If we consider an elemental cube of soil at the point considered, then a solution by elastic theory is possible. Each plane of the cube is subjected to a stress, σ , acting normal to the plane, together with a shear stress, τ , acting parallel to the plane. There are therefore a total of six stress components acting on the cube (see Fig. 3.2a). Once the values of these components are determined then they can be compounded to give the magnitudes and directions of the principal stresses acting at the point considered.

Many geotechnical structures operate in a state of plane strain, i.e. one dimension of the structure is large enough for end effects to be ignored and the problem can be regarded as one of two dimensions. The two-dimensional stress state is illustrated in Fig. 3.2b.

3.2 Total stress

The total vertical stress acting at a point in the soil (e.g. stress σ_{zz} in Fig. 3.2b) is due to the weight of everything that lies above that point including soil, water and any load applied to the soil surface. Stresses induced by the weight of the soil subject the elemental cube to vertical stress only and they cannot create shear stresses under a level surface.

Total stress increases with depth and with unit weight and the total vertical stress at depth z in the soil due to the weight of the soil acting above, as depicted in Fig 3.3, is defined

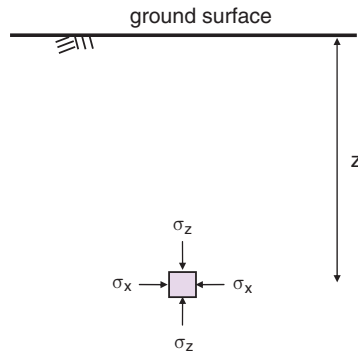


Fig. 3.3 Total stress in a homogeneous soil mass.

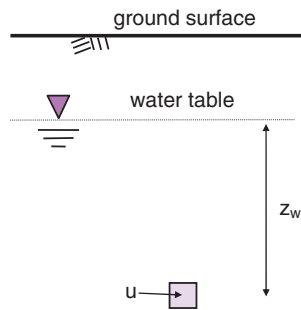


Fig. 3.4 Hydrostatic pore water pressure.

$$\sigma_z = \gamma z$$

where γ = unit weight of the soil.

If the soil is multi-layered, the total vertical stress is determined by summing the stresses induced by each layer of soil (see Examples 3.1 and 3.2).

3.3 Pore pressure

The term pore water was introduced in Section 2.2.1. Pore water experiences pressure known as the pore pressure or pore water pressure, u . The magnitude of the pore pressure at a point in the soil depends on the depth below the water table and the flow conditions. In the case of a horizontal ground water table, we may be able to assume that no flow is taking place and the pore pressure at a point beneath the ground water table can be established from the hydrostatic pressure acting. The magnitude of the pore pressure at the water table is zero.

In Fig. 3.4 the pore pressure is given by the hydrostatic pressure.

$$u = \gamma_w z_w$$

where

z_w = the depth below the water table.

In situations where seepage is taking place, the pore pressures can be established from a flow net.

It is clear that pore pressures are positive below the water table. Above the water table however, the soil is saturated with capillary water in a state of suction, and here the pore pressures will be negative.

$$u = -\gamma_w h_c$$

where

h_c = height of capillary rise.

3.4 Effective stress

The stress that controls changes in the volume and strength of a soil is known as the *effective stress*. In Chapter 1 it was seen that a soil mass consists of a collection of mineral particles with voids between them. These voids are filled with water, air and water, or air only (see Fig. 1.10).

For the moment let us consider saturated soils only. When a load is applied to such a soil, it will be carried by the water in the soil voids (causing an increase in the pore water pressure) or by the soil skeleton (in the form of grain to grain contact stresses), or else it will be shared between the water and the soil skeleton as illustrated in Fig. 3.5. The portion of the total stress carried by the soil particles is known as the effective stress, σ' . The load carried by the water gives rise to an increase in the pore water pressure, u , which, depending on the permeability, leads to water flowing under pressure out of the soil mass. This is called drainage and leads to soils possessing different strength characteristics before, during and at the end of the drainage period. This in turn necessitates the need for us to understand the behaviour of the soil both immediately at the point of loading (i.e. when the soil is in an *undrained* state) and at a point in time long after the load has been applied (i.e. when the soil is in a *drained* state). The effects of undrained and drained conditions on soil strength are covered in Chapter 4.

Terzaghi first presented the concept of effective stress in 1925 and again, in 1936, at the First International Conference on Soil Mechanics and Foundation Engineering, at Harvard University. He showed, from the results of many soil tests, that when an undrained saturated soil is subjected to an increase in applied normal stress, $\Delta\sigma$, the pore water pressure within the soil increases by Δu , and the value of Δu is equal to the value of $\Delta\sigma$. This increase in u caused no measurable changes in either the volumes or the strengths

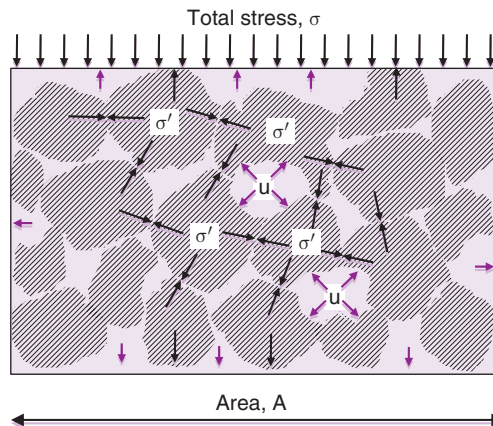


Fig. 3.5 Load carried by soil particles and pore water.

of the soils tested, and Terzaghi therefore used the term *neutral stress* to describe u , instead of the now more popular term pore water pressure.

Terzaghi concluded that only part of an applied stress system controls measurable changes in soil behaviour and this is the balance between the applied stresses and the neutral stress. He called these balancing stresses the effective stresses. He further explained that if a saturated soil fails by shear, the normal stress on the plane of failure, σ , also consists of the neutral stress, u , and an effective stress, σ' which led to the equation known to all soils engineers:

effective stress = total stress – pore pressure

$$\sigma' = \sigma - u$$

where the prime represents 'effective stress'.

This equation is applicable to all saturated soils.

Example 3.1: Total and effective stress

A 3 m layer of sand, of saturated unit weight 18 kN/m^3 , overlies a 4 m layer of clay, of saturated unit weight 20 kN/m^3 . If the groundwater level occurs within the sand at 2 m below the ground surface, determine the total and effective vertical stresses acting at the centre of the clay layer. The sand above groundwater level may be assumed to be saturated.

Solution:

For this sort of problem it is usually best to draw a diagram to represent the soil conditions (see Fig. 3.6).

Total vertical stress at centre of clay = Total weight of soil above

$$\begin{aligned}\sigma_v &= 2 \text{ m saturated clay} + 3 \text{ m saturated sand} \\ &= 2 \times 20 + 3 \times 18 = 94 \text{ kPa}\end{aligned}$$

Effective stress = Total stress – Water pressure

$$\sigma'_v = 94 - 9.81(2 + 1) = 64.6 \text{ kPa}$$

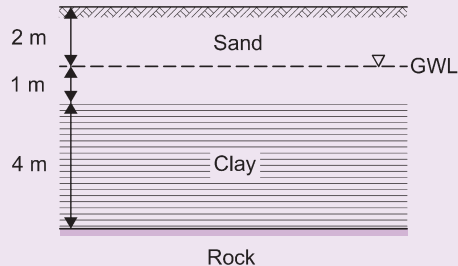


Fig. 3.6 Example 3.1.

Example 3.2: Distributions of total stress, pwp and effective stress

A 5 m deep deposit of silty sand lies above a 4 m deep deposit of gravel. The gravel is underlain by a deep layer of stiff clay. The ground water table is found 2 m below the ground surface. The soil properties are:

$$\rho_b \text{ sand above GWT} = 1.7 \text{ Mg/m}^3$$

$$\rho_{\text{sat}} \text{ sand below GWT} = 1.95 \text{ Mg/m}^3$$

$$\rho_{\text{sat}} \text{ gravel} = 2.05 \text{ Mg/m}^3$$

Draw the distributions of vertical total stress, pore water pressure, and vertical effective stress with depth down to the clay layer.

Solution:

The values of total stress, pore pressure and effective stress are calculated at the salient points through the soil profile. These points are where changes in conditions occur, such as the horizon between two soils.

$$\text{Depth} = 0 \text{ m} \quad \sigma_z = 0; u = 0; \sigma'_z = 0$$

$$\text{Depth} = 2 \text{ m} \quad \sigma_z = 1.70 \times 9.81 \times 2 = 33.4 \text{ kPa}$$

$$u = 0$$

$$\sigma'_z = 33.4 - 0 = 33.4 \text{ kPa}$$

$$\text{Depth} = 5 \text{ m} \quad \sigma_z = 33.4 + (1.95 \times 9.81 \times 3) = 90.8 \text{ kPa}$$

$$u = 9.81 \times 3 = 29.4 \text{ kPa}$$

$$\sigma'_z = 90.8 - 29.4 = 61.4 \text{ kPa}$$

$$\text{Depth} = 9 \text{ m} \quad \sigma_z = 90.8 + (2.05 \times 9.81 \times 4) = 171.2 \text{ kPa}$$

$$u = 9.81 \times 7 = 68.7 \text{ kPa}$$

$$\sigma'_z = 171.2 - 68.7 = 102.5 \text{ kPa}$$

The distributions are then plotted (see Fig. 3.7). Note that the values of total stress, pore pressure and effective stress all increase linearly between successive depths in the profile.

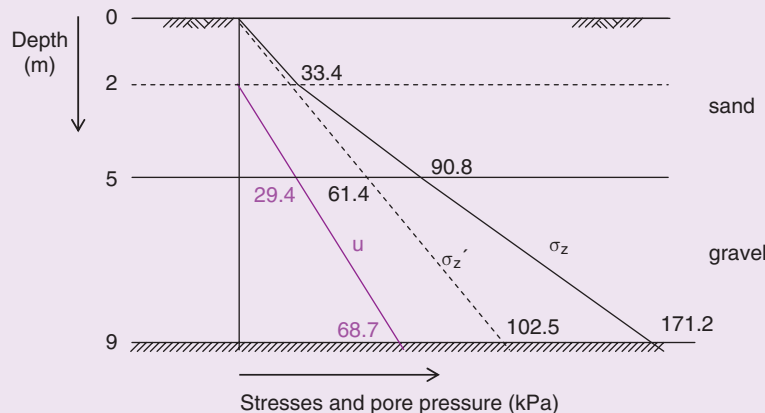


Fig. 3.7 Example 3.2.

3.5 Stresses induced by applied loads

3.5.1 Stresses induced by uniform surface surcharge

In the case of a uniform surcharge spread over a large area it can be assumed that the increase in vertical stress resulting from the surcharge is constant throughout the soil. Here, the vertical total stress at depth z , is given by

$$\sigma_z = \gamma z + q$$

where q is the magnitude of the surcharge (kPa).

Example 3.3: Effective stress with surface loading

Details of the subsoil conditions at a site are shown in Fig. 3.8 together with details of the soil properties. The ground surface is subjected to a uniform loading of 60 kPa and the groundwater level is 1.2 m below the upper surface of the silt. It can be assumed that the gravel has a degree of saturation of 50% and that the silt layer is fully saturated. NB $\gamma_w = 9.81 \text{ kN/m}^3$.

Determine the vertical effective stress acting at a point 1 m above the silt/rock interface.

Solution:

$$\begin{aligned} \text{Bulk unit weight of gravel} &= \gamma_w \frac{G_s + eS_r}{1 + e} = 9.81 \frac{2.65 + 0.65 \times 0.5}{1 + 0.65} \\ &= 17.7 \text{ kN/m}^3 \end{aligned}$$

$$\begin{aligned} \text{Saturated weight of silt} &= \gamma_w \frac{G_s + e}{1 + e} = 9.81 \frac{2.58 + 0.76}{1 + 0.76} \\ &= 18.6 \text{ kN/m}^3 \end{aligned}$$

Effective vertical stress at 1 m above silt/rock interface

$$\begin{aligned} &= \left[\begin{array}{c} \text{Uniform pressure} \\ \text{applied at ground} \\ \text{surface} \end{array} \right] + \left[\begin{array}{c} \text{Total pressure} \\ \text{due to weight} \\ \text{of soils} \end{array} \right] - [\text{Water pressure}] \\ &= 60 + (1.8 \times 17.7 + 4.2 \times 18.6) - 3 \times 9.81 \\ &= 140.6 \text{ kPa} \end{aligned}$$

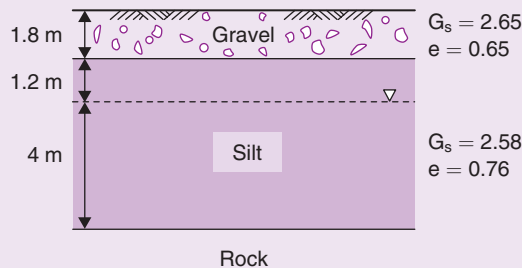


Fig. 3.8 Example 3.3.

3.5.2 Stresses induced by point load

The simplest case of applied loading has been illustrated in Example 3.3. However, most loads are applied to soil through foundations of finite area so that the stresses induced within the soil directly below a particular foundation are different from those induced within the soil at the same depth but at some radial distance away from the centre of the foundation.

The determination of the stress distributions created by various applied loads has occupied researchers for many years. The basic assumption used in all their analyses is that the soil mass acts as a continuous, homogeneous and elastic medium. The assumption of elasticity obviously introduces errors but it leads to stress values that are of the right order and are suitable for most routine design work.

In most foundation problems, however, it is only necessary to be acquainted with the *increase* in vertical stresses (for settlement analysis) and the *increase* in shear stresses (for shear strength analysis).

Boussinesq (1885) evolved equations that can be used to determine the six stress components that act at a point in a semi-infinite elastic medium due to the action of a vertical point load applied on the horizontal surface of the medium.

His expression for the increase in vertical stress is:

$$\Delta\sigma_z = \frac{3Pz^3}{2\pi(r^2 + z^2)^{\frac{5}{2}}}$$

where

P = concentrated load

r = $\sqrt{x^2 + y^2}$ (see Fig. 3.9, inset).

The expression has been simplified to:

$$\Delta\sigma_z = K \frac{P}{z^2}$$

where K is an influence factor.

Values of K against values of r/z are shown in Fig. 3.9.

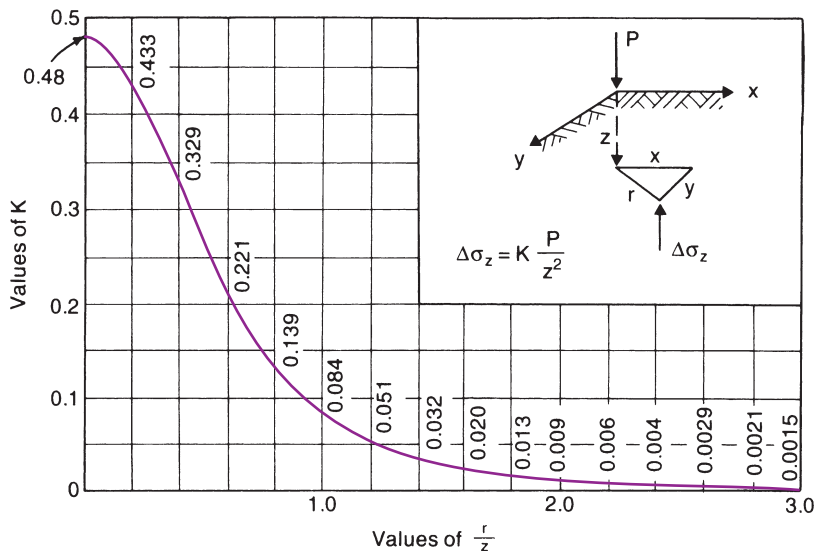


Fig. 3.9 Influence coefficients for vertical stress from a concentrated load (after Boussinesq, 1885).

Example 3.4: Vertical stress increments beneath a point load

A concentrated load of 400kN acts on the surface of a soil.

Determine the vertical stress increments at points directly beneath the load to a depth of 10m.

Solution:

For points below the load $r = 0$ and at all depths $r/z = 0$, whilst from Fig. 3.9 it is seen that $K = 0.48$.

z (m)	z^2	$\frac{P}{z^2}$	$\Delta\sigma_z = K \frac{P}{z^2}$ (kPa)
0.5	0.25	1600.0	768.0
1.0	1.00	400.0	192.0
2.5	6.25	64.0	30.7
5.0	25.00	16.0	7.7
7.5	56.25	7.1	3.4
10.0	100.00	4.0	1.9

This method is only applicable to a point load, which is a rare occurrence in soil mechanics, but the method can be extended by the principle of superposition to cover the case of a foundation exerting a uniform pressure on the soil. A plan of the foundation is prepared and this is then split into a convenient number of geometrical sections. The force due to the uniform pressure acting on a particular section is assumed to be concentrated at the centroid of the section, and the vertical stress increments at the point to be analysed due to all the sections are now obtained. The total vertical stress increment at the point is the summation of these increments.

3.5.3 Stresses induced by uniform rectangular load

These can be established following Steinbrenner's method (1934). If a foundation of length L and width B exerts a uniform pressure, p , on the soil then the vertical stress increment due to the foundation at a depth z below one of the corners is given by the expression:

$$\sigma_z = pI_\sigma$$

where I_σ is an influence factor depending upon the relative dimensions of L , B and z .

I_σ can be evaluated by the Boussinesq theory and values of this factor (which depend upon the two coefficients $m = B/z$ and $n = L/z$) were prepared by Fadum in 1948 (Fig. 3.10).

With the use of this influence factor the determination of the vertical stress increment at a point under a foundation is very much simplified, provided that the foundation can be split into a set of rectangles or squares with corners that meet over the point considered.

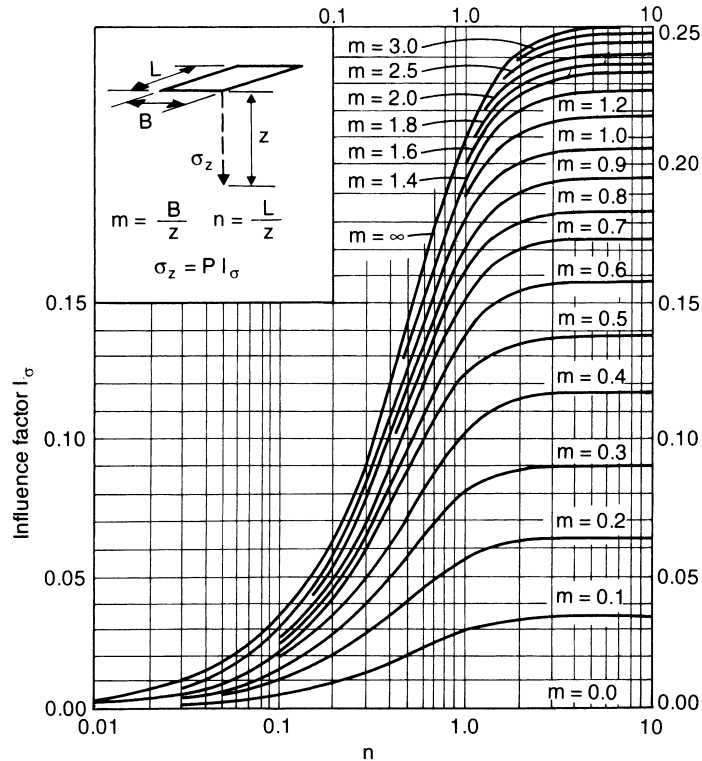


Fig. 3.10 Influence factors for the vertical stress beneath the corner of a rectangular foundation (after Fadum, 1948).

Example 3.5: Vertical stress increments beneath a foundation

A 4.5 m square foundation exerts a uniform pressure of 200 kPa on a soil. Determine (i) the vertical stress increments due to the foundation load to a depth of 10 m below its centre and (ii) the vertical stress increment at a point 3 m below the foundation and 4 m from its centre along one of the axes of symmetry.

Solution:

- (i) The square foundation can be divided into four squares whose corners meet at the centre O (Fig. 3.11a).

z (m)	$m = \frac{B}{z}$	$n = \frac{L}{z}$	I_σ	$4I_\sigma$	σ_z (kPa)
2.5	0.9	0.9	0.163	0.652	130
5.0	0.45	0.45	0.074	0.296	59
7.5	0.3	0.3	0.04	0.16	32
10.0	0.23	0.23	0.025	0.1	20

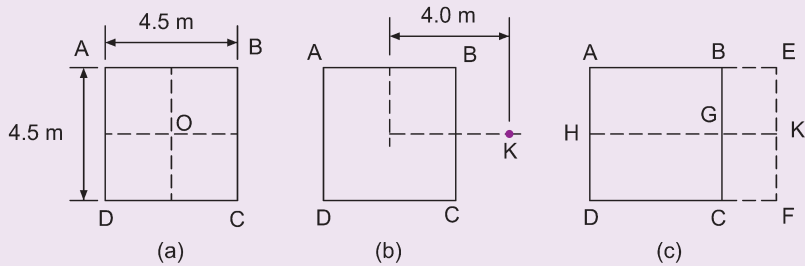


Fig. 3.11 Example 3.5.

- (ii) This example illustrates how the method can be used for points outside the foundation area (Fig. 3.11b). The foundation is assumed to extend to the point K (Fig. 3.11c) and is now split into two rectangles, AEKH and HKFD.

For both rectangles:

$$m = \frac{B}{z} = \frac{2.25}{3} = 0.75; \quad n = \frac{L}{z} = \frac{6.25}{3} = 2.08$$

From Fig. 3.10, $I_\sigma = 0.176$, therefore $\sigma_z = 0.176 \times 2 \times 200 = 70.4 \text{ kPa}$.

The effect of rectangles BEGK and KGCF must now be subtracted.

For both rectangles:

$$m = \frac{2.25}{3} = 0.75; \quad n = \frac{1.75}{3} = 0.58$$

From Fig. 3.10, $I_\sigma = 0.122$ (strictly speaking m is 0.58 and n is 0.75, but m and n are interchangeable in Fig. 3.10). Hence:

$$\sigma_z = 0.122 \times 2 \times 200 = 48.8 \text{ kPa}$$

Therefore the vertical stress increment due to the foundation

$$= 70.4 - 48.8 = 21.6 \text{ kPa}$$

Circular foundations can also be solved by this method. The stress effects from such a foundation may be found approximately by assuming that they are the same as for a square foundation of the same area.

Example 3.6: Vertical stress increments beneath circular foundation

A circular foundation of diameter 100 m exerts a uniform pressure on the soil of 450 kPa. Determine the vertical stress increments for depths up to 200 m below its centre.

Solution:

$$\text{Area of foundation} = \frac{\pi \times 100^2}{4} = 7850 \text{ m}^2$$

Length of side of square foundation of same area = $\sqrt{7850} = 88.6$ m. This imaginary square can be divided into four squares as in Example 3.5(i). Length of sides of squares = 44.3 m.

z (m)	$n = m = \frac{B}{z}$	I_σ	$4I_\sigma$	σ_z (kPa)
10	4.43	0.248	0.992	446
25	1.77	0.221	0.884	398
50	0.89	0.16	0.64	288
100	0.44	0.071	0.284	128
150	0.3	0.04	0.16	72
200	0.22	0.024	0.096	43

3.5.4 Irregularly shaped foundations

It may not be possible to employ Fadum's method for irregularly shaped foundations, and a numerical solution is then only possible by the use of Boussinesq's coefficients, K , and the principle of superposition.

Computer software for calculating the vertical stress increments beneath irregularly shaped foundations is widely available and nowadays such software is routinely used to determine the stress values. Historically, however, the Newmark chart (Newmark, 1942) was used to determine the values and any reader interested in the use of the Newmark chart is guided to the seventh, or earlier, editions of this book for a full and detailed explanation.

3.5.5 Bulbs of pressure

If points of equal vertical pressure are plotted on a cross-section through the foundation, diagrams of the form shown in Figs 3.12a and 3.12b are obtained.

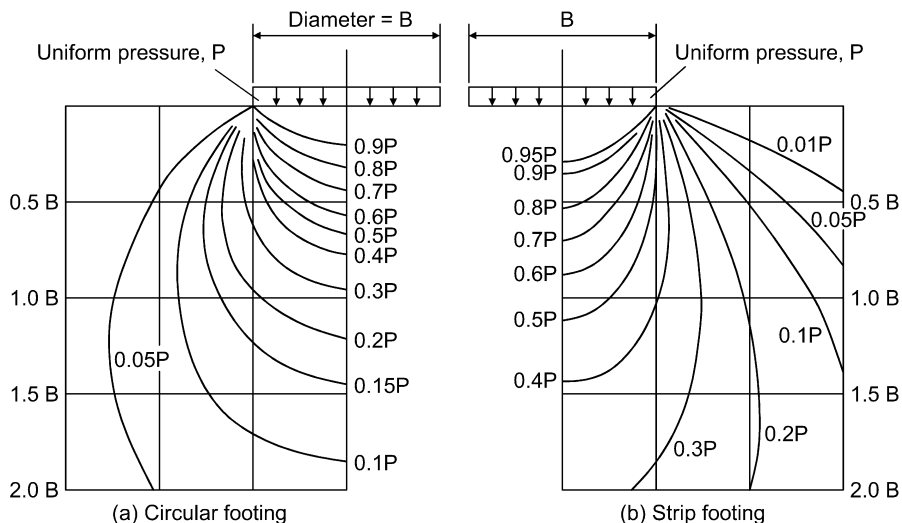


Fig. 3.12 Bulbs of pressure for vertical stress.

These diagrams are known as bulbs of pressure and constitute another method of determining vertical stresses at points below a foundation that is of regular shape, the bulb of pressure for a square footing being obtainable approximately by assuming that it has the same effect on the soil as a circular footing of the same area.

In the case of a rectangular footing the bulb pressure will vary at cross-sections taken along the length of the foundation, but the vertical stress at points below the centre of such a foundation can still be obtained from the charts in Fig. 3.12 by either (i) assuming that the foundation is a strip footing or (ii) determining σ_z values for both the strip footing case and the square footing case and combining them by proportioning the length of the two foundations.

From a bulb of pressure one has some idea of the depth of soil affected by a foundation. Significant stress values go down roughly to 2.0 times the width of the foundation, and Fig. 3.13 illustrates how the results from a plate loading test (see Chapter 6) may give quite misleading results if the proposed foundation is much larger: the soft layer of soil in the diagram is unaffected by the plate loading test but would be considerably stressed by the foundation.

Boreholes in a site investigation should therefore be taken down to a depth at least 1.5 times the width of the proposed foundation or until rock is encountered, whichever is the lesser.

Small foundations will act together as one large foundation (Fig. 3.14) unless the foundations are at a greater distance apart (c/c) than five times their width, which is not usual. Boreholes for a building site investigation should therefore be taken down to a depth of approximately 1.5 times the width of the proposed building.

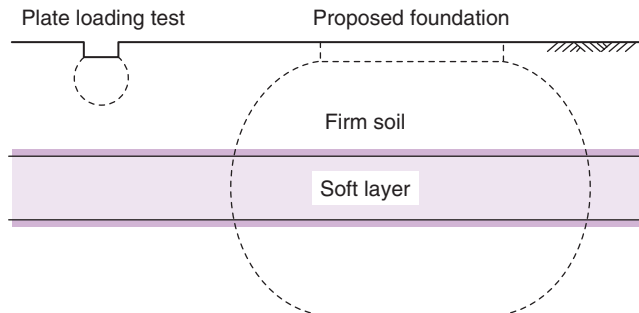


Fig. 3.13 Plate loading test may give misleading results.

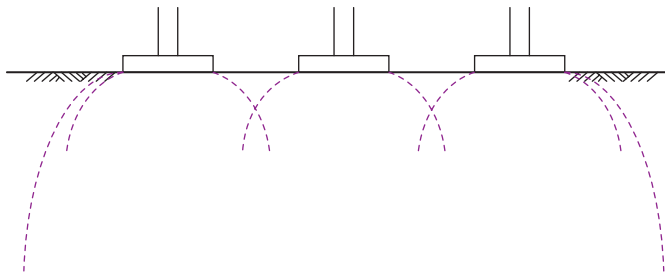


Fig. 3.14 Overlapping of pressure bulbs.

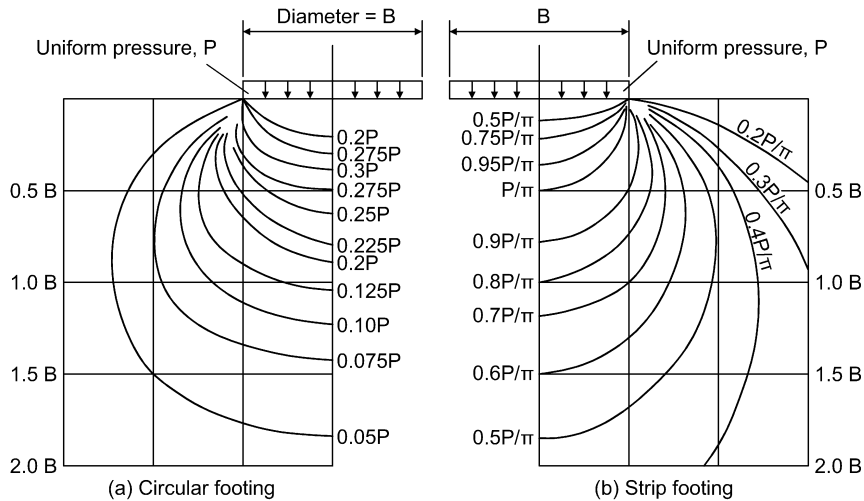


Fig. 3.15 Pressure bulbs of shear stress.

3.5.6 Shear stresses

In normal foundation design procedure it is essential to check that the shear strength of the soil (see Chapter 4) will not be exceeded. The shear stress developed by loads from foundations of various shapes can be calculated. Jürgenson obtained solutions for the case of a circular footing and for the case of a strip footing (Fig. 3.15). It may be noted that, in the case of a strip footing, the maximum stress induced in the soil is p/π , this value occurring at points lying on a semicircle of diameter equal to the foundation width B . Hence the maximum shear stress under the centre of a continuous foundation occurs at a depth of $B/2$ beneath the centre.

Shear stresses under a rectangular foundation

It is sometimes necessary to evaluate the shear stresses beneath a foundation in order to determine a picture of the likely overstressing in the soil.

Unfortunately a large number of foundations are neither circular nor square but rectangular, but Figs 3.15a and 3.15b can be used to give a rough estimate of shear stress under the centre of a rectangular footing.

Example 3.7: Shear stress induced by foundation loading

A rectangular foundation has the dimensions $15\text{ m} \times 5\text{ m}$ and exerts a uniform pressure on the soil of 600 kPa . Determine the shear stress induced by the foundation beneath the centre at a depth of 5 m .

Solution:

Strip footing

$$\frac{z}{B} = \frac{5}{5} = 1.0$$

From Fig. 3.15b:

$$\tau = \frac{0.81 \times 600}{\pi} = 155 \text{ kPa}$$

For a square footing:

$$\text{Area} = 5 \times 5 = 25 \text{ m}^2$$

Diameter of circle of same area:

$$\sqrt{\frac{25 \times 4}{\pi}} = 5.64 \text{ m}$$

Hence the shear stress under a 5 m square foundation can be obtained from the bulb of pressure of shear stress for a circular foundation of diameter 5.64 m.

$$\frac{z}{B} = \frac{5}{5.64} = 0.89$$

From Fig. 3.15a:

$$\tau = 0.2 \times 600 = 120 \text{ kPa}$$

These values can be combined if we proportion them to the respective areas (or lengths):

$$\tau = 120 + (155 - 120) \frac{15}{15 + 5} = 146 \text{ kPa}$$

The method is approximate but it does give an indication of the shear stress values.

3.5.7 Contact pressure

Contact pressure is the actual pressure transmitted from the foundation to the soil. Throughout Section 3.5 it has been assumed that this contact pressure value, p , is uniform over the whole base of the foundation, but a uniformly loaded foundation will not necessarily transmit a uniform contact pressure to the soil. This is only possible if the foundation is perfectly flexible. The contact pressure distribution of a rigid foundation depends upon the type of soil beneath it. Figures 3.16a and 3.16b show the form of contact pressure distribution induced in a cohesive soil (a) and in a cohesionless soil (b) by a rigid, uniformly loaded, foundation.

On the assumption that the vertical settlement of the foundation is uniform, it is found from the elastic theory that the stress intensity at the edges of a foundation on cohesive soils is infinite. Obviously local yielding of the soil will occur until the resultant distribution approximates to Fig. 3.16a.

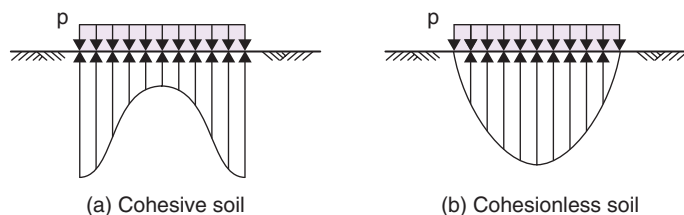


Fig. 3.16 Contact pressure distribution under a rigid foundation loaded with a uniform pressure, p .

For a rigid surface footing sitting on sand the stress at the edges is zero as there is no overburden to give the sand shear strength, whilst the pressure distribution is roughly parabolic (Fig. 3.16b). The more the foundation is below the surface of the sand the more shear strength there is developed at the edges of the foundation, with the result that the pressure distribution tends to be more uniform.

In the case of cohesive soil, which is at failure when the whole of the soil is at its yield stress, the distribution of the contact pressure again tends to uniformity.

A reinforced concrete foundation is neither perfectly flexible nor perfectly rigid, the contact pressure distribution depending upon the degree of rigidity. This pressure distribution should be considered when designing for the moments and shears in the foundation, but in order to evaluate shear and vertical stresses below the foundation the assumption of a uniform load inducing a uniform pressure is sufficiently accurate.



Exercises

Exercise 3.1

A raft foundation subjects its supporting soil to a uniform pressure of 300 kPa. The dimensions of the raft are 6.1 m by 15.25 m. Determine the vertical stress increments due to the raft at a depth of 4.58 m below it (i) at the centre of the raft and (ii) at the central points of the long edges.

Answer (i) 192 kPa, (ii) 132 kPa

Exercise 3.2

A concentrated load of 85 kN acts on the horizontal surface of a soil. Plot the variation of vertical stress increments due to the load on horizontal planes at depths of 1 m, 2 m and 3 m directly beneath it.

Answer Fig. 3.17.

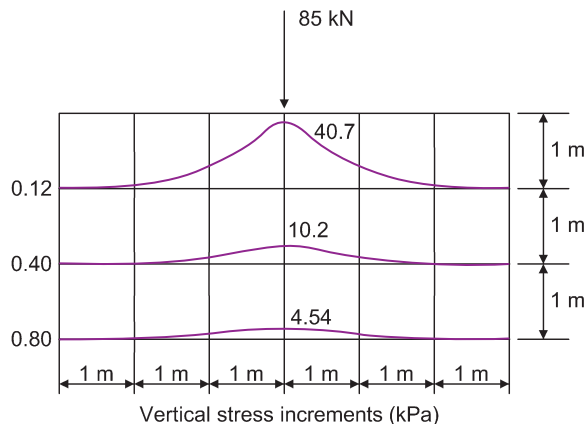


Fig. 3.17 Exercise 3.2.

Exercise 3.3

The plan of a foundation is given in Fig. 3.18a. The uniform pressure on the soil is 40 kPa. Determine the vertical stress increment due to the foundation at a depth of 5 m below the point X, using Fig. 3.10.

Note: In order to obtain a set of rectangles whose corners meet at a point, a section of the foundation area is sometimes included twice and a correction made. For this particular problem the foundation area must be divided into six rectangles (Fig. 3.18b); the effect of the shaded portion will be included twice and must therefore be subtracted once.

Answer 11.1 kPa

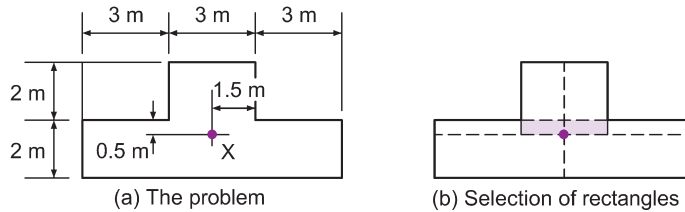


Fig. 3.18 Exercise 3.3.

Exercise 3.4

A load of 500 kN is uniformly distributed through a pad foundation of dimensions 1.0 m × 1.5 m. Determine the increase in vertical stress at a depth of 2.0 m below one corner of the foundation.

Answer 36 kPa

Chapter 4

Shear Strength of Soils

The property that enables a material to remain in equilibrium when its surface is not level is known as its shear strength. Soils in liquid form have virtually no shear strength and even when solid, have shear strengths of relatively small magnitudes compared with those exhibited by steel or concrete.

To appreciate this section some knowledge of the relevant strength of materials is useful. A brief summary of this subject is set out below.

4.1 Friction

Consider a block of weight W resting on a horizontal plane (Fig. 4.1a). The vertical reaction, R , equals W , and there is consequently no tendency for the block to move. If a small horizontal force, H , is now applied to the block and the magnitude of H is such that the block still does not move, then the reaction R will no longer act vertically but becomes inclined at some angle, α , to the vertical.

By considering the equilibrium of forces, first in the horizontal direction and then in the vertical direction, it is seen that:

$$\text{Horizontal component of } R = H = R \sin \alpha$$

$$\text{Vertical component of } R = W = R \cos \alpha \quad (\text{Fig. 4.1b})$$

The angle α is called the angle of obliquity and is the angle that the reaction on the plane of sliding makes with the normal to that plane. If H is slowly increased in magnitude, a stage will be reached at which sliding is imminent; as H is increased the value of α will also increase until, when sliding is imminent, α has reached a limiting value, ϕ . If H is now increased still further the angle of obliquity, ϕ , will not become greater and the block, having achieved its maximum resistance to horizontal movement, will move (ϕ is known as the angle of friction). The frictional resistance to sliding is the horizontal component of R and, as can be seen from the triangle of forces in Fig. 4.1b, equals $N \tan \phi$ where N equals the normal force on the surface of sliding (in this case $N = W$).

As α only achieves the value ϕ when sliding occurs, it is seen that the frictional resistance is not constant and varies with the applied load until movement occurs. The term $\tan \phi$ is known as the coefficient of friction.

4.2 Complex stress

When a body is acted upon by external forces, then any plane within the body will be subjected to a stress that is generally inclined to the normal to the plane. Such a stress has both a normal and a tangential component and is known as a *compound, or complex, stress* (Fig. 4.2).

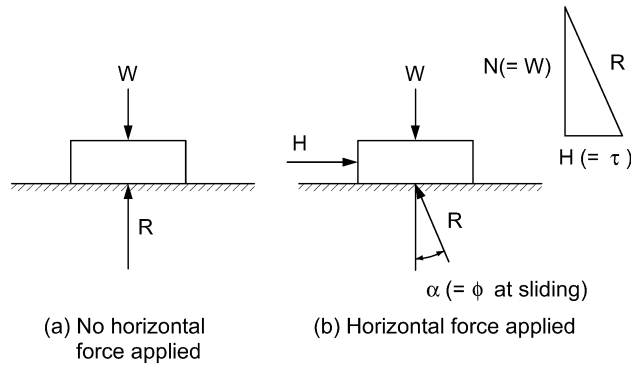


Fig. 4.1 Friction on horizontal plane.

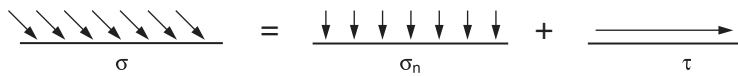


Fig. 4.2 Complex stress.

Principal plane

A plane that is acted upon by a normal stress only is known as a principal plane, there is no tangential, or shear, stress present. As is seen in the next section dealing with principal stress, only three principal planes can exist in a stressed mass.

Principal stress

The normal stress acting on a principal plane is referred to as a principal stress. At every point in a soil mass, the applied stress system that exists can be resolved into three principal stresses that are mutually orthogonal. The principal planes corresponding to these principal stresses are called the major, intermediate and minor principal planes and are so named from a consideration of the principal stresses that act upon them. The largest principal stress, σ_1 , is known as the major principal stress and acts on the major principal plane. Similarly the intermediate principal stress, σ_2 , acts on the intermediate principal plane whilst the smallest principal stress, σ_3 , called the minor principal stress, acts on the minor principal plane. Critical stress values and obliquities generally occur on the two planes normal to the intermediate plane so that the effects of σ_2 can be ignored and a two-dimensional solution is possible.

4.3 The Mohr circle diagram

Figure 4.3a shows a major principal plane, acted upon by a major principal stress, σ_1 , and a minor principal plane, acted upon by a minor principal stress, σ_3 .

By considering the equilibrium of an element within the stressed mass (Fig. 4.3b), it can be shown that on any plane, inclined at angle θ to the direction of the major principal plane, there is a shear stress, τ , and a normal stress, σ_n . The magnitudes of these stresses are:

$$\tau = \frac{\sigma_1 - \sigma_3}{2} \sin 2\theta$$

$$\sigma_n = \sigma_3 + (\sigma_1 - \sigma_3) \cos^2 \theta$$

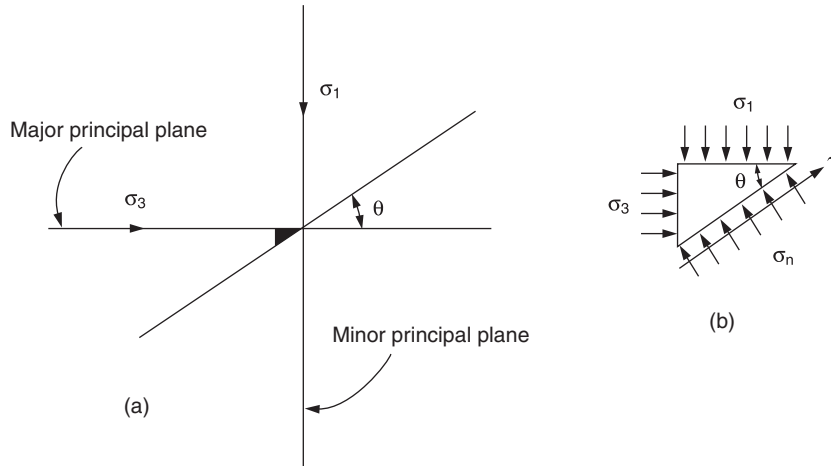


Fig. 4.3 Stress induced by two principal stresses, σ_1 and σ_3 , on a plane inclined at θ to σ_3 .

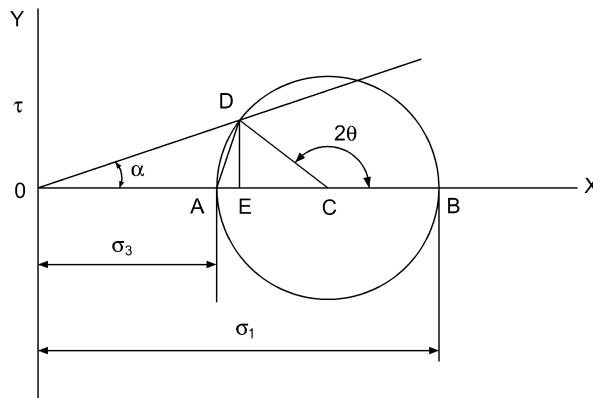


Fig. 4.4 Mohr circle diagram.

These formulae lend themselves to graphical representation, and it can be shown that the locus of stress conditions for all planes through a point is a circle (generally called a Mohr circle). In order to draw a Mohr circle diagram a specific convention must be followed, all normal stresses (including principal stresses) being plotted along the axis OX while shear stresses are plotted along the axis OY. For most cases the axis OX is horizontal and OY is vertical, but the diagram is sometimes rotated to give correct orientation. The convention also assumes that the direction of the major principal stress is parallel to axis OY, i.e. the direction of the major principal plane is parallel to axis OX.

To draw the diagram, first lay down the axes OX and OY, then set off OA and OB along the OX axis to represent the magnitudes of the minor and major principal stresses respectively, and finally construct the circle with diameter AB. This circle is the locus of stress conditions for all planes passing through the point A, i.e. a plane passing through A and inclined to the major principal plane at angle θ cuts the circle at D. The coordinates of the point D are the normal and shear stresses on the plane (Fig. 4.4).

$$\begin{aligned} \text{Normal stress} = \sigma_n &= OE = OA + AE = \sigma_3 + AD \cos \theta \\ &= \sigma_3 + AB \cos^2 \theta \\ &= \sigma_3 + (\sigma_1 - \sigma_3) \cos^2 \theta \end{aligned}$$

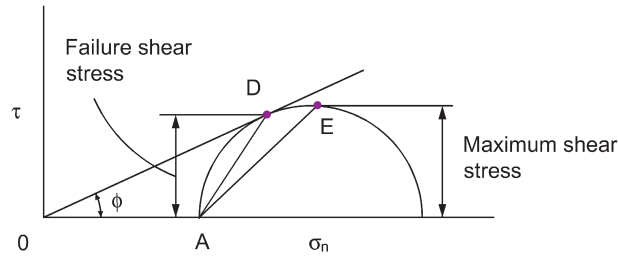


Fig. 4.5 Mohr circle diagram for limit shear resistance.

$$\begin{aligned} \text{Shear stress} = \tau &= DE = DC \sin(180^\circ - 2\theta) \\ &= DC \sin 2\theta \\ &= \frac{\sigma_1 - \sigma_3}{2} \sin 2\theta \end{aligned}$$

In Fig. 4.4, OE and DE represent the normal and shear stress components of the complex stress acting on plane AD. From the triangle of forces ODE it can be seen that this complex stress is represented in the diagram by the line OD, whilst the angle DOB represents the angle of obliquity, α , of the resultant stress on plane AD.

Limit conditions

It has been stated that the maximum shearing resistance is developed when the angle of obliquity equals its limiting value, ϕ . For this condition the line OD becomes a tangent to the stress circle, inclined at angle ϕ to axis OX (Fig. 4.5).

An interesting point that arises from Fig. 4.5 is that the failure plane is not the plane subjected to the maximum value of shear stress. The criterion of failure is maximum obliquity, not maximum shear stress. Hence, although the plane AE in Fig. 4.5 is subjected to a greater shear stress than the plane AD, it is also subjected to a larger normal stress and therefore the angle of obliquity is less than on AD, which is the plane of failure.

Strength envelopes

If ϕ is assumed constant for a certain material, then the shear strength of the material can be represented by a pair of lines passing through the origin, O, at angles $+\phi$ and $-\phi$ to the axis OX (Fig. 4.6). These lines comprise the Mohr strength envelope for the material.

In Fig. 4.6, a state of stress represented by circle A is quite stable as the circle lies completely within the strength envelope. Circle B is tangential to the strength envelope and represents the condition of incipient failure, since a slight increase in stress values will push the circle over the strength envelope and failure will occur. Circle C cannot exist as it is beyond the strength envelope.

Relationship between ϕ and θ

In Fig. 4.7, $\angle DCO = 180^\circ - 2\theta$.

In triangle ODC: $\angle DOC = \phi$, $\angle ODC = 90^\circ$, $\angle OCD = 180^\circ - 2\theta$. These angles summate to 180° , i.e.

$$\phi + 90^\circ + 180^\circ - 2\theta = 180^\circ$$

hence

$$\theta = \frac{\phi}{2} + 45^\circ$$

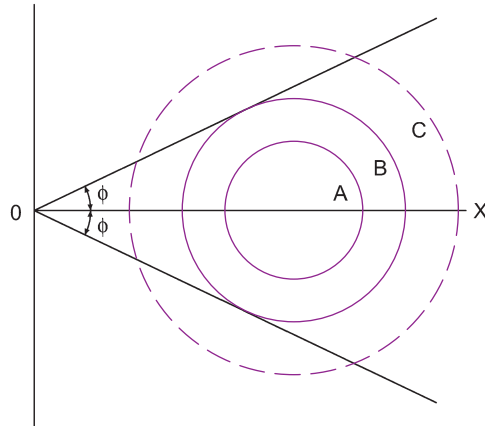


Fig. 4.6 Mohr strength envelope.

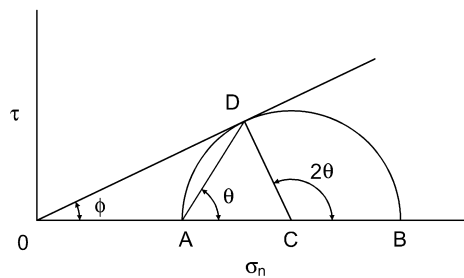


Fig. 4.7 Relationship between ϕ and θ .

Example 4.1: Angle of shearing resistance and angle of failure plane

On a failure plane in a purely frictional mass of dry sand the total stresses at failure were: shear = 3.5 kPa; normal = 10.0 kPa.

Determine (a) by calculation and (b) graphically the resultant stress on the plane of failure, the angle of shearing resistance of the soil, and the angle of inclination of the failure plane to the major principal plane.

Solution:

(a) By calculation:

The soil is frictional, therefore the strength envelope must go through the origin. The failure point is represented by point D in Fig. 4.8a with coordinates (10, 3.5).

$$\text{Resultant stress} = OD = \sqrt{3.5^2 + 10^2} = 10.6 \text{ kPa}$$

$$\tan \phi = \frac{3.5}{10} = 0.35$$

$$\Rightarrow \phi = 19.3^\circ$$

$$\theta = \frac{\phi}{2} + 45^\circ = 54.6^\circ$$

(b) Graphically:

The procedure (Fig. 4.8b) is first to draw the axes OX and OY and then, to a suitable scale, set off point D with coordinates (10, 3.5); join OD (this is the strength envelope). The stress circle is tangential to OD at the point D; draw line DC perpendicular to OD to cut OX in C, C being the centre of the circle.

With centre C and radius CD draw the circle establishing the points A and B on the x-axis.

By scaling, $OD = \text{resultant stress} = 10.6 \text{ kPa}$. With protractor, $\phi = 19^\circ$; $\theta = 55^\circ$.

Note: From the diagram we see that

$$OA = \sigma_3 = 7.6 \text{ kPa}$$

$$OB = \sigma_1 = 15 \text{ kPa}$$

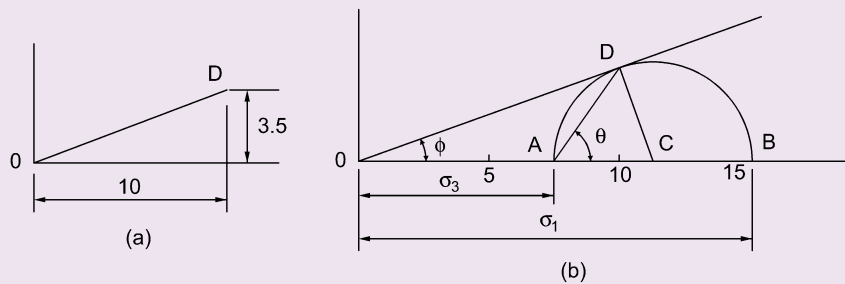


Fig. 4.8 Example 4.1.

4.4 Cohesion

It is possible to make a vertical cut in silts and clays and for this cut to remain standing, unsupported, for some time. This cannot be done with a dry sand which, on removal of the cutting implement, will slump until its slope is equal to an angle known as the *angle of repose*. In silts and clays, therefore, some other factor must contribute to shear strength. This factor is called cohesion and results from the state of drainage within the soil mass: water in a cohesive soil cannot drain quickly and so the soil is claimed to be in an undrained state, and the undrained cohesion is providing strength to the soil. In terms of the Mohr diagram this means that the strength envelope for the soil, for undrained conditions, no longer goes through the origin but intercepts the shear stress axis (see Fig. 4.9). The value of the intercept, to the same scale as σ_n , gives a measure of the unit cohesion available and is given the symbols c_u . In Fig. 4.9, as the soil is in an *undrained* state, the angle of shearing resistance, ϕ_u is equal to zero.

4.5 Coulomb's law of soil shear strength

It can be seen that the shear resistance offered by a particular soil is made up of the two components of friction and cohesion. Frictional resistance does not have a constant value but varies with the value of normal stress acting on the shear plane, whereas cohesive resistance has a constant value which is independent of the value of σ_n . In 1776, Coulomb suggested that the equation of the strength envelope of a soil could be expressed by the straight line equation



Fig. 4.9 A cohesive soil, subjected to undrained conditions and zero total normal stress will still exhibit a shear stress, c_u .

$$\tau_f = c + \sigma \tan \phi$$

where

τ_f = shear stress at failure, i.e. the shear strength

c = unit cohesion

σ = total normal stress on failure plane

ϕ = angle of shearing resistance.

The equation gave satisfactory predictions for sands and gravels, for which it was originally intended, but it was not so successful when applied to silts and clays. The reasons for this are now well known and are that the drainage conditions under which the soil is operating together with the rate of the applied loading have a considerable effect on the amount of shearing resistance that the soil will exhibit. None of this was appreciated in the 18th century, and this lack of understanding continued more or less until 1925 when Terzaghi published his theory of effective stress.

Note: It should be noted that there are other factors that affect the value of the angle of shearing resistance of a particular soil. These include the amount of friction between the soil particles, the shape of the particles and the degree of interlock between them, the density of the soil and its previous stress history.

Effective stress, σ'

If a soil mass is subjected to the action of compressive forces applied at its boundaries, then the stresses induced within the soil at any point can be estimated by the theory of elasticity, described in Chapter 3. For most soil problems, estimations of the values of the principal stresses σ_1 , σ_2 and σ_3 acting at a particular point are required. Once these values have been obtained, the values of the normal and shear stresses acting on any plane through the point can be computed.

At any point in a saturated soil each of the three principal stresses consists of two parts:

- (1) u , the neutral pressure acting in both the water *and* in the solid skeleton in every direction with equal intensity;
- (2) the balancing pressures $(\sigma_1 - u)$, $(\sigma_2 - u)$ and $(\sigma_3 - u)$.

As explained in Section 3.4, Terzaghi's theory is that only the balancing pressures, i.e. the effective principal stresses, influence volume and strength changes in saturated soils:

Principal effective stress = Principal normal stress – Pore water pressure

i.e.

$$\sigma'_1 = \sigma_1 - u, \text{ etc.}$$

4.6 Modified Coulomb's law

Shear strength depends upon effective stress and not total stress. Coulomb's equation must therefore be modified in terms of effective stress and becomes:

$$\tau_f = c' + \sigma' \tan \phi'$$

where

c' = unit cohesion, with respect to effective stresses

σ' = effective normal stress acting on failure plane

ϕ' = angle of shearing resistance, with respect to effective stresses.

It is seen that, dependent upon the loading and drainage conditions, it is possible for a clay soil to exhibit purely frictional shear strength (i.e. to act as a ' $c' = 0$ ' or ' ϕ'' ' soil), when it is loaded under drained conditions or to exhibit only cohesive strength (i.e. to act as a ' $\phi = 0$ ' or ' c_u ' soil) when it is loaded under undrained conditions. Obviously, at an interim stage the clay can exhibit both cohesion and frictional resistance (i.e. to act as a ' $c' - \phi''$ ' soil).

4.7 The Mohr–Coulomb yield theory

Over the years various yield theories have been proposed for soils. The best known ones are: the Tresca theory, the von Mises theory, the Mohr–Coulomb theory and the critical state theory. The first three theories have been described by Bishop (1966) and the critical state theory by Schofield and Wroth (1968) and by Muir Wood (1991).

The Mohr–Coulomb theory does not consider the effect of strains or volume changes that a soil experiences on its way to failure; nor does it consider the effect of the intermediate principal stress, σ_2 . Nevertheless satisfactory predictions of soil strength are obtained and, as it is simple to apply, the Mohr–Coulomb theory is widely used in the analysis of most practical problems which involve soil strength.

The Mohr strength theory is really an extension of the Tresca theory, which in turn was probably based on Coulomb's work – hence the title. The theory assumes that the difference between the major and minor principal stresses is a function of their sum, i.e. $(\sigma_1 - \sigma_3) = f(\sigma_1 + \sigma_3)$. Any effect due to σ_2 is ignored.

The Mohr circle has been discussed earlier in this chapter and a typical example of a Mohr circle diagram is shown in Fig. 4.10. The intercept on the shear stress axis of the strength envelope is the intrinsic pressure, i.e. the strength of the material when under zero normal stress. As we know, this intercept is called cohesion in soil mechanics.

In Fig. 4.10:

$$\sin \phi = \frac{DC}{O'C} = \frac{\frac{1}{2}(\sigma_1 - \sigma_3)}{k + \frac{1}{2}(\sigma_1 + \sigma_3)} = \frac{\sigma_1 - \sigma_3}{2k + \sigma_1 + \sigma_3}$$

Hence

$$\sigma_1 - \sigma_3 = 2k \sin \phi + (\sigma_1 + \sigma_3) \sin \phi$$

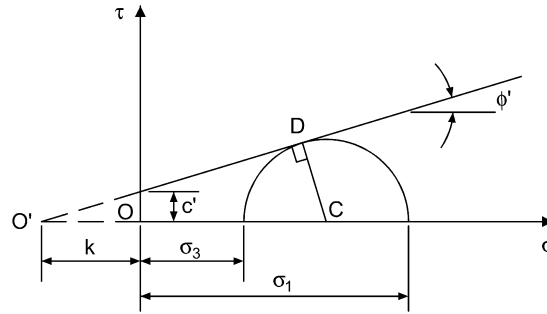


Fig. 4.10 Mohr circle diagram.

Now

$$k = c \cot \phi$$

$$\Rightarrow (\sigma_1 - \sigma_3) = 2c \cos \phi + (\sigma_1 + \sigma_3) \sin \phi$$

which is the general form of the Mohr–Coulomb theory.

The equation can be expressed in terms of either total stress (as shown) or effective stress:

$$(\sigma'_1 - \sigma'_3) = 2c' \cos \phi' + (\sigma'_1 + \sigma'_3) \sin \phi'$$

4.8 Determination of the shear strength parameters

The shear strength of a soil is controlled by the effective stress that acts upon it and it is therefore obvious that a geotechnical analysis involving the operative strength of a soil should be carried out in terms of the effective stress parameters ϕ' and c' . This is the general rule and, as you might expect, there is at least one exception. The case of a fully saturated clay subjected to undrained loading is more appropriately analysed using total stress values and c_u than by an effective stress approach. As will be illustrated in later chapters, such a situation can arise in both slope stability and bearing capacity problems.

It is seen therefore, that both the values of the undrained parameter c_u , and of the drained parameters, ϕ' and c' are generally required. They are obtained from the results of laboratory tests carried out on representative samples of the soil with loading and drainage conditions approximating to those in the field where possible. The tests in general use are the direct shear box test, the triaxial test and the unconfined compression test, an adaptation of the triaxial test.

4.8.1 The direct shear box test

The apparatus consists of a brass box, split horizontally at the centre of the soil specimen. The soil is gripped by perforated metal grilles, behind which porous discs can be placed if required to allow the sample to drain (see Fig. 4.11).

The usual plan size of the sample is $60 \times 60 \text{ mm}^2$, but for testing granular materials such as gravel or stony clay it is necessary to use a larger box, generally $300 \times 300 \text{ mm}^2$, although even greater dimensions are sometimes used.

A vertical load is applied to the top of the sample by means of weights. As the shear plane is predetermined in the horizontal direction the vertical load is also the normal load on the plane of failure. Having applied the required vertical load, a shearing force is gradually exerted on the box from an electrically driven screwjack. The shear force is measured by means of a load transducer connected to a computer.

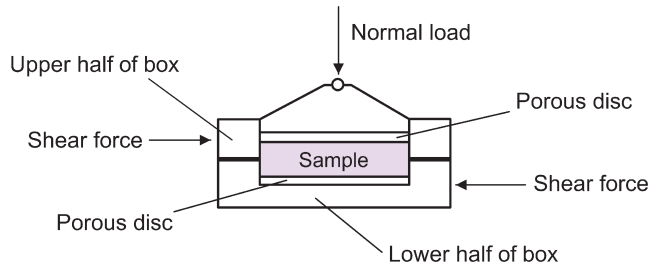


Fig. 4.11 Shear box assembly.

By means of additional transducers (fixed to the shear box) it is possible to determine both the horizontal and the vertical strains of the test sample at any point during shear:

$$\text{Horizontal strain (\%)} = \frac{\text{Movement of box}}{\text{Length of sample}}$$

The load reading is taken at fixed horizontal displacements, and failure of the soil specimen is indicated by a sudden drop in the magnitude of the reading or a levelling off in successive readings. In most cases the computer plots a graph of the shearing force against horizontal strain as the test progresses. Failure of the soil is visually apparent from a turning point in the graph (for dense soils) or a leveling off of the graph (for loose soils).

The apparatus can be used for both drained and undrained tests. Although undrained tests on silts and sands are not possible (because drainage will occur), the test procedure can be modified to maintain constant volume conditions during shear by adjusting the hanger weights. This procedure, in effect, gives an undrained state.

A sand can be tested either dry or saturated. If dry there will be no pore water pressures and the intergranular pressure will equal the applied stress. If the sand is saturated, the pore water pressure will be zero due to the quick drainage, and the intergranular pressure will again equal the applied stress.

Example 4.2: Shear box test (i)

Drained shear box tests were carried out on a series of soil samples with the following results:

Test no.	Total normal stress (kPa)	Total shear stress at failure (kPa)
1	100	98
2	200	139
3	300	180
4	400	222

Determine the effective cohesion and angle of shearing resistance.

Solution:

In this case, both the normal and the shear stresses at failure are known, so there is no need to draw stress circles and the four failure points may simply be plotted. These

points must lie on the strength envelope and the best straight line through the points will establish it (Fig. 4.12).

From the plot, $c' = 55 \text{ kPa}$; $\phi' = 23^\circ$.

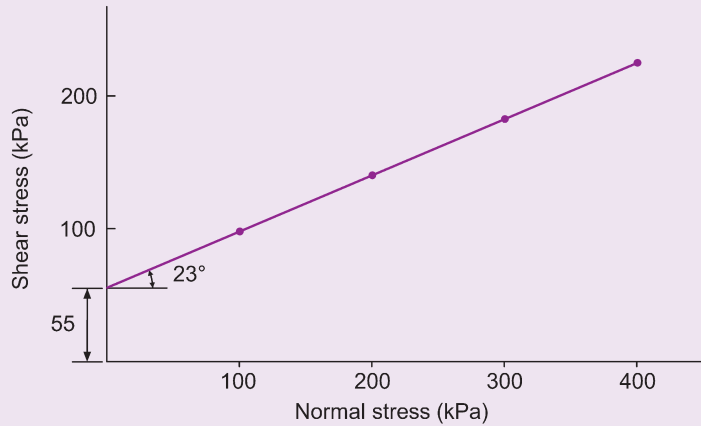


Fig. 4.12 Example 4.2.

Example 4.3: Shear box test (ii)

The following results were obtained from a drained shear box test carried out on a set of undisturbed soil samples:

Normal load (kN)	0.2	0.4	0.8
Strain (%)	Shearing force (N)		
0	0	0	0
1	21	33	45
2	46	72	101
3	70	110	158
4	89	139	203
5	107	164	248
6	121	180	276
7	131	192	304
8	136	201	330
9	138	210	351
10	138	217	370
11	137	224	391
12	136	230	402
13		234	410
14		237	414
15		236	416
16			417
17			417
18			415

The cross-sectional area of the box was 3600 mm² and the test was carried out in a fully instrumented shear box apparatus.

Determine the strength parameters of the soil in terms of effective stress.

Solution:

The plot of load transducer readings against strain is shown in Fig. 4.13a. From this plot, the maximum readings for normal loads of 0.2, 0.4 and 0.8 kN were 138, 237 and 417 kN.

For this particular case, the maximum readings could obviously have been obtained directly from the tabulated results, but viewing the plots is sometimes useful to demonstrate whether one of the sets of readings differs from the other two.

The shear stress at each maximum load reading is calculated.

Normal load (kN)	Normal stress (kPa)	Shear force (N)	Shear stress (kPa)
0.2	$\frac{0.2 \times 10^6}{3600} = 56$	138	$\frac{0.138 \times 10^6}{3600} = 38$
0.4	111	237	66
0.8	222	417	116

The plot of shear stress to normal stress is given in Fig. 4.13b.

The effective stress envelope is obtained by drawing a straight line through the three points. The strength parameters are: $\phi' = 25^\circ$; $c' = 13$ kPa.

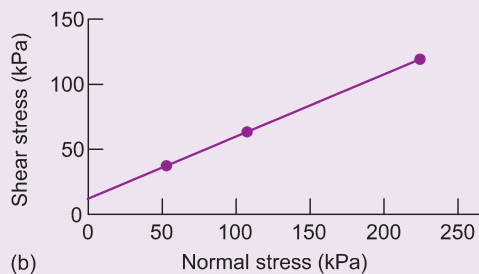
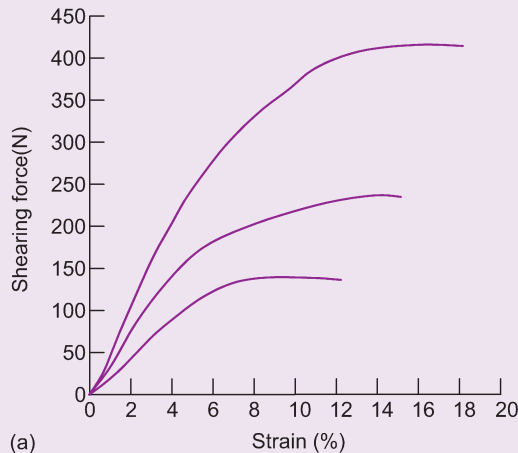


Fig. 4.13 Example 4.3.

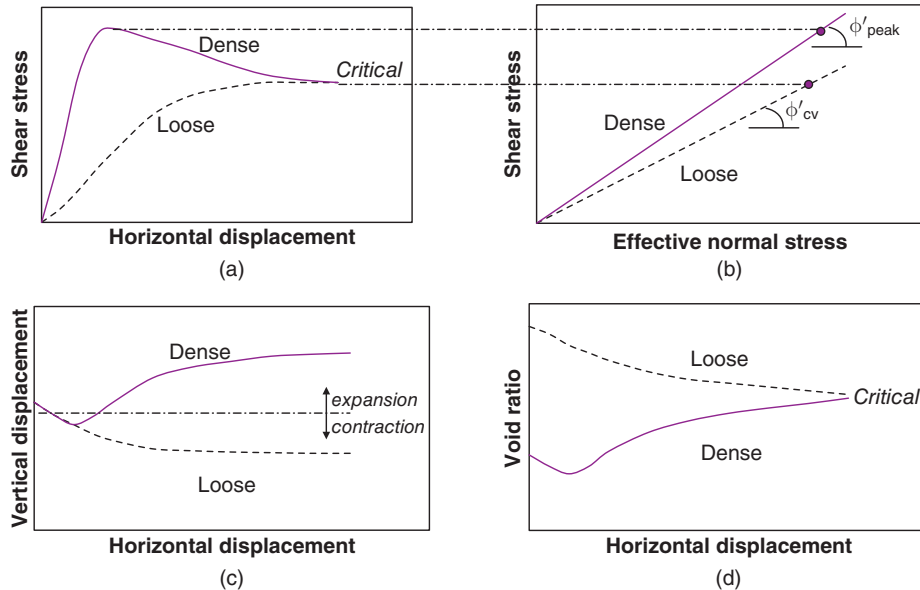


Fig. 4.14 Shear box results on loose and dense samples of the same soil: (a) shear stress v 's horizontal displacement; (b) shear stress v 's normal stress; (c) vertical displacement v 's horizontal displacement; (d) void ratio v 's horizontal displacement.

4.8.2 The effect of density on shear strength

The initial density of a soil tested in a shear box determines the way in which the soil will behave during shearing. If two samples of the same soil are tested in the shear box, one sample placed in a loose state and the other compacted to a higher density, the plots of both measured shear stress and vertical displacement to horizontal displacement will be of the forms shown in Fig. 4.14a and c. The strength envelopes (shear stress against normal stress) are shown in Fig. 4.14b.

If the movement of pore water is restricted, the shear strength of the sand will be affected: the dense sand will have negative pore pressures induced in it, causing an increase in shear strength, while a loose sand will have positive pore pressures induced with a corresponding reduction in strength (Fig. 4.14a and b). A practical application of this effect occurs when a pile is driven into sand, the load on the sand being applied so suddenly that, for a moment, the water it contains has no time to drain away.

It is seen from Fig. 4.14c that as the shear box test progresses, the initially dense soil expands in volume (dilates) – indicated by the increase in vertical displacement of the sample – until a steady volume is reached. In contrast, the initially loose soil contracts until some steady state of volume is reached. This steady state of volume (referred to as the critical volume) is found to be the same value for both samples and, as shearing continues, the volume remains constant. The corresponding density of the soil at this volume is known as the critical density.

The critical volume is not evident in Fig. 4.14c, but if we consider the changes in void ratio that are happening during shearing, we can identify the critical volume (Fig. 4.14d). Here the loose sample starts with a high void ratio, and the dense sample starts with a lower one. As the test progresses, the void ratios converge thus indicating the presence of the critical volume, and the existence of conditions which create a state known as the critical state.

From Fig. 4.14 we see that both the ultimate shear strength and the ultimate void ratio are the same for both samples. Thus, it is seen that soils will reach the critical state when undergoing continuous shearing at constant stress and constant volume. The critical state is described a little further in Section 4.14.

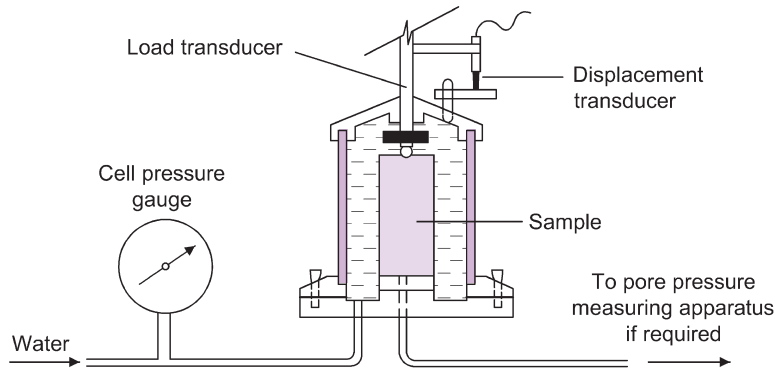


Fig. 4.15 The triaxial apparatus.

4.8.3 The triaxial test

As its name implies this test (Fig. 4.15) subjects the soil specimen to three compressive stresses at right angles to each other, one of the three stresses being increased until the sample fails in shear. Its great advantage is that the plane of shear failure is not predetermined as in the shear box test.

The soil sample test is cylindrical with a height equal to twice its diameter. In the UK, the usual sizes are 76 mm high by 38 mm diameter and 200 mm high by 100 mm diameter.

The test sample is first placed on the pedestal of the base of the triaxial cell and a loading cap is placed on its top. A thin rubber membrane is then placed over the sample, including the pedestal and the loading cap, and made watertight by the application of tight rubber ring seals, known as 'O' rings, around the pedestal and the loading cap.

The upper part of the cell, which is cylindrical and generally made of Perspex, is next fixed to the base and the assembled cell is filled with water. The water is then subjected to a predetermined value of pressure, known as the cell pressure, which is kept constant throughout the length of the test. It is this water pressure that subjects the sample to an all-round pressure.

The additional axial stress is created by an axial load applied through a load transducer, in a similar way to that in which the horizontal shear force is applied in the shear box apparatus. By the action of an electric motor, the axial load is gradually increased at a constant rate of strain and as the axial load is applied the sample suffers continuous compressive deformation. The amount of this vertical deformation is obtained from a deformation transducer. Throughout the test, until the sample fails, readings of the deformation transducer and corresponding readings of axial load are taken. With this data, the computer plots the variation of the axial load on the sample against its vertical strain.

Determination of the additional axial stress

From the load transducer it is possible at any time during the test to determine the additional axial load that is being applied to the sample.

During the application of this load, the sample experiences shortening in the vertical direction with a corresponding expansion in the horizontal direction. This means that the cross-sectional area of the sample varies, and it has been found that very little error is introduced if the cross-sectional area is evaluated on the assumption that the volume of the sample remains unchanged during the test. In other words the cross-sectional area is found from:

$$\text{Cross-sectional area} = \frac{\text{Volume of sample}}{\text{Original length} - \text{Vertical deformation}}$$

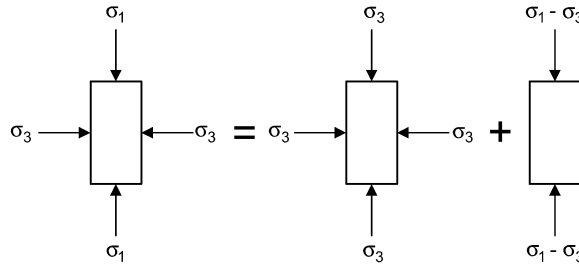


Fig. 4.16 Stresses in the triaxial test.

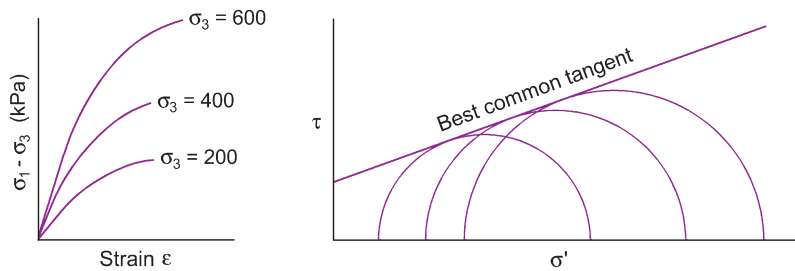


Fig. 4.17 Typical triaxial test results.

Principal stresses

The intermediate principal stress, σ_2 , and the minor principal stress, σ_3 , are equal and are the radial stresses caused by the cell pressure, p_c . The major principal stress, σ_1 , consists of two parts: the cell water pressure acting on the ends of the sample and the additional axial stress from the load transducer, q . To ensure that the cell pressure acts over the whole area of the end cap, the bottom of the plunger is drilled so that the pressure can act on the ball seating.

From this we see that the triaxial test can be considered as happening in two stages (Fig. 4.16), the first being the application of the cell water pressure (p_c , i.e. σ_3), while the second is the application of a deviator stress (q , i.e. $[\sigma_1 - \sigma_3]$).

A set of at least three samples is tested. The deviator stress is plotted against vertical strain and the point of failure of each sample is obtained. The Mohr circles for each sample are then drawn and the best common tangent to the circles is taken as the strength envelope (Fig. 4.17). A small curvature occurs in the strength envelope of most soils, but this effect is slight and for all practical work the envelope can be taken as a straight line.

Types of failure

Not all soil samples will fail in pure shear; there are generally some barrelling effects as well. In a sample that fails completely by barrelling there is no definite failure point, the deviator stress simply increasing slightly with strain. In this case an arbitrary value of the failure stress is taken as the stress value at 20% strain (see Fig. 4.18).

Note: In the past, soil laboratories made use of dial gauges to measure displacement, and proving rings to measure applied loads. Some laboratories still use such equipment, and any reader interested in an explanation and examples of their use is guided to the 6th, or earlier, editions of this book.

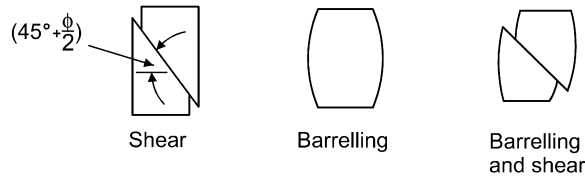


Fig. 4.18 Types of failure in the triaxial test.

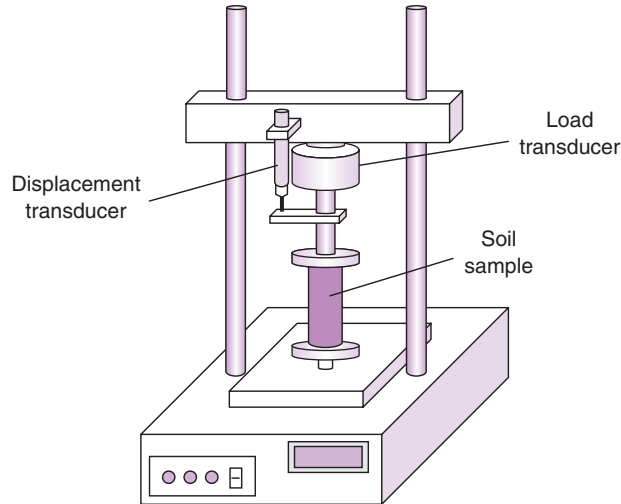


Fig. 4.19 The unconfined compression test.

4.8.4 The unconfined compression test

In this test (Fig. 4.19) no all-round pressure is applied to the soil specimen and the results obtained give a measure of the *unconfined* compressive strength of the soil. The test is only applicable to cohesive soils and, although not as popular as the triaxial test, it is used where a rapid result is required. An electric motor within the base unit drives the platen supporting the specimen upwards and the load carried by the soil is recorded by the load transducer. The vertical strain is recorded by a displacement transducer and the load–displacement curve is plotted on a PC connected to the system. The load and strain readings at failure are used to give a direct measure of the unconfined compressive strength of the soil.

4.9 Determination of the shear strength parameters from triaxial testing

4.9.1 Determination of the total stress parameter c_u

The undrained shear test

The simplest method to determine values for the total stress parameter c_u is to subject suitable samples of the soil to this test. In the test the soil sample is prevented from draining during shear and is therefore sheared immediately after the application of the normal load (in the shear box) or immediately after the application of the cell pressure (in the triaxial apparatus). A sample can be tested in 15 minutes or less, so that there is no time for any pore pressures developed to dissipate or to distribute themselves evenly

throughout the sample. Measurements of pore water pressure are therefore not possible and the results of the test can only be expressed in terms of total stress.

The unconfined compression apparatus is only capable of carrying out an undrained test on a clay sample with no radial pressure applied. The test takes about a minute.

Example 4.4: Quick undrained triaxial test

A sample of clay was subjected to an undrained triaxial test with a cell pressure of 100 kPa and the additional axial stress necessary to cause failure was found to be 188 kPa. Assuming that $\phi_u = 0^\circ$, determine the value of additional axial stress that would be required to cause failure of a further sample of the soil if it was tested undrained with a cell pressure of 200 kPa.

Solution:

The first step is to draw the stress circle that represents the conditions for the first test, i.e. $\sigma_3 = 100$ kPa and $\sigma_1 = 188 + 100 = 288$ kPa. The circle is shown in Fig. 4.20 and the strength envelope representing the condition that $\phi_u = 0^\circ$ is now drawn as a horizontal line tangential to the stress circle. The next step is to draw the stress circle with $\sigma_3 = 200$ kPa and tangential to the strength envelope. Where this circle cuts the normal stress axis it gives the value of σ_1 , which is seen to be 388 kPa.

The additional axial stress required for failure = $(\sigma_1 - \sigma_3) = (388 - 200) = 188$ kPa.

It can be seen from the figure that $c_u = 94$ kPa. This value can be obtained numerically, from the result of either test, if it is remembered that:

$$c_u = \frac{\sigma_1 - \sigma_3}{2} \quad \text{when} \quad \phi_u = 0^\circ$$

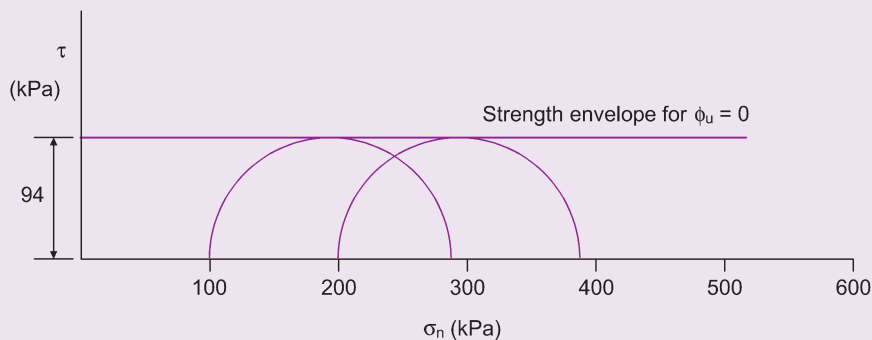


Fig. 4.20 Example 4.4.

4.9.2 Determination of the effective stress parameters c' and ϕ'

There are two relevant triaxial tests.

i) The drained test

A porous disc is placed on the pedestal before the test sample is placed in position so that water can drain out from the soil. The triaxial cell is then assembled, filled with water and pressurised. The cell

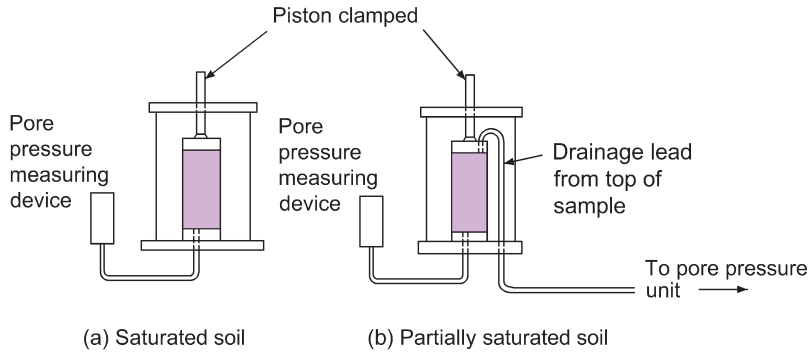


Fig. 4.21 Alternative arrangements for consolidation of test samples.

pressure creates a pore water pressure within the soil sample and the apparatus is left until the sample has consolidated, i.e. until the pore water pressure has been dissipated by water seeping out through the porous disc into the pore pressure measuring device (see Fig. 4.21). This process usually takes about a day but is quicker if a porous disc is installed beneath the loading cap and joined to the pedestal disc by connecting strips of vertical filter paper placed on the outside of the sample but within the rubber membrane. During this consolidation stage the pore pressure is monitored so that the point when full consolidation has been reached can be identified.

An alternative method (sometimes preferable with a partially saturated soil) is to allow drainage from one end of the sample and to connect a second pore pressure measuring device to the other. When the pore water pressure reaches zero the sample is consolidated.

When consolidation has been completed the sample is sheared by applying a deviator stress at such a low rate of strain that any pore water pressures induced in the sample have time to dissipate through the porous discs. In this test, the pore water pressure is therefore always zero and the effective stresses are consequently equal to the applied stresses.

The main drawback of the drained test is the length of time it takes, with the attendant risk of testing errors: an average test time for a clay sample is about three days but with some soils a test may last as long as two weeks.

Example 4.5: Drained triaxial test

A series of drained triaxial tests were performed on a soil. Each test was continued until failure and the effective principal stresses for the tests were:

Test no.	σ'_3 (kPa)	σ'_1 (kPa)
1	200	570
2	300	875
3	400	1162

Plot the relevant Mohr stress circles and hence determine the strength envelope of the soil with respect to effective stress.

Solution:

The Mohr circle diagram is shown in Fig. 4.22. The circles are drawn first and then, by constructing the best common tangent to these circles, the strength envelope is obtained.

In this case it is seen that the soil is cohesionless as there is no cohesive intercept. By measurement, $\phi' = 29^\circ$.

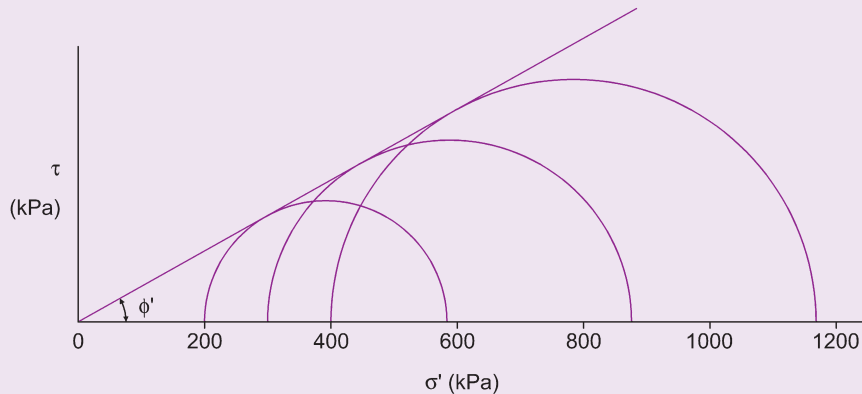


Fig. 4.22 Example 4.5.

ii) The consolidated undrained test

This is the most common form of triaxial test used in soils laboratories to determine c' and ϕ' . It has the advantage that the shear part of the test can be carried out in only two to three hours.

The sample is consolidated exactly as for the drained test, but at this stage the drainage connection is shut off and the sample is sheared under undrained conditions. The application of the deviator stress induces pore water pressures (which are measured), and the effective deviator stress is then simply the total deviator stress less the pore water pressure.

Although the sample is sheared undrained, the rate of shear must be slow enough to allow the induced pore water pressures to distribute themselves evenly throughout the sample. For most soils a strain rate of 0.05 mm/min is satisfactory, which means that the majority of samples can be sheared in under three hours.

Note: With respect to total stress, the strength parameter is c_u (because $\phi = 0$) while with respect to effective stresses the strength parameters are c' and ϕ' .

Testing with back pressures

It should be noted that, with some soils, the reduction of the pore water pressure to atmospheric during the consolidation stage of a triaxial test on a saturated soil sample can cause air dissolved in the water to come out of solution. If this happens, the sample is no longer fully saturated and this can affect the results obtained during the shearing part of the test.

To maintain a state of occlusion in the pore water, i.e. the state where air can no longer exist in a free state but only in the form of bubbles, its pressure can be increased by applying a pressure (known as a back pressure) to the water in the drainage line (the soil water can still drain from the sample). The back

pressure ensures that air does not come out of solution and, by applying the same increase in pressure to the value of the cell pressure, the effective stress situation is unaltered.

The technique can also be used to create full saturation during the consolidation and shearing of partially saturated natural or remoulded soils for both the drained and consolidated undrained triaxial tests. In these cases, back pressure values often as high as 650 kPa are necessary in order to achieve full saturation.

Example 4.6: Consolidated undrained triaxial test (i)

The following results were obtained from a series of consolidated undrained triaxial tests carried out on undisturbed samples of a compacted soil:

Cell pressure (kPa)	Additional axial load at failure (N)
200	342
400	388
600	465

Each sample, originally 76 mm long and 38 mm in diameter, experienced a vertical deformation of 5.1 mm.

Draw the strength envelope and determine the Coulomb equation for the shear strength of the soil.

Solution:

$$\text{Volume of sample} = \frac{\pi}{4} \times 38^2 \times 76 = 86\,193 \text{ mm}^3$$

$$\text{Therefore cross-sectional area at failure} = \frac{86\,193}{76 - 5.1} = 1216 \text{ mm}^2.$$

Cell pressure σ_3 (kPa)	Deviator stress ($\sigma_1 - \sigma_3$) (kPa)	Major principal stress σ_1 (kPa)
200	$\frac{0.342 \times 10^6}{1216} = 281$	481
400	$\frac{0.388 \times 10^6}{1216} = 319$	719
600	$\frac{0.465 \times 10^6}{1216} = 382$	982

The Mohr circles and the strength envelope are shown in Fig. 4.23. From the diagram $\phi' = 7^\circ$; $c' = 100$ kPa.

Coulomb's equation is:

$$c' + \sigma \tan \phi' = 100 + \sigma \tan 7^\circ = 100 + 0.123 \sigma \text{ kPa}$$

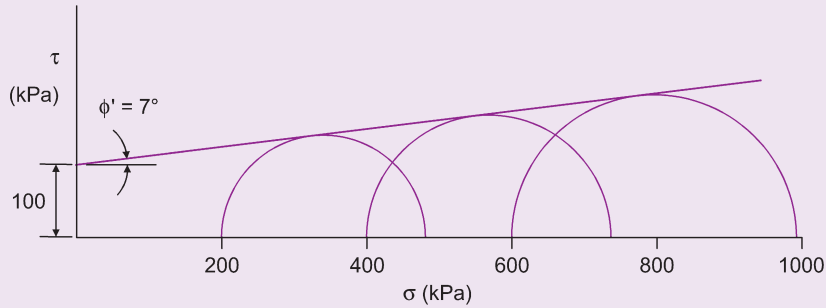


Fig. 4.23 Example 4.6.

Example 4.7: Effective and total stress tests on same soil

A series of undisturbed samples from a normally consolidated clay was subjected to consolidated undrained tests.

The results were:

Cell pressure (kPa)	Deviator stress at failure (kPa)	Pore water pressure at failure (kPa)
200	118	110
400	240	220
600	352	320

Plot the strength envelope of the soil (a) with respect to total stresses and (b) with respect to effective stresses.

Solution:

(a) *Effective stress:*

- (1) $\sigma'_3 = 200 - 110 = 90$ kPa; $\sigma'_1 = 118 + 90 = 208$ kPa
- (2) $\sigma'_3 = 400 - 220 = 180$ kPa; $\sigma'_1 = 240 + 180 = 420$ kPa
- (3) $\sigma'_3 = 600 - 320 = 280$ kPa; $\sigma'_1 = 352 + 280 = 632$ kPa

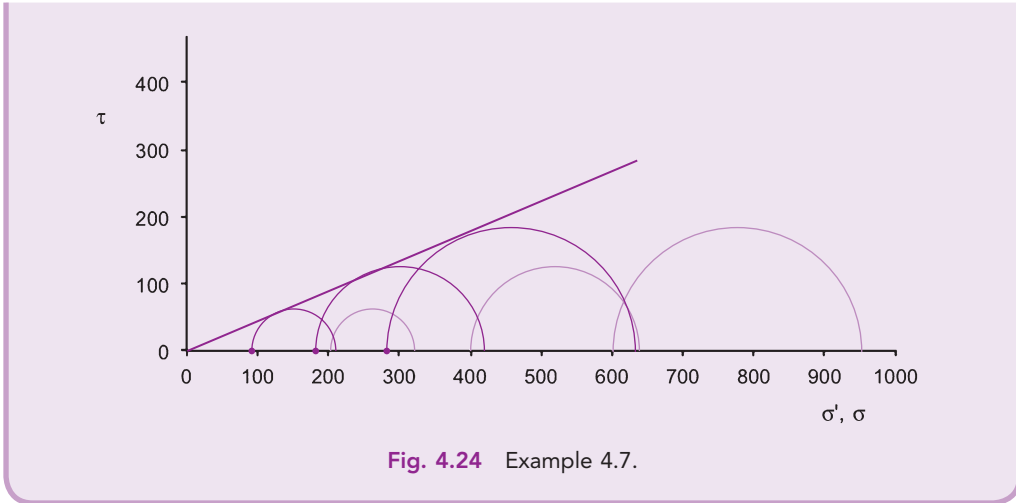
(b) *Total stress:*

- (1) $\sigma_3 = 200$ kPa; $\sigma_1 = 200 + 118 = 318$ kPa
- (2) $\sigma_3 = 400$ kPa; $\sigma_1 = 400 + 240 = 640$ kPa
- (3) $\sigma_3 = 600$ kPa; $\sigma_1 = 600 + 352 = 952$ kPa

The two Mohr circle diagrams are shown in Fig. 4.24. The total stress circles are shown in lighter colour.

The value of ϕ' can be obtained from Fig. 4.24 by direct measurement. Alternatively, knowing that the effective stress strength envelope goes through the origin, the value can be obtained from the Mohr-Coulomb equation. Consider the Mohr stress circle created when the cell pressure, $\sigma'_3 = 200$ kPa:

$$\sin \phi' = \frac{\sigma'_1 - \sigma'_3}{\sigma'_1 + \sigma'_3} = \frac{118}{90 + 208} = 0.396, \quad \text{i.e.} \quad \phi' = 23.3^\circ$$



4.10 The pore pressure coefficients A and B

These coefficients were proposed by Skempton in 1954 and are now almost universally accepted. The relevant theory is set out below.

$$\text{Volumetric strain} = \frac{\text{Change in volume}}{\text{Original volume}} = \frac{-\Delta V}{V}$$

(ΔV is negative when dealing with compressive stresses as is the general case in soil mechanics.)

Consider an elemental cube of unit dimensions and acted upon by compressive principal stresses σ_1 , σ_2 and σ_3 (Fig. 4.25).

On horizontal plane (2,3):

$$\text{Compressive strain} = \frac{\sigma_1}{E}$$

$$\text{Lateral strain from stresses } \sigma_2 \text{ and } \sigma_3 = -\left(\frac{\mu\sigma_2}{E} + \frac{\mu\sigma_3}{E}\right)$$

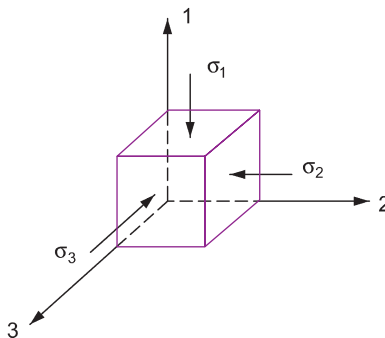


Fig. 4.25 Compressive principal stresses.

where $\mu =$ Poisson's ratio.

$$\text{i.e. total strain on this plane} = \frac{\sigma_1}{E} - \frac{\mu}{E}(\sigma_2 + \sigma_3).$$

Similarly, strains on the other two planes are:

$$\frac{\sigma_2}{E} - \frac{\mu}{E}(\sigma_3 + \sigma_1)$$

$$\frac{\sigma_3}{E} - \frac{\mu}{E}(\sigma_1 + \sigma_2)$$

Now it can be shown that, no matter what the stresses on the faces of the cube, the volumetric strain is equal to the sum of the strains on each face.

$$-\frac{\Delta V}{V} = \frac{(\sigma_1 + \sigma_2 + \sigma_3)}{E} - \frac{2\mu}{E}(\sigma_1 + \sigma_2 + \sigma_3)$$

i.e.

$$-\frac{\Delta V}{V} = \frac{1-2\mu}{E}(\sigma_1 + \sigma_2 + \sigma_3)$$

Compressibility of a material is the volumetric strain per unit pressure, i.e. for a soil skeleton,

$$C_c = \frac{\Delta V}{V} \text{ per unit pressure increase}$$

Average pressure increase = $\frac{1}{3}(\sigma_1 + \sigma_2 + \sigma_3)$. Therefore, for a perfectly elastic soil:

$$C_c = \frac{3(1-2\mu)}{E} \frac{(\sigma_1 + \sigma_2 + \sigma_3)}{(\sigma_1 + \sigma_2 + \sigma_3)} = \frac{3(1-2\mu)}{E}$$

Consider a sample of saturated soil subjected to an undrained triaxial test. The applied stress system for this test has already been discussed (Fig. 4.16). The pore water pressure, u , produced during the test will be made up of two parts corresponding to the application of the cell pressure and the deviator stress.

Let

$u_a =$ pore pressure due to σ_3

$u_d =$ pore pressure due to $(\sigma_1 - \sigma_3)$.

If we consider the effects of small total pressure increments $\Delta\sigma_3$ and $\Delta\sigma_1$ then $\Delta\sigma_3$ will cause a pore pressure change Δu_a and $\Delta\sigma_1 - \Delta\sigma_3$ will cause a pore pressure change Δu_d .

Effect of $\Delta\sigma_3$

When an all-around pressure is applied to a saturated soil and drainage is prevented, the proportions of the applied stress carried by the pore water and by the soil skeleton depend upon their relative compressibilities:

$$\text{Compressibility of the soil } C_c = \frac{-\Delta V}{V\Delta\sigma_3}$$

$$\text{Compressibility of the pore water} = C_v = \frac{-\Delta V_v}{V_v \Delta u_a}$$

Consider a saturated soil of initial volume V .

Then volume of pore water = nV where n = porosity.

Assume a change in total ambient stress = $\Delta\sigma_3$.

Assume that the change in effective stress caused by this total stress increment is $\Delta\sigma'_3$ and that the corresponding change in pore water pressure is Δu_a . Then,

$$\text{Decrease in volume of soil skeleton} = C_c V \Delta\sigma'_3$$

and

$$\text{Decrease in volume of pore water} = C_v n V \Delta u_a$$

With no drainage these changes must be equal:

i.e.

$$C_c V \Delta\sigma'_3 = C_v n V \Delta u_a$$

$$\Rightarrow \Delta\sigma'_3 = \frac{n C_v}{C_c} \Delta u_a$$

Now

$$\Delta\sigma'_3 = \Delta\sigma_3 - \Delta u_a$$

$$\Rightarrow \frac{n C_v}{C_c} \Delta u_a = \Delta\sigma_3 - \Delta u_a$$

or

$$\Delta u_a \left(1 + \frac{n C_v}{C_c} \right) = \Delta\sigma_3$$

$$\Rightarrow \Delta u_a = \frac{\Delta\sigma_3}{1 + \frac{n C_v}{C_c}}$$

i.e.

$$\Delta u_a = B \Delta\sigma_3 \quad \text{where} \quad B = \frac{1}{1 + \frac{n C_v}{C_c}}$$

The compressibility of water is of the order of 1.63×10^{-7} kPa.

Typical results from soil tests are given in Table 4.1 and show that, for all saturated soils, B can be taken as equal to 1.0 for practical purposes.

Effect of $\Delta\sigma_1 - \Delta\sigma_3$

Increase in effective stresses:

$$\Delta\sigma'_1 = (\Delta\sigma_1 - \Delta\sigma_3) - \Delta u_d$$

$$\Delta\sigma'_2 = \Delta\sigma'_3 = -\Delta u_d$$

Table 4.1 Compression of saturated soils.

Soil type	Soft clay	Stiff clay	Compact silt	Loose sand	Dense sand
n (%)	60	37	35	46	43
C_c (m ² /kN)	4.79×10^{-4}	3.35×10^{-5}	9.58×10^{-5}	2.87×10^{-5}	1.44×10^{-5}
B	0.9998	0.9982	0.9994	0.9973	0.9951

$$\text{Change in volume of soil skeleton, } \Delta V_c = -C_c V (\Delta \sigma'_1 + 2\Delta \sigma'_3)$$

i.e.

$$\Delta V_c = -V \frac{C_c}{3} [(\Delta \sigma_1 - \Delta \sigma_3) - 3\Delta u_d]$$

Now

$$\Delta V_v = -C_v n \Delta u_d V \text{ and } \Delta V_c \text{ must equal } \Delta V_v$$

$$\Rightarrow \frac{1}{3} C_c (\Delta \sigma_1 - \Delta \sigma_3) - C_c \Delta u_d = C_v n \Delta u_d$$

or

$$\Delta u_d (C_c + n C_v) = C_c (\Delta \sigma_1 - \Delta \sigma_3)$$

$$\Rightarrow \Delta u_d = \frac{1}{1 + \frac{n C_v}{C_c}} \frac{1}{3} (\Delta \sigma_1 - \Delta \sigma_3)$$

$$= B \times \frac{1}{3} (\Delta \sigma_1 - \Delta \sigma_3)$$

Now

$$\Delta u = \Delta u_a + \Delta u_d$$

$$\Rightarrow \Delta u = B \left[\Delta \sigma_3 + \frac{1}{3} (\Delta \sigma_1 - \Delta \sigma_3) \right]$$

Generally a soil is not perfectly elastic and the above expression must be written in the form:

$$\Delta u = B [\Delta \sigma_3 + A (\Delta \sigma_1 - \Delta \sigma_3)]$$

where A is a coefficient determined experimentally.

The expression is often written in the form:

$$\Delta u = B \Delta \sigma_3 + \bar{A} (\Delta \sigma_1 - \Delta \sigma_3) \quad \text{where } \bar{A} = AB$$

\bar{A} and B can be obtained directly from the undrained triaxial test. As has been shown, for a saturated soil $B = 1.0$ and the above expression must be.

$$\Delta u = \Delta \sigma_3 + A (\Delta \sigma_1 - \Delta \sigma_3)$$

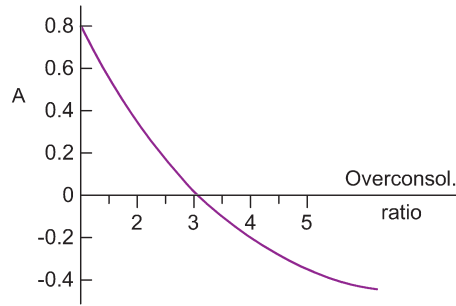


Fig. 4.26 Effects of overconsolidation on the pore pressure coefficient A.

4.10.1 Values of A

For a given soil, A varies with both the stress value and the rate of strain, due mainly to the variation of Δu_d with the deviator stress. The value of Δu_d under a particular stress system depends upon such factors as the degree of saturation and whether the soil is normally consolidated or overconsolidated. The value of A must be quoted for some specific point, e.g. at maximum deviator stress or at maximum effective stress ratio (σ'_1/σ'_3) at maximum deviator stress it can vary from 1.5 (for a highly sensitive clay) to -0.5 (for a heavily overconsolidated clay).

4.10.2 Variation of A

An important effect of overconsolidation is its effect on the pore pressure parameter A. With a normally consolidated clay the value of A at maximum deviator stress, A_f , is virtually the same in a consolidated undrained test no matter what cell pressure is used, but with an overconsolidated clay the value of A_f falls off rapidly with increasing overconsolidation ratio (Fig. 4.26).

Overconsolidation ratio is the ratio of preconsolidation pressure divided by the cell pressure used in the test. When the overconsolidation ratio is 1.0 the soil is normally consolidated.

Example 4.8: Consolidated undrained triaxial test (ii)

A series of consolidated undrained triaxial tests were carried out on undisturbed samples of an overconsolidated clay.

Results were:

Cell pressure (kPa)	Deviator stress at failure (kPa)	Pore water pressure at failure (kPa)
100	410	-65
200	520	-10
400	720	80
600	980	180

- (i) Plot the strength envelope for the soil with respect to effective stresses.
- (ii) If the preconsolidation to which the clay had been subjected was 800 kPa, plot the variation of the pore pressure parameter A_f with the overconsolidation ratio.

Solution:

The Mohr circle diagrams are shown in Fig. 4.27a. When a pore pressure is negative the principle of effective stress still applies, i.e. $\sigma' = \sigma - u$; for a cell pressure of 100 kPa, $\sigma_1 = 510$ and $u = -65$, so that

$$\sigma'_3 = 100 - (-65) = 165 \text{ kPa} \quad \text{and} \quad \sigma'_1 = 510 - (-65) = 575 \text{ kPa}$$

After consolidation in a consolidated undrained test (i.e. when shear commences) the soil is saturated, $B = 1$, and hence the pore pressure coefficient $\bar{A} = A$.

The results are shown plotted in Fig. 4.27b.

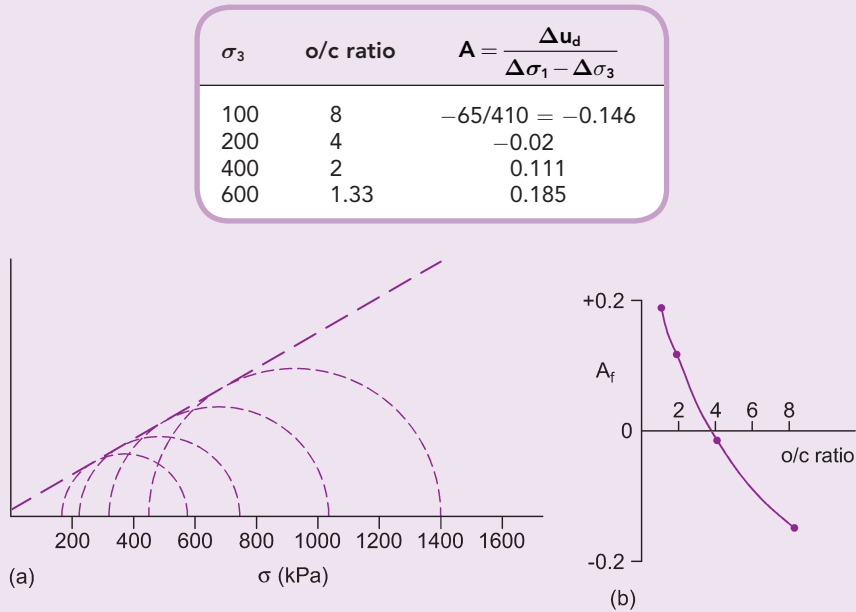


Fig. 4.27 Example 4.8.

Example 4.9: Pore pressure coefficients

The following results were obtained from an undrained triaxial test on a compacted soil sample using a cell pressure of 300 kPa. Before the application of the cell pressure the pore water pressure within the sample was zero.

Strain (%)	σ_1 (kPa)	u (kPa)
0.0	300	120
2.5	500	150
5.0	720	150
7.5	920	120
10.0	1050	80
15.0	1200	10
20.0	1250	-60

- (i) Determine the value of the pore pressure coefficient B and state whether or not the soil was saturated.
- (ii) Plot the variation of deviator stress with strain.
- (iii) Plot the variation of the pore pressure coefficient A with strain.

Solution:

(i)

$$B = \frac{\Delta u_a}{\Delta \sigma_3} = \frac{120}{300} = 0.4$$

The soil was partially saturated as B was less than 1.0.

Strain (%)	Δu_d	$(\Delta \sigma_1 - \Delta \sigma_3)$	\bar{A}	$A \left(\frac{\bar{A}}{B} \right)$
2.5	30	200	$\frac{30}{200} = 0.15$	0.375
5.0	30	420	0.071	0.178
7.5	0	620	0	0
10.0	-40	750	-0.053	-0.132
15.0	-110	900	-0.122	-0.304
20.0	-180	950	-0.188	-0.470

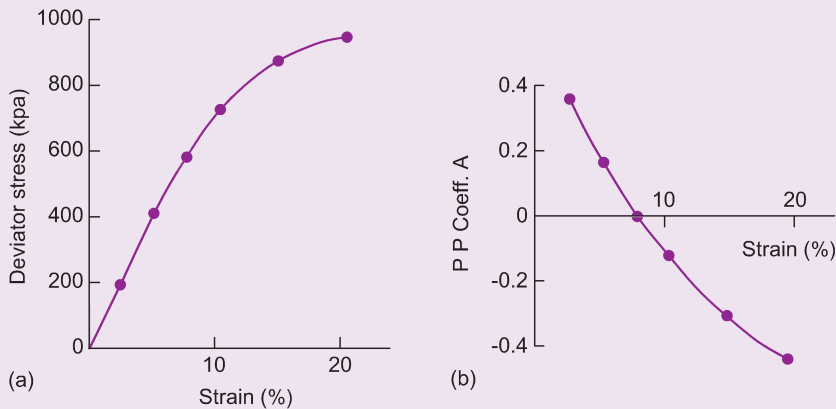


Fig. 4.28 Example 4.9.

4.11 The triaxial extension test

In the normal triaxial test the soil sample is subjected to an all-around water pressure and fails under an increasing axial load. This is known as a compression test in which $\sigma_1 > \sigma_2 = \sigma_3$.

When the cohesive intercept, c' , is equal to zero, as is the case for drained granular soils, silts and normally consolidated clays, then the relevant form of the Mohr-Coulomb equation is:

$$\sigma'_1 - \sigma'_3 = \sigma'_1 \sin \phi' + \sigma'_3 \sin \phi'$$

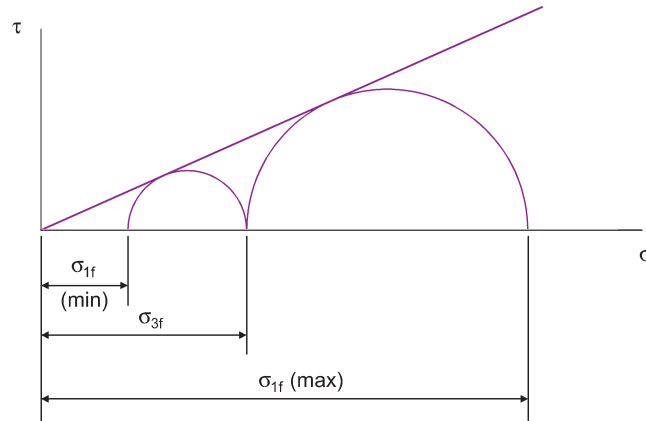


Fig. 4.29 Mohr circle diagram for triaxial compression and tension tests.

i.e.

$$\sigma'_{1f}(\text{max}) = \sigma'_{3f} \frac{1 + \sin \phi'}{1 - \sin \phi'}$$

where σ'_{1f} and σ'_{3f} are the respective stresses at failure.

It is possible to fail the sample in axial tension by first subjecting it to equal pressures σ'_1 and σ'_3 and then gradually reducing σ'_1 below the value of σ'_3 until failure occurs. This test is known as an extension test and the Mohr–Coulomb expression becomes:

$$\sigma'_{1f}(\text{min}) = \sigma'_{3f} \frac{1 - \sin \phi'}{1 + \sin \phi'} \quad \text{where} \quad \sigma'_1 < \sigma'_2 = \sigma'_3$$

The Mohr circle diagram showing the maximum and minimum values of σ'_1 for a fixed value of σ'_3 is shown in Fig. 4.29. In the triaxial compression test the stress state is $\sigma'_1 > \sigma'_2 = \sigma'_3$, and in the triaxial extension test the stress state is $\sigma'_1 < \sigma'_2 = \sigma'_3$.

The symbols used in Fig. 4.29 might be confusing to a casual observer. Strictly speaking, for the extension test, $\sigma'_{1f}(\text{min})$ should really be given the symbol σ'_{3f} and its accompanying σ'_{3f} given the symbol σ'_{1f} . In order to avoid this sort of confusion between major and minor principal stresses it has become standard practice to designate the axial effective stress as σ'_a and the radial effective stress as σ'_r .

A comprehensive survey of techniques used in the triaxial test was prepared by Bishop and Henkel (1962). For the standard triaxial tests discussed in this chapter, fuller descriptions can be found in BS 1377, and are given by Head (1992).

4.12 Behaviour of soils under shear

We saw in Section 4.8.2 that the behaviour of granular soil under shear depends on the initial density of the soil. Before continuing the subject, it is useful to introduce the following definitions.

- **Overburden:** The overburden pressure at a point in a soil mass is simply the weight of the material above it. The effective overburden is the pressure from this material less the pore water pressure due to the height of water extending from the point up to the water table.
- **Normally consolidated clay:** Clay which, at no time in its history, has been subjected to pressures greater than its existing overburden pressure.

- *Overconsolidated clay*: Clay which, during its history, has been subjected to pressures greater than its existing overburden pressure. One cause of overconsolidation is the erosion of material that once existed above the clay layer. Boulder clays are overconsolidated, as the many tons of pressure exerted by the mass of ice above them has been removed.
- *Preconsolidation pressure*: The maximum value of pressure exerted on an overconsolidated clay before the pressure was relieved.
- *Overconsolidation ratio*: The ratio of the value of the effective preconsolidation pressure to the value of the presently existing effective overburden pressure. A normally consolidated clay has an $OCR = 1.0$ whilst an overconsolidated clay has an $OCR > 1.0$.

4.12.1 Undrained shear

The shear strength of a soil, if expressed in terms of total stress, corresponds to Coulomb's Law, i.e.

$$\tau_f = c_u + \sigma \tan \phi_u$$

where

c_u = unit cohesion of the soil, with respect to total stress

ϕ_u = angle of shearing resistance of soil, with respect to total stress ($= 0$)

σ = total normal stress on plane of failure.

For saturated cohesive soils tested in undrained shear it is generally found that τ_f has a constant value being independent of the value of the cell pressure σ_3 (see Fig. 4.30). The main exception to this finding is a fissured clay.

Hence, we can say that $\phi_u = 0$ when a saturated cohesive soil is subjected to undrained shear. Hence:

$$\tau = c_u = \frac{1}{2}(\sigma_1 - \sigma_3)$$

Because of this, the term c_u is referred to as the *undrained shear strength* of the soil. As will be seen later, the value of c_u is used in slope stability analyses when it can be assumed that $\phi_u = 0$ and the value of c_u can be obtained on site by the simple and economical unconfined compression set.

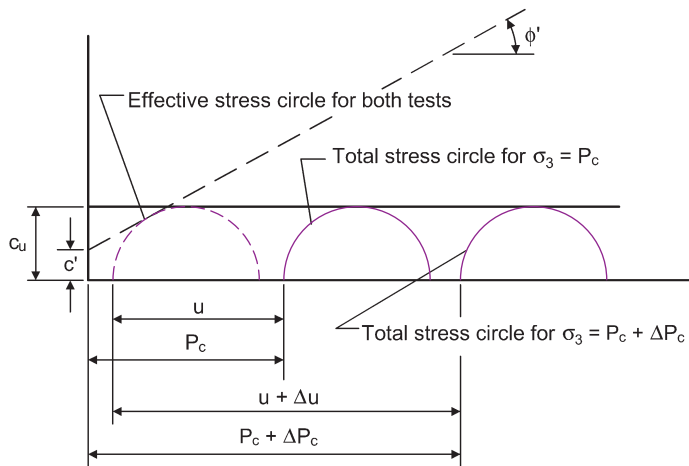


Fig. 4.30 Strength envelope for a saturated cohesive soil subjected to an undrained shear test.

If the results of an undrained test are to be quantified in terms of effective stress, the nature of the test must be considered. In the standard compression undrained triaxial test, the soil sample is placed in the triaxial cell, the drainage connection is removed, the cell pressure is applied and the sample is immediately sheared by increasing the axial stress. Any pore water pressures generated throughout the test are not allowed to dissipate.

If, for a particular undrained shear test carried out at a cell pressure p_c , the pore water pressure generated at failure is u , then the effective stresses at failure are:

$$\sigma'_1 = \sigma_1 - u; \quad \sigma'_3 = \sigma_3 - u = p_c - u$$

Remembering that, in a saturated soil, the pore pressure parameter $B = 1.0$, it is seen that if the test is repeated using a cell pressure of $p_c + \Delta p_c$, the value of the undrained strength of the soil will be exactly as that obtained from the first test, because the increase in the cell pressure, Δp_c , will induce an increase in pore water pressure, Δu , of the same magnitude ($\Delta u = \Delta p_c$). The effective stress circle at failure will therefore be the same as for the first test (Fig. 4.30), the soil acting as if it were purely cohesive. It is therefore seen that there can only be one effective stress circle at failure, independent of the cell pressure value, in an undrained shear test on a saturated soil.

4.12.2 Drained and consolidated undrained shear

The triaxial forms of these shear tests have already been described. It is generally accepted that, for all practical purposes, the values obtained for the drained parameters, c' and ϕ' , from either test are virtually the same.

The c' value for normally consolidated clays is negligible and can be taken as zero in virtually every situation. A normally consolidated clay therefore, has an effective stress strength envelope similar to that shown in Fig. 4.31 and, under drained conditions, will behave as if it were a frictional material.

The effective stress envelope for an overconsolidated clay is shown in Fig. 4.32. Unless unusually high cell pressures are used in the triaxial test, the soil will be sheared with a cell pressure less than its preconsolidation pressure value. The resulting strength envelope is slightly curved with a cohesive intercept c' . As the curvature is very slight it is approximated to a straight line inclined at ϕ' to the normal stress axis.

In Fig. 4.32, the point A represents the value of cell pressure that is equal to the preconsolidation pressure. At cell pressures higher than this, the strength envelope is the same as for a normally consolidated clay, the value of ϕ' being increased slightly. If this line is projected backwards it will pass through the origin.

Owing to the removal of stresses during sampling, even normally consolidated clays will have a slight degree of overconsolidation and may give a small c' value, usually so small that it is difficult to measure and has little importance.

The shearing characteristics of silts are similar to those of normally consolidated clays.

The behaviour of saturated normally consolidated and overconsolidated clays in undrained shear is illustrated in Fig. 4.33 which illustrates the variations of both deviator stress and pore water pressure during shear.

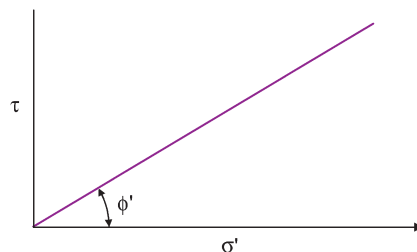


Fig. 4.31 Strength envelope for a normally consolidated clay subjected to a drained shear test.

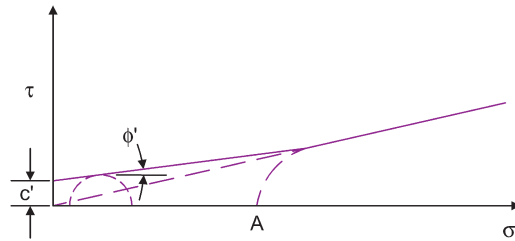


Fig. 4.32 Strength envelope for an overconsolidated soil subjected to a drained shear test.

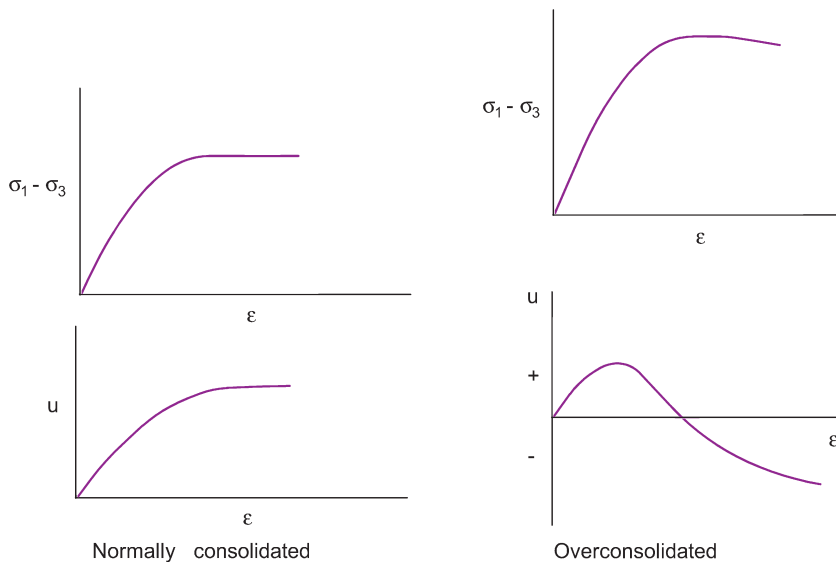


Fig. 4.33 Typical results from consolidated undrained shear tests on saturated clays.

An overconsolidated clay is considerably stronger at a given pressure than it would be if normally consolidated, and also tends to dilate during shear whereas a normally consolidated clay will consolidate. Hence, when an overconsolidated clay is sheared under undrained conditions negative pore water pressures are induced, the effective stress is increased, and the undrained strength is much higher than the drained strength – the exact opposite to a normally consolidated clay.

If an excavation is made through overconsolidated clay the negative pressures set up give an extremely high undrained strength, but these pore pressures gradually dissipate and the strength falls by as much as 60 or 80% to the drained strength. A well-known example of overconsolidated clay is London clay, which when first cut, will stand virtually unsupported to a height of 7.5 m. It does not remain stable for long, and so great is the loss in strength that there have been cases of retaining walls built to support it being pushed over.

Several case histories of retaining wall failures of this type are given in Clayton (1993).

4.13 Operative strengths of soils

For the solution of most soil mechanics problems, the peak strength parameters can be used, i.e. the values corresponding to maximum deviator stress. The actual soil strength that applies *in situ* is depend-

ent upon the type of soil, its previous stress history, the drainage conditions, the form of construction and the form of loading. Obviously the shear tests chosen to determine the soil strength parameters to be used in a design should reflect the conditions that will actually prevail during and after the construction period.

The variations of strength properties of different soils are described below.

Sand and gravels

These soils have high values of permeability, and any excess pore water pressures generated within them are immediately dissipated. For all practical purposes these soils operate in the drained state. The appropriate strength parameter is therefore ϕ' , with $c' = 0$.

In granular soils the value of ϕ' is highly dependent upon the density of the soil and, as it is difficult to obtain inexpensive undisturbed soil samples, its value is generally estimated from the results of the *in situ* tests.

In the UK, the standard penetration test (see Chapter 6) is the one most used and a very approximate relationship between the blow count N and the angle of internal friction ϕ' is shown in Fig. 4.34. It should be noted that the corrected value for N , i.e. $(N_1)_{60}$ described in Chapter 6, can be used in conjunction with Fig. 4.34, and that the value obtained approximates to ϕ'_t , the peak triaxial angle obtained from drained tests.

Other factors, besides the value of N , such as the type of minerals, the effective size, the grading and the shape of the particles are acknowledged to have an effect on the value of ϕ' , but in view of the rough-and-ready method used to determine the value of N , any attempt at refinement seems unrealistic.

Silts

These soils rarely occur in a pure form in the UK and are generally mixed with either sand or clay. It is therefore usually possible to classify silty soils as being either granular or clayey. When there is a reasonable amount of clay material within the soil there should be little difficulty in obtaining undisturbed samples for strength evaluation. With sandy silts, estimated values for ϕ' can be obtained from the results of the standard penetration test.

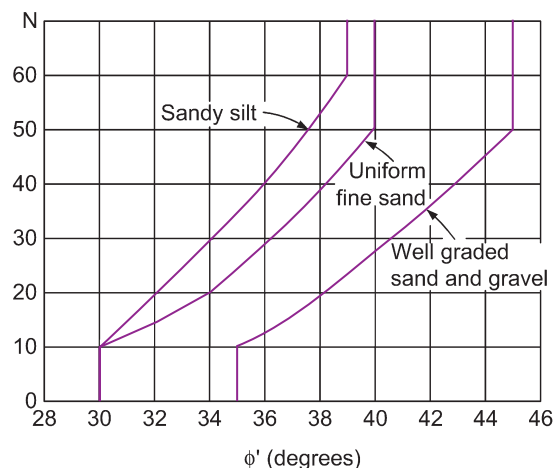


Fig. 4.34 Relationship between N and ϕ' .

Clays

Owing to the low permeability of these soils, any excess pore water pressures generated within them will not dissipate immediately. The first step in any design work is to determine whether the clay is normally consolidated or overconsolidated.

Soft or normally consolidated clay

A clay with an undrained shear strength, c_u , of not more than 40 kPa is classified as a soft clay and will be normally consolidated (or lightly overconsolidated). Such clays, when subjected to undrained shear, tend to develop positive pore water pressures (Fig. 4.33), so that during and immediately after construction, the strength of the soil is at its minimum value.

After completion of the construction, over a period of time, the soil will achieve its drained condition and will then be at its greatest strength.

Overconsolidated clay

With these soils any pore water pressures generated during shear will be negative. This means simply that the clay is at its strongest during and immediately after construction. The weakest strength value will occur once the soil achieves its fully drained state, the operative strength parameters then being c' and ϕ' .

4.14 The critical state

Critical state soil mechanics is a specialised topic and if a deep understanding of the subject is to be gained, reference to specialised texts is required. This section of the book merely offers a simplistic and short introduction to the topic of the critical state. Readers interested in developing a thorough knowledge of the subject are referred to the texts by Muir Wood (1991) and Atkinson (2007).

In Section 4.8.2 we saw that during a drained test, the void ratio of a soil changes during shear. If several samples of the same soil are tested at different initial densities it is found that, if the rate of shearing is constant, the samples all fail at the same void ratio (see Fig 4.14d). If the deformation is allowed to continue the sample will remain at the same void ratio and only deform by shear distortion. This condition is referred to as the *critical state*.

If a saturated, remoulded clay is subjected to a loading that creates a constant and low rate of increasing strain, the clay will reach, and pass through, a failure point without collapse and will then continue to suffer deformation as both the void ratio and the relevant stress paths follow a yield surface until a critical void ratio value is achieved.

At this critical void ratio value, the values of the void ratio, the pore water pressure and the stresses within the soil remain constant, even with further deformations, provided that the rate of strain is not changed.

This important concept has led to the theory of critical state, an attempt to create a soil model that brings together the relationships between its shear strength and its void ratio, and which can be applied to any type of soil. The theory has been established as a research tool for several years and is now widely used in geotechnical limit state design.

Critical state theory uses three parameters: p , q , and v , to describe the mechanical behaviors during shear and compression.

p and q are defined as:

$$p = \frac{1}{3}(\sigma_1 + 2\sigma_3) \quad (1)$$

$$q = (\sigma_1 - \sigma_3) \quad (2)$$

Similar expressions apply for effective stress:

$$p' = \frac{1}{3}(\sigma'_1 + 2\sigma'_3) \quad (3)$$

$$q' = (\sigma'_1 - \sigma'_3) \quad (4)$$

The specific volume, v was defined in Chapter 1 and is the total volume of soil that contains a unit volume of solids:

$$v = (1 + e) \quad (5)$$

The advantage of the p and q parameters is their association with the strains that they cause. Changes in p' are associated with volumetric strains and changes in q with shear strains.

For the general three-dimensional state, Equations (1) to (4) have the form:

$$p = \frac{1}{3}(\sigma_1 + \sigma_2 + \sigma_3)$$

$$q = \frac{1}{\sqrt{2}}[(\sigma_1 - \sigma_2)^2 + (\sigma_2 - \sigma_3)^2 + (\sigma_3 - \sigma_1)^2]$$

4.14.1 Stress paths in three-dimensional stress space

We have considered two-dimensional stress paths and we must now examine the form of these paths if they were plotted in three-dimensional space defined by p' , q and v .

Undrained tests

If we consider the plane q - p' then we can plot the effective stress paths for undrained shear in a manner similar to the previous two-dimensional stress paths. Remember that $q = \sigma_1 - \sigma_3$ and that

$$p' = \frac{\sigma_1 + 2\sigma_3}{3}$$

The resulting diagram is shown in Fig. 4.35a. The points A_1 , A_2 and A_3 lie on the isotropic normal consolidation line and their respective stress paths reach the failure boundary at points B_1 , B_2 and B_3 . As the tests are undrained, the values of void ratio at points B_1 , B_2 , B_3 are the same as they were when the soil was at the stress states A_1 , A_2 and A_3 respectively. Knowing the e values we can determine the values of specific volume and prepare the corresponding plot on the v - p' plane (Fig. 4.35b).

It is seen that the failure points B_1 , B_2 and B_3 lie on a straight line in the q - p' plane and on a curve, similar to the normal consolidation curve, in the v - p' plane.

Drained tests

The effective stress paths for drained shear are shown in Fig. 4.36. For the q - p' plane the plot consists of straight lines which are inclined to the horizontal at $\tan^{-1}(3)$. The reason why is illustrated in Fig. 4.36.

The points C_1 , C_2 and C_3 represent the failure points after drained shear, so the void ratio values at these points are less than those at the corresponding A points.

The stress paths in the v - p' plane are illustrated in Fig. 4.36b. As with the undrained case, the failure points C_1 , C_2 and C_3 lie on a curved line similar to the normal consolidation line.

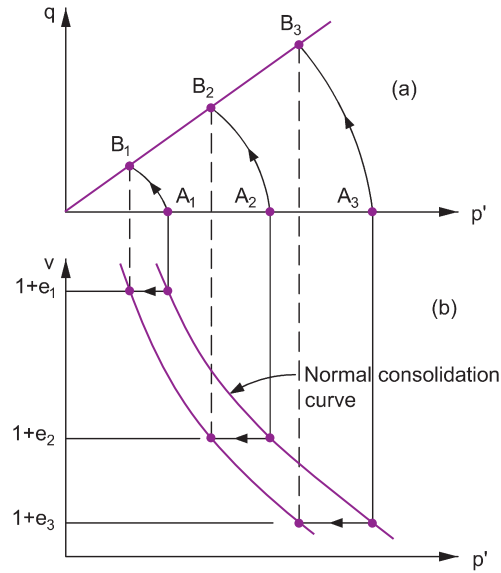


Fig. 4.35 Stress paths for undrained shear.

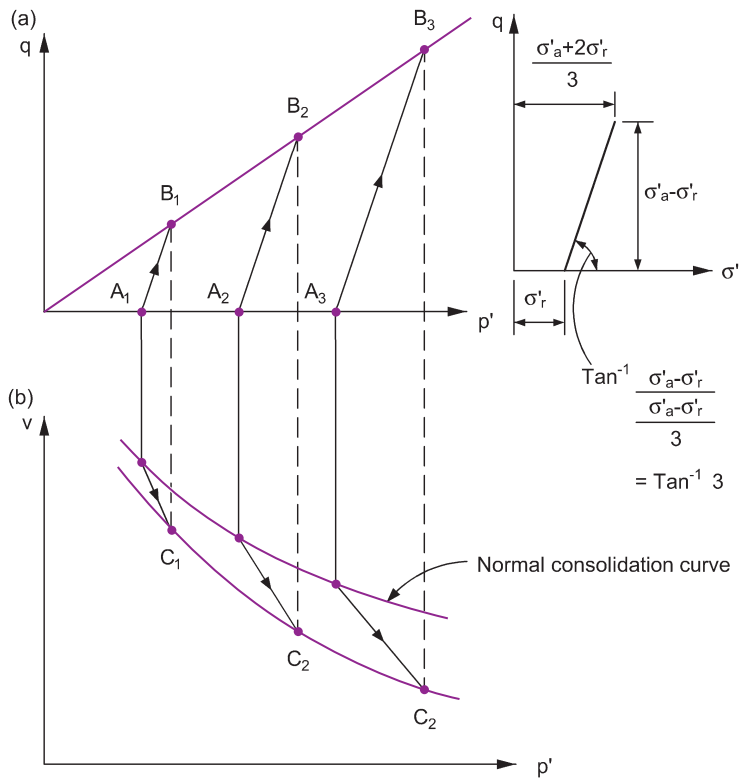


Fig. 4.36 Stress paths for drained shear.

Table 4.2 Results of triaxial compression tests on normally consolidated clay samples (after Parry, 1960).

Undrained tests					
σ_r (kPa)	$\sigma_{af} - \sigma_r$ (kPa)	u_f (kPa)	w_f (%)	p'_f (kPa)	v
103.4	68.3	50.3	25.1	75.9	1.67
206.9	119.3	113.8	23.0	132.9	1.61
310.3	172.4	171.7	21.5	196.1	1.57
413.7	224.8	227.5	20.3	261.1	1.54
827.4	468.9	458.5	18.5	525.2	1.49
Drained tests					
σ'_r (kPa)	$\sigma'_{af} - \sigma'_r$ (kPa)	w_f (%)	p'_f (kPa)	v	
103.4	114.5	23.0	141.6	1.61	
206.9	244.8	20.4	288.5	1.54	
310.3	348.2	19.3	426.4	1.51	
413.7	481.3	18.5	574.1	1.49	
827.4	930.8	16.1	1138.0	1.43	

4.14.2 The critical state line

Parry (1960) published a comprehensive set of results obtained from drained and undrained triaxial tests carried out on normally and overconsolidated samples of Weald clay. A few of his results of tests on normally consolidated samples are reproduced in the first four columns of Table 4.2 (converted into SI units). With this information and taking $G_s = 2.75$, the tabulated values of q , p' and v were calculated. The (p', q) points obtained from each of the test results are plotted in Fig. 4.37a and the (p', v) points are plotted in Fig. 4.37b.

We can deduce from these diagrams that there must be a single line of failure points within the p' - q - v space which projects as a straight line on to the q - p' plane and projects as a curved line, close to the normal consolidation line, on to the v - p' plane. This line is known as the critical state line and its position is illustrated in Fig. 4.38.

The equation of the critical state line

The line's projection on to the q - p' plane is a straight line with the equation $q = Mp'$, where M is the slope of the line.

The projection of the critical state line on to the v - p' plane is unfortunately curved but if we consider the projection on to the $v : \ln p'$ plane we obtain a straight line with a slope that can be assumed to be equal to the slope of the normal consolidation line.

The values for p'_f are tabulated in Table 4.2 and it is a simple matter to obtain a set of $\ln p'_f$ values so that a v - $\ln p'_f$ plot can be obtained. Figure 4.39 shows the v - $\ln p'_f$ plot for Parry's results from Table 4.2.

If we use the symbol Γ to represent the value of v which corresponds to a $\ln p' = 0$ (i.e. a p' value of unity, usually taken as 1.0 kPa) then the equation of the straight line projection is:

$$v = \Gamma - \lambda \ln p'$$

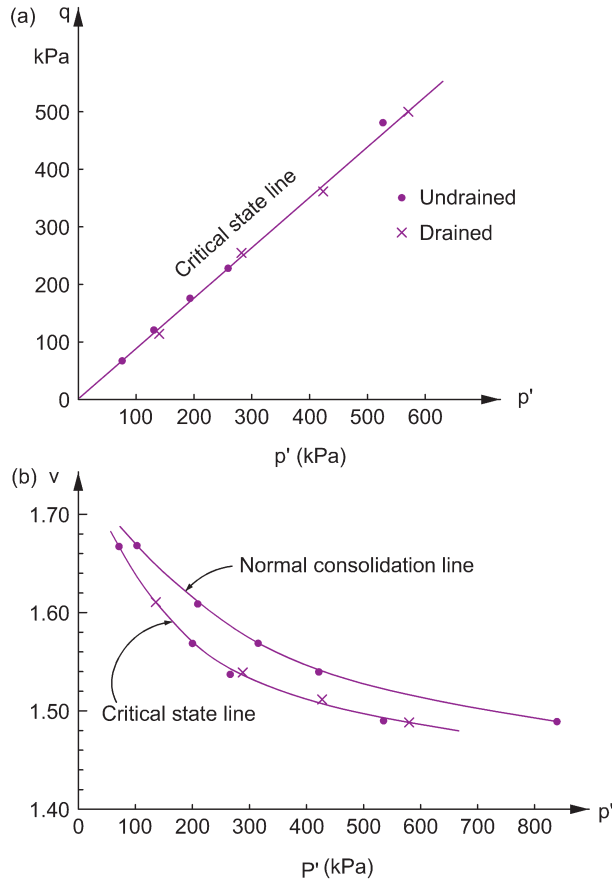


Fig. 4.37 Projection of the critical state line.

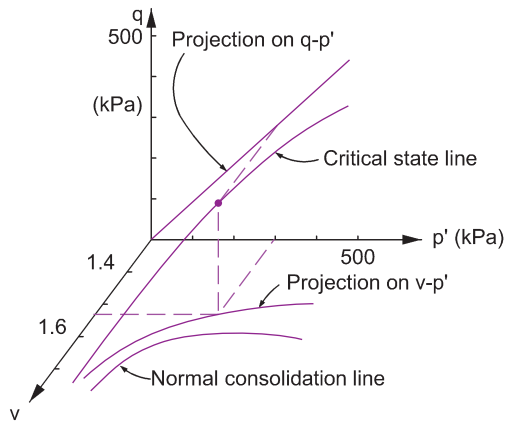


Fig. 4.38 Position of the critical state line.

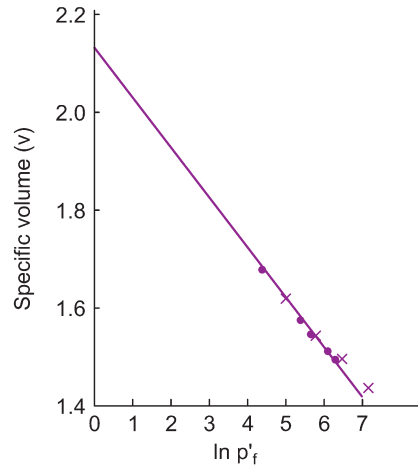


Fig. 4.39 v - $\ln p'_f$ of the values tabulated in Table 4.2.

which can be written as:

$$\frac{\Gamma - v}{\lambda} = \ln p'$$

$$\Rightarrow p' = \exp \frac{\Gamma - v}{\lambda}$$

Hence, the critical state line is that line which satisfies the two equations:

$$q = Mp' \quad \text{and} \quad p' = \exp \frac{\Gamma - v}{\lambda}$$

Looking ahead to Section 11.7 where the subject of isotropic consolidation is described, it is seen that λ is the slope of the normal consolidation line and N is the specific volume at $\ln p' = 0$. The values of M , N , Γ and λ vary with the type of soil. From Figs 4.37 and 4.39 we see that the values for remoulded Weald clay are approximately $M = 0.85$; $N = 2.13$; $\Gamma = 2.09$ and $\lambda = 0.10$.

4.14.3 Residual and critical strength states

The stress conditions that apply at the critical state line represent the ultimate strength of the soil (i.e. its critical state strength) and this is the lowest strength that the soil will reach provided that the strains within it are reasonably uniform and not excessive in magnitude. The residual strength of a soil operates, in the case of clays, only after the soil has been subjected to considerable strains with layers of soil sliding over other layers.

It is important that the difference between these two strengths is appreciated. Skempton (1964) showed that the residual angle of friction of London clay, ϕ_r , can be less than 10° whereas Schofield and Wroth (1968) reported that the same soil at critical state conditions has an angle of friction ϕ_{cv} of 22.5° .

4.15 Sensitivity of clays

If the strength of an undisturbed sample of clay is measured and it is then re-tested at an identical water content, but after it has been remoulded to the same dry density, a reduction in strength is often observed.

Table 4.3 Sensitivity classification.

S_t	Classification
1	insensitive
1–2	low
2–4	medium
4–8	sensitive
8–16	extra sensitive
>16	quick (can be up to 150)

$$\text{Sensitivity} = S_t = \frac{\text{Undisturbed, undrained strength}}{\text{Remoulded, undrained strength}}$$

Normally consolidated clays tend to have sensitivity values varying from 5 to 10 but certain clays in Canada and Scandinavia have sensitivities as high as 100 and are referred to as quick clays. Sensitivity can vary, slightly, depending upon the water content of the clay. Generally, overconsolidated clays have negligible sensitivity, but some quick clays have been found to be overconsolidated. A classification of sensitivity appears in Table 4.3.

Thixotropy

Some clays, if kept at a constant water content, regain a portion of their original strength after remoulding with time (Skempton and Northey, 1952). This property is known as thixotropy.

Liquidity index I_L

The definition of this index has already been given in Chapter 1:

$$I_L = \frac{w - w_p}{I_p}$$

where w is the *in situ* water content.

This index probably more usefully reflects the properties of plastic soil than the generally used consistency limits w_p and w_L . Liquid and plastic limit tests are carried out on remoulded soil in the laboratory, but the same soil, in its *in situ* state (i.e. undisturbed), may exhibit a different consistency at the same water content as the laboratory specimen, due to sensitivity effects. It does not necessarily mean, therefore, that a soil found to have a liquid limit of 50% will be in the liquid state if its *in situ* water content w is also 50%.

If w is greater than the test value of w_L then I_L is >1.0 and it is obvious that if the soil were remoulded it would be transformed into a slurry. In such a case the soil is probably an unconsolidated sediment with an undrained shear strength, c_u , in the order of 15–50 kPa.

Most cohesive soil deposits have I_L values within the range 1.0–0.0. The lower the value of w , the greater the amount of compression that must have taken place and the nearer I_L will be to zero.

If w is less than the test value of the plastic limit then $I_L < 0.0$ and the soil cannot be remoulded (as it is outside the plastic range). In this case the soil is most likely a compressed sediment. Soil in this state will have a c_u value varying from 50 to 250 kPa.

4.16 Residual strength of soil

In an investigation concerning the stability of a clay slope, the normal procedure is to take representative samples, conduct shear tests, establish the strength parameters c' and ϕ' from the peak values of the

tests, and conduct an effective stress analysis. For this analysis the shear strength of the soil, as we have already seen, can be expressed by the equation:

$$\tau_p = c' + \sigma' \tan \phi'$$

There have been many cases of slips in clay slopes which have afforded a means of checking this procedure. Knowing the mass of material involved and the location of the slip plane, it is possible to deduce the value of the average shear stress on the slip plane, $\bar{\tau}$, at the time failure occurred. It has often been found that τ is considerably less than τ_p especially with slopes that have been in existence for some years.

Figure 4.40a shows a typical stress-to-strain relationship obtained in a drained shear test on a clay. Normal practice is to stop the test as soon as the peak strength has been reached, but if the test is continued it is found that as the strain increases the shear strength decreases and finally levels out. This constant stress value is termed the critical, or constant volume, strength, τ_{cv} , of the clay. If the strain increases significantly, the clay will reach a state of lowest strength known as the residual strength. The strength envelopes from the three sets of strength values are shown in Fig. 4.40b.

Residual strength tests can be carried out in the ring shear apparatus, which was developed in the 1930s. A thin annular soil specimen is sheared by clamping it between two metal discs, which are then rotated in opposite directions. The apparatus did not become popular, mainly because of the concentration at the time on the study of peak values, so readily obtained from the triaxial test, but probably also because the ring shear apparatus was complicated and it took a long time to carry out a test.

As a result of Skempton's work in the 1960's, interest in the determination of soil strength after large displacement was re-established and, in 1971, Bishop *et al.* redeveloped the ring shear apparatus (Fig. 4.41), which is now considered as the most reliable means for determining residual strengths of cohesive soils.

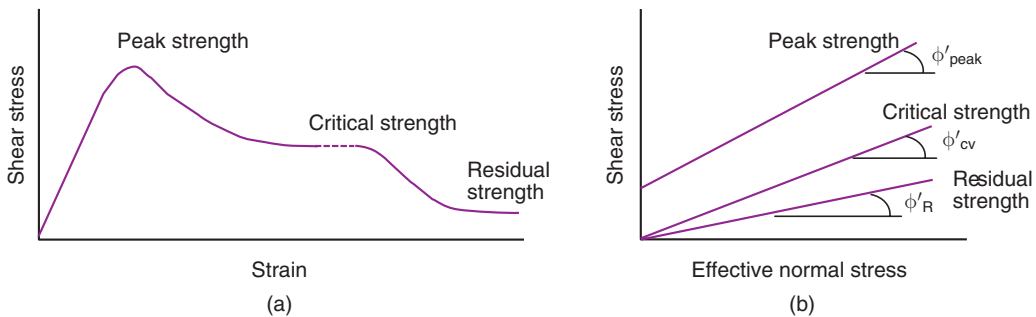


Fig. 4.40 The peak, critical and residual strengths of clays.

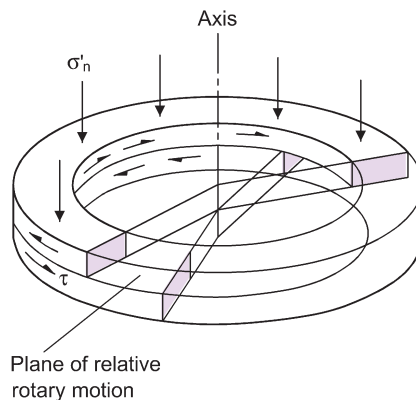


Fig. 4.41 Ring shear test sample (after Bishop *et al.*, 1971).

Residual strength of clays

The reduction from peak to residual strength in clays is considered to result primarily from the formation of extremely thin layers of fine particles orientated in the direction of shear; these particles would originally have been in a random state of orientation and must therefore have had a greater resistance to shear than when they became parallel to each other in the shear direction.

The development of residual strength in a soil is a continuous process. If at a particular point the soil is stressed beyond its peak strength, its strength will decrease and additional stress will be transmitted to other points in the soil; these likewise becoming overstressed and decreasing in strength, the failure process continues once it has started (unless the slope slips), until the strength at every point along the potential slip surface has been reduced to residual strength.

Clays, especially overconsolidated deposits, contain fissures, such as those in London clay which occur some 150–200 mm apart; these fissures are already established points of weakness, the strength between their contact surfaces probably being about residual. An important feature of fissures is that they can tend to act as stress concentrators at their edges, leading to overstressing beyond the peak strength and hence to a progressive strength decrease.

Tests carried out by Skempton indicate that the residual strength of clay under a particular effective stress is the same, whether the clay was normally or overconsolidated. Hence in any clay layer, provided the particles are the same, the value of ϕ'_r will be constant.

Residual strength of silts and silty clays

From a study of case records, Skempton showed that the value of ϕ'_r decreases with increasing clay percentage. Sand-sized particles, being roughly spherical in shape, cannot orientate themselves in the same way as flakey clay particles and when they are present in silts or clays the residual strength becomes greater as the percentage of sand increases.

Residual strength of sands

Shear tests on sand indicate that the stress–displacement curve for the loose and dense states are as shown in Fig. 4.42. The residual strength is seen to correspond to the peak strength of the loose density and is usually reached fairly quickly in one travel of the shear box, succeeding reversals having little effect.

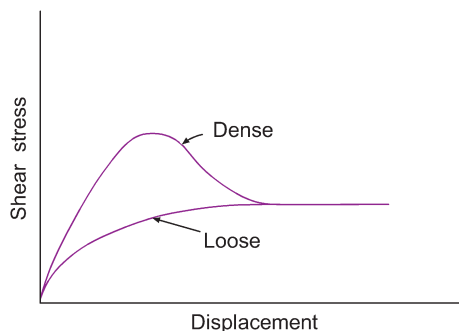


Fig. 4.42 Stress-displacement characteristics of sands.



Exercises

Exercise 4.1

A soil sample is tested to failure in a drained triaxial test using a cell pressure of 200 kPa. The effective stress parameters of the soil are known to be $\phi' = 29^\circ$ and $c' = 0$.

Determine the inclination of the plane of failure, with respect to the direction of the major principal stress, and the magnitudes of the stresses that will act on this plane. What is the maximum value of shear stress that will be induced in the soil?

Answer Failure plane inclined at 30.5° to major principal stress.
 Effective normal stress on failure plane = 295 kPa.
 Shear stress on failure plane = 161 kPa.
 Maximum shear stress = 184 kPa.

Exercise 4.2

A soil has an effective angle of shearing resistance, ϕ' , of 20° and an effective cohesion, c' , of 20 kPa. What would you expect the value of the vertical stress to be at failure if the soil is subjected to:

- (a) a drained triaxial extension test with a cell pressure of 250 kPa?
- (b) a drained triaxial compression test with the same cell pressure?

Answer (a) 95 kPa, (b) 567 kPa

Exercise 4.3

The readings below were taken during two shear box tests carried out on samples of the same sand. In both cases the normal stress was 200 kPa.

Horizontal displacement (mm)	Shear stress (kPa)	
	Test 1	Test 2
0	0	0
0.5	59	73
1.0	78	118
1.5	91	143
2.0	99	150
2.5	106	149
3.0	111	139
3.5	113	133
4.0	114	126
4.5	116	122
5.0	116	120

Draw the shear stress/displacement curves for the two tests, and determine the peak and constant volume values of angle of shearing resistance.

Answer $\phi' = 37^\circ$, $\phi' = 30^\circ$

Exercise 4.4

The following results were obtained from a drained triaxial test on a soil:

Cell pressure (kPa)	Additional effective axial stress at failure (kPa)
200	200
400	370
600	540

Determine the cohesion and angle of friction of the soil with respect to effective stresses.

Answer $\phi' = 17^\circ$, $c' = 10$ kPa

Exercise 4.5

Undisturbed samples were taken from a compacted fill material and subjected to consolidated undrained triaxial tests. Results were:

Cell pressure (kPa)	Additional axial stress at failure (kPa)	Pore water pressure at failure (kPa)
200	140	50
400	256	128
600	380	200

Determine the shear strength parameters of the soil.

Answer $c' = 0$, $\phi' = 19^\circ$

Exercise 4.6

An undrained triaxial test carried out on a compacted soil gave the following results:

Strain (%)	Deviator stress (kPa)	Pore water pressure (kPa)
0	0	240
1	240	285
2	460	300
3	640	270
4	840	200
5	950	160
7.5	1100	110
10.0	1150	75
12.5	1170	55
15.0	1150	50

The cell pressure was 400 kPa, and before its application the pore water pressure in the sample was zero.

- (i) Determine the value of the pore pressure coefficient B .
- (ii) Plot deviator stress (total) against strain.

- (iii) Plot pore water pressure against strain.
 (iv) Plot the variation of the pore pressure coefficient A with strain.

Answer (i) 0.6

Exercise 4.7

The following results were obtained from a shear box test carried out on a set of soil samples. The apparatus made use of a proving ring to measure the shear forces.

Normal load (kN)	0.2	0.4	0.6
Strain (%)	Proving ring dial gauge readings (no. of divisions)		
1	8.5	16.5	28.0
2	16.0	27.0	39.0
3	22.5	34.9	46.8
4	27.5	39.9	52.3
5	31.3	45.0	56.6
6	33.4	46.0	59.7
7	33.4	47.6	61.7
8	33.4	47.6	62.7
9		47.6	62.7
10			62.7

The cross-sectional area of the box was 3600mm^2 and one division of the proving ring dial gauge equalled 0.01mm . The calibration of the proving ring was 0.01mm deflection equalled 8.4N .

Determine the strength parameters of the soil.

Answer $\phi' = 32^\circ$; $c' = 43\text{kPa}$

Chapter 5

Eurocode 7

5.1 Introduction to the Structural Eurocodes

5.1.1 The Eurocode Programme

The Eurocode Programme was initiated to establish a set of harmonised technical rules for the design of building and civil engineering works across Europe. The rules are known collectively as the Structural Eurocodes which comprise of a series of 10 European Standards, EN 1990 – EN 1999, providing a common approach for the design of buildings and other civil engineering works and construction products. Eurocode 7 (EN 1997) is the document that concerns geotechnical design and we will look at the use of this Eurocode throughout the following chapters of this book.

It is the European Commission's intention that the Eurocodes become the recommended means for the structural design of works throughout the European Union (EU) and the European Free Trade Association (EFTA). They establish principles and requirements for achieving safety, serviceability and durability of structures and their adoption is leading to more common practice in structural and geotechnical design across Europe.

The Eurocodes are published by the *Comité Européen de Normalisation* (CEN) – the European Committee for Standardisation – and have been under development by CEN since 1989. The Eurocode programme actually started in 1975 following a decision of the then Commission of the European Community, but it was only when the work was passed to CEN that significant progress began. Draft versions of the codes (known as *Euronorm Vornorms* (ENV)) were produced throughout the 1990s and publication of the final versions (*Euronorms* (EN)) commenced in 2002. By 2010, all the Eurocodes had been published and these are now used in all member states. The Eurocodes timeline is depicted in Fig. 5.1.

5.1.2 Scope of the Eurocodes

Since publication, the Eurocodes have become the reference design codes throughout the European member states and the structural designs of all public-sector works must now be Eurocode-compliant.

The Eurocodes cover the basis of structural design, actions on structures, design with each of the main structural materials, geotechnical design and design of structures for earthquake resistance. The ten Eurocodes are:

EN 1990	Eurocode: Basis of structural design
EN 1991	Eurocode 1: Actions on structures
EN 1992	Eurocode 2: Design of concrete structures
EN 1993	Eurocode 3: Design of steel structures
EN 1994	Eurocode 4: Design of composite steel and concrete structures
EN 1995	Eurocode 5: Design of timber structures
EN 1996	Eurocode 6: Design of masonry structures

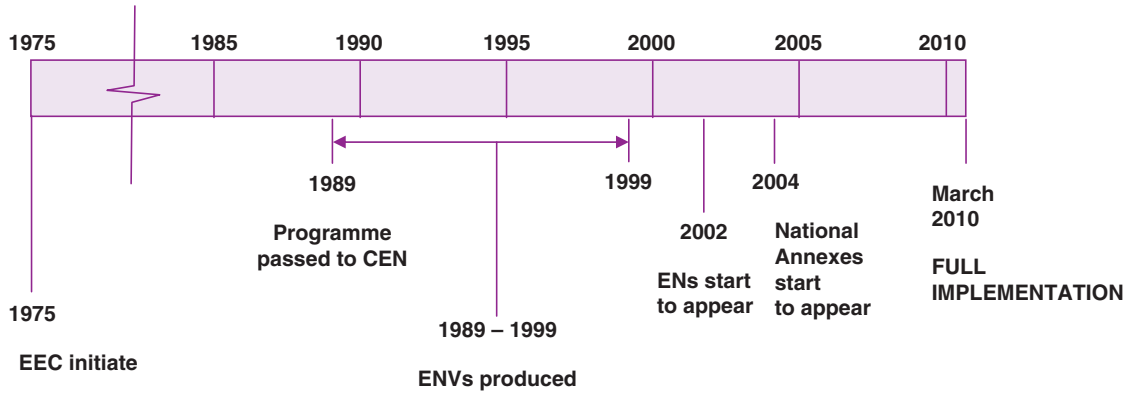


Fig. 5.1 Eurocodes timeline.

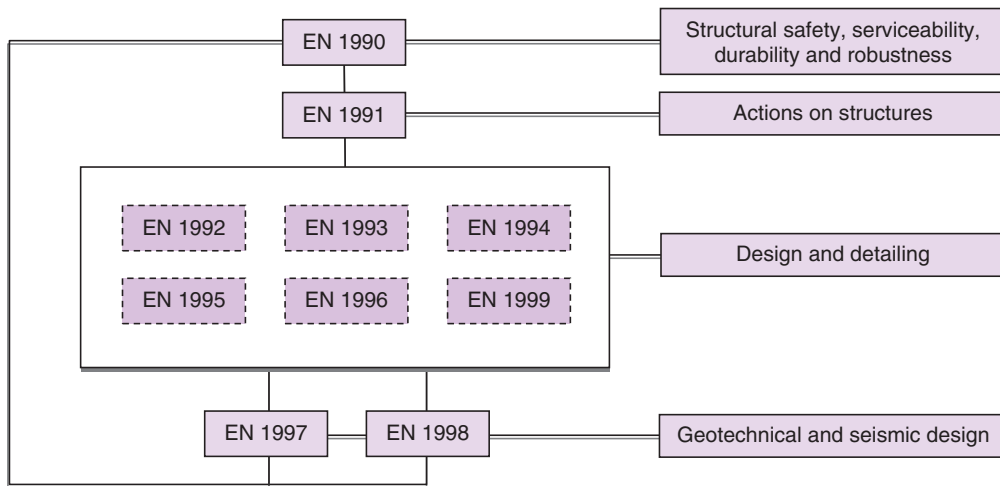


Fig. 5.2 The links between the Eurocodes.

EN 1997	Eurocode 7: Geotechnical design
EN 1998	Eurocode 8: Design of structures for earthquake resistance
EN 1999	Eurocode 9: Design of aluminium structures

The links between the Eurocodes are shown in Fig. 5.2.

5.1.3 Eurocode Parts and National Annexes

With the exception of EN 1990, each Eurocode consists of a number of Parts that cover particular technical aspects. Eurocode 7 comprises two parts as described in the following Section. To ensure that the safety of a design remains a national and not a European responsibility, each country has published a *National Annex* for each Part of the 10 Eurocodes. The National Annex (NA) is a document containing country specific information, rules and parameters and must be used alongside the main Eurocode document. The country specific parameters declared in a National Annex are referred to as nationally determined parameters (NDPs).

5.2 Introduction to Eurocode 7

5.2.1 Design philosophy

Eurocode 7 – Geotechnical design is published in two parts in the UK by the British Standards Institution as:

- BS EN 1997-1:2004 Part 1: General rules
- BS EN 1997-2:2007 Part 2: Ground investigation and testing

The design philosophy adopted in Eurocode 7 is the same as that adopted in all the Eurocodes and advocates the use of limit state design to ensure that the serviceability limit states are not exceeded. *Serviceability limit states* are those states that, if exceeded, render the structure unsafe even though no collapse situation is reached, such as excessive deflection, settlement or rotation. In contrast to the traditional method of the use of lumped factors of safety, the Standard promotes the use of *partial factors of safety* and thus reflects a significant shift from traditional UK geotechnical design practice. Where once the design methods treated material properties and loads in an unmodified state and applied a Factor of Safety at the end of the design process to allow for the uncertainty in the unmodified values, Eurocode 7 guides the designer to modify each parameter early in the design by use of the partial factor of safety. This approach sees the *representative* or *characteristic* value of the parameters (e.g. loads, soil strength parameters, etc.) converted to the design value by combining it with the particular partial factor of safety for that parameter. Worked examples in the following chapters will help the student to follow this approach to design. Additional explanation on the use of Eurocode 7 is given by Bright and Roberts (2004), Frank *et al.* (2004), C&LG (2007), Bond and Harris (2008) and Simpson (2011). A thorough review of how Eurocode 7 has affected geotechnical design is given by Orr (2012).

5.2.2 Contents of Eurocode 7

The contents of both parts of Eurocode 7 are shown in Fig. 5.3. At first glance it appears that Part 1 covers more subject area and, whilst it arguably does, it is important to appreciate that Part 2 is a significantly longer document.

As the titles of the two documents indicate, Part 1 covers the general rules for design whilst Part 2 covers ground investigation practice. The two documents rely on each other for use and it would be very rare that one part is used in isolation from the other. The use of Part 2 is described in Chapter 6.

<p>Part 1 – General rules</p> <p>Foreword</p> <ol style="list-style-type: none"> 1. General 2. Basis of Geotechnical design 3. Geotechnical data 4. Supervision of construction, monitoring and maintenance 5. Fill, dewatering, ground improvement and reinforcement 6. Spread foundations 7. Pile foundations 8. Anchorages 9. Retaining structures 10. Hydraulic failure 11. Overall stability 12. Embankments <p>Annexes A – J</p> <p style="text-align: right;">167 pages</p>	<p>Part 2 – Ground investigation and testing</p> <p>Foreword</p> <ol style="list-style-type: none"> 1. General 2. Planning of ground investigation 3. Soil and rock sampling and groundwater measurements 4. Field tests in soil and rock 5. Laboratory tests on soil and rock 6. Ground investigation report <p>Annexes A – X</p> <p style="text-align: right;">196 pages</p>
---	---

Fig. 5.3 Contents of Eurocode 7 (EN 1997) Parts 1 and 2.

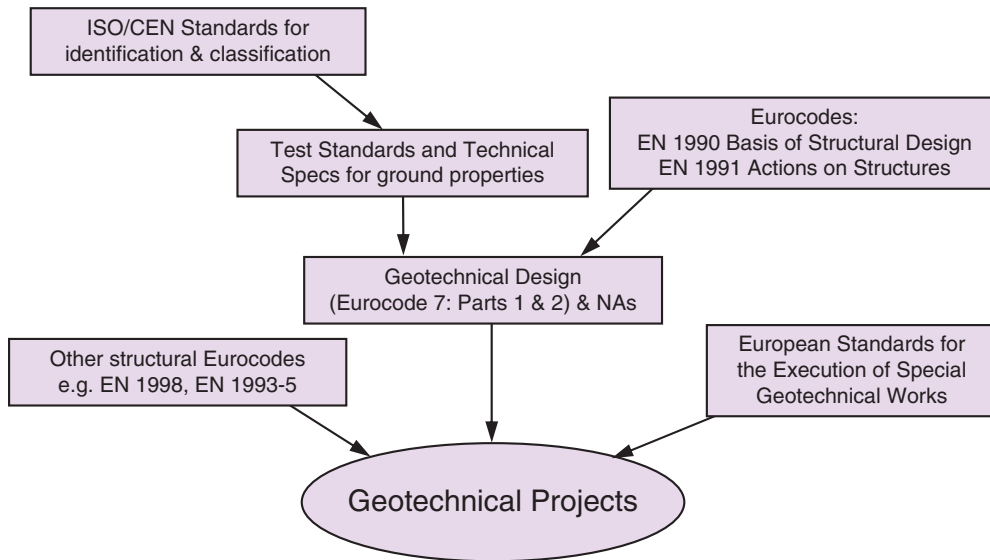


Fig. 5.4 European geotechnical codes (after C&LG, 2007).

It is important to realise that by itself Eurocode 7 will not be the only European standard that will be used on a geotechnical project. Other Eurocodes (most notably EN 1990, EN 1991 and EN 1998) will be involved as will ISO testing and execution standards as shown in Fig. 5.4.

5.3 Using Eurocode 7: basis of geotechnical design

The clauses throughout Eurocode 7 are considered as either *Principles* (identified by the letter P immediately preceding the clause) or *Application Rules*. Principles are unique statements or definitions that must be adopted. Application Rules offer examples of how to ensure that the Principles are adhered to and thus offer guidance to the designer in following the Principles.

Section 2 of EN 1997-1 describes the basis of geotechnical design and the code states that the limit states should be verified by one of four means: by (1) *calculation*, (2) *prescriptive measures*, (3) *experimental models and load tests*, or (4) *an observational method*. In this book we shall concentrate solely on geotechnical design by calculation (see Section 5.4) although a prescriptive measure for the determination of presumed allowable bearing values is touched upon in Chapter 9.

To facilitate an appropriate design, projects are considered as falling into one of three *Geotechnical Categories*, based on the complexity of the geotechnical design together with the associated risks. *Category 1* is for small projects with negligible risk, *Category 2* is for conventional structures (e.g. foundations, retaining walls, embankments) and *Category 3* is for structures not covered by Categories 1 and 2. It is obvious that most routine geotechnical design work will fall into Geotechnical Category 2.

5.4 Geotechnical design by calculation

To enable the limit states to be checked, the *design* values of the geotechnical parameters, the ground resistance and the actions (e.g. forces or loads), must be determined. Thereafter, a geotechnical analysis is employed to show that the particular limit being checked will not be exceeded. A typical sequence of the processes involved in the design calculations is shown in Fig. 5.5.

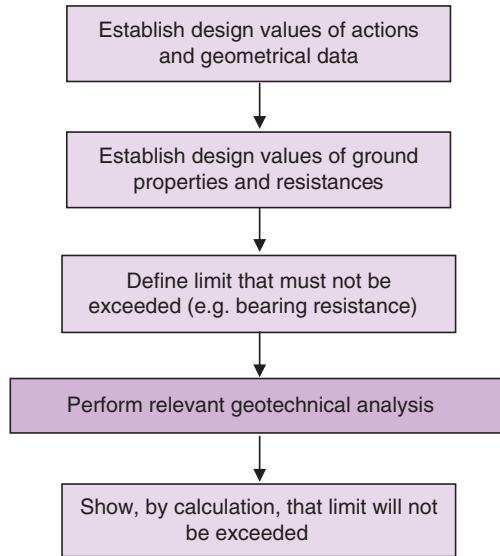


Fig. 5.5 Processes involved in geotechnical design by calculation.

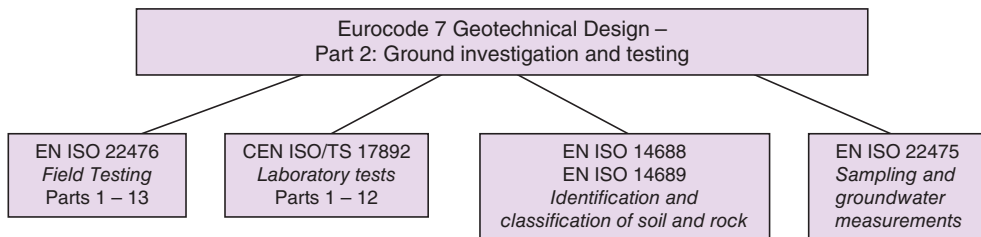


Fig. 5.6 ISO International and Technical Standards.

The design values of actions (F_d) are derived by multiplying the *representative* values (F_{rep}) by the appropriate partial factor of safety, γ_F . The design values of geotechnical parameters (X_d) are derived by dividing the *characteristic* values (X_k) by the appropriate partial factor of safety, γ_M . The resistance (R) is derived from the design values of actions and ground parameters. The design resistance (R_d) can either be taken as equal to R or as equal to a reduced value of R , which is derived by dividing by an additional partial factor of safety, γ_R . The choice of which partial factor of safety to use is governed by the nature of the action and by the *design approach* (see Section 5.7) being used. Actions are classified as permanent (G) (either *favourable* or *unfavourable*), variable (Q), accidental (A) or seismic (AE). The 'effects' of actions are also considered in the design.

5.4.1 Characteristic values of geotechnical parameters

Figure 5.4 illustrates that a number of codes and standards are used when designing a geotechnical project. Although the bulk of design work will involve following the rules of Eurocode 7 Part 1, the designer must also use Part 2 and other documents, as appropriate.

The Scope of Eurocode 7, Part 2 states that Part 2 is intended to be used in conjunction with Part 1 and provides rules supplementary to Part 1 related to site investigation and the testing required to establish geotechnical parameters. Eurocode 7 Part 2 does not cover the standardisation of laboratory and field tests themselves. Hence several International Standards Organisation (ISO) International and Technical Standards also play a part in the design process as indicated in Fig 5.6.

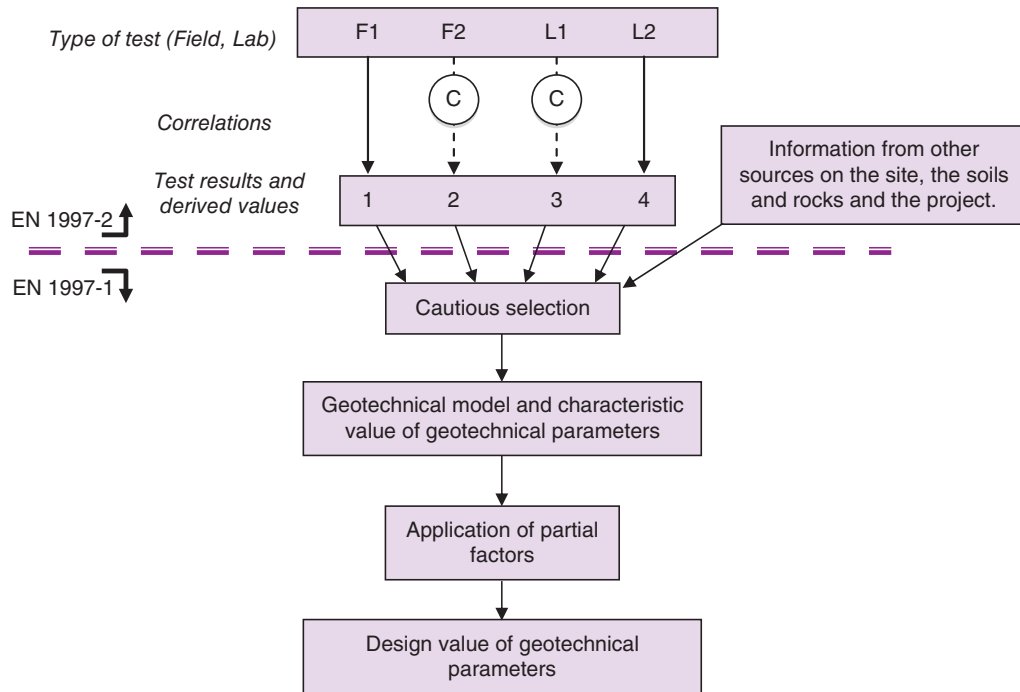


Fig. 5.7 General framework for the selection of derived values of geotechnical properties (based on EN 1997-2, Figure 1.1).

EN 1990:2002 provides a statistical procedure for establishing a characteristic material property from a set of the material's property values. Such a procedure works well for man-made materials but is not applicable for use on soils.

Defining the characteristic values of geotechnical parameters is therefore challenging and EN 1997-1 states that these must be based on results from laboratory and field tests, complemented by well-established experience. Further, addressing the fact that the statistical procedure is not readily applicable to soil (e.g. since only a small number of test results will likely exist for a single soil property), the code states that the characteristic value should be taken as a *cautious estimate* of the value affecting the occurrence of the limit state.

It is appropriate to look at the issues affecting the selection of a *cautious estimate* of a geotechnical parameter. Figure 5.7 (Figure 1.1 in Eurocode 7 Part 2) indicates the general framework for the selection of derived values of geotechnical properties from which the cautious estimate can be made.

The top part of Fig. 5.7 (above the dashed line) depicts the processes linked to Eurocode 7 Part 2 where the values of the geotechnical parameter are derived by lab or field testing; either directly or through some sort of correlation process. The lower part of the figure illustrates the processes described in Eurocode 7 Part 1, where the cautious estimate of the derived values is made to define the characteristic value, which is subsequently used to derive the design value of the parameter.

Thus the procedure involved in determining the design values of geotechnical parameters from test results may be considered as comprising 3 stages:

1. field and laboratory test measurements are interpreted (using any required correlation) to derive a test result;
2. all test results, together with additional relevant site information, are assessed so that a cautious estimate of the geotechnical parameter value affecting the particular limit state may be made (the characteristic value);
3. the characteristic value is divided by the appropriate partial factor of safety to yield the design value.

Bond and Harris (2008) give guidance on establishing a cautious estimate of a geotechnical parameter whilst illustrating the variation in values that can result. Addressing the same issue, Simpson (2011) adds interpretation to the Eurocode text to aid users of the code to understand the processes involved. It can be argued that only a skilled and experienced geotechnical engineer can interpret test results and other factors rigorously enough to establish a reliable cautious estimate. To help address this, Bond (2011) has developed a procedure for determining the characteristic value based on simple statistical methods which goes some way in helping designers overcome the challenges in establishing the cautious estimate. Furthermore, Schneider and Schneider (2013) present a simplified statistical approach based on the mean and standard deviation or coefficient of variance of a soil property, combined with consideration of the vertical extent of the influencing failure mechanism, to determine the characteristic value.

Also helpful is an illustration by Hicks (2013) on the potential use of the random finite element method in determining characteristic values by using it to quantify the combined effects of spatial averaging soil properties along a failure plane, with the fact that failure planes tend to follow the path of least resistance.

In offering alternatives to the cautious estimate approach, Eurocode 7 Part 1 states that both statistical methods and standard tables of characteristic values can be used if sufficient geotechnical measurements/results exist. However, as stated above, the likelihood of large enough data sets of geotechnical test results existing is small.

5.4.2 Partial factors of safety and design values

The calculation method prescribed in Eurocode 7 Part 1 is the limit state design approach used in conjunction with a partial factor method. The use of partial factors of safety, ensure that the reliability of the various components of the design are assessed individually, rather than assessing the overall safety of the system as is the practice with a global factor of safety approach. This means that partial factors of safety are applied to all actions, material properties and resistances for each limit state being checked. There are thus many partial factors of safety that have to be considered.

Partial factors are denoted by the general symbol, γ .

(Note: this symbol is, of course, already used by geotechnical engineers to represent 'unit weight' (known as weight density in Eurocode 7) and thus a bit of care may be needed initially when using this Greek letter gamma to represent the partial factor.)

Partial factors on actions are denoted by the symbol, γ_F .

Partial factors on material properties are denoted by the symbol, γ_M .

Partial factors on resistances are denoted by the symbol, γ_R .

Partial factors for specific parameters are identified by the subscript; e.g. partial factor of safety on coefficient of shearing resistance, $\tan \phi$ is denoted by γ_ϕ .

The partial factors to be used for the different limit states are provided in Annex A of EN 1997-1:2004. The National Annex can offer national choice for each partial factor.

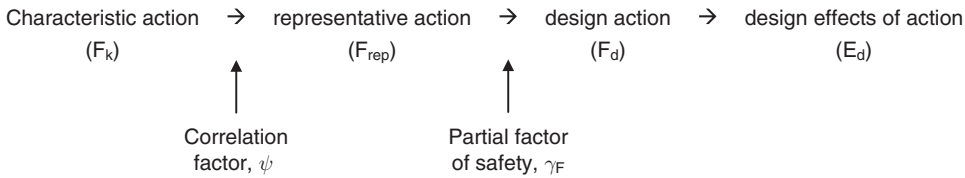
The verification of any limit state involves an assessment of the effect of the *design* actions against the magnitude of the *design* resistance being offered by the structure or the ground. These design values are obtained by combining the characteristic values with appropriate partial factors of safety. Once the design values have been established, the geotechnical analysis is performed to check that the effects of the design actions do not exceed the design resistance.

5.4.3 Design values of actions

The sequence of taking a characteristic value of an action through to the design effect of the action involves multiplying the characteristic value (F_k) by a correlation factor (ψ) (in accordance with EN 1990:2002) then multiplying the resulting representative value (F_{rep}) by a partial factor of safety (γ_F) to yield the design

value of the action (F_d). The design effects of the action then depend on the limit state under consideration but could be, for example, a sliding force or a moment.

The sequence is thus:



i.e.

$$F_{rep} = F_k \times \psi \quad (\psi \leq 1.0; \psi = 1.0 \text{ for persistent actions})$$

$$F_d = F_{rep} \times \gamma_F$$

Note 1: Characteristic self-weights are calculated from characteristic weight density values (e.g. see Example 5.3).

Note 2: In geotechnical design work an assumption may be made that any structural action has already been combined with the correlation factor, ψ . This makes sense as a structural action coming onto a geotechnical structure will almost certainly be the result of a structural design process.

Example 5.1: Design value of action

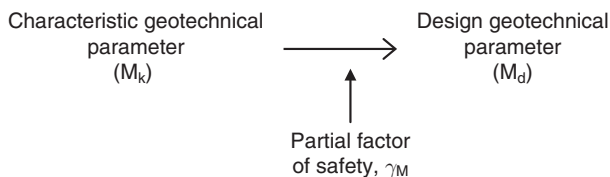
A representative action has magnitude 200kN. Considering a partial factor of safety, $\gamma_F = 1.35$, determine the design value of the action.

Solution:

$$F_d = F_{rep} \times \gamma_F = 200 \times 1.35 = 270 \text{ kN}$$

5.4.4 Design values of geotechnical parameters

Defining characteristic values of geotechnical parameters has already been discussed in Section 5.4.1. To reach the design value of the geotechnical parameter, the characteristic value is divided by the appropriate partial factor of safety.



i.e.

$$M_d = \frac{M_k}{\gamma_M}$$

Example 5.2: Design value of geotechnical parameters

Determine the design values of the following characteristic soil strength properties, using the partial factors of safety provided:

$$c_{u,k} = 40 \text{ kPa}; c'_k = 5 \text{ kPa}; \phi'_k = 27^\circ.$$

$$\gamma_{cu} = 1.4; \gamma_{c'} = 1.25; \gamma_{\phi'} = 1.25.$$

Solution:

$$c_{u,d} = \frac{40}{\gamma_{cu}} = \frac{40}{1.4} = 28.5 \text{ kPa}$$

$$c'_d = \frac{5}{\gamma_{c'}} = \frac{5}{1.25} = 4 \text{ kPa}$$

$$\phi'_d = \tan^{-1} \left(\frac{\tan \phi'}{\gamma_{\phi'}} \right) = \tan^{-1} \left(\frac{\tan 27^\circ}{1.25} \right) = 22.2^\circ$$

5.4.5 Design values of geometrical data

The action and material partial factors include an allowance for minor variations in geometrical data and, in cases where minor variation in the geometrical data will not affect the structural reliability, no further safety margin on the geometrical data should be required. However, in cases where deviations in the geometrical data might have a significant effect on the reliability of a structure (e.g. in the case of "unplanned future excavations" in front of a retaining structure, see Examples 8.3 and 8.4) the design geometrical value can be adjusted by a nominal amount, following guidance provided in EN 1997-1.

5.4.6 Design effects of actions

When assessing the stability or strength resistance of the structure, it is the "effects of actions" that are considered. These effects include the internal forces, moments, stresses and strains within the structural members, plus any deflection or rotation of the structure as a whole.

- i) During the verification of geotechnical strength (where the GEO limit state (see Section 5.7) is used) some effects of the actions will depend on the strength of the ground in addition to the magnitude of the applied action and the dimensions of the structure. Thus, the effect of an action in the GEO limit state is a function of the action, the material properties and the geometrical dimensions.
i.e.

$$E_d = E\{F_d; X_d; a_d\}$$

where

E_d is the design effect of the action, and

F_d is the design action; X_d is the design material property; a_d is the design dimension,

and where

$E\{. . .\}$ indicates that the effect, E is a function of the terms in the parenthesis.

- ii) Similarly, during the verification of static equilibrium (where the EQU limit state (see Section 5.6) is used) some effects of the actions (both destabilising and stabilising) will depend on the strength of the ground in addition to the magnitude of the applied action and the dimensions of the structure. Thus,

the effect of an action in the EQU limit state, whether it is a stabilising or a destabilising action, is a function of the action, the material properties and the geometrical dimensions.
i.e.

$$E_{dst;d} = E\{F_d; X_d; a_d\}_{dst}$$

where

$E_{dst;d}$ is the design effect of the destabilising action, and

$$E_{stb;d} = E\{F_d; X_d; a_d\}_{stb}$$

where

$E_{stb;d}$ is the design effect of the stabilising action.

5.4.7 Design resistances

Equation 6.6 in EN 1990:2002 indicates that the design resistance depends on material properties and the structural dimension. However, in geotechnical design, many resistances depend on the magnitude of the actions and so EN 1997-1 redefines Equation 6.6 to include the contribution made by the design action. The clause actually offers three methods of establishing the design resistance, R_d :

$$R_d = R\{F_d; X_d; a_d\} \text{ or } R_d = \frac{R\{F_d; X_k; a_d\}}{\gamma_R} \text{ or } R_d = \frac{R\{F_d; X_d; a_d\}}{\gamma_R}$$

Annex B of Eurocode 7 Part 1 offers guidance on which of the 3 formulae above to use for each *design approach* (see Section 5.7).

5.5 Ultimate limit states

Eurocode 7 lists five limit states to be considered in the design process:

EQU: the loss of equilibrium of the structure or the supporting ground when considered as a rigid body and where the internal strengths of the structure and the ground do not provide resistance (e.g. Fig. 5.8a). This limit state is satisfied if the sum of the design values of the effects of destabilising actions ($E_{dst;d}$) is less than or equal to the sum of the design values of the effects of the stabilising actions ($E_{stb;d}$) together with any contribution through the resistance of the ground around the structure (T_d), i.e. $E_{dst;d} \leq E_{stb;d} + T_d$. In most cases, the contribution to stability from the resistance of the ground around the structure will be minimal so T_d will be taken as zero.

GEO: failure or excessive deformation of the ground, where the soil or rock is significant in providing resistance (e.g. Figs 5.8b, 5.8c, 5.8d and 5.8e). This limit state is satisfied if the design effect of the actions (E_d) is less than or equal to the design resistance (R_d), i.e. $E_d \leq R_d$.

STR: failure or excessive deformation of the structure, where the strength of the structural material is significant in providing resistance (e.g. Fig. 5.8f). As with the GEO limit state, the STR is satisfied if the design effect of the actions (E_d) is less than or equal to the design resistance (R_d), i.e. $E_d \leq R_d$.

UPL: the loss of equilibrium of the structure or the supporting ground by vertical uplift due to water pressures (buoyancy) or other actions (e.g. Fig. 5.9a). This limit state is verified by checking that the sum of the design permanent and variable destabilising vertical actions ($V_{dst;d}$) is less than or equal to the sum of the design stabilising permanent vertical action ($G_{stb;d}$) and any additional resistance to uplift (R_d) such as the friction force T_d shown in Fig. 5.9a, i.e. $V_{dst;d} \leq G_{stb;d} + R_d$.

HYD: hydraulic heave, internal erosion and piping in the ground as might be experienced, for example, at the base of a braced excavation. This limit state is verified by checking that the design total pore water pressure ($u_{dst;d}$) or seepage force ($S_{dst;d}$) at the base of the soil column under investigation is less

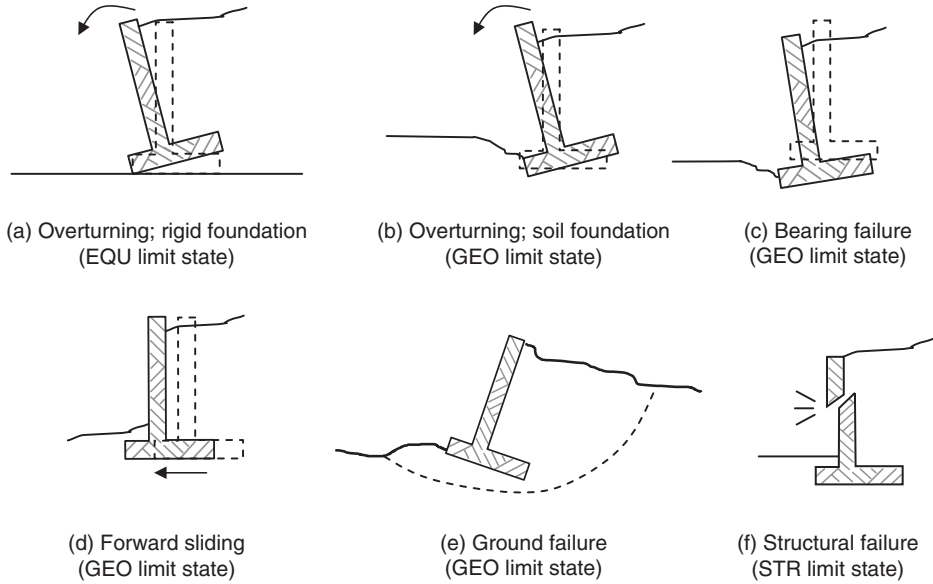


Fig. 5.8 Limit states for earth retaining structures.

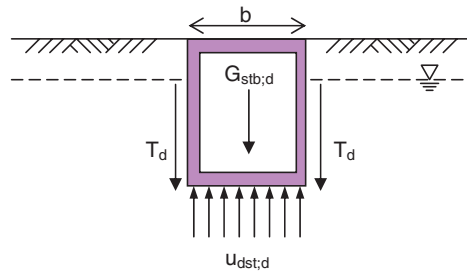


Fig. 5.9 (a) Uplift of a buried hollow structure (based on EN 1997-1, Figure 10.1).

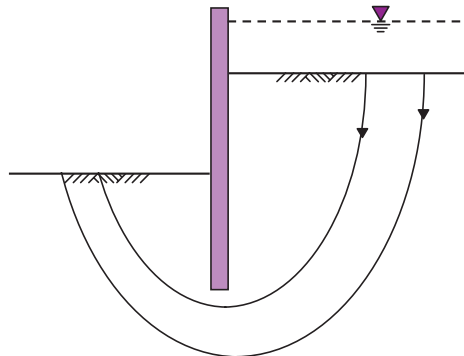


Fig. 5.9 (b) Example where heave may occur (based on EN 1997-1, Figure 10.2).

than or equal to the total vertical stress ($\sigma_{\text{stb};d}$) at the bottom of the column, or the submerged unit weight ($G'_{\text{stb};d}$) of the same column, i.e. $u_{\text{dst};d} \leq \sigma_{\text{stb};d}$ or $S_{\text{dst};d} \leq G'_{\text{stb};d}$ (e.g. Fig 5.9b and Example 2.6).

The EQU, GEO and STR limit states are the most likely ones to be considered for routine design. Furthermore, in the design of retaining walls and foundations it is likely that limit state GEO will be the prevalent state for determining the size of the structural elements.

5.6 The EQU limit state

To check this limit state, the equilibrium of the structure when considered as a rigid body is assessed. The procedure is shown in Fig. 5.10. There are two sides of the analysis to consider represented by the large shaded areas: *destabilising* actions and effects and *stabilising* actions and effects.

For both the destabilising and the stabilising aspects, the representative actions are combined with the appropriate partial factors of safety to yield the design values. The analysis (typically a moment equilibrium analysis for the EQU state) is then performed and the magnitudes of the effects of the actions are compared to assess stability.

An example of this limit state is the overturning of a gravity retaining wall resting on a rigid layer, with no contribution to stability from any adjacent soil. In the case of such a wall (e.g. Fig. 5.8a), the *destabilising actions* are the forces tending to push the wall over (e.g. the active thrust behind wall) and the *stabilising actions* are the forces resisting the overturning (i.e. the self-weight of the wall). The effects of the actions (both the stabilising and the destabilising) are the moments created by the actions. Thus, verification that the limit state requirement against overturning is satisfied requires that the overturning moment ($E_{\text{dst};d}$) is less than or equal to the restoring moment ($E_{\text{stb};d}$).

$$\text{i.e. } E_{\text{dst};d} \leq E_{\text{stb};d}$$

The partial factors for use in the EQU limit state are listed in Eurocode 7 Part 1 Annex A, and are reproduced in Table 5.1. It is important to remember that the National Annex can provide alternative values to those published in Annex A and indeed the UK National Annex publishes different material partial factors for the EQU limit state (NA to BS EN 1997-1:2004).

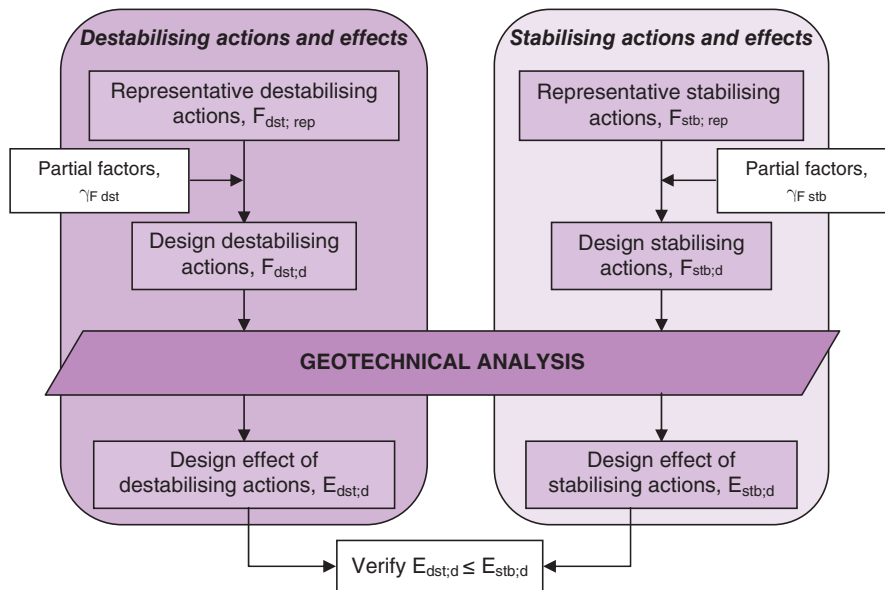


Fig. 5.10 Verification of EQU limit state for stability.

Table 5.1 Partial factor sets for EQU, GEO and STR limit states.

Parameter	Symbol	GEO/STR – Partial factor sets						
		A1	A2	M1	M2	R1	R2	R3
Permanent action (G)	$\gamma_{G,stab}$	1.35	1.0					
Variable action (Q)	$\gamma_{G,unfav}$	1.0	1.0					
	$\gamma_{G, fav}$	1.5	1.3					
Accidental action (A)	γ_Q	–	–					
	γ_A	1.0	1.0					
Coefficient of shearing resistance ($\tan \phi'$)	–	–	–					
	$\gamma_{\phi'}$	1.25		1.0	1.25			
Effective cohesion (c')	$\gamma_{c'}$	1.25		1.0	1.25			
Undrained shear strength (c_u)	γ_{cu}	1.4		1.0	1.4			
	–	–		–	–			
Unconfined compressive strength (q_u)	γ_{qu}	1.4		1.0	1.4			
	γ_{γ}	1.0		1.0	1.0			
Bearing resistance ($R_{b,v}$)	γ_{Rv}					1.0	1.4	1.0
Sliding resistance (R_{h})	γ_{Rh}					1.0	1.1	1.0
Earth resistance (R_e)	γ_{Re}					1.0	1.4	1.0

Note: weight density \equiv unit weight.

Example 5.3: EQU limit state

Consider a simple reinforced concrete gravity retaining wall (weight density, $\gamma_c = 25 \text{ kN/m}^3$) of width 2m retaining a homogeneous granular fill to a height of 4m as shown in Fig. 5.11. The resultant active thrust due to the retained soil is equal to 66.5 kN and the lateral thrust from the surcharge is equal to 15.1 kN. Check the safety of the wall against the EQU limit state of Eurocode 7. Assume Rankine's conditions prevail and that the wall rests on a stiff layer.

Solution:

The first step is to consider which partial factors of safety we need from Table 5.1. In this example we require factors for (i) the destabilising actions (both permanent and temporary) and (ii) the stabilising actions, i.e. $\gamma_{G;dst}$, γ_Q and $\gamma_{G;stb}$.

The actions acting are:

P_a, P_q – destabilising actions
Weight of wall, W – stabilising action

Design actions:

$$P_{a,d} = 66.5 \times \gamma_{G;dst} = 66.5 \times 1.1 = 73.2 \text{ kN}$$

$$P_{q,d} = 15.1 \times \gamma_Q = 15.1 \times 1.5 = 22.7 \text{ kN}$$

$$W_d = 2 \times 4 \times 25 \times \gamma_{G;stb} = 200 \times 0.9 = 180 \text{ kN}$$

Stability is assessed by considering the moment equilibrium about point A.

Design effect of actions:

Destabilising moment, $M_{dst; d}$

$$\begin{aligned} &= (73.2 \times 4/3) + (22.7 \times 2) \\ &= 143 \text{ kNm} \end{aligned}$$

Stabilising moment, $M_{stb; d}$

$$\begin{aligned} &= 180 \times 1.0 \\ &= 180 \text{ kNm} \end{aligned}$$

Since $M_{stb; d} \geq M_{dst; d}$ the EQU limit state requirement is satisfied.

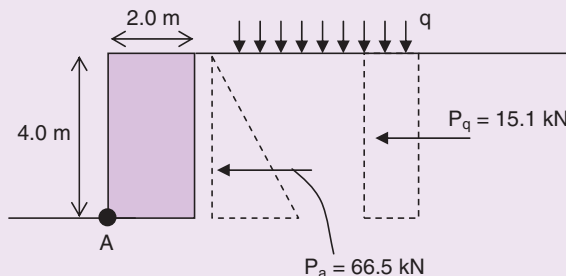


Fig. 5.11 Example 5.3.

Example 5.3 illustrates the rather rare case of a retaining wall placed onto a rigid base, such as rock-head, with no significant resistance coming from any soil present. Most commonly however, the adjacent ground conditions would contribute to the stability of the wall and in these cases the safety must be assessed by using the GEO limit state instead.

5.7 The GEO limit state and design approaches

To check this limit state, the strength of the ground is assessed to ensure ground failure will not occur. The procedure is shown in Fig. 5.12.

There are two sides of the analysis to consider represented by the large shaded areas: *actions and effects* and *material properties and resistance*. The representative actions are combined with the appropriate partial factors of safety to yield the design values. The material properties are then combined with their partial factors of safety to yield the design material properties. The analysis is then performed and the design effect of the actions is compared to the design resistance to assess safety.

An example of this limit state is the forward sliding of a gravity retaining wall. In the case of such a wall (e.g. Fig. 5.8d), the design effects of the actions (i.e. the forward sliding caused by the active thrust behind wall) and the design resistance (i.e. the force resisting sliding along the base of the wall) are established. Verification that the limit state requirement against sliding is satisfied requires that the effect of the actions (E_d) is less than or equal to the ground resistance (R_d).

$$\text{i.e. } E_d \leq R_d$$

5.7.1 Design approaches

When checking the GEO and STR limit state requirements, one of three design approaches is used: *Design Approach 1*, *Design Approach 2* or *Design Approach 3*. This choice of three approaches reflects the

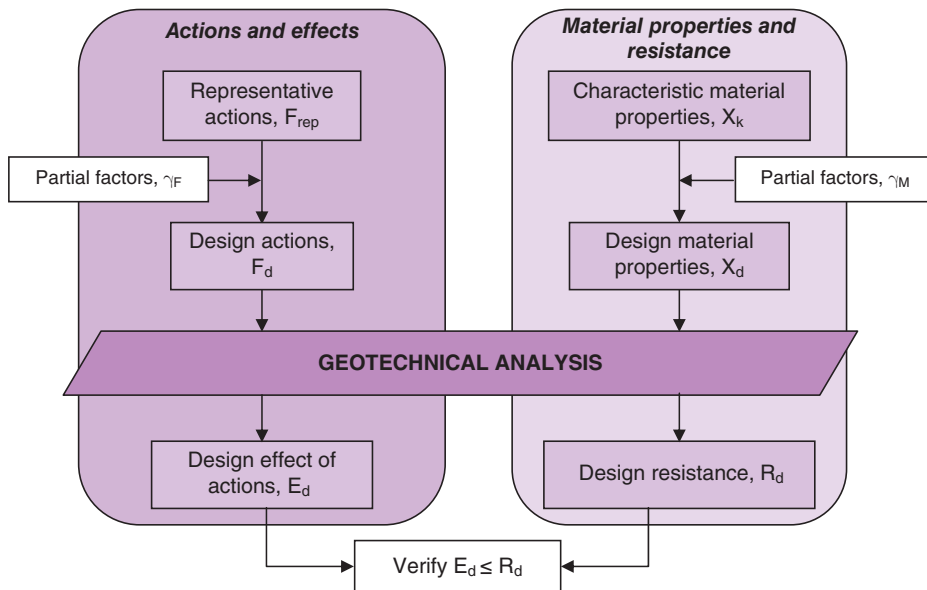


Fig. 5.12 Verification of GEO limit state for strength.

Europe-wide adoption of the Standard and offers designers in different nations an approach most relevant to their needs. The UK National Annex to EN 1997-1 states that Design Approach 1 is to be used in the UK and worked examples in the following chapters illustrate the use of this method.

As mentioned earlier, the choice of partial factors to be used is dependent on the design approach being followed (for the GEO and STR limit states). For each design approach, a different combination of partial factor sets is used to verify the limit state. For Design Approach 1 (for retaining walls and shallow footings), two combinations are available and the designer would normally check the limit state using each combination, except on occasions where it is obvious that one combination will govern the design (the combination of partial factor sets for Design Approach 1 is different for pile foundations – see Chapter 10).

Design Approach 1: Combination 1: A1 + M1 + R1
Combination 2: A2 + M2 + R1

Design Approach 2: A1 + M1 + R2

Design Approach 3: A* + M2 + R3

(Note. A*: use set A1 on structural actions, set A2 on geotechnical actions).

The sets for actions (denoted by A), material properties (denoted by M) and ground resistance (denoted by R) for each design approach are given in Table 5.1. Also given in the table are the partial factors for the EQU limit state.

Example 5.4: Design approaches; design actions

A concrete foundation is to be cast into a soil deposit as shown in Fig. 5.13. The foundation has a representative self weight, W of 50 kN.

During a check for bearing resistance (see Chapter 9), the vertical representative actions $V_{G,k}$ and $V_{Q,k}$ are considered as *unfavourable*. Determine the design values of each action, for each Design Approach.

Solution:

The design values of the actions are achieved by multiplying the representative actions by the appropriate partial factors of safety from Table 5.1.

e.g. Design Approach 1, Combination 1 (DA 1-1)

$$G_d = G_k \times \gamma_G = 600 \times 1.35 = 810 \text{ kN}$$

		$V_{G,d}$ (kN)	$V_{Q,d}$ (kN)	$W_{G,d}$ (kN)
DA 1-1	$\gamma_G = 1.35$ $\gamma_Q = 1.5$	810	225	67.5
DA 1-2	$\gamma_G = 1.0$ $\gamma_Q = 1.3$	600	195	50
DA 2	$\gamma_G = 1.35$ $\gamma_Q = 1.5$	810	225	67.5
DA 3	$\gamma_G = 1.35$ $\gamma_Q = 1.5$	810	225	67.5

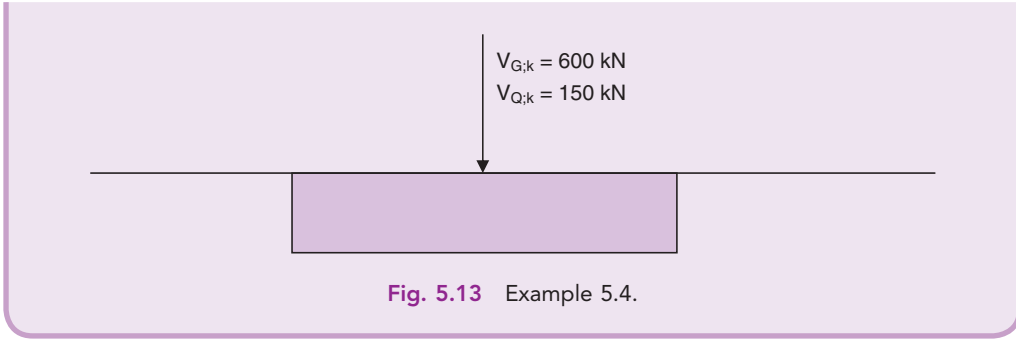


Fig. 5.13 Example 5.4.

Example 5.5: Design approaches; design geotechnical parameters

The ground beneath the foundation shown in Fig. 5.13 has the following characteristic values: $c_{u,k} = 40 \text{ kPa}$; $c'_k = 5 \text{ kPa}$; $\phi'_k = 25^\circ$.

Determine the design values of each property, for each Design Approach.

Solution:

The design values of the geotechnical properties are achieved by dividing the characteristic values by the appropriate partial factors of safety from Table 5.1.

e.g. Design Approach 1, Combination 2 (DA 1-2)

$$\phi'_d = \tan^{-1} \left(\frac{\tan \phi'_k}{\gamma_{\phi'}} \right) = \tan^{-1} \left(\frac{\tan 25^\circ}{1.25} \right) = 20.5^\circ$$

		Cu_d (kPa)	c'_d (kPa)	ϕ'_d (")
DA 1-1	$\gamma_{Cu} = 1.0$ $\gamma_{c'} = 1.0$ $\gamma_{\phi'} = 1.0$	40	5	25
DA 1-2	$\gamma_{Cu} = 1.4$ $\gamma_{c'} = 1.25$ $\gamma_{\phi'} = 1.25$	28.6	4	20.5
DA 2	$\gamma_{Cu} = 1.0$ $\gamma_{c'} = 1.0$ $\gamma_{\phi'} = 1.0$	40	5	25
DA 3	$\gamma_{Cu} = 1.4$ $\gamma_{c'} = 1.25$ $\gamma_{\phi'} = 1.25$	28.6	4	20.5

5.7.2 The over-design factor and the degree of utilisation

When checking the ultimate limit state (for any of the five ultimate limit states) it may be helpful to represent the degree of safety of the system by either the *over-design factor* or the *degree of utilisation*. These expressions are quite simply the ratio of the design resistance to the effects of the actions (ODF) and its reciprocal (DoU).

i.e.

$$\text{Over-design factor, } \Gamma = \frac{R_d}{E_d}$$

$$\text{Degree of utilisation, } \Delta = \frac{E_d}{R_d}$$

Example 5.6: GEO limit state: forward sliding

Return to the retaining wall of Example 5.3. Assume now that the wall is founded upon a clay of characteristic undrained strength 75 kPa. Check the safety of the wall against forward sliding by checking the GEO limit state of Eurocode 7 for all three design approaches.

Solution:

(a) Design Approach 1

1. *Combination 1: (A1 + M1 + R1)*

(i) *Design Material Properties:*

$$c_{u;d} = \frac{75}{\gamma_{cu}} = \frac{75}{1} = 75 \text{ kPa}$$

(ii) *Design Actions and effect of actions:*

The active and surcharge thrusts are unfavourable.

$$\text{Active Thrust: } P_{a;d} = 66.5 \times \gamma_G = 66.5 \times 1.35 = 89.8 \text{ kN/m}$$

$$\text{Surcharge Thrust: } P_{q;d} = 15.1 \times \gamma_Q = 15.1 \times 1.5 = 22.7 \text{ kN/m}$$

$$\text{Total Sliding force, } E_d = 89.8 + 22.7 = 112.5 \text{ kN/m}$$

(iii) *Design Resistance:*

$$R_d = c_{u;d} \times B = 75 \times 2 = 150 \text{ kN/m} \quad (\text{since } \gamma_{Rh} = 1.0, \text{ see Table 5.1})$$

$$\Gamma = \frac{150}{112.5} = 1.33$$

$$\Delta = \frac{1}{1.33} = 75\%$$

2. *Combination 2: (A2 + M2 + R1)*

$$c_{u;d} = \frac{75}{\gamma_{cu}} = \frac{75}{1.4} = 53.6 \text{ kPa}$$

$$P_{a;d} = 66.5 \times \gamma_G = 66.5 \times 1.0 = 66.5 \text{ kN/m}$$

$$P_{q;d} = 15.1 \times \gamma_Q = 15.1 \times 1.3 = 19.6 \text{ kN/m}$$

$$\text{Total Sliding force, } E_d = 66.5 + 19.6 = 86.1 \text{ kN/m}$$

$$R_d = c_{u,d} \times B = 53.6 \times 2 = 107.2 \text{ kN/m} \quad (\text{again } \gamma_{Rh} = 1.0)$$

$$\Gamma = \frac{107.2}{86.1} = 1.25$$

$$\Delta = \frac{1}{1.25} = 80\%$$

In conclusion, the GEO limit state requirement is satisfied since $R_d \geq E_d$ in both combinations. Combination 2 is more critical and thus 'governs' the design.

(b) Design Approach 2 (A1 + M1 + R2)

$$c_{u,d} = \frac{75}{\gamma_{cu}} = \frac{75}{1} = 75 \text{ kPa}$$

$$P_{a,d} = 66.5 \times \gamma_G = 66.5 \times 1.35 = 89.8 \text{ kN/m}$$

$$P_{q,d} = 15.1 \times \gamma_Q = 15.1 \times 1.5 = 22.7 \text{ kN/m}$$

$$E_d = 89.8 + 22.7 = 112.5 \text{ kN/m}$$

$$R_d = \frac{c_{u,d} \times B}{\gamma_{Rh}} = \frac{75 \times 2}{1.1} = 136.4 \text{ kN/m}$$

$$\Gamma = \frac{136.4}{112.5} = 1.21$$

$$\Delta = \frac{1}{1.21} = 83\%$$

i.e. limit state requirement ok

(c) Design Approach 3 (A* + M2 + R3)

*use A1 on structural actions, A2 on geotechnical actions

$$c_{u,d} = \frac{75}{\gamma_{cu}} = \frac{75}{1.4} = 53.6 \text{ kPa}$$

$$P_{a,d} = 66.5 \times \gamma_G = 66.5 \times 1.0 = 66.5 \text{ kN/m}$$

$$P_{q,d} = 15.1 \times \gamma_Q = 15.1 \times 1.3 = 19.6 \text{ kN/m}$$

$$\text{Total Sliding force, } E_d = 66.5 + 19.6 = 86.1 \text{ kN/m}$$

$$R_d = c_{u,d} \times B = 53.6 \times 2 = 107.2 \text{ kN/m} \quad (\text{since } \gamma_{Rh} = 1.0)$$

$$\Gamma = \frac{107.2}{86.1} = 1.25$$

$$\Delta = \frac{1}{1.25} = 80\%$$

i.e. limit state requirement ok

5.8 Serviceability limit states

Serviceability limit states are those that result in excessive settlement, heave or ground vibration and, whilst the structure at such a state is unlikely to collapse (i.e. reach the ultimate limit state), the structure will nonetheless be considered unsafe.

Only brief guidance is given in Eurocode 7 Part 1 on the checking of serviceability limit states. It is stated that verification for serviceability limit states requires that the effects of the actions (E_d) is less than or equal to the limiting values of the effects (C_d),

$$\text{i.e. } E_d \leq C_d$$

The effects of the actions (E_d) include deformations, settlements, ground heave and vibrations etc.

The values of partial factors for serviceability limit states should normally be taken equal to 1.0 though the National Annex can set different values. The limiting value for a particular serviceability deformation such as settlement must be agreed during the design of the supported structure and EN 1997-1 Annex H provides brief guidance on limiting values of structural deformation and foundation movement.

5.9 Geotechnical design report

At the end of the design process, all the calculations, drawings and ground investigation data are compiled together into the geotechnical design report. Guidance on the contents of this document is given in Section 6.7.

Chapter 6

Site Investigation

A site investigation is an essential part of the preliminary design work on any important geotechnical structure. Its purpose is to obtain information about the proposed site that can be used by the engineer to achieve a safe and economical design. Information retrieved during a site investigation can be very diverse and can include information about the past history of the site and ground information such as the sequences of strata and the depth of the groundwater level. During the ground investigation phase, samples of soil and rock can be taken for identification and laboratory testing, and *in situ* testing may be performed.

The primary objectives of a site investigation are listed in BS 5930: *Code of practice for site investigations* (BSI, 1999):

- (i) to assess the general suitability of the site for the proposed works;
- (ii) to enable an adequate and economic design to be prepared;
- (iii) to foresee and provide against difficulties that may arise during construction due to ground and other local conditions;
- (iv) to predict any adverse effect of the proposed construction on neighbouring structures.

In addition a site investigation is often necessary to assess the safety of an existing structure or to investigate a case where failure has occurred.

6.1 EN 1997-2:2007 – Ground investigation and testing

As we saw in Chapter 5, Part 2 of Eurocode 7 (EN 1997-2:2007) is the part that deals with ground investigation and testing. The contents of this document are shown in Fig. 5.3. Prior to the publication of EN 1997-2, site investigation practice in the UK followed the guidelines offered in BS 5930: *Code of practice for site investigations*. Although BS 5930 remains in current use, the procedures of EN 1997-2, together with the guidance provided in the many testing standards that are used in conjunction with it, are now in force. Some of these relevant testing standards, published by CEN and cited throughout EN 1997-2, are listed below:

- EN ISO 14688 *Geotechnical investigation and testing – Identification and classification of soil* (2 parts)
- EN ISO 14689 *Geotechnical investigation and testing – Identification and classification of rock* (1 part)
- EN ISO 17892* *Geotechnical investigation and testing – Laboratory testing of soil* (12 parts)
- EN ISO 22282 *Geotechnical investigation and testing – Geohydraulic testing* (6 parts)
- EN ISO 22475 *Geotechnical investigation and testing – Sampling and groundwater measurement* (3 parts)
- EN ISO 22476 *Geotechnical investigation and testing – Field testing* (13 parts)
- EN ISO 22477 *Geotechnical investigation and testing – Testing of geotechnical structures* (1 part, to date)

* In accordance with the UK National Annex to EN 1997-2:2007, in the UK, BS 1377:1990 remains the standard for all laboratory testing of soils, with the exception of the fall cone test, which is covered instead by EN ISO 17892-6:2004

The practices adopted in site investigations have been around for many years and whilst EN 1997-2 does offer a different strategy for the carrying out of ground investigation and testing work, the established equipment and procedures in use will not change significantly. The rest of this chapter is arranged to align with the structure of EN 1997-2.

6.2 Planning of ground investigations

The most significant (and the most expensive) part of a site investigation is the ground investigation (i.e. that stage where the ground profile and groundwater levels are established and where samples of soil and rock are taken for identification and testing). In order to maximise the value and relevance of the information and data gleaned during the ground investigation, it is critical that the investigation is well planned. Careful planning ensures that a cost-efficient investigation is achieved and that all the information required for the geotechnical design is obtained. This careful planning is achieved by performing several pre- ground investigation information searches, assessments and analyses.

6.2.1 Desk study

The desk study is generally the first stage in a site investigation. The size and extent of the study will vary according to the nature of the project and the anticipated ground conditions. It involves collecting and collating published information about the site under investigation and pulling it all together to build a conceptual model of the site. This model can then be used to guide the rest of the investigation, especially the ground investigation. Much of the information gathered at the desk study stage is contained in maps, published reports, aerial photographs and personal recollection.

Sources of information

The sources of information available to the engineer include geological maps, topographical maps (Ordnance Survey maps), soil survey maps, aerial photographs, mining records, groundwater information, existing site investigation reports, local history literature, meteorological records and river and coastal information. Details of a few of these are provided below but a thorough description of the sources of desk study information is given by Clayton *et al.* (1995).

Geological maps

Geological maps provide information on the extent of rock and soil deposits at a particular site. The significance of the geological information must be correctly interpreted by the engineer to assist in the further planning of the site investigation. Geological maps are produced by the British Geological Survey (BGS).

Topographical maps

Ordnance Survey maps provide information on, for example, the relief of the land, site accessibility, and the land forms present. A study of the sequence of maps for the same location produced at different periods in time, can reveal features which are now concealed and identify features which are experiencing change.

Soil survey maps

A pedological soil survey involves the classification, mapping and description of the surface soils in the area and is generally of main interest to agriculturists. The soil studied is the top 1–1.5m, which is the

part of the profile that is significantly affected by vegetation and the elements. The maps produced give a good indication of the surface soil type and its drainage properties. The surface soil type can often be related to the parent soil lying beneath, and so soil types below 1.5m can often be interpreted from the maps.

Aerial photographs

With careful interpretation of aerial photographs it is possible to deduce information on landforms, topography, land use, historical land use, and geotechnical behaviour. The photographs allow a visual inspection of a site when access to the site is restricted. Freely accessible satellite imagery is now a much used source of aerial photography.

Existing site investigation reports

These can often be the most valuable source of geotechnical information. If a site investigation has been performed in the vicinity in the past, then information may already exist on the rock and soil types, drainage, access, etc. The report may also contain details of the properties of the soils and test results.

6.2.2 Site reconnaissance

A walk over the site can often help to give an idea of the work that will be required. Differences in vegetation often indicate changes in subsoil conditions, and any cutting, quarry or river on or near the site should be examined. Site access, overhead restrictions and signs of slope instability are further examples of aspects that can be observed during the walk over survey. The information observed during the survey is used to complement the desk study information so that the ground investigation can be well planned.

6.2.3 Planning field investigations and lab tests

In order to obtain quantitative data on the soil and rock types and properties, the ground investigation is performed. This phase involves the sampling of the ground using recognised sampling procedures and specialist equipment. The extent of the sampling, and subsequent testing, depends mainly on the size and nature of the proposed structure, but is also influenced by the degree of variability of the soils on the site. Investigation points are locations on the site where profiling and sampling of the ground occurs. The ground is investigated and sampled by using various methods as described in the following section.

Guidance on the spacing and depth of the investigation points is given in EN 1997-2 and are summarised in Table 6.1 and Table 6.2. As can be seen, the nature of the project influences significantly the recommended extent and number of investigation points.

The depth of investigations can be reduced to $z_a = 2\text{m}$ where the foundations in Table 6.2 are constructed on competent strata with distinct geology.

Table 6.1 Guidance values for spacing and pattern of investigation points.

Structure	Spacing	Layout
High-rise and industrial structures	15–40 m	Grid pattern
Large area	≤60m	Grid pattern
Linear structures (e.g. roads, railways, walls etc.)	20m–200m	Linear
Special structures (e.g. bridges, stacks, machinery, foundations)	2–6 investigation points per foundation	
Dams and weirs	25m–75m	Along relevant sections

Table 6.2 Guidance values for depth (z_a) of investigation points.

Foundation type	Depth criteria*
Shallow foundations for high-rise and civil engineering projects	<i>The greater of:</i> $z_a \geq 6\text{ m};$ $z_a \geq 3.0 b_f$ ($b_f =$ see Fig. 6.1)
Raft foundation	$z_a \geq 1.5 b_B$ ($b_B =$ see Fig. 6.1)
Linear structures: roads and airfields	$z_a \geq 2\text{ m}$
Linear structures: canals and pipelines	<i>The greater of:</i> $z_a \geq 2\text{ m};$ $z_a \geq 1.5 b_{Ah}$ ($b_{Ah} =$ see Fig 6.1)
Pile foundations	$z_a \geq 5\text{ m};$ $z_a \geq 1.0 b_g$ $z_a \geq 3.0 D_F$ ($b_g, D_F =$ see Fig 6.1)

* The depths are measured from the reference levels shown in Fig 6.1.

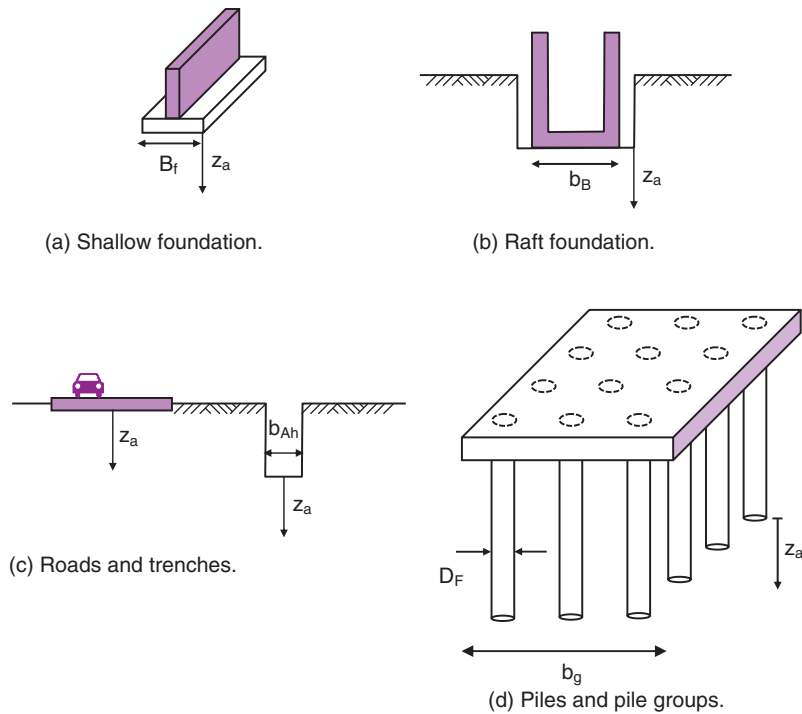


Fig. 6.1 Depth (z_a) of investigation points for various structures.

6.3 Site exploration methods

6.3.1 Trial pits

A trial pit is simply a hole excavated in the ground that is large enough if necessary for a ladder to be inserted, thus permitting a close examination of the exposed sides. The pit is created by removing successive layers of soil using a hydraulic excavator until the required depth is reached. Progression by cuts of depth about 400 mm is quite common. The excavated soil is usually placed beside the pit to enable easy backfilling once the pit is ready to be closed up again. The sides of the trial pit are never assumed to be stable and, if personnel are to enter the pit to perform close inspection of the soil, to take samples or to perform *in situ* testing, the sides of the pit must be fully supported.

Groundwater conditions can be accurately established from a trial pit and undisturbed block soil samples are obtainable relatively easily. In addition, undisturbed samples can be obtained using cylindrical steel sampling tubes gently pushed in to the soil by the excavator bucket.

Below a depth of about 4 m, the challenges of side support and the removal of excavated material become increasingly important and the cost of trial pits increases rapidly. In excavations below groundwater level the expense may be prohibitive. Trial pits should not be made at locations where pad foundations might be cast later in the project.

6.3.2 Hand excavated boreholes

A hand auger can be used in soft and loose soils for creating a borehole of up to about 6 m (using extension rods) and is useful for site exploration work in connection with roads. A choice of auger types exist, each of which is used for a specific type of soil. In clay soils a clay auger as shown in Fig. 6.2a is used, whereas in sands and gravels, the gravel auger (Fig. 6.2b) is used. The auger is connected to drill rods and to a cross bar at the top to enable the auger to be turned by hand and advanced into the soil. A rotary engine arrangement nowadays is more commonplace than the cross bar.

Hand excavated boreholes are useful for cheap, rapid sampling and assessment of ground conditions where only 1 or 2 locations on a site are of interest. For larger scale investigations, the boreholes will invariably be created using full scale drilling equipment. All samples of soil retrieved from hand excavated boreholes are classified as *disturbed*. However, 38 mm diameter *undisturbed* samples can be obtained from the undisturbed soil below the bottom of the borehole (see Section 6.4.1) using the sampling tube shown in Fig. 6.2c.

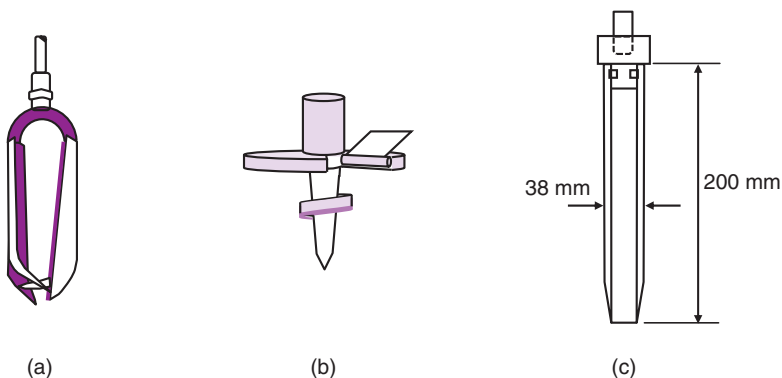


Fig. 6.2 Hand augers: (a) clay auger; (b) gravel auger; (c) 38 mm undisturbed sample tube.

6.3.3 Boreholes

In most ground investigations, several boreholes are required and these are often taken down to many metres in depth. Thus, specialist drilling equipment is required to form these. In the UK the operation is usually carried out dry whereas in the USA wash boring techniques are more common.

Two main methods of forming boreholes exist: *cable percussion boring* and *rotary drilling*.

Cable percussion boring

This method is sometimes referred to as the *shell and auger* method. The equipment is shown in Fig. 6.3.

The principle of operation is:

- the A-frame (which is transported to site in its collapsed state, towed by a 4-wheel drive vehicle) is erected at the location of the borehole and stabilised;
- the winch, powered by the portable diesel generator, lifts the cutting tool (Fig. 6.4) towards the top of the A-frame. In clay soils, the *clay-cutter* is used; in more sandy and gravelly soils the *shell* is used;
- the winch brake is released and the tool is allowed to fall freely into the soil;

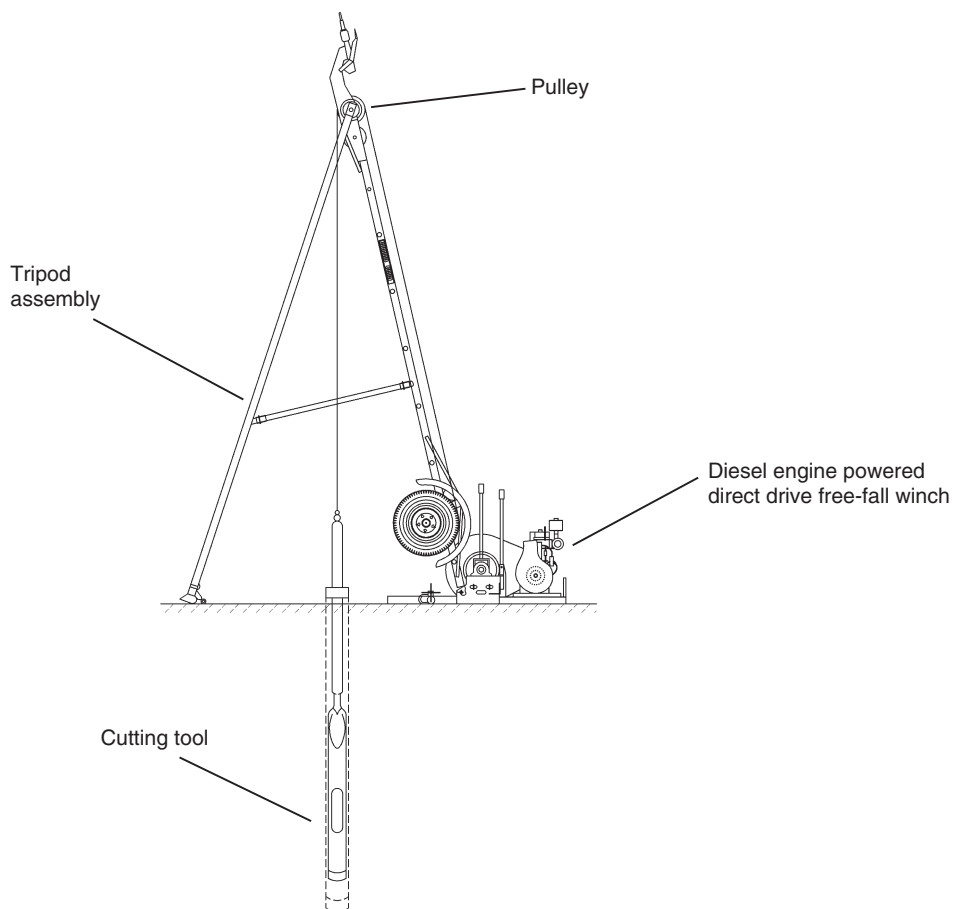


Fig. 6.3 Cable percussion boring.

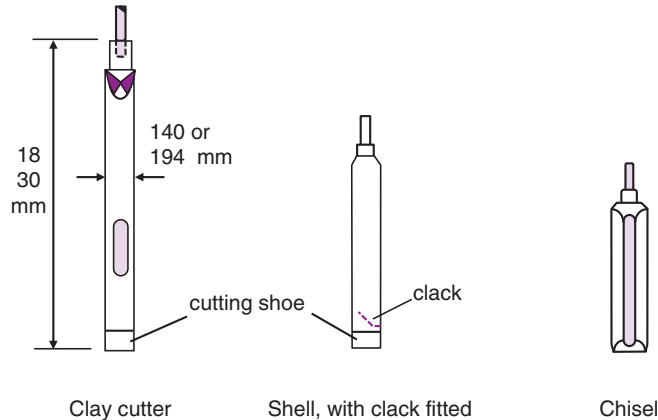


Fig. 6.4 Cable percussion cutting tools and samplers.

- the cutting tool drives into the soil and the borehole soil is forced inside the tool;
- the winch raises the tool from the ground, the soil inside the tool is cleaned out (and sampled if appropriate) and the now clear tool is raised once again to the required free fall height and the process repeated over and over;
- as the borehole is advanced, the sides of the borehole are supported by sequentially installed tube sections of steel known as the borehole casing. These sections are advanced as the borehole itself is advanced;
- undisturbed samples of soils are retrieved in steel or plastic sampling tubes (see Section 6.4);
- the driller operating the equipment records a log of the progress of the borehole and makes any observations such as soil types, obstructions, groundwater level etc.

This is an extremely versatile and relatively inexpensive means of forming a borehole. As seen, it can be used in different soil types and this is essential for any borehole forming equipment. If boulders or cobbles are encountered, these can be broken down using a heavy chisel in place of the cutting tool until the obstruction is clear, then progress can continue.

In clay soils, the soil is simply wedged inside the clay-cutter and is removed by hand from inside using steel bars pushed through the side slots. In granular soils the material is retrieved by means of the shell. This cutting tool is fitted with a clack (a hinged lid) that closes as the shell is withdrawn and retains the loose particles inside. The soil is removed and sampled by opening the clack once the shell is at ground level.

Rotary drilling

Rotary drilling involves using a high-powered, truck mounted motor to rotate drilling rods connected to a drill bit into the ground as shown in Fig 6.5. The technique was traditionally used mainly for boring and sampling rock, although the technique is becoming increasingly used in soils work too. The heavy-duty drill bit (interchangeable types exist for whether boring or sampling is taking place) is attached at the end of the drilling rods and rotates at high speeds to cut into the ground and move downward.

The drilling rods are hollow so that a water-based coolant mixture can be pumped down them and out through the holes in the drill bit into the surrounding space within the borehole. This fluid has several functions: it acts as both a coolant and as a lubricant to aid the cutting process, it provides pressure balance during drilling to resist inflow of groundwater to the borehole and it provides the means by which the cuttings of soil and rock are pumped up around the drilling rods to the surface for removal.

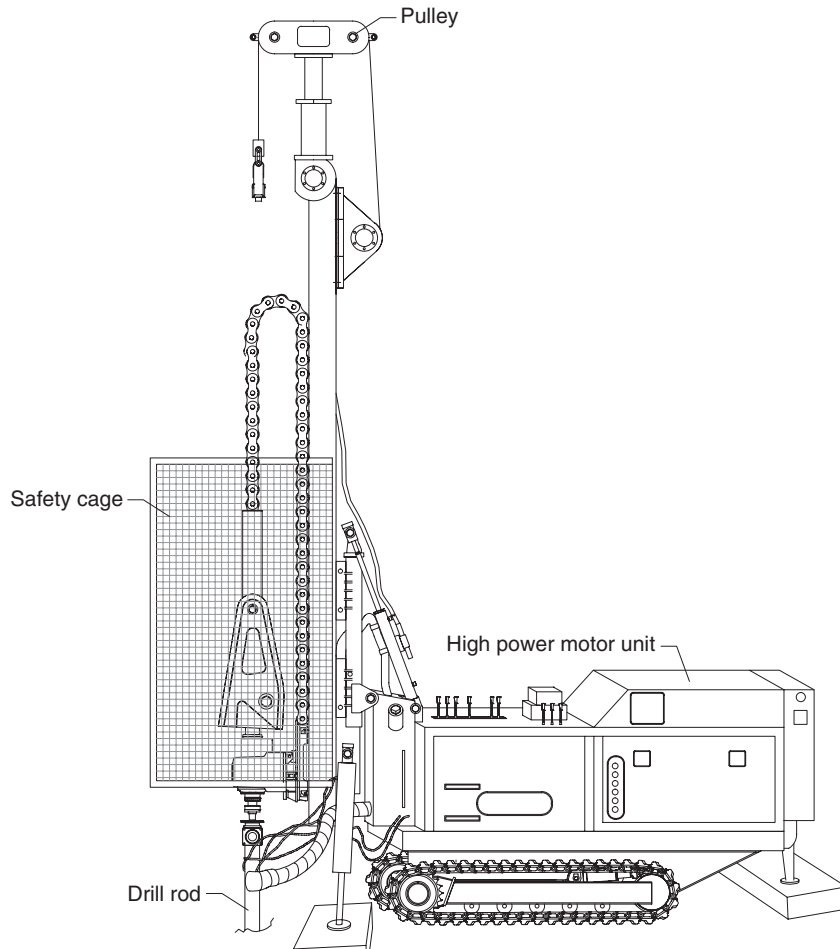


Fig. 6.5 Rotary drilling rig.

Sonic drilling

A recent development in drilling technology is sonic drilling. This process involves the use of a sonic drill head at the ground surface that is vibrated at various high frequencies controlled by the operator, depending on the particular ground conditions being encountered. The equipment is the same as used for rotary drilling except for the sonic drill head addition.

The head contains the conventional rotary drilling/coring mechanism and is fitted with an oscillator. The oscillator sends high frequency vibrations, generally between 50–150 Hz, down the drill rods and sampler barrel. This means that during operation the drill bit is rotated, advanced and now also vibrated into the ground. These three components of the drilling energy allow the drill to proceed rapidly through the ground including drilling through boulders and most types of rock. In physical terms, the resonance of the vibrations increases the amplitude of the drill bit that enables rapid advancement of the borehole to be made. Indeed sonic drilling can advance a borehole up to 5 times faster than conventional rotary drilling. Sonic drilling is also useful for retrieving continuous, relatively undisturbed, soil samples and rock cores.

6.4 Soil and rock sampling

Soil and rock samples are taken regularly during the ground investigation so that specific ground properties required in the geotechnical design can be established.

6.4.1 Soil sampling

Two types of soil sample can be obtained: disturbed sample and undisturbed sample.

Disturbed samples

The soil excavated from a trial pit, or the soil from the clay cutter or the shell from a borehole, can be collected as disturbed samples. Such soil has been remoulded and is of no use for shear strength tests but is useful for identification, classification and chemical tests such as liquid and plastic limit determination, particle size distribution and sulphate testing. Disturbed samples are usually collected in plastic sampling bags or airtight tins or jars, and are labelled to give the borehole (or trial pit) number, the depth and a description of the contents.

Undisturbed samples (cohesive soil)

Undisturbed samples can be achieved using different equipment and techniques in different situations. There will always be an element of disturbance to any sample of soil taken from the ground, but that disturbance can be minimal if care and appropriate methods are used.

(i) *Trial pits*

In a trial pit samples can be cut out by hand if care is taken. Such a sample is placed in an airtight container and as a further measure to avoid change in water content, it may be sealed in paraffin wax.

(ii) *Hand excavated boreholes*

In a hand excavated borehole, the hand auger can be used to obtain useful samples for unconfined compression tests and employs 38 mm sampling tubes with a length of 200 mm (Fig. 6.2c). The auger is first removed from the rods and the tube fitted in its place, after which the tube is driven into the soil at the bottom of the borehole, given a half turn, and withdrawn. Finally, the ends of the tube are sealed with end caps.

(iii) *Rotary core drilling*

During the advancement of the borehole, the cutting tool is used (Fig. 6.6a). This process is known as open-hole drilling. The soil cuttings are too disturbed and mixed with drilling fluid to be of any use for sampling so the method is really only used to rapidly advance the borehole to the required depth for sampling to commence.

To take samples of soil or rock, the cutting tool is replaced by the coring tool attached to a core barrel (Fig. 6.6b). Industrial diamonds are cast into the tungsten carbide cutting tool face to enable the cutting shoe to cut through even the hardest of rocks. The core of soil or rock that is cut during this coring process is collected in the core barrel and can be brought to the surface for labelling and identification and transported to the geotechnical laboratory for testing. The core barrel can actually take one of three forms: single-tube, double-tube or triple-tube.

A single-tube barrel has the same diameter as the drilling rods and is connected directly to the cutting shoe. Samples retrieved in a single-tube core barrel experience a fair degree of disturbance, so double and triple-tube barrels are often used in preference.

As suggested by the name, a double-tube barrel comprises two tubes: an outer one which is attached to the coring bit and rotated by the drill rods, and a non-rotating inner one into which the core sample passes as the cutting bit is advanced as shown in Fig. 6.6b. An extension of the double-tube arrangement is to include a sample liner within the inner tube. This is known as a triple-tube core barrel.

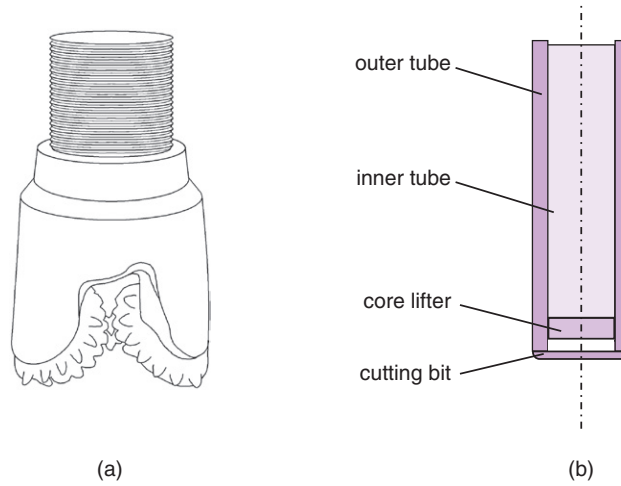


Fig. 6.6 Rotary drilling bits: (a) cutting bit; (b) double-tube core barrel.

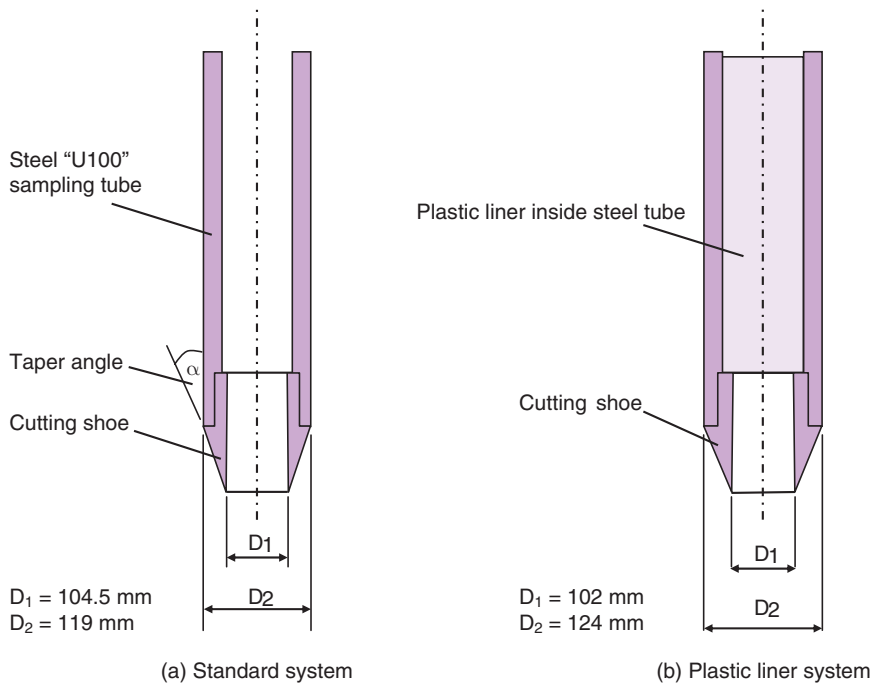


Fig. 6.7 Cable percussion equipment to obtain undisturbed samples: (a) standard system; (b) plastic liner system.

(iv) Cable percussion borehole

With the cable percussion boring rig, 100mm diameter undisturbed samples, commonly referred to as U100 samples, are collected in a steel sampling tube fitted with a cutting shoe, driven into the soil under the percussive action of the falling weight assembly. Two approaches to retrieving the sample exist: a standard system using a steel sampling tube and cutting shoe as shown in Fig. 6.7a

and a plastic liner system where the liner fits inside a larger steel tube and cutting shoe assembly, Fig. 6.7b. The degree of disturbance (see Section 6.4.2) is different between both systems.

During driving any entrapped water, air or slush can escape through a non-return valve fitted in the driving head at the top of the tube. After collection, the sample is sealed with end caps at both ends. If the sample is to be stored for a long time, a paraffin wax coating can be applied to each end of the soil in the tube to prevent long-term changes in water content.

Despite their popularity in the UK, with the implementation of EN ISO 22475-1:2006 (*International Standard for Geotechnical Investigation and Testing – Sampling and groundwater measurements*), U100 samples are likely to become less used in the site investigation industry in the coming years. This standard recognises that U100 samples are not wholly appropriate for use for certain geotechnical tests (see Section 6.4.3) and shows that other methods of soil sampling retrieve better quality samples.

(v) *Thin-walled tube sampler*

For soils such as soft clays and silts that are sensitive to disturbance, a thin-walled sampling tube can be used. Because of the softness of the soil to be collected, the tube is simply machined at its end to form a cutting edge and does not have a separate cutting shoe. The thin-walled sampler is similar in appearance to the sample tube shown in Fig. 6.7a but can have an internal diameter of up to about 200mm.

These sampling techniques involve the removal of the boring rods from the hole, the replacement of the cutting edge with the sampler, the reinsertion of the rods, the collection of the sample, the removal of the rods, the replacement of the sampler with the cutting edge and, finally, the reinsertion of the rods so that boring may proceed. This is a most time-consuming operation and for deep bores, such as those that occur in site investigations for offshore structures, techniques have been developed to enable samplers to be inserted down through the drill rods so that soil samples can be collected much more quickly.

(vi) *Piston sampler*

A piston sampler is a specific thin-walled sampler for use in weak soils such as soft clays and slurry materials. A hydraulically powered piston sits neatly within the sampling tube and the assembly, with the piston locked in place at the cutting end of the tube, is carefully lowered to the bottom of the already formed borehole. The piston is connected by piston rods which pass through a sliding joint in the sampler head assembly so that the sample tube and the piston can move vertically independently of each other (Fig. 6.8).

The sample is taken from the undisturbed zone of soil beneath the borehole by releasing the lock between piston and tube and pushing the sampling tube into the ground. The piston remains still during this operation.

Once the tube is fully driven into the soil, the undisturbed sample fully occupies the sampling tube and the assembly is rotated slightly to shear the sample from the ground. The tube and piston are then locked together again and raised to the surface. A suction pressure is imparted within the sampling tube, which ensures that the sample is delicately held intact.

(vii) *Continuous sampler*

In some cases, particularly where the soil consists of layers of clay, separated by thin bands of sand and silt and even peat, it may be necessary to obtain a continuous core of the soil deposits for closer examination in the laboratory. Such sampling techniques are highly specialised and require the elimination of friction between the soil sample and the walls of the sampler. A sampler which reduces side friction by the use of thin strips of metal foil placed between the soil and the tube was developed by Kjellman *et al.* (1950) and is capable of collecting a core 68mm in diameter and up to 25m in length.

(viii) *Window sampler*

Window sampler tubes, about 1 m in length, are driven into the ground using the percussive or jacking methods described earlier. The sampler possesses a slot, or window, cut on one side through which the soil can be inspected and sampled.

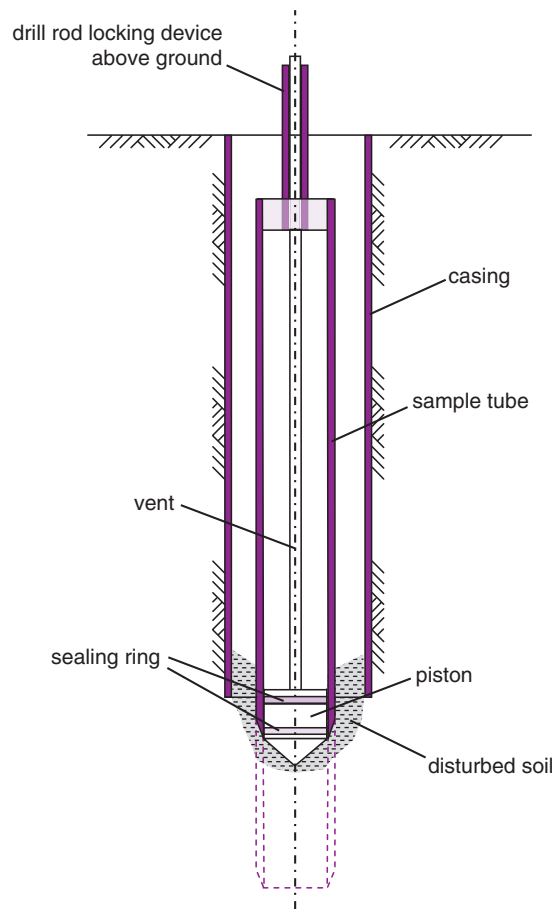


Fig. 6.8 Thin-walled stationary piston sampler.

Undisturbed samples (sands)

If care is taken it may be possible to extract a sand sample by cutting from the bottom or sides of a trial pit. In a borehole, above groundwater level, sand is damp and there is enough temporary cohesion to allow samples to be collected in sampling tubes, but below groundwater level tube sampling is not possible. Various techniques employing chemicals or temporarily freezing the groundwater have been tried, but they are expensive and not very satisfactory; the use of compressed air in conjunction with the sampler evolved by Bishop (1948), however, enables a reasonably undisturbed sample to be obtained.

Owing to the fact that sand is easily disturbed during transportation any tests on the soil in the undisturbed state should be carried out on the site, the usual practice being to use the results of penetration tests (see Section 6.6) instead of sampling.

6.4.2 Degree of sample disturbance

No matter how careful the technique employed, there will inevitably be some disturbance of the soil during its collection as an 'undisturbed' sample, the least disturbance occurring in samples cut from the floor or sides of a trial pit. With sample tubes, jacking is preferable to hammering although if the blows are applied in a regular pattern there is little difference between the two.

There are various measures that can be used to assess the degree of sample disturbance based on the dimensions of the sampling tube (BS EN ISO 22475-1:2006, BSI (2006)) but the most commonly used is the area ratio, C_a :

$$C_a = \frac{D_2^2 - D_1^2}{D_1^2} \times 100$$

where D_2 and D_1 are the external and internal diameters of the cutting shoe respectively as shown in Fig. 6.7.

It is generally agreed that, for good undisturbed 100mm diameter samples, the area ratio should not exceed 25%, but in fact most cutting heads have area ratios about 28%. For 38mm samples the area ratio should not exceed 20%. Thin-walled sample tubes, of any diameter, have an area ratio of about 10%.

Example 6.1: Area ratio

Determine the area ratios for the two U100 sampling systems shown in Fig. 6.7.

Solution:

(a) standard system:

$$C_a = \frac{D_2^2 - D_1^2}{D_1^2} \times 100 = \frac{119^2 - 104.5^2}{104.5^2} = 29.7\%$$

(b) plastic liner system:

$$C_a = \frac{D_2^2 - D_1^2}{D_1^2} \times 100 = \frac{124^2 - 102^2}{102^2} = 47.8\%$$

6.4.3 Categories of sampling methods and laboratory quality classes of samples

A major consideration during sampling a particular stratum is to ensure that the sample taken is appropriate for the tests required and that the results obtained from the testing are then relevant to the actual conditions in the field. To ensure accurate and reliable test results, the quality of the sample must therefore be appropriate for that particular test. For example, a sample of soil taken for shear strength determination by triaxial testing must be undisturbed, whereas a sample for particle size distribution can be a disturbed sample.

EN 1997-2:2007 offers guidance which is used, alongside EN ISO 22475-1:2006 (the *International Standard for Geotechnical Investigation and Testing – Sampling methods and groundwater measurements*), to identify the type of laboratory tests that can be performed from different quality classes of sample, which in turn are achievable from the different sampling methods available.

Five classes of samples are considered, with Class 1 being the highest quality (least disturbed, most representative of actual *in situ* conditions and appropriate for use in shear strength and compressibility testing) and Class 5 being the lowest quality (i.e. completely disturbed and only of use in identifying the sequence of layers in the ground).

Three categories of sampling methods (Categories A, B and C) are considered. They are related to the best obtainable laboratory quality class of soil samples as shown in Table 6.3.

Table 6.3 Quality classes of soil samples for laboratory testing and sampling categories to be used (after BS EN 1997-2:2007).

Soil properties:	Quality class of sample				
	1	2	3	4	5
Unchanged soil properties					
particle size	*	*	*	*	
water content	*	*	*		
density, density index, permeability	*	*			
compressibility, shear strength	*				
Properties that can be determined					
sequence of layers	*	*	*	*	*
boundaries of strata – broad	*	*	*	*	
boundaries of strata – fine	*	*			
Atterberg limits, particle density, organic content	*	*	*	*	
water content	*	*	*		
density, density index, porosity, permeability	*	*			
compressibility, shear strength	*	*			
Sampling category according to EN ISO 22475-1	A		B		C

From Table 6.3 it is seen that:

- Sample quality classes 1 to 5 can be achieved from Category A sampling methods.
- Sample quality classes 3 to 5 can be achieved from Category B sampling methods.
- Sample quality class 5 can be achieved from Category C sampling methods.

Guidance on which sampling techniques fall into each category for different ground conditions are given in EN ISO 22475-1:2006. These are summarised in Table 6.4.

Table 6.4 Sampling categories for different soil types.

Sampling method:		Soil type				
		Clay	Silt	Sand	Gravel	Organic
Rotary core drilling	Single-tube	B	C	C	C	B
	Double- or triple-tube	A	B	B	–	–
Augering		C(B)	C	C	C	C(B)
	Hollow stem augering	B	B	B	B	B
Thin-walled open tube samplers	Pushed	A	A	A	–	A
	Percussion	B(A)	–	–	–	–
Thick-walled open tube samplers	Percussion	B(A)	B(A)	B	B	–
	Piston samplers	–	A	–	–	A
Large samplers		A	–	–	–	–
		A	A	–	–	–
Sampling from trial pit		A	A	A	A	A
Sampling from borehole bottom		A	–	–	–	–

Key: B(A), C(B) – the category in brackets is only achievable in favourable conditions, else the first category applies.

6.4.4 Rock sampling

The most common form of taking rock samples is through rotary coring, as described in Section 6.4.1. As with soils, three categories of sampling methods (Categories A, B and C) are considered, depending on the quality of the rock sample. Category A samples are those which are more or less completely intact from which measurements of strength, deformation, density and permeability relate directly to the *in situ* condition. Category B samples include those that comprise broken segments of core where test results from the segments would not necessarily relate directly to the state in the undisturbed rock mass. Category C samples are those where the structure and constituents of the rock are so disturbed that only a limited set of identification and chemical tests can be performed on them.

The quality of the rock sample can be assessed by determining three rock-core quantification parameters: total core recovery (TCR), rock quality designation (RQD) and solid core recovery (SCR), each of which is determined as a ratio of specific lengths of the different segments of the core sample to the total length of the sample. Details are given in EN ISO 22475-1:2006.

6.5 Groundwater measurements

It is not possible to determine accurate groundwater conditions during the boring and sampling operations, except possibly in granular soils. Therefore the determination of the groundwater conditions is made separately by installing *open* or *closed* groundwater measuring systems into the ground. Open systems are methods that measure the water head via an observation well and open standpipe. Closed systems measure the water pressure at a certain location via a measurement device inserted into the soil.

6.5.1 Open systems

In clays and silts it takes some time for water to fill in a borehole, and the normal procedure for obtaining the groundwater level is to insert an open-ended tube, usually 50 mm in diameter and perforated at its end, into the borehole (Fig. 6.9a). A filter to prevent the inflow of soil particles is placed around the

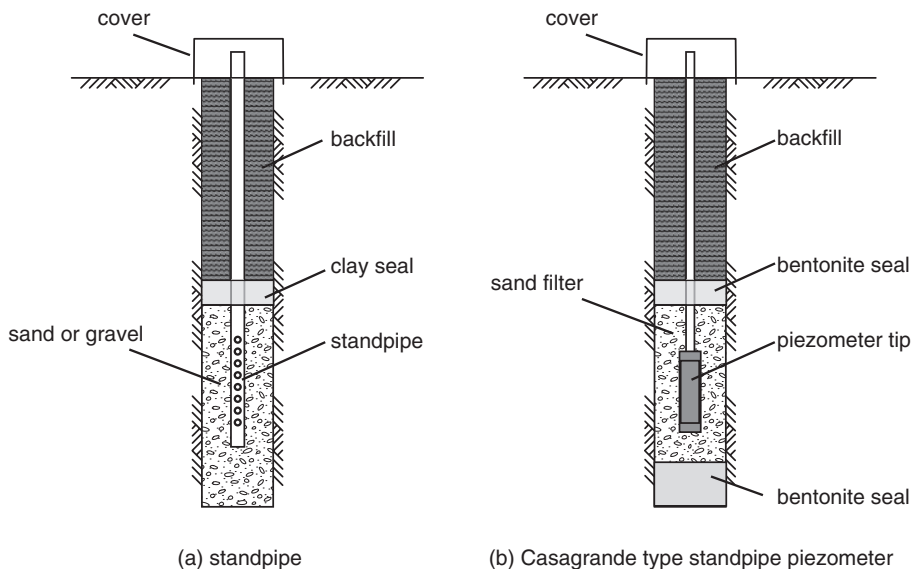


Fig. 6.9 Ground water level observation in a borehole: (a) standpipe; (b) Casagrande type standpipe piezometer.

perforated end. The tube is packed around with gravel and sealed in position with puddle clay and the borehole is then backfilled and sealed at the ground surface to prevent ingress of rainwater. The arrangement is simply known as a standpipe. Observations should be taken for several weeks until equilibrium is achieved.

By inserting more than one tube, different strata can be cut off by puddled clay and the various water heads obtained separately. When a general water level is to be obtained, the gravel is usually extended to within a short distance of the top of the borehole and then sealed with the puddle clay.

Open-ended tubes tend to exhibit a slow response to rapid pore water pressure changes that can be caused, for example, by tidal variations or changes in foundation loadings. Casagrande type standpipe piezometers are more commonly used. They have a porous intake filter and are sealed into the soil above and below the intake end with either bentonite plugs or with a bentonite/cement grout seal (Fig. 6.9b).

6.5.2 Closed systems

For soils of medium to low permeability, open standpipes cannot be used because of the large time lag involved. When a faster response is necessary a closed piezometer system, such as a hydraulic, a pneumatic or an electrical system, is used instead of an open one. The systems are illustrated in Fig. 6.10.

Hydraulic system

In a hydraulic system, a ceramic filter unit is connected by twin, narrow nylon tubing to a pressure transducer housed in a pressure readout unit at the ground surface. The tubes and filter are filled with de-aired water. Changes in pore water pressure in the ground cause a change in the flow of water within the equipment which in turn is detected by the pressure transducer. The pressure is read directly from, and recorded by, the reader.

Pneumatic system

A pneumatic piezometer contains a flexible diaphragm housed within a protective casing and connected to a sensor at the ground surface via twin pneumatic tubes. The outer aspect of the diaphragm is in

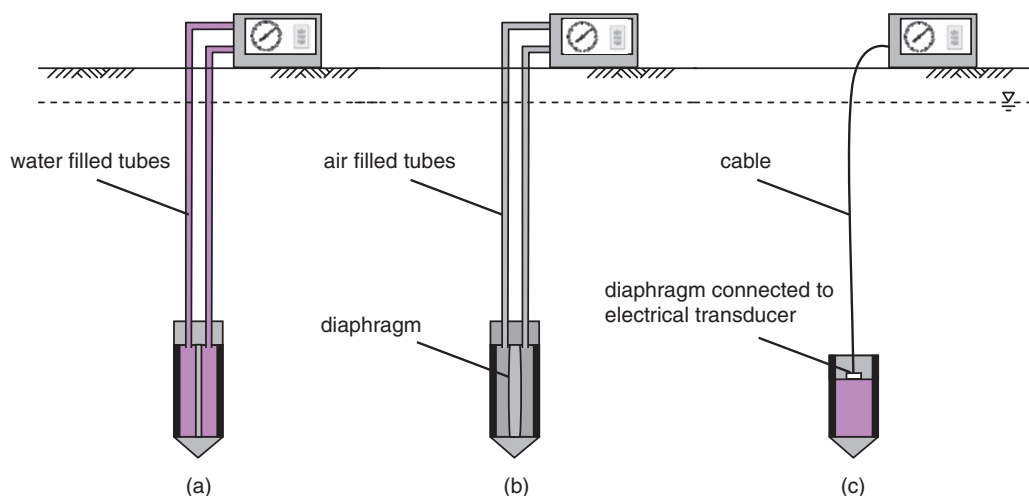


Fig. 6.10 Closed piezometer systems: (a) hydraulic system; (b) pneumatic system; (c) electrical system.

contact with the saturated soil and is pushed inwards within the housing as a result of the pore water pressure acting on it. A flow of dry compressed air is passed from the sensor to the inner aspect of the diaphragm until the point that the diaphragm is forced back outwards. At this point the gas pressure is equal to the pore water pressure and this value is simply read from the sensor unit.

Electrical system

The electrical piezometer also incorporates a diaphragm within a protective housing operated within a borehole. The diaphragm is connected to a transducer and the water pressure acting on the diaphragm causes a measurable response. The signal from the transducer is transmitted to a readout device at the surface and then converted to display the pore water pressure.

The advantages of the electrical system are that (i) pressure is measured at the tip so that piezometric levels below the gauge house level can be recorded, (ii) the ancillary equipment is compact, and (iii) the time response of these instruments to pore pressure changes is fairly rapid. Disadvantages include the fact that the readings from an electric tip depend upon an initial calibration that cannot be checked once the tip has been installed, and the risk of calibration drift (especially if the tip is to be in operation for some time).

Instrumentation in geotechnical engineering is dealt with in detail by Dunnicliff (1993) and a review of piezometers within boreholes has been provided by Mikkelsen and Green (2003).

6.6 Field tests in soil and rock

During a ground investigation, field tests can be conducted to provide additional ground stratification information and to obtain geotechnical parameters for the design. The tests are arranged such that the data they reveal complement the soil and rock sampling so that all the information retrieved from the ground investigation is linked.

A range of tests exist, each of which is used to gain specific information, and the following tests are recognised in EN1997-2:2007 and ISO 22476 (the *International Standard for Geotechnical Investigation and Testing – Field testing*):

- cone penetration test;
- pressuremeter and dilatometer tests;
- standard penetration test;
- dynamic probing;
- weight sounding test;
- field vane test;
- flat dilatometer test;
- plate loading test.

Some of these tests are more commonly used than others. Some of the most common in the UK are described below.

6.6.1 Cone penetration test (CPT)

This test, sometimes referred to as the Dutch cone penetrometer as it was originally developed in The Netherlands, is described fully in EN ISO 22476-1:2012 and involves a cone penetrometer at the end of a series of stiff cylindrical rods being pushed vertically into the ground at a constant rate of penetration. A record of the resistance to the movement of the cone against depth is taken so that changes in soil strata and other soil strength considerations can be identified. The movement of the cone is resisted by both the ground ahead of the cone as it advances through the soil, plus the friction acting on the side of the cone as it is pushed into the ground.

The cone has an apex angle of 60° and diameter of 35.7 mm, giving an end area of 1000 mm^2 . The cone is forced downwards at a steady rate (15–25 mm/s) through the soil by means of a load from a vehicle-mounted hydraulic jack transmitted to solid push rods.

The penetrometer is a sophisticated device and contains sensors for measuring the force resisting the cone, the side friction placed on the unit (known as sleeve friction) and, where required, the pore pressure acting on the cone penetrometer. Where pore water pressures are recorded, the test is known as piezocone penetration (CPTU) testing. To ensure the instrument is travelling vertically into the ground, an internal inclinometer is also included. This device records the angle of the instrument from the vertical.

The results obtained from the CPT/CPTU tests are recorded as plots of the measured value (cone resistance, sleeve friction, pore pressure) versus depth. These plots can then be used to visually and rapidly assess the strength of the ground profile. Example plots are shown in Fig. 6.11.

A full description of cone penetration testing and its application in geotechnical and geo-environmental engineering is given by Lunne *et al.* (1997).

6.6.2 Standard penetration test (SPT)

This test is generally used to determine the bearing capacity of sands or gravels and is conducted with a split spoon sampler (a sample tube which can be split open longitudinally after sampling) with internal and external diameters of 35 and 50 mm respectively (Fig. 6.12). A full guide on the methods and use of the SPT is given by Clayton (1995) and the test specification is given in EN ISO 22476-3:2005.

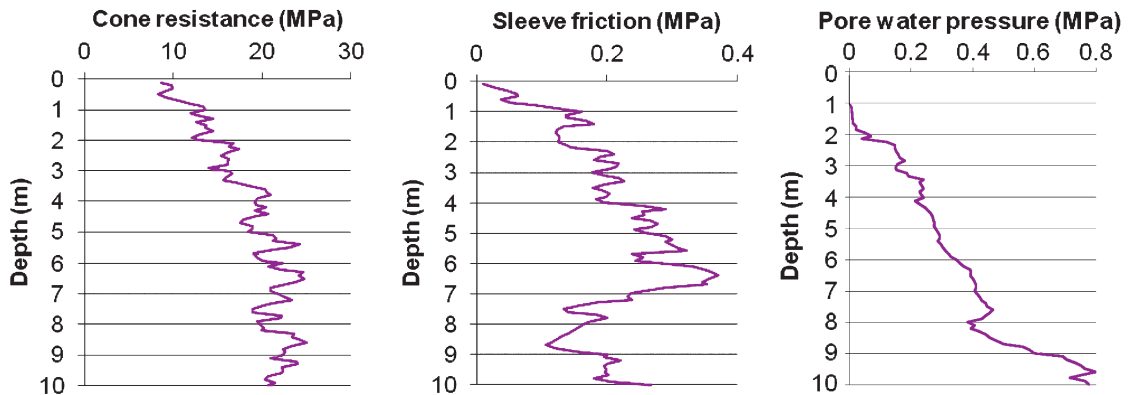


Fig. 6.11 Plots of cone resistance, sleeve friction and pore pressure with depth from CPTU test.

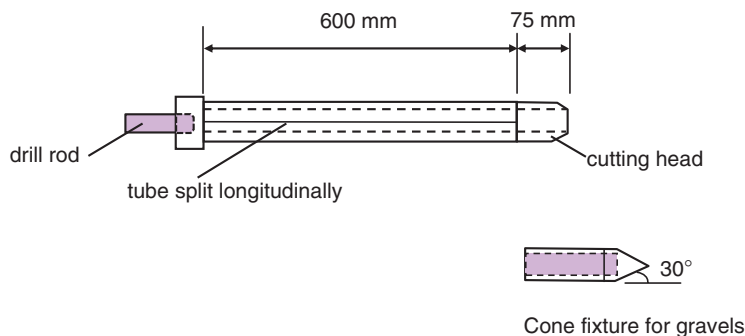


Fig. 6.12 Standard penetration test sampler.

The sampler, connected to a sequence of drive rods, is lowered down the borehole until it rests on the layer of cohesionless soil to be tested. It is then driven into the soil for a length of 450 mm by means of a 63.5 kg hammer free-falling 760 mm for each blow. The number of blows required to drive the last 300 mm is recorded and this figure is designated as the N-value or the penetration resistance of the soil layer. The first 150 mm of driving is ignored because of possible loose soil in the bottom of the borehole from the boring operations. After the tube has been removed from the borehole it can be opened and its contents examined.

In gravelly sand damage can occur to the cutting head of the sampler and a 60° solid cone can be fitted in its place. In such a case the test is recorded as SPT(C). The N-value derived from such soils appears to be of the same order as that obtained when the cutting head is used in finer soils.

Correction factors to the measured N-value

The N-value observed from the test is affected by different features of the testing procedure and ground conditions. To take these into consideration, a number of correction factors can be applied to achieve a more appropriate N-value. The most significant factors address energy losses delivered by the hammer assembly and the effect of overburden pressure acting on the soil under test. EN ISO 22476-3:2005, Annex A offers the following corrections:

i) *Energy delivered to the drive rods*

An energy ratio, E_r , measuring the ratio of the energy applied to the driving rods to the theoretical energy available from the hammer, can be used to assess the energy loss in the hammer system. The N-value is adjusted to a reference energy ratio of 60% through the following expression:

$$N_{60} = \frac{E_r}{60} N$$

where N_{60} denotes the N-value corrected for energy losses for a system operating with an energy ratio E_r .

ii) *Effect of overburden pressure in sands*

An important feature of the standard penetration test is the influence of the effective overburden pressure on the N-value. Sand can exhibit different N-values at different depths even though its density index is constant. The effect of the overburden pressure can be taken into account by combining the N-value by the relevant Correction factor, C_N listed in Table 6.5.

The N_{60} value can now be corrected against a normalised effective vertical stress $\sigma'_v = 100$ kPa:

$$(N_1)_{60} = \frac{E_r \times N \times C_N}{60}$$

Table 6.5 Correction factors for overburden effective vertical stress, σ'_v (kPa).

Type of consolidation	Density index, I_D (%)	Correction factor, C_N
Normally consolidated	40–60	$\frac{200}{100 + \sigma'_v}$
	60–80	$\frac{300}{200 + \sigma'_v}$
Overconsolidated	–	$\frac{170}{70 + \sigma'_v}$

Table 6.6 Correction factors for rod length in sands.

Rod length (m)	Correction factor λ
>10	1.0
6–10	0.95
4–6	0.85
3–4	0.75

where $(N_1)_{60}$ denotes the N-value corrected for energy losses and normalised for effective vertical overburden stress.

iii) *Energy losses due to the length of the rods*

Where rods of length less than 10 m are used, a correction can be applied to the blow count for sands to allow for energy losses. The correction factors are given Table 6.6.

The $(N_1)_{60}$ expression can now be extended to allow for the energy losses in the rods:

$$(N_1)_{60} = \frac{E_r \times N \times C_N \times \lambda}{60}$$

Example 6.2: Standard Penetration Test

A silty sand of density index, $I_D = 60\%$ was subjected to standard penetration tests at a depth of 3 m. Groundwater level occurred at a depth of 1.5 m below the surface of the soil which was saturated throughout and had a unit weight of 19.3 kN/m^3 . The average N count was 15.

During calibration of the test equipment, the energy applied to the top of the driving rods was measured as 350 Joules.

Determine the $(N_1)_{60}$ value for the soil.

Solution:

$$\text{Theoretical energy of hammer} = m \times g \times h = 63.5 \times 9.81 \times 0.76 = 473 \text{ J}$$

$$\text{Energy ratio, } E_r = \frac{350}{473} = 74\%$$

$$\text{Effective overburden pressure} = 3 \times 19.3 - 1.5 \times 9.81 = 43 \text{ kPa}$$

$$\text{From Table 6.5, correction factor, } C_N = \frac{200}{100 + \sigma'_v} = \frac{200}{100 + 43} = 1.40$$

$$(N_1)_{60} = \frac{E_r \times N \times C_N}{60} = \frac{74 \times 15 \times 1.4}{60} = 26$$

Correlations between blow count and density index

Terzaghi and Peck (1948) evolved a qualitative relationship between the density index of normally consolidated sand and the N-value and, later, Gibbs and Holtz (1957) put figures to this relationship. More recent work has adjusted the figures to the normalised blow count $(N_1)_{60}$ and these are published in EN 1997-2:2007, Annex F and reproduced in Table 6.7.

Table 6.7 Correlation between Normalised blow count $(N_1)_{60}$ and density index I_D .

State of density	$(N_1)_{60}$	Density Index, I_D
very loose	0–3	0–15%
loose	3–8	15–35
medium	8–25	35–65
dense	25–42	65–85
very dense	42–58	85–100

6.6.3 Dynamic probing test

In this test, a cone of steel of apex angle 90° and 35 mm diameter is advanced into the ground from a free falling hammer striking extension rods at a driving rate of 15–30 blows per minute. The height of free-fall is 500 mm and the hammer can have mass 10 kg, 30 kg or 50 kg depending on whether a *light*, *medium* or *heavy* test is being undertaken. The number of blows required to advance the cone for multiples of 100 mm is recorded. The test is predominantly used for the rapid establishment of the soil profile through a recorded plot of number of blows versus depth. More details on the test procedure are given in EN ISO 22476-2:2005 and in EN 1997-2:2007, Annex G.

6.6.4 Pressuremeter test

This test utilises a cylindrical probe containing an inflatable, flexible membrane operating within a borehole. The probe is lowered into the borehole to the required depth and the membrane is expanded under pressure so that it fills the void between the probe and the borehole sides (Fig. 6.13). Measurements of pressure and membrane volumetric expansion are recorded until the maximum expansion is reached. The test results can then be used to derive the strength and deformation parameters of the ground.

The equipment described above is known as the Ménard pressuremeter, named after Louis Ménard who developed the test in the 1950s. Other types of pressuremeter exist, including *self-boring* and *full-displacement* pressuremeters. The various pressuremeter test procedures are described in different parts of EN ISO 22476-4, all of which are currently only (2013) in Draft form.

The results from the Ménard pressuremeter test are used to establish the pressuremeter modulus, (E_M) , and limit pressure, (p_{LM}) which can be used to determine the bearing resistance and the settlements of spread foundations. Examples of methods for doing this are given in EN 1997-2:2007, Annex E.

6.6.5 Plate loading test (PLT)

Plate loading tests can be carried out at ground level or at the base of an excavation. Their purpose is to retrieve data which can be used to calculate the settlement of spread foundations in a sand. They can also be used to determine the undrained shear strength properties of a cohesive soil. The data obtained from a PLT is a record of the load-settlement behaviour of the plate as it is loaded in successive increments and allowed to settle before the next load is applied.

Generally two tests are carried out as a check on each other, different-sized plates of the same shape being used in granular soils so that the settlement of the proposed foundation can be evolved from the relationship between the two plates. As stated, the loading is applied in increments (usually one-fifth of the proposed bearing pressure) and is increased up to two or three times the proposed loading. Additional increments should only be added when there has been no detectable settlement in the preceding 24 hours. Measurements are usually taken to 0.01 mm, and where there is no definite failure point the ultimate bearing capacity (see Chapter 9) is assumed to be the pressure causing a settlement equal to 20% of the plate width. The test procedure is described in EN ISO 22476-13 (*currently (2013) in Draft form*) and in

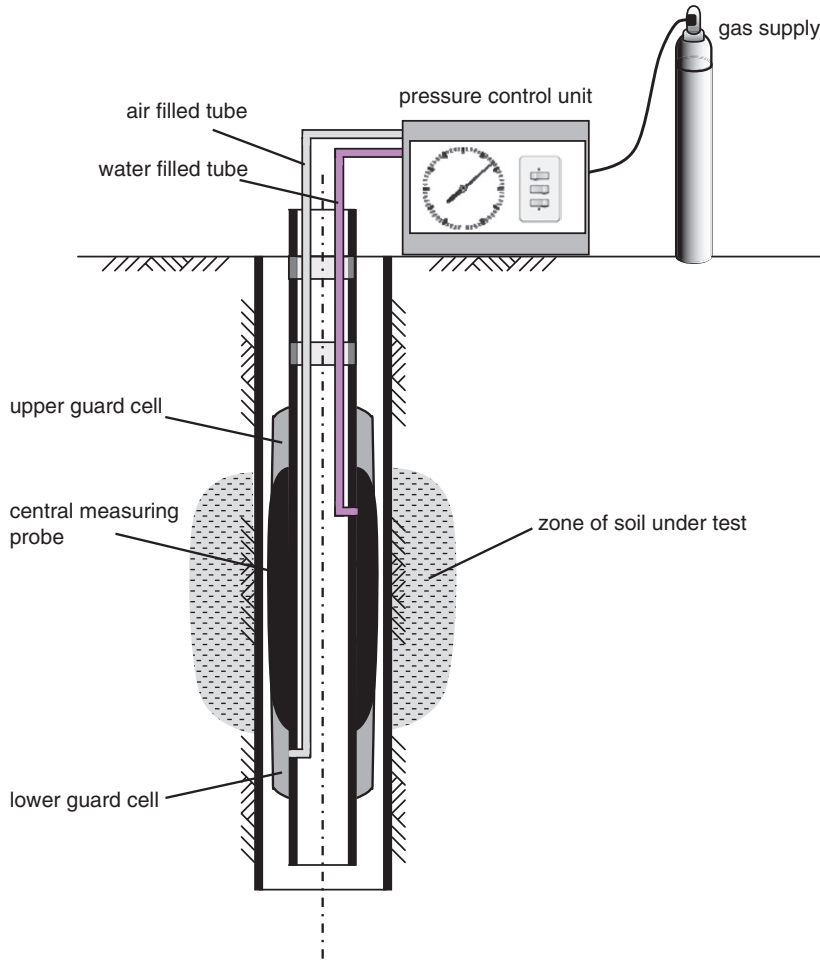


Fig. 6.13 Pressuremeter test.

BS1377-9:1990, and examples on the determination of undrained shear strength and the settlement of spread foundations in a sand are given in EN 1997-2:2007, Annex K.

6.6.6 Field vane test

In soft sensitive clays it is difficult to obtain samples that have only a slight degree of disturbance, and *in situ* shear tests are usually carried out by means of the vane test (Fig. 6.14). The apparatus consists of a 75 mm diameter vane, with four small blades 150 mm long. For stiff soils a smaller vane, 50 mm diameter and 100 mm high, may be used. The vanes are pushed into the clay a distance of not less than three times the diameter of the borehole ahead of the boring to eliminate disturbance effects, and the undrained strength of the clay is obtained from the relationship with the torque necessary to turn the vane. The rate of turning the rods, throughout the test, is kept within the range 6–12° per minute. After the soil has sheared, its remoulded strength can be determined by noting the minimum torque when the vane is rotated rapidly.

Figure 6.14 indicates that the torque head is mounted at the top of the rods. This is standard practice for most site investigation work but, for deep bores, it is possible to use apparatus in which the torque motor is mounted down near to the vane, in order to remove the whip in the rods.

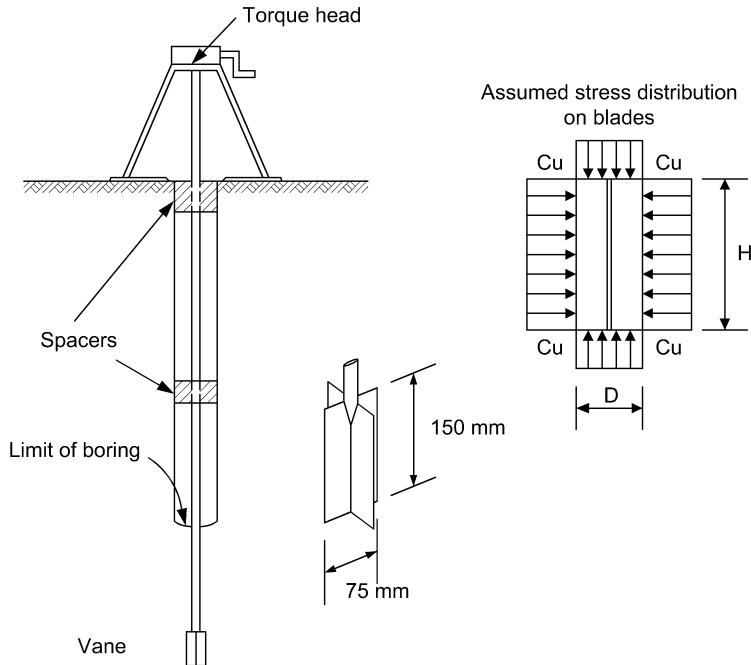


Fig. 6.14 Field vane test.

Because of this development the vane has largely superseded the standard penetration test, for deep testing. The latter test has the disadvantage that the load must always be applied at the top of the rods so that some of the energy from a blow must be dissipated in them. This energy loss becomes more significant the deeper the bore, so that the test results become more suspect.

The actual stress distribution generated by a cylinder of soil being rotated by the blades of a vane which has been either jacked or hammered into it, is a matter for conjecture. BS 1377-9:1990 has adopted the simplifying assumption that the soil's resistance to shear is equivalent to a uniform shear stress, equal to the undrained strength of the soil, c_u , acting on both the perimeter and the ends of the cylinder (see Fig. 6.14).

For equilibrium, the applied torque, T is equal to the moment of resistance of the vane blades. The torque due to the ends can be obtained by considering an elemental annulus and integrating over the whole area:

$$\text{End torque} = 2 \times c_u \int_0^r 2\pi r dr \times r = 2c_u \left[2\pi \frac{r^3}{3} \right]_0^{D/2} = c_u \frac{\pi D^3}{6}$$

$$\text{Side torque} = c_u \pi D H \times \frac{D}{2} = c_u \frac{\pi D^2 H}{2}$$

$$T = c_u \frac{\pi D^2 H}{2} \left(1 + \frac{D}{3H} \right)$$

where

D = measured width of vane
 H = measured height of vane.

Example 6.3: Field vane test

A vane, used to test a deposit of soft alluvial clay, required a torque of 67.5 Nm.

The dimensions of the vane were: $D = 75 \text{ mm}$; $H = 150 \text{ mm}$.

Determine a value for the undrained shear strength of the clay.

Solution:

$$T = c_u \frac{\pi D^2 H}{2} \left(1 + \frac{D}{3H} \right)$$

i.e.

$$67.5 = c_u \pi \times \frac{0.075^2 \times 0.15}{2} \left(1 + \frac{0.075}{0.45} \right) \times 1000 \text{ kPa}$$

$$\Rightarrow c_u = 44 \text{ kPa}$$

As mentioned above, the test procedure is described in BS 1377-9:1990 and is also to be presented in EN ISO 22476-9 (currently (2013) in Draft form).

6.6.7 Testing of geotechnical structures

In addition to the tests described before, testing is often performed on geotechnical structures to assess their performance against design requirements. The testing of geotechnical structures, such as reinforced soil, pile foundations and ground anchorage systems, involves sophisticated and specialised processes performed by specialist contractors. Specifications for the testing processes are covered in EN ISO 22477 (currently (2013) in Draft form).

6.7 Geotechnical reports

All of the information retrieved during a site investigation must be compiled in written reports and submitted to the client. The reports are the end product of all the investigation work and provide the client and their representative consultants with the information relevant to enable an efficient foundation design and construction plan to be evolved.

Eurocode 7 stipulates the requirements of two reports:

- *Geotechnical Design Report (GDR)*, described in Eurocode 7 Part 1
- *Ground Investigation Report (GIR)*, described in Eurocode 7 Part 2

The ground investigation report is the final product of the exploration programme encompassing all of the subject areas described throughout this chapter. It comprises an account of the desk study, the series of laboratory testing reports, the field investigation, sampling and measurement reports, the field testing reports and any other relevant reports, together with an interpretation of the ground conditions across the site. The report will also include any limitations and constraints of the various test results so that the designer can assess the relevance of the test results to the geotechnical design. The report can also include any derived values of geotechnical properties (see Section 5.4.1).

The geotechnical design report contains the GIR along with the results from the calculations performed to verify the safety and serviceability during the geotechnical design (see Chapter 5). Along with the

calculations, relevant drawings and foundation design recommendations are included, as is a plan of supervision and monitoring for the site.

The GIR is generally prepared in sections, and typically will include the following:

Preamble

This introductory section consists of a brief summary which gives the location of the site, the date of the investigation and name of the client, the types of bores put down and the equipment used.

Description of site

Here a general description of the site is given: whether it is an open field or a redevelopment of a site where old foundations, cellars and walls, etc., remain. Some mention is made of the general geology of the area, whether there are old mineral workings at depth and, if so, whether the report has considered their possible effects or not. A map, showing the site location and the positions of any investigation points, is usually included in the report.

Description of subsoil conditions encountered

This section should consist of a short, and readable, description of the general subsoil conditions over the site with reference to the borehole logs. The relevance and significance of any *in situ* testing carried out is also included.

Vertical sections (soil profiles) are generally prepared, showing to scale the sequence and thickness of the strata. Design engineers are mainly interested in the materials below the subsoil, and with stratified sedimentary deposits conditions may be more or less homogeneous. Glacial clay deposits can also be homogeneous although unstratified, but they often have an erratic structure in which pockets of different soils are scattered through the main deposit and make it difficult to obtain an average value for the deposit's characteristics. Furthermore, the clay itself may vary considerably, and at certain levels it can even decrease in strength with increasing depth.

Besides the primary structure of stratification, many clays contain a secondary structure of hair cracks, joints and slickensides. The cracks (often referred to as macroscopic fissures) and joints generally occurred with shrinkage when at some stage in its development the deposit was exposed to the atmosphere and dried out. Slickensides are smooth, highly polished surfaces probably caused by movement along the joints. If the effect of these fissures is ignored in the testing programme the strength characteristics obtained may bear little relationship to the properties of the clay mass.

With the application of a foundation load there is little chance of the fissures opening up, but in cuttings (due to the expansion caused by stress relief) some fissures may open and allow the ingress of rain water which will eventually soften the upper region of the deposit and lead to local slips. Fissures are more prevalent in overconsolidated clays, where stress relief occurs, than in normally consolidated clays, but any evidence of fissuring should be reported in the boring record.

Borehole logs

A borehole log is a list of all the materials encountered during the boring. A log is best shown in sectional form so that the depths at which the various materials were met can be easily seen. A typical borehole log is shown in Fig. 6.15. It should include a note of all the information that was found: groundwater conditions, numbers and types of samples taken, list of *in situ* tests, time taken by boring, etc.

Laboratory soil tests results

This is a list of the tests carried out together with a set of laboratory sheets showing all tests results, e.g. particle size distribution curves, liquid limit plots, Mohr circle plots, etc.

RECORD OF BOREHOLE 109

PROGRESS			SAMPLE/TEST		STRATA			
HOLE	CASING	WATER	DEPTH	TYPE	LEGEND	DEPTH	LEVEL	DESCRIPTION
28/8/98			0.30	D1		0.30	3.10	Brown sandy TOPSOIL
		Met at 2.00	1.88 - 2.13	S(29) D2				medium dense to dense red brown silty SAND and FINE GRAVEL
			0.30 - 2.18	B1				
			2.20	W				
			2.50	D3		2.6	0.80	
			3.15 - 3.45	C(6)				Medium dense brown silty SAND with clayey layers, containing occasional gravel
			3.45 - 3.75	(17) D4				
			2.70 - 3.90	B2				
			4.10 - 4.55	U-/120				
4.56	4.56	4.00	4.10	D5		4.56	-1.16	
29/8/98		1.50	5.50 - 5.95	U1/80				Stiff light brown laminated silty CLAY, with layers of sand
			6.00	D6				
			6.90	D7		7.10	-3.70	
			7.45 - 7.75	S(29) D8				Medium dense becoming dense brown SAND
			8.45 - 8.75	S(22) D9				
			9.45 - 9.75	S(26) D10				
			10.45 - 10.75	S(46) D11				
10.73	10.73	8.00		D12		11.20	-7.80	
30/8/98		1.50	11.20	U2/120				Compact brown silty SAND with layers of silty clay
			11.30 - 11.75	D13		11.80	-8.40	
			11.80					Compact brown SAND and GRAVEL
			12.90 - 13.35	U3/150		12.80	-9.40	
13.40	12.90	9.90		D14				Dense grey-brown clayey SAND with occasional gravel
31/8/98		8.00	13.35					
			13.70	D15		13.70	-10.30	
4/9/98		1.50	13.70 - 15.10	1.40*				Hard mottled red-brown, grey and green coarse grained BASALTIC TUFF
		WATER FLUSH	15.10 - 16.34	1.24				
			16.34			16.13	-12.73	
5/9/98		1.04	16.34 - 17.40	1.06				Soft and medium hard weathered mottled red-brown, grey-green BASALTIC TUFF
						17.19	-13.79	
			17.40			17.40	-14.00	Hard mottled grey-green BASALTIC TUFF

Remarks: Penetration test continued beyond normal drive from 3.45m. 40mm diameter perforated standpipe 18.00m long inserted, surrounded by gravel filter with bentonite seal and screw cap at surface.

Key:

D Disturbed sample	S(30) Standard penetration test	U1/70 Undisturbed sample 100mm dia
B Bulk sample	C(27) Cone penetration test	/70 Blows to drive sample 450mm
W Water sample	(27) No blows for 300mm pentn.	U-/70 U/d sample - no recovery
• Core recovery	V <i>In situ</i> vane shear test	LCP Light cable percussion
		DD Rotary diamond drilled

Fig. 6.15 Borehole log.

Evaluation of geotechnical information

It is in this section that firm recommendations as to possible foundation types and modes of construction should be given. Unless specified otherwise, it is the responsibility of the architect or consultant to decide on the actual structure and the construction. For this reason the GIR should endeavour to list possible alternatives: whether strip foundations are possible, if piling is a sensible proposition, etc. In the accompanying GDR, design calculations of each type of foundation are presented. If correlations were used to derive geotechnical parameters or coefficients, the correlations and their applicability are also recorded.

If the investigation has been limited by specification or finance and the ground interpretation has been based on limited information, it is important that this is recorded.

Chapter 7

Lateral Earth Pressure

7.1 Earth pressure at rest

Consider an element of soil at some depth, z below ground surface. We saw in Chapter 3 that the vertical total stress, σ_1 acting at that point is caused by the total weight acting above. In the case of a homogenous soil with no surface surcharge, σ_1 is due to the weight of the material above ($=\gamma z$) as shown in Fig. 7.1.

A lateral stress, σ_3 acts at the point and is equal to the vertical stress multiplied by the *coefficient of earth pressure*, K . In this case the coefficient is the *coefficient of earth pressure at rest*, denoted by K_0 .

It has been shown experimentally that, for granular soils and normally consolidated clays, $K_0 \approx 1 - \sin \phi'$ (Jaky, 1944).

Eurocode 7 actually relates K_0 to the overconsolidation ratio and states that $K_0 = (1 - \sin \phi') \times \sqrt{\text{OCR}}$ for soils with not very high values of overconsolidation ratio and a horizontal ground surface.

7.2 Active and passive earth pressure

Let us consider the simple case of a retaining wall with a vertical back (details of wall design and construction are given in Chapter 8) supporting a cohesionless soil with a horizontal surface (Fig. 7.2). Let the angle of shearing resistance of the soil be ϕ' and let its unit weight, γ , be of a constant value. Then the vertical stress, σ_1 acting at a point at depth below the ground surface will be equal to $\gamma \times$ the depth:

Behind the wall, at depth h , the vertical stress, $\sigma_1 = \gamma h$.

In front of the wall, at depth d , the vertical stress, $\sigma_1 = \gamma d$.

If the wall is allowed to yield (i.e. move forward slightly), it is clear that the soil behind the wall will experience a reduction in lateral stress (it will expand slightly), whilst the soil in front will compress slightly and thus experience an increase in lateral stress. This shows that, in addition to the *at rest* state, soil can exist in two states. In expansion, the soil is in an *active* state, and in compression, the soil is in a *passive* state.

We can say therefore (in this example), that the soil behind the wall is in an active state and thus, the pressure that the soil is exerting on the wall is *active pressure*. By contrast, the soil in front of the wall is in a passive state and so the pressure that the soil is exerting on the wall is *passive pressure*.

As with the *at-rest* condition described in Section 7.1, the lateral earth pressure acting at some depth is equal to the vertical stress (pressure) multiplied by the appropriate coefficient of earth pressure. We can now introduce the *coefficient of active earth pressure*, K_a and the *coefficient of passive earth pressure*, K_p .

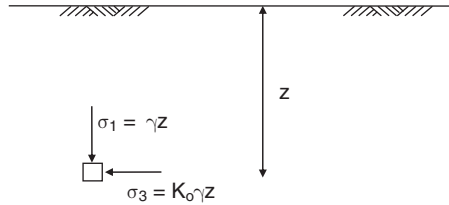


Fig. 7.1 Vertical and lateral stresses.

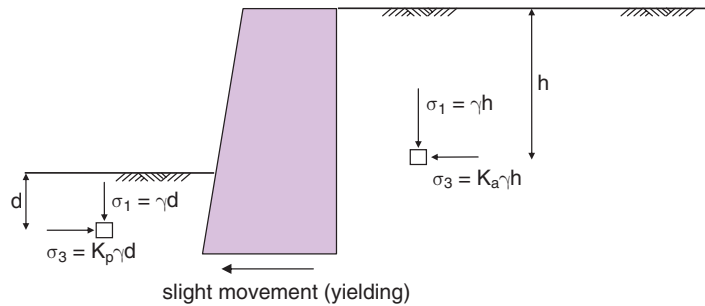


Fig. 7.2 Active and passive states.

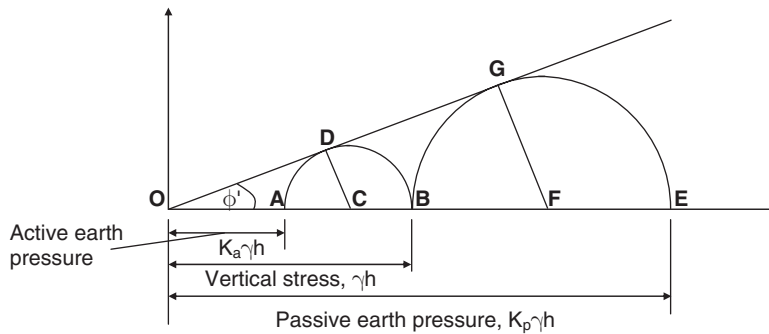


Fig. 7.3 Active and passive earth pressures.

Behind the wall (active), $\sigma_3 = K_a \gamma h$

In front of the wall (passive), $\sigma_3 = K_p \gamma d$

The active earth pressure is the minimum value of lateral pressure (σ_3) the soil can withstand. The passive earth pressure is the maximum value.

Consider now a single element of soil at depth, h below the ground surface. The vertical stress (σ_1) at this depth is equal to γh . Referring to the previous paragraph, the two extreme values of σ_3 can be obtained from the Mohr circle diagram for the soil, as shown in Fig. 7.3.

From Fig. 7.3 it is seen that the lateral pressure can reduce to a minimum value at which the stress circle is tangential to the strength envelope of the soil. This minimum value is the active earth pressure and equals $K_a \gamma h$. The lateral pressure can rise to a maximum value (with the stress circle again tangential to the strength envelope) known as the passive earth pressure, which equals $K_p \gamma h$. From the figure, it is clear that when considering active pressure, the vertical pressure due to the soil weight, γh , is a major principal

stress and that when considering passive pressure, the vertical pressure due to the soil weight, γh , is a minor principal stress.

The two major theories to estimate active and passive pressure values are those by Rankine (1857) and by Coulomb (1776). Both theories are very much in use today and both are described below.

7.3 Rankine's theory: granular soils, active earth pressure

7.3.1 Horizontal soil surface

Imagine a smooth (i.e. no friction exists between wall and soil), vertical retaining wall holding back a cohesionless soil with an angle of shearing resistance ϕ' . The top of the soil is horizontal and level with the top of the wall. Consider a point in the soil at a depth h below the top of the wall (Fig. 7.2), assuming that the wall has yielded sufficiently to satisfy active earth pressure conditions.

From the Mohr circle diagram (Fig. 7.3) it is seen that:

$$K_a = \frac{K_a \gamma h}{\gamma h} = \frac{OA}{OB} = \frac{OC - AC}{OC + CB} = \frac{OC - DC}{OC + DC} = \frac{1 - \frac{DC}{OC}}{1 + \frac{DC}{OC}} = \frac{1 - \sin \phi'}{1 + \sin \phi'}$$

It can be shown by trigonometry that

$$\frac{1 - \sin \phi'}{1 + \sin \phi'} = \tan^2 \left(45^\circ - \frac{\phi'}{2} \right)$$

hence

$$K_a = \frac{1 - \sin \phi'}{1 + \sin \phi'} = \tan^2 \left(45^\circ - \frac{\phi'}{2} \right)$$

The Mohr circle diagram can be extended to identify the direction of the major principal stress, using the geometry indicated in Figure 7.4a. The angle that the failure plane makes with the back of the wall is clear from the figure and the network of shear planes formed behind the wall is illustrated in Fig. 7.4b.

The lateral pressure acting on the wall at any depth, σ'_s , is equal to $K_a \sigma'_1$. As the vertical effective stress $\sigma'_1 = \gamma h$ and K_a is a constant, the lateral pressure increases linearly with depth (Fig. 7.4c). This lateral pressure is of course the active pressure. This pressure is given the symbol p_a , and is defined:

$$p_a = K_a \gamma h$$

The magnitude of the resultant thrust, P_a , acting on the back of the wall is the area of the pressure distribution diagram. This force is a line load which acts through the centroid of the pressure distribution. In the case of a triangular distribution, the thrust acts at a third of the height of the triangle.

7.3.2 Sloping soil surface

The problem of the ground surface behind the wall sloping at an angle β to the horizontal is illustrated in Fig. 7.5. The evaluation of K_a may be carried out in a similar manner to the previous case, but the vertical pressure will no longer be a principal stress. The pressure on the wall is assumed to act parallel to the surface of the soil, i.e. at angle β to the horizontal.

The active pressure, p_a , is still given by the expression:

$$p_a = K_a \gamma h$$

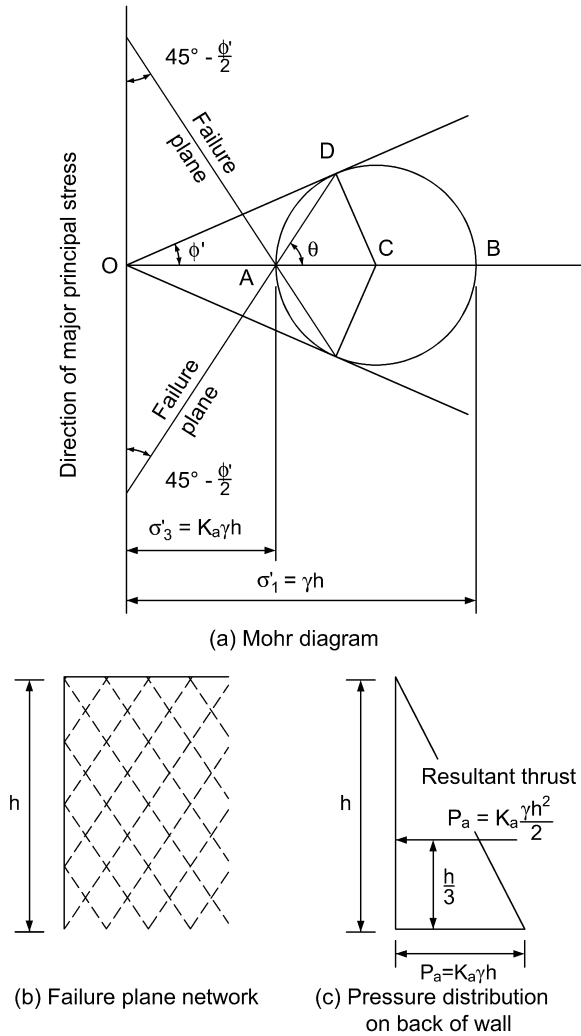


Fig. 7.4 Active pressure for a cohesionless soil with a horizontal upper surface.

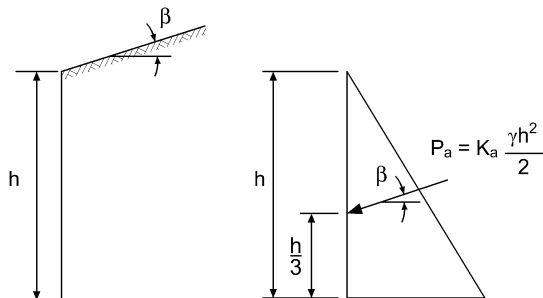


Fig. 7.5 Active pressure for a cohesionless soil with its surface sloping upwards at angle β to the horizontal.

where

$$K_a = \cos \beta \frac{\cos \beta - \sqrt{\cos^2 \beta - \cos^2 \phi'}}{\cos \beta + \sqrt{\cos^2 \beta - \cos^2 \phi'}}$$

Example 7.1: Rankine active thrust

Using the Rankine theory, determine the total active thrust on a vertical retaining wall 5 m high if the soil retained has a horizontal surface level with the top of the wall and has the following properties: $\phi' = 35^\circ$; $\gamma = 19 \text{ kN/m}^3$.

What is the increase in horizontal thrust if the soil slopes up from the top of the wall at an angle of 35° to the horizontal?

Solution:

1. *Solution A: Soil surface horizontal*

$$K_a = \frac{1 - \sin 35^\circ}{1 + \sin 35^\circ} = 0.271$$

$$\text{Maximum } p_a = 19 \times 5 \times 0.271 = 25.75 \text{ kPa}$$

$$\begin{aligned} \text{Thrust} &= \text{area of pressure diagram} \\ &= \frac{25.75 \times 5}{2} = 64 \text{ kN} \end{aligned}$$

2. *Solution B: Soil sloping at 35°*

In this case, $\beta = \phi'$. When this happens the formula for K_a reduces to $K_a = \cos \phi'$. Hence

$$K_a = \cos 35^\circ = 0.819$$

$$\text{Thrust} = \gamma K_a \frac{h^2}{2} = 0.819 \times 19 \times \frac{5^2}{2} = 194.5 \text{ kN}$$

This thrust is assumed to be parallel to the slope, i.e. at 35° to the horizontal.

$$\text{Horizontal component} = 194.5 \times \cos 35^\circ = 159 \text{ kN}$$

$$\text{Increase in horizontal thrust} = 95 \text{ kN/m length of wall}$$

7.3.3 Point of application of the total active thrust

We have seen that the total active thrust, P_{ar} is given by the expression:

$$P_a = \frac{1}{2} \gamma h^2 K_a$$

where K_a is the respective value of the coefficient of active earth pressure, h = height of wall and γ = unit weight of retained soil.

The position of the centre of pressure on the back of the wall, i.e. the point of application of P_{ar} , is largely indeterminate. Locations suitable for design purposes are shown in Fig. 7.6 and are based on the Rankine theory (with its assumption of a triangular distribution of pressure).

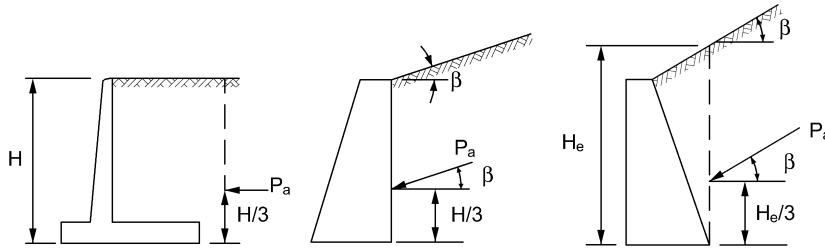


Fig. 7.6 Point of application of total active thrust (Rankine theory).

Example 7.2: Rankine active thrust; more than one soil

Details of the soil retained behind a smooth wall are given in Fig. 7.7. Draw the diagram of the pressure distribution on the back of the wall and determine the total horizontal active thrust acting on the back of the wall by the Rankine theory.

Solution:

Active pressure at the top of the wall, $P_{a0} = 0$.

For P_{a3} :

Consider the upper soil layer:

$$K_a = \frac{1 - \sin 30^\circ}{1 + \sin 30^\circ} = 0.33$$

$$p_{a3} = 0.33 \times 16 \times 3 = 16 \text{ kPa}$$

Consider the lower soil layer:

$$K_a = \frac{1 - \sin 20^\circ}{1 + \sin 20^\circ} = 0.49$$

$$p_{a3} = 0.49 \times 16 \times 3 = 23.5 \text{ kPa}$$

The active pressure jumps from 16 to 23.5 kPa at a depth of 3 m.

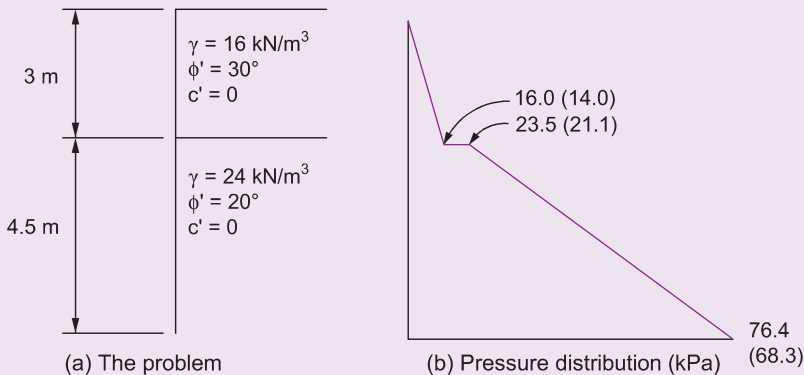


Fig. 7.7 Example 7.2.

For $P_{a7.5}$:

$$P_{a7.5} = 0.49 \times 24 \times 4.5 + 23.5 = 76.4 \text{ kPa}$$

The active pressure diagram is shown in Fig. 7.7 b and the value of the total active thrust is simply the area of this diagram:

$$16 \times \frac{3}{2} + 23.5 \times 4.5 + 52.9 \times \frac{4.5}{2} = 248.8 \text{ kN}$$

Example 7.3: Rankine active pressure; presence of groundwater

A vertical retaining wall 6 m high is supporting soil which is saturated and has a unit weight of 22.5 kN/m^3 . The angle of shearing resistance of the soil, ϕ' , is 35° and the surface of the soil is horizontal and level with the top of the wall. A groundwater level has been established within the soil and occurs at a level of 2 m from the top of the wall.

Using the Rankine theory calculate the significant pressure values and draw the diagram of pressure distribution that will occur on the back of the wall.

Solution:

Figure 7.8a illustrates the problem and Figs 7.8b and 7.8c show the pressure distribution due to the soil and the water.

$$K_a = \frac{1 - \sin 35^\circ}{1 + \sin 35^\circ} = 0.27$$

Although there is the same soil throughout, there is a change in unit weight at a depth of 2 m as the unit weight of the soil below the GWL is equal to the submerged unit weight. The problem can therefore be regarded as two layers of different soil, the upper having a unit weight of 22.5 kN/m^3 and the lower $(22.5 - 9.81) = 12.7 \text{ kN/m}^3$.

Consider the upper soil:

$$\text{At depth} = 2 \text{ m: } p_{a2} = K_a \gamma h = 0.27 \times 22.5 \times 2 = 12.2 \text{ kPa}$$

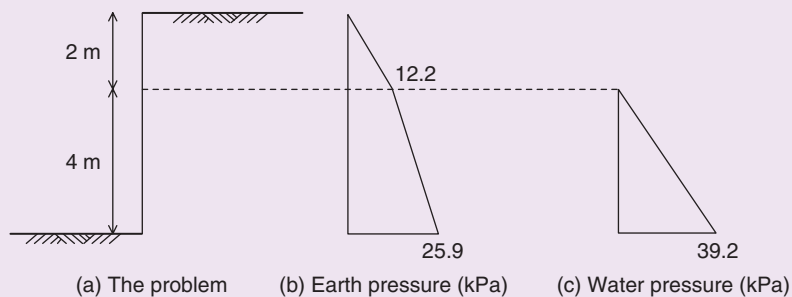


Fig. 7.8 Example 7.3.

Consider the lower soil:

$$\text{At depth} = 6 \text{ m: } p_{a6} = 12.2 + (0.27 \times 12.7 \times 4) = 25.9 \text{ kPa}$$

(Note that at the interface of two cohesionless soil layers, the pressure values are the same if the ϕ' values are equal.)

Water pressure

At depth = 2 m, the water pressure = 0

At depth = 6 m, the water pressure = $9.81 \times 4 = 39.2 \text{ kPa}$

The two pressure diagrams are shown in Fig. 7.8b and 7.8c; the resultant pressure diagram is the sum of these two drawings:

$$= \left(\frac{1}{2} \times 12.2 \times 2\right) + (12.2 \times 4) + \left(\frac{1}{2} \times 13.7 \times 4\right) + \left(\frac{1}{2} \times 39.2 \times 4\right) = 167 \text{ kPa}$$

Had no groundwater table been present and the soil remained saturated throughout, the active thrust would have been:

$$= \left(\frac{1}{2} \times 0.27 \times 22.5 \times 6^2\right) = 109.4 \text{ kPa} \quad (\text{i.e. a lower value})$$

Example 7.3 illustrates the significant increase in lateral pressure that the presence of a water table causes on a retaining wall. Except in the case of quay walls, a situation in which there is a water table immediately behind a retaining wall should not be allowed to arise. Where such a possibility is likely an adequate drainage system should be provided (see Section 7.10.1).

For both Example 7.2 and Example 7.3, the area of the resulting active pressure diagram will give the magnitude of the total active thrust, P_a . If required, its point of application can be obtained by taking moments of forces about some convenient point on the space diagram. If this approach is not practical then the assumptions of Fig. 7.6 should generally be sufficiently accurate.

7.4 Rankine's theory: granular soils, passive earth pressure

7.4.1 Horizontal soil surface

In this case the vertical pressure due to the weight of the soil, γh , is acting as a minor principal stress. Figure 7.9a shows the Mohr circle diagram representing these stress conditions and drawn in the usual position, i.e. with the axis OX (the direction of the major principal plane) horizontal. Figure 7.9b shows the same diagram correctly orientated with the major principal stress, $K_p \gamma h$, horizontal and the major principal plane vertical. The Mohr diagram, it will be seen, must be rotated through 90° .

In the Mohr diagram:

$$\frac{\sigma_1}{\sigma_3} = \frac{OB}{OA} = \frac{OC + DC}{OC - DB} = \frac{1 + \sin \phi'}{1 - \sin \phi'} = \tan^2 \left(45^\circ + \frac{\phi'}{2} \right)$$

hence

$$K_p = \frac{1 + \sin \phi'}{1 - \sin \phi'} = \tan^2 \left(45^\circ + \frac{\phi'}{2} \right)$$

As with active pressure, there is a network of shear planes inclined at $(45^\circ - \phi'/2)$ to the direction of the major principal stress, but this time the soil is being compressed as opposed to expanded.

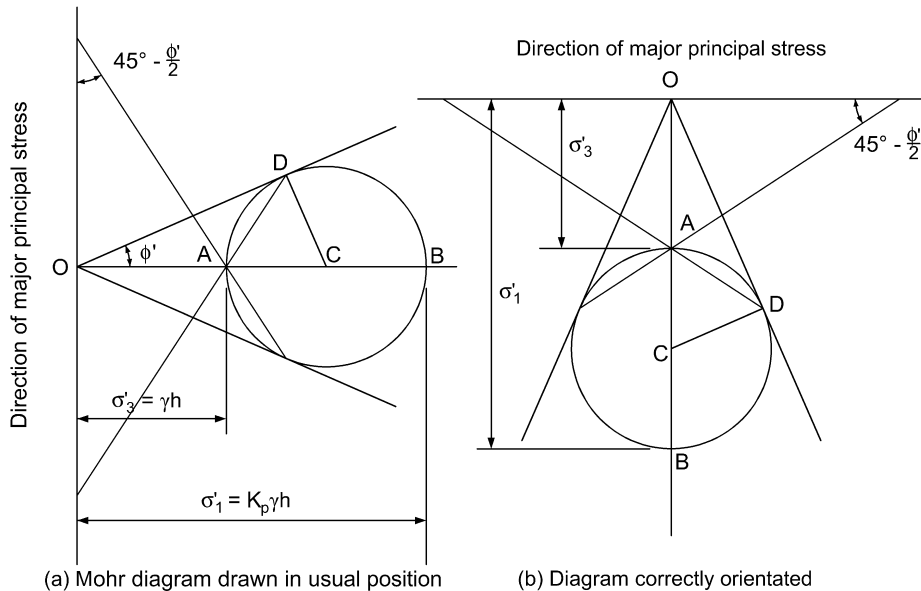


Fig. 7.9 Passive earth pressure for a cohesionless soil with a horizontal upper surface.

7.4.2 Sloping soil surface

The directions of the principal stresses are not known, but we assume that the passive pressure acts parallel to the surface of the slope. The analysis gives:

$$K_p = \cos \beta \frac{\cos \beta + \sqrt{(\cos^2 \beta - \cos^2 \phi')}}{\cos \beta - \sqrt{(\cos^2 \beta - \cos^2 \phi')}}}$$

7.4.3 Rankine's assumption on wall friction

The amount of friction developed between a retaining wall and the soil can be of a high magnitude (particularly in the case of passive pressure). The Rankine theory's assumption of a smooth wall with no frictional effects can therefore lead to a significant underestimation (up to about a half) of the true K_p value. The theory can obviously lead to conservative design which, although safe, might at times be over-safe and lead to an uneconomic structure.

7.5 Rankine's theory: cohesive soils

7.5.1 Effect of cohesion on active pressure

Consider two soils of the same unit weight, one acting as a purely frictional soil with an angle of shearing resistance, ϕ' , and the other acting as a cohesive-frictional soil with the same angle of shearing resistance, ϕ' , and an effective cohesion, c' . The Mohr circle diagrams for the two soils are shown in Fig. 7.10.

At depth, h , both soils are subjected to the same major principal stress $\sigma'_1 = \gamma h$. The minor principal stress for the cohesionless soil is σ'_3 but for the cohesive soil it is only σ'_{3c} , the difference being due to the cohesive strength, c' , that is represented by the lengths AB or EF .

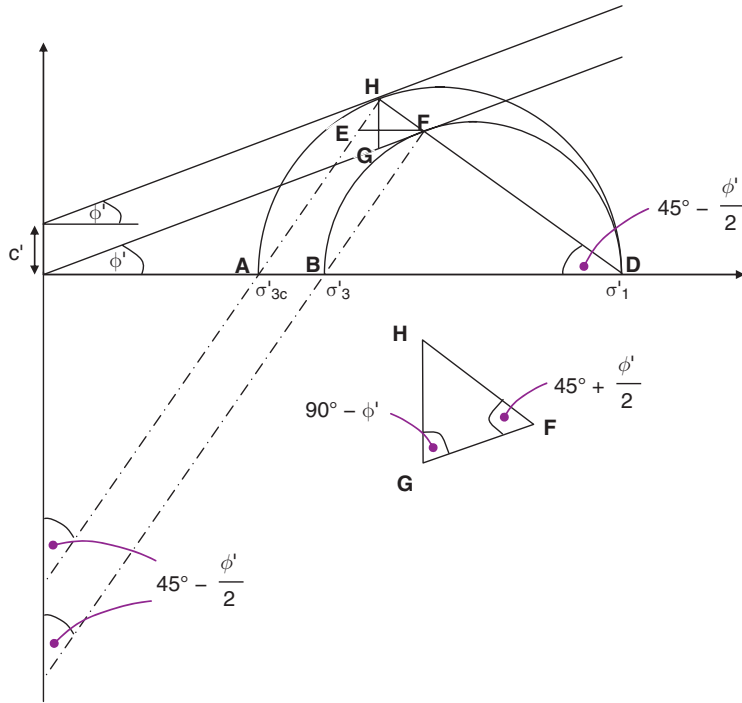


Fig. 7.10 The effect of cohesion on active pressure.

Consider triangle HGF:

$$\frac{HF}{GH} = \frac{HF}{c'} = \frac{\sin(90^\circ - \phi')}{\sin\left(45^\circ + \frac{\phi'}{2}\right)} = 2 \frac{\sin\left(45^\circ - \frac{\phi'}{2}\right) \cos\left(45^\circ - \frac{\phi'}{2}\right)}{\cos\left(45^\circ - \frac{\phi'}{2}\right)}$$

or

$$HF = 2c' \sin\left(45^\circ - \frac{\phi'}{2}\right)$$

Difference between σ'_3 and σ'_{3c}

$$\begin{aligned} = EF &= \frac{HF}{\cos\left(45^\circ - \frac{\phi'}{2}\right)} \\ &= 2c' \frac{\sin\left(45^\circ - \frac{\phi'}{2}\right)}{\cos\left(45^\circ - \frac{\phi'}{2}\right)} = 2c' \tan\left(45^\circ - \frac{\phi'}{2}\right) \end{aligned}$$

Hence the active pressure, p_a , at depth h in a soil exhibiting both frictional and cohesive strength and having a horizontal upper surface is given by the expression:

$$p_a = K_a \gamma h - 2c' \tan\left(45^\circ - \frac{\phi'}{2}\right) = K_a \gamma h - 2c' \sqrt{K_a}$$

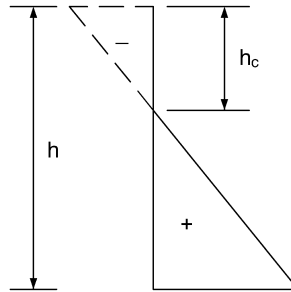


Fig. 7.11 Active pressure diagram for a soil with both cohesive and frictional strength.

This expression was formulated by Bell (1915) and is often referred to as Bell's solution.

The active pressure diagram for such a soil is shown in Fig. 7.11. The negative values of p_a extending down from the top of the wall to a depth of h_c indicate that this zone of soil is in a state of suction. However, soils cannot really withstand tensile stress, and cracks may form within the soil. It is therefore unwise to assume that any negative active pressures exist within the depth h_c .

Since cohesive soils have low permeability, the tension crack will likely fill with water. For design purposes therefore, it is assumed that a hydrostatic water pressure is experienced in the tension zone.

7.5.2 Depth of the tension zone

In Fig. 7.11 the depth of the tension zone is given the symbol h_c . It is possible for cracks to develop over this depth, and a value for h_c is often required.

If p_a in the expression

$$p_a = K_a \gamma h_c - 2c' \tan\left(45^\circ - \frac{\phi'}{2}\right)$$

is put equal to zero we can obtain an expression for h_c :

$$h_c = \frac{2c'}{\gamma K_a} \tan\left(45^\circ - \frac{\phi'}{2}\right) = \frac{2c'}{\gamma} \tan\left(45^\circ + \frac{\phi'}{2}\right)$$

h_c may also be expressed:

$$h_c = \frac{2c'}{\gamma \sqrt{K_a}}$$

When $\phi' = 0^\circ$ (i.e. in the undrained state):

$$h_c = \frac{2c_u}{\gamma}$$

Example 7.4: Lateral pressure distribution

A retaining wall supports a soil as shown in Fig. 7.12. Sketch the lateral pressure distribution acting on the back of the wall.

Solution:

$$K_a = \frac{1 - \sin \phi'}{1 + \sin \phi'} = \frac{1 - \sin 25^\circ}{1 + \sin 25^\circ} = 0.41$$

$$p_a = K_a \gamma h - 2c' \sqrt{K_a}$$

Pressure distribution:

$$P_{0m} = 0 - (2 \times 4) \times \sqrt{0.41} = -5.1 \text{ kPa}$$

$$P_{10m} = (0.41 \times 18 \times 10) - (2 \times 4) \times \sqrt{0.41} = 68.7 \text{ kPa}$$

Tension crack:

$$h_c = \frac{2c'}{\gamma} \tan \left(45^\circ + \frac{\phi'}{2} \right) = 0.70 \text{ m}$$

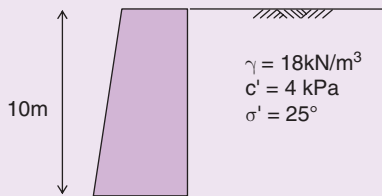
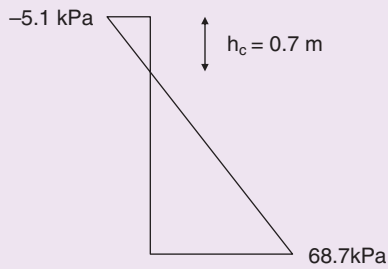


Fig. 7.12 Example 7.4.

Theoretical distribution:



Distribution used for design:

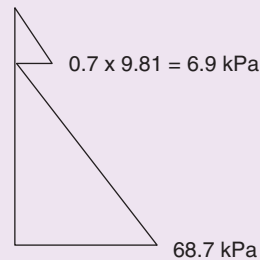


Fig. 7.13 Pressure distributions (not to scale).

7.5.3 The occurrence of tensile cracks

A tension zone, and therefore tensile cracking, can only occur when the soil exhibits cohesive strength. Gravels, sands and most silts generally operate in a drained state and, having no cohesion, do not experience tensile cracking.

Clays, when undrained, can have substantial values of c_u but, when fully drained, almost invariably have effective cohesive intercepts that are either zero or, have a small enough value to be considered negligible.

It is therefore apparent that tensile cracks can only occur in clays and are only important in undrained conditions. The value of h_c , as determined from the formula derived above, is seen to become smaller as

the value of the apparent cohesion reduces. This illustrates that, as a clay wets up and its cohesive intercept reduces from c_u to c' , any tensile cracks within it tend to close.

If there is a uniform surcharge acting on the surface of the retained soil such that its *equivalent height* is h_e (see Section 7.8.1) then the depth of the tension zone becomes equal to z_0 where $z_0 = h_c - h_e$. If, of course, the surcharge value is such that h_e is greater than h_c then no tension zone will exist.

7.5.4 Effect of cohesion on passive pressure

Rankine's theory was developed by Bell (1915) for the case of a frictional/cohesive soil. His solution for a soil with a horizontal surface is:

$$p_p = \gamma h \tan^2 \left(45^\circ + \frac{\phi'}{2} \right) + 2c' \tan \left(45^\circ + \frac{\phi'}{2} \right) = K_p \gamma h + 2c' \sqrt{K_p}$$

7.6 Coulomb's wedge theory: active earth pressure

Instead of considering the equilibrium of an element in a stressed mass, Coulomb's theory considers the soil as a whole.

7.6.1 Granular soils

If a wall supporting a cohesionless acting soil is suddenly removed the soil will slump down to its angle of shearing resistance, ϕ' , on the plane BC in Fig. 7.14a. It is therefore reasonable to assume that if the wall only moved forward slightly, a rupture plane BD would develop somewhere between AB and BC: the wedge of soil ABD would then move down the back of the wall AB and along the rupture plane BD. These wedges do in fact exist and have failure surfaces approximating to planes.

Coulomb analysed this problem analytically in 1776 on the assumption that the surface of the retained soil was a plane. He derived this expression for K_a :

$$K_a = \left[\frac{\operatorname{cosec} \psi \sin(\psi - \phi')}{\sqrt{\sin(\psi + \delta) + \frac{\sin(\phi' + \delta) \sin(\phi' - \beta)}{\sin(\psi - \beta)}}} \right]^2$$

where

ψ = angle of back of wall to the horizontal

δ = angle of wall friction

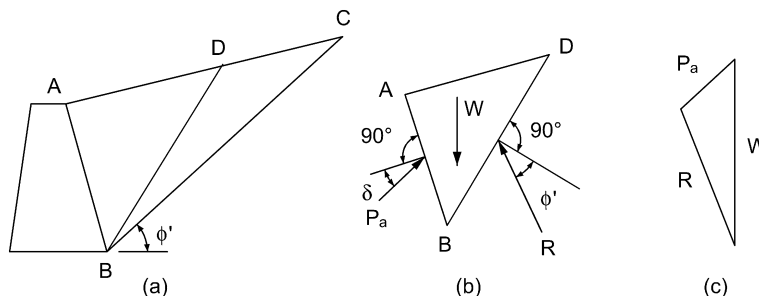


Fig. 7.14 Wedge theory for cohesionless soils.

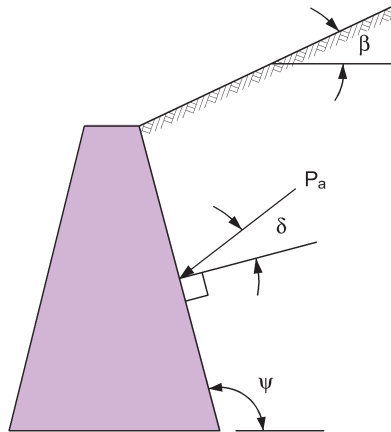


Fig. 7.15 Symbols used in Coulomb's formula.

β = angle of inclination of surface of retained soil to the horizontal
 ϕ' = angle of shearing resistance.

Total active thrust = $\frac{1}{2}K_a\gamma H^2$, where H = total height of the wall. This thrust is assumed to act at angle δ to the normal to the wall (see Fig. 7.15).

It is of interest to note that Coulomb's expression for K_a reduces to the Rankine formula when $\psi = 90^\circ$ and when $\delta = \beta$, i.e.

$$K_a = \cos \beta \times \frac{\cos \beta - \sqrt{(\cos^2 \beta - \cos^2 \phi')}}{\cos \beta + \sqrt{(\cos^2 \beta - \cos^2 \phi')}}$$

and further reduces to

$$K_a = \frac{1 - \sin \phi'}{1 + \sin \phi'}$$

when $\psi = 90^\circ$ and when $\delta = 0^\circ$.

Example 7.5: Coulomb active thrust

Solve Example 7.1 using the Coulomb formula. Assume that $\delta = \frac{1}{2}\phi'$.

Solution:

Coulomb's formula for K_a is:

$$K_a = \left\{ \frac{\operatorname{cosec} \psi \sin(\psi - \phi')}{\sqrt{\sin(\psi + \delta)} + \sqrt{\frac{\sin(\phi' + \delta)\sin(\phi' - \beta)}{\sin(\psi - \beta)}}} \right\}^2$$

1. *Solution A: Soil surface horizontal*

$$\delta = 17.5^\circ; \psi = 90^\circ; \beta = 0^\circ; \phi' = 35^\circ.$$

$$K_a = \left\{ \frac{\sin 55^\circ / \sin 90^\circ}{\sqrt{\sin 107.5^\circ + \sqrt{\sin 52.5^\circ \sin 35^\circ / \sin 90^\circ}}} \right\}^2$$

$$= \left\{ \frac{0.819}{0.976 + 0.675} \right\}^2 = 0.246$$

$$P_a = 0.5K_a\gamma H^2 = 0.5 \times 0.246 \times 19 \times 5^2 = 58.43 \text{ kN}$$

This value is inclined at 17.5° to the normal to the back of the wall so that the total horizontal active thrust, according to Coulomb, is $58.43 \times \cos 17.5^\circ = 55.7 \text{ kN}$.

Note: If δ had been assumed equal to 0° , the calculated value of total horizontal thrust would have been the same as that obtained by the Rankine theory of Example 7.1.

2. *Solution B: Soil surface sloping at 35°*

Substituting $\phi' = 35^\circ$, $\beta = 35^\circ$, $\delta = 17.5^\circ$ and $\psi = 90^\circ$ into the formula gives $K_a = 0.704$. Hence

$$\text{Total active thrust} = 0.5 \times 0.704 \times 19 \times 5^2 = 167.2 \text{ kN}$$

$$\text{Total horizontal thrust} = 167.2 \times \cos 17.5^\circ = 159.5 \text{ kN}$$

$$\text{Increase in horizontal thrust} = 159.5 - 55.7 = 104 \text{ kN}$$

Example 7.6: Coulomb active thrust; more than one soil

Determine the total horizontal active thrust acting on the back of the wall of Example 7.2 by the Coulomb theory. Take $\delta = \phi'/2$.

Solution:

Active pressure at the top of the wall, $P_{a0} = 0$.

Consider the upper soil layer:

$$\text{For } \phi' = 30^\circ, \delta = \phi'/2 = 15^\circ, \beta = 0^\circ \text{ and } \psi = 90^\circ, K_a = 0.301$$

Hence active pressure at a depth of 3 m = $0.301 \times 16 \times 3 = 14.5 \text{ kPa}$.

But this pressure acts at 15° to the horizontal (as $\delta = 15^\circ$).

$$\text{Horizontal pressure at depth} = 3 \text{ m} = p_{a3} = 14.5 \cos 15^\circ = 14.0 \text{ kPa}$$

Consider the lower soil layer:

$$\text{For } \phi' = 20^\circ, \delta = \phi'/2 = 10^\circ, \beta = 0^\circ \text{ and } \psi = 90^\circ, K_a = 0.447$$

$$p_{a3} = 0.447 \times 16 \times 3 \times \cos 10^\circ = 21.1 \text{ kPa}$$

$$p_{a7.5} = [(0.447 \times 24 \times 4.5) + 21.1] \times \cos 10^\circ = 68.3 \text{ kPa}$$

These values are shown in brackets on the pressure diagram in Fig. 7.7b.

7.6.2 The Culmann line construction

When the surface of the retained soil is irregular, Coulomb's analytical solution becomes difficult to apply and it is generally simpler to make use of a graphical method proposed by Culmann in 1866, known as

the Culmann line construction. Besides being able to cope with irregular soil surfaces the method can also deal with irregular combinations of uniform and line loads.

The procedure is to select a series of trial wedges and find the one that exerts the greatest thrust on the wall. A wedge is acted upon by three forces:

- W , the weight of the wedge;
- P_a , the reaction from the wall;
- R , the reaction on the plane of failure.

At failure, the reaction on the failure plane will be inclined at maximum obliquity, ϕ' , to the normal to the plane. If the angle of wall friction is δ then the reaction from the wall will be inclined at δ to the normal to the wall (δ cannot be greater than ϕ'). As active pressures are being developed the wedge is tending to move downwards, and both R and P_a will consequently be on the downward sides of the normals (Fig. 7.14b). W is of known magnitude (area $ABD \times$ unit weight) and direction (vertical) and R and P_a are both of known direction, so the triangle of forces can be completed and the magnitude of P_a found (Fig. 7.14c). The value of the angle of wall friction, δ , can be obtained from tests, but if test values are not available δ is usually assumed as 0.5 to $0.75\phi'$.

In Fig. 7.16, the total thrust on the wall due to earth pressure is to be evaluated, four trial wedges having been selected with failure surfaces BC , BD , BE and BF . At some point along each failure surface a line normal to it is drawn, after which a second line is constructed at ϕ' to the normal. The resulting four lines give the lines of action of the reactions on each of the trial planes of failure. The direction of the wall reaction is similarly obtained by drawing a line normal to the wall and then another line at angle δ to it.

The weight of each trial slice is next obtained, and starting at a point X , these weights are set off vertically upwards as points d_1 , d_2 , etc. such that Xd_1 represents the weight of slice 1 to some scale, Xd_2 represents the weight of slice 2 + slice 1, and so on.

A separate triangle of forces is now completed for each of the four wedges, the directions of the corresponding reaction on the failure plane and of P_a being obtained from the space diagram. The point of

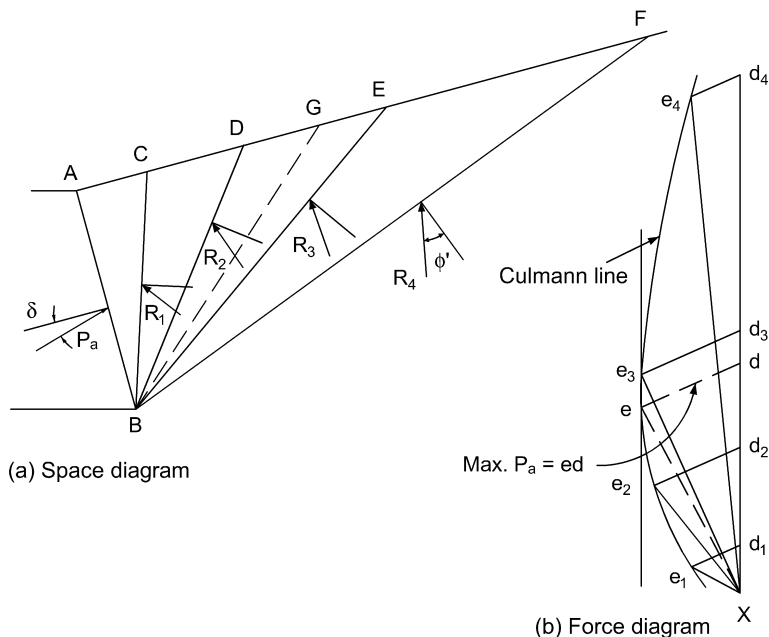


Fig. 7.16 Culmann line construction for a cohesionless soil.

intersection of R and P_a is given the symbol e with a suffix that tallies with the wedge analysed, e.g. the point e_1 represents the intersection of P_{a1} and R_1 .

The maximum thrust on the wall is obviously represented by the maximum value of the length ed. To obtain this length a smooth curve (the Culmann line) is drawn through the points e_1, e_2, e_3 and e_4 . A tangent to the Culmann line which is parallel to Xd_4 will cut the line at point e: hence the line ed can be drawn on the force diagram, and the length ed represents the thrust on the back of the wall due to the soil.

If required, the position of the actual failure plane can be plotted on the space diagram, the angle e_3Xe_2 on the force diagram equalling the angle EBD on the space diagram whilst the angle eXe_2 similarly equals the angle GBD where BG = failure plane.

7.6.3 The effect of cohesion

The theory assumes that at the top of the wall there is a zone of soil within which there are no friction or cohesive effects along both the back of the wall and the plane of rupture (Fig. 7.17). The depth of the zone is taken as z_0 and, as before, $z_0 = h_c$ or $z_0 = h_c - h_e$.

Graphical solution

There are now five forces acting on the wedge:

- R, the reaction on plane of failure;
- W, the weight of whole wedge ABED;
- P_a , the resultant thrust on wall;
- C_w , the adhesive force along length BF of wall ($C_w = c_w BF$);
- C, the cohesive force along rupture plane BE ($C = cBE$).

The unit wall adhesion, c_w , cannot be greater than the apparent cohesion. In the absence of tests that indicate that higher values may be used, c_w can be taken as equal to the apparent cohesion, up to a maximum of $c_w = 50\text{kPa}$.

The value of W is obtained as before, so there are only two unknown forces: R and P_a .

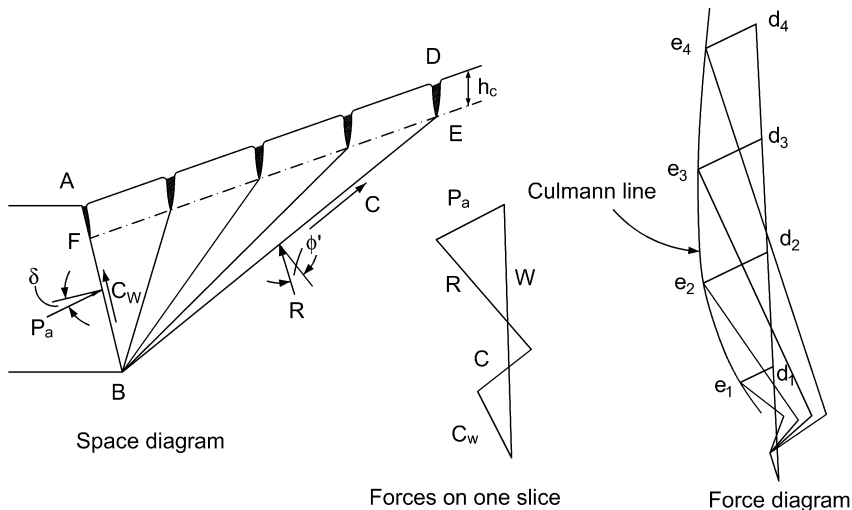


Fig. 7.17 Culmann line construction adapted to allow for cohesion.

In order to draw the Culmann line a polygon of forces must be constructed. The weights of the various wedges are set off as before, vertically up from the point X. As the force C_w is common to all polygons it is drawn next, and the C force is then plotted. The direction of P_a is drawn from point d and the direction of R is drawn from the end of force C ; these two lines cross at the point e on the Culmann line.

Example 7.7: Active thrust; graphical solution

Determine the maximum thrust on the wall shown in Fig. 7.18a. The properties of the soil are: $\gamma = 17.4 \text{ kN/m}^3$, $c' = 9.55 \text{ kPa}$, $\delta = \phi' = 19^\circ$.

Solution:

$$h_c = \frac{2c'}{\gamma} \tan\left(45^\circ + \frac{\phi'}{2}\right) = \frac{2 \times 9.55}{17.4} \times \tan 54.5^\circ = 1.52 \text{ m}$$

Wall adhesion = $(7.64 - 1.52) 9.55 = 58.5 \text{ kN}$

Cohesion on failure planes:

1: $9.93 \times 9.55 = 94.7 \text{ kN}$

2: $11.11 \times 9.55 = 106.0 \text{ kN}$

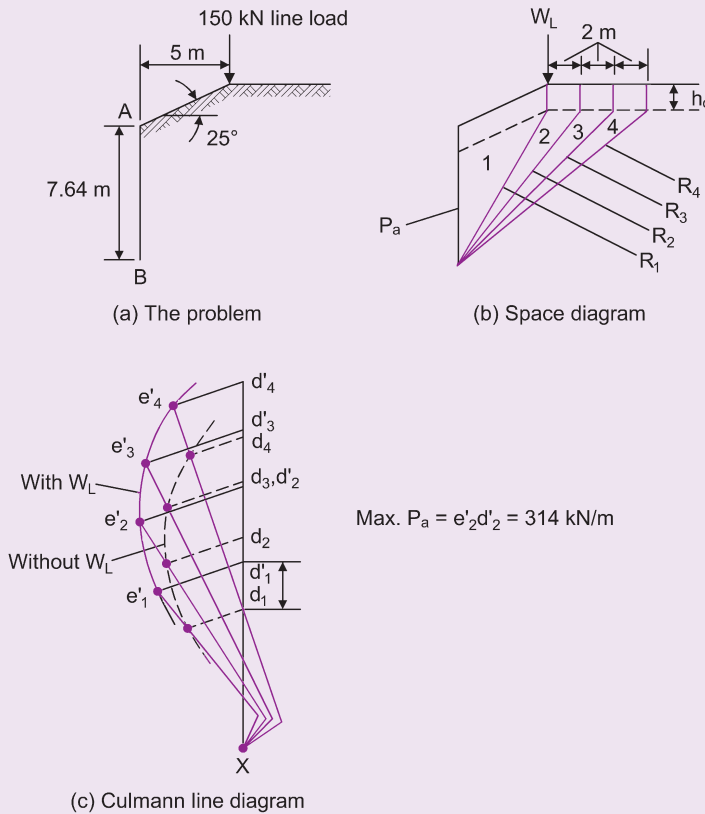


Fig. 7.18 Example 7.7.

$$3: 12.20 \times 9.55 = 116.4 \text{ kN}$$

$$4: 13.25 \times 9.55 = 126.5 \text{ kN}$$

Weight of wedges:

$$1: 22.6 \times 17.4 = 393 \text{ kN}$$

$$2: 35.1 \times 17.4 = 611 \text{ kN}$$

$$3: 43.8 \times 17.4 = 762 \text{ kN}$$

$$4: 51.9 \times 17.4 = 903 \text{ kN}$$

Space and force diagrams are given in Figs 7.18b and 7.18c.

$$\text{Maximum } P_a = e'_2 d'_2 = 314 \text{ kN/m}$$

Kerisel and Absi (1990) published values of the horizontal components of K_a and K_p for a range of values of ϕ , β , δ and ψ to ease calculation when using the Coulomb theory. In addition, the spreadsheet *earth pressure coefficients.xls* is available for download, which can be used to determine the horizontal components of K_a and K_p too. In this section we are concerned with the horizontal component of K_a (i.e. $K_a \cos \delta$) only. The horizontal component of K_p is given in Section 7.7.2.

The active pressure acting normally to the wall at a depth h can be defined by:

$$p_{ah} = K_a \gamma h - cK_{ac}$$

where

c = operating value of cohesion

K_{ac} = coefficient of active earth pressure.

Various values of K_a and K_{ac} are given in Table 7.1 for the straightforward case of $\beta = 0$ and $\psi = 90^\circ$. Note that, where appropriate, ϕ' is the operating value of the angle of shearing resistance of the soil.

Intermediate values of K_a and K_{ac} can be obtained from the spreadsheet. It should be noted that the values in both the spreadsheet and in Table 7.1 are for pressure components acting in the horizontal direction, not at an angle δ to the horizontal as in the original Coulomb theory. The values in the spreadsheet are derived from the following widely recognised formulae, which are sufficiently accurate for most purposes:

$$K_a = \text{Coulomb's value} \times \cos \delta$$

$$K_{ac} = 2\sqrt{K_a \left(1 + \frac{c_w}{c}\right)}$$

Table 7.1 Values of K_a and K_{ac} for a cohesive soil for $\beta = 0$, $\psi = 90^\circ$.

Coefficient	Values of δ	Values of c_w/c	Values of ϕ'					
			0°	5°	10°	15°	20°	25°
K_a	0	All	1.00	0.85	0.70	0.59	0.48	0.40
	ϕ'	values	1.00	0.78	0.64	0.50	0.40	0.32
K_{ac}	0	0	2.00	1.83	1.68	1.54	1.40	1.29
	0	1	2.83	2.60	2.38	2.16	1.96	1.76
	ϕ'	$\frac{1}{2}$	2.45	2.10	1.82	1.55	1.32	1.15
	ϕ'	1	2.83	2.47	2.13	1.85	1.59	1.41

Example 7.8: Coulomb K_a

Determine Coulomb's K_a value for $\phi' = 20^\circ$, $\delta = 10^\circ$, $\beta = 0^\circ$, $\psi = 90^\circ$, $c' = 10 \text{ kPa}$, $c_w = 10 \text{ kPa}$.

Solution:

$$K_a = \left\{ \frac{\operatorname{cosec} 90^\circ \sin 70^\circ}{\sqrt{\sin 100^\circ + \sqrt{\sin 30^\circ \sin 20^\circ / \sin 90^\circ}}} \right\}^2 = 0.4467$$

Hence the K_a value for horizontal pressure = $0.4467 \times \cos 10^\circ = 0.44$.

$$K_{ac} = 2\sqrt{0.44 \left(1 + \frac{10}{10}\right)} = 1.88$$

In part (b) of Example 7.10, the values of K_a and K_{ac} are obtained via Table 7.1. It is interesting to compare the answers with those found in this example.

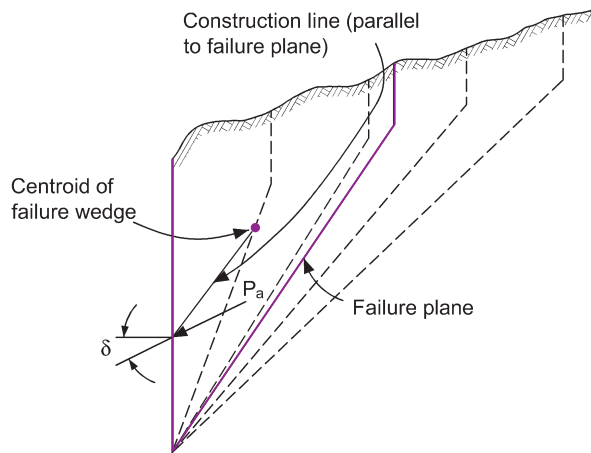


Fig. 7.19 Determination of line of action p_a .

7.6.4 Point of application of total active thrust

When using the Culmann line construction, the magnitude of P_a is obtained directly from the force diagram. Its point of application may be assumed to be where a line drawn through the centroid of the failure wedge, and parallel to the failure plane, intersects the back of the wall. (See Fig. 7.19.)

7.7 Coulomb's wedge theory: passive earth pressure**7.7.1 Granular soils**

With the assumption of a plane failure surface leading to a wedge failure, Coulomb's expression for K_p for a granular soil is:

$$K_p = \left[\frac{\operatorname{cosec} \psi \sin(\psi - \phi')}{\sqrt{\sin(\psi - \delta) - \sqrt{\frac{\sin(\phi' + \delta) \sin(\phi' + \beta)}{\sin(\psi - \beta)}}}} \right]^2$$

the symbols having the same meanings as previously.

The expression reduces to:

$$K_p = \frac{1 + \sin \phi'}{1 - \sin \phi'}$$

when $\psi = 90^\circ$, $\delta = 0^\circ$ and $\beta = 0^\circ$.

With passive pressure, unfortunately, the failure surface only approximates to a plane surface when the angle of wall friction is small.

The situation arises because the behaviour of the soil is not only governed by its weight but also by the compression forces induced by the wall tending to push into the soil. These forces, unlike the active case, do not act on only one plane within the soil, resulting in a non-uniform strain pattern and the development of a curved failure surface (Fig. 7.20).

It is apparent that in most cases the assumption of a Coulomb wedge for a passive failure can lead to a serious overestimation of the resistance available. Terzaghi (1943) first analysed this problem and concluded that, provided the angle of friction developed between the soil and the wall is not more than $\phi'/3$, where ϕ' is the operative value of the angle of shearing resistance of the soil, the assumption of a plane failure surface generally gives reasonable results. For values of δ greater than $\phi'/3$, the errors involved can be very large.

Adjusted values for K_p that allow for a curved failure surface are given in Table 7.2. These values apply to a vertical wall and a horizontal soil surface and include the multiplier $\cos \delta$ as the values in the table give the components of pressure that will act normally to the wall.

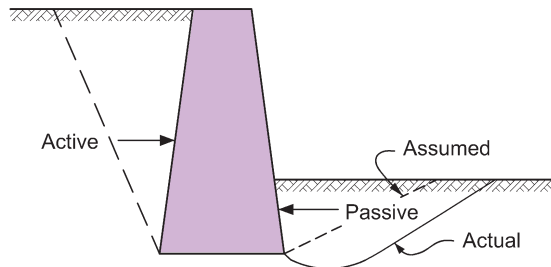


Fig. 7.20 Departure of passive failure surface from a plane.

Table 7.2 Values of K_p for cohesionless soils (Kerisel and Absi, 1990).

Values of δ	Values of ϕ'			
	25°	30°	35°	40°
0°	2.5	3.0	3.7	4.6
10°	3.1	4.0	4.8	6.5
20°	3.7	4.9	6.0	8.8
30°	–	5.8	7.3	11.4

It is seen therefore that for a smooth wall where $\delta = 0^\circ$ the Rankine theory can be used for the evaluation of passive pressure. If wall friction is mobilised then $\delta \neq 0^\circ$ and the coefficients of Table 7.2 should be used (unless $\delta \leq \phi'/3$ in which case the Coulomb equation can be used directly).

7.7.2 The effect of cohesion

As has been discussed, a clay has a non-linear stress-strain relationship and its shear strength depends upon its previous stress history. Add to this the complications of non-uniform strain patterns within a passive resistance zone and it is obvious that any design approach must be an empirical approach based on experimental work.

A similar equation to that of Bell can be used for passive pressure values when the effect of wall friction and adhesion are taken into account.

The passive pressure acting normally to the wall at a depth of h can be defined as:

$$p_{ph} = K_p \gamma h + cK_{pc}$$

where

- c = operating value of cohesion
- K_{pc} = coefficient of passive earth pressure.

Various values of K_p and K_{pc} are given in Table 7.3 for the straightforward case of $\beta = 0, \psi = 90^\circ$. As with the active pressure coefficients given in Table 7.1, they give the value of the pressure acting normally to the wall.

An alternative to using the values set out in Table 7.3 is that of the work of Sokolovski (1960), part of which is presented in Table 7.4. This offers a more realistic set of values than those listed in Tables 7.2 and 7.3.

The K_{pc} values were obtained from the approximate relationship:

$$K_{pc} = 2\sqrt{K_p} \left\{ 1 + \frac{c_w}{c} \right\}$$

This relationship has been used in the *earth pressure coefficients.xls* spreadsheet which can be used to determine intermediate values of K_p and K_{pc} .

It should be noted that, in the case of passive earth pressure, the amount of wall movement necessary to achieve the ultimate value of ϕ' can be large, particularly in the case of a loose sand where one cannot reasonably expect that more than one half the value of the ultimate passive pressures will be developed.

Table 7.3 Values of K_p and K_{pc} for a cohesive soil for $\beta = 0; \psi = 90^\circ$.

Coefficient	Values of δ	Values of c_w/c	Values of ϕ'					
			0°	5°	10°	15°	20°	25°
K_p	0	All values	1.0	1.2	1.4	1.7	2.1	2.5
	ϕ'		1.0	1.3	1.6	2.2	2.9	3.9
K_{pc}	0	0	2.0	2.2	2.4	2.6	2.8	3.1
	0	$\frac{1}{2}$	2.4	2.6	2.9	3.2	3.5	3.8
	0	1	2.6	2.9	3.2	3.6	4.0	4.4
	ϕ'	$\frac{1}{2}$	2.4	2.8	3.3	3.8	4.5	5.5
	ϕ'	1	2.6	2.9	3.4	3.9	4.7	5.7

Table 7.4 Values of K_p and K_{pc} (after Sokolovski, 1960).

		Values of ϕ' (degrees)			
		10°	20°	30°	40°
Values of δ	Values of c_w/c	Values of K_p			
0	All	1.42	2.04	3.00	4.60
$\phi'/2$	values	1.55	2.51	4.46	9.10
ϕ'		1.63	2.86	5.67	14.10
		Values of K_{pc}			
0	0	2.38	2.86	3.46	4.29
$\phi'/2$	0	2.49	3.17	4.22	6.03
ϕ	0	2.55	3.38	4.76	7.51
0	0.5	2.92	3.50	4.24	5.25
$\phi'/2$	0.5	3.05	3.88	5.17	7.39
ϕ	0.5	3.13	4.14	5.83	9.20
0	1.0	3.37	4.04	4.90	6.07
$\phi'/2$	1.0	3.52	4.48	5.97	8.53
ϕ'	1.0	3.61	4.78	6.73	10.62

The following design parameters are recommended for δ and c_w :

For timber, steel and precast concrete: $= \phi'/2$

For cast *in situ* concrete: $= 2\phi'/3$

Generally, c_w should be assumed to be half of the value for the active pressure conditions.

7.8 Surcharges

The extra loading carried by a retaining wall is known as a surcharge and can be a uniform load (roadway, stacked goods, etc.), a line load (trains running parallel to a wall), an isolated load (column footing), or a dynamic load (traffic).

7.8.1 Uniform load

Soil surface horizontal

When the surface of the soil behind the wall is horizontal, the pressure acting on the back of the wall due to the surcharge, q , is uniform with depth and has magnitude equal to $K_a q$ (Fig. 7.21).

Soil surface sloping at angle β to horizontal

When the surface of the soil is not horizontal, the surcharge can be considered as equivalent to an extra height of soil, h_e placed on top of the soil.

$$h_e = \frac{q \sin \psi}{\gamma \sin(\psi + \beta)}$$

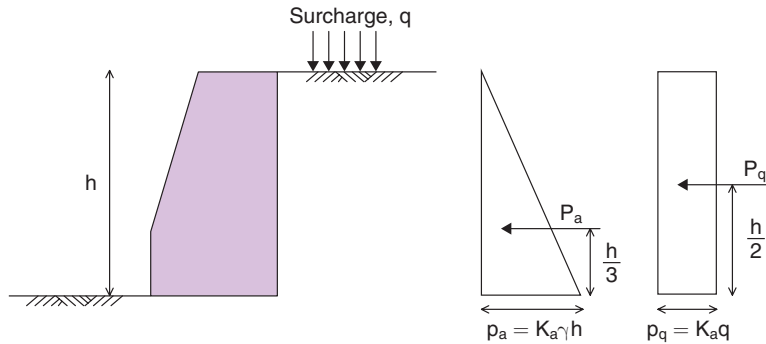


Fig. 7.21 Effect of uniform surcharge on a retaining wall.

where

γ = unit weight of soil (kN/m^3)

q = magnitude of surcharge (kPa)

ψ = angle of back of wall to horizontal

β = angle of inclination of retained soil.

Once again the pressure acting on the back of the wall due to the surcharge is considered uniform, but this time is of magnitude $K_a \gamma h_e$.

With the Culmann line construction, the weight of surcharge on each slice is added to the weight of the slice. The weight of each wedge plus its surcharge is plotted as Xd_1 , Xd_2 , etc. and the procedure is as described earlier.

Even when a retaining wall is not intended to support a uniform surcharge it should be remembered that it may be subject to surface loadings due to plant movement during construction. It is at this time that the wall will be at its weakest state.

Example 7.9: Uniform surcharge (i)

A smooth-backed vertical wall is 6 m high and retains a soil with a bulk unit weight of 20 kN/m^3 and $\phi' = 20^\circ$. The top of the soil is level with the top of the wall and its surface is horizontal and carries a uniformly distributed load of 50 kPa . Using the Rankine theory, determine the total active thrust on the wall/linear metre of wall and its point of application.

Solution:

Fig. 7.22a shows the problem and Fig. 7.22b shows the resultant pressure diagram.

Using the Rankine theory:

$$K_a = \frac{1 - \sin 20^\circ}{1 + \sin 20^\circ} = 0.49$$

$$p_a = K_a \gamma h = 0.49 \times 20 \times 6 = 58.8 \text{ kPa}$$

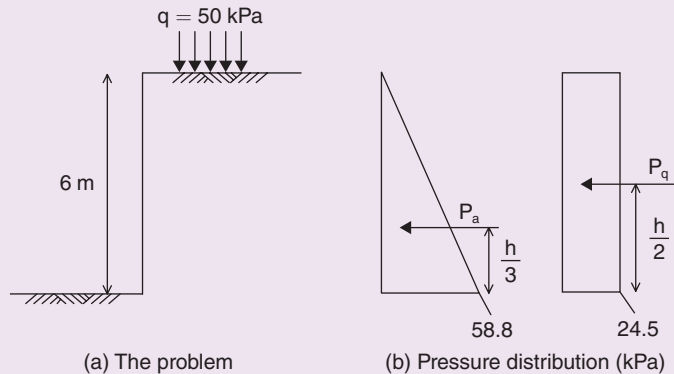


Fig. 7.22 Example 7.9.

Since soil surface behind wall is horizontal,

$$p_q = K_a q = 0.49 \times 50 = 24.5 \text{ kPa}$$

The pressure diagram is now plotted (Fig. 7.22b).

$$\begin{aligned} \text{Total thrust} &= \text{Area of pressure diagram} = P_a + P_q = \left(\frac{1}{2} \times 58.8 \times 6 \right) + (24.5 \times 6) \\ &= 176.4 + 147 = 323.4 \text{ kN} \end{aligned}$$

The point of application of this thrust is obtained by taking moments of forces about the base of the wall, i.e.

$$\begin{aligned} 323.4 \times h &= 147 \times 3 + 176.4 \times \frac{6}{3} \\ \Rightarrow h &= \frac{793.8}{323.4} = 2.45 \text{ m} \end{aligned}$$

Resultant thrust acts at 2.45 m above base of wall.

Example 7.10: Uniform surcharge (ii)

A vertical retaining wall is 5 m high and supports a soil, the surface of which is horizontal and level with the top of the wall and carrying a uniform surcharge of 75 kPa.

The properties of the soil are: $\phi = 20^\circ$; $c' = 10 \text{ kPa}$; $\gamma = 20 \text{ kN/m}^3$; $\delta = \phi'/2$.

Determine the value of the maximum horizontal thrust on the back of the wall:

- by the Culmann line construction;
- by the K_a and K_{sc} coefficients of Table 7.1.

Solution:

$$c' < 50 \text{ kPa} \Rightarrow c_w = c' = 10 \text{ kPa}$$

$$h_c = \frac{2c'}{\gamma} \tan(45^\circ + \phi'/2) = 1.43 \text{ m}$$

$$h_e = \frac{q}{\gamma} = \frac{75}{20} = 3.75 \text{ m (since } \psi = 90^\circ \text{ and } \beta = 0^\circ)$$

$$\Rightarrow z_o = h_c - h_e = -2.32 \text{ m, i.e. take } z_o = 0$$

(a) The space and force diagrams for the Culmann line construction are shown in Figs 7.23a and 7.23b respectively.

Three slices have been chosen and the calculations are best tabulated.

Slice	Area (m ²)	$\gamma \times \text{area}$ (kN)	q (kN)	ΣW (kN)	C (= c × base) (kN)
1	5	100	150	250	53
2	10	200	300	500	64
3	15	300	450	750	79

Cohesive force on back of wall, $C_w = c_w \times AB = 10 \times 5 = 50 \text{ kN}$.

From the force diagram, maximum $P_a = 190 \text{ kN/m}$ run of wall, acting at δ to the normal to the wall.

$$\Rightarrow \text{Maximum horizontal thrust on back of wall} = 190 \cos 10^\circ = 187 \text{ kN/m run of wall.}$$

(b) Coefficients K_a and K_{ac} (Table 7.1) can be obtained by linear interpolation:

$$\text{For } c_w/c' = 1.0 \text{ and } \phi' = 20^\circ; K_a = 0.48 \text{ for } \delta = 0^\circ$$

$$\text{For } c_w/c' = 1.0 \text{ and } \phi' = 20^\circ; K_a = 0.40 \text{ for } \delta = \phi' \Rightarrow K_a = 0.44$$

$$\text{For } c_w/c' = 1.0 \text{ and } \phi' = 20^\circ; K_{ac} = 1.96 \text{ for } \delta = 0^\circ$$

$$\text{For } c_w/c' = 1.0 \text{ and } \phi' = 20^\circ; K_{ac} = 1.59 \text{ for } \delta = \phi' \Rightarrow K_{ac} = \frac{1.96 + 1.59}{2} = 1.78$$

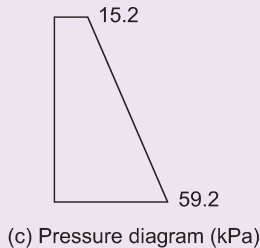
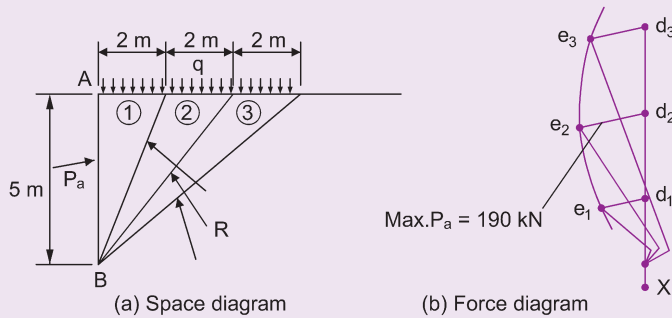


Fig. 7.23 Example 7.10.

Active pressure at top of wall,

$$P_{a_0} = \gamma h_e K_a - c' K_{ac} = (20 \times 3.75 \times 0.44) - (10 \times 1.78) = 15.2 \text{ kPa}$$

Active pressure at base of wall,

$$P_{a_5} = \gamma(H + h_e)K_a - c' K_{ac} = 20(5 + 3.75)0.44 - 17.8 = 59.2 \text{ kPa}$$

The pressure diagram on the back of the wall is shown in Fig. 7.23c. Remembering that these are the values of pressure acting normal to the wall, the maximum horizontal thrust will be the area of the diagram.

$$\text{Maximum horizontal thrust} = \frac{15.2 + 59.2}{2} \times 5 = 186 \text{ kN/m run of wall.}$$

7.8.2 Line load

The lateral thrust acting on the back of the wall as a result of a line load surcharge is best estimated by plastic analysis.

It is possible to use a Boussinesq analysis (see Chapter 3) to determine the vertical stress increments due to the surface load and then to use these values in the plastic analysis combined with the design value of K_a (see Chapter 8).

With the Culmann line construction the weight of the line load, W_L is simply added to the trial wedges affected by it (Fig. 7.24). The Culmann line is first constructed as before, ignoring the line load. On this basis the failure plane would be BC and P_a would have a value 'ed' to some force scale.

Slip occurring on BC_1 and all planes further from the wall will be due to the wedge weight plus W_L . For plane BC_1 , set off $(W_1 + W_L)$ from X to d'_1 and continue the construction of the Culmann line as before (i.e. for every trial wedge to the right of plane BC_1 , add W_L to its weight). The Culmann line jumps from e_1 to e'_1 and then continues to follow a similar curve.

The wall thrust is again determined from the maximum ed value by drawing a tangent, the maximum value of ed being in this case $e'_1 d'_1$. If W_L is located far enough back from the wall it may be that ed is still greater than $e'_1 d'_1$ in this case W_L is taken as having no effect on the wall.

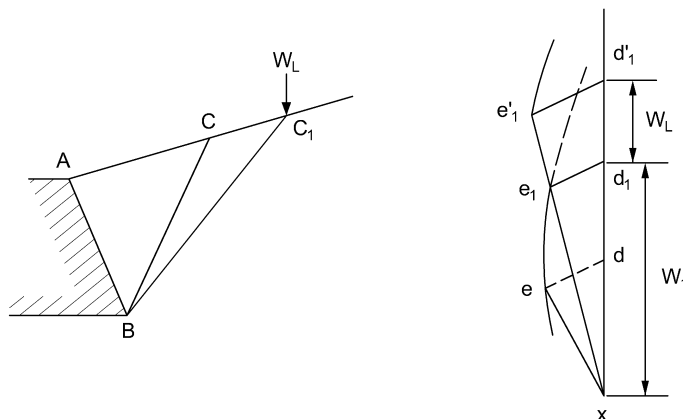


Fig. 7.24 Culmann line construction for a line load.

7.8.3 Compaction effects

During the construction of gravity retaining walls, layers of fill are compacted behind the wall, and this compaction process induces lateral stresses within the fill which can act against the back of the wall. If the stresses are high enough they can lead to movement or deformation of the wall, and so the effect of the compaction is taken into account during the design of the wall. Guidance on the effects of the compaction of backfill is given by Broms (1971) and by Clayton and Symons (1992).

7.9 Choice of method for determination of active pressure

The main criticism of the Rankine theory is that it assumes conditions that are unrealistic in soils. There will invariably be friction and/or adhesion developed between the soil and the wall as it will have some degree of roughness and will never be perfectly smooth. Hence, in many cases, the Rankine assumption that no shear forces develop on the back of the wall is simply not true and it may be appropriate to use the Coulomb theory.

As noted earlier it is not easy to obtain measured values of the value of wall friction, δ , and the value of the wall adhesion, c_w , which are usually estimated. δ is obviously a function of the angle of shearing resistance, ϕ' , of the retained soil immediately adjacent to the wall and can have any value from virtually zero up to some maximum value, which cannot be greater than ϕ' . Similarly the operative value of c_w is related to the value of cohesion of the soil immediately adjacent to the wall.

Just what will be the actual operating value of δ depends upon the amount of relative movement between the soil and the wall. A significant downward movement of the soil relative to the wall will result in the development of the maximum δ value.

Cases of significant relative downward movement of the soil are not necessarily all that common. Often there are cases in which there is some accompanying downward movement of the wall resulting in the smaller relative displacement. Examples of such cases can be gravity and sheet piled walls and a value of δ less than the maximum should obviously be used (descriptions of different wall types are given in Chapter 8.).

When the retained soil is supported on a foundation slab, as with a reinforced concrete cantilever or counterfort wall, there will be virtually no movement of the soil relative to the back of the wall. In this case the adoption of a 'virtual plane' in the design procedure, as illustrated in Example 8.2, justifies the use of the Rankine approach.

The use of the Rankine method affords a quick means for determining a conservative value of active pressure, which can be useful in preliminary design work. Full explanations of the procedures used in retaining wall design are given in Chapter 8.

7.10 Backfill material

The examples used to illustrate lateral earth pressure in this chapter have all been based on gravity walls, i.e. walls which are constructed using a 'bottom-up' process and backfilled with soil after construction. The ideal backfill material for such walls is granular, such as suitably graded stone, gravel, or clean sand with a small percentage of fines. Such a soil is free draining and of good durability and strength but, unfortunately, it can be expensive, even when obtained locally.

Economies can sometimes be achieved by using granular material in retaining wall construction in the form of a wedge as shown in Fig. 7.25. The wedge separates the finer material making up the bulk of the backfill from the back of the wall. With such a wedge, lateral pressures exerted on to the back of the wall can be evaluated with the assumption that the backfill is made up entirely of the granular material.

Slag, clinker, burnt colliery shale and other manufactured materials that approximate to a granular soil will generally prove satisfactory as backfill material provided that they do not contain harmful chemicals. Inorganic silts and clays can be used as backfills but require special drainage arrangements and can give

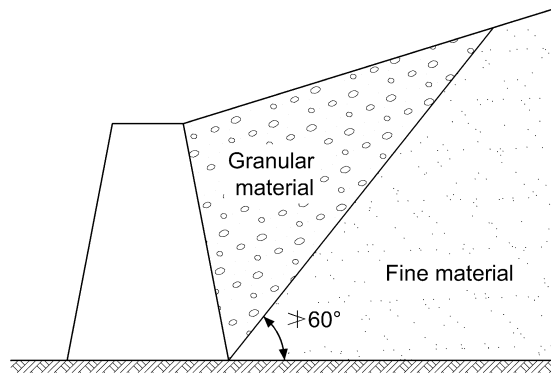


Fig. 7.25 Use of granular material in retaining wall construction.

rise to swelling and shrinkage problems that are not encountered in granular material. Peat, organic soil, chalk, unburnt colliery shale, pulverised fuel ash and other unsuitable material should not be used as backfill if at all possible.

7.10.1 Drainage systems

No matter what material is used as a backfill, its drainage is of great importance. A retaining wall is designed generally to withstand only lateral pressures exerted by the soil that it is supporting. In any design the possibility of a groundwater level occurring in the material behind a retaining wall must be examined and an appropriate drainage system decided upon.

For a granular backfill the only drainage often necessary is the provision of weep holes that go through the wall and are spaced at some 3 m centres, both horizontally and vertically. The holes can vary in diameter from 75 to about 150 mm and are protected against clogging by the provision of gravel pockets placed in the backfill immediately behind each weep hole (Fig. 7.26a).

Generally weep holes can only be provided in outside walls and an alternative arrangement for granular backfill is illustrated in Fig. 7.26b. It consists of a continuous longitudinal back drain, placed at the foot of the wall and consisting of open jointed pipes packed around with gravel or some other suitable filter material. The design of filters is discussed in Chapter 2. Provision for rodding out should be provided.

If the backfill material is granular but has more than 5% fine sand, silt or clay particles mixed within it then it is only semi-pervious. For such a material the provision of weep holes on their own will provide inefficient drainage, with the further complication of there being a much greater tendency for clogging to occur. The answer is to provide additional drainage, in the form of vertical strips of filter material (about $0.33 \times 0.33 \text{ m}^2$ in cross-section) placed midway between the weep holes and led down to a continuous longitudinal strip of the same filter material of the same cross-section as shown in Fig. 7.26c.

For clayey materials blanket drains of suitable filter material are necessary. These blankets should be about 0.33 m thick and typical arrangements are shown in Figs 7.26d and 7.26e. Generally the vertical drainage blanket of Fig. 7.26d will prove satisfactory, especially if the surface of the retained soil can be protected with some form of impervious covering. If this protection cannot be given then there is the chance of high seepage pressure being created during heavy rain (see Example 7.11). In such a situation the alternative arrangement of the inclined filter blanket of Fig. 7.26e can substantially reduce such seepage pressures.

The reason for the different effects of the two drainage systems can be seen when we consider the respective seepage flow nets that are generated during flooded conditions.

The flow net for the vertical drain is shown in Fig. 7.27a. It must be appreciated that the drain is neither an equipotential nor a flow line. It is a drained surface and therefore the only head of water that can exist along it is that due to elevation. Hence, if a square flow net has been drawn, the vertical distances between

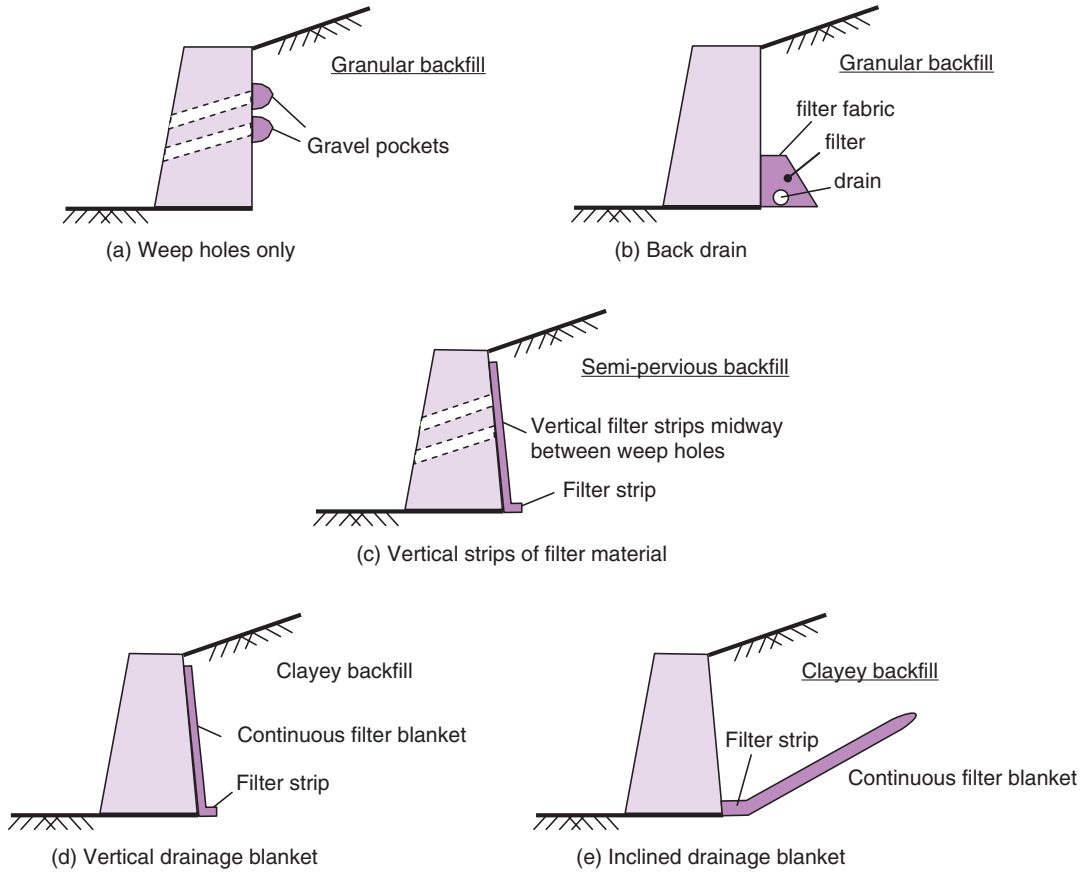


Fig. 7.26 Common drainage systems for retaining walls.

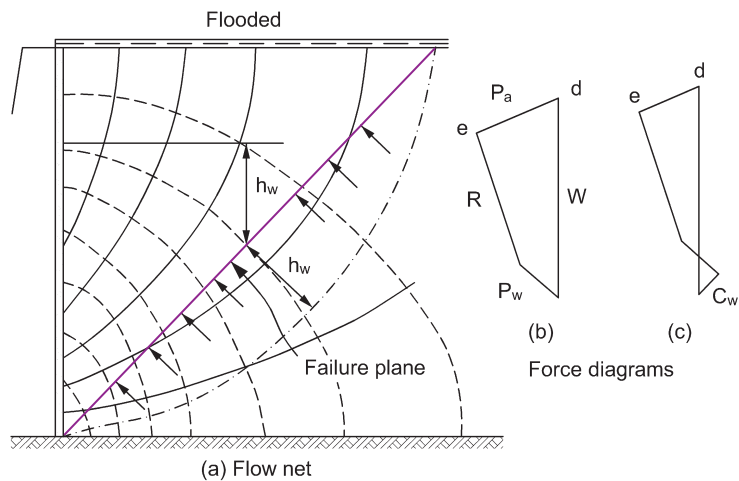


Fig. 7.27 Seepage forces behind a retaining wall with a vertical drain during heavy rain.

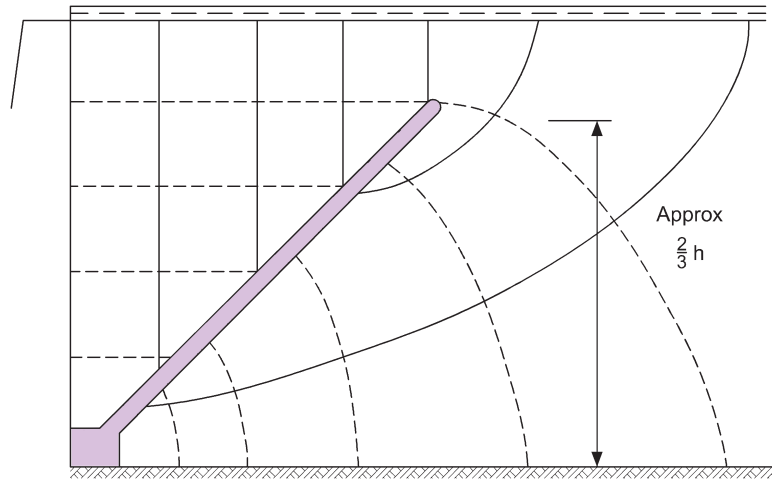


Fig. 7.28 Effect of an inclined drain on seepage forces.

adjacent equipotentials entering the drain will be equal to each other (in a manner similar to the upstream slope of an earth dam).

Owing to the seepage forces, an additional force, P_w , now acts upwards and at right-angles to the failure plane. From the flow net it is possible to determine values of excess hydrostatic pressure, h_w , at selected points along the failure plane (see Fig. 7.27a). If a smooth curve is drawn through these h_w values (when plotted along the failure plane), it becomes possible to evaluate P_w (see Example 7.11).

The resulting force diagram is shown in Fig. 7.27b. In theory the polygon of forces will be as shown in Fig. 7.27c but, as seepage will only occur once the soil has achieved a drained state, the operative strength parameter is ϕ' , with c' generally being assumed to be zero.

The seepage flow net for the inclined drain in Fig. 7.26e is shown in Fig. 7.28. Such a drain induces vertical drainage of the rain water and it is seen that the portion of the flow net above the drain is absolutely regular and, more important, that the equipotentials are horizontal. This latter fact means that, within the soil above the drain, the value of excess hydrostatic head at any point must be zero. The failure plane will not be subjected to the upward force P_w and the pressure exerted on the back of the wall can only be from the saturated soil.

7.10.2 Differential hydrostatic head

When there is a risk of a groundwater level developing behind the wall then the possible increase in lateral pressure due to submergence must be allowed for. This problem will occur in tidal areas, and quay walls must be designed to withstand the most adverse difference created by tidal lag between the water level in front of and the groundwater level behind the wall. As there is no real time for steady seepage conditions to develop between the two head levels, the effect of possible seepage forces can safely be ignored.

Example 7.11: Thrust due to saturated soil

A vertical 4 m high wall is founded on a relatively impervious soil and is supporting soil with the properties: $\phi' = 40^\circ$, $c' = 0$, $\delta = 20^\circ$, $\gamma_{\text{sat}} = 20 \text{ kN/m}^3$.

The surface of the retained soil is horizontal and is level with the top of the wall. If the wall is subjected to heavy and prolonged rain such that the retained soil becomes

saturated and its surface flooded, determine the maximum horizontal thrust that will be exerted on to the wall:

- (i) if there is no drainage system;
- (ii) if there is the drainage system of Fig. 7.26d;
- (iii) if there is the drainage system of Fig. 7.26e.

Solution:

- (i) No drainage

As we have been given a value for the angle of wall friction it is more realistic to use the Culmann line construction. The total pressure on the back of the wall will be the summation of the pressure from the submerged soil and the pressure from the water.

Four trial wedges have been chosen and are shown in Fig. 7.29a and the corresponding force diagram in Fig. 7.29b.

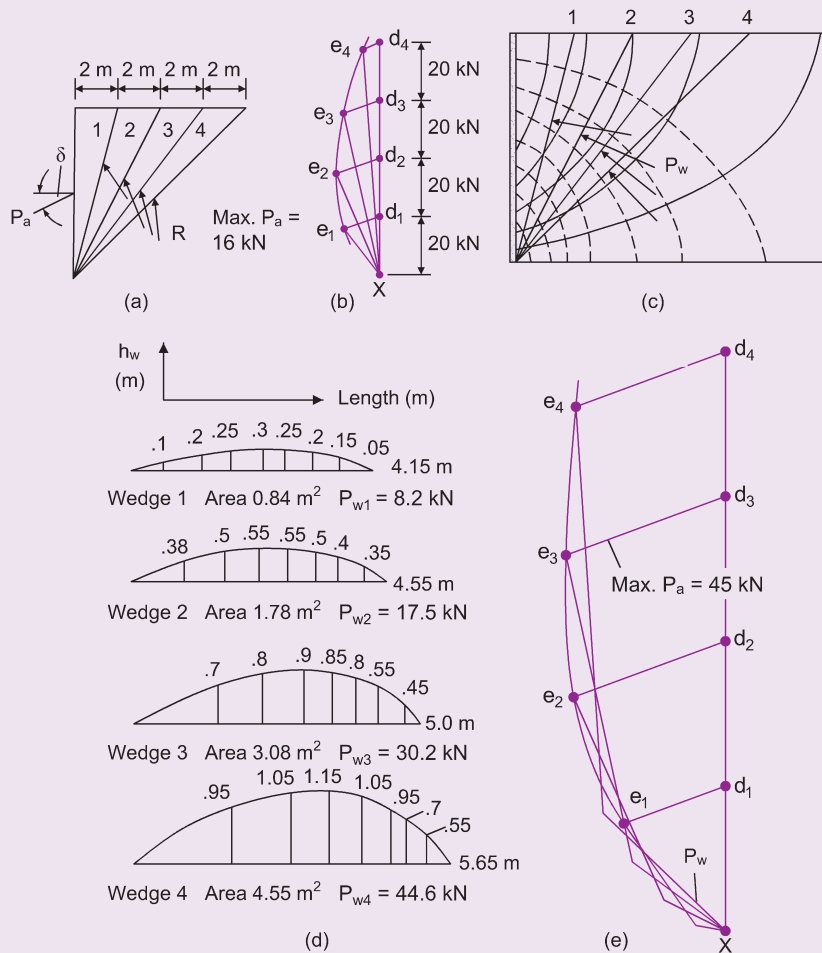


Fig. 7.29 Example 7.11.

Maximum P_a due to submerged soil = 16 kN
 Horizontal component of $P_a = 16.0 \times \cos 20^\circ = 15$ kN
 Horizontal thrust from water pressure = $9.81 \times \frac{4^2}{2} = 78.5$ kN
 Total horizontal thrust = 93.5 kN/m run of wall

(ii) With vertical drain on back of wall

The flow net for steady seepage from the flooded surface of the soil into the drain is shown in Fig. 7.29c. From this diagram it is possible to determine the distribution of the excess hydrostatic head, h_w , along the length of the failure surface of each of the four trial wedges. These distributions are shown in Fig. 7.29d and the area of each diagram times the unit weight of water gives the upward force, P_w , acting at right-angles to each failure plane.

The tabulated calculations are:

Wedge	Saturated weight (kN)	P_w (kN)
1	40	8
2	80	18
3	120	30
4	160	45

The force diagrams and the Culmann line construction are shown in Fig. 7.29e. From the force diagram, maximum $P_a = 45$ kN.

⇒ Maximum horizontal thrust on wall = $45 \times \cos 20^\circ = 42$ kN/m

(iii) With inclined drain

As has been shown earlier, for all points in the soil above the drain there can be no excess hydrostatic heads. The force diagram is therefore identical with Fig. 7.29e except that, as P_w is zero for all wedges, it is removed from each polygon of forces. When this is done it is found that the maximum value of P_a is 30 kN.

⇒ Maximum horizontal thrust on back of wall = $30 \times \cos 20^\circ = 28$ kN/m

7.11 Influence of wall yield on design

A wall can yield in one of two ways: either by rotation about its lower edge (Fig. 7.30b) or by sliding forward (Fig. 7.30c). Provided that the wall yields sufficiently, a state of active earth pressure is reached and the thrust on the back of the wall is in both cases about the same (P_a).

The pressure distribution that gives this total thrust value can be very different in each instance, however. For example, consider a wall that is unable to yield (Fig. 7.30a). The pressure distribution is triangular and is represented by the line AC.

Consider that the wall now yields by rotation about its lower edge until the total thrust = P_a (Fig. 7.30b). This results in conditions that approximate to the Rankine theory and is known as the totally active case.

Suppose, however, that the wall yields by sliding forward until active thrust conditions are achieved (Fig. 7.30c). This hardly disturbs the upper layers of soil so that the top of the pressure diagram is similar to the earth pressure at rest diagram. As the total thrust on the wall is the same as in rotational yield, it means that the pressure distribution must be roughly similar to the line AE in Fig. 7.30c.

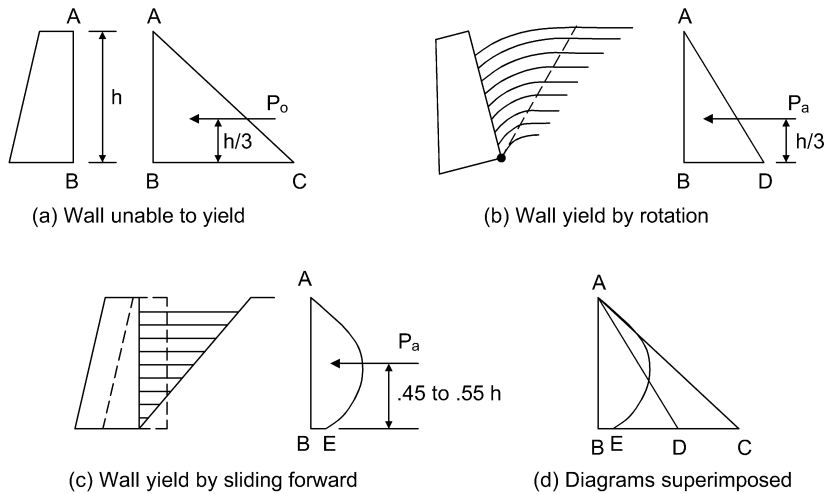


Fig. 7.30 Influence of wall yield on pressure distribution.

This type of yield gives conditions that approximate to the wedge theory, the centre of pressure moving up to between 0.45 and $0.55h$ above the wall base, and is referred to as the arching-active case.

The differences between the various pressure diagrams can be seen in Fig. 7.30d where the three diagrams have been superimposed. It has been found that if the top of a wall moves 0.1% of its height, i.e. a movement of 10 mm in a 10 m high wall, an arching-active case is attained. This applies whether the wall rotates or slides. In order to achieve the totally active case the top of the wall must move about 0.5% , or 50 mm in a 10 m wall.

It can therefore be seen that if a retaining wall with a cohesionless backfill is held so rigidly that little yield is possible (e.g. if it is joined to an adjacent structure) it must be designed to withstand earth pressure values much larger than active pressure values.

If such a wall is completely restrained it must be designed to take earth pressure at rest values, although this condition does not often occur; if a wall is so restrained that only a small amount of yielding can take place, arching-active conditions may be achieved, as in the strutting of trench timbers. In this case the assumption of triangular pressure distribution is incorrect, the actual pressure distribution being indeterminate but roughly parabolic.

If the wall yields 0.5 per cent of its height then the totally active case is attained and the assumption of triangular pressure distribution is satisfactory. Almost all retaining walls, unless propped at the top, can yield a considerable amount with no detrimental effects and attain this totally active state.

In the case of a wall with a cohesive backfill, the totally active case is reached as soon as the wall yields but due to plastic flow within the clay there is a slow build-up of pressure on the back of the wall, which will eventually yield again to re-acquire the totally active pressure conditions. This process is repetitive and over a number of years the resulting movement of the wall may be large. For such soils, one can either design for higher pressure or, if the wall is relatively unimportant, design for the totally active case bearing in mind that the useful life of the wall may be short.

7.12 Design parameters for different soil types

7.12.1 Active earth conditions

Owing to various self-compensating factors, the operative values of the strength parameters that determine the value of the active earth pressure are close to the peak values obtained from the triaxial test, even although a retaining wall operates in a state of plane strain. As has been discussed in Chapter 4,

the values of these strength parameters vary with both the soil type and the drainage conditions. For earth pressure calculations, attention should be paid to the following.

Sands and gravels

For all stages of construction and for the period after construction the appropriate strength parameter is ϕ' . It is appropriate to take c' as being equal to zero.

Clays

The manner in which a clay soil behaves during its transition from an undrained to a drained state depends upon the previous stress history of the soil and has been described in Chapter 4.

Soft or normally consolidated clay

During and immediately after construction of a wall supporting this type of soil the vertical effective stress is small, the strength of the soil is at a minimum and the value of the active earth pressure exerted on to the back of the wall is at a maximum. After construction and after sufficient time has elapsed, the soil will achieve a drained condition. The effective vertical stress will then be equal to the total vertical stress and the soil will have achieved its greatest strength. At this stage therefore the back of the wall will be subjected to the smallest possible values of active earth pressure (if other factors do not alter).

Obviously it is possible to use effective stress analyses to estimate the value of pressure on the back of the wall for any stage of the wall's life. A designer is interested mainly in the maximum pressure values, which occur during and immediately after construction. As it is not easy to predict accurate values of pore water pressures for this stage, an effective stress analysis can be difficult and it is simplest to use the undrained strength parameters in any earth pressure calculations, i.e. assume that $\phi = 0^\circ$ and that the undrained strength of the clay is c_u .

As mentioned in Chapter 4, the sensitivity of a normally consolidated clay can vary from 5 to 10. If it is considered that the soil will be severely disturbed during construction then the c_u value used in the design calculations should be the undrained strength of the clay remoulded to the same density and at the same water content as the *in situ* values.

If required, the final pressure values on the back of the wall, which apply when the clay is fully drained, can be evaluated in terms of effective stresses using the effective stress parameters ϕ' ($c' = 0$ for a normally consolidated clay). Soft clays usually have to be supported by an embedded wall (see Chapter 8) and water pressures acting on the wall must be considered in the design.

Overconsolidated clay

In the undrained state negative pore water pressures are generated during shear. This simply means that this type of clay is at its strongest and the pressure on the wall is at its minimum value during and immediately after construction. The maximum value of active earth pressure will occur when the clay has reached a fully drained condition and the retaining wall should be designed to withstand this value, obtained from the effective stress parameters ϕ' and c' .

With an overconsolidated clay, c' has a finite value (Fig. 4.32) but, for retaining wall design, this value cannot be regarded as dependable as it could well decrease. It is therefore safest to assume that $c' = 0$ and to work with ϕ' only in any earth pressure calculations involving overconsolidated clay. The assumption also helps to allow for any possible increase in lateral pressure due to swelling in an expansive clay as its pore water pressures change from negative (in the undrained state) to zero (when fully drained).

Silts

In many cases a silt can be assumed to be either purely granular, with the characteristics of a fine sand, or purely cohesive, with the characteristics of a soft clay. When such a classification is not possible then

the silt must be regarded as a $c-\phi$ soil. The undrained strength parameter c_u should be used for the evaluation of active earth pressures which will be applicable to the period of during and immediately after construction. The final active earth pressure to which the wall will be subjected can be determined from an effective stress analysis using the parameters ϕ' and c' .

Rain water in tension cracks

If tension cracks develop within a retained soil and if the surface of the soil is not rendered impervious, then rain water can penetrate into them. If the cracks become full of water we can consider that we have a hydrostatic, triangular distribution of water pressure acting on the back of the wall over the depth of the cracks, z_0 . The value of this pressure will vary from zero at the top of the wall to $9.81 \times z_0$ kPa at the base of the cracks. This water pressure should be allowed for in design calculations, see Section 7.5.1 and Example 7.4.

The ingress of water, if prolonged, can lead eventually to softening and swelling of the soil. Swelling could partially close the cracks but would then cause swelling pressures that could act on the back of the wall. The prediction of values of lateral pressure due to soil swelling is quite difficult.

Shrinkage cracks may also occur and, in the UK, can extend downwards to depths of about 1.5m below the surface of the soil. If water can penetrate these shrinkage cracks then the resulting water pressures should be allowed for as for tension cracks.

7.12.2 Passive earth conditions

Granular soils

It is generally agreed that, for passive pressures in a granular soil, the operative value of ϕ is lower than ϕ_t , the peak triaxial angle obtained from drained tests, particularly for high values of ϕ_t .

With a granular soil ϕ_t is most often estimated from the results of some *in situ* test such as the standard penetration test (see Chapter 6). It is suggested therefore that values for ϕ , to be used in the determination of passive pressure values, can be obtained from Fig. 7.31 (which is a modified form of Fig. 4.34). The corrected N value can be used in place of the direct blow count N.

Normally consolidated clays

As with the active state, this type of clay is at its weakest when in its undrained state, i.e. during and immediately after construction. For a normally consolidated clay the operative strength parameter is c_u .

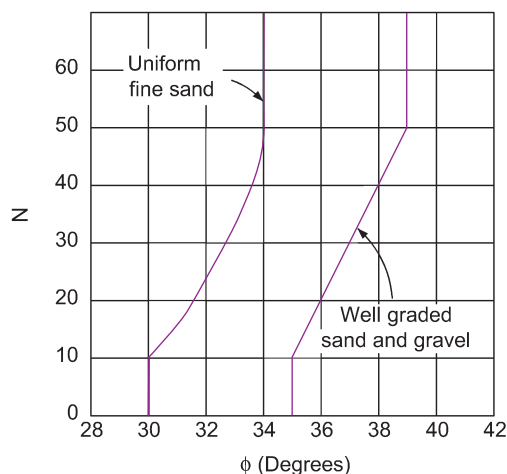


Fig. 7.31 Relationship between N and ϕ .

Overconsolidated clays

With this soil its weakest strength occurs once the soil has reached its drained state. The operative parameters are therefore c' and ϕ' , although this is an over-simplification for the case when the level of soil in front of the wall has been reduced by excavation. In this instance there will be a relief of overburden pressure which could result in softening occurring within the soil. When this happens some estimation of the strength reduction of the soil must be made, possibly by shear tests on samples of the softened soil.

Silts

As for active pressure, the passive resistance of a silt can be estimated either from the results of *in situ* penetration tests or from a drained triaxial test. For passive pressure the appropriate strength parameters are c' and ϕ' .



Exercises

Exercise 7.1

A 6 m high retaining wall with a smooth vertical back retains a mass of dry cohesionless soil that has a horizontal surface level with the top of the wall and carries a uniformly distributed load of 10 kPa. The soil weighs 20 kN/m^3 and has an angle of shearing resistance of 36° .

Determine the active thrust on the back of the wall per metre length of wall (i) without the uniform surcharge and (ii) with the surcharge.

Answers (i) 93.6 kN; (ii) 109.2 kN

Exercise 7.2

The back of a 10.7 m high wall slopes away from the soil it retains at an angle of 10° to the vertical. The surface of the soil slopes up from the top of the wall at an angle of 20° . The soil is cohesionless with a density of 17.6 kN/m^3 and $\phi' = 33^\circ$.

If the angle of wall friction, $\delta = 19^\circ$, determine the maximum thrust on the wall: (a) graphically and (b) analytically using the Coulomb theory.

Answer (a) and (b) $P_a = 476.3 \text{ kN}$

Exercise 7.3

The soil profile acting against the back of a retaining wall is shown in Fig. 7.32. Assuming that Rankine's conditions apply, determine both the theoretical lateral earth pressure distribution and the distribution that would be used in design, and sketch the two pressure distribution diagrams.

From the pressure distribution that would be used in design, determine the magnitude of the total thrust that acts on the wall.

Determine the point of application of the total thrust, and express it as the distance from the base of the wall.

Answer $P = 183.6 \text{ kN}$; $x = 2.56 \text{ m}$ above base.

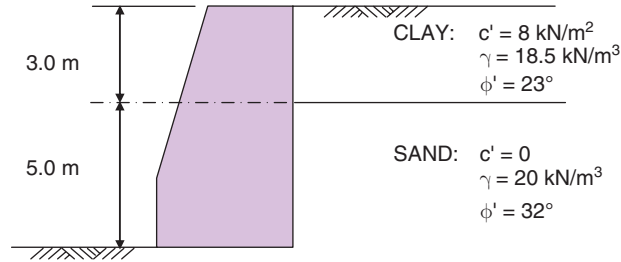


Fig. 7.32 Exercise 7.3.

Exercise 7.4

A soil has the following properties: $\gamma = 18 \text{ kN/m}^3$, $\phi' = 30^\circ$, $c' = 5 \text{ kPa}$. The soil is retained behind a 6 m high vertical wall and has a horizontal surface level with the top of the wall.

If $c'_w = 5 \text{ kPa}$ and $\delta = 15^\circ$, determine the total active horizontal thrust acting on the back of the wall:

- (i) with no surcharge acting on the retained soil;
- (ii) when the surface of the soil is subjected to a vertical uniformly distributed pressure of 30 kPa.

(Use the values of K_a and K_{ac} from the *earth pressure coefficients spreadsheet*)

Answer (i) 59.6 kN; (ii) 100.5 kN ($K_a = 0.29$ and $K_{ac} = 1.53$)

Chapter 8

Retaining Structures

8.1 Main types of retaining structures

Various types of retaining structures are used in civil engineering, the main ones being:

- mass construction gravity walls;
- reinforced concrete walls;
- crib walls;
- gabion walls;
- sheet pile walls;
- diaphragm walls;
- reinforced soil walls;
- soil nail walls.

The last two structures are different from the rest in that the soil itself forms part of these structures. Because of this fundamental difference, reinforced soil and soil nail walls are discussed separately at the end of this chapter.

Retaining structures are commonly used to support soils and structures to maintain a difference in elevation of the ground surface and are normally grouped into gravity walls or embedded walls.

8.2 Gravity walls

8.2.1 Mass construction gravity walls

This type of wall depends upon its weight for its stability and is built of such a thickness that the overturning effect of the lateral earth pressure that it is subjected to, does not induce the tensile stresses within it.

The walls are built in mass concrete or cemented precast concrete blocks, brick, stone, etc. and are generally used for low walls; they become uneconomic for high walls.

The cross-section of the wall is trapezoidal with a base width between 0.3 and $0.5h$, where h = the height of the wall. This base width includes any projections of the heel or toe of the wall, which are usually not more than 0.25m each and are intended to reduce the bearing pressure between the base of the wall and the supporting soil. If the wall is built of concrete, then its width at the top should be not less than 0.2m , and preferably 0.3m , to allow for the proper placement of the concrete.

8.2.2 Reinforced concrete walls

Cantilever wall

This wall has a vertical, or inclined, stem monolithic with a base slab and is suitable for heights of up to about 7m . Typical dimensions for the wall are given in Fig. 8.1. Its slenderness is possible as the tensile

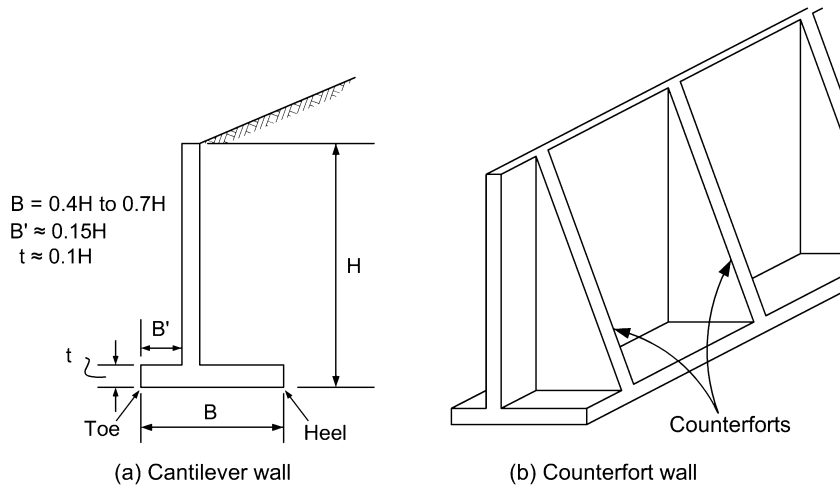


Fig. 8.1 Types of reinforced concrete retaining walls.

stresses within its stem and base are resisted by steel reinforcement. If the face of the wall is to be exposed then general practice is to provide it with a small backward batter of about 1 in 50 in order to compensate for any slight forward tilting of the wall.

Relieving platforms

A retaining wall is subjected to both shear and bending stresses caused by the lateral pressures induced from the soil that it is supporting. A mass construction gravity wall can take such stresses in its stride but this is not so for the vertical stem of a reinforced concrete retaining wall. If structural failure of the stem is to be avoided then it must be provided with enough steel reinforcement to resist the bending moment and to have a sufficient thickness to withstand the shear stresses, for all sections throughout its height.

It is this situation that imposes a practical height limitation of about 7 m on the wall stem of a conventional retaining wall. As a wall is increased in dimensions it becomes less flexible and the lateral pressures exerted on it by the soil will tend to be higher than the active values assumed in the design. It is possible therefore to enter a sort of upwards spiral – if a wall is strengthened to withstand increased lateral pressures then its rigidity is increased and the lateral pressures are increased – and so on.

A way out of the problem is the provision of one or more horizontal concrete slabs, or platforms, placed within the backfill and rigidly connected to the wall stem. A platform carries the weight of the material above it (up as far as the next platform if there are more than one). This vertical force exerts a cantilever moment on to the back of the wall in the opposite direction to the bending moment caused by the lateral soil pressure. The resulting bending moment diagram becomes a series of steps and the wall is subjected to a maximum bending moment value that is considerably less than the value when there are no platforms (Fig. 8.2).

With the reduction of bending moment values to a manageable level, the wall stem can be kept slim enough for the assumption of active pressure values to be realistic, with a consequential more economical construction.

Counterfort wall

This wall can be used for heights greater than about 6 m. Its wall stem acts as a slab spanning between the counterfort supports which are usually spaced at about $0.67H$ but not less than 2.5 m, because of construction considerations. Details of the wall are given in Fig. 8.1b.

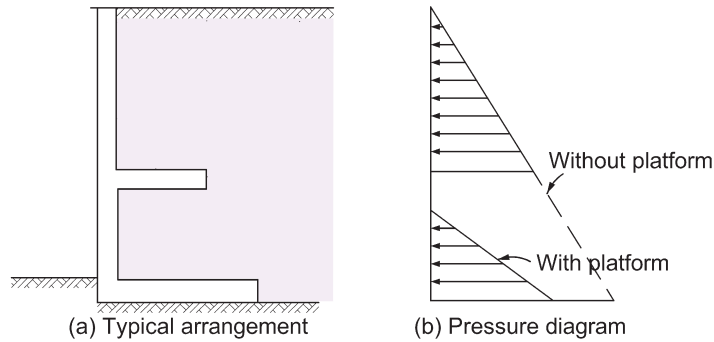


Fig. 8.2 Moment relief platforms.

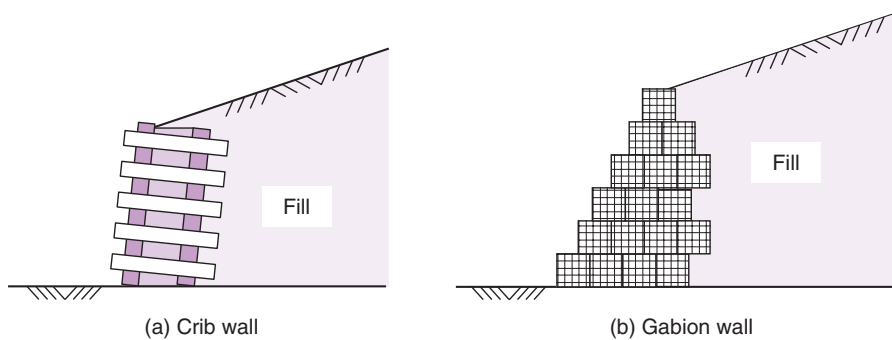


Fig. 8.3 Crib and gabion walls.

A form of the counterfort wall is the buttressed wall where the counterforts are built on the face of the wall and not within the backfill. There can be occasions when such a wall is useful but, because of the exposed buttresses, it can become unsightly and is not very popular.

8.2.3 Crib walls

Details of the wall are shown in Fig. 8.3a. It consists of a series of pens made up from prefabricated timber, precast concrete or steel members which are filled with granular soil. It acts like a mass construction gravity wall with the advantage of quick erection and, due to its flexible nature, the ability to withstand relatively large differential settlements. A crib wall is usually tilted so that its face has a batter of about 1 in 6. The width of the wall can vary from $0.5H$ to $1.0H$ and the wall is suitable for heights up to about 6.5 m. It is important to note that, apart from earth fill, a crib wall should not be subjected to surcharge loadings.

8.2.4 Gabion walls

A gabion wall is built of cuboid metal cages or baskets made up from a square grid of steel fabric, usually 5 mm in diameter and spaced 75 mm apart. These baskets are usually 2 m long and 1 m^2 in cross-section, filled with stone particles. A central diaphragm fitted in each metal basket divides it into two equal 1 m^3 sections, which adds stability. During construction, the stone-filled baskets are secured together with steel wire of 2.5 mm in diameter. The base of a gabion wall is usually about $0.5H$, and a typical wall is illustrated in Fig. 8.3b. It is seen that a front face batter can be provided by slightly stepping back each succeeding layer.

8.3 Embedded walls

Embedded walls rely on the passive resistance of the soil in front of the lower part of the wall to provide stability. Anchors or props, where incorporated, provide additional support.

8.3.1 Sheet pile walls

These walls are made up from a series of interlocking piles individually driven into the foundation soil. Most modern sheet pile walls are made of steel but earlier walls were also made from timber or precast concrete sections and may still be encountered. There are two main types of sheet pile walls: *cantilever and anchored*.

Cantilever wall

This wall is held in the ground by the active and passive pressures that act on its lower part (Fig. 8.12).

Anchored wall

This wall is fixed at its base, as is the cantilever wall, but it is also supported by a row, or two rows, of ties or struts placed near its top (Fig. 8.15).

8.3.2 Diaphragm walls

A diaphragm wall could be classed either as a reinforced concrete wall or as a sheet pile wall but it really merits its own classification. It consists of a vertical reinforced concrete slab fixed in position in the same manner as a sheet pile in that the lower section is held in place by the active and passive soil pressures that act upon it.

A diaphragm wall is constructed by a machine digging a trench in panels of limited length, filled with bentonite slurry as the digging proceeds to the required depth. This slurry has thixotropic properties, i.e. it forms into a gel when left undisturbed but becomes a liquid when disturbed. There is no penetration of the slurry into clays, and in sands and silts, water from the bentonite slurry initially penetrates into the soil and creates a virtually impervious skin of bentonite particles, only a few millimetres thick, on the sides of the trench. The reason for the slurry is that it creates lateral pressures which act on the sides of the short trench panel and thus prevents collapse. When excavation is complete the required steel reinforcement is lowered into position. The trench is then filled with concrete by means of a tremie pipe, the displaced slurry being collected for cleaning and further use.

The wall is constructed in alternating short panel lengths. When the concrete has developed sufficient strength, the remaining intermediate panels are excavated and constructed to complete the wall. The length of each panel is limited to the amount that the soil will arch, in a horizontal direction, to support the ground until the concrete has been placed.

The various construction stages are shown in a simplified form in Fig. 8.4.

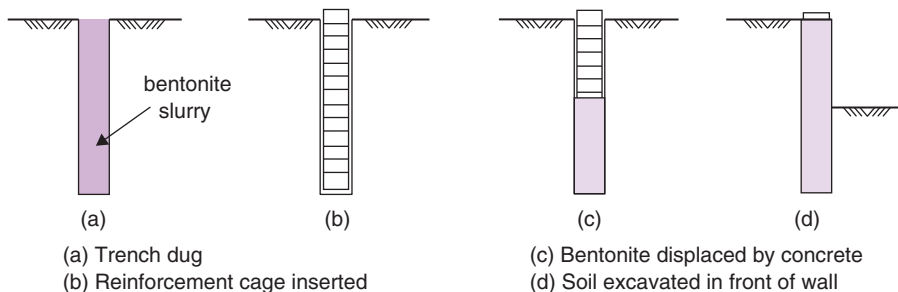


Fig. 8.4 The construction stages of a diaphragm wall.

8.3.3 Contiguous and secant bored pile walls

Contiguous bored pile walls

This type of wall is constructed from a single or double row of piles placed beside each other. Alternate piles are cast first and the intermediate piles are then installed. The construction technique allows gaps to be left between piles which can permit an inflow of water in granular conditions. The secant bored pile wall offers a watertight alternative.

Secant bored pile walls

The construction technique is similar to that of the contiguous bored pile wall, except that the alternate piles are drilled at a closer spacing. Then, while the concrete is still green, the intermediate holes are drilled along a slightly offset line so that the holes cut into the first piles. These holes are then concreted to create a watertight continuous wall.

8.4 Failure modes of retaining structures

Retaining structures are designed such that when constructed they will remain stable and support the ground that they are retaining. To enable the design to proceed, an understanding of the potential failure modes of the structure must be known. Common modes of failure, and how they are assessed using Eurocode 7, have been illustrated in Fig. 5.8. Additional examples of how different retaining structures might fail when considering: (i) their overall stability, (ii) failure of their foundation and (iii) their failure by rotation (embedded walls) are illustrated in Figures 8.5, 8.6 and 8.7.

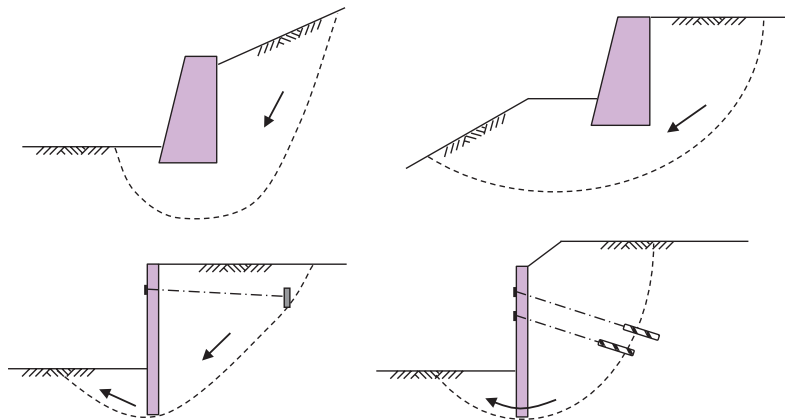


Fig. 8.5 Examples of limit modes for overall stability of retaining structure (based on Fig 9.1, EN 1997-1:2004).

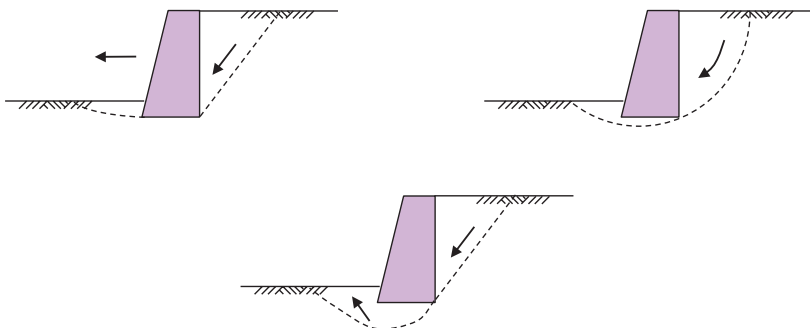


Fig. 8.6 Examples of limit modes for foundation failures of gravity walls (based on Fig 9.2, EN 1997-1:2004).

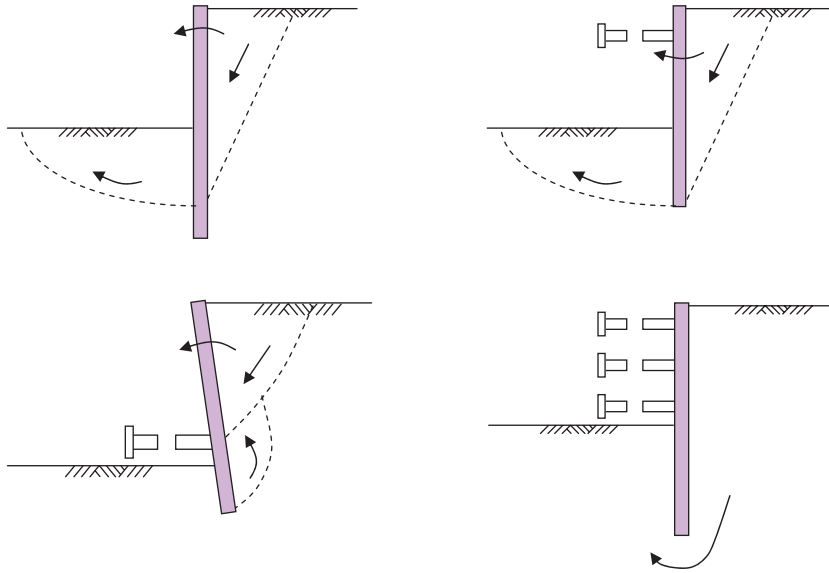


Fig. 8.7 Examples of limit modes for rotational failures of embedded walls (based on Fig 9.3, EN 1997-1:2004).

The traditional approach for the design of retaining structures involved establishing the ratio of the restoring moment (or force) to the disturbing moment (or force) and declaring this ratio as a factor of safety, for any of the situations illustrated in Figures 8.5, 8.6 and 8.7. This factor had to be high enough to allow for any uncertainties in the soil parameters used in the analysis, and the approach was generally referred to as the *factor of safety* or *gross pressure* approach. Example 8.2 illustrates the use of this method for a cantilever retaining wall. The limit state design approach set out in Eurocode 7 is of course now used instead.

8.5 Design of gravity retaining walls

8.5.1 Limit states

The following limit states should be considered:

- (1) Overturning (Figs. 5.8a and 5.8b). For a wall to be stable the resultant thrust must be within the base. Most walls are so designed that the thrust is within the middle third of the base.
- (2) Bearing failure of the soil beneath the structure (Fig. 5.8c). The overturning moment from the earth's thrust causes high bearing pressures at the toe of the wall. These values must be kept within safe limits – usually not more than one-third of the supporting soil's ultimate bearing capacity.
- (3) Forward sliding (Fig. 5.8d). Caused by insufficient base friction or lack of passive resistance in front of the wall.
- (4) Slip of the surrounding soil (Fig. 5.8e). This effect can occur in cohesive soils and can be analysed as for a slope stability problem.
- (5) Structural failure caused by faulty design, poor workmanship, deterioration of materials, etc. (Fig. 5.8f).
- (6) Excessive deformation of the wall or ground such that, adjacent structures or services reach their ultimate limit state.
- (7) Unfavourable seepage effects and the adequacy of any drainage system provided.

8.5.2 Bearing pressures on soil

The resultant of the forces due to the pressure of the soil retained and the weight of the wall subject the foundation to both direct and bending effects.

Let R be the resultant force on the foundation, per unit length, and let R_v be its vertical component (Fig. 8.8a). Considering unit length of wall:

$$\text{Section modulus of foundation} = \frac{B^2}{6}$$

$$\text{Maximum pressure on base} = \text{Direct pressure} + \text{pressure due to bending} = \frac{R_v}{B} + \frac{6R_v e}{B^2} = \frac{R_v}{B} \left(1 + \frac{6e}{B} \right)$$

$$\text{Minimum pressure on base} = \frac{R_v}{B} \left(1 - \frac{6e}{B} \right)$$

The formulae only applies when R_v is within the middle third; when R_v is on the middle third (Fig. 8.8b), then:

$$e = \frac{B}{6}$$

$$\Rightarrow \text{Maximum pressure} = \frac{2R_v}{B}, \quad \text{Minimum pressure} = 0$$

If the resultant R lies outside the middle third (Fig. 8.8c) the formulae become:

$$\text{Maximum pressure} = \frac{2R_v}{3x}; \quad \text{Minimum pressure} = 0$$

8.5.3 Base resistance to sliding

Granular soils and drained clays

The base resistance to sliding is equal to $R_v \tan \delta$ where δ is the angle of friction between the base of the wall and its supporting soil, and R_v is the vertical reaction on the wall base. In limit state design, the sliding

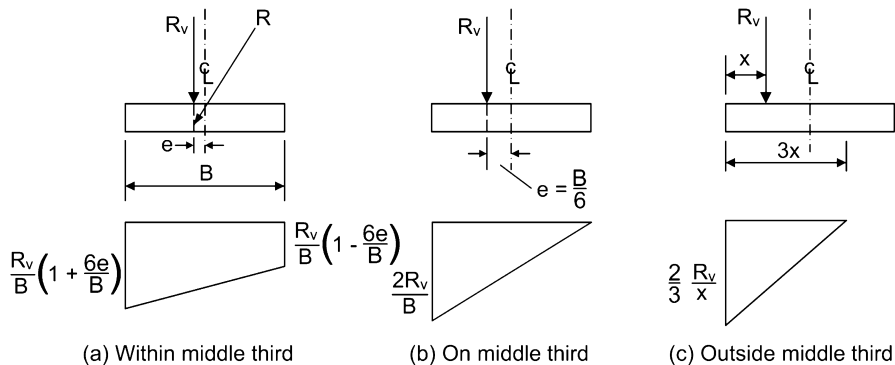


Fig. 8.8 Bearing pressures due to a retaining wall foundation.

limit state will be satisfied if the base resistance to sliding is greater than, or equal to, R_h , the horizontal component of the resultant force acting on the base. In the factor of safety approach, the ratio $(R_v \tan \delta)/R_h$ is determined to establish the factor of safety against sliding. It is common practice to take the passive resistance from any soil in front of a gravity wall as equal to zero, since this soil will be small in depth and in a disturbed state following construction of the wall.

(In the case of a drained clay any value of effective cohesion, c'_w will be so small that it is best ignored).

Undrained clays

The adhesion between the supporting soil and the base of a gravity or reinforced concrete wall can be taken as equal to the value c_w used in the determination of the active pressure values and based on the value of c_u :

$$\text{Resistance to sliding} = c_w \times \text{Area of base of wall}$$

8.5.4 Earth pressure coefficients

During the design of retaining walls it is often appropriate to use Rankine's K_a and K_p , such as in the case of cantilever gravity walls (see Example 8.2). However, when Rankine's conditions do not apply (e.g. where friction exists between wall and soil), Annex C of EN1997-1:2004 provides guidance and a set of charts that may be used to determine the horizontal components of K_a and K_p for a given δ/ϕ' ratio (the corrigendum to EN1997-1:2004, published in 2009, or the UK National Annex to EN1997-1:2004 should be used as the original EN1997-1:2004, contained some published errors). Charts for both horizontal and inclined retained surfaces are given, and the chart to determine the horizontal component of K_a for a horizontal ground surface behind the wall is redrawn in Fig. 8.9. The data on the charts are based on the work of Kerisel and Absi (1990), see Section 7.6.3.

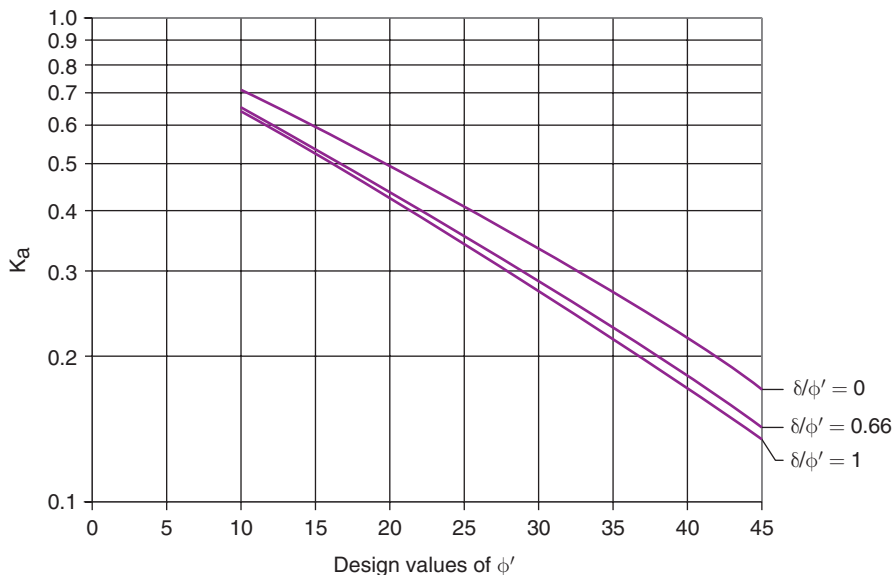


Fig. 8.9 Coefficients K_a (horizontal component) for horizontal retained surface (based on Fig. C.1.1 in EN1997-1:2004).

Example 8.1: Mass concrete wall; overturning and sliding by Eurocode 7

Check the proposed design of the mass concrete retaining wall shown in Fig. 8.10a. The wall is to be cast into the foundation soil to a depth of 1.0 m and will retain granular fill to a height of 4 m as shown. Take the unit weight of concrete as $\gamma_c = 24 \text{ kN/m}^3$ (from EN1991-1-1:2002) and ignore any passive resistance from the soil in front of the wall. Check the overturning and sliding limit states, using Design Approach 1.

Solution:

(a) Overturning:

Since the wall is founded into soil, the ground will contribute to the stability and therefore overturning is checked using the GEO limit state. For Design Approach 1 we must check both partial factor sets combinations.

1. Combination 1 (partial factor sets A1 + M1 + R1)

From Table 5.1: $\gamma_{G; unfav} = 1.35$; $\gamma_{G; fav} = 1.0$; $\gamma_Q = 1.5$; $\gamma_{\phi'} = 1.0$.

First, we determine the design material properties and the design actions:

(i) Design material properties:

Retained fill:

$$\phi'_d = \tan^{-1} \left(\frac{\tan \phi'}{\gamma_{\phi'}} \right) = \tan^{-1} \left(\frac{\tan 32^\circ}{1.0} \right) = 32^\circ$$

Eurocode 7 states that for concrete walls cast into the soil, δ should be taken as equal to the design value of ϕ , i.e. $\delta/\phi'_d = 1$. From Figure 8.9, the horizontal component of $K_a = 0.25$.

Foundation soil:

$$\phi'_d = \tan^{-1} \left(\frac{\tan \phi'}{\gamma_{\phi'}} \right) = \tan^{-1} \left(\frac{\tan 28^\circ}{1.0} \right) = 28^\circ$$

From Figure 8.9, the horizontal component of $K_a = 0.3$.

(ii) Design actions

The self-weight of the wall is a permanent, favourable action. Consider the wall as comprising three areas as indicated in Fig. 8.10a. The design weight of each area is determined:

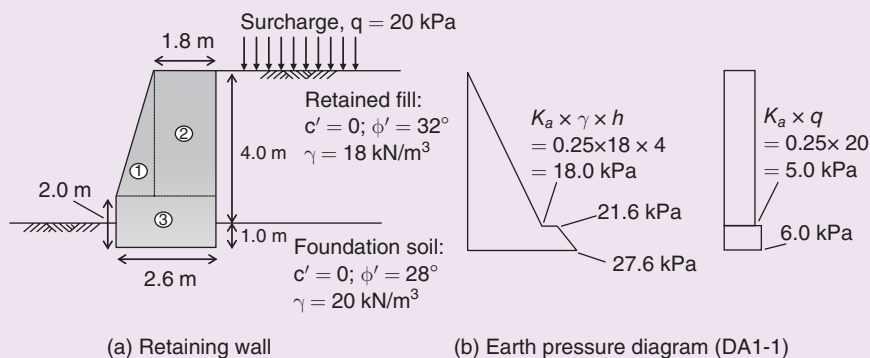


Fig. 8.10 Example 8.1.

$$\text{Area 1: } G_{W1;d} = \frac{1}{2} \times 0.8 \times 3 \times \gamma_{\text{concrete}} \times \gamma_{G,\text{fav}} = 1.2 \times 24 \times 1.0 = 28.8 \text{ kN}$$

$$\text{Area 2: } G_{W2;d} = 1.8 \times 3 \times \gamma_{\text{concrete}} \times \gamma_{G,\text{fav}} = 5.4 \times 24 \times 1.0 = 129.6 \text{ kN}$$

$$\text{Area 3: } G_{W3;d} = 2.6 \times 2 \times \gamma_{\text{concrete}} \times \gamma_{G,\text{fav}} = 5.2 \times 24 \times 1.0 = 124.8 \text{ kN}$$

The thrust from the active earth pressure behind the wall is a permanent, unfavourable action. Values of the active earth pressure are indicated on Fig. 8.10b.

$$P_{a;d}(\text{fill}) = \frac{1}{2} \times 18.0 \times 4 \times \gamma_{G,\text{unfav}} = 48.6 \text{ kN}$$

$$P_{a;d}(\text{foundation soil}) = \frac{1}{2} \times (21.6 + 27.6) \times 1.0 \times \gamma_{G,\text{unfav}} = 33.2 \text{ kN}$$

The lateral thrust from the surcharge is a variable, unfavourable action:

$$P_{q;d}(\text{fill}) = 5.0 \times 4 \times \gamma_Q = 30.0 \text{ kN}$$

$$P_{q;d}(\text{foundation soil}) = 6.0 \times 1.0 \times \gamma_Q = 9.0 \text{ kN}$$

(iii) *Design effect of actions and design resistance*

The effect of the actions is to cause the overturning moment about the toe of the wall. This is resisted by the stabilising moment from the self-weight of the wall.

Action	Magnitude of Action (kN)	Lever arm (m)	Moment (kNm)
Stabilising:			
Area 1	28.8	$\frac{2}{3} \times 0.8 = 0.53$	15.3
Area 2	129.6	$0.8 + \frac{1.8}{2} = 1.7$	220.3
Area 3	124.8	$\frac{2.6}{2} = 1.3$	162.2
	Total:		<u>397.8</u>
Destabilising:			
P_a (fill)	48.6	$1 + \frac{4}{3} = 2.33$	113.0
P_a (foundation soil)	33.2	$\frac{1.0(2 \times 21.6 + 27.6)}{3(21.6 + 27.6)} = 0.48$	15.9
P_q (fill)	30.0	$1.0 + \frac{4}{2} = 3.0$	90.0
P_q (foundation soil)	9.0	$\frac{1.0}{2} = 0.5$	4.5
	Total:		<u>223.4</u>

From the results it is seen that the limit state is satisfied since the sum of the design destabilising actions and effects (223.4 kNm) is less than the sum of the design stabilising actions and effects (397.8 kNm).

This result may be presented by the *over-design factor*, Γ :

$$\Gamma = \frac{397.8}{223.4} = 1.78$$

2. *Combination 2 (partial factor sets A2 + M2 + R1)*

The partial factors now are: $\gamma_{G; fav} = 1.0$; $\gamma_{G; unfav} = 1.0$; $\gamma_Q = 1.3$; $\gamma_{\phi'} = 1.25$. The calculations are the same as for Combination 1 except that this time these partial factors are used.

$$\text{Fill: } \phi'_d = \tan^{-1} \left(\frac{\tan \phi'}{\gamma_{\phi'}} \right) = \tan^{-1} \left(\frac{\tan 32^\circ}{1.25} \right) = 26.6^\circ$$

$$\text{Foundation soil: } \phi'_d = \tan^{-1} \left(\frac{\tan \phi'}{\gamma_{\phi'}} \right) = \tan^{-1} \left(\frac{\tan 28^\circ}{1.25} \right) = 23^\circ$$

Stabilising moments:

$$\begin{aligned} M_{A1} &= 15.4 \text{ kNm} \\ M_{A2} &= 220.3 \text{ kNm} \\ M_{A3} &= \underline{162.2 \text{ kNm}} \\ \text{Total} &= \underline{397.9 \text{ kNm}} \end{aligned}$$

Destabilising moments:

$$\begin{aligned} M_{P\text{fill}} &= 104.8 \text{ kNm} \\ M_{P\text{foundation}} &= 14.6 \text{ kNm} \\ M_{Q\text{fill}} &= 97.3 \text{ kNm} \\ M_{Q\text{foundation}} &= 4.8 \text{ kNm} \\ \text{Total} &= \underline{221.6 \text{ kNm}} \end{aligned}$$

Thus, the GEO limit state is satisfied and the over-design factor,

$$\Gamma = \frac{397.9}{221.6} = 1.80.$$

(b) Sliding:

As before we must check both partial factor sets combinations.

1. *Combination 1 (partial factor sets A1 + M1 + R1)*

From Table 5.1: $\gamma_{G; unfav} = 1.35$; $\gamma_{G; fav} = 1.0$; $\gamma_Q = 1.5$; $\gamma_{\phi'} = 1.0$.

(i) *Design material properties:*

The design values are determined as before:

Retained fill: $\phi'_d = \phi' = 32^\circ$; $K_a = 0.25$.

Foundation soil: $\phi'_d = \phi' = 28^\circ$; $K_a = 0.30$.

(ii) *Design actions:*

The design total weight of the wall is determined:

$$R_{v;d} = 28.8 + 129.6 + 124.8 = 283.2 \text{ kN}$$

The lateral thrusts are as before.

(iii) *Design effect of actions and design resistance:*

The effect of the actions is to cause forward sliding of the wall. This is resisted by the friction on the underside of the wall.

Total horizontal thrust, $R_{h;d} = 48.6 + 33.2 + 30.0 + 9.0 = 120.8 \text{ kN}$

Design resistance = $R_{v;d} \tan \gamma = 283.2 \times \tan 28^\circ = 150.6 \text{ kN}$ (since $\delta = \phi'$)

Thus the GEO limit state requirement is satisfied and the over-design factor,

$$\Gamma = \frac{150.6}{120.8} = 1.25.$$

2. Combination 2 (partial factor sets A2 + M2 + R1)

The partial factors are: $\gamma_{G, fav} = 1.0$; $\gamma_{G, unfav} = 1.0$; $\gamma_Q = 1.3$; $\gamma_{\phi'} = 1.25$. The calculations are the same as for Combination 1 except that this time these partial factors are used.

$$K_a(\text{fill}) = 0.31$$

$$K_a(\text{foundation soil}) = 0.37$$

$$R_{v,d} = 283.2 \text{ kN}$$

$$R_{h,d} = 44.9 + 30.4 + 32.5 + 9.7 = 117.5 \text{ kN}$$

$$R_{v,d} \tan \delta = 283.2 \times \tan 23^\circ = 120.2 \text{ kN}$$

Thus the GEO limit state is satisfied and the over-design factor,

$$\Gamma = \frac{120.2}{117.5} = 1.03.$$

Overview

The GEO limit state is satisfied for both checks and thus the proposed design of the wall is satisfactory. The lowest value of Γ obtained (in this case 1.03) governs the design.

Annex C of EN1997-1:2004 also gives formulae which may be used to determine separate active earth pressure coefficients for surcharge loadings (K_{aq}) and for cohesion in the soil (K_{ac}). Example 8.1 has no cohesion ($K_{ac} = 0$) but does have a surcharge. But, as the surface of the soil is horizontal, K_{aq} is equal to K_a .

Example 8.2: Strength and stability checks by traditional and Eurocode 7 approaches

The proposed design of a cantilever retaining wall is shown in Fig. 8.11. The unit weight of the concrete is 25 kN/m^3 (EN1991-1-1:2002) and the soil has weight density 18 kN/m^3 . The soil peak strength parameters are $\phi' = 38^\circ$, $c' = 0$ and the design bearing resistance of the soil beneath the wall has been calculated to be 250 kPa . The retained soil carries a uniform surcharge of intensity 10 kPa . Ignore any passive resistance from the soil in front of the wall.

Check the safety of the proposed design:

- by the traditional (gross pressure) method (assume coefficient of friction between base of wall and soil to equal $\tan \phi'_{\text{peak}}$;
- against the GEO (Design Approach 1) limit state of Eurocode 7.

Solution:

Note: When the retained soil is supported by a heel, the design assumes a virtual plane as shown in Figure 8.11a provided that the heel width, b satisfies the inequality.

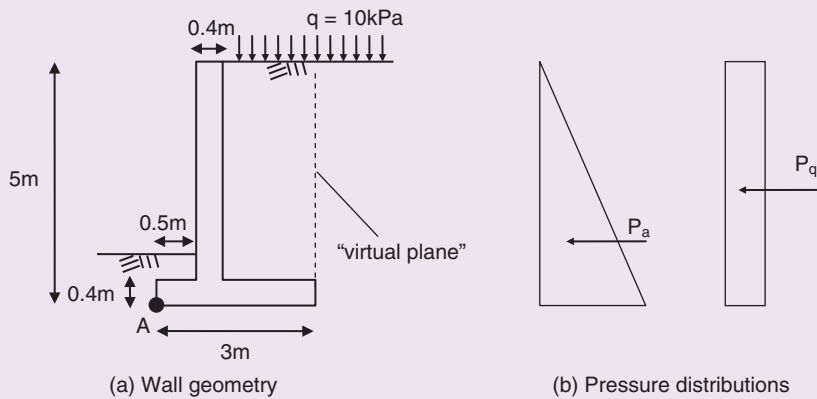


Fig. 8.11 Example 8.2.

$$b \geq h \tan\left(45^\circ - \frac{\phi'}{2}\right)$$

If the heel width satisfies the above inequality (it does in this example), Rankine's conditions apply along this face and the earth pressures acting here are established in the design.

(a) Gross pressure method

Sliding:

Using Rankine's theory (with $\phi' = 38^\circ$) $K_a = 0.238$

$$\text{Active thrust from soil, } P_a = \frac{1}{2} K_a \gamma h^2 = \frac{1}{2} \times 0.238 \times 18 \times 5^2 = 53.6 \text{ kN}$$

$$\text{Active thrust due to surcharge, } P_q = K_a q h = 0.238 \times 10 \times 5 = 11.9 \text{ kN}$$

$$\sum H = 65.5 \text{ kN}$$

$$\begin{aligned} \text{Vertical reaction, } R_v &= \text{weight of base} + \text{weight of stem} + \text{soil on heel (incl. surcharge)} \\ &= 25(0.4 \times 3.0) + 25(0.4 \times 4.6) + 18(2.1 \times 4.6) + (10 \times 2.1) \\ &= 30.0 + 46.0 + 173.9 + 21.0 \\ &= 270.9 \text{ kN} \end{aligned}$$

$$\text{Total force causing sliding, } R_h = 65.5 \text{ kN}$$

$$\text{Force resisting sliding} = R_v \tan \delta = 270.9 \times \tan 38^\circ = 211.7 \text{ kN}$$

$$\text{Factor of safety against sliding, } F_s = \frac{211.7}{65.5} = 3.2$$

Overtuning:

Taking moments about point A, the toe of the wall.

Disturbing moment, M_D :

$$\begin{aligned} M_D &= P_a \times \left(\frac{5}{3}\right) + P_q \times \left(\frac{5}{2}\right) \\ &= 89.3 + 29.8 \\ &= 119.1 \text{ kNm} \end{aligned}$$

Resisting moment, M_R

$$\text{Due to base} = 30.0 \times 1.5 = 45.0 \text{ kNm}$$

$$\text{Due to stem} = 46.0 \times 0.7 = 32.2 \text{ kNm}$$

$$\text{Due to soil on heel} = 194.9 \times 1.95 = 380.1 \text{ kNm}$$

$$M_R = 45.0 + 32.2 + 380.1 = 457.3 \text{ kNm}$$

$$\text{Factor of safety against overturning, } F_o = \frac{457.3}{119.1} = 3.8$$

Bearing capacity:

Consider moments about point A.

If R_v acts at a distance x from A, then

$$R_v x = 457.3 - 119.1 = 338.2 \text{ kNm}$$

that is

$$x = \frac{338.2}{270.9} = 1.25 \text{ m (within middle third of base)}$$

$$\text{Eccentricity of } R_v, e = \frac{3}{2} - 1.25 = 0.25 \text{ m}$$

$$\text{Maximum bearing pressure} = \frac{R_v}{B} \left(1 + \frac{6e}{B} \right) = \frac{270.9}{3} \left(1 + \frac{6 \times 0.25}{3} \right) = 135.5 \text{ kPa}$$

$$\text{Factor of safety against bearing capacity failure, } F_b = \frac{250}{135.5} = 1.85$$

(b) Eurocode 7

For the overall stability of the wall, once again we check safety against the GEO limit state.

1. *Combination 1 (partial factor sets A1 + M1 + R1)*

From Table 5.1: $\gamma_{G, \text{unfav}} = 1.35$; $\gamma_{G, \text{fav}} = 1.0$; $\gamma_Q = 1.5$; $\gamma_{\phi'} = 1.0$.

(i) *Design material properties*

$$\phi'_d = 38^\circ: \text{Using Rankine's theory, } K_a = \frac{1 - \sin \phi_d}{1 + \sin \phi_d} = 0.238.$$

(ii) *Design actions*

In sliding and overturning, the weight of the wall is a permanent, favourable action. The influence of the surcharge on the soil on the heel is ignored since transient (variable) actions can never be considered favourable.

$$\text{Stem: } G_{\text{stem};d} = 0.4 \times 4.6 \times \gamma_{\text{concrete}} \times \gamma_{G,\text{fav}} = 1.84 \times 25 \times 1.0 = 46.0 \text{ kN}$$

$$\text{Base: } G_{\text{base};d} = 0.4 \times 3.0 \times \gamma_{\text{concrete}} \times \gamma_{G,\text{fav}} = 1.2 \times 25 \times 1.0 = 30.0 \text{ kN}$$

$$\text{Soil on heel: } G_{\text{heel};d} = 2.1 \times 4.6 \times \gamma \times \gamma_{G,\text{fav}} = 9.66 \times 18 \times 1.0 = 173.9 \text{ kN}$$

$$\text{Total, } R_{v;d}: 249.9 \text{ kN}$$

The thrust from the active earth pressure is a permanent, unfavourable action.

$$P_{a;d} = \frac{1}{2} \times 0.238 \times 18 \times 5^2 \times \gamma_{G,\text{unfav}} = 72.3 \text{ kN}$$

The lateral thrust from the surcharge is a variable, unfavourable action.

$$P_{q;d} = 0.238 \times 10 \times 5 \times \gamma_Q = 17.8 \text{ kN}$$

(iii) *Design effect of actions and design resistance*

Sliding:

$$\text{Total horizontal thrust, } R_{h;d} = 72.3 + 17.8 = 90.1 \text{ kN}$$

$$\text{Design resistance} = R_{v;d} \tan \delta = 249.9 \times \tan 38^\circ = 195.2 \text{ kN} \quad (\text{since } \delta = \phi')$$

The GEO limit state requirement for sliding is satisfied and the over-design factor

$$\Gamma = \frac{195.2}{90.1} = 2.17$$

Overturning:

$$\text{Destabilising moment, } M_{dst} = 72.3 \times \left(\frac{5}{3}\right) + 17.8 \times \left(\frac{5}{2}\right) = 165.0 \text{ kNm}$$

$$\text{Stabilising moment, } M_{stb} = 46.0 \times 0.7 + 30.0 \times 1.5 + 173.9 \times 1.95 = 416.3 \text{ kNm}$$

The GEO limit state requirement for overturning is satisfied since $M_{dst} < M_{stb}$, and the over-design factor

$$\Gamma = \frac{416.3}{165.0} = 2.52$$

Bearing:

From above, destabilising moment = 165.0 kNm

Stabilising moment:

The weight of the wall, R_v is now considered as an unfavourable action and includes the surcharge acting on the soil on the heel:

$$M_{stb} = M_{stem} + M_{base} + M_{heel} \\ = (46.0 \times 0.7 + 30.0 \times 1.5 + 173.9 \times 1.95) \times \gamma_{G;unfav} + (21.0 \times 1.95) \times \gamma_Q = 623.4 \text{ kNm}$$

$$R_{v;d} = (46.0 + 30.0 + 173.9) \times \gamma_{G;unfav} + 21.0 \times \gamma_Q = 368.9 \text{ kN}$$

$$\text{Lever arm of } R_{v;d}, x = \frac{623.4 - 165.0}{368.9} = 1.24 \text{ m (within middle third of base)}$$

$$\text{Eccentricity, } e = 1.5 - 1.24 = 0.26 \text{ m}$$

$$\text{Maximum bearing pressure} = \frac{R_{v;d}}{B} \left(1 + \frac{6e}{B}\right) = \frac{368.9}{3.0} \left(1 + \frac{6 \times 0.26}{3.0}\right) = 186.9 \text{ kPa}$$

The GEO limit state requirement for bearing is satisfied and the over-design factor

$$\Gamma = \frac{250}{186.9} = 1.34$$

2. Combination 2 (partial factor sets A2 + M2 + R1)

The calculations are the same as for Combination 1 except that this time the following partial factors (from Table 5.1) are used: $\gamma_{G;unfav} = 1.0$; $\gamma_{G;fav} = 1.0$; $\gamma_{Q;dst} = 1.3$; $\gamma_{\phi'} = 1.25$. The favourable actions are the same as for Combination 1 since $\gamma_{G;fav} = 1.0$.

$$\phi'_d = \tan^{-1} \left(\frac{\tan \phi'}{\gamma_{\phi'}} \right) = \tan^{-1} \left(\frac{\tan 38^\circ}{1.25} \right) = 32^\circ; K_a = 0.307$$

Sliding:

$$R_{v,d} = 249.9 \text{ kN}$$

$$R_{h,d} = 69.1 + 20.0 = 89.1 \text{ kN}$$

$$R_{v,d} \tan \delta = 249.9 \times \tan 32^\circ = 156.2 \text{ kN}$$

The GEO limit state requirement for sliding is satisfied and the over-design factor

$$\Gamma = \frac{156.2}{89.1} = 1.75.$$

Overturning:

Destabilising moment:

$$\text{Destabilising moment, } M_{\text{dst}} = 69.1 \times \left(\frac{5}{3} \right) + 20.0 \times \left(\frac{5}{2} \right) = 165.2 \text{ kNm}$$

$$\text{Stabilising moment, } M_{\text{stb}} = 416.3 \text{ kNm}$$

The GEO limit state requirement for overturning is satisfied and $\Gamma = \frac{416.3}{165.2} = 2.52$

Bearing:

$$\begin{aligned} M_{\text{stb}} &= M_{\text{stem}} + M_{\text{base}} + M_{\text{heel}} \\ &= (46.0 \times 0.7 + 30.0 \times 1.5 + 173.9 \times 1.95) \times \gamma_{G,\text{unfav}} + (21.0 \times 1.95) \times \gamma_Q = 469.5 \text{ kNm} \end{aligned}$$

$$R_{v,d} = (46.0 + 30.0 + 173.9) \times \gamma_{G,\text{unfav}} + 21.0 \times \gamma_Q = 277.2 \text{ kN}$$

$$\text{Lever arm of } R_{v,d}, x = \frac{469.5 - 165.2}{277.2} = 1.1 \text{ m (within middle third of base)}$$

$$\text{Eccentricity, } e = 1.5 - 1.1 = 0.4 \text{ m}$$

$$\text{Maximum bearing pressure} = \frac{R_{v,d}}{B} \left(1 + \frac{6e}{B} \right) = \frac{277.2}{3.0} \left(1 + \frac{6 \times 0.4}{3.0} \right) = 166.3 \text{ kPa}$$

The GEO limit state requirement for bearing is satisfied and the over-design factor

$$\Gamma = \frac{250}{166.3} = 1.50.$$

8.6 Design of sheet pile walls

A sheet pile wall is a flexible structure which depends for stability upon the passive resistance of the soil in front of and behind the lower part of the wall. Stability also depends on the anchors when incorporated.

Retaining walls of this type differ from other walls in that their weight is negligible compared with the remaining forces involved. Design methods usually neglect the effect of friction between the soil and the wall, but this omission is fairly satisfactory when determining active pressure values. It should be remembered however, that the effect of wall friction can almost double the Rankine value of K_p .

8.6.1 Cantilever walls

Sheet pile walls are flexible and sufficient yield will occur in a cantilever wall to give totally active earth pressure conditions (Fig. 8.12).

Let the height of the wall be h , and suppose it is required to find the depth of embedment, d , that will make the wall stable. For equilibrium the active pressure on the back of the wall must be balanced by the passive pressure both in front of and behind the wall. If an arbitrary point C is chosen and it is assumed that the wall will rotate outwards about this point, the theoretical pressure distribution on the wall is as shown in Fig. 8.12c. The toe of the wall (point D, Fig. 8.12a) is deep enough such that the conditions that prevail are known as *fixed earth* conditions.

Limit state design method to establish required design depth

The depth, d , is obtained by balancing the disturbing and restoring moments about C, together with the horizontal forces established using the pressure distribution shown in Fig. 8.12c. In Eurocode 7 the GEO

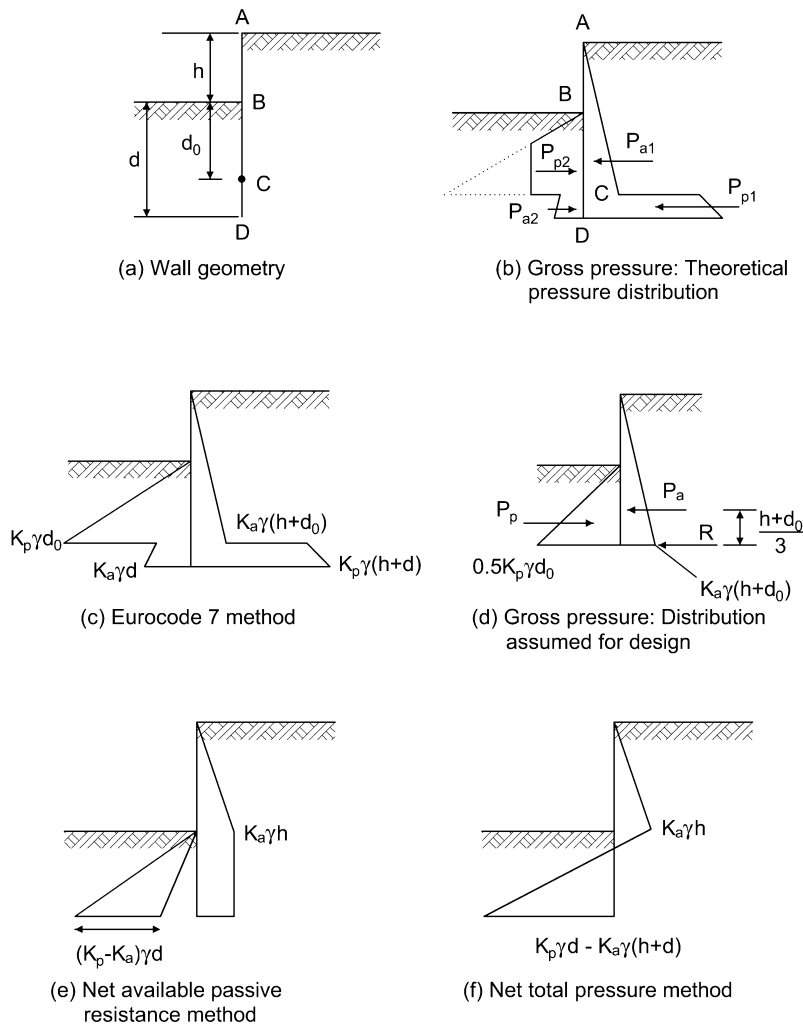


Fig. 8.12 Pressure distribution on sheet pile wall.

limit state is applied to assess the rotational stability using this theoretical pressure distribution. The method generates two equations containing the unknowns d and d_0 , which are solved by repeated iteration until the correct values are obtained.

Example 8.3 illustrates the design of a cantilever sheet pile wall using the GEO limit state.

Traditional methods

Various traditional methods of design exist and some are still in use. Each involves the determination of an overall factor of safety for passive resistance, F_p , based on different lateral earth pressure distributions. The methods are described in detail by Padfield and Mair (1984).

(1) Gross pressure method

The method is also referred to as the CP2 method, after the Institution of Structural Engineers' original Code of Practice published in 1951. It is very unlikely that the full passive resistance for the soil in front of the wall will be developed. Common practice is to divide the total theoretical value of thrust $K_p \gamma d^2/2$ by a factor of safety, traditionally taken as $F_p = 2.0$. The effective passive resistance in front of the wall is therefore assumed to have a magnitude of $K_p \gamma d^2/4$ and is of trapezoidal distribution, the centre of pressure of this trapezium lying between $d/2$ and $d/3$ above the base of the pile (for ease of calculation the value is generally taken as $d/3$). It is common to use lower values of F_p for low values of ϕ' . Padfield and Mair (1984) recommend the values given in Table 8.1.

Table 8.1 Acceptable F_p values for ranges of ϕ' (Padfield and Mair, 1984).

ϕ' (degrees)	F_p
>30	2.0
20–30	1.5–2.0
<20	1.5

Calculations are considerably simplified if it is assumed that the passive resistance on the back of the wall, P_{p1} , acts as a concentrated load, R , on the foot of the pile, leading to the pressure distribution shown in Fig. 8.12d, from which d can be obtained by taking moments of thrusts about the base of the pile. The value of d obtained by this method is more nearly the value of d_0 in Fig. 8.12a, the customary practice being to increase the value of d by 20% to allow for this effect.

(2) Net available passive resistance method

The method is also referred to as the Burland, Potts and Walsh method after Burland *et al.* (1981). They advocate a modified pressure distribution (Fig. 8.12e) with the effect that the factor of safety is applied to the net available passive resistance.

(3) Net total pressure method

This was advocated by British Steel in the *British Steel piling handbook* (1997), where the net horizontal pressure distribution is used (Fig. 8.12f). The pressure distribution is derived by subtracting the active earth and water pressures from the passive earth and water pressures.

8.6.2 Dealing with passive earth pressure

There is a question over how passive pressure should be treated when using the Eurocode 7 GEO limit state, as it could be regarded as either a *favourable action* or as a *resistance*.

i.e. to establish the design passive resistance we have either:

$$P_{p;d} = P_{p;k} \times \gamma_{G;fav}$$

or

$$P_{p;d} = \frac{P_{p;k}}{\gamma_{Re}}$$

The values of both $\gamma_{G;fav}$ and γ_{Re} for each design approach, taken from Table 5.1, are presented in Table 8.2. From the table it is clear that the question is only of concern when using Design Approach 2. For the other design approaches both $\gamma_{G;fav}$ and γ_{Re} are 1.0 and thus $P_{p;d}$ will be equal to $P_{p;k}$.

The prevailing view (Schuppener, 2008) is that the passive thrust for gravity walls should be treated as a resistance, thus even the concern when using Design Approach 2 is addressed. Further, it could be argued that once consideration has been given for an unplanned excavation, the contribution to stability from any passive resistance will be small and could, conservatively, be ignored.

However, the question gains a bit of additional confusion when considering embedded walls. Recalling that the purpose of a partial factor of safety is to allow for the uncertainty in the derived characteristic value, then any design action (e.g. active thrust) determined from a soil property (e.g. angle of shearing resistance, ϕ') will contain the same degree of uncertainty in its value as any other action (e.g. passive thrust) which is determined from the same soil property. In the case of an embedded wall where the same soil exists on both sides of the wall, this means that the uncertainty in the active thrust (taken up by the application of the permanent, unfavourable partial factor, $\gamma_{G,unfav}$) must be the same as that in the passive thrust. We must therefore consider the passive thrust also to be a permanent, unfavourable action. This follows from the *Single Source Principle* in which actions coming from the same source must be combined with a single partial factor of safety. Indeed EN 1997-1:2004 states the following:

NOTE: Unfavourable (or destabilising) and favourable (or stabilising) permanent actions may in some situations be considered as coming from a single source. If they are considered so, a single partial factor may be applied to the sum of these actions or to the sum of their effects.

Table 8.3 updates Table 8.2 with the inclusion of the permanent, unfavourable partial factors, $\gamma_{G,unfav}$.

Table 8.2 Values of $\gamma_{G;fav}$ and γ_{Re} for each design approach.

	Design Approach			
	1		2	3
	Combination 1	Combination 2		
$\gamma_{G;fav}$	1.0	1.0	1.0	1.0
γ_{Re}	1.0	1.0	1.4	1.0

Table 8.3 Values of $\gamma_{G;fav}$, $\gamma_{G,unfav}$ and γ_{Re} for each design approach.

	Design Approach			
	1		2	3
	Combination 1	Combination 2		
$\gamma_{G;fav}$	1.0	1.0	1.0	1.0
$\gamma_{G,unfav}$	1.35	1.0	1.35	1.0
γ_{Re}	1.0	1.0	1.4	1.0

Now we see that treating the passive thrust as a permanent, unfavourable action affects Design Approach 1 (Combination 1) and Design Approach 2. In the UK where Design Approach 1 is adopted, the earth resistance partial factor $\gamma_{Re} = 1.0$ and thus it is appropriate to treat passive pressure as a permanent, unfavourable action since the thrust derives from the same source as the active pressure and the level of uncertainty in its value is the same (i.e. application of single source principle).

Example 8.3: Cantilever sheet pile wall

Calculate the minimum depth of embedment, d , to provide stability to a cantilever sheet pile wall, retaining an excavated depth of 5 m using:

- (a) Eurocode 7 GEO limit state, Design Approach 1;
- (b) Gross pressure method.

The soil properties are $\phi'_{peak} = 30^\circ$, $c' = 0$, $\gamma = 20\text{kN/m}^3$.

Solution:

The problem is illustrated in Fig. 8.13a.

- (a) Eurocode 7, GEO Limit State, Design Approach 1

Allowance is made for a future unplanned excavation Δa equal to 10% of the clear height (=0.5 m). The pressure distribution is shown in Fig. 8.13b.

- 1. *Combination 1 (partial factor sets A1 + M1 + R1)*

From Table 5.1: $\gamma_{G; unfav} = 1.35$; $\gamma_{\phi'} = 1.0$.

$$\phi'_d = \tan^{-1}\left(\frac{\tan\phi'}{\gamma_{\phi'}}\right) = \tan^{-1}\left(\frac{\tan 30^\circ}{1.0}\right) = 30^\circ$$

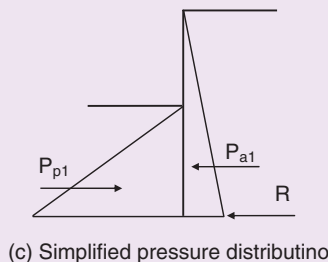
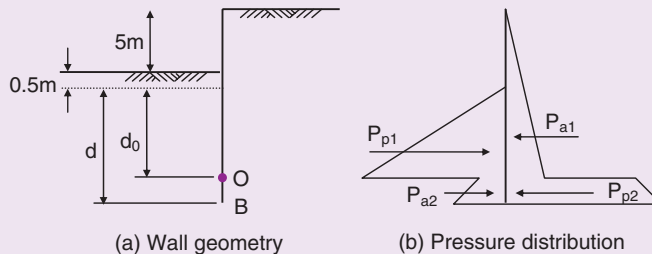


Fig. 8.13 Example 8.3.

Using Rankine's theory, $K_a = 0.333$, $K_p = 3.0$

(It is appropriate to use Rankine's theory as the steel sheet piling can be assumed to be smooth and thus no friction exists between wall and soil).

The earth pressures acting at the salient points in the distribution are established.

Behind wall:

$$p_{a,O} = 0.333 \times 20 \times (d_0 + 5.5) = 6.67(d_0 + 5.5) \text{ kPa}$$

$$p_{p,O} = 3.0 \times 20 \times (d_0 + 5.5) = 60(d_0 + 5.5) \text{ kPa}$$

$$p_{p,B} = 3.0 \times 20 \times (d + 5.5) = 60(d + 5.5) \text{ kPa}$$

In front of wall:

$$p_{p,O} = 3.0 \times 20 \times d_0 = 60d_0 \text{ kPa}$$

$$p_{a,O} = 0.333 \times 20 \times d_0 = 6.67d_0 \text{ kPa}$$

$$p_{a,B} = 0.333 \times 20 \times d = 6.67d \text{ kPa}$$

Design actions:

The active thrust due to the earth pressure is a permanent, unfavourable action:

$$P_{a1;d} = \frac{1}{2} \times 6.67(d_0 + 5.5) \times (d_0 + 5.5) \times \gamma_{G,\text{unfav}} = 3.33(d_0 + 5.5)^2 \times 1.35 = 4.5(d_0 + 5.5)^2$$

$$P_{a2;d} = \frac{1}{2} \times (6.67d_0 + 6.67d) \times (d - d_0) \times \gamma_{G,\text{unfav}} = 4.5(d_0 + d) \times (d - d_0) = 4.5(d^2 - d_0^2)$$

The passive pressures is treated as a permanent, unfavourable action:

$$P_{p1;d} = \frac{1}{2} \times 60d_0 \times d_0 \times \gamma_{G,\text{unfav}} = 40.5d_0^2$$

$$P_{p2;d} = \frac{1}{2} \times (60(d + 5.5) + 60(d_0 + 5.5)) \times (d - d_0) \times \gamma_{G,\text{unfav}} \\ = 40.5(d - d_0)[(d + 5.5) + (d_0 + 5.5)] = 40.5(d^2 - d_0^2) + 445.5(d - d_0)$$

Effect of actions:

Consider moments about point O.

	Force (kN)	Lever arm (m)	Moment (kNm)
$P_{a1;d}$	$4.5(d_0 + 5.5)^2$	$\frac{(d_0 + 5.5)}{3}$	$1.5(d_0 + 5.5)^3$
$P_{a2;d}$	$4.5(d^2 - d_0^2)$	$\frac{(d - d_0)(2d + d_0)}{3(d + d_0)}^\dagger$	$\frac{1.5 \times (d^2 - d_0^2)(d - d_0)(2d + d_0)}{(d + d_0)}$
$P_{p1;d}$	$40.5d_0^2$	$\frac{d_0}{3}$	$13.5d_0^3$
$P_{p2;d}$	$40.5(d^2 - d_0^2) + 445.5(d - d_0)$	$\frac{(d - d_0)(2d + d_0 + 16.5)}{3(d + d_0 + 11)}^\dagger$	$[40.5(d^2 - d_0^2) + 445.5(d - d_0)] \\ \times \left[\frac{(d - d_0)(2d + d_0 + 16.5)}{3(d + d_0 + 11)} \right]$

[†]These formulae are established from the fact that the thrust acts through the centroid of a trapezoidal shaped part of the pressure distribution. The lever arm is equal to $\frac{(d - d_0)(2p_{p,B} + p_{p,O})}{3(p_{p,O} + p_{p,B})}$. For a simplistic approach, the thrust

could be considered as acting at mid-height, i.e. lever arm $\approx \frac{(d - d_0)}{2}$.

d and d_0 are obtained by resolving the moment and force equilibrium equations, which necessitates the use of a programmable calculator or spreadsheet such as the spreadsheet *Example 8.3.xls*, available for download:

$$\Sigma M_O = 0$$

$$M_{Pp1} + M_{Pp2} - M_{Pa1} - M_{Pa2} = 0$$

$$13.5d_0^3 + [40.5(d^2 - d_0^2) + 445.5(d - d_0)] \times \left[\frac{(d - d_0)(2d + d_0 + 16.5)}{3(d + d_0 + 11)} \right] - 1.5(d_0 + 5.5)^3 - \frac{1.5 \times (d^2 - d_0^2)(d - d_0)(2d + d_0)}{(d + d_0)} = 0 \quad (1)$$

$$\Sigma H = 0$$

$$\text{i.e. } P_{p1;d} + P_{a2;d} - P_{a1;d} - P_{p2;d} = 0$$

$$40.5d_0^2 + 4.5(d^2 - d_0^2) - 4.5(d_0 + 5.5)^2 - [40.5(d^2 - d_0^2) + 445.5(d - d_0)] = 0 \quad (2)$$

Equations (1) and (2) solve for:

$$d_0 = 5.0 \text{ m}$$

$$d = 5.3 \text{ m}$$

2. Combination 2 (partial factor sets A2 + M2 + R1)

The calculations are the same as for Combination 1 except that this time the following partial factors are used: $\gamma_{G; \text{unfav}} = 1.0$; $\gamma_{\phi'} = 1.25$.

The following expressions are then derived ($K_a = 0.409$; $K_p = 2.444$):

$$\Sigma M_O = 0$$

$$M_{Pp1} + M_{Pp2} - M_{Pa1} - M_{Pa2} = 0$$

$$8.13d_0^3 + [24.4(d^2 - d_0^2) + 268.4(d - d_0)] \times \left[\frac{(d - d_0)(2d + d_0 + 16.5)}{3(d + d_0 + 11)} \right] - 1.36(d_0 + 5.5)^3 - \frac{1.36 \times (d^2 - d_0^2)(d - d_0)(2d + d_0)}{(d + d_0)} = 0 \quad (1)$$

$$\Sigma H = 0$$

$$\text{i.e. } P_{p1;d} + P_{a2;d} - P_{a1;d} - P_{p2;d} = 0$$

$$24.4d_0^2 + 4.09(d^2 - d_0^2) - 4.09(d_0 + 5.5)^2 - [24.4(d^2 - d_0^2) + 268.4(d - d_0)] = 0 \quad (2)$$

Using *Example 8.3.xls*:

$$d_0 = 6.4 \text{ m}$$

$$d = 7.2 \text{ m}$$

(b) Gross pressure method

In the gross pressure method, the net passive resistance below the point of rotation is replaced by the horizontal force R, as shown in Fig. 8.14.

Using Rankine's theory (with $\phi' = 30^\circ$) $K_a = \frac{1}{3}$; $K_p = 3.0$.

	Force (kN)	Lever arm (m)	Moment (kN m)
P_a	$\frac{20}{2 \times 3}(5 + d_0)^2$	$\frac{(5 + d_0)}{3}$	$\frac{10}{9}(5 + d_0)^3$
P_p	$15d_0^2$	$\frac{d_0}{3}$	$5d_0^3$

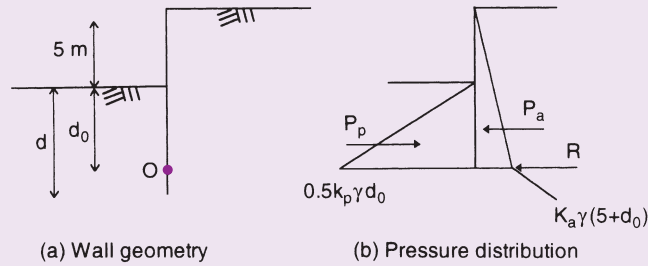


Fig. 8.14 Example 8.3.

Minimum depth is required, and since $F_p = 2.0$ has already been applied to the pressure distribution (see Section 8.6.1),

$$\frac{5d_0^3}{9(5+d_0)^3} = \frac{9d_0^3}{2(5+d_0)^3} = 1$$

$$d_0 = 7.7 \text{ m}$$

To obtain the design depth, d , d_0 is increased by an amount equal to the extent required to generate a net passive resistance force below the point of rotation at least as large as R . (R is obtained from simple horizontal force equilibrium). This demands additional calculations and it is common practice to avoid this by simply increasing d_0 by 20 per cent to give d .

$$\text{i.e., } d = d_0 \times 1.2 = 7.7 \times 1.2 = 9.24 \text{ m.}$$

8.6.3 Anchored and propped walls

When the top of a sheet pile wall is anchored, a considerable reduction in the embedment depth can be obtained. Due to this anchorage the lateral yield in the upper part of the wall is similar to the yield in a timbered trench (see Section 8.7), whereas in the lower part the yield is similar to that of a retaining wall yielding by rotation. As a result the pressure distribution on the back of an anchored sheet pile is a combination of the totally active and the arching-active cases, the probable pressure distribution is indicated in Fig. 8.15b. In practice the pressure distribution behind the wall is assumed to be totally active.

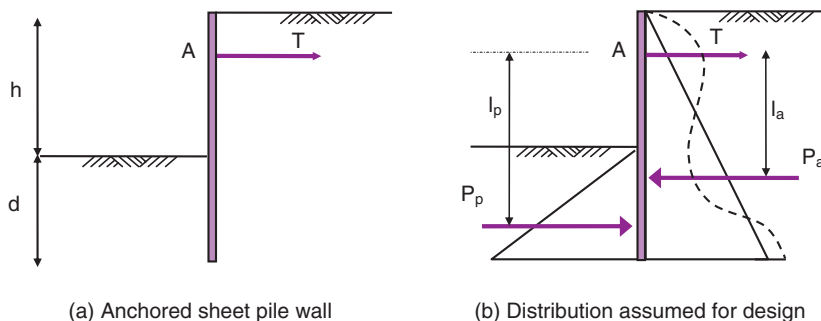


Fig. 8.15 Free earth support method for anchored sheet piled walls.

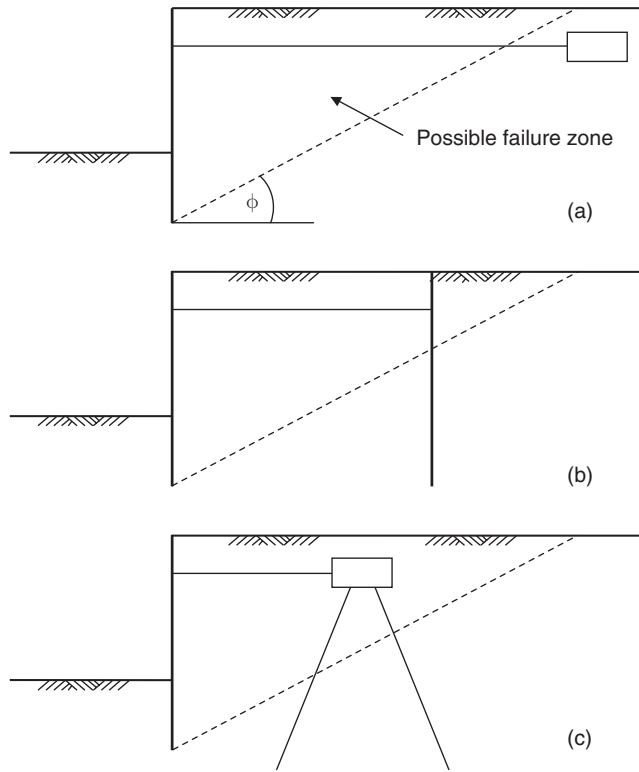


Fig. 8.16 Anchorage systems for sheet pile walls.

The anchor or prop force required can be obtained by equating horizontal forces: $T = P_a - P_p$, from which a value is obtained per metre run of wall. The resulting value of T is increased by 25% to allow for flexibility in the piling and arching in the soil. Anchors are usually spaced at 2–3 m intervals and secured to stiffening wales.

Anchorage can be obtained by the use of additional piling or by anchor blocks (large concrete blocks in which the tie is embedded). Any anchorage block must be outside the possible failure plane (Fig. 8.16a), and when space is limited piling becomes necessary (Fig. 8.16b). If bending is to be avoided in the anchorage pile, then a pair of raking piles can be used (Fig. 8.16c).

8.6.4 Depth of embedment for anchored walls

As the depth of embedment is not as great as for the cantilever wall, the toe of the wall is not rigidly fixed into the ground and is free to move slightly. The analysis of this condition is thus referred to as the *free earth support method*. With this method it is assumed that rotation occurs about the anchor point and that sufficient yielding occurs for the development of active and passive pressures. The pressure distribution assumed in design is shown in Fig. 8.15b, and the wall is considered free to move at its base. By taking moments about the anchor at A an expression for the embedment depth, d , can be obtained. The traditional methods of assessing the ratio of restoring moments to overturning moments described for cantilever walls are also used for anchored walls. The design of anchored walls to Eurocode 7 involves the use of the GEO limit state to assess the rotational stability, as illustrated in Example 8.4.

Example 8.4: Anchored sheet pile wall

If an anchor is placed 1 m below the ground level behind the sheet pile wall described in Example 8.3, calculate the minimum depth of embedment, d , to provide stability using:

- Eurocode 7, GEO Limit State, Design Approach 1;
- gross pressure method, taking F_p , the factor of safety on passive resistance, as equal to 2.0.

Solution:

- Eurocode 7, GEO Limit State, Design Approach 1

As before, allowance is made for a future unplanned excavation Δa equal to 10% of the clear height. This is the height between the ground surface in front of the wall and the anchor ($=0.4$ m). The pressure distribution is shown in Fig. 8.17.

1. *Combination 1 (partial factor sets A1 + M1 + R1)*

From Table 7.1: $\gamma_{G,unfav} = 1.35$; $\gamma_{\phi'} = 1.0$.

From before, $K_a = 0.333$, $K_p = 3.0$.

Design actions:

The active thrust due to the earth pressure is a permanent, unfavourable action:

$$P_{a,d} = \frac{1}{2} \times K_a \times \gamma \times (d + 5.4)^2 \times \gamma_{G,unfav} = 4.5(d + 5.4)^2$$

The passive resistance is also considered a permanent, unfavourable action:

$$P_{p,d} = \frac{1}{2} \times 60 \times d \times d \times \gamma_{G,unfav} = 40.5d^2$$

Effect of actions:

d is obtained by resolving the moment equilibrium equation. The lever arms about A are:

$$l_a = \frac{2}{3}(d + 5.4) - 1$$

$$l_p = \frac{2}{3}d + 4.4$$

$$\sum M = 0$$

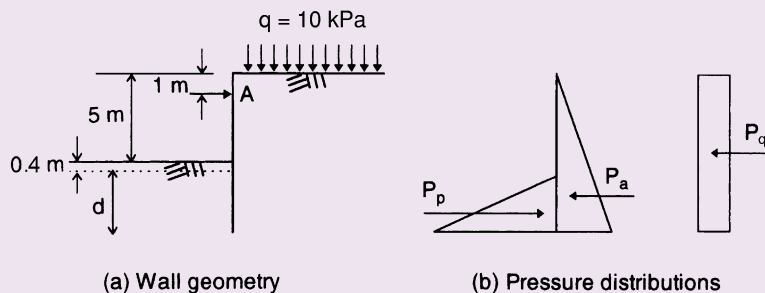


Fig. 8.17 Example 8.4.

i.e.

$$M_{Pa} - M_{Pp} = 0$$

$$4.5(d + 5.4)^2 \times \left[\frac{2}{3}(d + 5.4) - 1 \right] - 40.5d^2 \times \left(\frac{2}{3}d + 4.4 \right) = 0$$

Using Example 8.4.xls, $d = 2.1$ m

$$\text{Design depth} = 2.1 + 0.4 = 2.5 \text{ m}$$

2. Combination 2 (partial factor sets A2 + M2 + R1)

The calculations are the same as for Combination 1 except that this time the following partial factors are used: $\gamma_G; \text{unfav} = 1.0$; $\gamma_{\phi'} = 1.25$.

The following expressions are then derived ($K_a = 0.409$; $K_p = 2.444$):

$$\sum M = 0$$

i.e.

$$4.09(d + 5.4)^2 \times \left[\frac{2}{3}(d + 5.4) - 1 \right] - 24.4d^2 \times \left(\frac{2}{3}d + 4.4 \right) = 0$$

Using Example 8.4.xls, $d = 2.9$ m

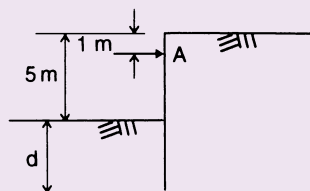
$$\text{Design depth} = 2.9 + 0.4 = 3.3 \text{ m}$$

(b) Gross pressure method

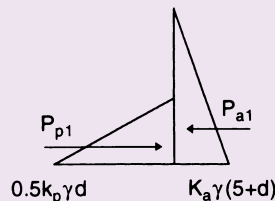
The pressure distribution is shown in Fig. 8.18.

Using Rankine's theory (with $\phi' = 30^\circ$) $K_a = 0.33$; $K_p = 3.0$:

	Force (kN)	Lever arm about A (m)	Moment (kN m)
P_a	$\frac{10}{3}(5 + d)^2$	$\frac{2}{3}(d + 5) - 1$	$\frac{10}{3}(5 + d)^2 \left[\frac{2}{3}(d + 5) - 1 \right]$
P_p	$15d^2$	$\frac{2}{3}d + 4$	$15d^2 \left[\frac{2}{3}d + 4 \right]$



(a) Wall geometry



(b) Pressure distribution

Fig. 8.18 Example 8.4 Part (b).

Minimum depth is required, and since $F_p = 2.0$ has already been applied to the pressure distribution,

$$\frac{15d^2 \left(\frac{2}{3}d + 4 \right)}{\frac{10}{3}(d+5)^2 \left[\frac{2}{3}(d+5) - 1 \right]} = 1$$

by trial and error, $d = 3.4$ m.

8.6.5 Reduction of design moments in anchored sheet pile walls

Rowe (1952) conducted a series of model tests in which he showed that the bending moments that actually occur in an anchored sheet pile wall are less than the values computed by the free earth support method. This difference in values is due mainly to arching effects within the soil which create a passive pressure distribution in front of the wall that is considerably different from the theoretical triangular distribution assumed for the analysis. Because of this phenomenon, the point of application of the passive resistive force occurs at a much shallower depth than the generally assumed value of $d/3$ (where d = depth of penetration of the pile).

Rowe later extended his work to cover clay soils (1957, 1958) and suggested a semi-empirical approach, covering the main soil types, whereby the values computed by the free earth support method for both the moments in the pile and the tension in the tie can be realistically reduced. The method involves the use of two coefficients, r_d and r_t , and worked examples illustrating the use of the method have been prepared by Barden (1974). Numerical studies performed by Potts and Fourie (1984) have confirmed Rowe's findings for normally consolidated clays. However, their studies showed that Rowe's results do not stand for overconsolidated clays, and they have produced separated design charts for this case.

8.6.6 Treatment of groundwater conditions

In order to carry out the stability analysis of a retaining wall involving groundwater it is necessary to know the values of the water pressures acting on both sides of the wall.

If there is a water level on one side of the wall only, the problem is simple to analyse and was illustrated in Example 7.3.

If there are water levels on both sides of the wall but at the same elevation then the two water pressure diagrams are equal and therefore balance out. Hence, apart from allowing for the fact that the soil below the water is submerged, no special treatment is necessary.

With different water levels on both sides of the pile, seepage can occur. An approximate method to allow for this when carrying out a design using a traditional approach is to assume that the excess head causing the flow is distributed linearly around the length of the pile that is within the water zone, i.e. $(2d + h - i - j)$, as shown in Fig. 8.19a.

Example 8.5: Water pressure distribution

Determine an approximation for the water pressure distribution on each side of the sheet pile wall shown in Fig. 8.19a, if $h = 8$ m, $d = 6$ m and $i = j = 0$ (i.e. GWL at ground surface on both sides of the wall). Take $\gamma_w = 9.81$ kN/m³.

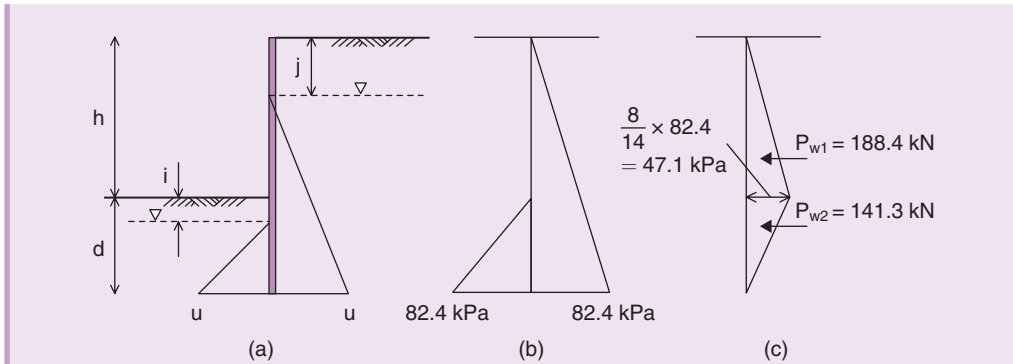


Fig. 8.19 Example 8.5.

Solution:

With the assumption that the excess head is linearly distributed around the length of the pile within the water zone, the formula for u , the water pressure on both sides at the pile toe, is

$$u = \frac{2(h+d-j)(d-i)\gamma_w}{(2d+h-i-j)} = 82.4 \text{ kPa}$$

The assumed diagrams for water pressure on each side of the wall are shown in Fig. 8.19b and the net water pressure diagram is shown in Fig. 8.19c.

Eurocode 7 Part 1 states that in silts and clays, water pressures must be considered to act and, unless a reliable drainage system is installed, the groundwater table should be taken as a coincident with the ground surface of the retained soil. The resulting water pressures are considered as geotechnical actions (permanent, unfavourable), and the appropriate partial factors of safety are selected and applied to the net water pressure acting to yield the design water pressure.

Thenault (2012) looked into the effect that passive pressure has on the design depth of embedment when considered as an unfavourable action, as a favourable action or as a resistance. Her results quantified the significance that the depth of the GWT has on the design depths achieved between the three approaches and showed that careful consideration of how to deal with passive pressure is required when the GWT is taken, as Eurocode 7 states, at the ground surface.

8.7 Braced excavations

When excavating a deep trench, the insertion of shuttering to hold up the sides becomes necessary. The excavation is carried down first to some point X, and rigidly strutted timbering is inserted between the levels D to X (Fig. 8.20a).

As further excavation is carried out, timbering and strutting are inserted in stages, but before the timbering is inserted, the soil yields by an amount that tends to increase with depth (it is relatively small at the top of the trench).

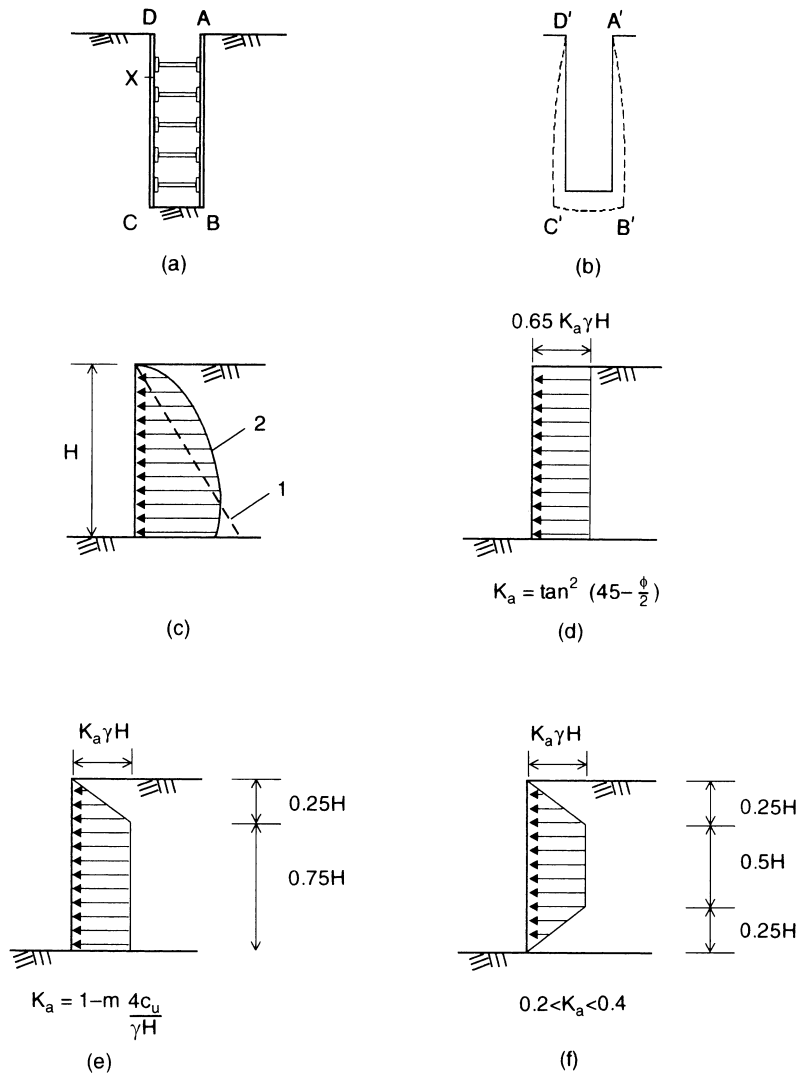


Fig. 8.20 Pressure distribution in strutted excavation.

In Fig. 8.20b, the shape A'B'C'D' represents, to an enlarged scale, the original form of the surface that has yielded to the position ABCD of Fig. 8.20a; the resulting pressure on the back of the wall is roughly parabolic and is indicated in Fig. 8.20c.

For design purposes a trapezoidal distribution of the form developed by Terzaghi and Peck (1967), since revised by Terzaghi, Peck and Mesri (1996) is assumed. The design procedure for the struts is semi-empirical. For sands, the pressure distribution is assumed to be uniform over the full depth of the excavation (Fig. 8.20d). For clays, the pressure distribution depends on the stability number, N :

$$N = \frac{\gamma H}{c_u}$$

If N is greater than 4, the distribution in Fig. 8.20e is used, provided that K_a is greater than 0.4. If N is less than 4, or if $0.2 < K_a < 0.4$, the distribution in Fig. 8.20f is used. With respect to Fig. 8.20e, m is generally taken as 1.0. For soft clays, however, m can reduce to ≈ 0.4 .

8.8 Reinforced soil

The principle of reinforced soil is that a mass of soil can be given tensile strength in a specific direction, if lengths of a material capable of carrying tension are embedded within it in the required direction.

This idea has been known for centuries. The Bible quotes the use of straw to strengthen unburnt clay bricks, and, from ancient times, fascine mattresses have been used to strengthen soft soil deposits prior to road construction. Ziggurats, built in Iraq, consisted of dried earth blocks, reinforced across the width of the structure with tarred ropes. However the full potential of reinforced soil was never realised until Vidal, who coined the term 'reinforced earth', demonstrated its wide potential and produced a rational design approach in his paper of 1966. There is no doubt that the present day use of reinforced soil structures stems directly from the pioneering work of Vidal.

Reinforced soil can be used in many geotechnical applications but, in this chapter, we are only concerned with earth retaining structures.

A reinforced soil retaining wall is a gravity structure and a simple form of such a wall is illustrated in Fig. 8.21. Brief descriptions of the components listed in the figure are set out below.

Soil fill

The soil should be granular and free draining with not more than 10% passing the $63\mu\text{m}$ sieve.

Reinforcing elements

(1) Metals

Originally many reinforced soil structures used thin metallic strips usually 50–100 mm wide and some 3–5 mm thick. Metals used were aluminium alloy, copper, stainless steel and galvanised steel, the latter being the most common. The common property of these materials is that they all have high moduli of elasticity so that negligible strains are created within the soil mass.

(2) Plastics

Since the mid-1970s there has been an increasing use of geosynthetics as reinforcement in reinforced soil, either in strip form or in grid form, such as Tensar geogrid. Geosynthetics have the advantage of greater durability than metal in corrosive soil, and their tensile strength can approach that of steel. In grid form, plastic reinforcement can achieve high frictional properties between itself and the surrounding soil. The main disadvantage of plastic reinforcement is that it experiences plastic deformation when subjected to tensile forces, which can lead to relatively large strains within the soil mass.

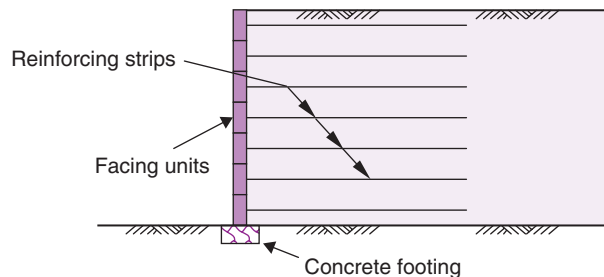


Fig. 8.21 Typical reinforced soil retaining wall.

Another type of polymer reinforcement material is when it is reinforced with glass fibres. Known as glass fibre reinforced plastic, GRP, this material has a tensile strength similar to mild steel with the advantage that it does not experience plastic deformation.

Facing units

At the free boundary of a reinforced soil structure it is necessary to provide a barrier in order that the fill is contained. This is provided by a thin weatherproof facing which in no way contributes structural strength to the wall. The facing is usually built up from prefabricated units small and light enough to be manhandled. The units are generally made of precast concrete although steel, aluminium and plastic units are sometimes encountered. In order to form a platform from which the facing units can be built up a small mass concrete foundation is required.

Design of reinforced soil retaining structures

In the UK, the current design standard is BS8006 Part 1: BS 8006-1:2010 *Code of practice for strengthened/reinforced soils and other fills*. This code adopts a limit state design approach using partial factors, however it is not fully compatible with Eurocode 7. BS 8006-1:2010 describes which design methods are acceptable for reinforced soil slopes and walls but it does not explain how to actually design these geotechnical structures.

Reinforced soil can provide a method for retaining soil when existing ground conditions do not allow construction by other, more conventional, methods. For example a compressible soil may be perfectly capable of supporting a reinforced soil retaining structure whereas it would probably require some form of piled foundation if a more conventional retaining wall were to be constructed. The technique can also be used when there is insufficient land space to construct the sloping side of a conventional earth embankment.

However, reinforced soil should not be thought of as only a form of alternative construction as it is often the first choice of design engineers when considering an earth retaining structure.

8.9 Soil nailing

Soil nailing is an *in situ* reinforcement technique used to stabilise slopes and retain excavations but, in this chapter, we are concerned only with earth retaining structures. The technique uses steel bars fully bonded into the soil mass. The bars are inserted into the soil either by direct driving or by drilling a borehole, inserting the bar and then filling the annulus around the bar with grout. The face of the exposed soil is sprayed with concrete to produce a zone of reinforced soil. The zone then acts as a homogeneous unit supporting the soil behind in a similar manner to a conventional retaining wall. The construction phases of a soil nailed wall are shown in Fig. 8.22 and the specification for soil nailing is given in BS8006 Part 2: BS 8006-2:2011 *Code of practice for strengthened/reinforced soils, Part 2: soil nail design*.

Although the completed soil structure may be expected to behave similarly to a conventional reinforced soil structure, there are notable differences between the two construction methods:

- natural soil properties may be greatly inferior to those permitted in a reinforced soil structure where selected fill is used;
- soil nails are installed by driving or by drilling and grouting rather than by placement within compacted fill;
- the construction process for nailing follows a 'top-down' sequence rather than a 'bottom-up' sequence for reinforced soils;
- the facing to a nailed structure is usually formed from sprayed concrete (shotcrete) or geosynthetics rather than precast units;
- nails are commonly installed at an inclination to the horizontal in contrast to reinforced soil where the reinforcements are placed horizontally.

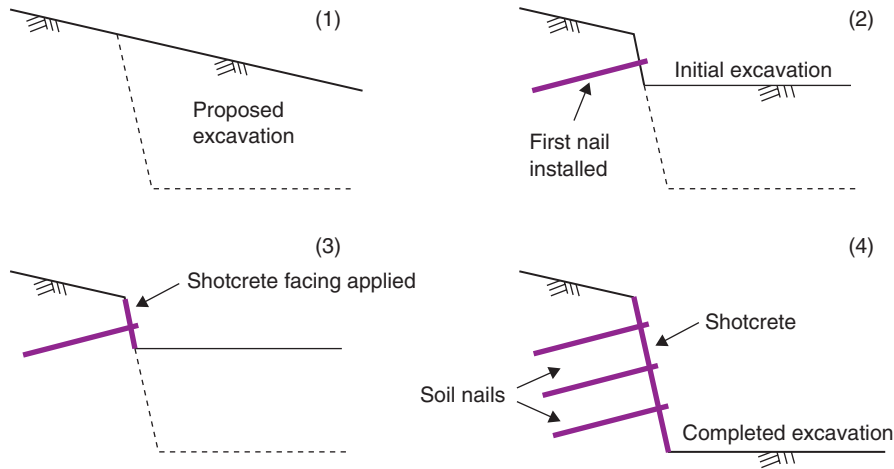


Fig. 8.22 Construction stages of a soil nailed wall.

There are two methods of forming the nail: *drill and grout* and *driving*. With the drill and grout method, steel bars are installed into pre-drilled holes and grout injected around them to bond them fully into the soil mass. This generates a reasonably large contact area between the grout and the soil thereby providing a high pull-out resistance. With the driving method, nails are either driven into the soil using a hydraulic or pneumatic hammer, or fired into the soil from a nail launcher which uses an explosive release of compressed air. This method of installation requires the nails to be relatively robust and to have a reasonably small cross-sectional area. Details of the driving technique are given by Myles and Bridle (1991) and full details of soil nail techniques and design methods are given by Gassler (1990), Schlosser (1982), Schlosser and de Buhan (1990) and RDGC (1991) and a recent extension of the technique is described by Pokharel and Ochiai (1997).

Exercises

Exercise 8.1

A reinforced concrete cantilever retaining wall, supporting a granular soil, has dimensions shown in Fig. 8.23.

Using a gross factor of safety approach, calculate the factors of safety against sliding and overturning and check the bearing pressure on the soil beneath the wall if the allowable bearing pressure is 300 kPa. Take the unit weight of concrete as 23.5 kN/m^3 and assume that the friction between the base of the wall and the soil is equal to ϕ' . Ignore any passive resistance from the soil in front of the wall.

Answer $F_s = 2.19$; $F_o = 3.63$; $p_{\max} = 135.5 \text{ kPa} \{ < 300 \Rightarrow \text{OK} \}$

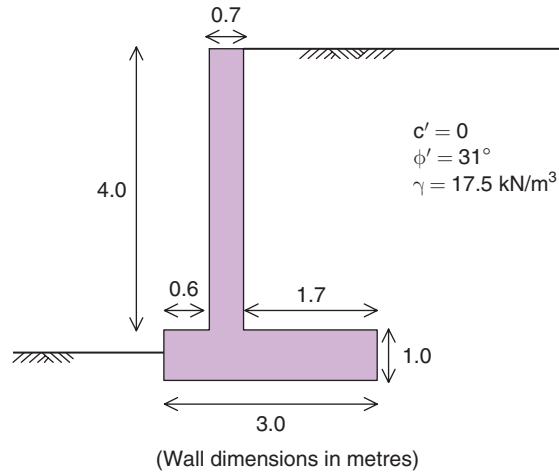


Fig. 8.23 Exercise 8.1.

Exercise 8.2

Check the safety of the mass concrete retaining wall shown in Fig. 8.24 in terms of sliding and overturning using a gross factor of safety approach;

You may assume that Rankine's conditions apply to the soil behind the wall, and that the friction between the base of the wall and the soil, $\delta = \frac{2}{3}\phi'$. Ignore any passive resistance from the soil in front of the wall.

Answer $F_o = 3.53$; $F_s = 1.85$.

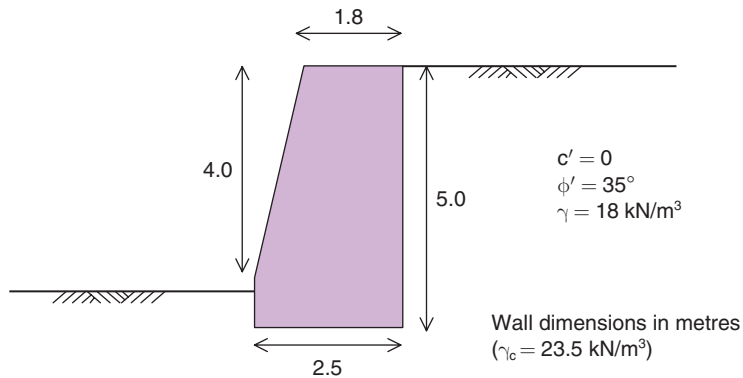


Fig. 8.24 Exercise 8.2.

Exercise 8.3

Check each situation of Exercises 8.1 and 8.2 in accordance with Eurocode 7, using Design Approach 1 in all cases.

Answer Exercise 8.1: Overturning (GEO), $\Gamma = 2.69, 2.94$
 Sliding (GEO) DA1-1, $\Gamma = 1.62$;
 DA1-2, $\Gamma = 1.42$
 Exercise 8.2: Overturning (GEO), $\Gamma = 3.26, 3.35$
 Sliding (GEO) DA1-1, $\Gamma = 2.76$;
 DA1-2, $\Gamma = 2.27$

Exercise 8.4

A cantilever sheet pile wall is to be constructed in a granular soil with the following properties:

$$\begin{aligned}\gamma &= 19.2 \text{ kN/m}^3 \\ \phi' &= 29^\circ \\ c' &= 0\end{aligned}$$

The depth of the excavation is to be 4 m. Determine the minimum depth of embedment, d , to provide stability in accordance with EN1997-1:2004 Design Approach 1.

If the wall is now to be designed to carry a surcharge of 20 kPa, what would be the required depth of embedment?

Answer Surcharge = 0: DA1-1, $d_0 = 4.0 \text{ m}$, $d = 4.5 \text{ m}$;
 DA1-2, $d_0 = 5.4 \text{ m}$, $d = 6.0 \text{ m}$
 Surcharge = 20 kPa: DA1-1, $d_0 = 5.0 \text{ m}$, $d = 5.6 \text{ m}$;
 DA1-2, $d_0 = 6.9 \text{ m}$, $d = 7.7 \text{ m}$

Chapter 9

Bearing Capacity and Shallow Foundations

9.1 Bearing capacity terms

The following terms are used in bearing capacity problems.

Ultimate bearing capacity

The value of the average contact pressure between the foundation and the soil which will produce shear failure in the soil.

Safe bearing capacity

The maximum value of contact pressure to which the soil can be subjected without risk of shear failure. This is based solely on the strength of the soil and is simply the ultimate bearing capacity divided by a suitable factor of safety.

Allowable bearing pressure

The maximum allowable net loading intensity on the soil allowing for both shear and settlement effects.

9.2 Types of foundation

Strip foundation

Often termed a *continuous footing* this foundation has a length significantly greater than its width. It is generally used to support a series of columns or a wall.

Pad footing

Generally an individual foundation designed to carry a single column load although there are occasions when a pad foundation supports two or more columns.

Raft foundation

This is a generic term for all types of foundations that cover large areas. A raft foundation is also called a *mat foundation* and can vary from a fascine mattress supporting a farm road to a large reinforced concrete basement supporting a high rise block.

Pile foundation

Piles are used to transfer structural loads to either the foundation soil or the bedrock underlying the site. They are usually designed to work in groups, with the column loads they support transferred into them via a capping slab. Pile foundations are covered in Chapter 10.

Pier foundation

This is a large column built up either from the bedrock or from a slab supported by piles. Its purpose is to support a large load, such as that from a bridge. A pier operates in the same manner as a pile but it is essentially a short squat column whereas a pile is relatively longer and more slender.

Shallow foundation

A foundation whose depth below the surface, z , is equal to or less than its least dimension, B . Most strip and pad footings fall into this category.

Deep foundation

A foundation whose depth below the surface is greater than its least dimension. Piles and piers fall into this category.

9.3 Ultimate bearing capacity of a foundation

The ultimate bearing capacity of a foundation is given the symbol q_u and there are various analytical methods by which it can be evaluated. As will be seen, some of these approaches are not all that suitable but they still form a very useful introduction to the study of the bearing capacity of a foundation.

9.3.1 Earth pressure theory

Consider an element of soil under a foundation (Fig. 9.1). The vertical downward pressure of the footing, q_u , is a major principal stress causing a corresponding Rankine active pressure, p . For particles beyond the edge of the foundation this lateral stress can be considered as a major principal stress (i.e. passive resistance) with its corresponding vertical minor principal stress γz (the weight of the soil).

Now

$$p = q_u \frac{1 - \sin \phi'}{1 + \sin \phi'}$$

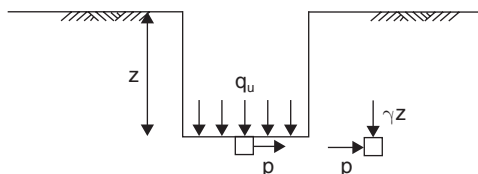


Fig. 9.1 Earth pressure conditions immediately below a foundation.

also

$$p = \gamma z \frac{1 + \sin \phi'}{1 - \sin \phi'}$$

$$\Rightarrow q_u = \gamma z \left(\frac{1 + \sin \phi'}{1 - \sin \phi'} \right)^2$$

This is the formula for the ultimate bearing capacity, q_u . It will be seen that it is not satisfactory for shallow footings because when $z = 0$ then, according to the formula, q_u also = 0.

Bell's development of the Rankine solution for c - ϕ soils gives the following equation:

$$q_u = \gamma z \left(\frac{1 + \sin \phi'}{1 - \sin \phi'} \right)^2 + 2c' \sqrt{\left(\frac{1 + \sin \phi'}{1 - \sin \phi'} \right)^3} + 2c' \sqrt{\frac{1 + \sin \phi'}{1 - \sin \phi'}}$$

For, the undrained state, $\phi_u = 0^\circ$,

$$q_u = \gamma z + 4c_u$$

or $q_u = 4c_u$ for a surface footing.

9.3.2 Slip circle methods

With slip circle methods the foundation is assumed to fail by rotation about some slip surface, usually taken as the arc of a circle. Almost all foundation failures exhibit rotational effects, and Fellenius (1927) showed that the centre of rotation is slightly above the base of the foundation and to one side of it. He found that in a saturated cohesive soil the ultimate bearing capacity for a surface footing is

$$q_u = 5.52c_u$$

To illustrate the method we will consider a foundation failing by rotation about one edge and founded at a depth z below the surface of a saturated clay of unit weight γ and undrained strength c_u (Fig. 9.2).

Disturbing moment about O:

$$q_u \times LB \times \frac{B}{2} = \frac{q_u LB^2}{2} \quad (1)$$

Resisting moments about O

$$\text{Cohesion along cylindrical sliding surface} = c_u \pi LB$$

$$\Rightarrow \text{Moment} = \pi c_u LB^2 \quad (2)$$

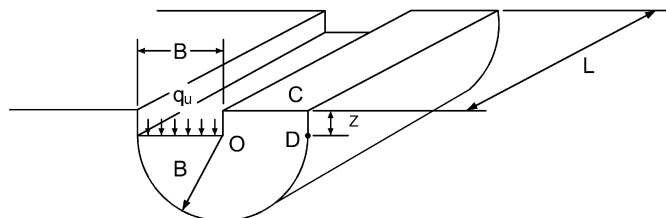


Fig. 9.2 Foundation failure rotation about one edge.

Cohesion along CD = $c_u zL$

$$\Rightarrow \text{Moment} = c_u zLB \quad (3)$$

Weight of soil above foundation level = γzLB

$$\Rightarrow \text{Moment} = \frac{\gamma zLB^2}{2} \quad (4)$$

For limit equilibrium (1) = (2) + (3) + (4)
i.e.

$$\begin{aligned} \frac{q_u LB^2}{2} &= \pi c_u LB^2 + c_u zLB + \frac{\gamma zLB^2}{2} \\ \Rightarrow q_u &= 2\pi c_u + \frac{2c_u z}{B} + \gamma z \\ &= 2\pi c_u \left(1 + \frac{1}{\pi} \frac{z}{B} + \frac{1}{2\pi} \frac{\gamma z}{c_u} \right) \\ &= 6.28c_u \left(1 + 0.32 \frac{z}{B} + 0.16 \frac{\gamma z}{c_u} \right) \end{aligned}$$

Cohesion of end sectors

The above formula only applies to a strip footing, and if the foundation is of finite dimensions then the effect of the ends must be included.

To obtain this it is assumed that when the cohesion along the perimeter of the sector has reached its maximum value, c_u , the value of cohesion at some point on the sector at distance r from O is $c_r = c_u r/B$, as shown in Fig. 9.3.

Rotational resistance of an elemental ring, dr thick

$$= \frac{c_u r}{B} \times \pi r \, dr$$

$$\text{Moment about O} = \frac{c_u r}{B} \times \pi r \, dr \times r = \pi \frac{c_u}{B} r^3 \, dr$$

$$\begin{aligned} \text{Total moment of both ends} &= 2 \int_0^B \pi \frac{c_u}{B} r^3 \, dr \\ &= 2\pi \frac{c_u}{B} \times \frac{B^4}{4} = \frac{\pi c_u B^3}{2} \quad (5) \end{aligned}$$

This analysis ignores the cohesion of the soil above the base of the foundation at the two ends, but unless the foundation is very deep this will have little effect on the value of q_u . The term (5) should be added into the original equation.

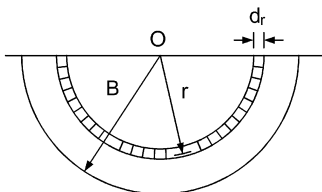


Fig. 9.3 Cohesion of end sectors.

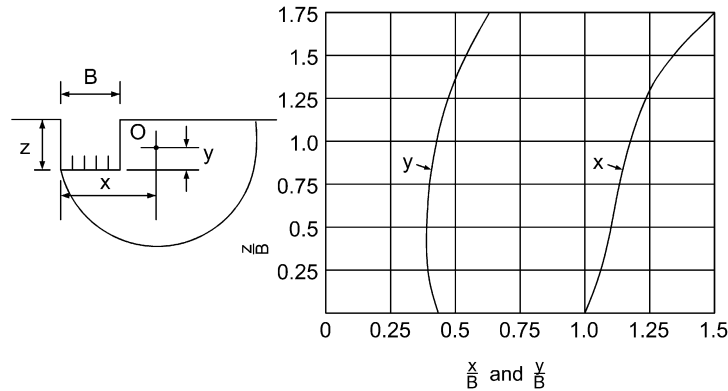


Fig. 9.4 Location of centre of critical circle for use with Fellenius' method.

For a surface footing the formula for q_u is:

$$q_u = 6.28c_u$$

This value is high because the centre of rotation is actually above the base, but in practice a series of rotational centres are chosen and each circle is analysed (as for a slope stability problem) until the lowest q_u value has been obtained. The method can be extended to allow for frictional effects but is considered most satisfactory when used for cohesive soils; it was extended by Wilson (1941), who prepared a chart (Fig. 9.4) which gives the centre of the most critical circle for cohesive soils (his technique is not applicable to other categories of soil or to surface footings).

The slip circle method is useful when the soil properties beneath the foundation vary, since an approximate position of the critical circle can be obtained from Fig. 9.4 and then other circles near to it can be analysed. When the soil conditions are uniform Wilson's critical circle gives

$$q_u = 5.52c_u$$

for a surface footing.

9.3.3 Plastic failure theory

Forms of bearing capacity failure

Terzaghi (1943) stated that the bearing capacity failure of a foundation is caused by either a general soil shear failure or a local soil shear failure. Vesic (1963) listed punching shear failure as a further form of bearing capacity failure.

(1) **General shear failure**

The form of this failure is illustrated in Fig. 9.5, which shows a strip footing. The failure pattern is clearly defined and it can be seen that definite failure surfaces develop within the soil. A wedge of compressed soil (I) goes down with the footing, creating slip surfaces and areas of plastic flow (II). These areas are initially prevented from moving outwards by the passive resistance of the soil wedges (III). Once this passive resistance is overcome, movement takes place and bulging of the soil surface around the foundation occurs. With general shear failure collapse is sudden and is accompanied by a tilting of the foundation.

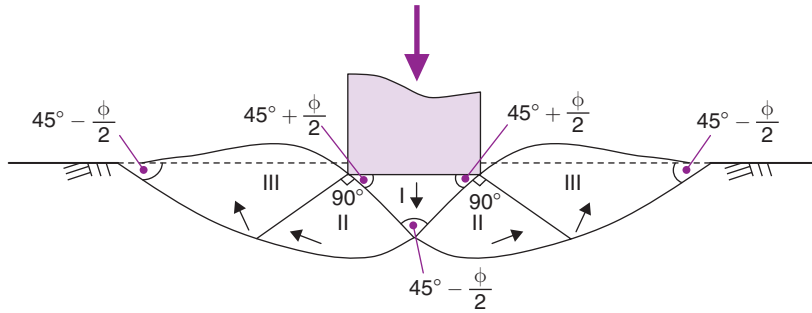


Fig. 9.5 General shear failure.

(2) **Local shear failure**

The failure pattern developed is of the same form as for general shear failure but only the slip surfaces immediately below the foundation are well defined. Shear failure is local and does not create the large zones of plastic failure which develop with general shear failure. Some heaving of the soil around the foundation may occur but the actual slip surfaces do not penetrate the surface of the soil and there is no tilting of the foundation.

(3) **Punching shear failure**

This is a downward movement of the foundation caused by soil shear failure only occurring along the boundaries of the wedge of soil immediately below the foundation. There is little bulging of the surface of the soil and no slip surfaces can be seen.

For both punching and local shear failure, settlement considerations are invariably more critical than those of bearing capacity so that the evaluation of the ultimate bearing capacity of a foundation is usually obtained from an analysis of general shear failure.

Prandtl's analysis

Prandtl (1921) was interested in the plastic failure of metals and one of his solutions (for the penetration of a punch into metal) can be applied to the case of a foundation penetrating downwards into a soil with no attendant rotation.

The analysis gives solutions for various values of ϕ , and for a surface footing with $\phi = 0$, Prandtl obtained:

$$q_u = 5.14c_u$$

Terzaghi's analysis

Working on similar lines to Prandtl's analysis, Terzaghi (1943) produced a formula for q_u which allows for the effects of cohesion and friction between the base of the footing and the soil and is also applicable to shallow ($z/B \leq 1$) and surface foundations. His solution for a strip footing is:

$$q_u = cN_c + \gamma zN_q + 0.5\gamma BN_\gamma \quad (6)$$

The coefficients N_c , N_q and N_γ depend upon the soil's angle of shearing resistance and can be obtained from Fig. 9.6. When $\phi = 0^\circ$, $N_c = 5.7$; $N_q = 1.0$; $N_\gamma = 0$.

$$\Rightarrow q_u = 5.7c + \gamma z$$

or $q_u = 5.7c$ for a surface footing.

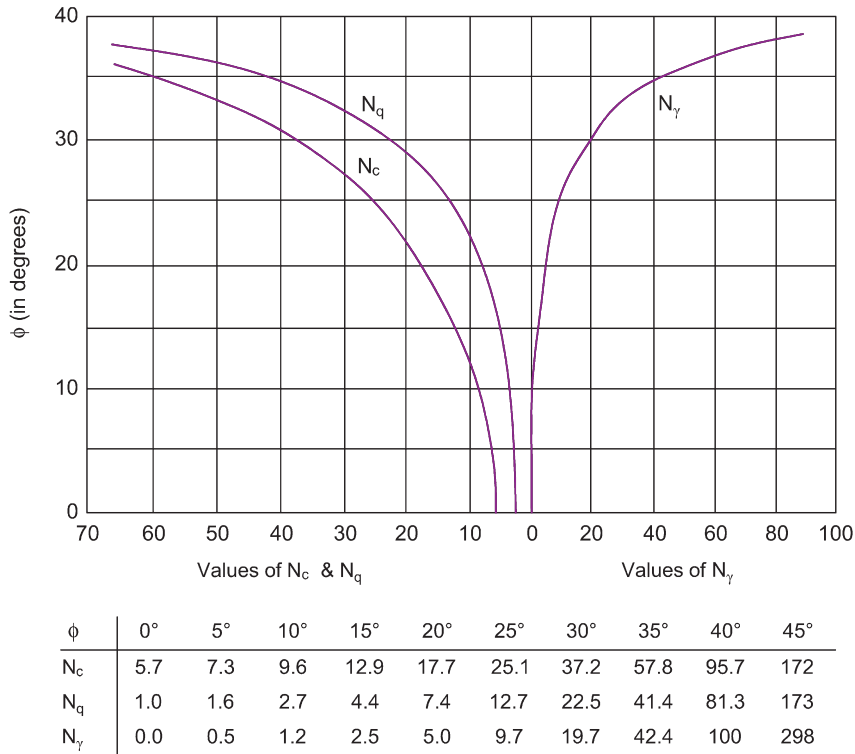


Fig. 9.6 Terzaghi's bearing capacity coefficients.

The increase in the value of N_c from 5.14 to 5.7 is due to the fact that Terzaghi allowed for frictional effects between the foundation and its supporting soil.

The coefficient N_q allows for the surcharge effects due to the soil above the foundation level, and N_γ allows for the size of the footing, B . The effect of N_γ is of little consequence with clays, where the angle of shearing resistance is usually assumed to be the undrained value, ϕ_u , and assumed equal to 0° , but it can become significant with wide foundations supported on cohesionless soil.

Terzaghi's solution for a circular footing is:

$$q_u = 1.3cN_c + \gamma zN_q + 0.3\gamma BN_\gamma \quad (\text{where } B = \text{diameter}) \quad (7)$$

For a square footing:

$$q_u = 1.3cN_c + \gamma zN_q + 0.4\gamma BN_\gamma \quad (8)$$

and for a rectangular footing:

$$q_u = cN_c \left(1 + 0.3 \frac{B}{L} \right) + \gamma zN_q + 0.5\gamma BN_\gamma \left(1 - 0.2 \frac{B}{L} \right) \quad (9)$$

Skempton (1951) showed that for a cohesive soil ($\phi = 0^\circ$) the value of the coefficient N_c increases with the value of the foundation depth, z . His suggested values for N_c , applicable to circular, square and strip footings, are given in Fig. 9.7. In the case of a rectangular footing on a cohesive soil a value for N_c can either be estimated from Fig. 9.7 or obtained from the formula:

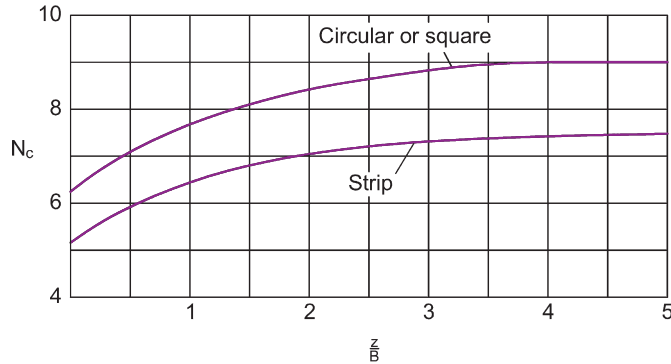


Fig. 9.7 Variation of the coefficient N_c with depth (after Skempton, 1951).

$$N_c = 5 \left(1 + 0.2 \frac{B}{L} \right) \left(1 + 0.2 \frac{z}{B} \right)$$

with a limiting value for N_c of $N_c = 7.5(1 + 0.2B/L)$, which corresponds to a z/B ratio greater than 2.5 (Skempton, 1951).

9.3.4 Summary of bearing capacity formula

It can be seen that Rankine's theory does not give satisfactory results and that, for variable subsoil conditions, the slip surface analysis of Fellenius provides the best solution. For normal soil conditions, Equations (6)–(9) can generally be used and may be applied to foundations at any depth in c - ϕ soils and to shallow foundations in cohesive soils. For deep footings in cohesive soil the values of N_c suggested by Skempton may be used in place of the Terzaghi values.

9.3.5 Choice of soil parameters

As with earth pressure equations, bearing capacity equations can be used with either the undrained or the drained soil parameters. As granular soils operate in the drained state at all stages during and after construction, the relevant soil strength parameter is ϕ' .

Saturated cohesive soils operate in the undrained state during and immediately after construction and the relevant parameter is c_u . If required, the long-term stability can be checked with the assumption that the soil will be drained and the relevant parameters are c' and ϕ' (with c' generally taken as equal to zero).

Example 9.1: Ultimate bearing capacity (Terzaghi) in short- and long-term

A rectangular foundation, $2\text{ m} \times 4\text{ m}$, is to be founded at a depth of 1 m below the surface of a deep stratum of soft saturated clay (unit weight = 20 kN/m^3).

Undrained and consolidated undrained triaxial tests established the following soil parameters: $c_u = 24\text{ kPa}$, $\phi' = 25^\circ$, $c' = 0$.

Determine the ultimate bearing capacity of the foundation, (i) immediately after construction and, (ii) some years after construction.

Solution:

(i) It may be assumed that immediately after construction the clay will be in an undrained state. The relevant soil parameter is therefore $c_u = 24$ kPa.

From Fig. 9.6: $N_c = 5.7$, $N_q = 1.0$, $N_\gamma = 0.0$.

$$\begin{aligned} q_u &= cN_c(1 + 0.3B/L) + \gamma zN_q \\ &= 24 \times 5.7(1 + 0.3 \times 2/4) + 20 \times 1 \times 1 \\ &= 177.3 \text{ kPa} \end{aligned}$$

(ii) It can be assumed that, after some years, the clay will be fully drained so that the relevant soil parameters are $\phi' = 25^\circ$ and $c' = 0$.

From Fig. 9.6: $N_c = 25.1$, $N_q = 12.7$, $N_\gamma = 9.7$.

$$\begin{aligned} q_u &= \gamma zN_q + 0.5\gamma BN_\gamma(1 - 0.2B/L) \\ &= 20 \times 1 \times 12.7 + 0.5 \times 20 \times 2 \times 9.7(1 - 0.2 \times 2/4) \\ &= 428.6 \text{ kPa} \end{aligned}$$

Example 9.2: Ultimate bearing capacity (Terzaghi); effect of ϕ'

A continuous foundation is 1.5 m wide and is founded at a depth of 1.5 m in a deep layer of sand of unit weight 18.5 kN/m³.

Determine the ultimate bearing capacity of the foundation if the soil strength parameters are $c' = 0$ and $\phi' =$ (i) 35° , (ii) 30° .

Solution:

(i) From Fig. 9.6: for $\phi' = 35^\circ$, $N_c = 57.8$, $N_q = 41.4$, $N_\gamma = 42.4$. For a continuous footing:

$$\begin{aligned} q_u &= c'N_c + \gamma zN_q + 0.5\gamma BN_\gamma \\ &= 18.5 \times 1.5 \times 41.4 + 0.5 \times 18.5 \times 1.5 \times 42.4 \\ &= 1737 \text{ kPa} \end{aligned}$$

(ii) From Fig. 9.6: for $\phi' = 30^\circ$, $N_c = 37.2$, $N_q = 22.5$, $N_\gamma = 19.7$.

$$\begin{aligned} q_u &= 18.5 \times 1.5 \times 22.5 + 0.5 \times 18.5 \times 1.5 \times 19.7 \\ &= 898 \text{ kPa} \end{aligned}$$

The ultimate bearing capacity is reduced by about 48% when the value of ϕ' is reduced by about 15%.

9.4 Determination of the safe bearing capacity

Lumped factor of safety approach

The value of the safe bearing capacity is simply the value of the net ultimate bearing capacity divided by a suitable factor of safety, F . The value of F is usually not less than 3.0, except for a relatively unimportant structure, and sometimes can be as much as 5.0. At first glance these values for F appear high but the

necessity for them is illustrated in Example 9.2, which demonstrates the effect on q_u of a small variation in the value of ϕ' .

The net ultimate bearing capacity is the increase in vertical pressure, above that of the original overburden pressure, that the soil can just carry before shear failure occurs.

The original overburden pressure is γz and this term should be subtracted from the bearing capacity equations, i.e. for a strip footing:

$$q_{u \text{ net}} = cN_c + \gamma z(N_q - 1) + 0.5\gamma BN_\gamma$$

The safe bearing capacity is therefore the above expression divided by F plus the term γz :

$$\text{Safe bearing capacity} = \frac{cN_c + \gamma z(N_q - 1) + 0.5\gamma BN_\gamma}{F} + \gamma z$$

In the case of a footing founded in undrained clay, where $\phi_u = 0^\circ$, the net ultimate bearing capacity is, of course, $c_u N_c$.

The safe bearing capacity notion is not used during design to Eurocode 7 where, as will be demonstrated in Section 9.7, conformity of the bearing resistance limit state is achieved by ensuring that the design effect of the actions does not exceed the design bearing resistance.

9.5 The effect of groundwater on bearing capacity

9.5.1 Water table below the foundation level

If the water table is at a depth of not less than B below the foundation, the expression for net ultimate bearing capacity is the one given above, but when the water table rises to a depth of less than B below the foundation the expression becomes:

$$q_{u \text{ net}} = cN_c + \gamma z(N_q - 1) + 0.5\gamma' BN_\gamma$$

where

γ = unit weight of soil above groundwater level

γ' = effective unit weight.

For cohesive soils ϕ' is small and the term $0.5\gamma' BN_\gamma$ is of little account, and the value of the bearing capacity is virtually unaffected by groundwater. With sands, however, the term cN_c is zero and the term $0.5\gamma' BN_\gamma$ is about one half of $0.5\gamma BN_\gamma$, so that groundwater has a significant effect.

9.5.2 Water table above the foundation level

For this case Terzaghi's expressions are best written in the form:

$$q_{u \text{ net}} = cN_c + \sigma'_v(N_q - 1) + 0.5\gamma' BN_\gamma$$

where σ'_v = effective overburden pressure removed.

From the expression it is seen that, in these circumstances, the bearing capacity of a cohesive soil can be affected by groundwater.

When designing foundations to Eurocode 7, unless an adequate drainage system and maintenance plan are ensured, the ground water table should be taken as the maximum possible level. This could of course be the ground surface.

9.6 Developments in bearing capacity equations

Terzaghi's bearing capacity equations have been successfully used in the design of numerous shallow foundations throughout the world and are still in use. However, they are viewed by many to be conservative as they do not consider factors that affect bearing capacity such as inclined loading, foundation depth and the shear resistance of the soil above the foundation. This section describes developments that have been made to the original equations.

9.6.1 General form of the bearing capacity equation

Meyerhof (1963) proposed the following general equation for q_u :

$$q_u = cN_c s_c i_c d_c + \gamma z N_q s_q i_q d_q + 0.5 \gamma B N_\gamma s_\gamma i_\gamma d_\gamma \quad (10)$$

where

s_c , s_q and s_γ are shape factors

i_c , i_q and i_γ are inclination factors

d_c , d_q and d_γ are depth factors.

Other factors, G_c , G_q and G_γ to allow for a sloping ground surface, and B_c , B_q and B_γ to allow for any inclination of the base, can also be included when required.

It must be noted that the values of N_c , N_q and N_γ used in the general bearing capacity equation are not the Terzaghi values. The values of N_c and N_q are now obtained from Meyerhof's equations (1963), as they are recognised as probably being the most satisfactory.

$$N_c = (N_q - 1) \cot \phi, \quad N_q = \tan^2 \left(45^\circ + \frac{\phi}{2} \right) e^{\pi \tan \phi}$$

Unfortunately there is not the same agreement about the remaining factor N_γ and the following expressions all have their supporters:

$$N_\gamma = (N_q - 1) \tan 1.4 \phi \quad \text{Meyerhof (1963)}$$

$$N_\gamma = 1.5(N_q - 1) \tan \phi \quad \text{Hansen (1970)}$$

$$N_\gamma = 2(N_q + 1) \tan \phi \quad \text{Vesic (1973)}$$

$$N_\gamma = 2(N_q - 1) \tan \phi \quad \text{where friction between foundation base and soil, } \delta \geq \phi/2 \text{ (Chen, 1975; EN 1997-1:2004)}$$

It should be noted that Hansen suggested that the operating value of ϕ should be that corresponding to plane strain, which is some 10% greater than the value of ϕ obtained from the triaxial test and normally used. With this approach Hansen's expression for $N_\gamma = 1.5(N_q - 1) \tan 1.1 \phi$, which applies to a continuous footing but is probably not so relevant to other shapes of footings.

It seems that the expression offered in EN 1997-1:2004 Annex D has become the preferred option. Further examples in this chapter will therefore use the following expressions for the bearing capacity coefficients:

$$N_c = (N_q - 1) \cot \phi$$

$$N_q = \tan^2 \left(45^\circ + \frac{\phi}{2} \right) e^{\pi \tan \phi}$$

$$N_\gamma = 2(N_q - 1) \tan \phi$$

Typical values are shown in Table 9.1.

Table 9.1 Bearing capacity factors in common use.

ϕ (°)	N_c	N_q	N_γ
0	5.14	1.00	0.00
5	6.49	1.57	0.1
10	8.34	2.47	0.52
15	10.98	3.94	1.58
20	14.83	6.40	3.93
25	20.72	10.66	9.01
30	30.14	18.40	20.09
35	46.12	33.30	45.23
40	75.31	64.20	106.05
45	133.87	134.87	267.75
50	266.88	319.06	758.09

9.6.2 Shape factors

These factors are intended to allow for the effect of the shape of the foundation on its bearing capacity. The factors have largely been evaluated from laboratory tests and the values in present use are those proposed by De Beer (1970):

$$s_c = 1 + \frac{B}{L} \cdot \frac{N_q}{N_c}$$

$$s_q = 1 + \frac{B}{L} \tan \phi$$

$$s_\gamma = 1 - 0.4 \frac{B}{L}$$

9.6.3 Depth factors

These factors are intended to allow for the shear strength of the soil above the foundation. Hansen (1970) proposed the following values:

	$z/B \leq 1.0$	$z/B > 1.0$
d_c	$1 + 0.4(z/B)$	$1 + 0.4 \arctan(z/B)$
d_q	$1 + 2 \tan \phi (1 - \sin \phi)^2 (z/B)$	$1 + 2 \tan \phi (1 - \sin \phi)^2 \arctan(z/B)$
d_γ	1.0	1.0

Note: The arctan values must be expressed in radians, e.g. if $z = 1.5$ and $B = 1.0$ m then $\arctan(z/B) = \arctan(1.5) = 56.3^\circ = 0.983$ radians.

Example 9.3: Ultimate bearing capacity (Meyerhof) in short- and long-term

Recalculate Example 9.1 using Meyerhof's general bearing capacity formula.

Solution:

- (i) From Table 9.1, for $\phi_u = 0^\circ$, $N_c = 5.14$, $N_q = 1.0$ and $N_\gamma = 0.0$.

Shape factors:

$$s_c = 1 + (2/4)(1.0/5.14) = 1.1$$

$$s_q = 1 + (2/4) \tan 0^\circ = 1.0$$

$$s_\gamma = 1 - 0.4(2/4) = 0.8$$

Depth factors:

$$z/B = 1/2 = 0.5. \text{ Using Hansen's values for } z/B \leq 1.0:$$

$$d_c = 1 + 0.4(1/2) = 1.2, \quad d_q = 1.0 \text{ (as } \phi_u = 0^\circ), \quad d_\gamma = 1.0$$

$$\begin{aligned} q_u &= cN_c s_c d_c + \gamma z N_q s_q d_q \\ &= 24 \times 5.14 \times 1.1 \times 1.2 + 20 \times 1.0 \times 1.0 \times 1.0 \\ &= 182.8 \text{ kPa} \end{aligned}$$

- (ii) From Table 9.1, for $\phi' = 25^\circ$, $N_q = 10.66$ and $N_\gamma = 9.01$.

The expressions for s_q and d_q involve ϕ . These two factors will therefore have different values from those in case (i):

$$s_q = 1 + (2/4) \tan 25^\circ = 1.23$$

$$d_q = 1 + 2 \tan 25^\circ (1 - \sin 25^\circ)^2 (1/2) = 1.16$$

$$\begin{aligned} q_u &= \gamma z N_q s_q d_q + 0.5 \gamma B N_\gamma s_\gamma d_\gamma \\ &= 20 \times 1 \times 10.66 \times 1.23 \times 1.16 + 0.5 \times 20 \times 2 \times 9.01 \times 0.8 \times 1.0 \\ &= 448.4 \text{ kPa} \end{aligned}$$

Example 9.4: Safe bearing capacity

Using a factor of safety = 3.0 determine the values of safe bearing capacity for cases (i) and (ii) in Example 9.3.

Solution:

Case (i):

$$q_{u \text{ net}} = q_u - \gamma z = 162.8 \text{ kPa}$$

$$\begin{aligned} \text{Safe bearing capacity} &= \frac{162.8}{3} + 20 \times 1 \\ &= 74.3 \text{ kPa} \end{aligned}$$

For case (ii):

$$q_{u \text{ net}} = \gamma z(N_q s_q d_q - 1) + 0.5 \gamma B N_{\gamma} s_{\gamma} d_{\gamma}$$

$$= 428.4 \text{ kPa}$$

$$\text{Safe bearing capacity} = \frac{428.4}{3} + 20 \times 1$$

$$= 162.8 \text{ kPa}$$

9.6.4 Effect of eccentric and inclined loading on foundations

A foundation can be subjected to eccentric loads and/or to inclined loads, eccentric or concentric.

Eccentric loads

Let us consider first the relatively simple case of a vertical load acting on a rectangular foundation of width B and length L such that the load has eccentricities e_B and e_L (Fig. 9.8). To solve the problem we must think in terms of the rather artificial concept of effective foundation width and length. That part of the foundation that is symmetrical about the point of application of the load is considered to be useful, or effective, and is the area of the rectangle of effective length $L' = L - 2e_L$ and of effective width $B' = B - 2e_B$.

In the case of a strip footing of width B , subjected to a line load with an eccentricity e , then $B' = B - 2e$ and the ultimate bearing capacity of the foundation is found from either equation (6) or the general equation (10) with the term B replaced by B' .

The overall eccentricity of the bearing pressure, e , must consider the self-weight of the foundation and is equal to:

$$e = \frac{P \times e_p}{P + W}$$

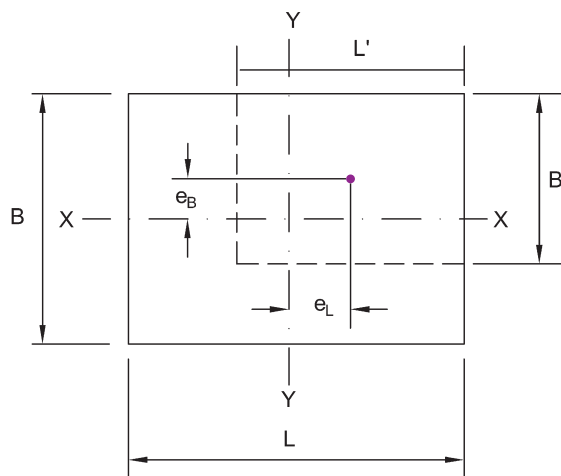


Fig. 9.8 Effective widths and area.

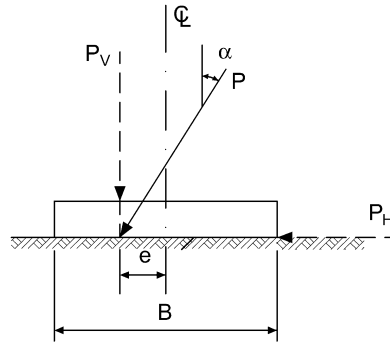


Fig. 9.9 Strip foundation with inclined load.

where

P = magnitude of the eccentric load

W = self-weight of the foundation

e_p = eccentricity of P .

Inclined loads

The usual method of dealing with an inclined line load, such as P in Fig. 9.9, is to first determine its horizontal and vertical components P_H and P_V and then, by taking moments, determine its eccentricity, e , in order that the effective width of the foundation B' can be determined from the formula $B' = B - 2e$.

The ultimate bearing capacity of the strip foundation (of width B) is then taken to be equal to that of a strip foundation of width B' subjected to a concentric load, P , inclined at α to the vertical.

Various methods of solution have been proposed for this problem, e.g. Janbu (1957), Hansen (1957), but possibly the simplest approach is that proposed by Meyerhof (1953) in which the bearing capacity coefficients N_c , N_q and N_γ are reduced by multiplying them by the factors i_c , i_q and i_γ in his general equation (10). Meyerhof's expressions for these factors are:

$$i_c = i_q = (1 - \alpha/90^\circ)^2$$

$$i_\gamma = (1 - \alpha/\phi)^2$$

9.7 Designing spread foundations to Eurocode 7

The design of spread foundations is covered in Section 6 of Eurocode 7, Part 1. The limit states to be checked and the partial factors to be used in the design are the same as we saw when we looked at the design of retaining walls in Section 8.5.

9.7.1 Design by calculation

In terms of establishing the bearing resistance, the code states that a commonly recognised method should be used, and Annex D of the Standard gives a sample calculation. Depth factors are excluded in Eurocode 7 and for this reason they are excluded too from the solutions to Examples 9.5 and 9.6 in this chapter. Spreadsheets *Example 9.5.xls* and *Example 9.6.xls*, however, offer the choice whether to include the depth factors or not.

While the design procedure required to satisfy the conditions of Eurocode 7 involves essentially the same methods as we have seen so far in this chapter, there are a few differences listed in Annex D which can be considered for drained conditions. These concern the shape and inclination factors as well as the bearing resistance factor, N_{γ} , and are listed below:

$$\begin{aligned}
 N_{\gamma} &= 2(N_q - 1) \tan \phi' && \text{(for a rough base, such as a typical foundation)} \\
 s_q &= 1 + (B'/L') \sin \phi' && \text{(for a rectangular foundation)} \\
 s_q &= 1 + \sin \phi' && \text{(for a square or circular foundation)} \\
 s_{\gamma} &= 1 - 0.3(B'/L') && \text{(for a rectangular foundation)} \\
 s_{\gamma} &= 0.7 && \text{(for a square or circular foundation)} \\
 s_c &= \frac{s_q N_q - 1}{N_q - 1} && \text{(rectangular, square and circle foundation)} \\
 i_c &= i_q - \left(\frac{1 - i_q}{N_c \tan \phi'} \right); && i_q = \left[1 - \frac{H}{V + A'c' \cot \phi'} \right]^m; && i_{\gamma} = i_q^{\frac{(m+1)}{m}}
 \end{aligned}$$

where

V = vertical load acting on foundation

H = horizontal load (or component of inclined load) acting on foundation

A' = design effective area of foundation

$$\begin{aligned}
 m = m_B &= \frac{2 + \frac{B'}{L'}}{1 + \frac{B'}{L'}} && \text{when } H \text{ acts in the direction of } B'; \\
 m = m_L &= \frac{2 + \frac{L'}{B'}}{1 + \frac{L'}{B'}} && \text{when } H \text{ acts in the direction of } L'.
 \end{aligned}$$

Eurocode 7 also states that the vertical total action should include the weight of any backfill acting on top of the foundation in addition to the weight of the foundation itself plus the applied load it is carrying.

Example 9.5: Traditional, and Eurocode 7, approaches (i)

A continuous footing is 1.8m wide by 0.5m deep and is founded at a depth of 0.75m in a clay soil of unit weight 20 kN/m^3 and $c_u = 30 \text{ kPa}$. The foundation is to carry a vertical line load of magnitude 50 kN/m run, which will act at a distance of 0.4 m from the centre-line. Take the weight density of concrete as 24 kN/m^3 .

- (i) Determine the safe bearing capacity for the footing, taking $F = 3.0$.
- (ii) Check the Eurocode 7 GEO limit state (Design Approach 1) by establishing the magnitude of the over-design factor.

Solution:

(i) Safe bearing capacity

Self-weight of foundation, $W_f = 0.5 \times 24 \times 1.8 = 21.6 \text{ kN/m run}$

Weight of soil on top of foundation, $W_s = 0.25 \times 20 \times 1.8 = 9.0 \text{ kN/m run}$

Total weight of foundation + soil, $W = 21.6 + 9.0 = 30.6 \text{ kN/m run}$

$$\text{Eccentricity of bearing pressure, } e = \frac{P \times e_p}{P + W} = \frac{50 \times 0.4}{50 + 30.6} = 0.25 \text{ m}$$

Since $e \leq \frac{B}{6}$, the total force acts within the middle third of the foundation.

Effective width of footing, $B' = 1.8 - 2 \times 0.25 = 1.3 \text{ m}$

From Table 9.1, for $\phi_u = 0^\circ$, $N_c = 5.14$, $N_q = 1.0$, $N_\gamma = 0$.

Footing is continuous, i.e. $L \rightarrow \infty$; $s_c = 1.0$.

$$d_c = 1 + 0.4 \left(\frac{0.75}{1.3} \right) = 1.23$$

$$\begin{aligned} \text{Safe bearing capacity (per metre run)} &= \frac{q_{u, \text{net}}}{3} + \gamma z = \frac{cN_c s_c d_c - \gamma z}{3} + \gamma z \\ &= \frac{30 \times 5.14 \times 1.0 \times 1.23 - 20 \times 0.75}{3} + 20 \times 0.75 \\ &= 73.2 \text{ kPa} \end{aligned}$$

Safe bearing load = $73.2 \times B' = 95.2 \text{ kN/m run}$

(ii) Eurocode 7 GEO limit state

1. Combination 1 (partial factor sets A1 + M1 + R1)

From Table 5.1: $\gamma_{G, \text{unfav}} = 1.35$; $\gamma_Q = 1.5$; $\gamma_{cu} = 1.0$; $\gamma_{Rv} = 1.0$.

$$\text{Design material property: } c_{u,d} = \frac{c_u}{\gamma_{cu}} = \frac{30}{1} = 30 \text{ kPa}$$

Design actions:

Weight of foundation, $W_d = W \times \gamma_{G, \text{unfav}} = 30.6 \times 1.35 = 41.3 \text{ kN/m run}$

Applied line load, $P_d = P \times \gamma_{G, \text{unfav}} = 50 \times 1.35 = 67.5 \text{ kN/m run}$

Effect of design actions:

Total vertical force, $F_d = 41.3 + 67.5 = 108.8 \text{ kN/m run}$

$$\text{Eccentricity, } e = \frac{P_d \times e_p}{P_d + W_d} = \frac{67.5 \times 0.4}{67.5 + 41.3} = 0.248 \text{ m}$$

Since $e \leq \frac{B}{6}$, the total force acts within the middle-third of the foundation.

Effective width of footing, $B' = 1.8 - 2 \times 0.248 = 1.3 \text{ m}$

Design resistance:

From before, $N_c = 5.14$, $N_q = 1.0$, $N_\gamma = 0$, $s_c = 1.0$.

$$\begin{aligned} \text{Ultimate bearing capacity, } q_u &= c_{u,d} N_c s_c + \gamma z N_q \\ &= 30 \times 5.14 \times 1 + 20 \times 0.75 \times 1.0 \\ &= 169.2 \text{ kPa} \end{aligned}$$

Ultimate bearing capacity per metre run, $Q_u = 169.2 \times 1.3 = 220 \text{ kN/m run}$

$$\text{Bearing resistance, } R_d = \frac{Q_u}{\gamma_{Rv}} = \frac{220}{1} = 220 \text{ kN/m run}$$

$$\text{Over-design factor, } \Gamma = \frac{R_d}{F_d} = \frac{220}{108.8} = 2.03$$

Since $\Gamma > 1$, the GEO limit state requirement is satisfied.

2. *Combination 2 (partial factor sets A2 + M2 + R1)*

The calculations are the same as for Combination 1 except that this time the following partial factors (from Table 5.1) are used: $\gamma_{G, \text{unfav}} = 1.0$; $\gamma_Q = 1.3$; $\gamma_{cu} = 1.40$; $\gamma_{Rv} = 1.0$.

$$c_{u,d} = 21.4 \text{ kPa}$$

$$W_d = 30.6 \times \gamma_{G, \text{unfav}} = 30.6 \text{ kN/m run}$$

$$P_d = 50.0 \times \gamma_{G, \text{unfav}} = 50.0 \text{ kN/m run}$$

$$F_d = 30.6 + 50.0 = 80.6 \text{ kN/m run}$$

$$e = 0.248 \text{ m; } B' = 1.3 \text{ m}$$

$$Q_u = (c_{u,d} N_{cs} + \gamma z N_q) \times B' = 125.1 \times 1.3 = 163.1 \text{ kN/m run}$$

$$R_d = \frac{Q_u}{\gamma_{Rv}} = \frac{163.1}{1} = 163.1 \text{ kN/m run}$$

$$\Gamma = \frac{R_d}{F_d} = \frac{163.1}{80.6} = 2.02$$

Since $\Gamma > 1$, the GEO limit state requirement is satisfied.

Example 9.6: Traditional, and Eurocode 7, approaches (ii)

A concrete foundation 3 m wide, 9 m long and 0.75 m deep is to be founded at a depth of 1.5 m in a deep deposit of dense sand. The angle of shearing resistance of the sand is 35° and its unit weight is 19 kN/m^3 . The unit weight of concrete is 24 kN/m^3 .

- (a) Using a lumped factor of safety approach (take $F = 3.0$):
 - (i) Determine the safe bearing capacity for the foundation.
 - (ii) Determine the safe bearing capacity of the foundation if it is subjected to a vertical line load of 220 kN/m at an eccentricity of 0.3 m , together with a horizontal line load of 50 kN/m acting at the base of the foundation as illustrated in Figure 9.10.
- (b) For the situation described in (ii) above, establish the magnitude of the over-design factor for the Eurocode 7 GEO limit state, using Design Approach 1.

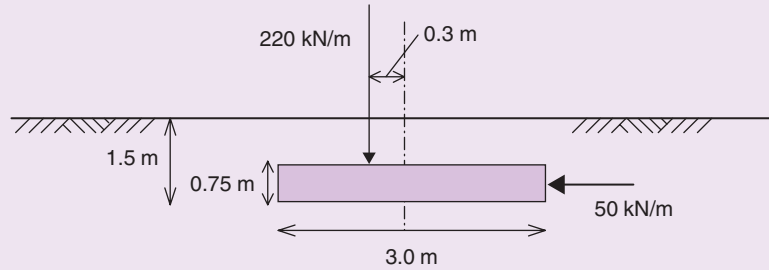


Fig. 9.10 Example 9.6.

Solution:

(a) Lumped factor of safety

(i)

Safe bearing capacity

$$\begin{aligned}
 &= \frac{q_{u, \text{net}}}{3} + \gamma z \\
 &= \frac{\gamma z (N_q s_q d_q - 1) + 0.5 \gamma B N_\gamma s_\gamma d_\gamma}{3} + \gamma z
 \end{aligned}$$

 From Table 9.1, for $\phi' = 35^\circ$, $N_q = 33.3$, $N_\gamma = 45.23$:

$$s_q = 1 + \left(\frac{3}{9}\right) \tan 35^\circ = 1.23; \quad s_\gamma = 1 - 0.4 \left(\frac{3}{9}\right) = 0.87$$

$$d_q = 1 + 2 \tan 35^\circ (1 - \sin 35^\circ)^2 \left(\frac{1.5}{3}\right) = 1.13; \quad d_\gamma = 1$$

Safe bearing capacity

$$\begin{aligned}
 &= \frac{19 \times 1.5 (33.3 \times 1.23 \times 1.13 - 1) + 0.5 \times 19 \times 3 \times 45.23 \times 0.87 \times 1.0}{3} + 19 \times 1.5 \\
 &= 832.5 \text{ kPa}
 \end{aligned}$$

(ii)

 Self-weight of foundation, $W = 0.75 \times 9 \times 3 \times 24 = 486 \text{ kN}$

 Total applied vertical load, $P = 220 \times 9 = 1980 \text{ kN}$

 Total applied horizontal load, $H = 50 \times 9 = 450 \text{ kN}$

 Total vertical load acting on soil, $V = 486 + 1980 = 2466 \text{ kN}$

Eccentricity of bearing pressure

$$e = \frac{P \times e_p}{P + W} = \frac{1980 \times 0.3}{2466} = 0.24 \text{ m}$$

 Since $e \leq \frac{B}{6}$, the total force acts within the middle-third of the foundation.

 Effective width of footing, $B' = 3.0 - 2 \times 0.24 = 2.52 \text{ m}$

 The foundation is effectively acted upon by a load of magnitude, F inclined at an angle to the vertical, α :

$$F = \sqrt{V^2 + H^2} = \sqrt{2466^2 + 450^2} = 2506.7 \text{ kN}$$

$$\alpha = \tan^{-1}\left(\frac{450}{2466}\right) = 10.3^\circ$$

$$i_q = \left(1 - \frac{10.3}{90}\right)^2 = 0.78; \quad i_\gamma = \left(1 - \frac{10.3}{35}\right)^2 = 0.50$$

$$s_q = 1 + \left(\frac{2.52}{9}\right) \tan 35^\circ = 1.2; \quad s_\gamma = 1 \times 0.4 \left(\frac{2.52}{9}\right) = 0.89$$

$$d_q = 1 + 2 \tan 35^\circ (1 - \sin 35^\circ)^2 \left(\frac{1.5}{2.52}\right) = 1.15; \quad d_\gamma = 1$$

Safe bearing capacity

$$\begin{aligned} &= \frac{\gamma z (N_q s_q d_q i_q - 1) + 0.5 \gamma B' N_\gamma s_\gamma d_\gamma i_\gamma}{3} + \gamma z \\ &= \frac{19 \times 1.5 (33.3 \times 1.2 \times 1.15 \times 0.78 - 1) + 0.5 \times 19 \times 2.52 \times 45.23 \times 0.89 \times 1.0 \times 0.5}{3} + 19 \times 1.5 \\ &= 520 \text{ kPa} \end{aligned}$$

(b) Eurocode 7

Weight of soil on top of foundation, $W_s = 0.75 \times 9 \times 3 \times 19 = 384.8 \text{ kN}$

Total weight of foundation + soil, $W = 486 + 384.8 = 870.8 \text{ kN}$

1. *Combination 1 (partial factor sets A1 + M1 + R1)*

From Table 5.1: $\gamma_{G, \text{unfav}} = 1.35$; $\gamma_Q = 1.5$; $\gamma_{\phi'} = 1.0$; $\gamma_{Rv} = 1.0$.

$$\text{Design material property: } \phi'_d = \tan^{-1}\left(\frac{\tan \phi'}{\gamma_{\phi'}}\right) = 35^\circ$$

Design actions:

Weight of foundation, $W_d = W \times \gamma_{G, \text{unfav}} = 870.8 \times 1.35 = 1175.6 \text{ kN}$

Applied vertical line load, $P_d = P \times \gamma_{G, \text{unfav}} = 1980 \times 1.35 = 2673 \text{ kN}$

Applied horizontal line load, $H_d = H \times \gamma_{G, \text{unfav}} = 450 \times 1.35 = 607.5 \text{ kN}$

Effect of design actions:

Total vertical force, $F_d = W_d + P_d = 1175.6 + 2673 = 3848.6 \text{ kN}$

$$\text{Eccentricity, } e = \frac{P_d \times e_p}{P_d + W_d} = \frac{2673 \times 0.3}{3848.6} = 0.208 \text{ m}$$

Since $e \leq \frac{B}{6}$, the total force acts within the middle-third of the foundation.

Effective width of footing, $B' = 3.0 - 2 \times 0.208 = 2.58 \text{ m}$

Effective area of footing, $A' = 2.58 \times 9 = 23.2 \text{ m}^2$

Design resistance:

From Table 9.1, $N_c = 46.1$, $N_q = 33.3$, $N_\gamma = 45.23$

From Eurocode 7, Annex D,

$$s_q = 1 + \frac{B'}{L} \sin \phi' = 1 + \left(\frac{2.58}{9}\right) \sin 35^\circ = 1.16$$

$$s_c = \frac{s_q N_q - 1}{N_q - 1} = 1.17$$

$$s_\gamma = 1 - 0.3 \left(\frac{B'}{L} \right) = 0.91$$

$$m = \frac{2 + \frac{B'}{L}}{1 + \frac{B'}{L}} = 1.78$$

$$i_q = \left[1 - \frac{H}{V + A'c' \cot \phi'} \right]^m = \left[1 - \frac{607.5}{3848.6 + 0} \right]^{1.78} = 0.74 \quad (V = F_d)$$

$$i_c = i_q - \left(\frac{1 - i_q}{N_c \tan \phi'} \right) = 0.74 - \left(\frac{1 - 0.74}{46.1 \tan 35^\circ} \right) = 0.72$$

$$i_\gamma = i_q^{\left(\frac{m+1}{m} \right)} = 0.74^{1.78} = 0.62$$

Ultimate bearing capacity, per m^2 ,

$$\begin{aligned} q_u &= c'_d N_c s_c i_c + \gamma_d z N_q s_q i_q + 0.5 B' \gamma_d N_\gamma s_\gamma i_\gamma \\ &= 0 + (19 \times 1.5 \times 33.3 \times 1.16 \times 0.74) + (0.5 \times 2.58 \times 19 \times 45.2 \times 0.91 \times 0.62) \\ &= 1439 \text{ kPa} \end{aligned}$$

Ultimate bearing capacity, $Q_u = q_u \times L \times B' = 1439 \times 9 \times 2.58 = 33\,414 \text{ kN}$

$$\text{Bearing resistance, } R_d = \frac{Q_u}{\gamma_{Rv}} = \frac{33\,414}{1} = 33\,414 \text{ kN}$$

$$\text{Over-design factor, } \Gamma = \frac{R_d}{F_d} = \frac{33\,414}{3848.6} = 8.68$$

Since $\Gamma > 1$, the GEO limit state requirement is satisfied.

2. Combination 2 (partial factor sets A2 + M2 + R1)

The calculations are the same as for Combination 1 except that this time the following partial factors (from Table 5.1) are used: $\gamma_{G;unfav} = 1.0$; $\gamma_\Omega = 1.3$; $\gamma_{\phi'} = 1.25$; $\gamma_{Rv} = 1.0$.

$$\phi'_d = \tan^{-1} \left(\frac{\tan \phi'}{\gamma_{\phi'}} \right) = \tan^{-1} \left(\frac{\tan 35^\circ}{1.25} \right) = 29.3^\circ$$

$$W_d = 870.8 \times \gamma_G = 870.8 \text{ kN}$$

$$P_d = 1980 \times \gamma_G = 1980 \text{ kN}$$

$$H_d = 450 \times \gamma_G = 450 \text{ kN}$$

$$e = \frac{P_d \times e_p}{P_d + W_d} = \frac{1980 \times 0.3}{1980 + 870.8} = 0.208 \text{ m} \quad (\text{within the middle-third})$$

$$B' = 3.0 - 2 \times 0.208 = 2.58 \text{ m}$$

$$N_q = 16.9, N_\gamma = 17.8, s_q = 1.14, s_\gamma = 0.91, i_q = 0.74, i_\gamma = 0.62.$$

Ultimate bearing capacity, per m^2 ,

$$\begin{aligned} q_u &= c'_d N_c s_c i_c + \gamma z N_q s_q i_q + 0.5 B' \gamma N_\gamma s_\gamma i_\gamma \\ &= 653.5 \text{ kPa} \end{aligned}$$

Ultimate bearing capacity, $Q_u = 653.5 \times L \times B' = 15\,174 \text{ kN}$

$$\text{Bearing resistance, } R_d = \frac{Q_u}{\gamma_{Rv}} = \frac{15\,174}{1} = 15\,174 \text{ kN}$$

$$\text{Over-design factor, } \Gamma = \frac{R_d}{F_d} = \frac{15\,174}{2850.1} = 5.32$$

Since $\Gamma > 1$, the GEO limit state requirement is satisfied.

Example 9.7: Bearing resistance – undrained & drained

It is proposed to place a $2 \text{ m} \times 2 \text{ m}$ square footing at a depth of 1.5 m in a glacial clay soil as shown in Figure 9.11. The 0.5 m thick footing is to support a $0.4 \text{ m} \times 0.4 \text{ m}$ centrally located square column which will carry a vertical characteristic permanent load of 800 kN and a vertical characteristic transient load of 350 kN . Take the unit weight of reinforced concrete, γ_{concrete} as 25 kN/m^3 .

The soil has the following properties:

undrained shear strength, $c_u = 200 \text{ kPa}$

effective cohesion, $c' = 0 \text{ kPa}$

angle of shearing resistance, $\phi' = 28^\circ$

weight density, $\gamma = 20 \text{ kN/m}^3$

The ground water table is coincident with the base of the foundation.

Check compliance of the bearing resistance limit state using Design Approach 1 for:

- i. the *short-term* state;
- ii. the *long-term* state;

Solution:

(i) *Representative actions:*

Self weight of concrete:

$$\begin{aligned} W_{\text{concrete}} &= (B \times L \times t + B_{\text{col}} \times L_{\text{col}} \times (z - t)) \times \gamma_{\text{concrete}} \\ &= [(2.0 \times 2.0 \times 0.5) + (0.4 \times 0.4 \times 1.0)] \times 25 \\ &= 54.0 \text{ kN} \end{aligned}$$

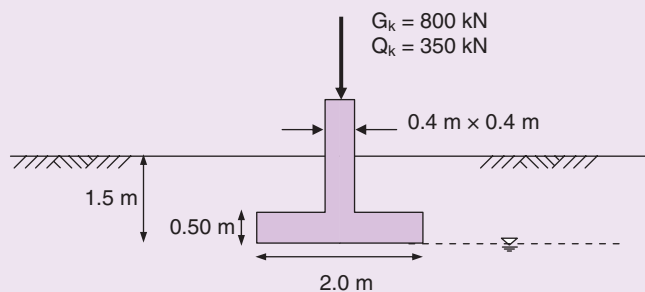


Fig. 9.11 Example 9.7.

Self weight of soil:

$$\begin{aligned} W_{\text{soil}} &= (B \times L - B_{\text{col}} \times L_{\text{col}}) \times (z - t) \times \gamma_{\text{soil}} \\ &= (2.0 \times 2.0 - 0.4 \times 0.4) \times (1.5 - 0.5) \times 20 \\ &= 76.8 \text{ kN} \end{aligned}$$

i/ short-term state

1. *Combination 1 (partial factor sets A1 + M1 + R1)*

From Table 5.1: $\gamma_{G, \text{unfav}} = 1.35$; $\gamma_{G, \text{fav}} = 1.0$; $\gamma_Q = 1.5$; $\gamma_{cu} = 1.0$; $\gamma_\gamma = 1.0$; $\gamma_{Rv} = 1.0$.

(ii) *Design actions:*

Design value of self weight of concrete and soil (unfavourable, permanent action):

$$\begin{aligned} W_d &= (W_{\text{concrete}} + W_{\text{soil}}) \times \gamma_{G, \text{unfav}} \\ &= (54.0 + 76.8) \times 1.35 = 176.6 \text{ kN} \end{aligned}$$

Design value of the vertical structural (unfavourable) actions:

$$V_d = V_G \times \gamma_{G, \text{unfav}} + V_Q \times \gamma_{Q, \text{unfav}} = (800 \times 1.35) + (350 \times 1.5) = 1605 \text{ kN}$$

Design effect of actions (i.e. sum of vertical forces):

$$F_d = W_d + V_d = 176.6 + 1605 = 1781.6 \text{ kN}$$

Overburden pressure: $q = \gamma_{\text{soil}} z = 20 \times 1.5 = 30 \text{ kPa}$

(iii) *Design material properties:*

$$\text{Design cohesion: } c_{u,d} = \left(\frac{c_{u,k}}{\gamma_{cu}} \right) = \frac{200}{1} = 200 \text{ kPa}$$

$$\text{Design weight density of soil: } \gamma_d = \left(\frac{\gamma_k}{\gamma_\gamma} \right) = \frac{20}{1} = 20 \text{ kN/m}^3$$

(iv) *Design geometry:*

No eccentric loading, $\Rightarrow A' = B \times L = 2.0 \times 2.0 = 4.0 \text{ m}^2$

No inclined loading, $\Rightarrow i_c = 1.0$

Foundation base horizontal, $\Rightarrow b_c = 1.0$

$s_c = 1.2$ (EN 1997-1: 2004, Annex D)

(v) *Bearing resistance:*

$$R / A' = (\pi + 2)c_u b_c s_c i_c + q$$

$$R_k = 4.0 \times [(5.14 \times 200 \times 1.0 \times 1.2 \times 1.0) + 30] = 5054.4 \text{ kN}$$

$$R_d = \frac{R_k}{\gamma_{Rv}} = \frac{5054.4}{1.0} = 5054.4 \text{ kN}$$

From the results it is seen that the GEO limit state requirement is satisfied since the design bearing resistance (5054.4 kN) is greater than the design effects of actions (1781.6 kN).

$$\text{Over-design factor, } \Gamma = \frac{R_d}{F_d} = \frac{5054.4}{1781.6} = 2.84$$

2. *Combination 2 (partial factor sets A2 + M2 + R1)*

From Table 5.1: $\gamma_{G, \text{unfav}} = 1.0$; $\gamma_{G, \text{fav}} = 1.0$; $\gamma_Q = 1.3$; $\gamma_{cu} = 1.4$; $\gamma_\gamma = 1.0$; $\gamma_{Rv} = 1.0$.

(ii) *Design actions:*

Design value of self weight of concrete and soil (unfavourable, permanent action):

$$\begin{aligned} W_d &= (W_{\text{concrete}} + W_{\text{soil}}) \times \gamma_{G,\text{unfav}} \\ &= (54.0 + 76.8) \times 1.0 = 130.8 \text{ kN} \end{aligned}$$

Design value of the vertical structural (unfavourable) actions:

$$V_d = V_G \times \gamma_{G,\text{unfav}} + V_Q \times \gamma_{Q,\text{unfav}} = (800 \times 1.0) + (350 \times 1.3) = 1255 \text{ kN}$$

Design effect of actions (i.e. sum of vertical forces):

$$F_d = W_d + V_d = 130.8 + 1255 = 1385.8 \text{ kN}$$

(iii) *Design material properties:*

$$\text{Design cohesion: } c_{u,d} = \left(\frac{c_{u,k}}{\gamma_{cu}} \right) = \frac{200}{1.4} = 142.9 \text{ kPa}$$

$$\text{Design weight density of soil: } \gamma_d = \left(\frac{\gamma_k}{\gamma_\gamma} \right) = \frac{20}{1} = 20 \text{ kN/m}^3$$

(iv) *Design geometry:*

$$\text{No eccentric loading, } \Rightarrow A' = B \times L = 2.0 \times 2.0 = 4.0 \text{ m}^2$$

$$\text{No inclined loading, } \Rightarrow i_c = 1.0$$

$$\text{Foundation base horizontal, } \Rightarrow b_c = 1.0$$

$$s_c = 1.2 \text{ (EN 1997-1: 2004, Annex D)}$$

(v) *Bearing resistance:*

$$R / A' = (\pi + 2)c_u b_c s_c i_c + q$$

$$R_k = 4.0 \times [(5.14 \times 142.9 \times 1.0 \times 1.2 \times 1.0) + 30] = 3645.6 \text{ kN}$$

$$R_d = \frac{R_k}{\gamma_{Rv}} = \frac{3645.6}{1.0} = 3645.6 \text{ kN}$$

GEO limit state requirement satisfied since design bearing resistance (3645.6 kN) > design effects of actions (1385.8 kN).

$$\text{Over-design factor, } \Gamma = \frac{R_d}{F_d} = \frac{3645.6}{1385.8} = 2.63$$

ii/ long-term state

The ground water level is taken as coincident with the ground surface (see Section 9.5.2 and EN 1997-1:2004 §2.4.6.1(11)).

(11) *Unless the adequacy of the drainage system can be demonstrated and its maintenance ensured, the design ground-water table should be taken as the maximum possible level, which may be the ground surface.*

EN 1997-1:2004 §2.4.6.1(11)

1. Combination 1 (partial factor sets A1 + M1 + R1)

From Table 5.1: $\gamma_{G,\text{unfav}} = 1.35$; $\gamma_{G,\text{fav}} = 1.0$; $\gamma_Q = 1.5$; $\gamma_{\phi'} = 1.0$; $\gamma_\gamma = 1.0$; $\gamma_{Rv} = 1.0$.

(ii) Design actions:

To consider the effects of the buoyant uplift, we can either use the submerged weight of the whole footing, or use the total weight and subtract the uplift force due to water pressure under foundation.

Design value of self weight of concrete and soil (unfavourable, permanent action):

$$\begin{aligned} W_d &= (W_{\text{concrete}} + W_{\text{soil}}) \times \gamma_{G,\text{unfav}} \\ &= (54.0 + 76.8) \times 1.35 = 176.6 \text{ kN} \end{aligned}$$

Design value of the vertical structural (unfavourable) actions:

$$V_d = V_G \times \gamma_{G,\text{unfav}} + V_Q \times \gamma_{Q,\text{unfav}} = (800 \times 1.35) + (350 \times 1.5) = 1605 \text{ kN}$$

Design value of water pressure under the base (unfavourable (negative) action – from Single Source Principal):

$$U_d = U \times \gamma_{G,\text{unfav}} = (-1.5 \times 2.0 \times 2.0 \times 9.81) \times 1.35 = -79.5 \text{ kN}$$

Design effect of actions (i.e. sum of vertical forces):

$$F_d = W_d + V_d + U_d = 176.6 + 1605 - 79.5 = 1702.1 \text{ kN}$$

$$\text{Overburden pressure: } q = \gamma_{\text{soil}} z = (20 - 9.81) \times 1.5 = 15.29 \text{ kPa}$$

(iii) Design material properties:

$$\text{Design angle of shearing resistance: } \phi'_d = \tan^{-1} \left(\frac{\tan \phi'}{\gamma_{\phi'}} \right) = \tan^{-1} \left(\frac{\tan 28^\circ}{1.0} \right) = 28.0^\circ$$

$$\text{Design weight density of soil: } \gamma_d = \left(\frac{\gamma_k}{\gamma_\gamma} \right) = \frac{20}{1} = 20 \text{ kN/m}^3$$

(iv) Design geometry:

No eccentric loading, $\Rightarrow A' = B \times L = 2.0 \times 2.0 = 4.0 \text{ m}^2$

No inclined loading, $\Rightarrow i_c = 1.0$

Foundation base horizontal, $\Rightarrow b_c = 1.0$

From EN 1997-1: 2004, Annex D:

$$N_q = e^{-\pi \cdot \tan \phi'} \tan^2 \left(45 + \frac{\phi'}{2} \right) = 14.72$$

$$N_\gamma = 2(N_q - 1) \tan \phi'_d = 14.59$$

$$s_q = 1 + \sin \phi' = 1.47$$

$$s_\gamma = 0.7$$

(v) Bearing resistance:

$$R/A' = c' N_c b_c s_c i_c + q' N_q b_q s_q i_q + 0.5 \gamma B' N_\gamma b_\gamma s_\gamma i_\gamma$$

$$\begin{aligned} R_k &= 4.0 \times [0 + (15.29 \times 14.72 \times 1.0 \times 1.47 \times 1.0) + (0.5 \times (20 - 9.81) \\ &\quad \times 2.0 \times 14.59 \times 1.0 \times 0.7 \times 1.0)] = 1738.8 \text{ kN} \end{aligned}$$

$$R_d = \frac{R_k}{\gamma_{Rv}} = \frac{1738.8}{1.0} = 1738.8 \text{ kN}$$

GEO limit state requirement satisfied since design bearing resistance (1738.8 kN) > design effects of actions (1702.1 kN).

$$\text{Over-design factor, } \Gamma = \frac{R_d}{F_d} = \frac{1738.8}{1702.1} = 1.02$$

2. *Combination 2 (partial factor sets A2 + M2 + R1)*

From Table 5.1: $\gamma_{G, unfav} = 1.0$; $\gamma_{G, fav} = 1.0$; $\gamma_Q = 1.3$; $\gamma_{\phi'} = 1.25$; $\gamma_\gamma = 1.0$; $\gamma_{Rv} = 1.0$.

(ii) *Design actions:*

Again we use the total weight of the foundation and subtract the uplift force due to water pressure under foundation.

Design value of self weight of concrete and soil (unfavourable, permanent action):

$$\begin{aligned} W_d &= (W_{\text{concrete}} + W_{\text{soil}}) \times \gamma_{G, unfav} \\ &= (54.0 + 76.8) \times 1.0 = 130.8 \text{ kN} \end{aligned}$$

Design value of the vertical structural (unfavourable) actions:

$$V_d = V_G \times \gamma_{G, unfav} + V_Q \times \gamma_{Q, unfav} = (800 \times 1.0) + (350 \times 1.3) = 1255 \text{ kN}$$

Design value of water pressure under the base (unfavourable (negative) action – from Single Source Principal):

$$U_d = U \times \gamma_{G, unfav} = (-1.5 \times 2.0 \times 2.0 \times 9.81) \times 1.0 = -58.9 \text{ kN}$$

Design effect of actions (i.e. sum of vertical forces):

$$F_d = W_d + V_d + U_d = 130.8 + 1255 - 58.9 = 1326.9 \text{ kN}$$

Overburden pressure: $q = \gamma_{\text{soil}} z = (20 - 9.81) \times 1.5 = 15.29 \text{ kPa}$

(iii) *Design material properties:*

$$\text{Design angle of shearing resistance: } \phi'_d = \tan^{-1} \left(\frac{\tan \phi'}{\gamma_{\phi'}} \right) = \tan^{-1} \left(\frac{\tan 28^\circ}{1.25} \right) = 23.0^\circ$$

$$\text{Design weight density of soil: } \gamma_d = \left(\frac{\gamma_k}{\gamma_\gamma} \right) = \frac{20}{1} = 20 \text{ kN/m}^3$$

(iv) *Design geometry:*

No eccentric loading, $\Rightarrow A' = B \times L = 2.0 \times 2.0 = 4.0 \text{ m}^2$

No inclined loading, $\Rightarrow i_c = 1.0$

Foundation base horizontal, $\Rightarrow b_c = 1.0$

From EN 1997-1: 2004, Annex D:

$$N_q = e^{\pi \tan \phi'} \tan^2 \left(45 + \frac{\phi'}{2} \right) = 8.7$$

$$N_\gamma = 2(N_q - 1) \tan \phi'_d = 6.55$$

$$s_q = 1 + \sin \phi' = 1.39$$

$$s_\gamma = 0.7$$

(v) *Bearing resistance:*

$$R/A' = c' N_c b_c s_c i_c + q' N_q b_q s_q i_q + 0.5 \gamma B' N_\gamma b_\gamma s_\gamma i_\gamma$$

$$\begin{aligned} R_k &= 4.0 \times [0 + (15.29 \times 8.7 \times 1.0 \times 1.39 \times 1.0) + (0.5 \times (20 - 9.81) \\ &\quad \times 2.0 \times 6.55 \times 1.0 \times 0.7 \times 1.0)] = 926.5 \text{ kN} \end{aligned}$$

$$R_d = \frac{R_k}{\gamma_{Rv}} = \frac{926.5}{1.0} = 926.5 \text{ kN}$$

GEO limit state requirement NOT satisfied since design bearing resistance (926.5 kN) < design effects of actions (1326.9 kN).

$$\text{Over-design factor, } \Gamma = \frac{R_d}{F_d} = \frac{926.5}{1326.9} = 0.70$$

This example illustrates the need to check the limit state requirements for both combinations and for both the undrained and the drained states. In this case, the footing is inadequately designed and the dimensions of the footing would have to be increased to ensure the requirements are met in all cases.

Example 9.8: Bearing resistance – vertical and horizontal loading

In accordance with Eurocode 7, Design Approach 2, check compliance of the bearing resistance limit state under drained conditions of the square pad foundation shown in Figure 9.12.

The footing is supporting a concentric square column which is carrying both permanent and variable vertical loading, together with a transient horizontal load applied as shown.

The ground water table is coincident with the ground surface, and the following data is provided:

Characteristic vertical permanent load, $V_{G,k}$	= 800 kN
Characteristic vertical transient load, $V_{Q,k}$	= 400 kN
Weight density of soil, γ_{soil}	= 19.0 kN/m ³
Effective cohesion, c'	= 0 kPa
Angle of shearing resistance, ϕ'	= 30°
Characteristic horizontal transient load, H_Q	= 100 kN
Weight density of concrete, γ_{concrete}	= 24 kN/m ³

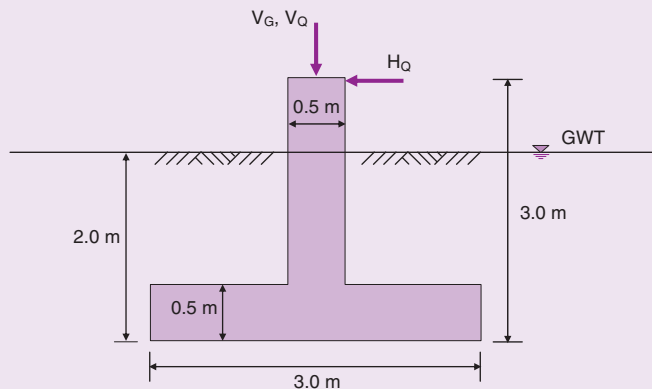


Fig. 9.12 Example 9.8.

Solution:(i) *Representative actions:*

Self weight of concrete:

$$\begin{aligned} W_{\text{concrete}} &= (B \times L \times t + B_{\text{col}} \times L_{\text{col}} \times (z - t)) \gamma_{\text{concrete}} \\ &= [(3.0 \times 3.0 \times 0.5) + (0.5 \times 0.5 \times 1.5)] \times 24 \\ &= 117.0 \text{ kN} \end{aligned}$$

Uplift thrust under the base of foundation:

$$U = -d_w \times B \times L \gamma_w = -2.0 \times 3.0 \times 3.0 \times 9.81 = -176.6 \text{ kN}$$

Self weight of soil:

$$\begin{aligned} W_{\text{soil}} &= (B \times L - B_{\text{col}} \times L_{\text{col}}) \times (z - t) \gamma_{\text{soil}} \\ &= (3.0 \times 3.0 - 0.5 \times 0.5) \times (2.0 - 0.5) \times 19 \\ &= 249.4 \text{ kN} \end{aligned}$$

Overburden pressure: $q' = \gamma_{\text{soil}} z = (19 - 9.81) \times 2.0 = 18.4 \text{ kPa}$ **Design Approach 2 (partial factor sets A1 + M1 + R2)**From Table 5.1: $\gamma_{G, \text{unfav}} = 1.35$; $\gamma_{G, \text{fav}} = 1.0$; $\gamma_Q = 1.5$; $\gamma_\phi = 1.0$; $\gamma_\gamma = 1.0$; $\gamma_{Rv} = 1.4$.(ii) *Design actions:*

Design value of self weight of concrete and soil (unfavourable, permanent action):

$$\begin{aligned} W_d &= (W_{\text{concrete}} + W_{\text{soil}}) \gamma_{G, \text{unfav}} \\ &= (117.0 + 249.4) \times 1.35 = 494.6 \text{ kN} \end{aligned}$$

Design value of the vertical structural actions:

$$V_d = V_G \times \gamma_{G, \text{unfav}} + V_Q \times \gamma_{Q, \text{unfav}} = (800 \times 1.35) + (400 \times 1.5) = 1680 \text{ kN}$$

Design value of water pressure under the base (unfavourable (negative) action):

$$U_d = U \times \gamma_{G, \text{unfav}} = -176.6 \times 1.35 = -238.4 \text{ kN}$$

Design effect of actions (i.e. sum of vertical forces):

$$F_d = W_d + V_d + U_d = 494.6 + 1680 - 238.4 = 1936.2 \text{ kN}$$

Design value of the horizontal structural transient action:

$$H_d = H_Q \times \gamma_Q = 100 \times 1.5 = 150 \text{ kN}$$

(iii) *Material properties:*

$$\text{Design cohesion: } c'_d = \left(\frac{c'_k}{\gamma_{c'}} \right) = 0 \text{ kPa}$$

$$\text{Design angle of shearing resistance: } \phi'_d = \tan^{-1} \left(\frac{\tan \phi'_k}{\gamma_{\phi'}} \right) = \tan^{-1} \left(\frac{\tan 30^\circ}{1.0} \right) = 30.0^\circ$$

$$\text{Design weight density of soil: } \gamma_d = \left(\frac{\gamma_k}{\gamma_\gamma} \right) = \frac{19}{1} = 19 \text{ kN/m}^3$$

(iv) *Design geometry:*The horizontal force will induce an eccentric loading. The magnitude of e can be determined by considering moments about mid-point of base of footing.

$$V \times e = H_d \times x_H \quad (V \equiv F_d)$$

$$e = \frac{H_d \times x_H}{V} = \frac{150 \times 3}{1936.2} = 0.232 \text{ m} \quad (\text{acts within middle third})$$

$$B' = B - 2 \times e = 3.0 - 2 \times 0.232 = 2.535 \text{ m}$$

$$\Rightarrow A' = B' \times L = 2.535 \times 3.0 = 7.606 \text{ m}^2$$

From EN 1994-1: 2004, Annex D:

$$N_q = e^{-\pi \tan \phi'} \tan^2 \left(45 + \frac{\phi'}{2} \right) = 18.4$$

$$N_\gamma = 2(N_q - 1) \tan \phi'_d = 20.1$$

$$m = \frac{2 + \frac{B'}{L}}{1 + \frac{B'}{L}} = 1.542$$

$$i_q = \left[1 - \frac{H}{V + A' c' \cot \phi'} \right]^m = \left[1 - \frac{150.0}{1936.2 + 0} \right]^{1.542} = 0.88 \quad (V = F_d)$$

$$i_\gamma = \left(\frac{m+1}{m} \right) i_q = 0.88^{2.542/1.542} = 0.81$$

$$s_q = 1 + \frac{B'}{L} \sin \phi' = 1.42$$

$$s_\gamma = 1 - 0.3 \left(\frac{B'}{L} \right) = 0.75$$

Foundation base horizontal, $\Rightarrow b_q = b_\gamma = 1.0$

(v) *Bearing resistance:*

$$R/A' = c' N_c b_c s_c i_c + q' N_q b_q s_q i_q + 0.5 \gamma B' N_\gamma b_\gamma s_\gamma i_\gamma$$

$$R_k = 7.606 \times [0 + (18.4 \times 18.4 \times 1.0 \times 1.42 \times 0.88) + (0.5 \times (19 - 9.81) \times 2.535 \times 20.1 \times 1.0 \times 0.75 \times 0.81)] = 4313 \text{ kN}$$

$$R_d = \frac{R_k}{\gamma_{Rv}} = \frac{4313}{1.4} = 3081 \text{ kN}$$

From the results it is seen that the GEO limit state is satisfied since the design bearing resistance (3081 kN) is greater than the design effects of actions (1936 kN).

$$\text{Over-design factor, } \Gamma = \frac{R_d}{F_d} = \frac{3081}{1936} = 1.59$$

Table 9.2 Presumed safe bearing capacity, $q_{s,r}$ values (based on BS 8004: 1986).

	q_s (kPa)
<i>Rocks</i>	
(Values based on assumption that foundation is carried down to unweathered rock)	
Hard igneous and gneissic	10000
Hard sandstones and limestones	4000
Schists and slates	3000
Hard shale and mudstones, soft sandstone	2000
Soft shales and mudstones	1000–600
Hard chalk, soft limestone	600
<i>Cohesionless soils</i>	
(Values to be halved if soil submerged)	
Compact gravel, sand and gravel	>600
Medium dense gravel, or sand and gravel	600–200
Loose gravel, or sand and gravel	<200
Compact sand	>300
Medium dense sand	300–100
Loose sand	<100
<i>Cohesive soils</i>	
(Susceptible to long-term consolidation settlement)	
Very stiff boulder clays and hard clays	600–300
Stiff clays	300–150
Firm clays	150–75
Soft clays and silts	<75
Very soft clays and silts	Not applicable

9.7.2 Design by prescriptive method

As mentioned in Chapter 5, Eurocode 7 Part 1 states that a prescriptive method may be used to check a limit state on occasions where calculation of the soil properties is not possible or necessary, provided that generally conservative rules of design are used. British Standard BS 8004: 1986 provided a list of safe bearing capacity values (reproduced in Table 9.2) and this list forms the basis of such a prescriptive approach for the case of the checking of the bearing resistance limit state. The values are based on the following assumptions:

- (i) The site and adjoining sites are reasonably level.
- (ii) The ground strata are reasonably level.
- (iii) There is no softer layer below the foundation stratum.
- (iv) The site is protected from deterioration.

Foundations designed to these values will normally have adequate protection to satisfy the requirements of the bearing resistance limit state, provided that they are not subjected to inclined loading. It should be remembered however that settlement effects would also have to be considered, and thus a serviceability limit state check (see Example 11.8) should be undertaken.

For cohesive soils the consistency is related to the undrained strength, c_u . Such a relationship is suggested in BS 5930 and is reproduced in Table 9.3.

9.8 Non-homogeneous soil conditions

The bearing capacity equations (6)–(10) are based on the assumption that the foundation soil is homogeneous and isotropic.

Table 9.3 Undrained shear strength of cohesive soils.

Consistency	c_u (kPa)	Field behaviour
Hard	>300	Brittle
Very stiff	300–150	Brittle or very tough
Stiff	150–75	Cannot be moulded in fingers
Firm	75–40	Can just be moulded in fingers
Soft	40–20	Easily moulded in fingers
Very soft	<20	Exudes between fingers if squeezed

In the case of variable soil conditions the analysis of bearing capacity is best carried out using a finite element analysis, although it can be carried out using some form of slip circle method, as described earlier in this chapter. This approach can take time and designs based on one of the bearing capacity formulae are consequently quite often used.

For the case of a foundation resting on thin layers of soil, of thicknesses $H_1, H_2, H_3, \dots, H_n$ and of total depth H , Bowles (1982) suggests that these layers can be treated as one layer with an average c value c_{av} and an average ϕ value ϕ_{av} , where

$$c_{av} = \frac{c_1 H_1 + c_2 H_2 + c_3 H_3 + \dots + c_n H_n}{H}$$

$$\phi_{av} = \tan^{-1} \left(\frac{H_1 \tan \phi_1 + H_2 \tan \phi_2 + H_3 \tan \phi_3 + \dots + H_n \tan \phi_n}{H} \right)$$

Vesic (1975) suggested that, for the case of a foundation founded in a layer of soft clay which overlies a stiff clay, the ultimate bearing capacity of the foundation can be expressed as:

$$q_u = c_u N_{cm} + \gamma_z$$

where c_u = the undrained strength of the soft clay and N_{cm} = a modified form of N_c , the value of which depends upon the ratio of the c_u values of both clays, the thickness of the upper layer, the foundation depth and the shape and width of the foundation. Values of N_{cm} are quoted in Vesic's paper.

The converse situation, i.e. that of a foundation founded in a layer of stiff clay which overlies a soft clay, was studied by Brown and Meyerhof (1969), who quoted a formula for N_{cm} based on a punching shear failure analysis.

At first glance a safe way of determining the bearing capacity of a foundation might be to base it on the shear strength of the weakest soil below it, but such a procedure can be uneconomical, particularly if the weak soil is overlain by much stronger soil. A more suitable method is to calculate the safe bearing capacity using the shear strength of the stronger material and then to check the amount of overstressing that this will cause in the weaker layers.

9.9 Estimates of bearing capacity from *in situ* testing

9.9.1 The plate loading test

The test procedure was introduced in Section 6.6.5. In the test an excavation is made to the expected foundation level of the proposed structure and a steel plate, usually from 300 to 750 mm square, is placed in position and loaded by means of a hydraulic loading system or kentledge. During loading the settlement of the plate is measured and a curve similar to that illustrated in Fig. 9.13 is obtained.

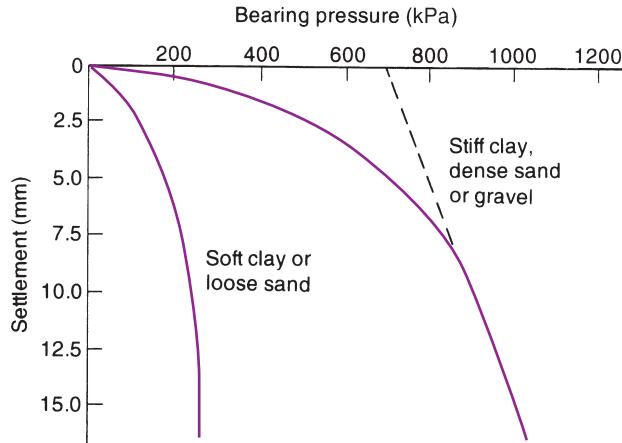


Fig. 9.13 Typical plate loading test results.

On dense sands and gravels and stiff clays there is a pronounced departure from the straight line relationship that applies in the initial stages of loading, and the q_u value is then determined by extrapolating backwards (as shown in the figure). With a soft clay or a loose sand the plate experiences a more or less constant rate of settlement under load and no definite failure point can be established.

In spite of the fact that a plate loading test can only assess a metre or two of the soil layer below the test level, the method can be extremely helpful in stony soils where undisturbed sampling is not possible provided it is preceded by a boring programme, to prove that the soil does not exhibit significant variations.

The test can give erratic results in sands when there is a variation in density over the site, and several tests should be carried out to determine a sensible average. This procedure is costly, particularly if the groundwater level is near the foundation level and groundwater lowering techniques consequently become necessary.

As would be expected, the settlement (see Chapter 11) of a square footing kept at a constant pressure increases as the size of the footing increases.

Terzaghi and Peck (1948) investigated this effect and produced the relationship:

$$S = S_1 \left(\frac{2B}{B + 0.3} \right)^2$$

where

S_1 = settlement of a loaded area 0.305 m square under a given loading intensity p

S = settlement of a square or rectangular footing of width B (in metres) under the same pressure p .

In order to use plate loading test results the designer must first decide upon an acceptable value for the maximum allowable settlement. Unless there are other conditions to be taken into account it is generally accepted that maximum allowable settlement is 25 mm.

The method for determining the allowable bearing pressure for a foundation of width B m is apparent from the formula. If S is put equal to 25 mm and the numerical value of B is inserted in the formula, S_1 will be obtained. From the plate loading test results we have the relationship between S_1 and p (Fig. 9.13), so the value of p corresponding to the calculated value of S_1 is the allowable bearing pressure of the foundation subject to any adjustment that may be necessary for certain groundwater conditions. The adjustment procedure is the same as that employed to obtain the allowable bearing pressure from the standard penetration test.

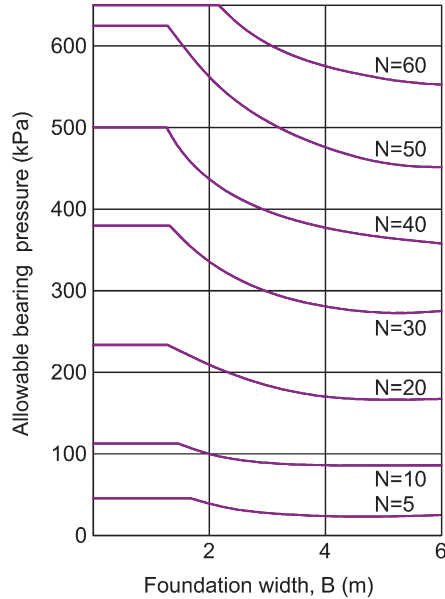


Fig. 9.14 Allowable bearing pressure from the standard penetration test (after Terzaghi and Peck, 1948).

9.9.2 Standard penetration test

This test was described in Section 6.6.2 and the results from it can be used to establish an approximate allowable bearing pressure, inferred from acceptable settlement values.

Having determined the $(N1)_{60}$ value, the determination of the allowable bearing pressure is generally based upon an empirical relationship evolved by Terzaghi and Peck (1948) that is based on the measured settlements of various foundations on sand (Fig. 9.14). The allowable bearing pressure for these curves (which are applicable to both square and rectangular foundations) was defined by Terzaghi and Peck as the pressure that will not cause a settlement greater than 25 mm.

When several foundations are involved the normal design procedure is to determine an average value for $(N1)_{60}$ from all the boreholes. The allowable bearing pressure for the widest foundation is then obtained with this figure and this bearing pressure is used for the design of all the foundations. The procedure generally leads to only small differential settlements, but even in extreme cases the differential settlement between any two foundations will not exceed 20 mm.

The curves of Fig. 9.14 apply to unsaturated soils, i.e. when the water table is at a depth of at least $1.0B$ below the foundation. When the soil is submerged the value of allowable bearing pressure obtained from the curves, q , should be reduced, according to the expression:

$$q_a = q \times 0.5 \times \left(1 + \frac{D_w}{D+B} \right)$$

where

D_w = depth of water table

D = depth of foundation level

B = width of foundation

Example 9.9: Allowable bearing pressure from SPT results

Refer to Example 6.2. A strip footing, 3 m wide, is to be founded at a depth of 3 m. Assuming that the strength characteristics of the sand are constant with depth, determine the allowable bearing pressure.

Solution:

From Example 6.2, $(N1)_{60} = 26$

From Fig. 9.14, for a corrected $N = 26$ and $B = 3$ m:

Allowable bearing pressure = 250 kPa

But this value is for *dry* soil and the sand below the foundation is also below groundwater level and is therefore submerged. Therefore,

$$q_a = q \times 0.5 \times \left(1 + \frac{D_w}{D+B}\right) = 250 \times 0.5 \times \left(1 + \frac{1.5}{3+3}\right) = 156 \text{ kPa}$$

**Exercises****Exercise 9.1**

A strip footing 3 m wide is to be founded at a depth of 2 m in a saturated soil of unit weight 19 kN/m^3 . The soil has an angle of shearing resistance, ϕ' of 28° and an effective cohesion, c' , of 5 kPa. Groundwater level is at a depth of 4 m. Adopting a factor of safety of 3, determine a value for the safe bearing capacity of the foundation.

If the groundwater level was to rise to the ground surface, determine the new value of safe bearing capacity.

Answer 871 kPa; 248 kPa

Exercise 9.2

A soil layer has the following properties:

$$c' = 7 \text{ kPa}; \phi' = 20^\circ; \gamma = 20 \text{ kN/m}^3.$$

A footing of dimensions $7.5 \text{ m} \times 2.5 \text{ m}$ is to be founded at a depth of 1.5 m into this layer. Determine the ultimate bearing capacity of the soil.

Answer 488 kPa

Exercise 9.3

A continuous concrete footing ($\gamma_c = 24 \text{ kN/m}^3$) of breadth 2.0 m and thickness 0.5 m is to be founded in a clay soil ($c_u = 22 \text{ kPa}$; $\gamma = 19 \text{ kN/m}^3$) at a depth of 1.0 m. The

footing will carry an applied vertical load of magnitude 85 kN per metre run. The load will act on the centre-line of the footing.

Using Eurocode 7 Design Approach 1, determine the magnitude of the over-design factor for the bearing resistance limit state under undrained conditions..

Answer 1.53 (DA1-1); 1.56 (DA1-2)

If you were to include depth factors in the design procedure, what would be the revised value of the over-design factor for each combination?

Answer 1.79 (DA1-1); 1.81 (DA1-2)

Note: Adopting depth factors in the design will invariably lead to higher values of over-design factor.

Exercise 9.4

A rectangular foundation ($2.5\text{ m} \times 6\text{ m} \times 0.8\text{ m}$ deep) is to be founded at a depth of 1.2 m in a dense sand ($c' = 0$; $\phi' = 32^\circ$; $\gamma = 19.4\text{ kN/m}^3$). The unit weight of concrete = 24 kN/m^3 . The foundation will carry a vertical line load of 250 kN/m at an eccentricity of 0.4 m.

By following Eurocode 7, Design Approach 1 establish the proportion of the available resistance that will be used.

Answer 16% (DA1-1); 24% (DA1-2)

Note: The proportion of available resistance that will be used is determined by taking the reciprocal of the over-design factor.

Chapter 10

Pile Foundations

10.1 Introduction

Pile foundations are used to transfer the load of the structure to the bearing soil or rock located at a significant depth below ground surface. Piles are long and slender members that transfer the load to soil of high bearing capacity that lie beneath shallower soils of lower bearing capacity. Piles may be made from concrete, steel or timber, or from some composite of these materials and are installed either by driving, drilling or jacking. A pile cap is fixed to the top of the pile and it is this cap onto which the structural loads are transmitted.

In addition to piles being used to transmit the foundation load to a solid stratum (by end bearing) or throughout a deep mass of soil (through soil-pile friction), pile foundations are also used to resist horizontal or uplift loads where such forces may act.

There are several types of pile and these are described in the coming sections.

10.2 Classification of piles

Piles can be classified by different criteria, such as their material (e.g. concrete, steel, timber), their method of installation (e.g. driven or bored), the degree of soil displacement during installation, or their size (e.g. large diameter, small diameter). However, in terms of pile design, the most appropriate classification criterion is the behaviour of the pile once installed (e.g. end bearing pile, friction pile, combination pile).

10.2.1 End bearing

These piles transfer their load to a firm stratum located at a considerable depth below the base of the structure and they derive most of their carrying capacity from the penetration resistance of the soil at the toe of the pile (Fig. 10.1a). The pile behaves as an ordinary column and should be designed as such. Even in weak soil a pile will not fail by buckling and this effect need only be considered if part of the pile is unsupported, i.e. if it is in either air or water.

10.2.2 Friction

Here, the carrying capacity is derived mainly from the adhesion or friction of the soil in contact with the shaft of the pile (Fig. 10.1b).

10.2.3 Combination

This is an extension of the end bearing pile when the bearing stratum is not hard, such as a firm clay. The pile is driven far enough into the lower material to develop adequate frictional resistance (Fig. 10.1c). A further variation of the end bearing pile is piles with enlarged bearing areas. This is achieved by forcing a bulb of concrete into the soft stratum immediately above the firm layer to give an enlarged base. A similar effect is produced with bored piles by forming a large cone or bell at the bottom with a special reaming tool.

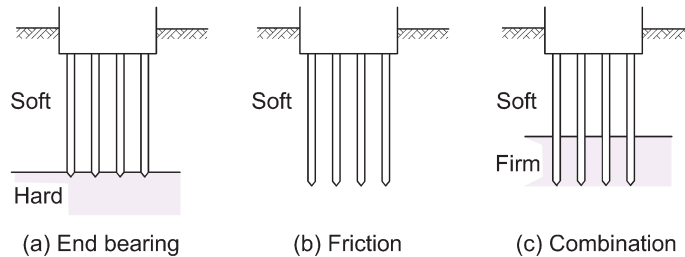


Fig. 10.1 Classification of piles.

10.3 Method of installation

The installation process is every bit as important as the design process for pile foundations. There are two main methods of pile installation: pile driving, and boring by mechanical auger. Before pile design can commence the type of pile and its method of installation should be known. In order to avoid damage to the pile during installation, the method of installation should actually be considered during the design process.

10.3.1 Driven piles

These are prefabricated piles that are installed into the ground through the use of a pile driver as illustrated in Fig. 10.2. The pile is hoisted into position on the pile driver and aligned against the runners so that the pile is driven into the ground at exactly the required angle, to exactly the required depth. Most commonly the pile is driven into the soil by striking the top of the pile repeatedly with a pneumatic or percussive hammer. However this is a noisy method of installation and induces a significant amount of vibration in the ground so usage is limited to situations where noise and vibration limits permit.

At sites where noise is a concern, vibratory hammers can be used in place of percussive hammers. These hammers are fixed to the top of the pile and employ a vibrating unit to induce vibrations down through the pile to ease its installation into the ground. They are suitable for use in granular soils and generate much less noise than percussive hammers. Water jetting can be used to aid the penetration of piles into dense sands or sandy gravel.

In situations where hammers are not possible or acceptable, piles can be installed by jacking (see *Jacked pile* below). This method uses hydraulic rams to drive the pile into the ground, utilising either adjacent piles or structures to provide the jacking reaction force. The method tends to be used most in micro-piling, where the reaction loads can be provided by the structure being underpinned, or for driving steel sheet-piling into the ground.

Most commonly driven piles are made from precast concrete. Steel and timber piles are also available.

Precast concrete

These are usually of square or octagonal section. Reinforcement is necessary within the pile to help withstand both handling and driving stresses. Prestressed concrete piles are also used and are becoming more popular than ordinary precast as less reinforcement is required.

Timber

Timber piles have been used from earliest recorded times and are still used for permanent work where timber is plentiful. In the UK, timber piles are used mainly in temporary works, due to their lightness and shock resistance, but they are also used for piers and fenders and can have a design life of up to 25 years or more if kept completely below the water table. However, they can deteriorate rapidly if used in ground in which the water level varies and allows the upper part to come above the water surface. Pressure

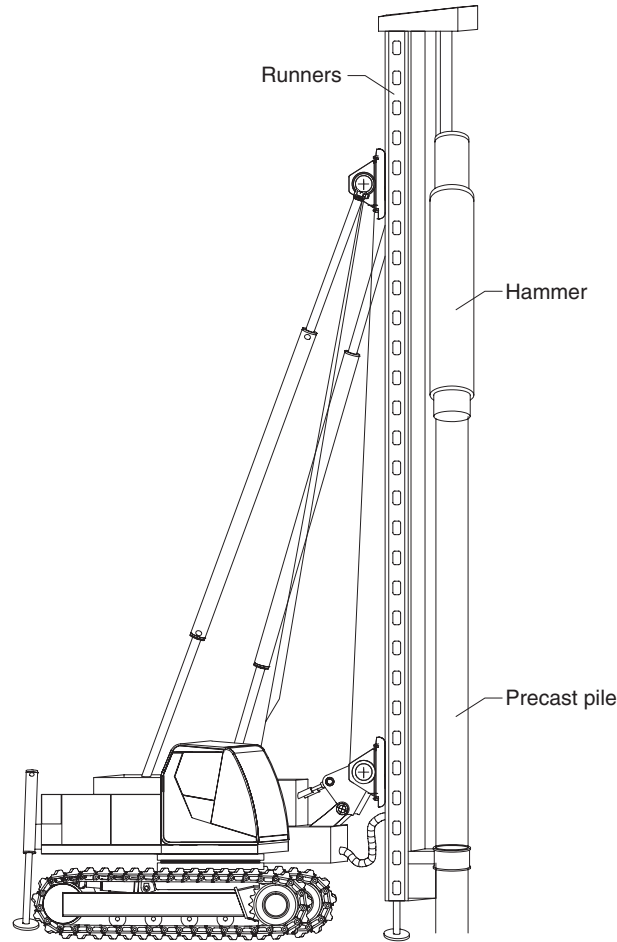


Fig. 10.2 Pile driving rig.

creosoting is the usual method of protection. Much of central Amsterdam is constructed on timber piles where the groundwater table is very close to the ground surface.

Steel piles: Tubular, box or H-section

These are suitable for handling and driving in long lengths. They have a relatively small cross-sectional area and penetration is easier than with other types. The risk from corrosion is not as great as one might think although tar coating or cathodic protection can be employed in permanent work.

Jetted pile

When driving piles in non-cohesive soils the penetration resistance can often be considerably reduced by jetting a stream of high-pressure water into the soil just below the pile. There have been cases where piles have been installed by jetting alone. The method requires considerable experience, particularly when near to existing foundations.

Jacked pile

Generally built up with a series of short sections of precast concrete, this pile is jacked into the ground and progressively increased in length by the addition of a pile section whenever space becomes available.

The jacking force is easily measured and the load to pile penetration relationship can be obtained as jacking proceeds. Jacked piles are often used to underpin existing structures where lack of space excludes the use of pile driving hammers.

Screw pile

A screw pile consists of a steel, or concrete, cylinder with helical blades attached to its lower end. The pile is made to screw down into the soil by rotating the cylinder with a capstan at the top of the pile. A screw pile, due to the large size of its screw blades, can offer large uplift resistance.

10.3.2 Bored and cast-in-situ piles

These piles are formed within a drilled borehole. During the drilling process the sides of the borehole are supported to prevent the soil from collapsing inwards and temporary sections of steel cylindrical casing are advanced along with the drilling process to provide this required support. As the drilling progresses, the soil is removed from within the casing and brought to the surface. Once the full depth of the borehole has been reached, the casing is gradually withdrawn, the reinforcement cage is placed and the concrete which forms the pile is pumped into the borehole. For very deep boreholes the installation of many sections of temporary casing can be an expensive and slow process, and an alternative means of supporting the sides is through the use of a bentonite slurry in the same manner as for a diaphragm wall (see Section 8.3.2).

An alternative technique which does not use borehole side-support is the *continuous flight auger* (CFA) pile. With this technique a continuous flight auger with a hollow stem is used to create the borehole. The sides of the borehole are supported by the soil on the flights of the auger and so no casing is required. Once the required depth has been reached, the concrete is pumped down the hollow stem and the auger is steadily withdrawn. The steel reinforcement is placed once the auger is clear of the borehole.

10.3.3 Driven and cast-in-place piles

These piles are formed in a relatively similar manner to the bored piles, except that the casing is driven to full depth by a pile driver, rather than advanced in short sections as the hole is formed. The casing is closed at the bottom end by a detachable and sacrificial threaded driving shoe. Once the casing is driven to depth, the reinforcement cage is placed and the concrete poured to form the pile. The casing is then unthreaded from the driving shoe and brought to the surface as indicated in Fig. 10.3.

A variant on this approach is the *Westpile shell pile*, which uses 1 m long reinforced concrete tubes to form the casing.

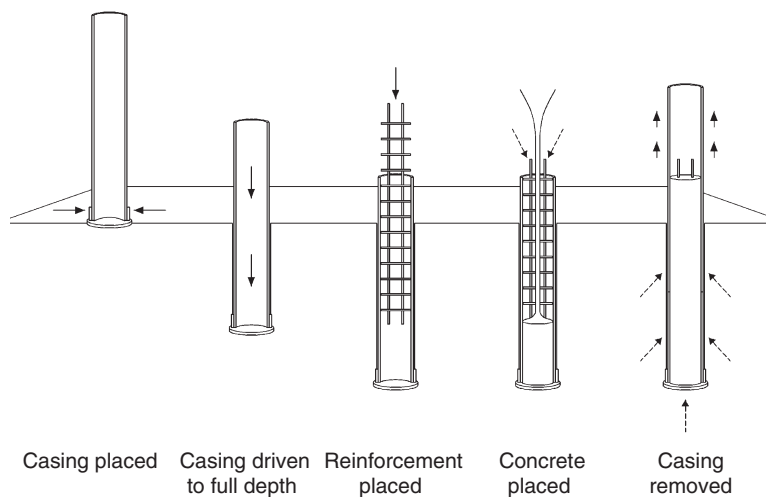


Fig. 10.3 Driven and cast-in-place pile installation.

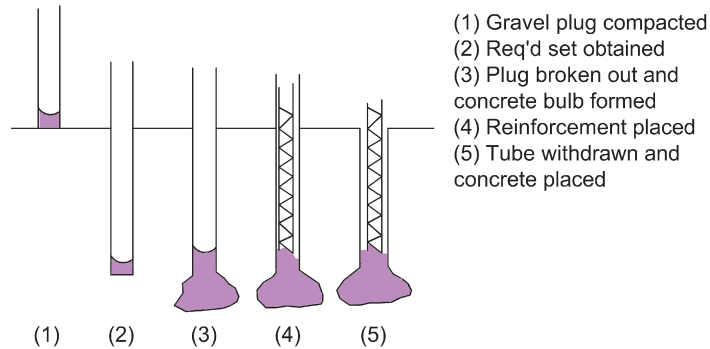


Fig. 10.4 Installation of a Franki pile.

The *Franki pile* is another example. A steel tube is erected vertically over the place where the pile is to be driven, and about a metre depth of gravel is placed at the end of the tube. A drop hammer, 1500 to 4000 kg mass, compacts the aggregate into a solid plug which then penetrates the soil and takes the steel tube down with it. When the required set has been achieved the tube is raised slightly and the aggregate broken out. Dry concrete is now added and hammered until a bulb is formed. Reinforcement is placed in position and more dry concrete is placed and rammed until the pile top comes up to ground level. The sequence of operations is illustrated in Fig. 10.4.

10.3.4 Large diameter bored piles

The driven or bored and cast-in-place piles discussed previously generally have maximum diameters in the order of 0.6 m and are capable of working loads round about 2 MN. With modern buildings column loads in the order of 20 MN are not uncommon. A column carrying such a load would need about ten conventional piles, placed in a group and capped by a concrete slab, probably about 25 m² in area.

A consequence of this problem has been the increasing use of the large diameter bored pile. This pile has a minimum shaft diameter of 0.75 m and may be under-reamed to give a larger bearing area if necessary. Such a pile is capable of working loads in the order of 25 MN and, if taken down through the soft to the hard material, will minimise settlement problems so that only one such pile is required to support each column of the building. Large diameter bored piles have been installed in depths down to 60 m.

10.4 Pile load testing

The only really reliable means of determining a pile's load capacity is through a pile load test. These tests are expensive, particularly if the ground is variable and a large number of piles must therefore be tested, but they do provide reliable data by which the design of further piles can be based. In the tests, full-scale piles are used and these are installed in the same manner as those placed for the permanent work.

During pile testing, a load is applied to the top of the pile and the settlement of the pile is recorded against force or time, depending on the test. Tests can be categorised as either *static load* or *dynamic load* tests. In addition, soil test results can be used to aid the determination of the pile load capacity.

10.4.1 Static load tests

Maintained load test (MLT)

In this test, a load is applied to the pile in discrete increments, usually equal to 25% of the designated working load for the pile, and the resulting pile settlement is monitored. Subsequent load increments are only applied when the rate of induced settlement drops below a specified criteria.

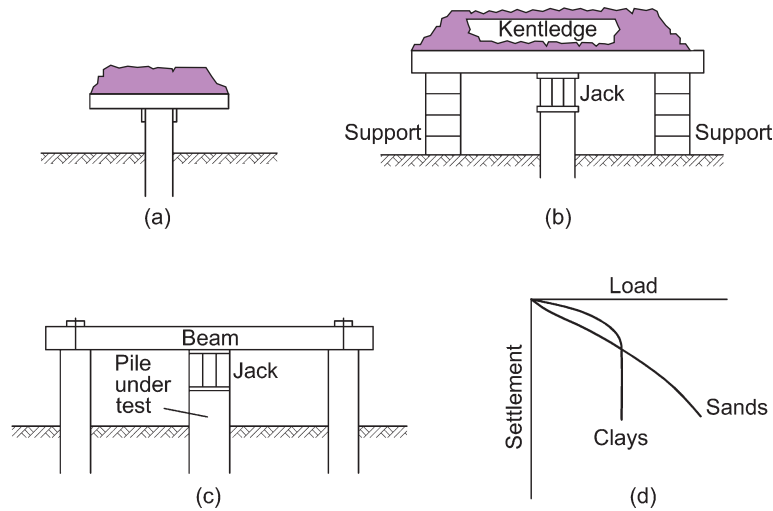


Fig. 10.5 Maintained load test.

The load is generally applied through a hydraulic jack which uses a beam assembly affixed to adjacent piles to provide the reaction force, see Fig 10.5c. Alternatively, static weights can be applied to provide the load (Fig. 10.5a) or to provide the jack reaction force (Fig. 10.5b). The test normally lasts between 24 and 48 hours and is the most suitable in determining the load/settlement performance of a pile under working loads.

The form of load to settlement relationship obtained from a loading test is shown in Fig. 10.5d. Loading is continued until failure occurs, except for large diameter bored piles which, having a working load of about 25 MN, would require massive applied loadings if failure loads were to be achieved. General practice has become to test load these piles to the working load plus 50%.

In terms of guidance on the test procedure from the design codes, Eurocode 7, Part 1 makes reference to the ASTM suggested method for the axial pile loading test, described by Smolczyk (1985). Also, it is likely that the forthcoming European standard for static load pile testing (BS EN ISO 22477, Parts 1–3) will adopt the recommendations and procedures described by De Cock *et al.* (2003).

Constant rate of penetration test (CRP)

An alternative to the maintained load test is the constant rate of penetration test. Here, rather than apply a single load and wait for the settlement to more or less stop, the load is steadily increased so as to induce a continuous rate of settlement of the pile. Thus the pile is jacked downwards at a constant rate of penetration. The ultimate pile load is considered to be the load at which either a shear failure takes place within the soil or the penetration of the pile equals 10% of its diameter.

Design failure load

The design maximum working load for a pile is usually taken as the load that causes a settlement equal to 10% of the pile diameter (e.g. for a 250 mm diameter test pile, the design failure load would be the load that causes a settlement of 25 mm). Both the MLT and the CRP tests provide plots of settlement against load, and thus each test can be used to determine the design failure load.

10.4.2 Dynamic load tests

These tests are less popular than static load tests and monitor the response of a pile subjected to hammer blows applied at the pile head. The measured response parameters are analysed to give predictions of the soil resistance that would be mobilised by the pile under static load conditions, based on stress wave theory. The analysis can also provide prediction of the load/settlement performance of the pile.

10.4.3 Ground tests

A ground investigation will invariably be carried out for any foundation project. Results from soil samples can be used to give an indication of the shear strength parameters of the soils acting along the shaft of the pile and at the pile base. These parameters can be used in the design process as will be seen in Sections 10.5 and 10.6.

10.5 Determination of the bearing capacity of a pile

A pile is supported in the soil by the resistance of the toe to further penetration plus the frictional or adhesive forces along its embedded length.

Ultimate bearing capacity = Ultimate base resistance + Ultimate skin friction:

$$Q_u = Q_b + Q_s$$

10.5.1 Cohesive soils

Q_b for piles in cohesive soils is based on Meyerhof's equation (1951):

$$Q_b = N_c \times c_b \times A_b$$

Where

N_c = bearing capacity factor, widely accepted as equal to 9.0

c_b = undisturbed undrained shear strength of the soil at base of pile.

Q_s is given by the equation:

$$Q_s = \alpha \times c_u \times A_s$$

Where

α = adhesion factor

c_u = average undisturbed undrained shear strength of soil adjoining pile

A_s = surface area of embedded length of pile.

Hence

$$Q_u = c_b N_c A_b + \alpha c_u A_s$$

The adhesion factor α

Most of the bearing capacity of a pile in cohesive soil is derived from its shaft resistance, and the problem of determining the ultimate load resolves into determining a value for α . For soft clays α can be equal to or greater than 1.0 as, after driving, soft clays tend to increase in strength. In overconsolidated clays α

has been found to vary from 0.3 to 0.6. The usual value assumed for London clay was, for many years, taken as 0.45 but more recently a value of 0.6 for this type of soil has become more accepted.

10.5.2 Cohesionless soils

The ultimate load of a pile installed in cohesionless soil is estimated using only the value of the drained parameter, ϕ' , and assuming that any contribution due to c' is zero.

$$Q_b = q_b A_b = \sigma'_v N_q A_b$$

where

- σ'_v = the effective overburden pressure at the base of the pile
- N_q = the bearing capacity coefficient
- A_b = the area of the pile base.

The selection of a suitable value for N_q is obviously a crucial part of the design of the pile. The values suggested by Berezantzev *et al.* (1961) are often used and are reproduced in Fig.10.6. Note that the full value of N_q is used as it is assumed that the weight of soil removed or displaced is equal to the weight of the pile that replaced it.

$$Q_s = f_s A_s$$

Where

- f_s = average value of the ultimate skin friction over the embedded length of the pile
- A_s = surface area of embedded length of pile.

Meyerhof (1959) suggested that for the average value of the ultimate skin friction:

$$f_s = K_s \overline{\sigma'_v} \tan \delta$$

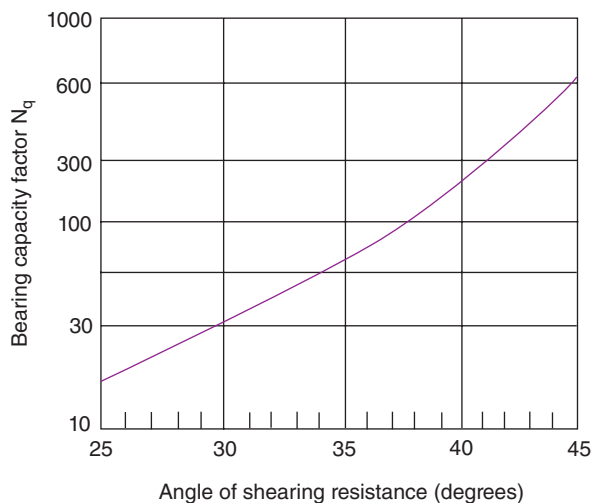


Fig. 10.6 Variation of bearing capacity factor N_q with angle of shearing resistance.

Table 10.1 Typical values for δ and K_s suggested by Broms (1966).

Pile material	δ	K_s	
		Relative density of soil	
		Loose	Dense
Steel	20°	0.5	1.0
Concrete	$0.75\phi'$	1.0	2.0
Timber	$0.67\phi'$	1.5	4.0

where

K_s = the coefficient of lateral earth pressure

σ'_v = average effective overburden pressure acting along the embedded length of the pile shaft

δ = angle of friction between the pile and the soil.

Hence

$$Q_s = A_s K_s \bar{\sigma}'_v \tan \delta$$

and

$$Q_u = \sigma'_v N_q A_b + A_s K_s \bar{\sigma}'_v \tan \delta$$

Typical values for δ and K_s were derived by Broms (1966), and are listed in Table 10.1.

Vesic (1973) pointed out that the value of q_b , i.e. $\sigma'_v N_q$ does not increase indefinitely but has a limiting value at a depth of some 20 times the pile diameter. There is therefore a maximum value of $\sigma'_v N_q$ that can be used in the calculations for Q_b .

In a similar manner there is a limiting value that can be used for the average ultimate skin friction, f_s . This maximum value of f_s occurs when the pile has an embedded length between 10 and 20 pile diameters. Vesic (1970) suggested that the maximum value of the average ultimate skin resistance should be obtained from the formula:

$$f_s = 0.08(10)^{1.5(D_r)^4}$$

where D_r = the relative density of the cohesionless soil.

In practice f_s is often taken as 100 kPa if the formula gives a greater value.

Unlike piles embedded in cohesive soils, the end resistances of piles in cohesionless soils are of considerable significance and short piles are therefore more efficient in cohesionless soils.

Example 10.1: Undrained analysis

A pile of diameter 400 mm and length 6 m is to be installed into a deep deposit of clay. The clay has an undrained shear strength of 180 kPa at a depth of 6 m and an average undrained shear strength of 120 kPa over the depth 0–6 m.

Assuming $N_c = 9.0$ and $\alpha = 0.6$, determine the ultimate bearing capacity of the pile.

Solution:

$$\begin{aligned} Q_b &= c_b \times N_c \times A_b \\ &= 180 \times 9.0 \times \frac{\pi \times 0.4^2}{4} \\ &= 203.5 \text{ kPa} \end{aligned}$$

$$\begin{aligned} Q_s &= \alpha \times \bar{c}_u \times A_s \\ &= 0.6 \times 120 \times \pi \times 0.4 \times 6 \\ &= 542.6 \text{ kPa} \end{aligned}$$

$$\begin{aligned} Q_u &= Q_b + Q_s \\ &= 203.5 + 542.6 \\ &= 746.1 \text{ kPa} \end{aligned}$$

Example 10.2: Drained analysis

A 500mm diameter bored concrete pile is to be formed in the soil profile shown in Fig. 10.7.

The ground conditions are as follows:

Granular fill: $\gamma = 20 \text{ kN/m}^3$
 $\phi' = 30^\circ$
 $K_s = 1.0$

Dense gravel: $\gamma = 21 \text{ kN/m}^3$
 $\phi' = 35^\circ$
 $K_s = 2.0$

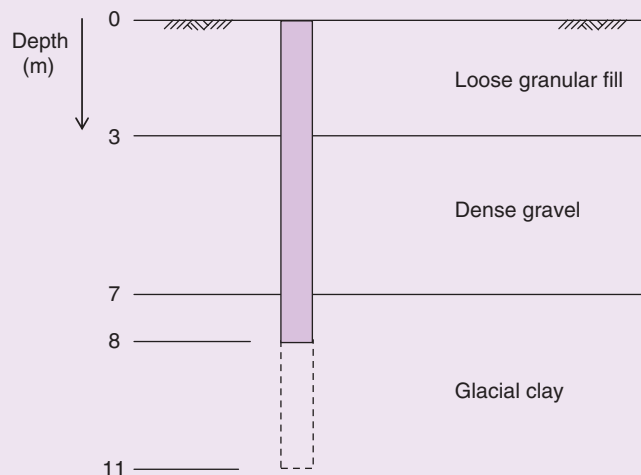


Fig. 10.7 Example 10.2.

Glacial clay: $\gamma = 20 \text{ kN/m}^3$
 c_u at 7.0 m = 120 kPa
 c_u at 8.0 m = 145 kPa
 c_u at 11.0 m = 220 kPa
 adhesion factor, $\alpha = 0.6$
 $N_c = 9.0$

Determine the ultimate bearing capacity of the pile for:

- embedded length = 8 m
- embedded length = 11 m

Solution:

Fill:

$$Q_s = A_s K_s \bar{\gamma} z \tan \delta = (\pi \times 0.5 \times 3) \times 1.0 \times \left(\frac{20 \times 3.0}{2} \right) \times \tan(0.75 \times 30^\circ) = 58.6 \text{ kN}$$

Gravel:

$$Q_s = A_s K_s \bar{\gamma} z \tan \delta = (\pi \times 0.5 \times 4) \times 2.0 \times \left(60 + \frac{21 \times 4.0}{2} \right) \times \tan(0.75 \times 35^\circ) = 632.1 \text{ kN}$$

Clay (length = 8 m):

$$Q_s = \alpha \times \bar{c}_u \times A_s = 0.6 \times \left(\frac{120 + 145}{2} \right) \times (\pi \times 0.5 \times 1.0) = 124.9 \text{ kN}$$

$$Q_b = c_b \times N_c \times A_b = 145 \times 9.0 \times \left(\pi \times \frac{0.5^2}{4} \right) = 256.2 \text{ kN}$$

Clay (length = 11 m):

$$Q_s = \alpha \times \bar{c}_u \times A_s = 0.6 \times \left(\frac{120 + 220}{2} \right) \times (\pi \times 0.5 \times 4.0) = 640.9 \text{ kN}$$

$$Q_b = c_b \times N_c \times A_b = 220 \times 9.0 \times \left(\pi \times \frac{0.5^2}{4} \right) = 388.8 \text{ kN}$$

Ultimate bearing capacity:

$$Q_u = Q_b + Q_s$$

- 8 m: $Q_u = 256.2 + (58.6 + 632.1 + 124.9) = 1071.8 \text{ kN}$
- 11 m: $Q_u = 388.8 + (58.6 + 632.1 + 640.9) = 1720.4 \text{ kN}$

10.5.3 Determination of soil piling parameters from in situ tests

With cohesionless soils it is possible to make reasonable estimates of the values of q_b and f_s from *in situ* penetration tests. Meyerhof (1976) suggests the following formulae to be used in conjunction with the standard penetration test.

Driven piles

$$\text{Sands and gravel} \quad q_b \approx \frac{40ND}{B} \leq 400N \text{ (kPa)}$$

$$\text{Non-plastic silts } q_b \approx \frac{40ND}{B} \leq 300N \text{ (kPa)}$$

Bored piles

$$\text{Any type of granular soil } q_b \approx \frac{14ND}{B}$$

$$\text{Large diameter driven piles } f_s \approx 2\bar{N} \text{ kPa}$$

$$\text{Average diameter driven piles } f_s \approx \bar{N} \text{ kPa}$$

$$\text{Bored piles } f_s \approx 0.67\bar{N} \text{ kPa}$$

Where

N = the *uncorrected* blow count at the pile base

\bar{N} = the average *uncorrected* N value over the embedded length of the pile

D = embedded length of the pile in the end bearing stratum

B = width, or diameter, of pile.

An alternative method is to use the results of the cone penetration test. Typical results from such a test are shown in Fig. 10.8 and are given in the form of a plot showing the variation of the cone penetrations resistance with depth.

For the ultimate base resistance, C_r , the cone resistance is taken as being the average value of C_r over the depth $4d$ as shown, where d = diameter of shaft. Then:

$$Q_b = C_r A_b$$

The ultimate skin friction, f_s , can be obtained from one of the following:

$$f_s = \frac{\bar{C}_r}{200} \text{ kPa for driven piles in dense sand}$$

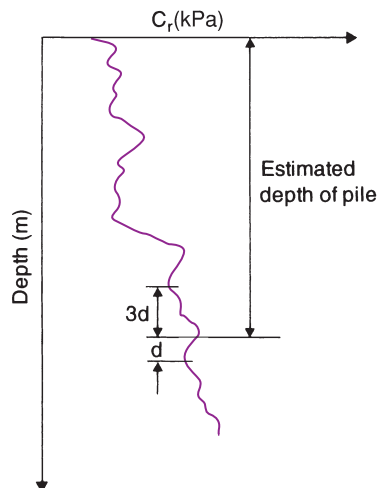


Fig. 10.8 Typical results from a cone penetration test.

$$f_s = \frac{\bar{C}_r}{400} \text{ kPa} \quad \text{for driven piles in loose sand}$$

$$f_s = \frac{\bar{C}_r}{150} \text{ kPa} \quad \text{for driven piles in non-plastic silts}$$

where \bar{C}_r = average cone resistance along the embedded length of the pile (De Beer, 1963).
Then $Q_s = f_s A_s$ and, as before, $Q_u = Q_b + Q_s$.

Example 10.3: Allowable load from in situ testing results

A 5 m thick layer of medium sand overlies a deep deposit of dense gravel. A series of standard penetration tests carried out through the depth of the sand has established that the average blow count, \bar{N} , is 22. Further tests show that the gravel has a standard penetration value of $N = 40$ in the region of the interface with the sand. A precast pile of square section $0.25 \times 0.25 \text{ m}^2$ is to be driven down through the sand and to penetrate sufficiently into the gravel to give good end bearing.

Adopting a safety factor of 3.0 determine the allowable load that the pile will be able to carry.

Solution:

$$\text{Ultimate bearing capacity of the pile} = Q_u = Q_s + Q_b$$

Q_b : All end bearing effects will occur in the gravel. Now

$$q_b \approx 40 N \frac{D}{B} \text{ kPa or } 400 \times N \text{ kPa (whichever is the lesser)}$$

i.e.

$$q_b = 40 \times 40 \times \frac{D}{0.25} = 400 \times 40 = 16\,000 \text{ kPa}$$

$$\text{Penetration into gravel, } D = \frac{16\,000 \times 0.25}{40 \times 40} = 2.5 \text{ m}$$

and

$$Q_b = 16\,000 \times 0.25^2 = 1000 \text{ kN}$$

$$Q_s \text{ in sand: } Q_s = f_s A_s = 22 \times 5 \times 0.25 \times 4 = 110 \text{ kN}$$

$$Q_s \text{ in gravel: } Q_s = f_s A_s = 40 \times 2.5 \times 0.25 \times 4 = 100 \text{ kN}$$

i.e.

$$Q_u = 210 + 1000 = 1210 \text{ kN}$$

$$\text{Allowable load} = \frac{1210}{3} = 400 \text{ kN}$$

Example 10.3 illustrates that, as discussed earlier, the end bearing effects are much greater than those due to side friction. It can be argued that, in order to develop side friction (shaft resistance) fully,

a significant downward movement of the pile is required which cannot occur in this example because of the end resistance of the gravel. As a result of this phenomenon, it is common practice to apply a different factor of safety to the shaft resistance than that applied to the end bearing resistance. Typically a factor of safety of around 1.5 is applied to shaft resistance, and a factor of safety between 2.5 and 3.0 is applied to the end bearing resistance.

Returning to Example 10.3, and adopting $F_b = 3$, $F_s = 1.5$, the allowable load now becomes:

$$\frac{1000}{3} + \frac{210}{1.5} = 473 \text{ kN}$$

10.5.4 Negative skin friction, or downdrag

If a soil settles or consolidates around a pile then the pile will tend to support the soil and there can be a considerable increase in the load on the pile. This effect is known as downdrag and is quantified as the additional shear stress applied to the surface of a pile by the soil as it settles.

The main causes for downdrag are:

- (i) bearing piles driven into recently placed fill, which then begins to settle;
- (ii) fill placed around the piles after driving which causes consolidation in the soil below;
- (iii) consolidation due to a reduction in the pore water pressure in the soil;
- (iv) consolidation due to pile installation (of particular concern in sensitive and normally consolidated clays).

If negative friction effects are likely to occur then the piles must be designed to carry the additional load. In extreme cases the value of negative skin friction can equal the positive skin friction. However, the maximum value of negative skin friction cannot act over the entire embedded length of the pile, and it is found to be virtually zero at the top of the pile and reaches the maximum value at its base.

10.6 Designing pile foundations to Eurocode 7

The principles of Eurocode 7, as described in Chapter 5, apply to the design of pile foundations and the design of pile foundations is covered in Section 7 of Eurocode 7 Part 1.

There are 11 limit states listed that should be considered, though only those limit states most relevant to the particular situation would normally be considered in the design. These include the loss of overall stability, bearing resistance failure of the pile, uplift of the pile and structural failure of the pile. In this chapter we will look only at checking against ground resistance failure through the compressive loading of the pile.

Pile design methods acceptable to Eurocode 7 are in the main based on the results of static pile load tests, and the design calculations should be validated against the test results. When considering the compressive ground resistance limit state the task is to demonstrate that the design axial compression load on a pile or pile group, $F_{c,d}$, is less than or equal to the design compressive ground resistance, $R_{c,d}$, against the pile or pile group. In the case of pile groups, $R_{c,d}$ is taken as the lesser value of the design ground resistance of an individual pile and that of the whole group.

In keeping with the rules of Eurocode 7, the design value of the compressive resistance of the ground is obtained by dividing the characteristic value by a partial factor of safety. The characteristic value is

obtained by one of three approaches: from static load tests, from ground tests results or from dynamic tests results.

Considering Design Approach 1, the following partial factor sets (see Section 5.7.1) are used for the design of axially loaded piles:

Combination 1: A1 + M1 + R1

Combination 2: A2 + (M1 or M2)* + R4

* M1 is used for calculating pile resistance; M2 is used for calculating unfavourable actions on piles.

10.6.1 Note on the UK National Annex, NA EN 1997-1:2004

As mentioned in Chapter 5, the National Annex allows each nation to provide Nationally Determined Parameters (NDPs) that should be used in place of the values published in the main Eurocode document. For Eurocode 7 Part 1, NDPs include partial factors and rules for use where national choice is permitted in the main Eurocode. The partial factors for the GEO limit state in the UK National Annex are the same as those listed in Eurocode 7 Part 1, with the exception of the partial resistance factors (γ_R) and the correlation factors (ξ) for pile foundations. It is important to note therefore that during pile foundation design in the UK, the values provided in the National Annex must be used, rather than the values published in the main Eurocode document. In the following sections, both sets of values are provided.

10.6.2 Ultimate compressive resistance from static load tests

The characteristic value of the compressive ground resistance, $R_{c;k}$, is obtained by combining the measured value from the pile load tests with a correlation factor, ξ (related to the number of piles tested). More explicitly, $R_{c;k}$ is taken as the lesser value of:

$$R_{c;k} = \frac{(R_{c;m})_{\text{mean}}}{\xi_1} \quad \text{and} \quad R_{c;k} = \frac{(R_{c;m})_{\text{min}}}{\xi_2}$$

Where

$(R_{c;m})_{\text{mean}}$ = the mean measured resistance

$(R_{c;m})_{\text{min}}$ = the minimum measured resistance

ξ_1, ξ_2 = correlation factors obtained from Table 10.2A (Eurocode 7, Part 1) or Table 10.2B (UK National Annex).

It may be that the characteristic compressive resistance of the ground is more appropriately determined from the characteristic values of the base resistance, $R_{b;k}$ and the shaft resistance, $R_{s;k}$:

$$R_{c;k} = R_{b;k} + R_{s;k}$$

Table 10.2A Correlation factors – static load tests results (from EN1997-1:2004, Table A9).

	Number of piles tested				
	1	2	3	4	≥ 5
ξ_1	1.4	1.3	1.2	1.1	1.0
ξ_2	1.4	1.2	1.05	1.0	1.0

Table 10.2B Correlation factors – static load tests results (from NA to BS EN1997-1:2004, Table A.NA.9).

	Number of piles tested				
	1	2	3	4	≥5
ξ_1	1.55	1.47	1.42	1.38	1.35
ξ_2	1.55	1.35	1.23	1.15	1.08

Table 10.3A Piles in compression: partial factor sets R1, R2, R3 and R4 (from EN1997-1:2004, Tables A6, A7 and A8).

Partial factor set	R1			R2	R3	R4		
	Driven	Bored	CFA	All	All	Driven	Bored	CFA
Base, γ_b	1.0	1.25	1.1	1.1	1.0	1.3	1.6	1.45
Shaft, γ_s	1.0	1.00	1.0	1.1	1.0	1.3	1.3	1.30
Total, γ_t	1.0	1.15	1.1	1.1	1.0	1.3	1.5	1.40

Table 10.3B Piles in compression: partial factor sets R1, R2, R3 and R4 (from NA to BS EN1997-1:2004, Tables A.NA.6, A.NA.7 and A.NA.8).

Partial factor set	R1			R2	R3	R4*		
	Driven	Bored	CFA	All	All	Driven	Bored	CFA
Base, γ_b	1.0	1.0	1.0	1.1	1.0	1.7/1.5	2.0/1.7	2.0/1.7
Shaft, γ_s	1.0	1.0	1.0	1.1	1.0	1.5/1.3	1.6/1.4	1.6/1.4
Total, γ_t	1.0	1.0	1.0	1.1	1.0	1.7/1.5	2.0/1.7	2.0/1.7

*R4: The pairs of values listed in Table 10.3B indicate that there is a choice of value to be used depending on whether or not explicit verification of the serviceability limit state (i.e. settlement) has been carried out. The higher value is to be used when no explicit verification is undertaken, and the lower value is used when there is explicit verification. Explicit verification includes situations where serviceability is verified by load tests on more than 1% of the constructed piles or situations where settlement is of no concern.

The design compressive resistance of the ground may be derived by either:

$$R_{c;d} = \frac{R_{c;k}}{\gamma_t}$$

or

$$R_{c;d} = \frac{R_{b;k}}{\gamma_b} + \frac{R_{s;k}}{\gamma_s}$$

where γ_b , γ_s and γ_t are partial factors on base resistance, shaft resistance and the total resistance respectively. The partial factors for piles in compression recommended in Eurocode 7 are given in Table 10.3A (Eurocode 7, Part 1) or Table 10.3B (UK National Annex).

Example 10.4: Static load tests (to UK National Annex)

A series of static load tests on a set of four bored piles gave the following results:

	Test no.			
	1	2	3	4
Measured load (kN)	382	425	365	412

From an understanding of the ground conditions, it is assumed that the ratio of base resistance to shaft resistance is 3:1. Determine the design compressive resistance of the ground in accordance with Eurocode 7, Design Approach 1, following the UK National Annex and assume explicit SLS verification has taken place.

Solution:

$$(R_{c,m})_{\text{mean}} = \frac{382 + 425 + 365 + 412}{4} = 396 \text{ kN}$$

$$(R_{c,m})_{\text{min}} = 365 \text{ kN}$$

From Table 10.2B, $\xi_1 = 1.38$; $\xi_2 = 1.15$

$$R_{c;k} = \frac{(R_{c,m})_{\text{mean}}}{\xi_1} = \frac{396}{1.38} = 287 \text{ kN}$$

$$R_{c;k} = \frac{(R_{c,m})_{\text{min}}}{\xi_2} = \frac{365}{1.15} = 317 \text{ kN}$$

that is

$$R_{c;k} = 287 \text{ kN} \quad (\text{i.e. the minimum value})$$

Since the ratio of base resistance to shaft resistance is 3:1, we have:

$$\text{Characteristic base resistance, } R_{b;k} = 287 \times 0.75 = 215 \text{ kN}$$

$$\text{Characteristic shaft resistance, } R_{s;k} = 287 \times 0.25 = 72 \text{ kN}$$

Design Approach 1, Combination 1:

Partial factor set R1 is used:

$$R_{c;d} = \frac{R_{c;k}}{\gamma_t} = \frac{287}{1.0} = 287 \text{ kN}$$

or

$$R_{c;d} = \frac{R_{b;k}}{\gamma_b} + \frac{R_{s;k}}{\gamma_s} = \frac{215}{1.0} + \frac{72}{1.0} = 287 \text{ kN}$$

Design Approach 1, Combination 2:

Partial factor set R4 is used:

$$R_{c;d} = \frac{R_{c;k}}{\gamma_t} = \frac{287}{1.7} = 169 \text{ kN}$$

or

$$R_{c,d} = \frac{R_{b,k}}{\gamma_b} + \frac{R_{s,k}}{\gamma_s} = \frac{215}{1.7} + \frac{72}{1.4} = 178 \text{ kN}$$

The design compressive resistance of the ground is thus determined:

$$R_{c,d} = \min(287, 287, 169, 178) = 169 \text{ kN}$$

Example 10.5: Maintained load tests (to EN1997-1:2004)

A structure is to be supported by a series of 9 bored piles, arranged symmetrically beneath a pile cap. Each pile has diameter of 600 mm. The pile cap will carry a vertical representative permanent load, P_G of 10 MN (includes self-weight) and a vertical representative transient load, P_Q of 2800 kN applied with no eccentricity.

Results from two maintained load tests carried out on test piles are shown in Fig 10.9.

Check compliance of the bearing resistance limit state by determining the over design factor for:

- Design Approach 1
- Design Approach 2

Use the partial and correlation factors from EN1997-1:2004.

Solution:

From Table 10.2A:

$$\xi_1 = 1.30; \xi_2 = 1.20$$

The measured resistance $R_{c,m}$ is taken as the pile load recorded at a settlement equal to 10% of the pile diameter (=60 mm).

$$R_{c,m} = 2750 \text{ kN (Test 1), } R_{c,m} = 2900 \text{ kN (Test 2)}$$

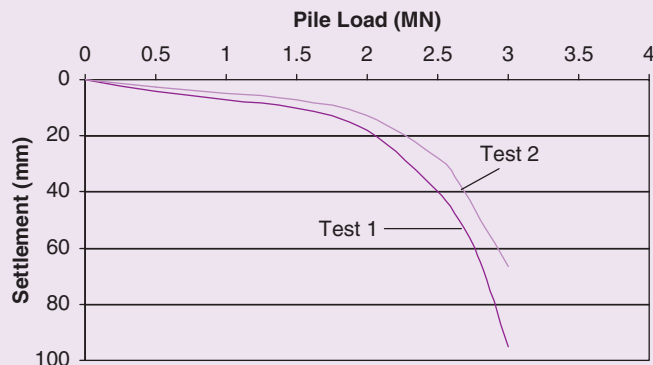


Fig. 10.9 Maintained load test results.

$$R_{\min} = 2750 \text{ kN}$$

$$R_{\text{mean}} = (2750 + 2900) / 2 = 2825 \text{ kN}$$

$$R_{c,k} = \min \left\{ \frac{(R_{c,m})_{\text{mean}}}{\xi_1}; \frac{(R_{c,m})_{\text{min}}}{\xi_2} \right\} = \min \left\{ \frac{2825}{1.3}; \frac{2750}{1.2} \right\} = 2173 \text{ kN}$$

From Table 5.1 and Table 10.3A:

$$\text{DA1-1: } \gamma_{G,\text{unfav}} = 1.35; \gamma_Q = 1.50; \gamma_t = 1.15$$

$$\text{DA1-2: } \gamma_{G,\text{unfav}} = 1.00; \gamma_Q = 1.30; \gamma_t = 1.50$$

$$\text{DA2: } \gamma_{G,\text{unfav}} = 1.35; \gamma_Q = 1.50; \gamma_t = 1.10$$

Consider a single pile:

$$P_G = 10000 / 9 = 1111 \text{ kN}$$

$$P_Q = 2800 / 9 = 311 \text{ kN}$$

a) *Design Approach 1:*

Combination 1:

$$V_{G,d} = 1111 \times 1.35 = 1500 \text{ kN}$$

$$V_{Q,d} = 311 \times 1.5 = 467 \text{ kN}$$

$$F_d = 1500 + 467 = 1967 \text{ kN}$$

$$R_{c,d} = \frac{R_{c,k}}{\gamma_t} = \frac{2173}{1.15} = 1890 \text{ kN}$$

$$\Gamma = \frac{R_{c,d}}{F_d} = \frac{1890}{1967} = 0.96$$

Combination 2:

$$V_{G,d} = 1111 \times 1.0 = 1111 \text{ kN}$$

$$V_{Q,d} = 311 \times 1.3 = 404 \text{ kN}$$

$$F_d = 1111 + 404 = 1515 \text{ kN}$$

$$R_{c,d} = \frac{R_{c,k}}{\gamma_t} = \frac{2173}{1.5} = 1449 \text{ kN}$$

$$\Gamma = \frac{R_{c,d}}{F_d} = \frac{1449}{1515} = 0.96$$

b) *Design Approach 2:*

$$F_d = 1967 \text{ kN}$$

$$R_{c,d} = \frac{R_{c,k}}{\gamma_t} = \frac{2173}{1.1} = 1975 \text{ kN}$$

$$\Gamma = \frac{R_{c,d}}{F_d} = \frac{1975}{1967} = 1.0$$

i.e. whilst compliance of the bearing limit state is not satisfied using Design Approach 1 it is by Design Approach 2.

10.6.3 Ultimate compressive resistance from ground tests results

The design compressive resistance can be determined from ground tests results. Here the characteristic compressive resistance, $R_{c;k}$, is taken as the lesser value of:

$$R_{c;k} = \frac{(R_{b;cal} + R_{s;cal})_{mean}}{\xi_3} \quad \text{and} \quad R_{c;k} = \frac{(R_{b;cal} + R_{s;cal})_{min}}{\xi_4}$$

Where

$(R_{b;cal})_{mean}$ = the mean calculated base resistance

$(R_{s;cal})_{mean}$ = the mean calculated shaft resistance

$(R_{b;cal})_{min}$ = the minimum calculated base resistance

$(R_{s;cal})_{min}$ = the minimum calculated shaft resistance

ξ_3, ξ_4 = correlation factors obtained from Table 10.4A (Eurocode 7, Part 1) or Table 10.4B (UK National Annex).

The calculated base and shaft resistances are determined using the equations set out in Section 10.5.

Table 10.4A Correlation factors – ground tests results (from EN1997-1:2004, Table A10).

	Number of test profiles						
	1	2	3	4	5	7	10
ξ_3	1.4	1.35	1.33	1.31	1.29	1.27	1.25
ξ_4	1.4	1.27	1.23	1.20	1.15	1.12	1.08

Table 10.4B Correlation factors – ground tests results (from NA to BS EN1997-1:2004, Table A.NA.10).

	Number of test profiles						
	1	2	3	4	5	7	10
ξ_3	1.55	1.47	1.42	1.38	1.36	1.33	1.30
ξ_4	1.55	1.39	1.33	1.29	1.26	1.20	1.15

Example 10.6: Ground tests results

A 10m long by 0.7m diameter CFA pile is to be founded in a uniform soft clay. The following test results were established in a geotechnical laboratory as part of a site investigation:

Borehole no.	1	2	3	4
Mean undrained strength along shaft, $c_{u;shaft}$ (kPa)	65	62	70	73
Mean undrained strength at base, $c_{u;base}$ (kPa)	90	79	96	100

The pile will carry a permanent axial load of 500 kN (includes the self-weight of the pile) and an applied transient (variable) axial load of 150 kN.

Check the bearing resistance (GEO) limit state in accordance with Eurocode 7, Design Approach 1 (UK) by establishing the magnitude of the over-design factor. Assume $N_c = 9$ and $\alpha = 0.7$ and assume explicit SLS verification has been undertaken.

Solution:

$$\text{Area of base of pile, } A_b = \frac{\pi D^2}{4} = \frac{\pi \times 0.7^2}{4} = 0.385 \text{ m}^2$$

The total resistance is determined from the results from each borehole:

$$\begin{aligned} (R_{b,cal})_1 &= (N_c \times c_u \times A_b) + (\pi \times D \times L \times \alpha \times c_u) \\ &= (9 \times 90 \times 0.385) + (\pi \times 0.7 \times 10 \times 0.7 \times 65) = 1312 \text{ kN} \end{aligned}$$

$$(R_{b,cal})_2 = (9 \times 79 \times 0.385) + (\pi \times 0.7 \times 10 \times 0.7 \times 62) = 1228 \text{ kN}$$

$$(R_{b,cal})_3 = (9 \times 96 \times 0.385) + (\pi \times 0.7 \times 10 \times 0.7 \times 70) = 1410 \text{ kN}$$

$$(R_{b,cal})_4 = (9 \times 100 \times 0.385) + (\pi \times 0.7 \times 10 \times 0.7 \times 73) = 1470 \text{ kN}$$

$$(R_{c,cal})_{\text{mean}} = \frac{1312 + 1228 + 1410 + 1470}{4} = 1355 \text{ kN}$$

$$(R_{c,cal})_{\text{min}} = 1228 \text{ kN (i.e. Borehole 2)}$$

From Table 10.4B, $\xi_3 = 1.38$; $\xi_4 = 1.29$.

$$R_{c,k} = \frac{(R_{c,cal})_{\text{mean}}}{\xi_3} = \frac{1355}{1.38} = 982 \text{ kN}$$

$$R_{c,k} = \frac{(R_{c,cal})_{\text{min}}}{\xi_4} = \frac{1228}{1.29} = 952 \text{ kN}$$

that is, $(R_{c,cal})_{\text{min}}$ governs and this lower value of $R_{c,k}$ is taken as the characteristic compressive resistance.

Therefore, using ξ_4 :

$$\text{Characteristic base resistance, } R_{b,k} = \frac{9 \times 79 \times 0.385}{1.29} = 212 \text{ kN}$$

$$\text{Characteristic shaft resistance, } R_{s,k} = \frac{\pi \times 0.7 \times 10 \times 0.7 \times 62}{1.29} = 740 \text{ kN}$$

1. *Design Approach 1, Combination 1:*

Design resistance: partial factor set R1 is used (Table 10.3B):

$$R_{c;d} = \frac{R_{b,k}}{\gamma_b} + \frac{R_{s,k}}{\gamma_s} = \frac{212}{1.0} + \frac{740}{1.0} = 952 \text{ kN}$$

Design actions: partial factor set A1 is used (Table 5.1):

$$F_{c;d} = 500 \times 1.35 + 150 \times 1.5 = 900 \text{ kN}$$

$$\text{Over-design factor, } \Gamma = \frac{952}{900} = 1.06$$

2. *Design Approach 1, Combination 2:*

Design resistance: partial factor set R4 is used (Table 10.3B):

$$R_{c;d} = \frac{R_{b;k}}{\gamma_b} + \frac{R_{s;k}}{\gamma_s} = \frac{212}{2.0} + \frac{740}{1.6} = 568.5 \text{ kN}$$

Design actions: partial factor set A2 is used (Table 5.1):

$$F_{c;d} = 500 \times 1.0 + 150 \times 1.3 = 695 \text{ kN}$$

$$\text{Over-design factor, } \Gamma = \frac{568.5}{695} = 0.82$$

Since $\Gamma < 1$, the design of the pile does not satisfy the GEO limit state requirement.

10.6.4 Ultimate compressive resistance from dynamic tests results

Although static load tests and ground tests are the most common methods of determining the compressive resistance of the pile, the resistance can also be estimated from dynamic tests provided that the test procedure has been calibrated against static load tests.

10.7 Pile groups

10.7.1 Action of pile groups

Piles are usually driven in groups and connected at the top to a pile-cap onto which the structural load is placed (Fig. 10.10). The zone of soil or rock which is stressed by the entire group extends to a much greater width and depth than the zone beneath a single pile.

Failure of the group may occur either by failure of an individual pile or by failure of the overall mass of soil supporting the group.

i. End-bearing piles

In the case of end bearing piles the pressure bulbs of the individual piles will overlap if the spacing between the piles is less than 5 times the diameter of a single pile. This is the usual condition. Provided

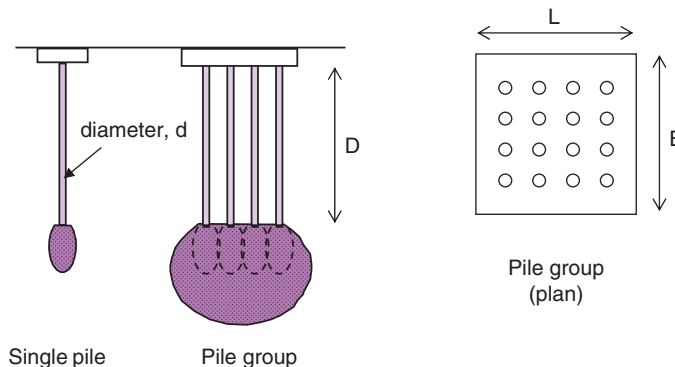


Fig. 10.10 Pile group arrangement.

that the bearing strata are firm throughout the affected depth of this combined bulb, then the bearing capacity of the group will be equal to the sum of the individual strengths of the piles. However, where a compressible layer exists within or immediately below the shaded zone, checks must be made to ensure that the layer will not be overstressed.

ii. **Friction/combination piles**

Pile groups in granular soils:

Pile installation in sands and gravels causes compaction of the soil between the piles. This densification of the soil leads to an increase in the strength of the soil such that the bearing capacity for the group exceeds the sum of the bearing capacities of the individual piles that comprise the group. However, as a conservative approach in design it is usual to take the *group* bearing capacity to be equal to the sum of the *individual* bearing capacities. The spacing of the piles is usually around two to three times the diameter, or breadth, of the individual piles.

Pile groups in cohesive soils:

By contrast, in clays, the load-carrying capacity of a group of vertically loaded piles is considerably less than the sum of the capacities of individual piles comprising the group, and this phenomenon must be considered in the design else excessive settlement might occur.

An important characteristic of pile groups in cohesive soils is the phenomenon of *block failure*. This is when the entire block of soil containing the piles fails along the perimeter of the group.

For block failure

$$Q_u = 2D(B + L)\bar{c}_u + 1.3c_b N_c BL$$

where

D , B , L are the dimensions indicated in Fig. 10.10;

\bar{c}_u is the average undrained strength along the sides of the piles;

c_b is the undrained strength at the base of the piles;

N_c is the bearing capacity coefficient (usually taken as 9.0)

As mentioned, in clays the capacity of an individual pile within a closely spaced group is lower than that for an equivalent "isolated" pile. This effect is pretty insignificant and so may be ignored in design. Of more concern however, is the fact that the block capacity of the group is less than the sum of the individual pile capacities. The spacing of the piles is thus influential. If the piles are placed close together (i.e. less than a distance of approximately $1.5d$ apart) the strength of the group may be governed by the resistance against block failure and thus block failure becomes a likely failure mode. To prevent block failure, the piles should be spaced about $2d - 3d$ apart.

In such cases:

$$Q_u = E n Q_{up}$$

where

E = efficiency of pile group (0.7 for spacings $2d-3d$)

Q_{up} = ultimate bearing capacity of single pile

n = number of piles in group.

10.7.2 Settlement effects in pile groups

Quite often it is the allowable settlement, rather than the bearing resistance, that decides the working load that a pile group may carry.

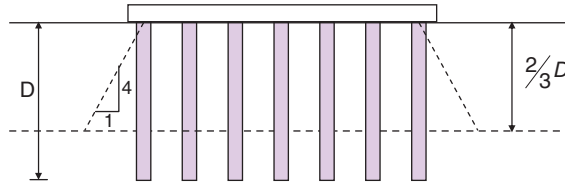


Fig. 10.11 Transfer of load in friction piles.

For bearing piles the total foundation load is assumed to act at the base of the piles on a foundation of the same size as the plan of the pile group. With this assumption it becomes a simple matter to examine settlement effects.

With friction piles it is virtually impossible to determine the level at which the foundation load is effectively transferred to the soil. An approximate method, often used in design, is to assume that the effective transfer level is at a depth of $2D/3$ below the top of the piles. It is also assumed that there is a spread of the total load, one horizontal to four vertical. The settlement of this equivalent foundation (Fig. 10.11) can then be determined by the normal methods.



Exercises

Exercise 10.1

A single test pile, 300 mm diameter, is driven through a depth of 8 m of clay which has an undrained cohesive strength varying from 10 kPa at its surface to 50 kPa at a depth of 8 m. Estimate the safe load that the pile can carry.

Answer 60 kN

Exercise 10.2

Three static load tests were carried out on CFA piles and gave the following results:

Test No.:	1	2	3
Measured load (kN)	1210	1350	1490

A ground investigation has revealed that the resistance of the soil increases rapidly with depth, such that the base resistance may be considered equal to four times the shaft resistance.

Determine the design compressive resistance of the ground in accordance with both Design Approach 1 and Design Approach 2.

Answer (DA1: 794 kN; DA2: 1023 kN)

Exercise 10.3

A 11 m long \times 0.5 m diameter pile is to be driven in a deep deposit of clay. The following test results were established in a geotechnical laboratory as part of a site investigation:

Borehole No.:	1	2	3	4
Mean undrained strength along shaft, $c_{u,shaft}$ (kPa)	120	150	200	135

Further tests revealed that the mean undrained strength at the base of the pile can be approximated to 1.5 times the shaft mean strength for each borehole.

The pile will carry a permanent axial load of 600 kN (includes the self-weight of the pile) and an applied transient (variable) axial load of 250 kN.

Check the bearing resistance (GEO) limit state in accordance with Eurocode 7, Design Approach 1 by establishing the magnitude of the over-design factor. Assume $N_c = 9$ and $\alpha = 0.65$.

Answer (DA1-1: $\Gamma = 1.17$; DA1-2: $\Gamma = 1.15$)

Exercise 10.4

A structure is to be supported by a series of 12 driven piles, arranged symmetrically beneath a pile cap. Pile geometry and loading data are listed below:

$$\begin{aligned} P_G &= 600 \text{ kN} & \xi_3 &= 1.33 \\ P_Q &= 300 \text{ kN} & \xi_4 &= 1.23 \\ D &= 0.8 \text{ m} & L &= 18.5 \text{ m} \end{aligned}$$

Ground tests results from 3 boreholes have given the following values of undrained shear strength:

	BH 1	BH 2	BH 3
$c_{u,shaft}$	52	46	51
$c_{u,base}$	33	30	42

Assume $N_c = 9$ and $\alpha = 0.75$.

Check compliance of the bearing resistance limit state by determining the over design factor for:

- Design Approach 1
- Design Approach 2.

Answer (DA1-1: $\Gamma = 1.12$; DA1-2: $\Gamma = 1.10$; DA2: $\Gamma = 1.02$)

Chapter 11

Foundation Settlement and Soil Compression

11.1 Settlement of a foundation

Probably the most difficult of the problems that a soils engineer is asked to solve is the accurate prediction of the settlement of a loaded foundation.

The problem is in two distinct parts: (i) the value of the total settlement that will occur, and (ii) the rate at which this value will be achieved.

When a soil is subjected to an increase in compressive stress due to a foundation load the resulting soil compression consists of elastic compression, primary compression and secondary compression.

Elastic compression

This compression is usually taken as occurring immediately after the application of the foundation load. Its vertical component causes a vertical movement of the foundation (immediate settlement) that in the case of a partially saturated soil is mainly due to the expulsion of gases and to the elastic bending reorientation of the soil particles. With saturated soils immediate settlement effects are assumed to be the result of vertical soil compression before there is any change in volume.

Primary compression

The sudden application of a foundation load, besides causing elastic compression, creates a state of excess hydrostatic pressure in saturated soil. These excess pore water pressure values can only be dissipated by the gradual expulsion of water through the voids of the soil, which results in a volume change that is time dependent. A soil experiencing such a volume change is said to be consolidating, and the vertical component of the change is called the consolidation settlement.

Secondary compression

Volume changes that are more or less independent of the excess pore water pressure values cause secondary compression. The nature of these changes is not fully understood but they are apparently due to a form of plastic flow resulting in a displacement of the soil particles. Secondary compression effects can continue over long periods of time and, in the consolidation test (see Section 11.3.2), become apparent towards the end of the primary compression stage: due to the thinness of the sample, the excess pore water pressures are soon dissipated and it may appear that the main part of secondary compression occurs after primary compression is completed. This effect is absent in the case of an *in situ* clay layer because the large dimensions involved mean that a considerable time is required before the excess pore pressures

drain away. During this time the effects of secondary compression are also taking place so that, when primary compression is complete, little, if any, secondary effect is noticeable. The terms 'primary' and 'secondary' are therefore seen to be rather arbitrary divisions of the single, continuous consolidation process. The time relationships of these two factors will be entirely different if they are obtained from two test samples of different thicknesses.

11.2 Immediate settlement

11.2.1 Cohesive soils

If a saturated clay is loaded rapidly, the soil will be deformed during the load application and excess hydrostatic pore pressures are set up. This deformation occurs with virtually no volume change, and due to the low permeability of the clay, little water is squeezed out of the voids. Vertical deformation due to the change in shape is the immediate settlement.

This change in shape is illustrated in Fig. 11.1a, where an element of soil is subjected to a vertical major principal stress increase $\Delta\sigma_1$, which induces an excess pore water pressure, Δu . The lateral expansion causes an increase in the minor principal stress, $\Delta\sigma_3$.

The formula for immediate settlement of a flexible foundation was provided by Terzaghi (1943) and is

$$\rho_i = \frac{pB(1-\nu^2)N_p}{E}$$

Where

p = uniform contact pressure

B = width of foundation

E = Young's modulus of elasticity for the soil

ν = Poisson's ratio for the soil (= 0.5 in saturated soil)

N_p = an influence factor depending upon the dimensions of the flexible foundation.

This relationship gives the immediate settlement at the corners of a rectangular footing, length L and width B . In the case of a uniformly loaded, perfectly flexible square footing, the immediate settlement under its centre is twice that at its corners.

Various values for N_p are given in Table 11.1.

By the principle of superposition it is possible to determine the immediate settlement under any point of the base of a foundation (Example 11.2). A spoil heap or earth embankment can be taken as flexible

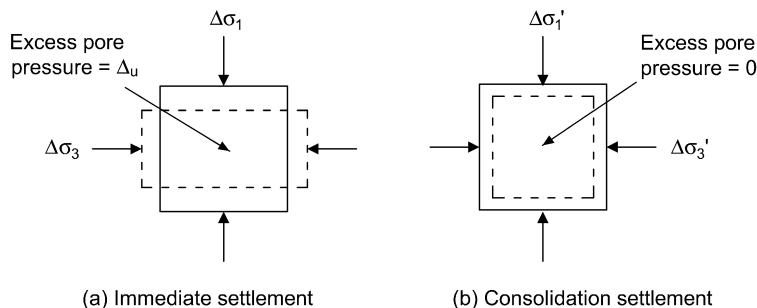


Fig. 11.1 Compressive deformation.

Table 11.1 Values of N_p .

L/B	N_p
1.0	0.56
2.0	0.76
3.0	0.88
4.0	0.96
5.0	1.00

Table 11.2 Values of I_p .

L/B	I_p
circle	0.73
1	0.82
2	1.00
5	1.22
10	1.26

and to determine the immediate settlement of deposits below such a construction the coefficients of Table 11.1 should be used.

Foundations are generally more rigid than flexible and tend to impose a uniform settlement which is roughly the same value as the mean value of settlement under a flexible foundation. The mean value of settlement for a rectangular foundation on the surface of a semi-elastic medium is given by the expression:

$$\rho_i = \frac{pB(1-\nu^2)I_p}{E}$$

where

I_p = an influence factor depending upon the dimensions of the foundation.

Skempton (1951) suggested the values for I_p given in Table 11.2.

Immediate settlement of a thin clay layer

The coefficients of Tables 11.1 and 11.2 only apply to foundations on deep soil layers. Vertical stresses extend to about $4.0B$ below a strip footing and the formulae, strictly speaking, are not applicable to layers thinner than this, although little error is incurred if the coefficients are used for layers of thicknesses greater than $2.0B$. A drawback of the method is that it can only be applied to a layer immediately below the foundation.

For cases when the thickness of the layer is less than $4.0B$ a solution is possible with the use of coefficients prepared by Steinbrenner (1934), whose procedure was to determine the immediate settlement at the top of the layer (assuming infinite depth) and to calculate the settlement at the bottom of the layer (again assuming infinite depth) below it. The difference between the two values is the actual settlement of the layer.

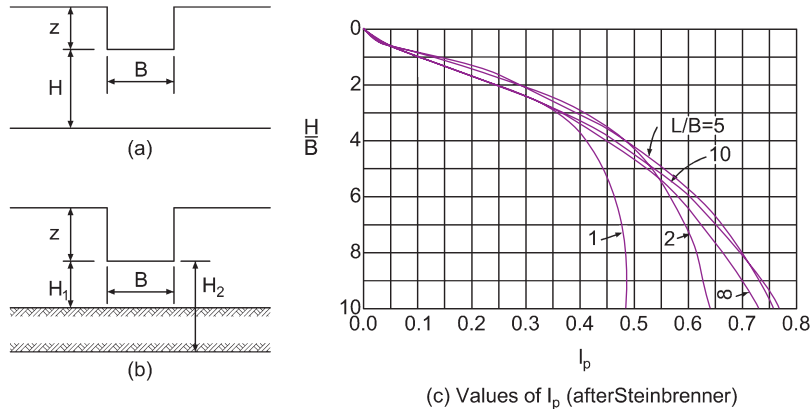


Fig. 11.2 Immediate settlement of thin clay layer.

The total immediate settlement at the corner of a rectangular foundation on an infinite layer is

$$\rho_i = \frac{\rho B(1-\nu^2)I_p}{E}$$

The values of the coefficient I_p (when $\nu = 0.5$) are given in Fig. 11.2c. To determine the settlement of a point beneath the foundation the area is divided into rectangles that meet over the point (the same procedure used when determining vertical stress increments by Steinbrenner's method). The summation of the settlements of the corners of the rectangles gives the total settlement of the point considered.

This method can be extended to determine the immediate settlement of a clay layer which is at some depth below the foundation. In Fig. 11.2b the settlement of the lower layer (of thickness $H_2 - H_1$) is obtained by first determining the settlement of a layer extending from below the foundation that is of thickness H_2 (using E_2); from this value is subtracted the imaginary settlement of the layer H_1 (again using E_2).

It should be noted that the settlement values obtained by this method are for a perfectly flexible foundation. Usually the value of settlement at the centre of the foundation is evaluated and reduced by a rigidity factor (generally taken as 0.8) to give a mean value of settlement that applies over the whole foundation.

Example 11.1: Rigid foundation

A reinforced concrete foundation, of dimensions $20\text{ m} \times 40\text{ m}$ exerts a uniform pressure of 200 kPa on a semi-infinite saturated soil layer ($E = 50\text{ MPa}$).

Determine the value of immediate settlement under the foundation using Table 11.2.

Solution:

$$\frac{L}{B} = \frac{40}{20} = 2.0$$

From Table 11.2, $I_p = 1.0$.

$$\rho_i = \frac{\rho B(1-\nu^2)I_p}{E} = \frac{200 \times 20 \times 0.75 \times 1.0}{50000} = 0.06\text{ m} = 60\text{ mm}$$

Example 11.2: Flexible foundation

The plan of a proposed spoil heap is shown in Fig. 11.3a. The tip will be about 23 m high and will sit on a thick, soft alluvial deposit ($E = 15 \text{ MPa}$). It is estimated that the eventual uniform bearing pressure on the soil will be about 300 kPa. Estimate the immediate settlement under the point A at the surface of the soil.

Solution:

The procedure is to divide the plan area into a number of rectangles, the corners of which must meet at the point A; in Fig. 11.3b it is seen that three rectangles are required. As the structure is flexible and the soil deposit is thick, the coefficients of Table 11.1 should be used:

$$\text{Rectangle (1): } 100 \text{ m} \times 50 \text{ m } \frac{L}{B} = 2.0; \quad N_p = 0.76$$

$$\text{Rectangle (2): } 50 \text{ m} \times 50 \text{ m } \frac{L}{B} = 1.0; \quad N_p = 0.56$$

$$\text{Rectangle (3): } 50 \text{ m} \times 30 \text{ m } \frac{L}{B} = 1.67; \quad N_p = 0.64$$

$$\begin{aligned} \rho_i &= \frac{P}{E} (1 - \nu^2) (N_{p1} B_1 + N_{p2} B_2 + N_{p3} B_3) \\ &= \frac{300 \times 0.75}{15\,000} (0.76 \times 50 + 0.56 \times 50 + 0.64 \times 30) \\ &= 1.28 \text{ m} \end{aligned}$$

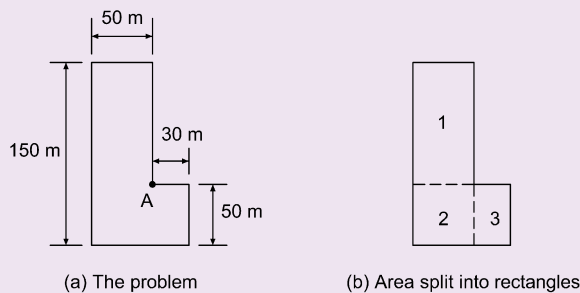


Fig. 11.3 Example 11.2.

The effect of depth

Fox (1948) showed that for deep foundations ($z > B$) the calculated immediate settlements are more than the actual ones, and a reduction may be applied. If $z = B$ the reduction is approximately 25%, increasing to about 50% for infinitely deep foundations.

Most foundations are shallow, however, and although this reduction can be allowed for when a layer of soil is some depth below a foundation, the settlement effects in this case are small so it is not customary practice to reduce them further.

Determination of E

The modulus of elasticity, E , is usually obtained from the results of a consolidated undrained triaxial test carried out on a representative sample of the soil that is consolidated under a cell pressure approximating to the effective overburden pressure at the level from which the sample was taken. The soil is then sheared undrained to obtain the plot of total deviator stress against strain; this is never a straight line and to determine E a line must be drawn from the origin up to the value of deviator stress that will be experienced in the field when the foundation load is applied. In deep layers there is the problem of assessing which depth represents the average, and ideally the layer should be split into thinner layers with a value of E determined for each.

A certain amount of analysis work is necessary in order to carry out the above procedure. The increments of principal stress $\Delta\sigma_1$ and $\Delta\sigma_3$ must be obtained so that the value of $\Delta\sigma_1 - \Delta\sigma_3$ is known, and a safety factor of 3.0 is generally applied against bearing capacity failure. Skempton (1951) points out that when the factor of safety is 3.0 the maximum shear stress induced in the soil is not greater than 65% of the ultimate shear strength, so that a value of E can be obtained directly from the triaxial test results by simply determining the strain corresponding to 65% of the maximum deviator stress and dividing this value into its corresponding stress. The method produces results that are well within the range of accuracy possible with other techniques.

11.2.2 Cohesionless soils

Owing to the high permeabilities of cohesionless soils, both the elastic and the primary effects occur more or less together. The resulting settlement from these factors is termed the immediate settlement.

The chance of bearing capacity failure in a foundation supported on a cohesionless soil is remote, and for these soils it has become standard practice to use settlement as the design criterion. The allowable bearing pressure, p , is generally defined as the pressure that will cause an average settlement of 25 mm in the foundation.

The determination of p from the results of the standard penetration test has been discussed in Chapter 9. If the actual bearing pressure is not equal to the value of p then the value of settlement is not known and, since it is difficult to obtain this value from laboratory tests, resort must be made to *in situ* test results. Most methods used required the value of C_r , the penetration resistance of the cone penetration test, which is usually expressed in MPa or kPa.

Meyerhof's method

A quick estimate of the settlement, ρ , of a footing on sand was proposed by Meyerhof (1974):

$$\rho = \frac{\Delta p B}{2C_r}$$

where

B = the least dimension of the footing

$\overline{C_r}$ = the average value of C_r over a depth below the footing equal to B

Δp = the net foundation pressure increase, which is simply the foundation loading less the value of vertical effective stress at foundation level, σ'_{v0} .

The two other methods commonly in use were proposed by De Beer and Martens (1957) and by Schmertmann (1970). Both methods require a value for C_r and, if either is to be used with standard penetration test results, it is necessary to have the correlation between C_r and N .

Obviously the value of C_r obtained from the cone penetration test must be related to the number of recorded blows, N , obtained from the standard penetration test. Various workers have attempted to find

this relationship with moderate success. Meigh and Nixon (1961) showed that, over a number of sites, C_r varied from $(430 \times N)$ to $(1930 \times N)$ kPa.

The relationship most commonly used at the present time is that proposed by Meyerhof (1956):

$$C_r = 400 \times N \text{ kPa}$$

where N = actual number of blows recorded in the standard penetration test.

It goes without saying that, whenever possible, C_r values obtained from actual cone tests should be used in preference to values estimated from N values.

The relationships between N and C_r , determined by various workers and the implications involved have been discussed by Meigh (1987).

De Beer and Martens' method

From the results of the *in situ* tests carried out, a plot of C_r (or N) values against depth is prepared, similar to that shown in Fig. 10.7. With the aid of this plot the profile of the compressible soil beneath the proposed foundation can be divided into a suitable number of layers, preferably of the same thickness, although this is not essential.

In the case of a deep soil deposit the depth of soil considered as affected by the foundation should not be less than $2.0B$, ideally $4.0B$, where B = foundation width.

The method proposes the use of a constant of compressibility, C_s , where

$$C_s = 1.5 \frac{C_r}{p_{o1}}$$

where

C_r = static cone resistance (kPa)

p_{o1} = effective overburden pressure at the point tested:

Total immediate settlement is

$$\rho_i = \frac{H}{C_s} \ln \frac{p_{o2} + \Delta\sigma_z}{p_{o2}}$$

Where

$\Delta\sigma_z$ = vertical stress increase at the centre of the consolidating layer of thickness H

p_{o2} = effective overburden pressure at the centre of the layer before any excavation or load application.

Note: Meyerhof (1956) suggests that a more realistic value for C_s is

$$C_s = 1.9 \frac{C_r}{p_{o1}}$$

Such a refinement may be an advantage if the calculations use C_r values which have been determined from cone penetration tests, but if the C_r values used have been obtained from the relationship $C_r = 400$ kPa, such a refinement seems naive.

Schmertmann's method

Originally proposed by Schmertmann in 1970 and modified by Schmertmann *et al.* (1978), the method is now generally preferred to De Beer and Martens' approach.

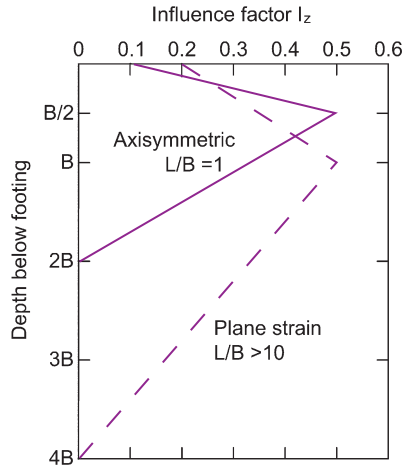


Fig. 11.4 Variation of I_z with depth (after Schmertmann, 1970).

The method is based on two main assumptions:

- (i) the greatest vertical strain in the soil beneath the centre of a loaded foundation of width B occurs at depth $B/2$ below a square foundation and at depth of B below a long foundation;
- (ii) significant stresses caused by the foundation loading can be regarded as insignificant at depths greater than $z = 2.0B$ for a square footing and $= 4.0B$ for a strip footing.

The method involves the use of a vertical strain influence factor, $I_{z'}$, whose value varies with depth. Values of $I_{z'}$ for a net foundation pressure increase, Δp , equal to the effective overburden pressure at depth $B/2$, are shown in Fig. 11.4.

The procedure consists of dividing the sand below the footing into n layers, of thicknesses $\Delta z_1, \Delta z_2, \Delta z_3, \dots, \Delta z_n$. If soil conditions permit it is simpler if the layers can be made of equal thickness, Δz . The vertical strain of a layer is taken as equal to the increase in vertical stress at the centre of the layer, i.e. Δp multiplied by $I_{z'}$, which is then divided by the product of C_r and a factor x . Hence:

$$\rho = C_1 C_2 \Delta p \sum_1^n \frac{I_{z'}}{x C_r} \Delta z_1$$

where

$x = 2.5$ for a square footing and 3.5 for a long footing

$I_{z'}$ = the strain influence factor, valued for each layer at its centre, and obtained from a diagram similar to Fig. 11.4 but redrawn to correspond to the foundation loading

C_1 = a correction factor for the depth of the foundation

$$= 1.0 - 0.5 \frac{\sigma'_v}{\Delta p} \quad (= 1.0 \text{ for a surface footing})$$

C_2 = a correction factor for creep

$$= 1 + 0.2 \log_{10} 10t \quad (t = \text{time in years after the application of foundation loading for which the settlement value is required}).$$

As mentioned above, Fig. 11.4 must be redrawn. This is achieved by obtaining a new peak value for I_z from the expression

$$I_z = 0.5 + 0.1 \left(\frac{\Delta p}{\sigma'_{vp}} \right)^{0.5}$$

where σ'_{vp} = the effective vertical overburden pressure at a depth of $0.5B$ for a square foundation and at a depth of $1.0B$ for a long foundation.

Example 11.3: Settlement on a cohesionless soil

A foundation, 1.5 m square, will carry a load of 300 kPa and will be founded at a depth of 0.75 m in a deep deposit of granular soil. The soil may be regarded as saturated throughout with a unit weight of 20 kN/m^3 , and the approximate N to z relationship is shown in Fig. 11.5a.

If the groundwater level occurs at a depth of 1.5 m below the surface of the soil determine a value for the settlement at the centre of the foundation, (a) by De Beer and Martens' method, (b) by Schmertmann's method.

Solution:

(a) De Beer and Martens' method

The soil deposit is deep, therefore investigate to a depth of about $3B$ to $4B$ below foundation. In conjunction with Fig. 11.5a it is seen that a depth of 5 m below the foundation can be conveniently divided into four layers of soil, two of 1 m and two of 1.5 m thickness, as shown in the tabulated workings, but not in Fig. 11.5.

$$\text{Net pressure, } p = 300 - (0.75 \times 20) = 285 \text{ kPa}$$

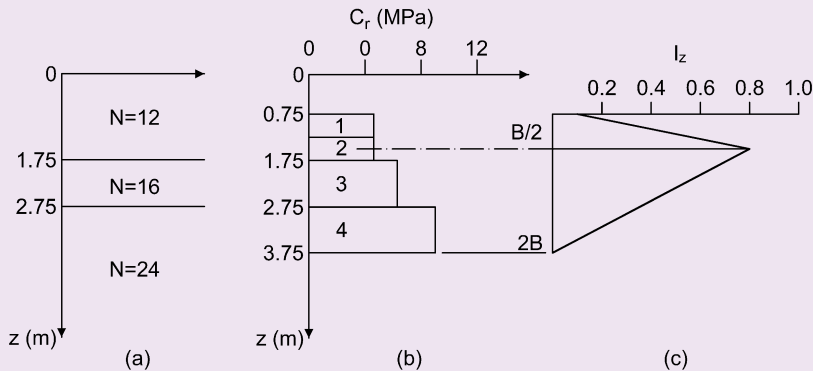


Fig. 11.5 Example 11.3. (a) N to z relationship; (b) C_r to z relationship (part (b) of example); (c) variation of I_z (part (b) of example).

Layer	Thickness, H (m)	C_r (kPa)	P_{o1} at layer centre (kPa)	$C_s = \frac{1.5C_r}{P_{o1}}$
1	1.0	$400 \times 12 = 4800$	$20 \times 1.25 = 25$	288
2	1.0	$400 \times 16 = 6400$	$(20 \times 2.25) - (9.81 \times 0.75) = 37.6$	255
3	1.5	$400 \times 24 = 9600$	$(20 \times 3.5) - (9.81 \times 2.0) = 50.4$	286
4	1.5	9600	$(20 \times 5.0) - (9.81 \times 3.5) = 65.7$	219

Use Steinbrenner's method (Section 3.5.3) to determine vertical pressure increments. Then $B = L = 1.5/2 = 0.75$ m, and $p_{o1} = p_{o2}$ for each layer.

Layer	$B/z = L/z$	I_σ	$4I_\sigma$	$\Delta\sigma_z = 4pl_\sigma$	$\ln\left(\frac{p_0 + \Delta z}{P_0}\right)$ (A)	$\frac{H}{C_s} \times (A)$ (m)
1	$0.75/0.5 = 1.5$	0.213	0.852	243	2.3721	0.00824
2	$0.75/1.5 = 0.5$	0.088	0.352	100	1.2973	0.00509
3	$0.75/2.75 = 0.27$	0.03	0.12	34	0.5156	0.00270
4	$0.75/4.25 = 0.18$	0.015	0.06	17	0.2301	0.00158
						$\Sigma 0.01761$

Total settlement = $0.01761 \times 1000 = 17.6$ mm, say 18 mm

(b) Schmertmann's method

For a square footing significant depths extend to $2.0B$ and σ'_{vp} is taken as the effective vertical overburden pressure at a depth of $0.5B$ below the foundation, i.e. in this example, 0.75 m, so that $\sigma'_{vp} = 20(0.75 + 0.75) = 30$ kPa. Net foundation pressure increase $\Delta p = 300 - 20 \times 0.75 = 285$ kPa. Hence:

$$I_z = 0.5 + 0.1 \left(\frac{\Delta p}{\sigma'_{vp}} \right)^{0.5}$$

$$= 0.5 + 0.1(285/30)^{0.5} = 0.81$$

The variation of I_z for depths up to $2B$ below the foundation is shown in Fig. 11.5c. The C_r values shown in Fig. 11.5b are obtained from the N values using the relationship $C_r = 0.4N$ MPa. With these C_r values, it is possible to decide upon the number and thicknesses of the layers that the soil can be divided into. For this example, for the purpose of illustration, only four layers have been chosen and these are shown in Fig. 11.5(b). (For greater accuracy the number of layers should be about 8 for a square footing and up to 16 for a long footing.) For a square foundation Schmertmann recommends that the value of the factor $x = 2.5$. The calculations are set out below.

Layer	Δz_i (m)	Depth below foundation to centre of layer (m)	C_r (MPa)	I_z	$\frac{I_z \Delta z_i}{x C_r}$
1	0.5	0.25	4.8	0.27	0.011
2	0.5	0.75	4.8	0.81	0.034
3	1.0	1.5	6.4	0.53	0.033
4	1.0	2.5	9.6	0.18	0.008
					$\Sigma 0.09$

$$C_1 = 1.0 - 0.5 \frac{\sigma'_v}{\Delta p} = 1 - \left(0.5 \times \frac{15}{285} \right) = 0.97$$

Assume that $C_2 = 1.0$, then:

$$\rho = 0.97 \times 285 \times 0.09 = 24.9 \text{ mm}$$

Total settlement of centre of foundation = 25 mm

The plate loading test

The results from a plate loading test (see Section 6.6.5) can be used to predict the average settlement of a proposed foundation on granular soil. The test should be carried out at the proposed foundation level and the soil tested must be relatively homogeneous for some depth.

If ρ_1 is the settlement of the test footing under a certain value of bearing pressure, then the average settlement of the foundation, ρ , under the same value of bearing pressure can be obtained by the empirical relationship proposed by Terzaghi and Peck (1948):

$$\rho = \rho_1 \left(\frac{2B}{B + B_1} \right)^2$$

where

B_1 = width or diameter of test footing

B = width or diameter of proposed foundation.

One aspect of using the results from a plate loading test for settlement predictions is that it is important to know the position of the groundwater level.

It may be that the bulb of pressure from the test footing is partly or completely above the groundwater level whereas, when the foundation is constructed, the groundwater level will be significantly within the bulb of pressure. Such a situation could lead to actual settlement values as much as twice the values predicted by the formula.

11.3 Consolidation settlement

This effect occurs in clays where the value of permeability prevents the initial excess pore water pressures from draining away immediately. The design loading used to calculate consolidation settlement must be consistent with this effect.

A large wheel load rolling along a roadway resting on a clay will cause an immediate settlement that is in theory completely recoverable once the wheel has passed, but if the same load is applied permanently there will in addition be consolidation. Judgement is necessary in deciding what portion of the superimposed loading carried by a structure will be sustained long enough to cause consolidation, and this involves a quite different procedure from that used in a bearing capacity analysis, which must allow for total dead and superimposed loadings.

11.3.1 One-dimensional consolidation

The pore water in a saturated clay will commence to drain away soon after immediate settlement has taken place: the removal of this water leading to the volume change is known as consolidation (Fig. 11.1b).

The element contracts both horizontally and vertically under the actions of $\Delta\sigma'_3$ and $\Delta\sigma'_1$, which gradually increase in magnitude as the excess pore water pressure, Δu , decreases. Eventually, when $\Delta u = 0$, then $\Delta\sigma'_3 = \Delta\sigma_3$ and $\Delta\sigma'_1 = \Delta\sigma_1$, and at this stage consolidation ceases, although secondary consolidation may still be apparent.

If it can be arranged for the lateral expansion due to the change in shape to equal the lateral compression consequent upon the change in volume, and for these changes to occur together, then there will be no immediate settlement and the resulting compression will be one-dimensional with all the strain occurring in the vertical direction. Settlement by one-dimensional strain is by no means uncommon in practice, and most natural soil deposits have experienced one-dimensional settlement during the process of deposition and consolidation.

The consolidation of a clay layer supporting a foundation whose dimensions are much greater than the layer's thickness is essentially one-dimensional as lateral strain effects are negligible save at the edges.

11.3.2 The consolidation test

The apparatus generally used in the laboratory to determine the primary compression characteristics of a soil is known as the consolidation test apparatus (or oedometer) and is illustrated in Fig. 11.6a.

The soil sample (generally 75 mm diameter and 20 mm thick) is encased in a steel cutting ring. Porous discs, saturated with air-free water, are placed on top of and below the sample, which is then inserted in the oedometer.

A vertical load is then applied and the resulting compression measured by means of a transducer at intervals of time, readings being logged until the sample has achieved full consolidation (usually for a period of 24 hours). Further load increments are then applied and the procedure repeated, until the full stress range expected *in situ* has been covered by the test (Fig. 11.6b).

The test sample is generally flooded with water soon after the application of the first load increment in order to prevent pore suction.

After the sample has consolidated under its final load increment the pressure is released in stages at 24 hour intervals and the sample allowed to expand. In this way an expansion to time curve can also be obtained.

After the loading has been completely removed the final thickness of the sample can be obtained, from which it is possible to calculate the void ratio of the soil for each stage of consolidation under the load increments. The graph of void ratio to consolidation pressure can then be drawn, such a curve generally being referred to as an *e-p* curve (Fig. 11.7a).

It should be noted that the values of *p* refer to effective stress, for after consolidation the excess pore pressures become zero and the applied stress increment is equal to the effective stress increment.

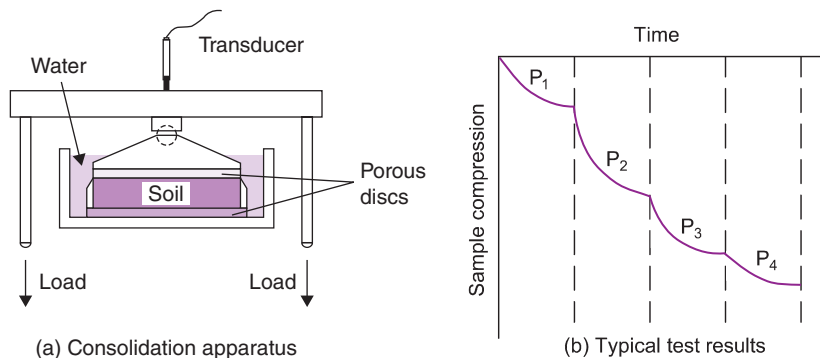


Fig. 11.6 The consolidation test.

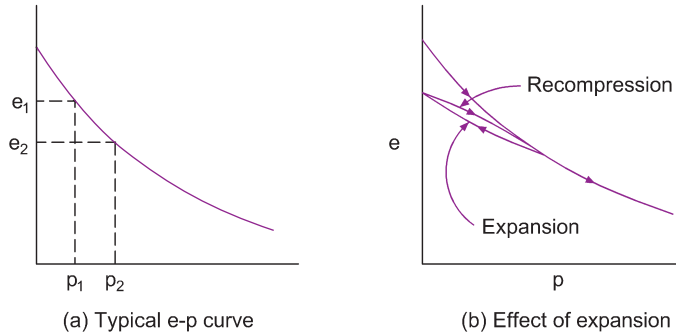


Fig. 11.7 Void ratio to effective pressure curves.

If the sample is recompressed after the initial cycle of compression and expansion, the e–p curve for the whole operation is similar to the curves shown in Fig. 11.7b; the recompression curve is flatter than the original compression curve, primary compression being made up of (i) a reversible part and (ii) an irreversible part. Once the consolidation pressure is extended beyond the original consolidation pressure value (the preconsolidation pressure), the e–p curve follows the trend of the original compression curve.

All types of soil, whether sand, silt or clay, have the form of compression curves illustrated in Fig. 11.7. The curves shown can be produced quite quickly in the laboratory for teaching purposes, using a dry sand sample, but consolidation problems are mainly concerned with clays and the oedometer is therefore only used to test these types of soil.

11.3.3 Volumetric change

The volume change per unit of original volume constitutes the volumetric change. If a mass of soil of volume V_1 is compressed to a volume V_2 , the assumption is made that the change in volume has been caused by a reduction in the volume of the voids.

$$\begin{aligned} \text{Volumetric change} &= \frac{V_1 - V_2}{V_1} \\ &= \frac{(1 + e_1) - (1 + e_2)}{1 + e_1} \\ &= \frac{e_1 - e_2}{1 + e_1} \end{aligned}$$

where

e_1 = void ratio at p_1

e_2 = void ratio at p_2 .

The slope of the e–p curve is given the symbol 'a', then:

$$a = \frac{e_1 - e_2}{p_1 - p_2} \text{ m}^2/\text{kN}$$

i.e.

$$a = \frac{de}{dp}$$

The slope of the e - p curve is seen to decrease with increase in pressure; in other words, a is not a constant but will vary depending upon the pressure. Settlement problems are usually only concerned with a range of pressure (that between the initial pressure and the final pressure), and over this range a is taken as constant by assuming that the e - p curve between these two pressure values is a straight line.

11.3.4 The Rowe oedometer

An alternative form to the consolidation cell shown in Fig. 11.6 was described by Rowe and Barden (1966) and is listed in BS 1377: Part 6.

The oedometer is hydraulically operated and a various range of cell sizes are available so that test specimens as large as 500 mm diameter and 250 mm thick can be tested. The machine is particularly useful for testing samples from clay deposits where macrofabric effects are significant.

A constant pressure system applies a hydraulic pressure, via a convoluted rubber jack made from rubber some 2 mm thick, on to the top of the test specimen. Vertical settlement is measured at the centre of the sample by means of a hollow brass spindle, 10 mm diameter, attached to the jack and passing out through the centre of the top plate to a suitable dial gauge or transducer.

Drainage of the sample can be made to vary according to the nature of the test and can be either vertical or radial, the latter being arranged to be either inwards or outwards. The expelled water exits via the spindle and it is possible to measure pore water pressures during the test, as well as applying a back pressure to the specimen if required. The apparatus can also be used for permeability tests, as described in BS 1377-6:1990.

11.3.5 Coefficient of volume compressibility, m_v

This value, which is sometimes called the coefficient of volume decrease, represents the compression of a soil, per unit of original thickness, due to a unit increase in pressure, i.e.

$$m_v = \text{Volumetric change/Unit of pressure increase}$$

If H_1 = original thickness and H_2 = final thickness:

$$\begin{aligned} \text{Volumetric change} &= \frac{V_1 - V_2}{V_1} = \frac{H_1 - H_2}{H_1} \text{ (as area is constant)} \\ &= \frac{e_1 - e_2}{1 + e_1} \end{aligned}$$

Now

$$a = \frac{e_1 - e_2}{dp}$$

$$\Rightarrow \text{Volumetric change} = \frac{a dp}{1 + e_1}$$

$$\Rightarrow m_v = \frac{a dp}{1 + e_1} \frac{1}{dp} = \frac{a}{1 + e_1} \text{ m}^2/\text{MN}$$

For most practical engineering problems m_v values can be calculated for a pressure increment of 100 kPa in excess of the present effective overburden pressure at the sample depth.

Once the coefficient of volume decrease has been obtained we know the compression/unit thickness/unit pressure increase. It is therefore an easy matter to predict the total consolidation settlement of a clay layer of thickness H :

Table 11.3 m_v ranges for different soil types.

Soil	m_v (m^2/MN)
Peat	10.0–2.0
Plastic clay (normally consolidated alluvial clays)	2.0–0.25
Stiff clay	0.25–0.125
Hard clay (boulder clays)	0.125–0.0625

$$\text{Total settlement} = \rho_c = m_v dp H$$

Typical values of m_v are given in Table 11.3.

In the laboratory consolidation test the compression of the sample is one-dimensional as there is lateral confinement, the initial excess pore water pressure induced in a saturated clay on loading being equal to the magnitude of the applied major principal stress (due to the fact that there is no lateral yield). This applies no matter what type of soil is tested, provided it is saturated.

One-dimensional consolidation can be produced in a triaxial test specimen by means of a special procedure known as the K_0 test (see Bishop and Henkel, 1962).

Example 11.4: Consolidation test

The following results were obtained from a consolidation test on a sample of saturated clay, each pressure increment having been maintained for 24 hours.

Pressure (kPa)	Thickness of sample after consolidation (mm)
0	20.0
50	19.65
100	19.52
200	19.35
400	19.15
800	18.95
0	19.25

After it had expanded for 24 hours the sample was removed from the apparatus and found to have a water content of 25%. The particle specific gravity of the soil was 2.65.

Plot the void-ratio to effective pressure curve and determine the value of the coefficient of volume change for a pressure range of 250–350 kPa.

Solution:

$$w = 0.25; \quad G_s = 2.65$$

Now $e = wG_s$ (as soil is saturated) $= 0.25 \times 2.65 = 0.662$. This is the void ratio corresponding to a sample thickness of 19.25 mm.

$$\frac{dH}{H_1} = \frac{de}{1+e_1} \Rightarrow de = \frac{(1+e_1)}{H_1} dH = \frac{1.662}{19.25} dH = 0.0865 dH$$

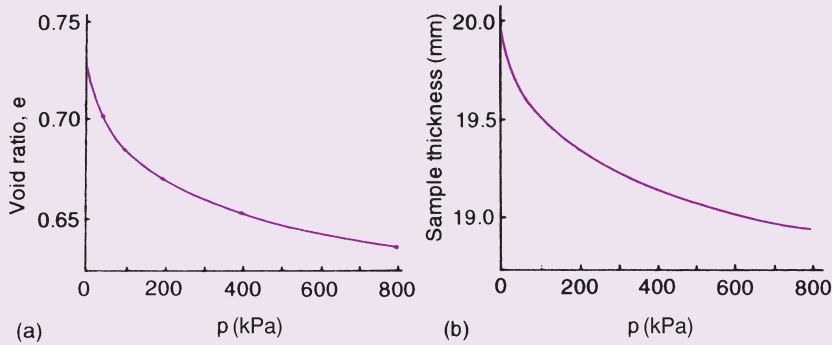


Fig. 11.8 Example 11.4.

The values of e at the end of each consolidation can be calculated from this expression.

Pressure (kPa)	H (mm)	dH (mm)	de	e
0	20.0	+0.75	+0.065	0.727
50	19.65	+0.40	+0.035	0.697
100	19.52	+0.27	+0.023	0.685
200	19.35	+0.10	+0.009	0.671
400	19.15	-0.10	-0.009	0.653
800	18.95	-0.30	-0.026	0.636
0	19.25	0	0	0.662

From the e - p curve in Fig. 11.8a:

e at 250 kPa = 0.666

e at 350 kPa = 0.658

$$a = \frac{0.666 - 0.658}{100}$$

$$= 0.00008 \text{ m}^2/\text{kN}$$

$$\Rightarrow m_v = \frac{a}{1 + e_1} = \frac{0.00008}{1.666}$$

$$= 4.8 \times 10^{-5} \text{ m}^2/\text{kN}$$

Alternative method for determining m_v

m_v can be expressed in terms of thicknesses:

$$m_v = \frac{dH}{H_1} \frac{1}{dp} = \frac{1}{H_1} \frac{dH}{dp}$$

dH/dp is the slope of the curve of thickness of sample against pressure. Hence m_v can be obtained by finding the slope of the curve at the required pressure and dividing by the original thickness. The thickness/pressure curve is shown in Fig. 11.8b; from it:

H at 250 kPa = 19.28

H at 350 kPa = 19.19

$$m_v = \frac{19.28 - 19.19}{19.28 \times 100} = \frac{0.09}{19.28 \times 100}$$

$$= 4.7 \times 10^{-5} \text{ m}^2/\text{kN}$$

If a layer of this clay, 20m thick, had been subjected to this pressure increase then the consolidation settlement would have been:

$$\rho_c = m_v H dp = 0.000047 \times 20 \times 100 \times 1000 = 96 \text{ mm}$$

Note: The practice of working back from the end of the consolidation test, i.e. from the expanded thickness, in order to obtain an e-p curve is generally accepted as being the most satisfactory as there is little doubt that the sample is more likely to be fully saturated after expansion than at the start of the test.

However, it is possible to obtain the e-p curve by working from the original thickness.

Void ratio is given by the expression

$$e = \frac{V_v}{V_s} = \frac{V - V_s}{V_s} = \frac{A(H - H_s)}{AH_s} = \frac{H - H_s}{H_s}$$

where:

A = area of sample

H = height or thickness

H_s = equivalent height of solids (V_s/A).

Now

$$V_s = \frac{M}{G_s \rho_w}$$

$$\Rightarrow H_s = \frac{M_s}{G_s \rho_w A}$$

By way of illustration let us use the test results of Example 11.4 together with the following information:

Original dimensions of test sample: 75 mm diameter, 20 mm thickness

Mass of sample after removing complete from consolidation apparatus at end of test and drying in oven = 135.6 g.

$$M_s = 135.6 \text{ g}; \quad A = \frac{\pi}{4} \times 75^2 = 4418 \text{ mm}^2$$

$$\Rightarrow H_s = \frac{135.6 \times 1000}{2.65 \times 1 \times 4418} = 11.58 \text{ mm}$$

Now, as shown above:

$$e = \frac{H - H_s}{H_s}$$

Hence the void ratio to pressure relationship can be found.

Pressure (kPa)	Thickness, H (mm)	$e = \frac{H - H_s}{H_s}$
0	20	$\frac{20 - 11.58}{11.58} = 0.727$
50	19.65	0.697
100	19.52	0.685
200	19.35	0.671
400	19.15	0.653
800	18.95	0.636

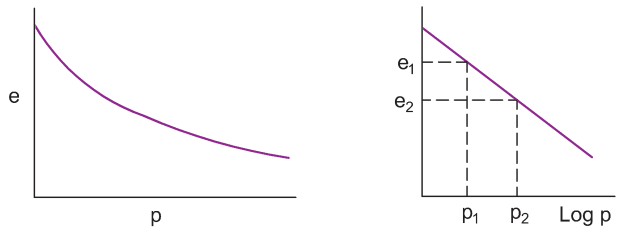
Note: Such close agreement between the two methods for determining the e-p relationship could only happen in a theoretical example. In practice one often finds large discrepancies between the two methods.

11.3.6 The virgin consolidation curve

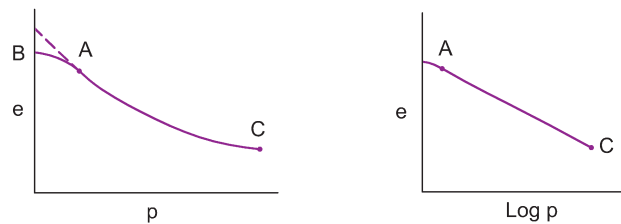
Clay is generally formed by the process of sedimentation from a liquid in which the soil particles were gradually deposited and compressed as more material was placed above them. The e-p curve corresponding to this natural process of consolidation is known as the virgin consolidation curve (Fig. 11.9a).

This curve is approximately logarithmic. If the values are plotted to a semi-log scale (e to a natural scale, p to a logarithmic scale), the result is a straight line of equation:

$$e = e_0 - C_c \log_{10} \frac{p_0 + dp}{p_0}$$



(a) Natural consolidation



(b) Normally consolidated clay

Fig. 11.9 e-p and e-log p curves for natural consolidation and for a normally consolidated clay.

Hence e_2 can be expressed in terms of e_1 :

$$e_2 = e_1 - C_C \log_{10} \frac{p_2}{p_1}$$

C_C is known as the compression index of the clay.

Compression curve for a normally consolidated clay

A normally consolidated clay is one that has never experienced a consolidation pressure greater than that corresponding to its present overburden. The compression curve of such a soil is shown in Fig. 11.9b.

The clay was originally compressed, by the weight of material above, along the virgin consolidation curve to some point A. Owing to the removal of pressure during sampling the soil has expanded to point B. Hence from B to A the soil is being recompressed whereas from A to C the virgin consolidation curve is followed.

The semi-log plot is shown in Fig. 11.9b. As before on the straight line part:

$$e_2 = e_1 - C_C \log_{10} \frac{p_2}{p_1}$$

Compression curve for an overconsolidated clay

An overconsolidated clay is one which has been subjected to a preconsolidation pressure in excess of its existing overburden (Fig. 11.10a), the resulting compression being much less than for a normally consolidated clay. The semi-log plot is no longer a straight line and a compression index value for an overconsolidated clay is no longer a constant.

From the e - p curve it is possible to determine an approximate value for the preconsolidated pressure with the use of a graphical method proposed by Casagrande (1936). First estimate the point of greatest curvature, A, then draw a horizontal line through A (AB) and the tangent to the curve at A (AC). Bisect the angle BAC to give the line AD, and locate the straight part of the compression curve (in Fig. 11.10a the straight part commences at point E). Finally project the straight part of the curve upwards to cut AD in F. The point F then gives the value of the preconsolidation pressure.

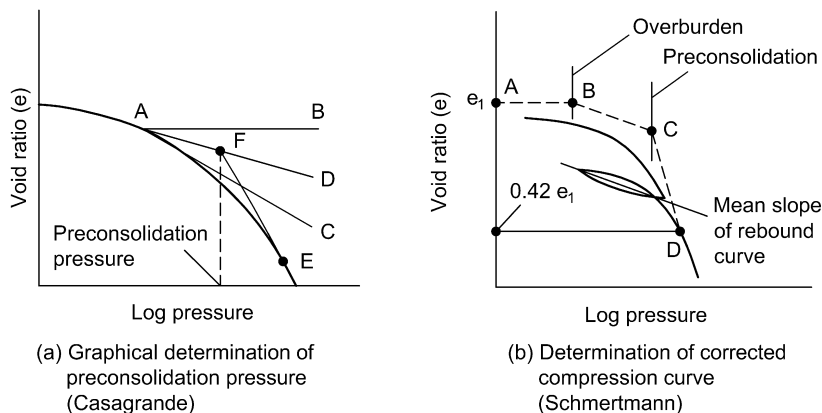


Fig. 11.10 Compression curves for an over-consolidated clay.

Evaluation of consolidation settlement from the compression index

$$\frac{dH}{H_1} = \frac{e_1 - e_2}{1 + e_1}$$

$$\Rightarrow dH = \frac{e_1 - e_2}{1 + e_1} H_1$$

$$e_1 - e_2 = C_c \log_{10} \frac{p_2}{p_1}$$

$$\Rightarrow \rho_c = dH = \frac{C_c}{1 + e_1} \log_{10} \frac{p_2}{p_1} H_1$$

This equation is only relevant when a clay is being compressed for the first time and therefore cannot be used for an overconsolidated clay.

Determination of compression index C_c

Terzaghi and Peck (1948) have shown that there is an approximate relationship between the liquid limit of a normally consolidated clay and its compression index. This relationship has been established experimentally and is:

$$C_c \approx 0.009(w_L - 10\%)$$

Example 11.5: Approximate settlement of a soft clay

A soft, normally consolidated clay layer is 15m thick with a natural water content of 45%. The clay has a saturated unit weight of 17.2 kN/m^3 , a particle specific gravity of 2.68 and a liquid limit of 65%. A foundation load will subject the centre of the layer to a vertical stress increase of 10.0 kPa.

Determine an approximate value for the settlement of the foundation if groundwater level is at the surface of the clay.

Solution:

Initial vertical effective stress at centre of layer

$$= (17.2 - 9.81) \frac{15}{2}$$

$$= 55.4 \text{ kPa}$$

$$\text{Final effective vertical stress} = 55.4 + 10 = 65.4 \text{ kPa}$$

$$\text{Initial void ratio, } e_1 = wG_s = 0.45 \times 2.68 = 1.21$$

$$C_c = 0.009(65 - 10) = 0.009 \times 55 = 0.495$$

$$\rho_c = \frac{0.495}{2.21} \times \log_{10} \frac{65.4}{55.4} \times 15$$

$$= 0.024 \text{ m} = 240 \text{ mm}$$

This method can be used for a rough settlement analysis of a relatively unimportant small structure on a soft clay layer. For large structures, consolidation tests would be carried out.

11.4 Application of consolidation test results

The range of pressure generally considered in a settlement analysis is the increase from p_1 (the existing vertical effective overburden pressure) to p_2 (the vertical effective pressure that will operate once the foundation load has been applied and consolidation has taken place), so that in the previous discussion e_1 represents the void ratio corresponding to the effective overburden pressure and e_2 represents the final void ratio after consolidation. In some text books and papers the initial void ratio, e_1 , is given the symbol e_0 .

Obtaining a test sample entails removing all of the stresses which are applied to it, this reduction in effective stress causing the sample to either swell or develop negative pore water pressures within itself. Owing to the restraining effect of the sampling tube most soil samples tend to have a negative pore pressure.

In the consolidation test the sample is submerged in water to prevent evaporation losses, with the result that the negative pore pressures will tend to draw in water and the sample consequently swells. To obviate this effect the normal procedure is to start the test by applying the first load increment and then to add the water, but if the sample still tends to swell an increased load increment must be added and the test readings started again. The point e_1 is taken to be the position on the test e - p curve that corresponds to the effective overburden pressure at the depth from which the sample was taken; in the case of a uniform deposit various values of e_1 can be obtained for selected points throughout the layer by reading off the test values of void ratio corresponding to the relevant effective overburden pressures. Generally the test e - p curve lies a little below the actual *in situ* e - p curve, the amount of departure depending upon the degree of disturbance in the test sample. Bearing in mind the inaccuracies involved in any analysis, this departure from the consolidation curve will generally be of small significance unless the sample is severely disturbed and most settlement analyses are based on the actual test results.

An alternative method, mainly applicable to overconsolidated clays, was proposed by Schmertmann (1953), who pointed out that e_1 must be equal to wG_s , where w is the *in situ* water content at the point considered, and that in a consolidation test on an ideal soil with no disturbance, the void ratio of the sample should remain constant at e_1 throughout the pressure range from zero to the effective overburden pressure value. Schmertmann found that the test e - p curve tends to cut the *in situ* virgin consolidation curve at a void ratio value somewhere between 37 and 42% of e_1 and concluded that a reasonable figure for this intersection is $e = 0.42e_1$.

In order to obtain the corrected curve, with disturbance effects removed, the test sample is either loaded through a pressure range that eventually reduces the void ratio of the sample to $0.42e_1$ or else the test is extended far enough for extrapolated values to be obtained, at least one cycle of expansion and recompression being carried out during the test. The approximate value of the preconsolidation pressure is obtained and the test results are put in the form of a semi-log plot of void ratio to $\log p$ (Fig. 11.10b). The value of e_1 is obtained from wG_s , w being found from a separate test sample (usually cuttings obtained during the preparation of the consolidation test sample). It is now possible to plot on the test curve (point A) and a horizontal line (AB) is drawn to cut the ordinate of the existing overburden pressure at point B; a line BC is next drawn parallel to the mean slope of the laboratory rebound curve to cut the preconsolidation pressure ordinate at point C, and the value of void ratio equal to $0.42e_1$ is obtained and established on the test curve (point D). Finally points C and D are joined. The corrected curve therefore consists of the three straight lines: AB (parallel to the pressure axis with a constant void ratio value e_1), BC (representing the recompression of the soil up to the preconsolidation pressure), and CD (representing initial compression along the virgin consolidation line).

Apart from the elimination of disturbance effects the method is useful because it permits the use of a formula similar to the compression index of a normally consolidated clay:

$$\rho_c = \frac{C}{1 + e_1} \log_{10} \frac{p_2}{p_1} H$$

where C is the slope of the corrected curve (generally recompression). If the pressure range extends into initial compression the calculation must be carried out in two parts using the two different C values.

11.5 General consolidation

In the case of a foundation of finite dimensions, such as a footing sitting on a thick bed of clay, lateral strains will occur and the consolidation is no longer one-dimensional. If two saturated clays of equal compressibility and thickness are subjected to the same size of foundation and loading, the resulting settlements may be quite different even though the consolidation tests on the clays would give identical results. This is because lateral strain effects in the field may induce unequal pore pressures whereas in the consolidation test the induced pore pressure is always equal to the increment of applied stress.

For a saturated soil:

$$\Delta u = \Delta \sigma_3 + A(\Delta \sigma_1 - \Delta \sigma_3) \quad (\text{see Section 4.10})$$

Let

p'_1 = initial effective major principal stress

$\Delta \sigma_1$ = increment of total major principal stress due to the foundation loading

Δu = excess pore water pressure induced by the load.

The effective major principal stress on load application will be:

$$p'_1 + \Delta \sigma_1 - \Delta u$$

The effective major principal stress after consolidation will be:

$$p'_1 + \Delta \sigma_1$$

Let

p'_3 = initial effective minor principal stress

$\Delta \sigma_3$ = increment of total minor principal stress due to the foundation loading.

The horizontal effective stress on load application will be:

$$p'_3 + \Delta \sigma_3 - \Delta u$$

If the expression for Δu is examined it will be seen that Δu is greater than $\Delta \sigma_3$. The horizontal effective stress therefore reduces when the load is applied and there will be a lateral expansion of the soil. Hence in the early stages of consolidation, the clay will undergo a recompression in the horizontal direction for an effective stress increase of $\Delta u - \Delta \sigma_3$; the strain from this recompression will be small but as consolidation continues the effective stress increases beyond the original value of p'_3 and the strain effects will become larger until consolidation ceases.

Settlement analysis

The method of settlement analysis most commonly in use is that proposed by Skempton and Bjerrum (1957). In this procedure the lateral expansion and compression effects are ignored, since the authors maintain that such a simplification cannot introduce a maximum error of more than 20% and when they compared the actual settlements of several structures with predicted values using their method the greatest difference was in fact only 15%.

Ignoring secondary consolidation, the total settlement of a foundation is given by the expression:

$$\rho = \rho_i + \rho_c$$

where

ρ_i = immediate settlement

ρ_c = consolidation settlement.

In the consolidation test:

$$\rho_{\text{oed}} = m_v \Delta \sigma_1 h \quad (1)$$

where h = sample thickness.

Since there is no lateral strain in the consolidation, $\Delta \sigma_1 = \Delta u$. Hence:

$$\rho_{\text{oed}} = m_v \Delta u h$$

or

$$\rho_{\text{coed}} = \int_0^H m_v \Delta u dH \quad (2)$$

where H = thickness of consolidating layer.

In a saturated soil $\Delta u = \Delta \sigma_3 + A(\Delta \sigma_1 - \Delta \sigma_3)$. This may be expressed as:

$$\Delta u = \Delta \sigma_1 \left[A + \frac{\Delta \sigma_3}{\Delta \sigma_1} (1 - A) \right]$$

and, substituting for Δu in Equation (2) we obtain a truer estimation of the consolidation settlement, ρ_c :

$$\rho_c = \int_0^H m_v \Delta \sigma_1 \left[A + \frac{\Delta \sigma_3}{\Delta \sigma_1} (1 - A) \right] dH \quad (3)$$

Equation (3) can be expressed in terms of Equation (2), by introducing the correction factor μ :

$$\begin{aligned} \rho_c &= \mu \rho = \rho_{\text{coed}} \\ &= \mu \int_0^H m_v \Delta \sigma_1 dH \end{aligned}$$

where

$$\mu = \frac{\int_0^H m_v \Delta \sigma_1 \left[A + \frac{\Delta \sigma_3}{\Delta \sigma_1} (1 - A) \right] dH}{\int_0^H m_v \Delta \sigma_1 dH}$$

If m_v and A are assumed constant with depth the equation for μ reduces to:

$$\mu = A + (1 - A)\alpha \quad (4)$$

where

$$\alpha = \frac{\int_0^H \Delta \sigma_3 dH}{\int_0^H \Delta \sigma_1 dH}$$

Table 11.4 Values of α .

H/B	α	
	Circular footing	Strip footing
0	1.00	1.00
0.25	0.67	0.74
0.50	0.50	0.53
1.0	0.38	0.37
2.0	0.30	0.26
4.0	0.28	0.20
10.0	0.26	0.14
∞	0.25	0

Poisson's ratio for a saturated soil is generally taken as 0.5 at the stage when the load is applied so α is a geometrical parameter which can be determined. Various values for α that were obtained by Skempton and Bjerrum are given in Table 11.4.

The value of the pore pressure coefficient A can now be substituted in Equation (4) and a value for μ obtained, typical results being:

- Soft sensitive clays . . . possibly greater than 1.0
- Normally consolidated clays . . . generally less than 1.0
- Average overconsolidated clays . . . approximately 0.5
- Heavily overconsolidated clays . . . perhaps as little as 0.25

Example 11.6: Total settlement

A sample of the clay of Example 11.4 was subjected to a consolidated undrained triaxial test with the results shown in Fig. 11.11b. The sample was taken from a layer 20m thick and has a saturated unit weight of 18.5kN/m³.

It is proposed to construct a reinforced concrete foundation, length 30m and width 10m, on the top of the layer. The uniform bearing pressure will be 200kPa. Determine

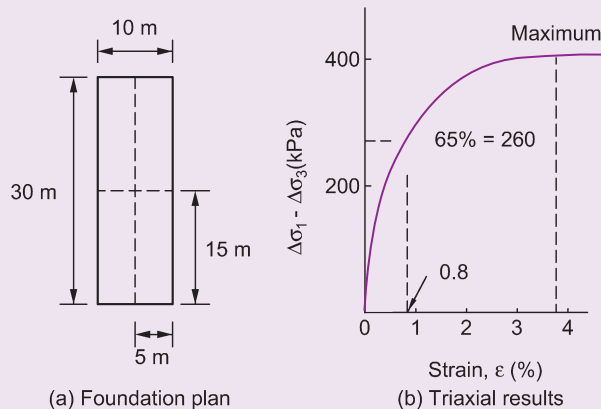


Fig. 11.11 Example 11.6.

the total settlement of the foundation under its centre if the groundwater level occurs at a depth of 5 m below the top of the layer.

Solution

The vertical pressure increment at the centre of the layer can be obtained by splitting the plan area into four rectangles (Fig. 11.11a) and using Fig. 3.10:

$$\Delta\sigma_1 = 110 \text{ kPa}$$

In order to obtain the E value for the soil, $\Delta\sigma_3$ should now be evaluated so that the deviator stress ($\Delta\sigma_1 - \Delta\sigma_3$) can be obtained.

Alternatively the approximate method can be used:

65% of maximum deviator stress = $0.65 \times 400 = 260 \text{ kPa}$

Strain at this value = 0.8% (from Fig. 11.11b)

Hence:

$$E = \frac{260 \times 100}{0.8} = 32\,500 \text{ kPa} = 32.5 \text{ MPa}$$

Immediate settlement

Using the rectangles of Fig. 11.11a and Fig. 11.2:

$$\frac{L}{B} = \frac{15}{5} = 3.0 \quad \frac{H}{B} = \frac{20}{5} = 4.0$$

Hence:

$$I_p = 0.48 \times 4.0 = 1.92$$

$$\begin{aligned} \rho_i &= \frac{pB(1-\nu^2)I_p}{E} \\ &= \frac{200}{32\,500} \times 5 \times 0.75 \times 1.92 \times 0.8 \quad (0.8 = \text{rigidity factor}) \\ &= 0.036 \text{ m} = 36 \text{ mm} \end{aligned}$$

Consolidation settlement

$$\begin{aligned} \text{Initial effective overburden pressure} &= 18.5 \times 10 - 9.81 \times 5 \\ &= 136 \text{ kPa} \end{aligned}$$

Hence the range of pressure involved is from 136 to 246 kPa.

Using the e-p curve of Fig. 11.8a:

$$e_1 = 0.6800; \quad e_2 = 0.666$$

$$a = \frac{de}{dp} = \frac{0.680 - 0.666}{110} = \frac{0.014}{110} = 0.000127 \text{ m}^2/\text{kN}$$

$$m_v = \frac{a}{1+e_1} = \frac{0.000127}{1.680} = 7.6 \times 10^{-5} \text{ m}^2/\text{kN}$$

$$\rho_c = m_v dp H = 7.6 \times 110 \times 20 \times 10^{-5} = 0.167 \text{ m} = 167 \text{ mm}$$

$$\text{Total settlement} = 36 + 167 = 203 \text{ mm}$$

Some reduction could possibly be applied to the value of ρ_c if the value of μ was known.

Alternative method for determining ρ_c

In one-dimensional consolidation the volumetric strain must be equal to the axial strain, i.e.

$$\frac{dH}{H} = \frac{\rho_c}{H} = \frac{de}{1+e_1}$$

hence:

$$\rho_c = \frac{de}{1+e_1} H$$

In the example:

$$\begin{aligned} \rho_c &= \frac{0.680 - 0.666}{1.680} \times 20 \\ &= 0.008834 \times 20 = 0.167 \text{ m} \\ &= 167 \text{ mm} \end{aligned}$$

Example 11.7: Total settlement using SPT results

The plan of a proposed raft foundation is shown in Fig. 11.12a. The uniform bearing pressure from the foundation will be 350 kPa and a site investigation has shown that the upper 7.62 m of the subsoil is a saturated coarse sand of unit weight 19.2 kN/m³ with groundwater level occurring at a depth of 3.05 m below the top of the sand. The result from a standard penetration test taken at a depth of 4.57 m below the top of the sand gave $N = 20$. Below the sand there is a 30.5 m thick layer of clay ($A = 0.75$, $E = 16.1$ MPa, $E_{\text{swelling}} = 64.4$ MPa). The clay rests on hard sandstone (Fig. 11.12b).

Determine the total settlement under the centre of the foundation.

Solution

Using the De Beer and Martens' approach:

Vertical pressure increments

Gross foundation pressure = 350 kPa

Relief due to excavation of sand = $1.52 \times 19.2 = 29$ kPa

Net foundation pressure increase, $\Delta p = 350 - 29 = 321$ kPa

The foundation is split into four rectangles, as shown in Fig. 11.12a, and Fig. 3.10 is then used to determine values for I_r .

Depth below foundation (m)	B/z	L/z	I_r	$4I_r$	$\Delta\sigma_z$ (kPa)
3.05	3.0	9.0	0.247	0.988	317
9.15	1.0	3.0	0.203	0.812	261
15.25	0.6	1.8	0.152	0.608	195
21.35	0.43	1.29	0.113	0.452	145
27.45	0.33	1.00	0.086	0.344	110
33.55	0.27	0.82	0.067	0.268	86

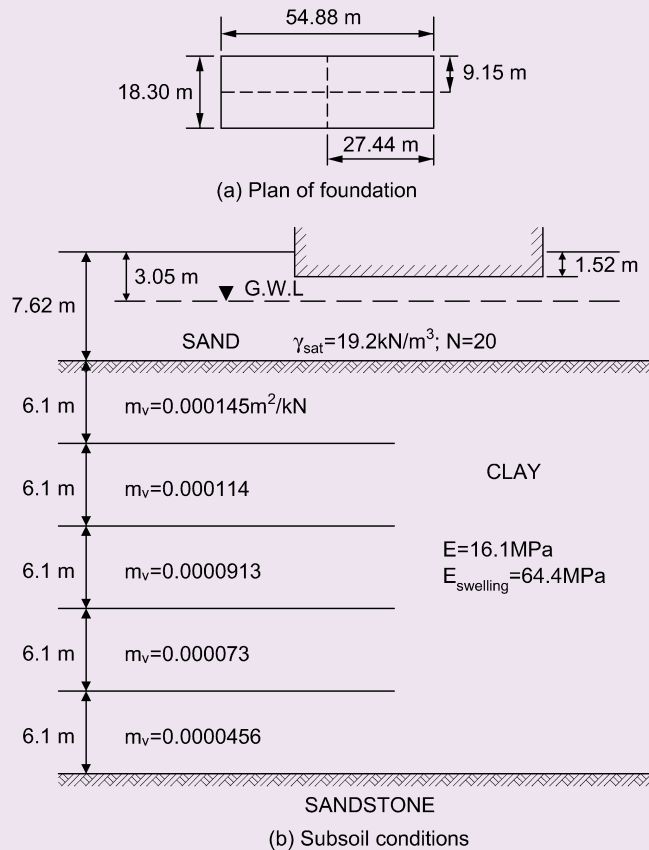


Fig. 11.12 Example 11.7.

Immediate settlement

Sand: test value for $N = 20$:

$$p'_o = 4.57 \times 19.2 - 1.52 \times 9.81 = 73 \text{ kPa}$$

$$C_r = 400 \times 20 = 8000 \text{ kPa}$$

$$C_s = \frac{1.5 \times 8000}{73} = 165$$

$$\rho_i = \frac{6.1}{165} \ln \frac{73 + 317}{73} = 0.062 = 62 \text{ mm}$$

(As the SPT was carried out on submerged soil there is no need to increase this value to allow for groundwater effects.)

Hence ρ_i in the sand = 62 mm.

Clay: in Fig. 11.2, $H_1 = 6.1$ m and $H_2 = 36.6$ m.

$$\text{For } H_2: \frac{L}{B} = \frac{27.44}{9.15} = 3.0; \quad \frac{H}{B} = \frac{36.6}{9.15} = 4.0$$

Hence $I_p = 0.475$.

$$\text{For } H_1: \frac{L}{B} = 3.0; \quad \frac{H}{B} = \frac{6.1}{9.15} = 0.67$$

Hence $I_p = 0.18$.

Settlement under centre of foundation (note as heave effects will be allowed for, use gross contact pressure. If heave is not allowed for net foundation pressure should be used).

$$\begin{aligned} \rho_i &= \frac{pB}{E}(1-\nu^2)4I_p \times \text{Rigidity factor} \\ &= \frac{350}{16100} \times 9.15 \times 0.75 \times 4(0.475 - 0.18) \times 0.8 \\ &= 0.141 \text{ m} = 141 \text{ mm} \end{aligned}$$

Heave effects: relief of pressure due to sand excavation = 29 kPa

$$\begin{aligned} \Rightarrow \text{Heave} &= \frac{29}{64\,400} \times 9.15 \times 0.75 \times 4(0.475 - 0.18) \times 0.8 \\ &= 0.0029 \text{ m} = 3 \text{ mm} \end{aligned}$$

Hence ρ_i in the clay = 138 mm.

As can be seen from this example the effects of heave are usually only significant when a great depth of material is excavated.

Consolidation settlement

The clay layer has been divided into five layers of thickness, H , equal to 6.1 m.

m_v	$\Delta\sigma_z$	$m_v\Delta\sigma_z H$
0.000145	261	0.231
0.000114	195	0.136
0.0000413	145	0.081
0.000073	110	0.049
0.0000456	86	0.024
		0.521 m = 521 mm

This value of settlement can be reduced by the factor

$$\mu = A + (1 - A)\alpha$$

An approximate value for α can be obtained from Table 11.4.

Hence:

$$\alpha = 0.26$$

$$\mu = 0.75 + 0.25 \times 0.26 = 0.82$$

$$\rho_c = 521 \times 0.82 = 448 \text{ mm}$$

$$\text{Total settlement} = 62 + 138 + 448 = 648 \text{ mm}$$

11.6 Eurocode 7 serviceability limit state

As mentioned in Chapter 5, the serviceability limit state (SLS) should be checked in addition to the ultimate limit state (ULS) during a geotechnical design. This is particularly the case where the SLS may be more likely to be exceeded than the ULS. This can be the case with the settlement of shallow foundations and indeed EN1197-1:2004 states that if the ratio of the undrained bearing capacity to the applied serviceability loading is less than 3 (i.e. the *undrained* over design factor <3), calculations of settlement should be undertaken. If the undrained over design factor is less than 2, the settlement calculations should take account of non-linear stiffness effects in the ground.

The provisions for serviceability limit state design with respect to shallow foundations are given in EN 1997-1:2004 Section 6 and these guide the designer to consider foundation displacement (i.e. settlement, or heave) and rotation caused by the applied actions. Annex F proposes the use of the adjusted elasticity method (as described earlier in this chapter; Section 11.2.1) to determine the settlement, s for a foundation of width b resting on a homogeneous soil.

$$s = p \times b \times f / E_m$$

where:

E_m is the design value of the modulus of elasticity

f is a settlement coefficient

p is the bearing pressure, linearly distributed on the base of the foundation

The settlement coefficient f is a function of the size and shape of the foundation, the variation of stiffness with depth, the thickness of the compressible formation, Poisson's ratio, the distribution of the bearing pressure and the point for which the settlement is calculated, and can be derived using any appropriate method such as Skempton's I_p values (Table 11.2). In performing settlement calculations, all partial factors on actions and material properties have value of unity (i.e. $\gamma_F = \gamma_M = 1.0$) as demonstrated (by their exclusion) in Example 11.8.

Example 11.8: Eurocode 7 Serviceability limit state check

If the soil beneath the footing of Example 9.8 is a deep deposit of homogenous clay of undrained shear strength, $c_u = 200$ kPa, perform the serviceability limit state check by checking the total settlement against the allowable settlement of 25mm.

The soil has design modulus of elasticity, $E_m = 60$ MPa and coefficient of volume compressibility, $m_v = 0.04$ m²/MN.

Solution:

$$\text{Net bearing pressure, } p = (G'_{\text{foundation}} + G_k + Q_k) / A$$

$$\begin{aligned} G'_{\text{foundation}} &= \text{weight of footing} - \text{weight of overburden removed} \\ &= (117 + 249.4 - 176.6) - (19 \times 2 \times 32) \\ &= 189.8 - 342 \\ &= -152.2 \text{ kN} \end{aligned}$$

$$\Rightarrow p = (-152.2 + 800 + 400) / 3^2 = 116.4 \text{ kPa}$$

Immediate settlement:

$$s_0 = \frac{p(1-\nu^2)Bf}{E_m}$$

$$s_0 = \frac{116.4 \times (1-0.5^2) \times 3.0 \times 0.82}{60\,000} \quad (\text{using Table 11.2})$$

$$= 3.6 \text{ mm}$$

Consolidation settlement:

Consider the base plan of the footing as 4 rectangles (1.5 m × 1.5 m) and use Fig 3.10 to establish increases in vertical stress at centres of layers beneath the footing. Determine the stress increments to depth of 2.0 B (=6.0 m) over 4 layers, each 1.5 m thick. I_σ is determined from Fadum's chart (Fig. 3.10).

Layer	z (m)	m = n = b/z	I_σ	$4 \times I_\sigma$	Stress increment at centre of layer, $\Delta\sigma_z$ (kPa)
1	0.75	2.0	0.237	0.948	$=0.948 \times 136 = 128.9$
2	2.25	0.67	0.118	0.472	64.2
3	3.75	0.4	0.06	0.24	32.6
4	5.25	0.29	0.035	0.14	19.0

$$\text{Consolidation settlement, } s_1 = \sum m_v h \Delta\sigma_z$$

$$= 0.04 \times 1.5 \times (128.9 + 64.2 + 32.6 + 19.0)$$

$$= 14.7 \text{ mm}$$

$$\Rightarrow \text{Total settlement} = 3.6 + 14.7 = 18.3 \text{ mm}$$

The anticipated total settlement is therefore less than the permitted (25 mm) and thus the serviceability limit state requirement is satisfied.

11.7 Isotropic consolidation

Most soil samples tested in the triaxial apparatus (see Chapter 4) are isotropically consolidated, i.e. consolidated under an all-round hydrostatic pressure, before the commencement of the shearing part of the test. It is appreciated that other forms of consolidation are possible, e.g. K_0 consolidation, but these forms will not be considered here.

The form of the compression curve for an isotropically consolidated clay is shown in Fig. 11.13a. It should be noted that the plot is in the form of a $v-p'$ plot, the vertical axis being $0 : V$ and the horizontal axis $0 : p'$. The $v-\ln p'$ plot is shown in Fig. 11.13b and from this diagram we see that, if we are prepared to ignore the slight differences between the expansion and the recompression curves, the semi-log plot of the isotropic consolidation curve for most clays can be assumed to be made up from a set of straight lines and to have the idealised form of Fig. 11.13c.

Any point on the line ABC represents normal consolidation whereas a point on the line BD, or indeed any point below ABC, represents overconsolidation. As line DB represents the idealised condition that the expansion and recompression curves coincide, it is probably best to give it a new name, and it is therefore usually called the swelling line.

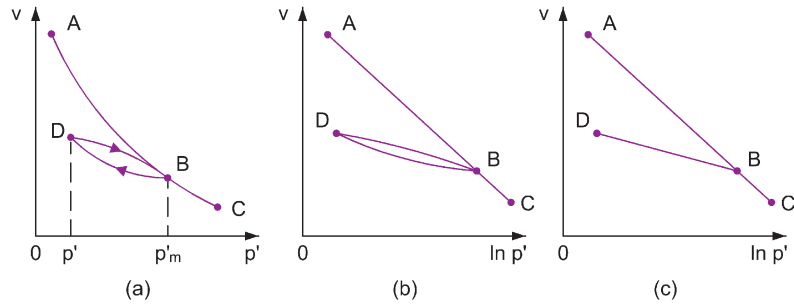


Fig. 11.13 Typical shape of the isotropic normal consolidation of a saturated cohesive soil.

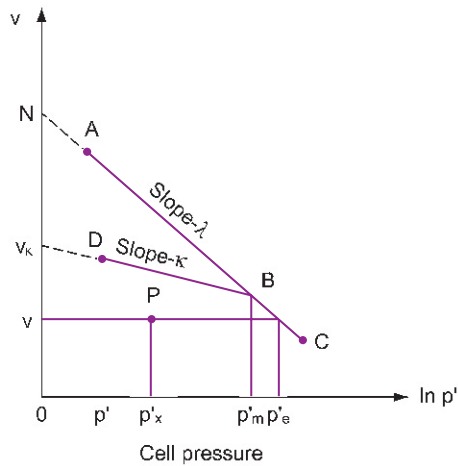


Fig. 11.14 Idealised form of v - $\ln p'$ plot.

If the maximum previous pressure on a swelling line is p'_m and the pressure at D, a point on the swelling line, is p' then we can say that the degree of overconsolidation represented by point D is $R_p = p'_m/p'$. (Note the use of the subscript ${}_p$ in R_p to indicate isotropic consolidation.)

Fig. 11.14 is a close-up of Fig. 11.13c. In the diagram let the slope of AC, the normal isotropic consolidation line, be $-\lambda$, and the slope of the swelling line, DB, be $-\kappa$. N is the specific volume of a soil normally consolidated at $\ln p' = 0$. This gives $\ln p' = 0$. Then the equation of line AC is:

$$v = N - \lambda \ln p'$$

A swelling line, such as BD, can lie anywhere beneath the line AC as its position is dependent upon the value of the maximum pressure on the line, p'_m , which determines the position of B.

Let v_κ = the specific volume of an overconsolidated soil at $p' = \text{unity}$ (i.e. 1.0 kPa). Then the equation of line DB is:

$$v = v_\kappa - \kappa \ln p'$$

λ , N and κ are measured values and must be found from appropriate tests.

Note: The normal consolidation line, AC, is often referred to as the λ line, i.e. the lambda line, and the swelling line BD is often called the κ line, i.e. the kappa line.

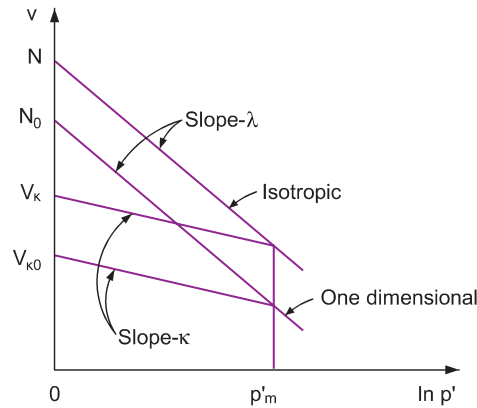


Fig. 11.15 Isotropic and one-dimensional consolidation.

11.7.1 Equivalent isotropic consolidation pressure, p'_e

Consider a particular specific volume, v . Then the value of consolidation pressure which corresponds to v on the normal isotropic consolidation curve is known as the equivalent consolidation pressure and is given the symbol p'_e . In Fig. 11.14 the point P represents a soil with a specific volume, v , and an existing effective consolidation pressure p'_x . The procedure for determining p'_e is illustrated in the diagram. Note that as P is below AB, it represents a state of overconsolidation.

For a normally consolidated clay, subjected to an undrained triaxial test, $p'_e = \sigma'_r$ but with drained tests p'_e will vary.

11.7.2 Comparison between isotropic and one-dimensional consolidation

If a sample of clay is subjected to one-dimensional consolidation in an oedometer and another sample of the clay is subjected to isotropic consolidation in a triaxial cell then the idealised forms of the v - $\ln p'$ plots for the tests will be more or less as illustrated in Fig. 11.15.

The values of the slopes of the two normal consolidation lines are very close and, for all practical purposes, can both be assumed to be equal to $-\lambda$. Similarly the slopes of the swelling lines can both be taken as equal to $-\kappa$.

Note that the values of $\ln p'$ for the one-dimensional test are taken as equal to $\ln \sigma'$, where σ' = the normal stress acting on the oedometer sample.

As the compression index C_c is expressed in terms of common logarithms we see that:

$$\lambda \approx \frac{C_c}{2.3}$$

11.8 Two-dimensional stress paths

As discussed in Chapter 4, the state of stress in a soil sample can be shown graphically by a Mohr circle diagram. In a triaxial compressive test the axial strain of the test specimen increases up to failure and the various states of stress that the sample experiences from the start of the test until failure can obviously be represented by a series of Mohr circles. The same stress states can be represented in a much simpler form by expressing each successive stress state as a point. The line joining these successive points is known as a *stress path*.

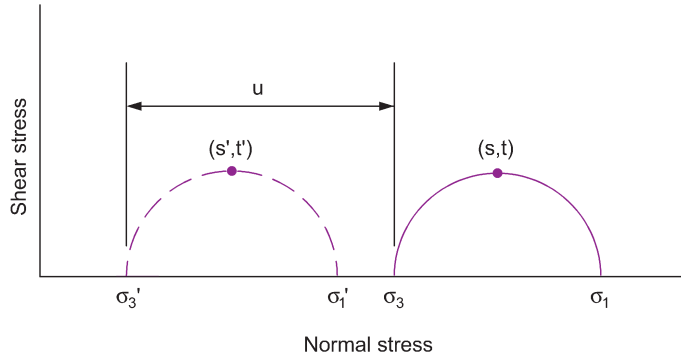


Fig. 11.16 Points of maximum shear stress.

Stress paths can be of many forms and we have already used some: the stress–strain relationships plotted in τ – σ and p – q space in Chapter 4 to show triaxial test results and the plots in e – $\log p$ space used in Fig. 11.9 to illustrate compression curves, etc. In his analysis of foundation settlement problems, Lambe (1964, 1967) used stress paths of maximum shear.

If a Mohr circle diagram of stress is examined (Fig. 11.16) the point of maximum shear has the co-ordinates s and t where:

$$s = \frac{\sigma_1 + \sigma_3}{2} \quad \text{and} \quad t = \frac{\sigma_1 - \sigma_3}{2}$$

σ_1 and σ_3 being the total principal stresses.

In terms of effective stresses, σ_1' and σ_3' , the point of maximum shear has the co-ordinates s' and t' where:

$$s' = \frac{\sigma_1' + \sigma_3'}{2}$$

If a soil is subjected to a range of values of σ_1' and σ_3' the point of maximum shear stress can be obtained for each stress circle; the line joining these points, in the order that they occurred, is termed the stress path or stress vector of maximum shear. Any other point instead of maximum shear can be used to determine a stress path, e.g. the point of maximum obliquity, but Lambe maintains that the stress paths of maximum shear are not only simple to use but also more applicable to consolidation work.

Typical effective stress paths obtained from a series of consolidated undrained triaxial tests on samples of normally consolidated clay together with the effective stress circles at failure are shown in Fig. 11.17.

11.8.1 Ratios of σ_3'/σ_1'

Consider Fig. 11.17. The line tangential to the stress circles is the strength envelope, inclined at ϕ' to the normal stress axis. If each Mohr circle is considered it is seen that the ratio σ_3'/σ_1' is a constant, to which the symbol K_f is applied.

The K_f line

If the points of maximum shear for each effective stress circle p_f' and q_f' are joined together the stress path of maximum shear stress at failure is obtained. This line is called the K_f line and is inclined at angle α' to the normal stress axis; obviously $\tan \alpha' = \sin \phi'$.

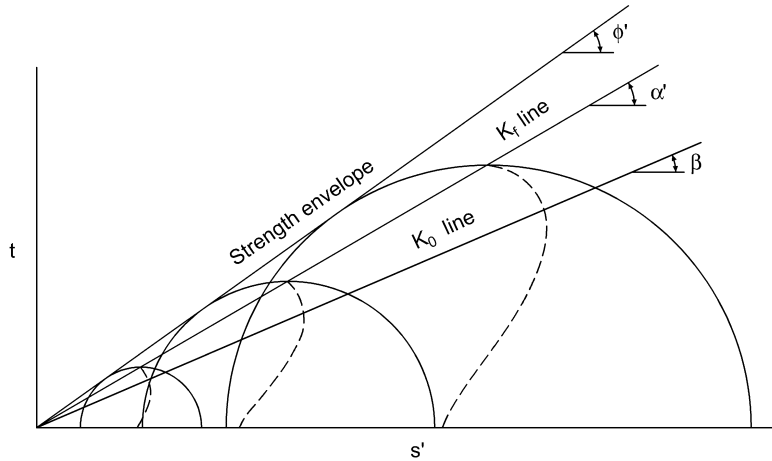


Fig. 11.17 Typical effective stress paths obtained from consolidated undrained triaxial tests on a normally consolidated clay.

The K_0 line

For a soil undergoing one-dimensional consolidation the ratio σ'_3/σ'_1 is again constant and its value is given the symbol K_0 . Plotting the maximum shear stress points of these stress circles enables the stress path for one-dimensional consolidation, the K_0 line, to be determined; this line is inclined at angle β to the normal stress axis.

K_0 is the coefficient of earth pressure at rest. For consolidation work K_0 may be defined for a soil with a history of one-dimensional strain as the ratio:

$$K_0 = \frac{\text{Lateral effective stress}}{\text{Vertical effective stress}}$$

11.8.2 Stress paths in the oedometer

Figure 11.18 shows the stress conditions that arise during and after the application of a pressure increment in the consolidation test. Initially the sample has been consolidated under a previous load and the pore pressure is zero; the Mohr circle is represented by (p, q) the point X, circle I. As soon as the vertical pressure increase, $\Delta\sigma_1$, is applied, the total stresses move from X to Y (circle 1). As the soil is saturated $\Delta u = \Delta\sigma_1$ and the effective stress circle is still represented by point X. As consolidation commences the pore water pressure, Δu , begins to decrease and $\Delta\sigma'_1$ begins to increase. The consolidation is one-dimensional and therefore an increase in the major principal effective stress, $\Delta\sigma'_1$, will induce an increase in the minor principal effective stress $\Delta\sigma'_3 = K_0\Delta\sigma'_1$. Hence the effective stress circles move steadily towards point Z (circles II, III and IV), where Z represents full consolidation.

The total stress circles can be determined from a study of the effective stress circles. For example the difference between $\Delta\sigma_1$ and $\Delta\sigma'_1$ for circle III represents the pore water pressure within the sample at that time: hence $\Delta\sigma_3$ at this stage in the consolidation is $\Delta\sigma'_3$ for circle III plus the value of the pore water pressure. It can be seen therefore that Δu decreases with consolidation and the size of the Mohr circle for total stress increases until the point Z is reached (circles 2, 3 and 4). Obviously circles 4 and IV are coincident.

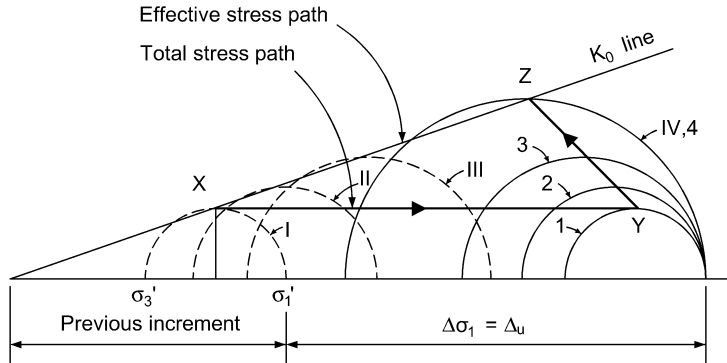


Fig. 11.18 Stress paths in the consolidation test.

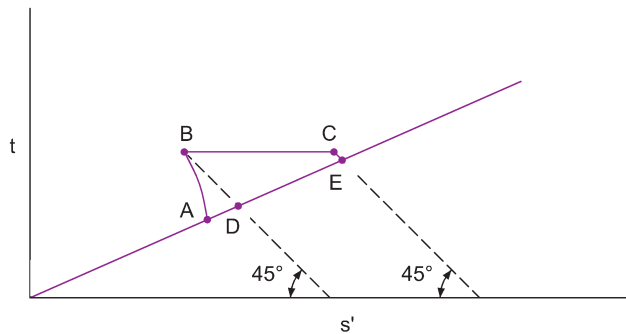


Fig. 11.19 Effective stress path for the general consolidation of a normally consolidated clay.

11.8.3 Stress path for general consolidation

The effective stress plot of Fig. 11.19 represents a typical case of general consolidation. The soil is normally consolidated and point A represents the initial K_0 consolidation; AB is the effective stress path on the application of the foundation load and BC is the effective stress path during consolidation.

Skempton and Bjerrum's assumption that lateral strain effects during consolidation can be ignored presupposes that the strain due to the stress path BC is the same as that produced by the stress path DE. The fact that the method proposed by Skempton and Bjerrum gives reasonable results indicates that the effective stress path during the consolidation of soil in a typical foundation problem is indeed fairly close to the effective stress path DE of Fig. 11.19. There are occasions when this will not be so, however, and the stress path method of analysis can give a more reasonable prediction of settlement values (see Lambe, 1964, 1967). The calculation of settlement in a soft soil layer under an embankment by this procedure has been discussed by Smith (1968a), and the method is also applicable to spoil heaps.

Example 11.9: Effective stress paths

A layer of soft, normally consolidated clay is 9.25 m thick and has an existing effective overburden pressure at its centre of 85 kPa.

It is proposed to construct a flexible foundation on the surface of the clay, and the increases in stresses at the centre of the clay, beneath the centre of the foundation, are estimated to be $\Delta\sigma_1 = 28.8$ kPa and $\Delta\sigma_3 = 19.2$ kPa.

Consolidated undrained triaxial tests carried out on representative undisturbed samples of the clay gave the following results:

Cell pressure = 35 kPa

Strain (%)	Deviator stress (kPa)	Pore water pressure (kPa)
0	0	0
1	10.4	0.4
2	20.7	4.8
3	29.0	9.7
4	33.2	13.2
5	35.8	16.6
6	37.3	17.9
6.8	37.8	19.3 (failure)

Cell pressure = 70 kPa

Strain (%)	Deviator stress (kPa)	Pore water pressure (kPa)
0	0	0
1	20.7	4.1
2	42.7	12.8
3	54.4	22.1
4	63.4	30.4
5	66.1	34.8
6	71.7	37.9
7	75.8	40.7 (failure)

By considering a point at the centre of the clay and below the centre of the foundation, draw the effective stress paths for undrained shear obtained from the tests and indicate the effective stress paths for the immediate and consolidation settlements that the foundation will experience.

Assume that $K_0 = 1 - \sin \phi$ and determine an approximate value for the immediate settlement of the foundation.

Solution:

The first step is to plot out the two effective stress paths. The calculations are best set out in tabular form:

Cell pressure = 35 kPa

Strain	$\sigma_1 - \sigma_3$	u	$t = \frac{\sigma_1 - \sigma_3}{2}$	$s' = \frac{\sigma'_1 + \sigma'_3}{2}$
0	0	0	0	35
1	10.4	0.4	5.2	39.8
2	20.7	4.8	10.3	40.5
3	29.0	9.7	14.5	39.8
4	33.2	13.2	16.6	38.4
5	35.8	16.6	17.9	36.3
6	37.3	17.9	18.6	35.7
6.8	37.8	19.3	18.9	34.6

Cell pressure = 70 kPa

0	0	0	0	70
1	20.7	4.1	10.3	76.2
2	42.7	12.8	21.3	78.5
3	54.4	22.1	27.2	75.1
4	63.4	30.4	31.7	71.3
5	66.1	34.8	33.0	68.2
6	71.7	37.9	35.8	67.9
7	75.8	40.7	37.9	67.2

The stress paths are shown in Fig. 11.20. From the K_f line $\tan \alpha (= \sin \phi) = \tan 28.5^\circ = 0.543$.

$$\Rightarrow K_0 = 1 - 0.543 = 0.457$$

Effective stresses at centre of layer before application of foundation load (initial)

$$\sigma'_{11} = 85 \text{ kPa}$$

Clay is normally consolidated, therefore:

$$\sigma'_{31} = 0.457 \times 85 = 38.8 \text{ kPa}$$

$$\Rightarrow s' = \frac{85 + 38.8}{2} = 61.9; \quad t = \frac{85 - 38.8}{2} = 23.1$$

The coordinates s' and t are plotted on Fig. 11.20 to give the point A, the initial state of stress in the soil.

Effective stress at centre of clay after application and consolidation of foundation load (final)

$$\sigma'_{1F} = \sigma'_{11} + \Delta\sigma_1 = 85 + 28.8 = 113.8 \text{ kPa}$$

$$\sigma'_{3F} = \sigma'_{31} + \Delta\sigma_3 = 38.8 + 19.2 = 58.0 \text{ kPa}$$

$$\Rightarrow s' = \frac{113.8 + 58}{2} = 85.9; \quad t = \frac{113.8 - 58}{2} = 27.9$$

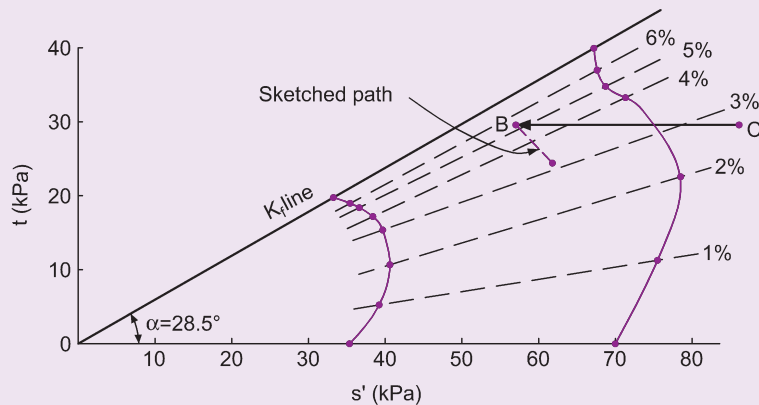


Fig. 11.20 Example 11.9.

The coordinates s' and t are plotted in Fig. 11.20 to give the point C, the state of the effective stresses in the soil after consolidation. As illustrated in Fig. 11.19 the stress path from A to B represents the effect of the immediate settlement, whereas the stress path from B to C represents the effects of the consolidation settlement. The problem is to establish the point B, the point that represents the effective stress state in the soil immediately after the application of the foundation load.

During consolidation, at all times,

$$t = \frac{1}{2}(\sigma_1 - \sigma_3) = \frac{1}{2}(\sigma'_1 - \sigma'_3).$$

Hence, no matter how the individual values of effective stress vary during consolidation, the value of t remains constant. The line BC must be parallel to the horizontal axis. Hence the point B must lie somewhere along the horizontal line through C.

From A to B the effective undrained stress path is unknown but it is possible to sketch in an approximate, but sufficiently accurate path, by comparing the two test stress paths on either side of it. This has been done in the figure. The immediate settlement can now be found. On the diagram the strain contours (lines joining equal strain values on the two test paths) are drawn. It is seen that the point A lies a little above the 3 per cent strain contour (3.2%). Point B lies on the 5% strain contour. Hence the strain suffered with immediate settlement = $5 - 3.2 = 1.8\%$.

$$\Rightarrow \rho_i = \frac{1.8}{100} \times 9.25 = 0.167 \text{ m}$$

Exercises

Exercise 11.1

Using the test results from Example 4.9, determine an approximate value for E of the soil and calculate the average settlement of a foundation, $5 \text{ m} \times 1 \text{ m}$, founded on a thick layer of the same soil with a uniform pressure of 600 kPa .

Answer 66 mm

Exercise 11.2

A rectangular, flexible foundation has dimensions $L = 4\text{ m}$ and $B = 2\text{ m}$ and is loaded with a uniform pressure of 400 kPa . The foundation sits on a layer of deep clay, $E = 10\text{ MPa}$. Determine the immediate settlement values at its centre and at the central points of its edges.

Answer At centre = 92 mm
 At centre of long edge = 67 mm
 At centre of short edge = 58 mm

Exercise 11.3

A rectangular foundation, $10 \times 2\text{ m}^2$, is to carry a total uniform pressure of 400 kPa and is to be founded at a depth of 1 m below the surface of a saturated sand of considerable thickness. The bulk unit weight of the sand is 18 kN/m^3 and standard penetration tests carried out below the water table indicate that the deposit has an average N value of 15 .

If the water table occurs at the proposed foundation depth, determine a value for the settlement of the centre of the foundation. (Use De Beer and Martens' method.)

Answer 50 mm

Exercise 11.4

A saturated sample of a normally consolidated clay gave the following results when tested in a consolidation apparatus (each loading increment was applied for 24 hours).

Consolidation pressure (kPa)	Thickness of sample (mm)
0	17.32
53.65	16.84
107.3	16.48
214.6	16.18
429.2	15.85
0	16.51

After the sample had been allowed to expand for 24 hours it was found to have a water content of 30.2% . The particle specific gravity of the soil was 2.65 .

- (i) Plot the void ratio to effective pressure.
- (ii) Plot the void ratio to log effective pressure and hence determine a value for the compression index of the soil.
- (iii) A 6.1 m layer of the soil is subjected to an existing effective over burden pressure at its centre of 107.3 kPa , and a foundation load will increase the pressure at the centre of the layer by 80.5 kPa .

Determine the probable total consolidation settlement of the layer (a) by the coefficient of volume compressibility and (b) by the compression index. Explain why the two methods give slightly different answers.

Answer (a) Settlement by coefficient of volume compressibility = 90 mm
(b) Settlement by compression index = 98 mm

The compression index method is not so accurate as it represents the average of conditions throughout the entire pressure range whereas the coefficient of volume compressibility applies to the actual pressure range considered.

Chapter 12

Rate of Foundation Settlement

The settlement of a foundation in cohesionless soil and the elastic settlement of a foundation in clay can be assumed to occur as soon as the load is applied. The consolidation settlement of a foundation on clay will only take place as water seeps from the soil at a rate depending upon the permeability of the clay.

12.1 Analogy of consolidation settlement

The model shown in Fig. 12.1 helps to give an understanding of the consolidation process. When load is applied to the piston it will be carried initially by the water pressure created, but due to the weep hole there will be a slow bleeding of water from the cylinder accompanied by a progressive settlement of the piston until the spring is compressed to its corresponding load. In the analogy, the spring represents the compressible soil skeleton and the water represents the water in the voids of the soil; the size of the weep hole is analogous to the permeability of the soil.

$$\text{The degree of consolidation, } U_c = \frac{\text{Consolidation attained at time } t}{\text{Total consolidation}}$$

12.2 Distribution of the initial excess pore pressure, u_i

If we consider points below the centre of a foundation it is seen that there are three main forms of possible u_i distribution.

Uniform distribution can occur in thin layers (Fig. 12.2a), so that for all practical purposes u_i is constant and equals $\Delta\sigma_1$ at the centre of the layer.

Triangular distribution is found in a deep layer under a foundation, where u_i varies from a maximum value at the top to a negligible value (taken as zero) at some depth below the foundation (Fig. 12.2b (i)). The depth of this variation depends upon the dimensions of the footing. Figure 12.2b (ii) shows how a triangular distribution may vary from $u_i = 0$ at the top of a layer to $u_i =$ a maximum value at the bottom; this condition can arise with a newly placed layer of soil, the applied pressure being the soil's weight.

Trapezoidal distribution results from the quite common situation of a clay layer located at some depth below the foundation (Fig. 12.2c(i)). In the case of a new embankment carrying a superimposed load, a reversed form of trapezoidal distribution is possible (Fig. 12.2c (ii)).

12.3 Terzaghi's theory of consolidation

Terzaghi's first presented this theory in 1925 and the most practical work on the prediction of settlement rates is based upon the differential equation he evolved. The main assumptions in the theory are as follows.

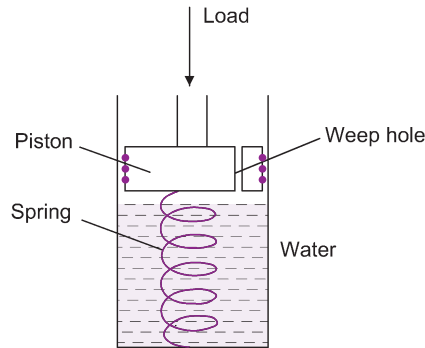


Fig. 12.1 Analogy of consolidation settlement.

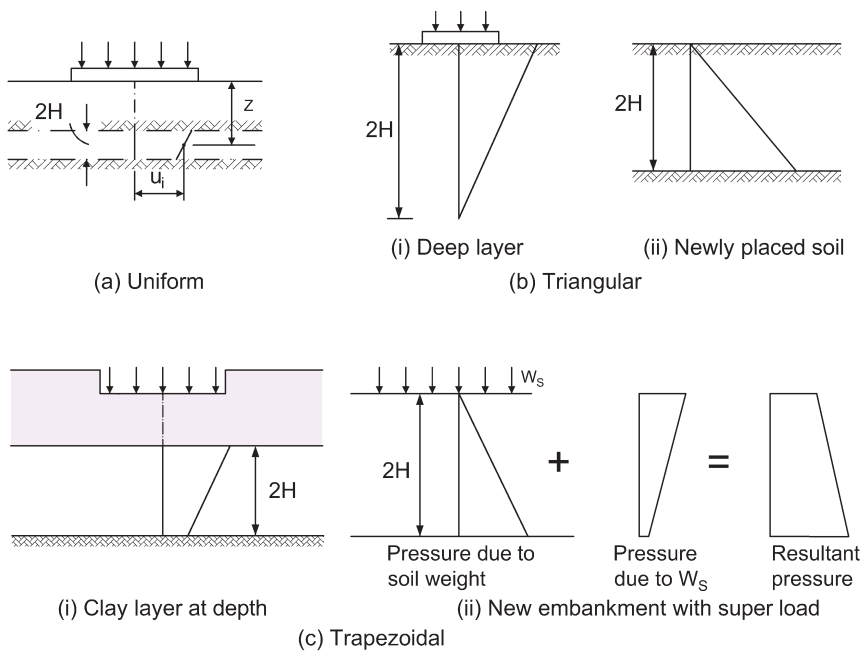


Fig. 12.2 Forms of initial excess pore pressure.

- (i) Soil is saturated and homogeneous.
- (ii) The coefficient of permeability is constant.
- (iii) Darcy's law of saturated flow applies.
- (iv) The resulting compression is one dimensional.
- (v) Water flows in one direction.
- (vi) Volume changes are due solely to changes in void ratio, which are caused by corresponding changes in effective stress.

The expression for flow in a saturated soil has been established in Chapter 2. The rate of volume change in a cube of volume $dx.dy.dz$ is:

$$\left(k_x \frac{\partial^2 h}{\partial x^2} + k_y \frac{\partial^2 h}{\partial y^2} + k_z \frac{\partial^2 h}{\partial z^2} \right) dx.dy.dz$$

For one-dimensional flow (assumption v) there is no component of hydraulic gradient in the x and y directions, and putting $k_z = k$ the expression becomes:

$$\text{Rate of change of volume} = k \frac{\partial^2 h}{\partial z^2} dx.dy.dz$$

The volume changes during consolidation are assumed to be caused by changes in void ratio.

Porosity

$$n = \frac{V_v}{V} = \frac{e}{1+e}$$

hence

$$V_v = dx.dy.dz \frac{e}{1+e}$$

Another expression for the rate of change of volume is therefore:

$$\frac{\partial}{\partial t} \left(dx.dy.dz \frac{e}{1+e} \right)$$

Equating these two expressions:

$$k \frac{\partial^2 h}{\partial z^2} = \frac{1}{1+e} \frac{\partial e}{\partial t}$$

The head, h, causing flow is the excess hydrostatic head caused by the excess pore water pressure, u.

$$h = \frac{u}{\gamma_w}$$

$$\Rightarrow \frac{k}{\gamma_w} \frac{\partial^2 u}{\partial z^2} = \frac{1}{1+e} \frac{\partial e}{\partial t}$$

With one-dimensional consolidation there are no lateral strain effects and the increment of applied pressure is therefore numerically equal (but of opposite sign) to the increment of induced pore pressure. Hence an increment of applied pressure, dp, will cause an excess pore water pressure of du (= -dp). Now:

$$a = -\frac{de}{dp}$$

hence

$$a = \frac{de}{du} \quad (\text{see Section 11.3.3})$$

or

$$de = a du$$

Substituting for de:

$$\frac{k}{\gamma_w} (1+e) \frac{\partial^2 u}{\partial z^2} = a \frac{\partial u}{\partial t}$$

$$\Rightarrow c_v \frac{\partial^2 u}{\partial z^2} = \frac{\partial u}{\partial t}$$

where c_v = the coefficient of consolidation and equals

$$\frac{k}{\gamma_w a} (1 + e) = \frac{k}{\gamma_w m_v}$$

In the foregoing theory, z is measured from the top of the clay and complete drainage is assumed at both the upper and lower surfaces, the thickness of the layer being taken as $2H$. The initial excess pore pressure, u_i , = $-dp$.

The boundary conditions can be expressed mathematically:

- when $z = 0$, $u = 0$
- when $z = 2H$, $u = 0$
- when $t = 0$, $u = u_i$

A solution for

$$c_v \frac{\partial^2 u}{\partial z^2} = \frac{\partial u}{\partial t}$$

that satisfies these conditions can be obtained and gives the value of the excess pore pressure at depth z at time t , u_z :

$$u_z = \sum_{m=0}^{m=\infty} \frac{2u_i}{M} \left(\sin \frac{Mz}{H} \right) e^{-M^2 T}$$

where

u_i = the initial excess pore pressure, uniform over the whole depth

$M = \frac{1}{2} \pi (2m + 1)$ where m is a positive integer varying from 0 to ∞

$T = \frac{c_v t}{H^2}$, known as the time factor.

Owing to the drainage at the top and bottom of the layer the value of u_i will immediately fall to zero at these points. With the mathematical solution it is possible to determine, u at time t for any point within the layer. If these values of pore pressures are plotted, a curve (known as an isochrone) can be drawn through the points (Fig. 12.3b). The maximum excess pore pressure is seen to be at the centre of the layer and, for any point, the applied pressure increment, $\Delta\sigma_1 = u + \Delta\sigma'_1$. After a considerable time u will become equal to zero and $\Delta\sigma_1$ will equal $\Delta\sigma'_1$.

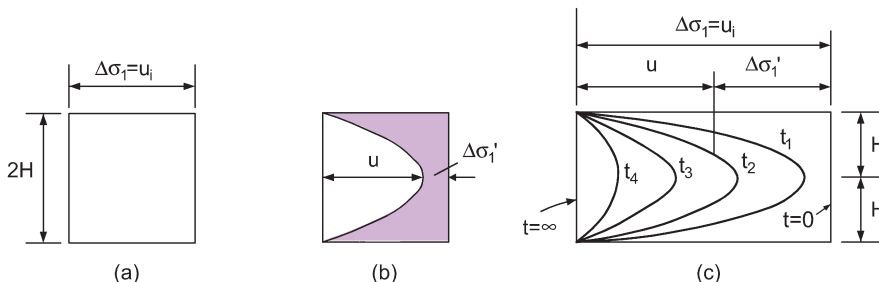


Fig. 12.3 Variation of excess pore pressure with depth and time.

The plot of isochrones for different time intervals is shown in Fig. 12.3c. For a particular point the degree of consolidation, U_z , will be equal to

$$\frac{u_i - u_z}{u_i}$$

The mathematical expression for U_z is:

$$U_z = 1 - \sum_{m=0}^{m=\infty} \frac{2}{M} \left(\sin \frac{Mz}{H} \right) e^{-m^2 T}$$

12.4 Average degree of consolidation

Instead of thinking in terms of U_z , the degree of consolidation of a particular point at depth z , we think in terms of U , the average state of consolidation throughout the whole layer. The amount of consolidation still to be undergone at a certain time is represented by the area enclosed under the particular isochrone, and the total consolidation is represented by the area of the initial excess pore pressure distribution diagram (Fig. 12.3a). The consolidation achieved at this isochrone is therefore the total consolidation less the area under the curve (shown hatched in Fig. 12.3b).

Average degree of consolidation,

$$U = \frac{2Hu_i - \text{Area under isochrone}}{2Hu_i}$$

The mathematical expression for U is:

$$U = 1 - \sum_{m=0}^{m=\infty} \frac{2}{M^2} e^{-M^2 T}$$

A theoretical relationship between U and T can therefore be established and is shown in Fig. 12.4, which also gives the relationship for u_i distributions that are not uniform, $m = u_1/u_2$.

12.5 Drainage path length

A consolidating soil layer is usually enclosed, having at its top either the foundation or another layer of soil and beneath it either another soil layer or rock. If the materials above and below the layer are pervious, the water under pressure in the layer will travel either upwards or downwards (a concrete foundation is taken as being pervious compared with a clay layer). This case is known as two-way drainage and the drainage path length, i.e. the maximum length that a water particle can travel (Fig. 12.5a)

$$= \frac{\text{Thickness of layer}}{2} = H$$

If one of the materials is impermeable, water will only travel in one direction – the one-way drainage case – and the length of the drainage path = thickness of layer = $2H$ (Fig. 12.5b).

The curves of Fig. 12.4 refer to cases of one-way drainage (drainage path length = $2H$). Owing to the approximations involved, the curve for $m = 1$ is often taken for the other cases with the assumption that u_i is the initial excess pore pressure at the centre of the layer. For cases of two-way drainage the curve for $m = 1$ should be used and the drainage path length, for the determination of T , is taken as H .

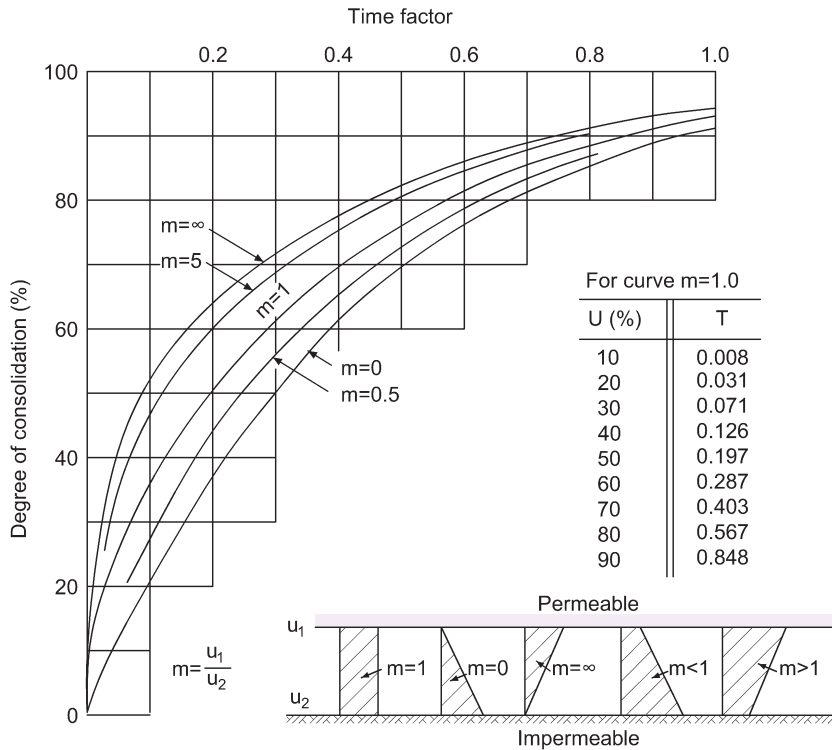


Fig. 12.4 Theoretical consolidation curves.

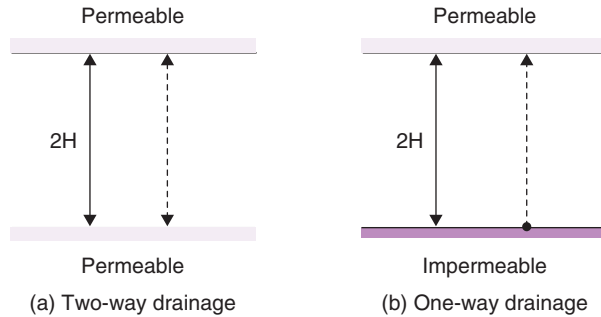


Fig. 12.5 Drainage path length.

12.6 Determination of the coefficient of consolidation, c_v , from the consolidation test

If, for a particular pressure increment applied during a consolidation test, the compression of the test sample is plotted against the square root of time, the result shown in Fig. 12.6 will be obtained.

The curve is seen to consist of three distinct parts: AB, BC and CD.

- AB (initial compression or frictional lag)

A small but rapid compression sometimes occurs at the commencement of the increment and is probably due to the compression of any air present or to the reorientation of some of the larger particles

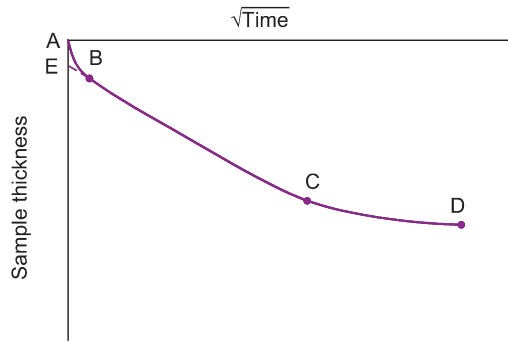


Fig. 12.6 Typical consolidation test results.

in the sample. In the majority of tests this effect is absent and points A and B are coincident. Initial compression is not considered to be due to any loss of water from the soil and should be treated as a zero error for which a correction is made.

- *BC (primary compression)*

All the compression in this part of the curve is taken as being due to the expulsion of water from the sample, although some secondary compression will also occur. When the pore pressure has been reduced to a negligible amount it is assumed that 100% consolidation has been attained.

- *CD (secondary compression)*

The amount by which this effect is evident is a function of the test conditions and can hardly be related to an *in situ* value.

The square root of time 'fitting' method

It will be appreciated that the curve described above is an actual consolidation curve and would not be obtainable from one of the theoretical curves of Fig. 12.4, which can only be used to plot the primary compression range. To evaluate the coefficient of consolidation it is necessary to establish the point C, representing 100% primary consolidation, but it is difficult from a study of the test curve to fix C with accuracy and a procedure in which the test curve is 'fitted' to the theoretical curve becomes necessary.

A method was described by Taylor (1948). If the theoretical curve U against \sqrt{T} is plotted for the case of a uniform initial excess pore pressure distribution, the curve will be like that shown in Fig. 12.7a. Up to values of U equal to about 60%, the curve is a straight line of equation $U = 1.13 \sqrt{T}$, but if this straight line is extended to cut the ordinate $U = 90\%$ the abscissa of the curve is seen to be 1.15 times the abscissa of the straight line. This fact is used to fit the test and theoretical curves.

With the test curve a corrected zero must first be established by projecting the straight line part of the primary compression back to cut the vertical axis at E (Fig. 12.6). A second line, starting through E, is now drawn such that all abscissas on it are 1.15 times the corresponding values on the laboratory curve, and the point at which this second line cuts the laboratory curve is taken to be the point representing 90% primary consolidation (Fig. 12.7b).

To establish c_v , T_{90} is first found from the theoretical curve that fits the drainage conditions (the curve $m = 1$); t_{90} is determined from the test curve:

$$T_{90} = \frac{c_v t_{90}}{H^2}$$

i.e.

$$c_v = \frac{T_{90} H^2}{t_{90}}$$

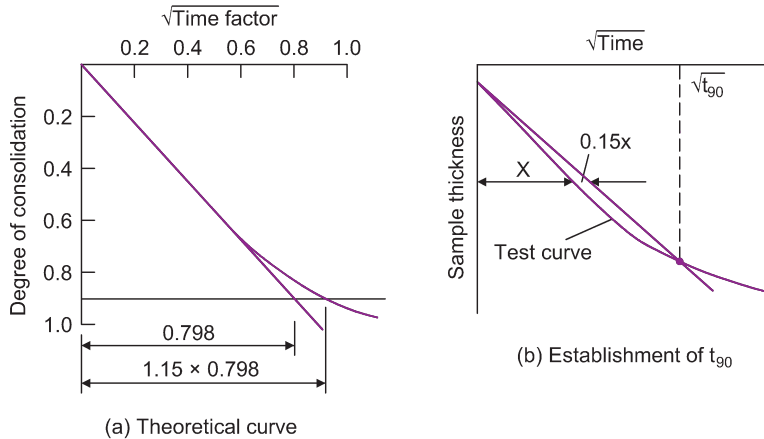


Fig. 12.7 The square root of time 'fitting' method.

It is seen that the point of 90% consolidation rather than the point for 100% consolidation is used to establish c_v . This is simply a matter of suitability. A consolidation test sample is always drained on both surfaces and in the formula H is taken as half the mean thickness of the sample for the pressure range considered. At first glance it would seem that c_v could not possibly be constant, even for a fairly small pressure range, because as the effective stress is increased the void ratio decreases and both k and m_v decrease rapidly. However, the ratio of k/m_v remains sensibly constant over a large range of pressure so it is justifiable to assume that c_v is in fact constant.

One drawback of the consolidation theory is the assumption that both Poisson's ratio and the elastic modulus of the soil remain constant whereas in reality they both vary as consolidation proceeds. Owing to this continuous variation there is a continuous change in the stress distribution within the soil which, in turn, causes a continuous change in the values of excess pore water pressures. Theories that allow for this effect of the change in applied stress with time have been prepared by Biot (1941) and extended by others, but the approximations involved (together with the sophistication of the mathematics) usually force the user back to the original Terzaghi equation.

12.7 Determination of the permeability coefficient from the consolidation test

Having established c_v , k can be obtained from the formula $k = c_v m_v \gamma_w$. It should be noted that since the mean thickness of the sample is used to determine c_v , m_v should be taken as $a/(1 + \bar{e})$ where \bar{e} is the mean void ratio over the appropriate pressure range.

12.8 Determination of the consolidation coefficient from the triaxial test

It is possible to determine the c_v value of a soil from the consolidation part of the consolidated undrained triaxial test. In this case the consolidation is three-dimensional and the value of c_v obtained is greater than would be the case if the soil were tested in the oedometer. Filter paper drains are usually placed around the sample to create radial drainage so that the time for consolidation is reduced. The effect of three-dimensional drainage is allowed for in the calculation for c_v , but the value obtained is not usually dependable as it is related to the relative permeabilities of the soil and the filter paper (Rowe, 1959).

The time taken for consolidation to occur in the triaxial test generally gives a good indication of the necessary rate of strain for the undrained shear part of the test, but it is not advisable to use this time to determine c_v unless there are no filter drains.

The consolidation characteristics of a partially saturated soil are best obtained from the triaxial test, which can give the initial pore water pressures and the volume change under undrained conditions. Having applied the cell pressure and noted these readings, the pore pressures within the sample are allowed to dissipate while further pore pressure measurements are taken; the accuracy of the results obtained is much greater than with the consolidation test as the difficulty of fitting the theoretical and test curves when air is present is largely removed. The dissipation test is described by Bishop and Henkel (1962).

Example 12.1: Consolidation test

Results obtained from a consolidation test on a clay sample for a pressure increment of 100–200 kPa were:

Thickness of sample (mm)	Time (min)
12.200	0
12.141	$\frac{1}{4}$
12.108	1
12.075	$2\frac{1}{4}$
12.046	4
11.985	9
11.922	16
11.865	25
11.827	36
11.809	49
11.800	64

- Determine the coefficient of consolidation of the soil.
- How long would a layer of this clay, 10m thick and drained on its top surface only, take to reach 75% primary consolidation?
- If the void ratios at the beginning and end of the increment were 0.94 and 0.82 respectively, determine the value of the coefficient of permeability.

Solution:

- The first step is to determine t_{90} . The thickness of the sample is plotted against the square root of time (Fig. 12.8) and if necessary the curve is corrected for zero error to establish the point E. The 1.15 line is next drawn from E and where it cuts the test curve (point F) it gives $\sqrt{t_{90}} = 6.54$. Hence $t_{90} = 42.7$ min.

From the curve for $m = 1$ (Fig. 12.4), $T_{90} = 0.85$:

$$T = \frac{c_v t}{H^2}$$

Mean thickness of sample during increment (corrected initial thickness 12.168)

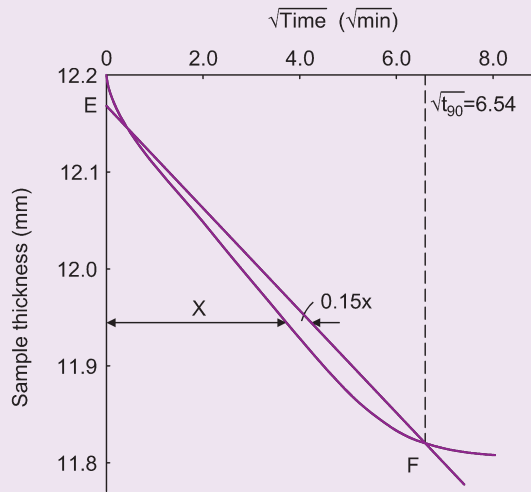


Fig. 12.8 Example 12.1.

$$= \frac{12.168 + 11.800}{2} = 11.984 \text{ mm}$$

$$\Rightarrow H = \frac{11.984}{2} = 5.992 \text{ mm}$$

$$c_v = \frac{0.85 \times 5.992^2}{42.7} = 0.715 \text{ mm}^2/\text{min}$$

(ii) For $U = 75\%$, $T = 0.48$ (from Fig. 12.4).

Drainage path length of layer = 10 m = 10 000 mm

$$\begin{aligned} \text{Time to reach 75\% consolidation} &= \frac{0.48 \times 10\,000^2}{0.715} \times \frac{1}{60} \times \frac{1}{24} \times \frac{1}{365} \\ &= 128 \text{ years} \end{aligned}$$

(iii)

$$a = \frac{de}{dp} = \frac{0.94 - 0.82}{100} = 0.0012$$

$$e = \frac{0.94 + 0.82}{2} = 0.88$$

$$\text{Average } m_v = \frac{a}{1+e} = \frac{0.0012}{1.88} = 0.000\,638 \text{ m}^2/\text{kN}$$

$$k = c_v \gamma_w m_v = \frac{0.715 \times 9.81 \times 0.000\,638}{1000} = 4.48 \times 10^{-6} \text{ mm/min}$$

12.9 The model law of consolidation

If two layers of the same clay with different drainage path lengths H_1 and H_2 are acted upon by the same pressure increase and reach the same degree of consolidation in times t_1 and t_2 respectively, then theoretically their coefficients of consolidation must be equal as must their time factors, T_1 and T_2 :

$$T_1 = \frac{c_v t_1}{H_1^2}; \quad T_2 = \frac{c_v t_2}{H_2^2}$$

Equating:

$$\frac{t_1}{H_1^2} = \frac{t_2}{H_2^2}$$

This gives a simple method for determining the degree of consolidation in a layer if the simplifying assumption is made that the compression recorded in the consolidation test is solely due to primary compression.

Example 12.2: Consolidation in the field

During a pressure increment, a consolidation test sample attained 25% primary consolidation in 5 minutes with a mean thickness of 18mm. How long would it take a 20m thick layer of the same soil to reach the same degree of consolidation if (i) the layer was drained on both surfaces and (ii) it was drained on the top surface only?

Solution:

In the consolidation test the sample is drained top and bottom

$$\Rightarrow H_1 = \frac{18}{2} = 9.0 \text{ mm}$$

(i) With layer drained on both surfaces $H_2 = 10 \text{ m} = 10\,000 \text{ mm}$.

$$t_2 = \frac{t_1}{H_1^2} H_2^2 = \frac{5 \times 10\,000^2}{9^2} \times \frac{1}{60} \times \frac{1}{24} \times \frac{1}{365} = 11.7 \text{ years}$$

(ii) With layer drained on top surface only $H_2 = 20 \text{ m}$.

$$\Rightarrow t_2 = 4 \times 11.7 = 47 \text{ years}$$

Example 12.3: Degree of consolidation

A 19.1 mm thick clay sample, drained top and bottom, reached 30% consolidation in 10 minutes. How long would it take the same sample to reach 50% consolidation?

Solution:

As U is known (30%) we can obtain T , either from Fig. 12.4 or by using the relationship that $U = 1.13\sqrt{T}$ (up to $U = 60\%$).

$$T_{30} = \left(\frac{0.3}{1.13} \right)^2 = 0.07$$

$$T = \frac{c_v t}{H^2}, \text{ so } c_v = \frac{0.07 \times 9.55^2}{10} = 0.6384 \text{ mm}^2/\text{min}$$

$$T_{50} = \left(\frac{0.5}{1.13} \right)^2 = 0.197 \text{ (or obtain from Fig. 12.4)}$$

$$t_{50} = \frac{T_{50} H^2}{c_v} = \frac{0.197 \times 9.55^2}{0.6384} = 28.1 \text{ min}$$

12.10 Consolidation during construction

A sufficiently accurate solution is generally achieved by assuming that the entire foundation load is applied halfway through the construction period. For large constructions, spread over some years, it is sometimes useful to know the amount of consolidation that will have taken place by the end of construction, the problem being that whilst consolidating, the clay is subjected to an increasing load.

Figure 12.9 illustrates the loading diagram during and after construction. While excavation is proceeding, swelling may occur (see Example 11.7). If the coefficient of swelling, c_{vs} , is known it would be fairly straightforward to obtain a solution, first as the pore pressures increase (swelling) and then as they decrease (consolidation), but the assumption is usually made that once the construction weight equals the weight of soil excavated (time t_1 in Fig. 12.9) heave is eliminated and consolidation commences. The treatment of the problem has been discussed by Taylor (1948), who gave a graphical solution, and Lumb (1963), who prepared a theoretical solution for the case of a thin consolidating layer.

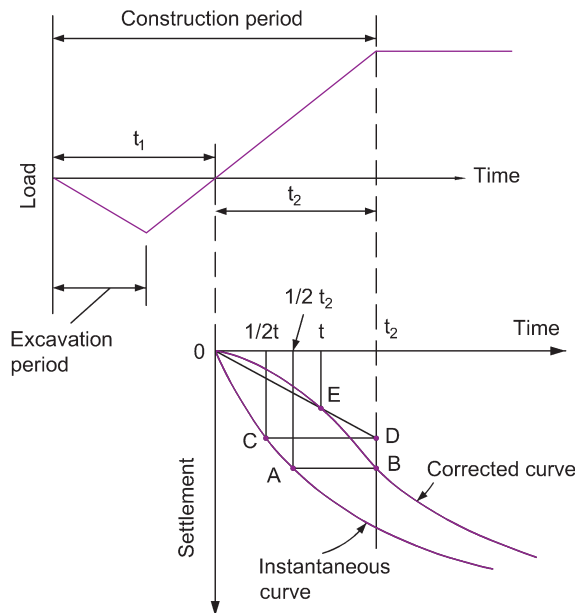


Fig. 12.9 Consolidation during construction.

By plotting the load–time relationship, the time t_1 can be found (Fig. 12.9), the time t_2 being taken as the time in which the net foundation load is applied. The settlement curve, assuming instantaneous application of the load at time t_1 , is now plotted and a correction is made to the curve by assuming that the actual consolidation settlement at the end of time t_2 has the same value as the settlement on the instantaneous curve at time $t_2/2$. Point A, corresponding to $t_2/2$, is obtained on the instantaneous curve, and point B is established on the corrected curve by drawing a horizontal from A to meet the ordinate of time t_2 at point B. To establish other points on the corrected curve the procedure is to:

- (i) select a time, t ;
- (ii) determine the settlement on the instantaneous curve for $t/2$ (point C);
- (iii) draw a horizontal from C to meet the ordinate for t_2 at D, and
- (iv) join OD.

Where OD cuts the ordinate for time, t gives the point E on the corrected curve, the procedure being repeated with different values of t until sufficient points are established for the curve to be drawn. Points beyond B on the corrected curve are displaced horizontally by the distance AB from the corresponding points on the instantaneous curve.

Example 12.4: Settlement versus time relationship

If in Example 11.7 the excavation will take 6 months and the structure will be completed in a further 18 months, determine the settlement to time relationship for the central point of the raft during the first 5 years. The clay has a c_v value of $1.86 \text{ m}^2/\text{year}$ and the sandstone may be considered permeable.

Solution:

The initial excess pore water pressure distribution will be roughly trapezoidal. The first step is to determine the values of excess pore pressures at the top and bottom of the clay layer (use Fig. 3.10).

	Depth below foundation (m)	$\frac{B}{Z}$	$\frac{L}{Z}$	$I\sigma$	$4I\sigma$	$\Delta\sigma_1$ (kPa)
Top of clay	6.1	1.5	4.5	0.229	0.916	295
Bottom of clay	36.6	0.25	0.75	0.06	0.24	77.3

$$\text{Drainage path length} = \frac{36.6 - 6.1}{2} = 15.25 \text{ m}$$

$$m = \frac{295}{77.3} = 3.82; \text{ values of } U \text{ are obtained from Fig. 12.4.}$$

Plotting the values of consolidation against time gives the settlement curve for instantaneous loading, which can be corrected to allow for the construction period (Fig. 12.10, which also shows the immediate settlement to time plot). The summation of these two plots gives the total settlement to time relationship.

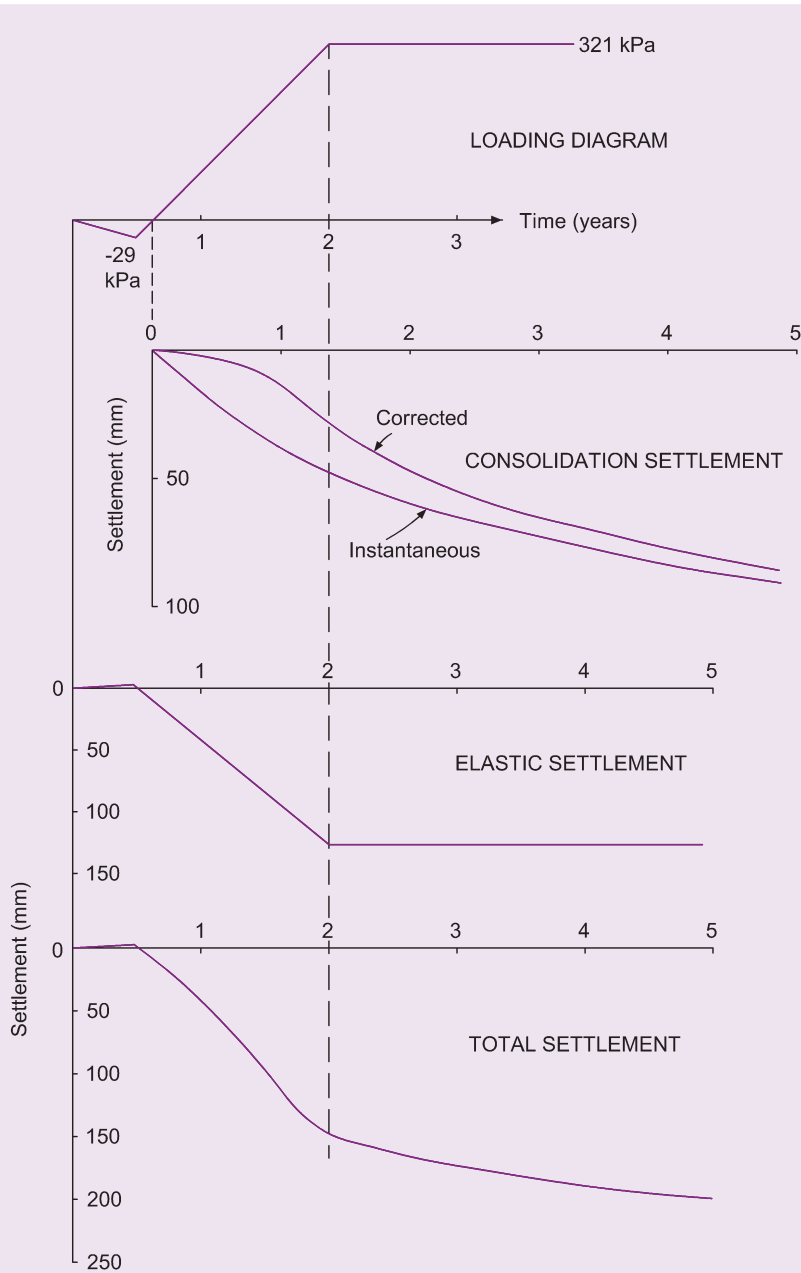


Fig. 12.10 Example 12.4.

t (years)	$T = \frac{c_v t}{H^2}$	U (%)	ρ_c (mm)
1	0.008	10	$= 0.1 \times 448 = 44.8$
2	0.016	15	67.2
3	0.024	18	80.6
4	0.032	22	98.6
5	0.040	24	107.5

12.11 Consolidation by drainage in two and three dimensions

The majority of settlement analyses are based on the frequently incorrect assumption that the flow of water in the soil is one dimensional, partly for ease of calculation and partly because in most cases knowledge of soil compression values in three dimensions is limited. There are occasions when this assumption can lead to significant errors (as in the case of an anisotropic soil with a horizontal permeability so much greater than its vertical value that the time–settlement relationship is considerably altered) and when dealing with a foundation which is relatively small compared with the thickness of the consolidating layer some form of analysis allowing for lateral drainage becomes necessary. For an isotropic, homogeneous soil the differential equation for three-dimensional consolidation is:

$$c_v \left(\frac{\partial^2 u}{\partial x^2} + \frac{\partial^2 u}{\partial y^2} + \frac{\partial^2 u}{\partial z^2} \right) = \frac{\partial u}{\partial t}$$

For two dimensions one of the terms in the bracket is dropped.

12.12 Numerical determination of consolidation rates

When a consolidating layer of clay is subjected to an irregular distribution of initial excess pore water pressure, the theoretical solutions are not usually applicable unless the distribution can be approximated to one of the cases considered. In such circumstances the use of a numerical method is fairly common. A spreadsheet can be used for such a purpose and Example 12.5 illustrates the use of a spreadsheet to find the solution.

A brief revision of the relevant mathematics is set out below.

Maclaurin's series

Assuming that $f(x)$ can be expanded as a power series:

$$y = f(x) = a_0 + a_1x + a_2x^2 + a_3x^3 + \dots + a_nx^n$$

$$\frac{dy}{dx} = f'(x) = a_1 + 2a_2x + 3a_3x^2 + 4a_4x^3 + \dots + na_nx^{n-1}$$

$$\frac{d^2y}{dx^2} = f''(x) = 2a_2 + 2.3a_3x + 3.4a_4x^2 + \dots + n(n-1)a_nx^{n-2}$$

$$\frac{d^3y}{dx^3} = f'''(x) = 2.3a_3 + 2.3.4a_4x + \dots + n(n-1)(n-2)a_nx^{n-3}$$

If we put $x = 0$ in each of the above:

$$a_0 = f(0); \quad a_1 = f'(0); \quad a_2 = \frac{f''(0)}{2!}; \quad a_3 = \frac{f'''(0)}{3!}; \quad \text{etc.}$$

Generally

$$a_n = \frac{f^n(0)}{n!}$$

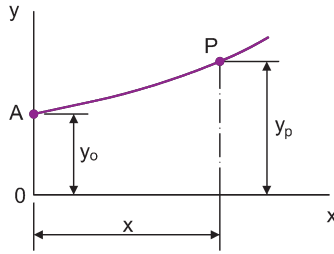


Fig. 12.11 Taylor's series.

Substituting these values:

$$f(x) = f(0) + xf'(0) + \frac{x^2 f''(0)}{2!} + \frac{x^3 f'''(0)}{3!} + \dots + \frac{x^n f^n(0)}{n!}$$

This is the Maclaurin's series for the expansion of $f(x)$.

Taylor's series

If a curve $y = f(x)$ cuts the y-axis above the origin O at a point A (Fig. 12.11) we can interpret Maclaurin's expression as follows:

Let P be a point on the curve with abscissa x.

Let the values of $f(x)$, $f'(x)$, $f''(x)$, etc., at A be:

y_0, y'_0, y''_0 , etc.

Let the value of $f(x)$ at P be y_p . Then

$$f(x) \text{ at } P = y_p = y_0 + xy'_0 + \frac{x^2 y''_0}{2!} + \frac{x^3 y'''_0}{3!} + \dots$$

This is a Taylor's series and gives us the value of the co-ordinate of P in terms of the ordinate gradient, etc., at A and the distance x between A and P.

Gibson and Lumb (1953) illustrated how the numerical solution of consolidation problems can be obtained by using the explicit finite difference equation. The differential equation for one-dimensional consolidation has been established:

$$c_v \frac{\partial^2 u}{\partial z^2} = \frac{\partial u}{\partial t}$$

Consider part of a grid drawn on to a consolidating layer (Fig. 12.12a). The variation of the excess pore pressure, u, with the depth, z, at a certain time, k, is shown in Fig. 12.12b, and the variation of u at the point O during a time increment from k to k + 1 is illustrated by Fig. 12.12c.

In Fig. 12.12b: from Taylor's theorem:

$$u_{2,k} = u_{0,k} - \Delta z u'_{0,k} + \frac{\Delta z^2}{2!} u''_{0,k} - \frac{\Delta z^3}{3!} u'''_{0,k} + \dots$$

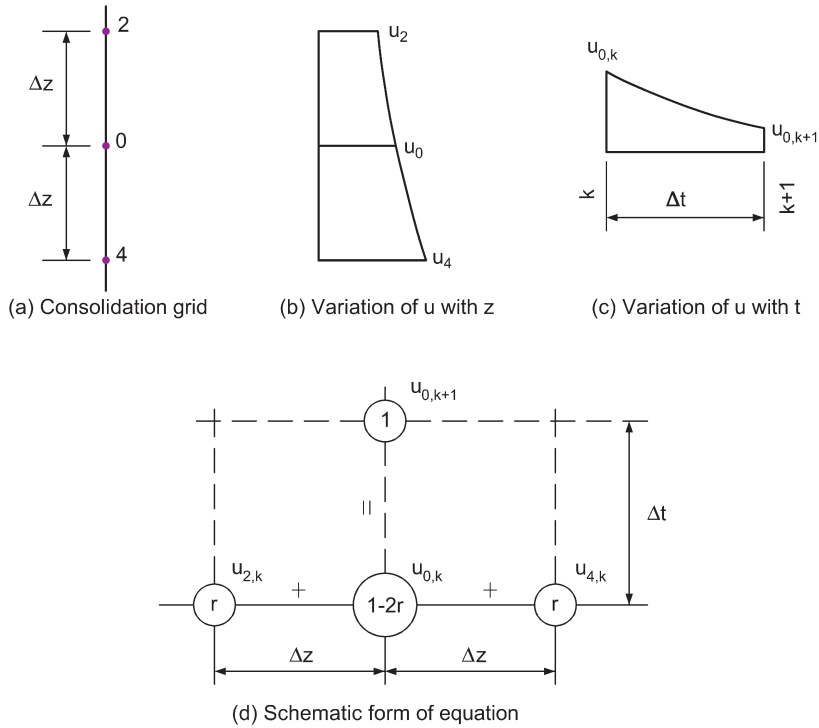


Fig. 12.12 Explicit recurrence formula (general).

$$u_{4,k} = u_{0,k} + \Delta z u'_{0,k} + \frac{\Delta z^2}{2!} u''_{0,k} + \frac{\Delta z^3}{3!} u'''_{0,k} + \dots$$

Adding and ignoring terms greater than second order:

$$u_{2,k} + u_{4,k} = 2u_{0,k} = \Delta z^2 u''_{0,k}$$

$$\Rightarrow \frac{\partial^2 u}{\partial z^2} = u''_{0,k} = \frac{u_{2,k} + u_{4,k} - 2u_{0,k}}{\Delta z^2}$$

In Fig. 12.12c:

$$\frac{\partial u}{\partial t} \text{ is a function } u = f(t)$$

By Taylor's theorem:

$$u_{0,k+1} = u_{0,k} + \Delta t u'_{0,k} + \frac{\Delta t^2}{2!} u''_{0,k} + \dots$$

Ignoring second derivatives and above:

$$\frac{\partial u}{\partial t} = u'_{0,k} = \frac{u_{0,k+1} - u_{0,k}}{\Delta t}$$

$$\Rightarrow c_v \left(\frac{u_{2,k} + u_{4,k} - 2u_{0,k}}{\Delta z^2} \right) = \frac{u_{0,k+1} - u_{0,k}}{\Delta t}$$

$$\Rightarrow u_{0,k+1} = r(u_{2,k} + u_{4,k} - 2u_{0,k}) + u_{0,k}$$

where

$$r = \frac{c_v \Delta t}{\Delta z^2}$$

The schematic form of this expression is shown in Fig. 12.12d. Hence if a series of points in a consolidating layer are established, Δz apart, it is possible by numerical iteration to work out the values of u at any time interval after consolidation has commenced if the initial excess values, u_i , are known.

Impermeable boundary conditions

Figure 12.13a illustrates this case in which conditions at the boundary are represented by

$$\frac{\partial u}{\partial z} = 0$$

Hence between the points 2_k and 4_k :

$$\frac{\partial u}{\partial z} = \frac{u_{2,k} - u_{4,k}}{2\Delta z} = 0$$

i.e.

$$u_{2,k} = u_{4,k}$$

The equation therefore becomes:

$$u_{0,k+1} = 2r(u_{2,k} - u_{0,k}) + u_{0,k}$$

and is shown in schematic form in Fig. 12.13b.

The boundary equation can also be used at the centre of a double drained layer with a symmetrical initial pore pressure distribution, values for only half the layer needing to be evaluated.

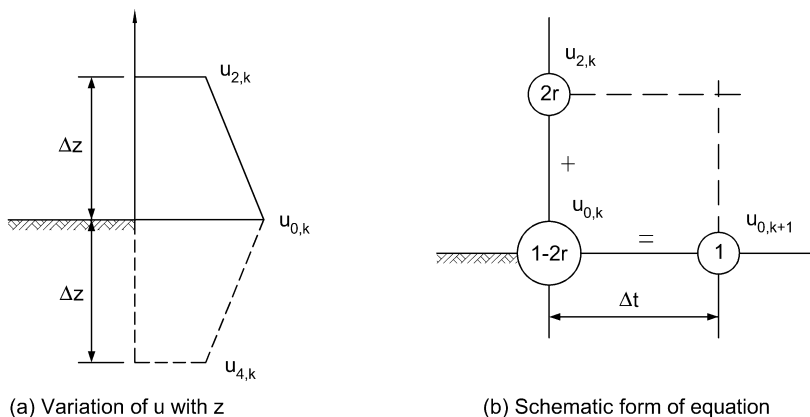


Fig. 12.13 Explicit recurrence formula: treatment for an impermeable boundary.

Errors associated with the explicit equation

Errors fall into two main groups: truncation errors (due to ignoring the higher derivatives) and rounding-off errors (due to working to only a certain number of decimal places). The size of the space increment, Δz , affects both these errors but in different ways: the smaller Δz is, the less the truncation error that arises but the greater the round-off error tends to become.

The value of r is also important. For stability r must not be greater than 0.5 and, for minimum truncation errors, should be $1/6$; the usual practice is to take r as near as possible to 0.5. This restriction means that the time interval must be short and a considerable number of iterations become necessary to obtain the solution for a large time interval. With present software this is not a problem, but if necessary use can be made of either the implicit finite difference equation or the relaxation method.

Example 12.5: Degree of consolidation by finite difference method

A layer of clay 4 m thick is drained on its top surface and has a uniform initial excess pore pressure distribution. The consolidation coefficient of the clay is $0.1 \text{ m}^2/\text{month}$. Using a numerical method, determine the degree of consolidation that the layer will have undergone 24 months after the commencement of consolidation. Check your answer by the theoretical curves of Fig. 12.4.

Solution:

In a numerical solution the grid must first be established: for this example the layer has been split into four layers each of $\Delta z = 1.0 \text{ m}$ (it is important to remember that since Simpson's rule is being applied to determine the degree of consolidation, the layer should be divided into an even number of strips). The initial excess pore pressure values have been taken everywhere throughout the layer as equal to 100 units.

In 24 months:

$$r = \frac{c_v t}{\Delta z^2} = \frac{0.1 \times 24}{1.0} = 2.4$$

For the finite difference equation r must not be greater than 0.5, so use five time increments, i.e. $\Delta t = 4.8$ months and

$$r = \frac{0.1 \times 4.8}{1.0} = 0.48$$

Owing to the instantaneous dissipation at the drained surface the excess pore pressure distribution at time = 0 can be taken as that shown in Fig. 12.14 (the values obtained during the iteration process are also given). The finite difference formula is applied to each point of the grid, except at the drained surface:

$$u_{0,k+1} = r(u_{2,k} + u_{4,k} - 2u_{0,k}) + u_{0,k}$$

For example, with the first time increment the point next to the drained surface has $u = 0.48(0 + 100 - 2 \times 100) + 100 = 52.0$. Note that at the undrained surface the finite difference equation alters.

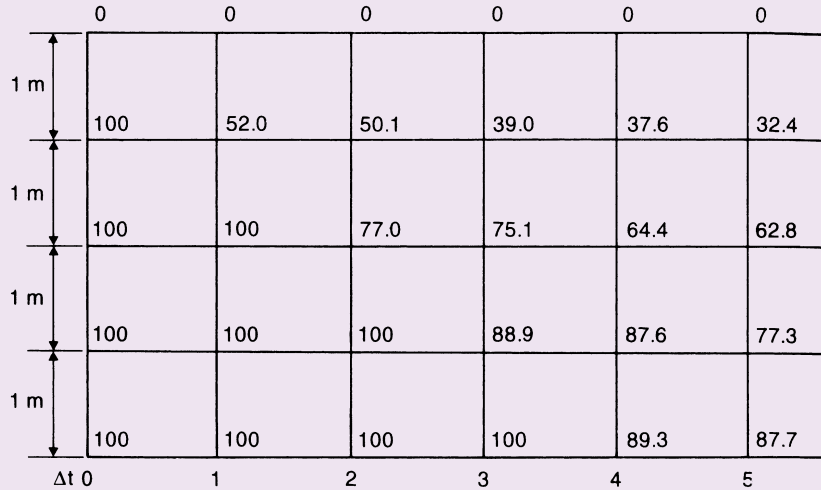


Fig. 12.14 Example 12.5.

Degree of consolidation

Area of initial excess pore pressure distribution diagram = 4 × 100 = 400.

Area under final isochrone is obtained by Simpson's rule:

$$\frac{1.0}{3}(87.7 + 4(32.4 + 77.3) + 2 \times 62.8) = 217$$

hence:

$$U = \frac{400 - 217}{400} = 45.7\%$$

Checking by the theoretical curve:

Total time = 24 months, H = 4 m:

$$T = \frac{c_v t}{H^2} = \frac{0.1 \times 24}{16} = 0.15$$

From Fig. 12.4: U = 45%

12.13 Construction pore pressures in an earth dam

A knowledge of the induced pore pressures occurring during the construction of an earth dam or embankment is necessary so that stability analyses can be carried out and a suitable construction rate determined. Such a problem is best solved by numerical methods. During the construction of an earth dam (or an embankment) the placing of material above that already in position increases the pore water pressure whilst consolidation has the effect of decreasing it: the problem is one of a layer of soil that is consolidating as it is increasing in thickness. Gibson (1958) examined this condition. If it is assumed that the water in the soil will experience vertical drainage only, the finite difference equation becomes:

$$u_{0,k+1} = r(u_{2,k} + u_{4,k} - 2u_{0,k}) + u_{0,k} + \bar{B}\gamma\Delta z$$

where

Δz = the grid spacing, and also the increment of dam thickness placed in time Δt

γ = unit weight of dam material

\bar{B} = pore pressure coefficient

$$r = \frac{c_v \Delta t}{\Delta z^2}$$

In order that Δz is constant throughout the full height of the dam, all construction periods must be approximated to the same linear relationship and then transformed into a series of steps. The formula can only be applied to a layer that has some finite thickness, and as the layer does not exist initially it is necessary to obtain a solution by some other method for the early stages of construction when the dam is insufficiently thick for the formula to be applicable. Smith (1968b) has shown how a relaxation procedure can be used for this initial stage.

Example 12.6: Excess pore pressure distribution by numerical method

At a stage in its construction an earth embankment has attained a height of 9.12 m and has the excess pore water pressure distribution shown in Fig. 12.15a. A proposal has been made that further construction will be at the rate of 1.52 m thickness of material placed in one month, the unit weight of the placed material to be 19.2 kN/m³ and its \bar{B}

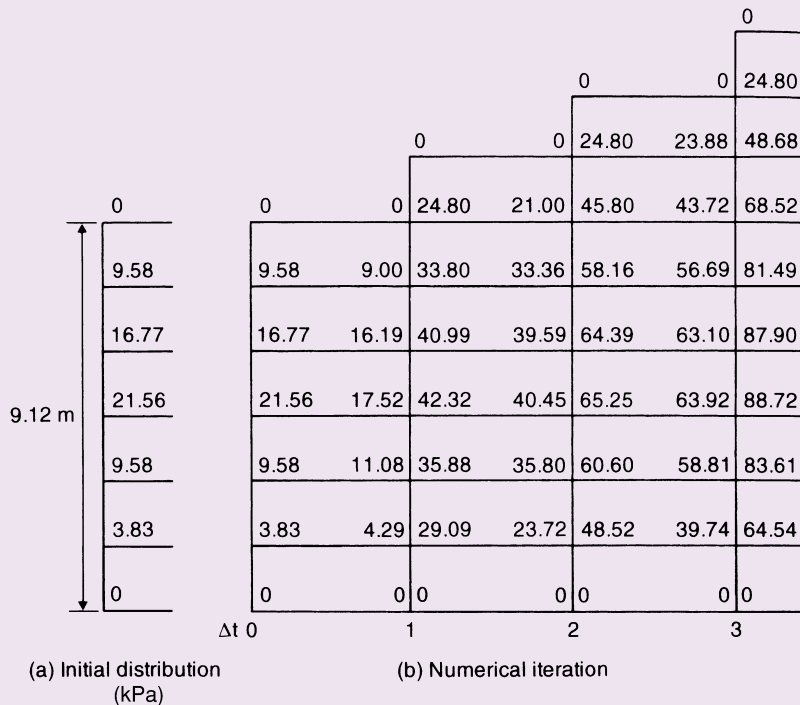


Fig. 12.15 Example 12.6.

value about 0.85. Determine approximate values for the excess pore pressures that will exist within the embankment 3 months after further construction is commenced. c_v for the soil = $0.558 \text{ m}^2/\text{month}$.

Solution:

Check the r value with Δz taken as equal to 1.52m.

For $\Delta z = 1.52 \text{ m}$, $t = 1.0 \text{ month}$:

$$r = \frac{0.558 \times 1}{(1.52)^2} = 0.241$$

This value of r is satisfactory and has been used in the solution (if r had been greater than 0.5 then Δt and Δz would have had to be varied until r was less than 0.5).

A 1.52m deposit of the soil will induce an excess pressure, throughout the whole embankment, of $1.52 \times 19.2 \times \bar{B} = 24.8 \text{ kPa}$. This pressure value must be added to the value at each grid point for each time increment. The pore pressure increase is in fact applied gradually over a month, but for a numerical solution we must assume that it is applied in a series of steps, i.e. 24.8kPa at $t = 1$ month, at $t = 2$ months, and at $t = 3$ months. From $t = 0$ to $t = 1$ no increment is assumed to be added and the initial pore pressures will have dissipated further before they are increased.

The numerical iteration is shown in Fig. 12.15b.

12.14 Numerical solutions for two- and three-dimensional consolidation

12.14.1 Two-dimensional consolidation

The differential equation for two-dimensional consolidation has already been given:

$$c_v \left(\frac{\partial^2 u}{\partial x^2} + \frac{\partial^2 u}{\partial y^2} \right) = \frac{\partial u}{\partial t}$$

Part of a consolidation grid is shown in Fig. 12.16a; from the previous discussion of the finite difference equation we can write:

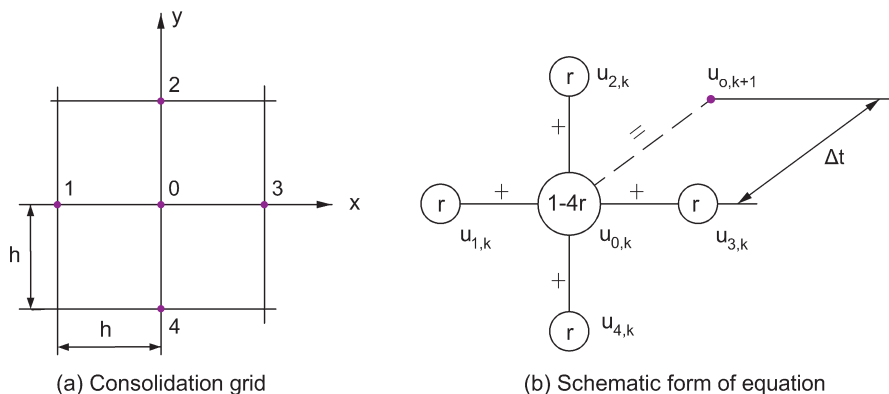


Fig. 12.16 Schematic form of the finite difference equation (two dimensional).

$$\frac{\partial u}{\partial t} = \frac{u_{0,k+1} - u_{0,k}}{\Delta t}$$

$$\frac{\partial^2 u}{\partial y^2} = \frac{c_v}{h^2} (u_{2,k} + u_{4,k} - 2u_{0,k})$$

$$\frac{\partial^2 u}{\partial x^2} = \frac{c_v}{h^2} (u_{1,k} + u_{3,k} - 2u_{0,k})$$

Hence the explicit finite difference equation is:

$$u_{0,k+1} = r(u_{1,k} + u_{2,k} + u_{3,k} + u_{4,k}) + u_{0,k}(1 - 4r)$$

where

$$r = \frac{c_v \Delta t}{h^2}$$

The schematic form of this equation is illustrated in Fig. 12.16b.

Impermeable boundary condition

Impermeable boundaries are treated as for the one-dimensional case.

12.14.2 Three-dimensional consolidation

For instances of radial symmetry the differential equation can be expressed in polar co-ordinates:

$$c_v \left(\frac{\partial^2 u}{\partial R^2} + \frac{1}{R} \frac{\partial u}{\partial R} + \frac{\partial^2 u}{\partial z^2} \right) = \frac{\partial u}{\partial t}$$

then

$$\frac{\partial u}{\partial t} = \frac{u_{0,k+1} - u_{0,k}}{\Delta t}$$

$$\frac{\partial^2 u}{\partial z^2} = \frac{u_{2,k} + u_{4,k} - 2u_{0,k}}{\Delta z^2}$$

$$\frac{\partial^2 u}{\partial R^2} = \frac{u_{1,k} + u_{3,k} - 2u_{0,k}}{\Delta R^2}$$

$$\frac{1}{R} \frac{\partial u}{\partial R} = \frac{1}{R} \left(\frac{u_{3,k} - u_{1,k}}{2\Delta R} \right)$$

If we put $\Delta z = \Delta R = h$ the finite difference equation becomes:

$$u_{0,k+1} = r(u_{2,k} + u_{4,k}) + u_{0,k}(1 - 4r) + ru_{1,k} \left(1 - \frac{h}{2R} \right) + ru_{3,k} \left(1 + \frac{h}{2R} \right)$$

where

$$r = \frac{c_v \Delta t}{h^2}$$

At the origin, where $R = 0$:

$$\frac{1}{R} \frac{\partial u}{\partial R} \rightarrow \frac{\partial^2 u}{\partial R^2}$$

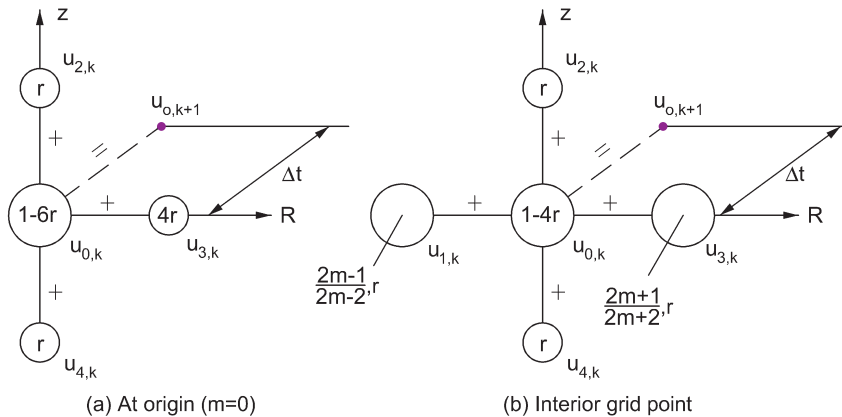


Fig. 12.17 Schematic form of the finite difference equation (three dimensional).

and the equation becomes:

$$u_{0,k+1} = ru_{2,k} + 4ru_{3,k} + ru_{4,k} + u_{0,k}(1 - 6r)$$

Using the convention $R = mh$, the schematic form for the explicit equation is shown in Fig. 12.17a (for a point at the origin) and Fig. 12.17b (for other interior points).

For drainage in the vertical direction the procedure is the same, but for radial drainage the expression for $u_{0,k+1}$ at a boundary point, where $\delta u / \delta R = 0$, is given by:

$$u_{0,k+1} = r(u_{2,k} + u_{4,k}) + 2ru_{1,k} + u_{0,k}(1 - 4r)$$

Value of r

In three-dimensional work the explicit recurrence formula is stable if r is either equal to or less than $1/6$. This is not so severe a restriction as it would at first appear, since with three-dimensional drainage the time required to reach a high degree of consolidation is much less than for one-dimensional drainage. For two-dimensional work r should not exceed 0.5 .

12.14.3 Determination of initial excess pore water pressure values

For one-dimensional consolidation problems, u_i can at any point be taken as equal to the increment of the total major principal stress at that point. For two- and three-dimensional problems u_i must be obtained from the formula:

$$u_i = B[\Delta\sigma_3 + A(\Delta\sigma_1 - \Delta\sigma_3)]$$

As the clay is assumed saturated, $B = 1.0$.

12.15 Sand drains

Sometimes the natural rate of consolidation of a particular soil is too slow, particularly when the layer overlies an impermeable material and, in order that the structure may carry out its intended purpose, the rate of consolidation must be increased. An example of where this type of problem can occur is an

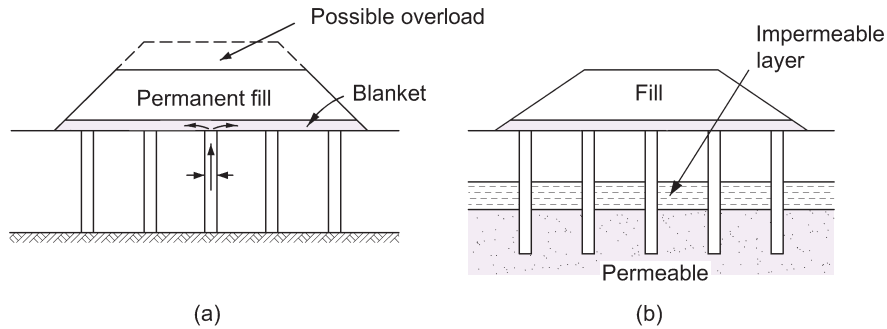


Fig. 12.18 Typical sand drain arrangements.

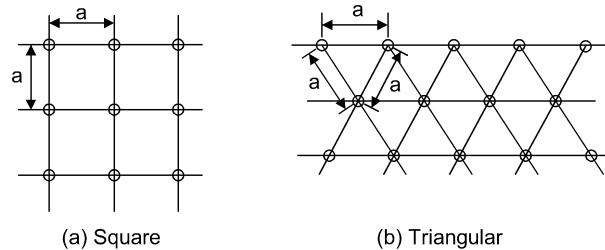


Fig. 12.19 Popular arrangements of sand drains.

embankment designed to carry road traffic. It is essential that most of the settlement has taken place before the pavement is constructed if excessive cracking is to be avoided.

From the Model Law of Consolidation it is known that the rate of consolidation is proportional to the square of the drainage path length. Obviously the consolidation rate is increased if horizontal, as well as vertical, drainage paths are made available to the pore water. This can be achieved by the installation of a system of sand drains, which is essentially a set of vertical boreholes put down through the layer, ideally to a firmer material, and then backfilled with porous material, such as a suitably graded sand.

A typical arrangement is shown in Fig. 12.18a. There are occasions when the sand drains are made to puncture through an impermeable layer when there is a pervious layer beneath it. This creates two-way vertical drainage, as well as lateral, and results in a considerable speeding up of construction.

Diameter of drains: vary from 300 to 600 mm. Diameters less than 300 mm are generally difficult to install unless the surrounding soil is considerably remoulded.

Spacing of drains: depends upon the type of soil in which they are placed. Spacings vary between 1.5 and 4.5 m. Sand drains are effective if the spacing, a , is less than the thickness of the consolidating layer, $2H$.

Arrangement of grid: sand drains are laid out in either square (Fig. 12.19a) or triangular (Fig. 12.19b) patterns. For triangular arrangements the grid forms a series of equilateral triangles the sides of which are equal to the drain spacing.

Depth of sand drains: dictated by subsoil conditions. Sand drains have been installed to depths of up to 45 m.

Type of sand used: should be clean and able to carry away water yet not permit the fine particles of soil to be washed in.

Drainage blanket: after drains are installed a blanket of gravel and sand from 0.33 to 1.0m thick, is spread over the entire area to provide lateral drainage at the base of the fill.

Overfill or surcharge: often used in conjunction with sand drains. It consists of extra fill material placed above the permanent fill to accelerate consolidation. Once piezometer measurements indicate that consolidation has become slow this surcharge is removed.

Strain effects: although there is lateral drainage, lateral strain effects are assumed to be negligible. Hence the consolidation of a soil layer in which sand drains are placed is still obtained from the expression:

$$\rho_c = m_v dp \ 2H$$

Consolidation theory

The three-dimensional consolidation equation is:

$$\frac{\partial u}{\partial t} = c_h \left[\frac{\partial^2 u}{\partial r^2} + \frac{1}{r} \frac{\partial u}{\partial r} \right] + c_v \frac{\partial^2 u}{\partial z^2}$$

where c_h = coefficient of consolidation for horizontal drainage (when it can be measured: otherwise use c_v).

The various co-ordinate directions of the equation are shown in Fig. 12.20. The equation can be solved by finite differences.

Equivalent radius

The effect of each sand drain extends to the end of its equivalent radius, which differs for square and triangular arrangements (see Fig. 12.19).

For a square system:

Area of square enclosed by grid = a^2

Area of equivalent circle of radius R = πR^2

i.e. $\pi R^2 = a^2$ or $R = 0.564a$.

For a triangular system:

A hexagon is formed by bisecting the various grid lines joining adjacent drains (Fig. 12.21). A typical hexagon is shown in the figure from which it is seen that the base of triangle ABC, i.e. the line AB, = $a/2$.

Now

$$AC = AB \tan \angle CBA = \frac{a}{2} \tan 30^\circ = \frac{a}{2\sqrt{3}}$$

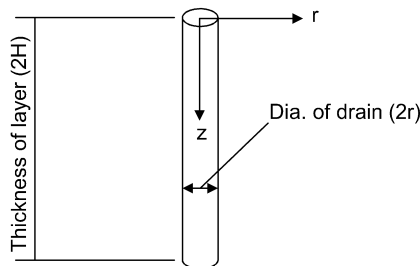


Fig. 12.20 Coordinate directions.

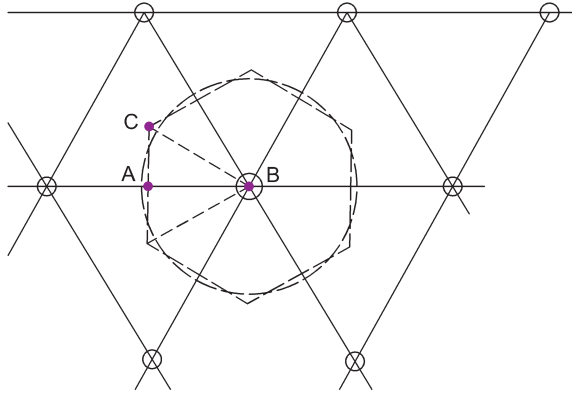


Fig. 12.21 Equivalent radius: triangular system.

hence:

$$\text{Area of triangle ABC} = \frac{1}{2} \times \frac{a}{2} \times \frac{a}{2\sqrt{3}} = \frac{a^2}{8\sqrt{3}}$$

So that:

$$\text{Total area of the hexagon} = 12 \times \frac{a^2}{8\sqrt{3}} = 0.865a^2$$

$$\text{Radius of the equivalent circle, } R = 0.525a$$

Determination of consolidation rates from curves

Barron has produced curves which give the relationship between the degree of consolidation due to radial flow only, U_r , and the corresponding radial time factor, T_r .

$$T_r = \frac{c_h t}{4R^2}$$

where t = time considered.

These curves are reproduced in Fig. 12.22 and it can be seen that they involve the use of factor n . This factor is simply the ratio of the equivalent radius to the sand drain radius.

$$n = \frac{R}{r} \quad \text{and should lie between 5 to 100}$$

To determine U (for both radial and vertical drainage) for a particular time, t , the procedure becomes:

- (i) Determine U_z from the normal consolidation curves of U_z against T_z (Fig. 12.4):

$$T_z = \frac{c_v t}{H^2} \quad \text{where } H = \text{vertical drainage path}$$

- (ii) Determine U_r from Barron's curves of U_r against T_r .

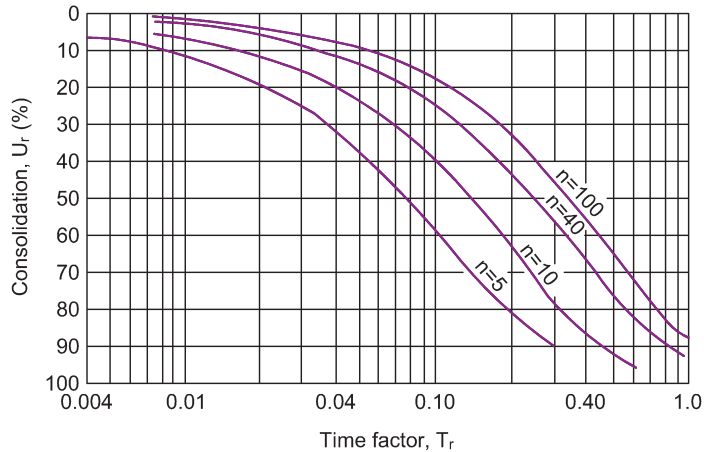


Fig. 12.22 Radial consolidation rates (after Barron, 1948).

(iii) Determine resultant percentage consolidation, U , from:

$$U = 100 - \frac{1}{100} (100 - U_z)(100 - U_r)$$

Smear effects

The curves in Fig. 12.22 are for idealised drains, perfectly installed, clean and working correctly. Wells are often installed by driving cased holes and then backfilling as the casing is withdrawn, a procedure that causes distortion and remoulding in the adjacent soil. In varved clays (clays with sandwich type layers of silt and sand within them) the finer and more impervious layers are dragged down and smear over the more pervious layers to create a zone of reduced permeability around the perimeter of the drain. This smeared zone reduces the rate of consolidation, and *in situ* measurements to check on the estimated settlement rate are necessary on all but the smallest of jobs.

Effectiveness of sand drains

Sand drains are particularly suitable for soft clays but have little effect on soils with small primary but large secondary effects, such as peat.

Example 12.7: Sand drain system

A soft clay layer, $m_v = 2.5 \times 10^{-4} \text{ m}^2/\text{kN}$; $c_v = 0.187 \text{ m}^2/\text{month}$, is 9.2 m thick and overlies impervious shale. An embankment, to be constructed in six months, will subject the centre of the layer to a pressure increase of 100 kPa. It is expected that a roadway will be placed on top of the embankment one year after the start of construction and maximum allowable settlement after this is to be 25 mm.

Determine a suitable sand drain system to achieve the requirements.

Solution:

$$\rho_c = m_v dp \frac{2H}{2H} = \frac{2.5}{10\,000} \times 100 \times 9.2 \times 1000 = 230 \text{ mm}$$

therefore, minimum settlement that must have occurred by the time the roadway is constructed = $230 - 25 = 205 \text{ mm}$. i.e.

$$U = \frac{205}{230} = 90\%$$

Assume that settlement commences at half the construction time for the embankment. Then time to reach $U = 90\% = 12 - \frac{6}{2} = 9$ months.

$$T_z = \frac{c_v t}{H^2} = \frac{0.187 \times 9}{9.2^2} = 0.020$$

From Fig. 12.4 $U_z = 16\%$

Try 450 mm (0.45 m) diameter drains in a triangular pattern.

Select $n = 10$. Then

$$R/r = 10 \quad \text{and} \quad R = 2.25 \text{ m}$$

hence

$$a = \frac{2.25}{0.525} = 4.3 \text{ m}$$

Select a grid spacing of 3 m.

$$R = 0.525 \times 3 = 1.575 \text{ m}$$

$$n = \frac{1.575}{0.225} = 7$$

$$T_r = \frac{c_v t}{4R^2} = \frac{0.187 \times 9}{4 \times 1.575^2} = 0.169 \quad (\text{Note that no value for } c_h \text{ was given so } c_v \text{ must be used})$$

From Fig. 12.22, $U_r = 66\%$

$$U = 100 - (100 - 16) \frac{1}{100} (100 - 66) \\ = 71.4\%, \text{ which is not sufficient}$$

Try $a = 2.25 \text{ m}$; $R = 1.18 \text{ m}$; $n = 5.25$.

$$T_r = \frac{0.187 \times 9}{4 \times 1.18^2} = 0.302$$

From graph, $U_r = 90\%$

$$\text{Total consolidation percentage} = 100 - \frac{1}{100} (100 - 16)(100 - 90) \\ = 91.6\%$$

The arrangement is satisfactory.

In practice no sand drain system could be designed as quickly as this. The object of the example is simply to illustrate the method. The question of installation costs must be considered and several schemes would have to be closely examined before a final arrangement could be decided upon.



Exercises

Exercise 12.1

A soil sample of thickness 19.1 mm in an oedometer test experienced 30% primary consolidation after 10 minutes. How long would it take the sample to reach 80% consolidation?

Answer 80 min

Exercise 12.2

A 5 m thick clay layer has an average c_v value of $5.0 \times 10^{-2} \text{ mm}^2/\text{min}$. If the layer is subjected to a uniform initial excess pore pressure distribution, determine the time it will take to reach 90% consolidation (i) if drained on both surfaces and (ii) if drained on its upper surface only.

Answer (i) 200 years, (ii) 800 years

Exercise 12.3

In a consolidation test the following readings were obtained for a pressure increment:

Sample thickness (mm)	Time (min)
16.97	0
16.84	$\frac{1}{4}$
16.76	1
16.61	4
16.46	9
16.31	16
16.15	25
16.08	36
16.03	49
15.98	64
15.95	81

- (i) Determine the coefficient of consolidation of the sample.
- (ii) From the point for $U = 90\%$ on the test curve, establish the point for $U = 50\%$ and hence obtain the test value for t_{50} . Check your value from the formula

$$t_{50} = \frac{T_{50}H^2}{c_v}$$

Answer $c_v = 1.28 \text{ mm}^2/\text{min}$, $t_{50} = 10.2 \text{ min}$

Exercise 12.4

A sample in a consolidation test had a mean thickness of 18.1 mm during a pressure increment of 150 to 290 kPa. The sample achieved 50% consolidation in 12.5 min.

If the initial and final void ratios for the increment were 1.03 and 0.97 respectively, determine a value for the coefficient of permeability of the soil.

Answer $k = 2.71 \times 10^{-6} \text{ mm/min}$

Exercise 12.5

A 2 m thick layer of clay, drained at its upper surface only, is subjected to a triangular distribution of initial excess pore water pressure varying from 1000 kPa at the upper surface to 0.0 at the base. The c_v value of the clay is $1.8 \times 10^{-3} \text{ m}^2/\text{month}$. By dividing the layer into 4 equal slices, determine, numerically, the degree of consolidation after 4 years.

Note: If the total time is split into seven increments, $r = 0.049$.

Answer $U = 45\%$

Chapter 13

Stability of Slopes

13.1 Planar failures

Soils such as gravel and sand are collectively referred to as granular soils and normally exhibit only a frictional component of strength. A potential slip surface in a slope of granular material will be planar and the analysis of the slope is relatively simple. However, most soils exhibit both cohesive and frictional strength and purely granular soils are fairly infrequent. Nevertheless a study of granular soils affords a useful introduction to the later treatment of soil slopes that exhibit both cohesive and frictional strength.

Figure 13.1 illustrates an embankment of granular material with an angle of shearing resistance, ϕ' , and with its surface sloping at angle β to the horizontal.

Consider an element of the embankment of weight W :

Force parallel to slope = $W \sin \beta$

Force perpendicular to slope = $W \cos \beta$

For stability,

$$\text{Sliding forces} = \frac{\text{Restraining forces}}{\text{Factor of safety (F)}}$$

i.e.

$$W \sin \beta = \frac{W \cos \beta \tan \phi'}{F}$$
$$\Rightarrow F = \frac{\tan \phi'}{\tan \beta}$$

For limiting equilibrium ($F = 1$), $\tan \beta = \tan \phi'$, i.e. $\beta = \phi'$.

From this it is seen that (a) the weight of a material does not affect the stability of the slope, (b) the safe angle for the slope is the same whether the soil is dry or submerged, and (c) the embankment can be of any height.

Failure of a submerged sand slope can occur however, if the water level of the retained water falls rapidly while the water level in the slope lags behind, as seepage forces are set up in this situation.

13.1.1 Seepage forces in a granular slope subjected to rapid drawdown

In Fig. 13.2a the level of the river has dropped suddenly due to tidal effects. The permeability of the soil in the slope is such that the water in it cannot follow the water level changes as rapidly as the river, with

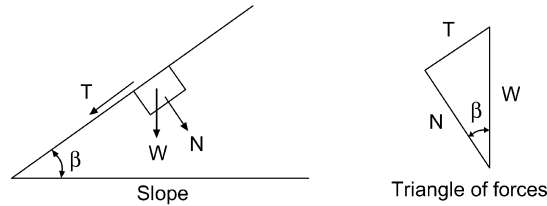


Fig. 13.1 Forces involved in a slope of granular material.

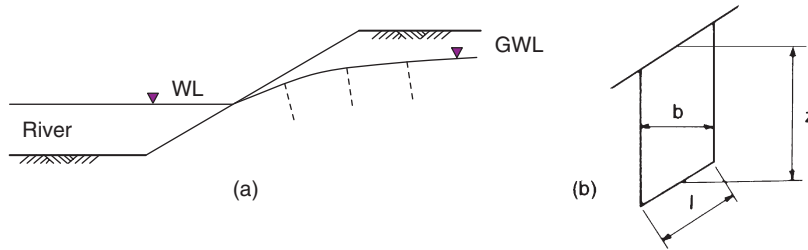


Fig. 13.2 Seepage due to rapid drawdown.

the result that seepage occurs from the high water level in the slope to the lower water level of the river. A flow net can be drawn for this condition and the excess hydrostatic head for any point within the slope can be determined.

Assume that a potential failure plane, parallel to the surface of the slope, occurs at a depth of z and consider an element within the slope of weight W . Let the excess pore water pressure induced by seepage be u at the mid point of the base of the element.

$$\text{Normal reaction } N = W \cos \beta$$

$$\text{Normal stress } \sigma = \frac{W \cos \beta}{l} = \frac{W \cos^2 \beta}{b} \quad \left(\text{since } l = \frac{b}{\cos \beta} \right)$$

$$\begin{aligned} \text{Normal effective stress } \sigma' &= \frac{W \cos^2 \beta}{b} - u \\ &= \frac{\gamma z b \cos^2 \beta}{b} - u = \gamma z \cos^2 \beta - u \end{aligned}$$

(Where γ = the average unit weight of the whole slice, it is usually taken that the whole slice is saturated).

$$\text{Tangential force} = W \sin \beta$$

$$\Rightarrow \text{Tangential shear stress, } \tau = \frac{W \sin \beta}{l} = \gamma z \sin \beta \cos \beta$$

$$\text{Ultimate shear strength of soil} = \sigma' \tan \phi' = \tau F$$

$$\Rightarrow \gamma z \sin \beta \cos \beta = (\gamma z \cos^2 \beta - u) \frac{\tan \phi'}{F}$$

$$\Rightarrow F = \left(\frac{\cos \beta}{\sin \beta} - \frac{u}{\gamma z \sin \beta \cos \beta} \right) \tan \phi'$$

$$= \left(1 - \frac{u}{\gamma z \cos^2 \beta} \right) \frac{\tan \phi'}{\tan \beta}$$

This expression may be written as:

$$F = \left(1 - \frac{r_u}{\cos^2 \beta} \right) \frac{\tan \phi'}{\tan \beta}$$

where

$$r_u = \frac{u}{\gamma z}$$

13.1.2 Pore pressure ratio

The ratio, at any given point, of the pore water pressure to the weight of the material acting on unit area above it is known as the pore pressure ratio and is given the symbol r_u . (See also Section 13.2.4).

Flow parallel to the surface and at the surface

The flow net for these special conditions is illustrated in Fig. 13.3.

If we consider the same element as before, the excess pore water head, at the centre of the base of the element, is represented by the height h_w in Fig. 13.3. In the figure, $AB = z \cos \beta$ and $h_w = AB \cos \beta$. Hence, $h_w = z \cos^2 \beta$, so that excess pore water pressure at the base of the element = $\gamma_w z \cos^2 \beta$.

$$\Rightarrow r_u = \frac{u}{\gamma z} = \frac{\gamma_w z \cos^2 \beta}{\gamma z} = \frac{\gamma_w}{\gamma} \cos^2 \beta$$

The equation for F becomes:

$$F = \left(1 - \frac{\gamma_w}{\gamma} \right) \frac{\tan \phi'}{\tan \beta} = \left(\frac{\gamma - \gamma_w}{\gamma} \right) \frac{\tan \phi'}{\tan \beta} = \frac{\gamma' \tan \phi'}{\gamma_{\text{sat}} \tan \beta}$$

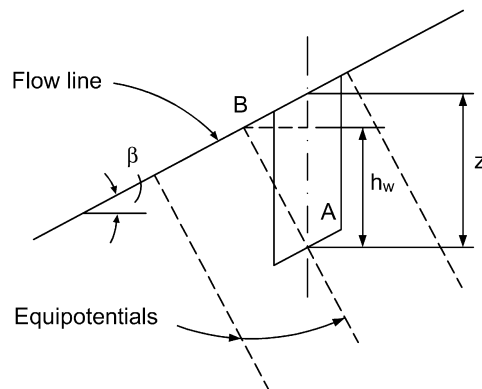


Fig. 13.3 Flow net when flow is parallel and at the surface.

Example 13.1: Safe angle of slope

A granular soil has a saturated unit weight of 18.0 kN/m^3 and an effective angle of shear resistance of 30° . A slope is to be made of this material. If the factor of safety is to be 1.25, determine the safe angle of the slope (i) when the slope is dry or submerged and (ii) if seepage occurs at and parallel to the surface of the slope.

Solution:

(i) When dry or submerged:

$$F = \frac{\tan \phi'}{\tan \beta} \Rightarrow \tan \beta = \frac{0.5774}{1.25} = 0.462$$

$$\Rightarrow \beta = 25^\circ$$

(ii) When flow occurs at and parallel to the surface:

$$F = \frac{\gamma' \tan \phi'}{\gamma_{\text{sat}} \tan \beta} \Rightarrow \tan \beta = \frac{(18 - 9.81) \times 0.5774}{1.25 \times 18} = 0.210$$

$$\Rightarrow \beta = 12^\circ$$

Seepage more than halves the safe angle of the slope in this particular example.

13.1.3 Planar translational slip

Quite often the surface of an existing slope is underlain by a plane of weakness lying parallel to it. This potential failure surface (often caused by downstream creep under alternating winter–summer conditions) generally lies at a depth below the surface that is small when compared with the length of the slope.

Owing to the comparative length of the slope and the depth to the failure surface we can generally assume that the end effects are negligible and that the factor of safety of the slope against slip can be determined from the analysis of a wedge or slice of the material, as for the granular slope.

Consider Fig. 13.4. Angle of slope = β , depth to failure surface = z , width of slice = b , and weight of slice, $W = \gamma z b / \text{unit width}$.

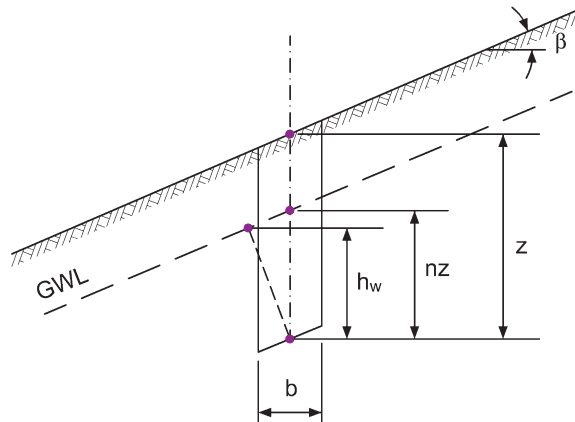


Fig. 13.4 Planar translational slip.

Let the groundwater level be parallel to the surface at a constant height above the failure plane = nz . Then excess hydrostatic head at midpoint of base of slice,

$$h_w = nz \cos^2 \beta$$

i.e.

$$u = \gamma_w n z \cos^2 \beta$$

$$\text{Tangential force} = W \sin \beta$$

i.e.

$$\tau = \frac{\gamma z b \sin \beta}{b} \cos \beta = \gamma z \sin \beta \cos \beta$$

and

$$\tau_f = c' + (\sigma - u) \tan \phi'$$

Now

$$(\sigma - u) = \frac{\gamma z b \cos^2 \beta}{b} - u = \gamma z \cos^2 \beta - \gamma_w n z \cos^2 \beta$$

and

$$\begin{aligned} F &= \frac{\tau_f}{\tau} = \frac{c' + (\gamma z - \gamma_w n z) \cos^2 \beta \tan \phi'}{\gamma z \sin \beta \cos \beta} \\ &= \frac{c'}{\gamma z \sin \beta \cos \beta} + \frac{\gamma - n \gamma_w}{\gamma} \times \frac{\tan \phi'}{\tan \beta} \end{aligned}$$

Note: When $c' = 0$ and $n = 1.0$, we obtain the same expression as derived for a granular slope:

$$F = \frac{\gamma'}{\gamma_{\text{sat}}} \times \frac{\tan \phi'}{\tan \beta}$$

13.2 Rotational failures

Failures in slopes made from soils that possess both cohesive and frictional strength components tend to be rotational, the actual slip surface approximating to the arc of a circle (Fig. 13.5).

Contemporary methods of investigating the stability of such slopes are based on (a) assuming a slip surface and a centre about which it rotates, (b) studying the equilibrium of the forces acting on this surface,

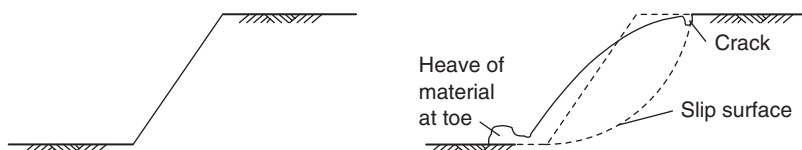


Fig. 13.5 Typical rotational slip in a cohesive soil.

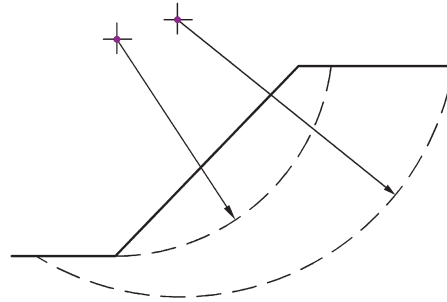


Fig. 13.6 Example of two possible slip surfaces.

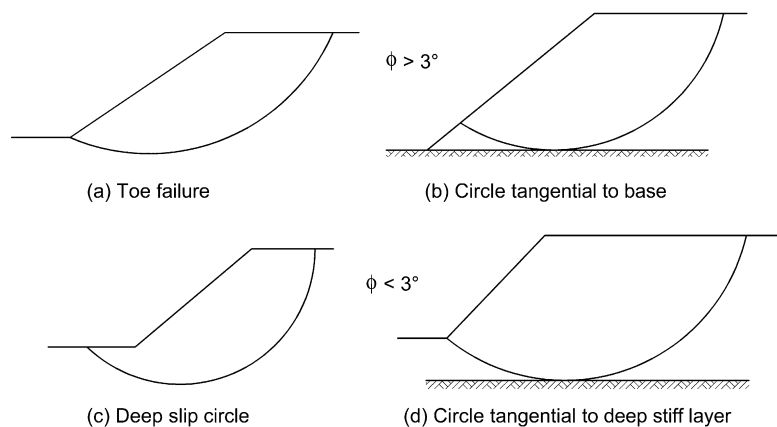


Fig. 13.7 Types of slip failures.

and (c) repeating the process until the worst slip surface is found as illustrated in Fig. 13.6. The worst slip surface is the surface which yields the lowest factor of safety, F , where F is the ratio of the restoring moment to the disturbing moment, each moment considered about the centre of rotation. The methods of assessing stability using this moment equilibrium approach are described in the next few sections. Alternatively, if stability assessment is to be performed in accordance with Eurocode 7, the strength parameters of the soil are first divided by partial factors, and stability is then confirmed by checking the GEO limit state (see Section 13.5).

Regardless of the approach, the critical slip circle is found by considering several trial circles, each differing by the location of their centre, and identifying the one that returns the lowest measure of safety. This is achieved nowadays by using specific slope stability software that can perform repeated analyses in seconds and rapidly find the location of the centre of the critical slip circle.

In the case of soils with angles of shearing resistance that are not less than 3° , the critical slip circle is invariably through the toe – as it is for any soil (no matter what its ϕ' value) if the angle of slope exceeds 53° (Fig. 13.7a). An exception to this rule occurs when there is a layer of relatively stiff material at the base of the slope, which will cause the circle to be tangential to this layer (Fig. 13.7b).

For cohesive soils with little angle of shearing resistance the slip circle tends to be deeper and usually extends in front of the toe (Fig. 13.7c); this type of circle can of course be tangential to a layer of stiff material below the embankment which limits the depth to which it would have extended (Fig. 13.7d).

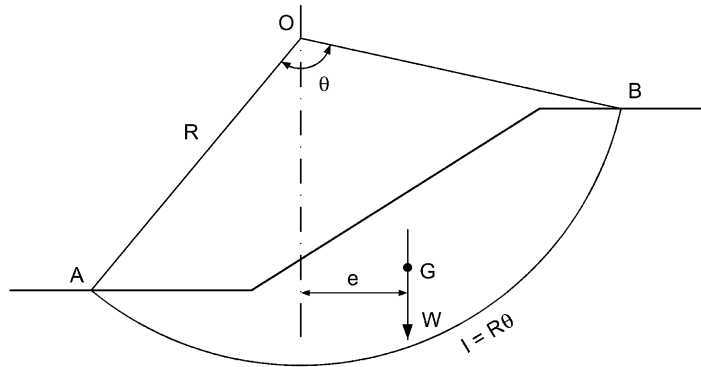


Fig. 13.8 Total stress analysis.

13.2.1 Total stress analysis

This analysis, also referred to as an undrained analysis, is intended to give the stability of an embankment or cutting immediately after its construction. At this stage it is assumed that the soil in the slope has had no time to drain (i.e. the soil is considered to be in an undrained state) and the strength parameter used in the analysis is the undrained cohesion which is found from either the unconfined compression test or an undrained triaxial test without pore pressure measurements.

Consider in Fig. 13.8 the sector of soil cut off by arc AB of radius r . Let W equal the weight of the sector and G the position of its centre of gravity. The shear strength of the soil is c_u . The mass of the soil tends to rotate clockwise, but is resisted by the shear strength acting along the failure surface.

Taking moments about O , the centre of rotation:

$$We = c_u l R = c_u R^2 \theta \text{ for equilibrium}$$

$$F = \frac{\text{Restoring moment}}{\text{Disturbing moment}} = \frac{c_u R^2 \theta}{We}$$

Note: the term $R\theta$ is the length of the slip circle through the soil (length of an arc of a circle) where θ is measured in radians.

The position of G is not needed, and it is only necessary to ascertain where the line of action of W is. This can be obtained by dividing the sector into a set of vertical slices and taking moments of area of these slices about a convenient vertical axis.

13.2.2 Effect of tension cracks

With a slip in a cohesive soil there will be a tension crack at the top of the slope (Fig. 13.9), along which no shear resistance can develop. In the undrained state the depth of the crack, h_c , is given by the following formula (see Chapter 7):

$$h_c = \frac{2c_u}{\gamma}$$

The effect of the tension crack is to shorten the arc AB to AB' . If the crack is to be allowed for, the angle θ' must be used instead of θ in the formula for F , and the full weight W of the sector is still used in order to compensate for any water pressures that may be exerted if the crack fills with rainwater.

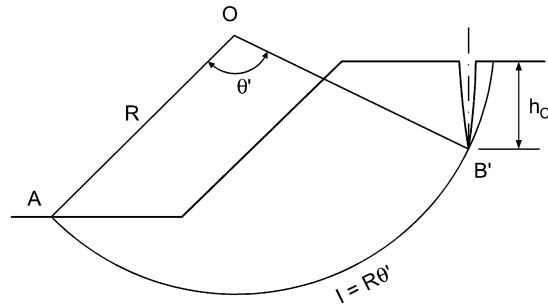


Fig. 13.9 Tension crack in a cohesive soil.

Example 13.2: Factor of safety against sliding

Figure 13.10 gives details of an embankment to be made of cohesive soil with $c_u = 20 \text{ kPa}$. The unit weight of the soil is 19 kN/m^3 .

For the trial circle shown, determine the factor of safety against sliding soon after construction. The weight of the sliding sector is 329 kN acting at an eccentricity of 4.8 m from the centre of rotation. What would the factor of safety be if the shaded portion of the embankment were removed? In both cases assume that no tension crack develops.

Solution:

$$\text{Disturbing moment} = 329 \times 4.8 = 1579 \text{ kN m}$$

$$\text{Restoring moment} = c_u R^2 \theta = 20 \times 9^2 \times \frac{71}{180} \times \pi = 2007 \text{ kN m}$$

$$\Rightarrow F = \frac{2007}{1579} = 1.27$$

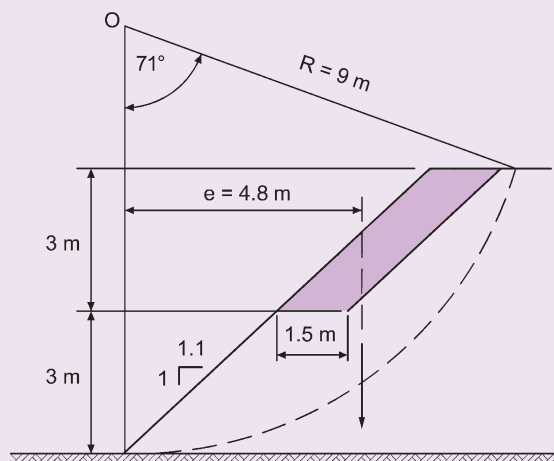


Fig. 13.10 Example 13.2.

$$\text{Area of portion removed} = 1.5 \times 3 = 4.5 \text{ m}^2$$

$$\text{Weight of portion removed} = 4.5 \times 19 = 85.5 \text{ kN}$$

$$\text{Eccentricity from O} = 3.3 + \frac{3.3 + 1.5}{2} = 5.7 \text{ m}$$

$$\text{Relief of disturbing moment} = 5.7 \times 85.5 = 488 \text{ kN m}$$

$$\Rightarrow F = \frac{2007}{1579 - 488} = 1.84$$

13.2.3 The Swedish method of slices analysis

A more accurate assessment of the factor of safety can be gained using this method (also known as the Fellenius method). In this method the sliding section is divided into a suitable number of vertical slices, the stability of one such slice being considered in Fig. 13.11 (the lateral reactions on the two vertical sides of the wedge, L_1 and L_2 , are assumed to be equal). By analysing the equilibrium of each slice and then adding up the totals for all slices, we can establish the factor of safety of the slope.

The solution is solved graphically using a scale drawing or, more commonly, analytically using computer software. Using a graphical approach, at the base of each slice set off its weight to some scale. Draw the direction of its normal component, N , and by completing the triangle of forces determine its magnitude, together with the magnitude of the tangential component T . Repeat for all slices.

Total stress analysis

The factor of safety is established by considering the moment equilibrium about the centre of rotation, O :

$$\text{Disturbing moment} = R \sum T$$

$$\text{Restoring moment} = c_u R \theta$$

Hence

$$F = \frac{c_u R \theta}{\sum T}$$

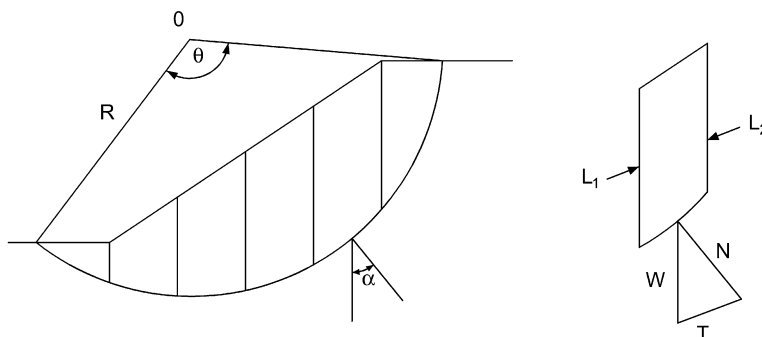


Fig. 13.11 The Swedish method of slices.

The same result can be obtained using a part analytical approach. We can see from the triangle of forces, that:

$$N = W \cos \alpha$$

$$T = W \sin \alpha$$

where α is the angle between the normal, N and the vertical.

From the above relationship, we have:

$$F = \frac{c_u R \theta}{\sum W \sin \alpha}$$

A tension crack can be allowed for in the analysis.

Effective stress analysis

As time passes after the construction of an embankment or cutting, the slope will no longer be in the undrained state and any slope stability analysis must be done considering the drained strength parameters c' and $\tan \phi'$ and the pore pressure, u acting along the slip surface. The approach used in the undrained analysis can be adapted to cover this case:

Taking moments about the centre of rotation, O :

$$\text{Disturbing moment} = R \sum T$$

$$\text{Restoring moment} = R(c'R\theta + \sum N' \tan \phi')$$

Hence

$$F = \frac{c'R\theta + \sum N' \tan \phi'}{\sum T} = \frac{c'R\theta + \sum (N - u) \tan \phi'}{\sum T}$$

where u = pore pressure at base of slice.

The effect of a tension crack can again be allowed for, and in this case:

$$h_c = \frac{2c'}{\gamma} \tan \left(45^\circ + \frac{\phi'}{2} \right)$$

Example 13.3: Swedish method of slices

An embankment made from clay is to be constructed upon the ground surface as shown in Fig. 13.12. The completed embankment can be assumed to be homogenous and thus will possess constant density and shear strength throughout its mass. Determine the factor of safety in the short-term (undrained state).

Solution:

Draw the slope to scale using CAD software or on graph paper and split the sliding section up into a suitable number of slices; 4 or 5 is a typical amount.

Calculate the weight of each slice, and set off this value as a vertical line from the mid-point of the base of the slice:

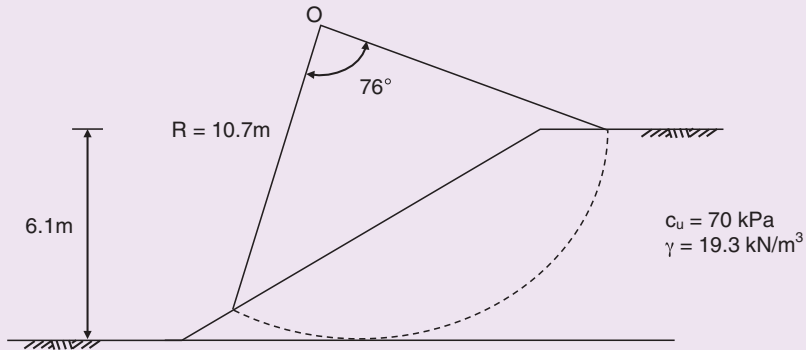


Fig. 13.12 Example 13.3.

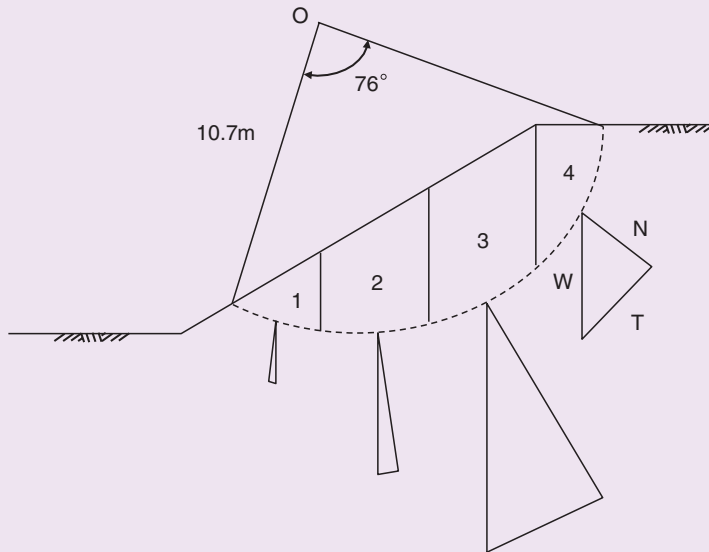


Fig. 13.13 Example 13.3.

Slice	Area (m ²)	Weight (kN)
1	3.7	(= 3.7 × 19.3) = 71
2	8.7	168
3	11.6	224
4	7.7	148

Complete the triangle of forces for each slice and read the values for N and T from the drawing (or calculate using trigonometry):

Slice	Area (m ²)	Weight (kN)	Normal, N (kN)	Tangential, T (kN)
1	3.7	71	71	-7
2	8.7	168	163	42
3	11.6	224	191	116
4	7.7	148	104	106
			Σ 529	Σ 257

The N values are not actually required in this example as we are assessing stability in the undrained state, but are included to demonstrate how these are established for use in a drained analysis.

$$c_u R\theta = 70 \times 10.7 \times 76 / 180 \times \pi = 993 \text{ kN}$$

$$F = \frac{c_u R\theta}{\Sigma T}$$

$$= \frac{993}{257}$$

$$= 3.9$$

13.2.4 Pore pressure ratio, r_u

As mentioned in the previous section, if the long-term factor of safety of a slope is required, an analysis must be carried out in terms of effective stress. Such an analysis can be used in fact for any intermediate value of pore pressure between undrained and drained.

Before looking at the effective stress methods of analysis, let us consider the determination of the pore pressure ratio, r_u .

There are two main types of problem in considering pore pressures in a slope: those in which the value of the pore water pressure depends upon the magnitude of the applied stresses (e.g. during the rapid construction of an embankment), and those where the value of the pore water pressure depends upon either the groundwater level within the embankment or the seepage pattern of water impounded by it.

Rapid construction of an embankment

The pore pressure at any point in a soil mass is given by the expression:

$$u = u_0 + \Delta u$$

Where

u_0 = initial value of pore pressure before any stress change

Δu = change in pore pressure due to change in stress.

From Chapter 4:

$$\Delta u = B[\Delta\sigma_3 + A(\Delta\sigma_1 - \Delta\sigma_3)]$$

Skempton (1954) showed that the ratio of the pore pressure change to the change in the total major principal stress gives another pore pressure coefficient b :

$$\frac{\Delta u}{\Delta \sigma_1} = \bar{B} = B \left[\frac{\Delta \sigma_3}{\Delta \sigma_1} = A \left(1 - \frac{\Delta \sigma_3}{\Delta \sigma_1} \right) \right]$$

The coefficient \bar{B} can be used to determine the magnitude of pore pressures set up at any point in an embankment if it is assumed that no drainage occurs during construction (a fairly reasonable thesis if the construction rate is rapid). Now

$$\gamma_u = \frac{u}{\gamma z}$$

i.e.

$$r_u = \frac{u_0}{\gamma z} + \frac{\bar{B} \Delta \sigma_1}{\gamma z}$$

A reasonable assumption to make for the value of the major principal stress is that it equals the weight of the material above the point considered. Hence

$$\Delta \sigma_1 = \gamma z \quad \text{and} \quad r_u = \frac{u_0}{\gamma z} + \bar{B}$$

For soils placed at or below optimum moisture content (see Chapter 14), u_0 is small and can even be negative. Its effect is of little consequence and may be ignored so that the analysis for stability at the end of construction is often determined from the relationship $r_u = \bar{B}$.

The pore pressure coefficient \bar{B} is determined from a special stress path test known as a dissipation test. Briefly, a sample of the soil is inserted in a triaxial cell and subjected to increases in the principal stresses $\Delta \sigma_1$ and $\Delta \sigma_3$ of magnitudes approximating to those expected in the field. The resulting pore pressure is measured and \bar{B} obtained.

Steady seepage

It is easy to determine r_u from a study of the flow net (Fig. 13.14). The procedure is to trace the equipotential through the point considered up to the top of the flow net, so that the height to which water would rise in a standpipe inserted at the point is h_w . Since $u = \gamma_w h_w$:

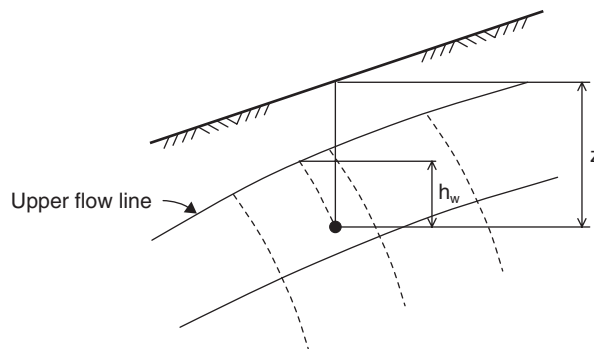


Fig. 13.14 Determination of excess head at a point on a flow net.

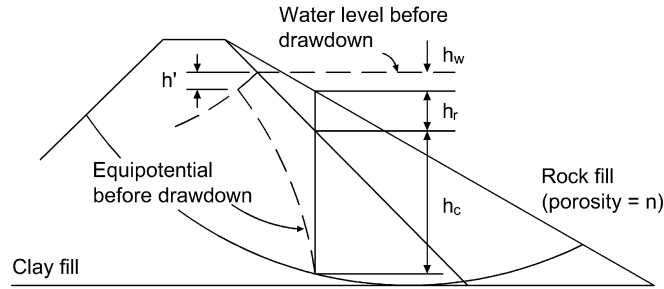


Fig. 13.15 Upstream dam face subjected to sudden drawdown (after Bishop, 1954).

$$r_u = \frac{h_w \gamma_w}{\gamma z}$$

Rapid drawdown

In the case of lagoons, a sudden drawdown in the level of the slurry is unlikely, but the problem is important in the case of a normal earth dam. Bishop (1954) considered the case of the upstream face of a dam subjected to this effect, the slope having a rock fill protection as shown in Fig. 13.15. A simplified expression for u under these conditions is obtained by the following calculation:

$$u = u_0 + \Delta u$$

and

$$u_0 = \gamma_w(h_w + h_r + h_c - h')$$

If it is assumed that the major principal stress equals the weight of material, then the initial total major principal stress is given by the expression:

$$\sigma_{1_0} = \gamma_c h_c + \gamma_r h_r + \gamma_w h_w$$

where γ_c and γ_r are the saturated unit weights of the clay and the rock. The final total major principal stress, after drawdown, will be:

$$\sigma_{1_f} = \gamma_c h_c + \gamma_{dr} h_r$$

where γ_{dr} equals the drained unit weight of the rock fill.

$$\begin{aligned} \text{Change in major principal stress} &= \sigma_{1_f} - \sigma_{1_0} \\ &= h_r(\gamma_{dr} - \gamma_r) - \gamma_w h_w \end{aligned}$$

i.e.

$$\Delta \sigma_1 = -\gamma_w n h_r - \gamma_w h_w$$

Note: Porosity of rock fill, $n = V_v/V$ or, when we consider unit volume, $n = V_v$. Hence $(\gamma_{dr} - \gamma_r) = -\gamma_w n$.

$$\Rightarrow \Delta u = -\bar{B}(\gamma_w n h_r + \gamma_w h_w)$$

The pore pressure coefficient \bar{B} can be obtained from a laboratory test but standard practice is to assume, conservatively, that $\bar{B} = 1.0$. In this case

$$\Delta u = -\gamma_w(nh_r + h_w)$$

and the expression for u becomes

$$u = \gamma_w[h_c + h_r(1-n) - h']$$

The measurement of in situ pore water pressures is described in Section 6.5.

13.2.5 Effective stress analysis by Bishop's method

Bishop's conventional method

The effective stress methods of analysis now in general use were evolved by Bishop (1955). Figure 13.16 illustrates a circular failure arc, ABCD, and shows the forces on a vertical slice through the sliding segment.

Let L_n and L_{n+1} equal the lateral reactions acting on sections n and $n + 1$ respectively. The difference between L_n and L_{n+1} is small and the effect of these forces can be ignored with little loss in accuracy.

Let the other forces acting on the slice be:

- W = weight of slice
- P = total normal force acting on base of slice
- T = shear force acting on base of slice

and the other notation is:

- z = height of slice
- b = breadth of slice

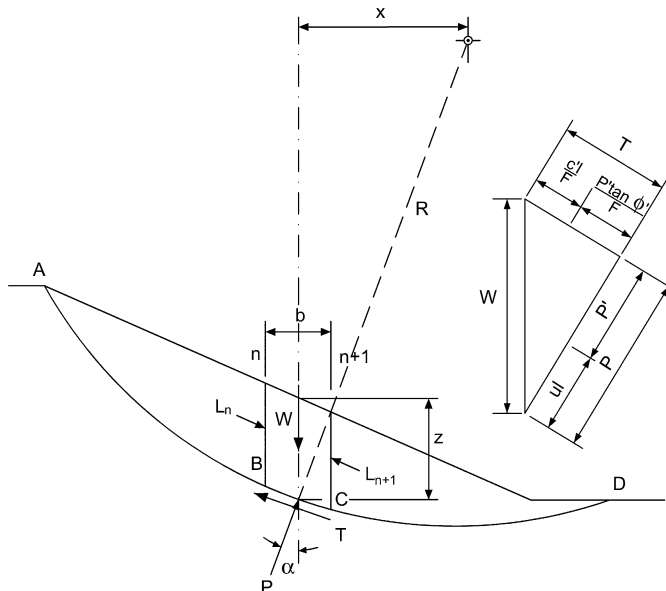


Fig. 13.16 Effective stress analysis: forces acting on a vertical side.

l = length of BC (taken as straight line)

α = angle of between P and the vertical

x = horizontal distance from centre of slice to centre of rotation, O.

In terms of effective stress, the shear strength mobilised is

$$\tau = \frac{c' + (\sigma_n - u) \tan \phi'}{F}$$

Total normal stress on base of slice:

$$\sigma_n = \frac{P}{l}$$

i.e.

$$\tau = \frac{1}{F} \left[c' + \left(\frac{P}{l} - u \right) \tan \phi' \right]$$

Shear force acting on base of slice, $T = \tau l$

For equilibrium, Disturbing moment = Restoring moment

i.e.

$$\begin{aligned} \sum Wx &= \sum TR = \sum \tau l R \\ &= \frac{R}{F} \sum [c'l + (P - ul) \tan \phi'] \end{aligned}$$

$$\Rightarrow F = \frac{R}{\sum Wx} \sum [c'l + (P - ul) \tan \phi']$$

If we ignore the effects of L_n and L_{n+1} the only vertical force acting on the slice is W . Hence

$$P = W \cos \alpha$$

$$\Rightarrow F = \frac{R}{\sum Wx} \sum [c'l + (W \cos \alpha - ul) \tan \phi']$$

Putting $x = R \sin \alpha$:

$$F = \frac{1}{\sum W \sin \alpha} \sum [c'l + (W \cos \alpha - ul) \tan \phi']$$

If we express u in terms of the pore pressure ratio, r_u :

$$u = r_u \gamma z = r_u \frac{W}{b}$$

Now

$$b = l \cos \alpha \Rightarrow u = \frac{r_u W}{l \cos \alpha} = \frac{r_u W}{l} \sec \alpha$$

$$\Rightarrow F = \frac{1}{\sum W \sin \alpha} \sum [c'l + W(\cos \alpha - r_u \sec \alpha) \tan \phi']$$

This formula gives a solution generally known as the conventional method which allows rapid determination of F when sufficient slip circles are available to permit the determination of the most critical. For analysing the stability of an existing tip it should prove perfectly adequate.

Bishop's routine, or rigorous, method

The formula for the conventional method of analysis can give errors of up to 15% in the value of F obtained, although the error is on the safe side since it gives a lower value than is the case. In the construction of new embankments and earth dams, however, this error can lead to unnecessarily high costs, and it becomes particularly pronounced with a deep slip circle where the variations of α over the slip length are large.

Returning to the equation:

$$F = \frac{R}{\sum W_x} \sum [c'l + (P - ul) \tan \phi']$$

Let the normal effective force, $(P - ul) = P'$.

Resolving forces vertically:

$$W = P \cos \alpha + T \sin \alpha$$

Now

$$P = P' + ul$$

and

$$T = \frac{1}{F} (c'l + P' \tan \phi')$$

$$W = ul \cos \alpha + P' \cos \alpha + \frac{P' \tan \phi'}{F} \sin \alpha + \frac{c'l}{F} \sin \alpha$$

$$= ul \cos \alpha + \frac{c'l \sin \alpha}{F} + P' \left(\cos \alpha + \frac{\tan \phi'}{F} \sin \alpha \right)$$

$$= l \left(u \cos \alpha + \frac{c'}{F} \sin \alpha \right) + P' \left(\cos \alpha + \frac{\tan \phi'}{F} \sin \alpha \right)$$

$$\Rightarrow P' = \frac{W - l \left(u \cos \alpha + \frac{c'}{F} \sin \alpha \right)}{\cos \alpha + \frac{\tan \phi'}{F} \sin \alpha}$$

Substituting P' for $(P - ul)$ in the original equation:

$$F = \frac{R}{\sum W_x} \sum [c'l + (P - ul) \tan \phi']$$

$$F = \frac{R}{\sum W_x} \sum \left\{ c'l + \left[\frac{\left(W - ul \cos \alpha - \frac{c'l}{F} \sin \alpha \right) \tan \phi'}{\cos \alpha + \frac{\tan \phi'}{F} \sin \alpha} \right] \right\}$$

slice no.	z (m)	b (m)	W = $\gamma z b$	α°	sin α	W sin α (1)	c'/b (2)	W(1 - r_u) tan ϕ' (3)	2 + 3 (4)	sec α	tan α	(5) sec α		4 × 5 (6)	
												$1 + \frac{\tan \phi' \tan \alpha}{F}$			
												F=	F=	F=	F=

Fig. 13.17 Example spreadsheet template for slope stability calculation.

and substituting

$$x = R \sin \alpha, b = l \cos \alpha \text{ and } \frac{ub}{W} = \frac{u}{\gamma z} = r_u$$

$$F = \frac{1}{\sum W \sin \alpha} \sum \left[(c'b + W(1 - r_u) \tan \phi') \frac{\sec \alpha}{1 + \frac{\tan \phi' \tan \alpha}{F}} \right]$$

When working by hand, the final analysis of forces acting on a vertical slice is best carried out by tabulating the calculations. However, in most design offices, slope stability problems are now computerised (Fig. 13.17).

Example 13.4: Bishop's conventional and routine methods

The cross-section of an earth dam sitting on an impermeable base is shown in Fig. 13.18. The stability of the downstream slope is to be investigated using the slip circle shown and given the following information:

$$\gamma_{\text{sat}} = 19.2 \text{ kN/m}^3$$

$$c' = 12 \text{ kPa}$$

$$\phi' = 20^\circ$$

$$R = 9.15 \text{ m}$$

Angle subtended by arc of slip circle, $\theta = 89^\circ$

For this circle, determine the factor of safety (a) with the conventional method and (b) with the rigorous method.

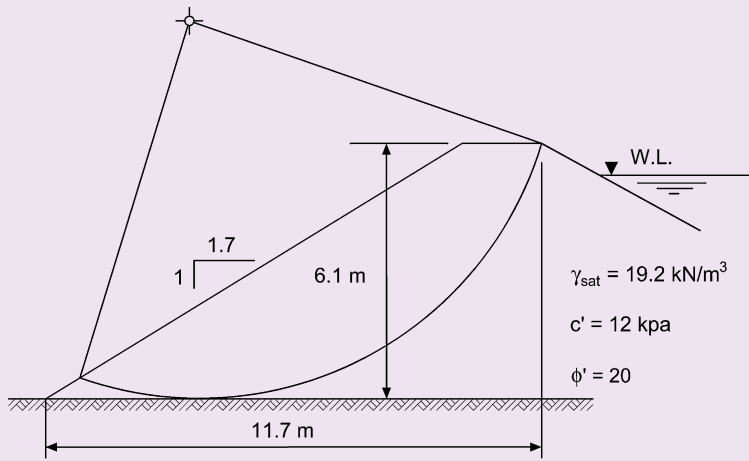


Fig. 13.18 Example 13.4.

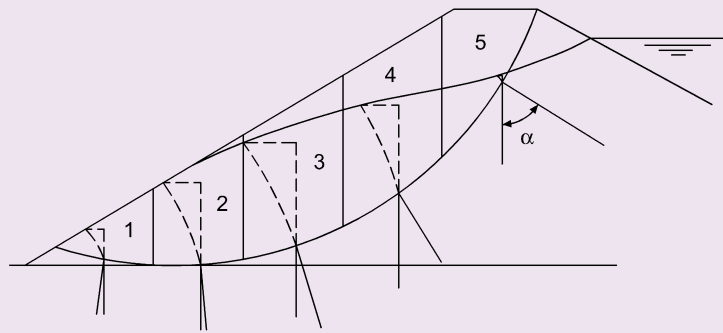


Fig. 13.19 Working diagram for Example 13.4.

Solution:

The earth dam is drawn to scale by CAD or on graph paper. The first step in the analysis is to divide the sliding sector into a suitable number of slices and determine the pore pressure ratio at the mid-point of the base of each slice.

The phreatic surface must be drawn, using the method of Casagrande. A rough form of the flow net must then be established, so that the equipotentials through the centre points of each slice can be inserted. Five slices is a normal number (Fig. 13.19).

The determination of the r_u values is required for both methods and will be considered first.

Slice no.	h_w (m)	u (kPa)	z (m)	r_u
1	0.654	6.42	0.95	0.352
2	1.958	19.21	2.44	0.41
3	2.440	23.90	3.32	0.376
4	2.020	19.82	3.50	0.295
5	0.246	2.41	1.74	0.072

Slice	z (m)	b (m)	W (kN)	α (°)	cos α	sec α	h_w (m)	r_u	$\cos \alpha - r_u \sec \alpha$	$W(\cos \alpha - r_u \sec \alpha) \times \tan \phi'$	sin α	W(sin α)
1	0.95	2.35	42.9	-10	0.985	1.015	0.654	0.352	0.985	15.4	-0.174	-7.4
2	2.44	2.35	110.1	4	0.998	1.002	1.958	0.410	0.587	23.5	0.070	7.7
3	3.32	2.35	149.8	20	0.940	1.064	2.440	0.376	0.540	29.4	0.342	51.2
4	3.50	2.35	157.9	35	0.819	1.221	2.020	0.295	0.459	26.4	0.574	90.6
5	1.74	2.35	78.5	57	0.545	1.836	0.246	0.072	0.412	11.8	0.839	65.8

$\Sigma 106.5$ $\Sigma 207.9$

(a) Conventional method

Slice	z (m)	b (m)	W (kN)	α (°)	sin α	W sin α	c'/b	W(1 - r_u) × tan ϕ'	(2) + (3)	sec α	tan α	(5)		(6)	
												$\frac{\sec \alpha}{1 + \frac{\tan \phi' \tan \alpha}{F}}$		(4) × (5)	
												F = 1.5	F = 1.43	F = 1.5	F = 1.43
1	0.95	2.35	42.9	-10	-0.17	-7.4	22.6	10.1	38.3	1.015	-0.18	1.061	1.063	40.6	40.7
2	2.44	2.35	110.1	4	0.07	7.7	22.6	23.6	51.8	1.002	0.07	0.986	0.985	51.1	51.1
3	3.32	2.35	149.8	20	0.34	51.2	22.6	34.1	62.2	1.064	0.36	0.978	0.974	60.9	60.6
4	3.50	2.35	157.9	35	0.57	90.6	22.6	40.5	68.7	1.221	0.70	1.043	1.036	71.7	71.2
5	1.74	2.35	78.5	57	0.84	65.8	22.6	26.5	54.7	1.836	1.54	1.337	1.319	73.1	72.2

$\Sigma 207.9$ $\Sigma 297.5$ 295.8

(b) Rigorous method

Fig. 13.20 Example 13.4.

The calculations for the conventional method are set out in Fig. 13.20a:

$$\theta = 89^\circ$$

$$\Rightarrow c'l = c'R\theta = 12 \times 9.15 \times \frac{\pi}{180} \times 89 = 170.6 \text{ kN}$$

$$F = \frac{106.5 + 170.6}{207.9} = 1.33$$

The rigorous method calculations are set out in Fig. 13.20b. With the first approximation:

$$F = \frac{297.5}{207.9} = 1.43$$

This value was obtained by assuming a value for F of 1.5 in the expression:

$$1 + \frac{\sec \alpha}{\left(\frac{\tan \phi' \tan \alpha}{F} \right)}$$

of column (5).

Columns 5 and 6 are now recalculated using $F = 1.43$ and a revised value of F is obtained:

$$F = \frac{295.8}{207.9} = 1.42$$

This is approximately equal to the assumed value of 1.43 and is taken as correct. Thus the factor of safety of the slope is 1.42.

Had the assumed and derived values of F not been approximately equal, the iterative procedure could have been repeated once again to find an improved value of F , as can be demonstrated through the *Example 13.4.xls* spreadsheet.

Example 13.5: Bishop's routine method

Figure 13.21 gives details of the cross-section of an embankment. The soil has the following properties: $\phi' = 35^\circ$, $c' = 10 \text{ kPa}$, $\gamma = 16 \text{ kN/m}^3$.

For the slip circle shown, determine the factor of safety for the following values of r_u : 0.2, 0.4 and 0.6.

Plot the variation of F with r_u .

Solution:

The calculations were based on the rigorous method and are shown in Fig. 13.22 and Fig. 13.23.

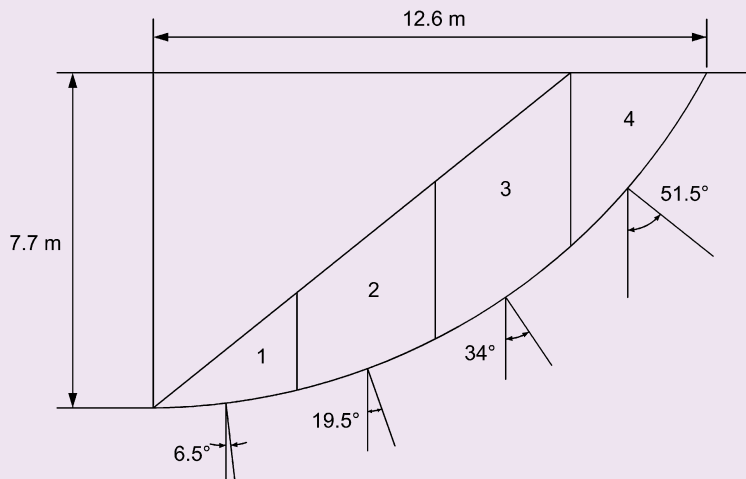


Fig. 13.21 Example 13.5(a).

$r_u = 0.2$

Slice	z (m)	b (m)	W (kN)	α (°)	sin α	(1)	(2)	(3)	(4)	sec α	tan α	(5)		(6)	
						$W \sin \alpha$	c/b	$W(1 - r_u) \times \tan \phi'$	(2) + (3)			$\frac{\sec \alpha}{1 + \frac{\tan \phi' \tan \alpha}{F}}$	(4) × (5)		
												F = 1.5	F = 1.47	F = 1.5	F = 1.47
1	1.00	3.15	50.4	7	0.113	5.7	31.5	28.2	59.7	1.006	0.114	0.956	0.955	57.1	57.0
2	3.08	3.15	155.2	20	0.334	51.8	31.5	87.0	118.5	1.061	0.354	0.910	0.908	107.8	107.5
3	4.00	3.15	201.6	34	0.559	112.7	31.5	112.9	144.4	1.206	0.675	0.917	0.913	132.5	131.8
4	2.70	3.15	136.1	52	0.783	106.5	31.5	76.2	107.7	1.606	1.257	1.012	1.004	109.1	108.2
						$\Sigma 276.8$								$\Sigma 406.5$	404.6

$$F = \frac{406.5}{276.8} = 1.47 \quad F = \frac{404.6}{276.8} = 1.46$$

$r_u = 0.4$

(3)	(4)	(5)		(6)	
$W(1 - r_u) \times \tan \phi'$	(2) + (3)	$\frac{\sec \alpha}{1 + \frac{\tan \phi' \tan \alpha}{F}}$		(4) × (5)	
		F = 1.3	F = 1.17	F = 1.3	F = 1.17
21.2	52.7	0.948	0.942	49.9	49.6
65.2	96.7	0.891	0.875	86.2	84.7
84.7	116.2	0.885	0.859	102.8	99.9
57.2	88.7	0.958	0.917	84.9	81.3
		$\Sigma 323.9$		315.4	

$$F = \frac{323.9}{276.8} = 1.17 \quad F = \frac{315.4}{276.8} = 1.14$$

$r_u = 0.6$

(3)	(4)	(5)		(6)	
$W(1 - r_u) \times \tan \phi'$	(2) + (3)	$\frac{\sec \alpha}{1 + \frac{\tan \phi' \tan \alpha}{F}}$		(4) × (5)	
		F = 1.0	F = 0.86	F = 1.0	F = 0.86
14.1	45.6	0.932	0.921	42.5	42.0
43.5	75.0	0.850	0.823	63.7	61.7
56.5	88.0	0.819	0.778	72.1	68.5
38.1	69.6	0.854	0.793	59.5	55.2
		$\Sigma 237.8$		227.4	

$$F = \frac{237.8}{276.8} = 0.86 \quad F = \frac{227.4}{276.8} = 0.82$$

Fig. 13.22 Example 13.5.

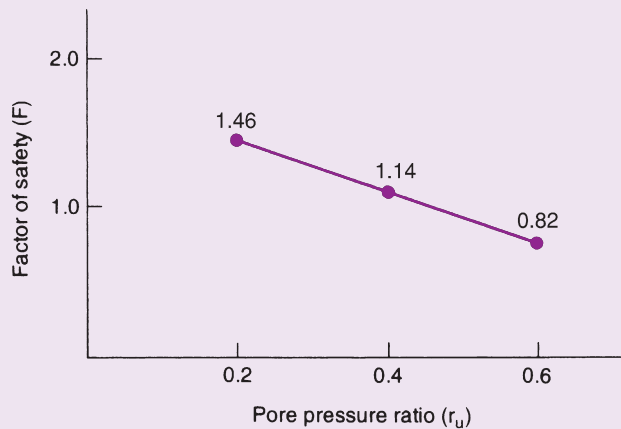


Fig. 13.23 Example 13.5.

13.3 Slope stability design charts

Design charts offer a means of rapidly determining an approximate factor of safety of a homogeneous, regular slope. These slopes rarely exist in reality but nonetheless many embankments and cuttings can be considered as being of this form, if only to offer a simple and rapid, yet very approximate solution to assessing their stability. Once an approximate factor of safety is found from a design chart approach, it would be normal practice for a more rigorous analysis to then be performed to establish a more accurate and reliable measure of the safety of the slope.

13.3.1 Taylor's charts: rapid determination of F for a homogeneous, regular slope

It can be shown that for two similar slopes made from two different soils the ratio $c_m/\gamma H$ is the same for each slope provided that the two soils have the same angle of shearing resistance. The ratio $c_m/\gamma H$ is known as the stability number and is given the symbol N , where c_m = mobilised cohesion, γ = unit weight of soil, and H = vertical height of slope.

For any type of soil, the critical circle always passes through the toe when $\beta > 53^\circ$. In theory, when $\phi = 0^\circ$ (in practice when $\phi < 3^\circ$) and $\beta > 53^\circ$, the critical slip circle can extend to a considerable depth (Fig. 13.7c).

Taylor (1948) prepared two set of curves that relate the stability number to the angle of the slope: the first (Fig. 13.24) is for the general case of a c' - ϕ' soil whilst the second (Fig. 13.25) is for a soil with $\phi = 0^\circ$, a slope angle of less than 53° and with a layer of stiff material or rock at a depth DH below the top of the embankment. D is known as the depth factor and, depending upon its value, the slip circle will either emerge at a distance nH in front of the toe or pass through the toe (using the dashed lines the value of n can be obtained from the curves).

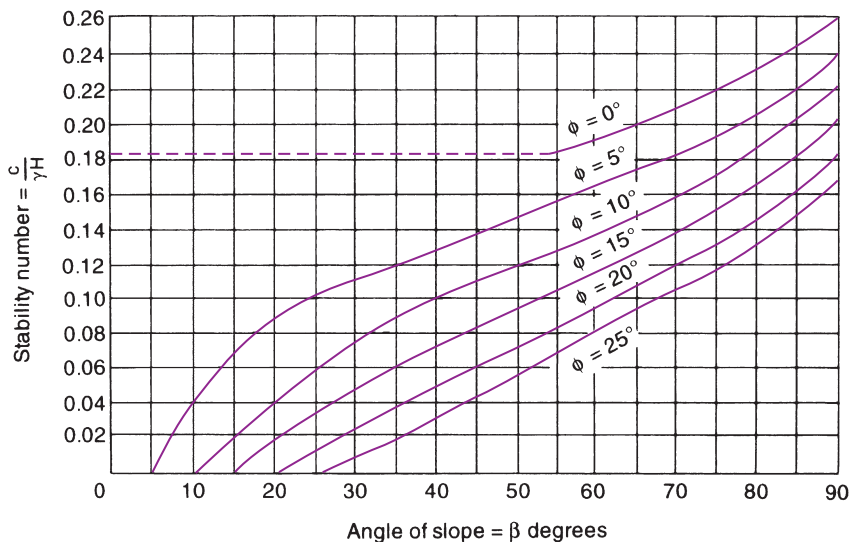


Fig. 13.24 Taylor's curves for rapid assessment of F (for $\phi = 0^\circ$ and $\beta < 53^\circ$, use Fig.13.25).

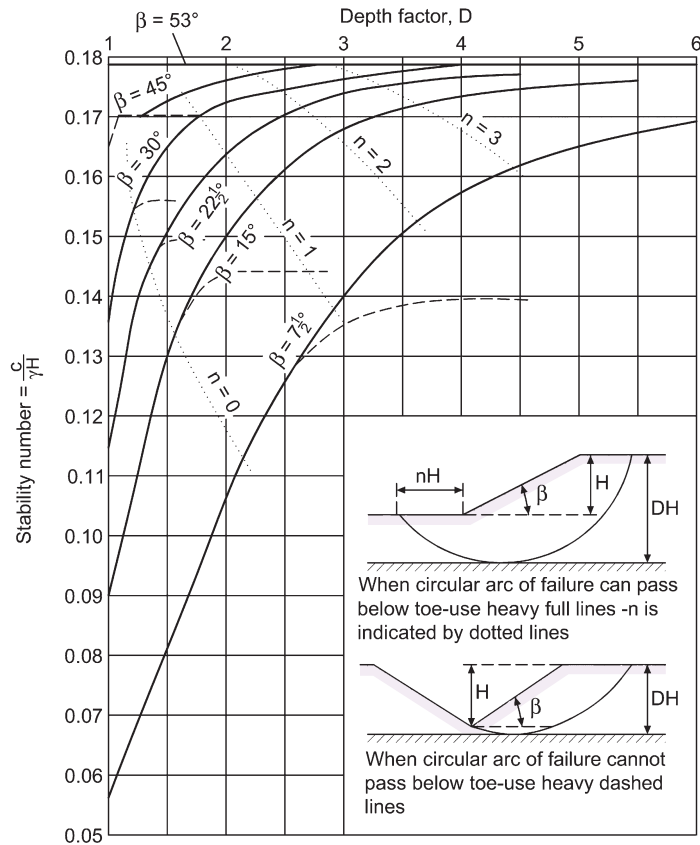


Fig. 13.25 Effect of depth limitation on Taylor's curves (for $\beta < 53^\circ$ and $\phi' \neq 0$, use Fig. 13.24).
 Note: $c'/\gamma H = 0.181$ at $D = \infty$ for all β values.

Example 13.6: Taylor's charts (i)

An embankment has a slope of 1 vertical to 2 horizontal. The properties of the slope are: $c' = 5 \text{ kPa}$, $\phi' = 20^\circ$, $\gamma = 18 \text{ kN/m}^3$ and $H = 11 \text{ m}$.

Using Taylor's charts, determine the F value for the slope.

Solution:

From the charts it is seen that a slope with $\phi' = 20^\circ$ and a slope angle, β of 26.6° has a stability number of 0.017. This means that, if the factor of safety for shearing resistance was unity, c_m , the cohesion which must be mobilised would be found from the expression:

$$\frac{c_m}{\gamma H} = 0.017 \quad \text{i.e.} \quad c_m = 18 \times 11 \times 0.017 = 3.37 \text{ kPa}$$

$$\Rightarrow \text{Factor of safety, with respect to cohesion} = \frac{5}{3.37} = 1.48$$

This is not the factor of safety used in slope stability, which is:

$$F = \frac{\text{Shear strength}}{\text{Disturbing shear}} \quad \text{i.e.} \quad F = \frac{c' + \sigma \tan \phi'}{\tau}$$

This safety factor applies equally to cohesion and to friction. F can be found by successive approximations:

$$F = \frac{c'}{F} + \frac{\sigma \tan \phi'}{F}$$

so try $F = 1.1$:

$$\frac{\tan \phi'}{F} = \frac{0.364}{1.1} = 0.33 = \text{tangent of angle of } 18.3^\circ$$

Use this value of ϕ' to establish a new N value from the charts:

$$N = 0.019$$

$$\Rightarrow c_m = 0.019 \times 18 \times 11 = 3.76 \text{ kPa}$$

$$\Rightarrow F \text{ (for } c') = \frac{5}{3.76} = 1.33$$

Try $F = 1.2$:

$$\frac{\tan \phi'}{F} = \frac{0.364}{1.2} = 0.3 \quad (\phi' = 16.9^\circ)$$

$$\text{From the charts } N = 0.024 \Rightarrow F_{c'} = \frac{5}{4.75} = 1.05$$

Try $F = 1.15$:

$$\frac{\tan \phi'}{F} = \frac{0.364}{1.15} = 0.32 \quad (\phi' = 17.6^\circ)$$

$$\text{From the charts } N = 0.022 \Rightarrow F_{c'} = \frac{5}{4.36} = 1.15 \quad (= F_{\phi'})$$

i.e. Factor of safety of slope = 1.15

Example 13.7: Taylor's charts (ii)

Slope = 1 vertical to 4 horizontal, $c' = 12.5 \text{ kPa}$, $H = 31 \text{ m}$, $\phi' = 20^\circ$, $\gamma = 16 \text{ kN/m}^3$. Find the F value of the slope.

Solution:

Angle of slope = 14° , so obviously the slope is safe as it is less than the angle of shearing resistance. With this case, N from the charts = 0.

The procedure is identical with Example 13.6.

Try $F = 1.5$:

$$\frac{\tan \phi'}{F} = \frac{0.364}{1.5} = 0.24 \quad (\phi' = 13.5^\circ)$$

$$\text{From the charts } N = 0.005 \Rightarrow F_{c'} = \frac{12.5}{0.005 \times 31 \times 16} = 5.04$$

Try $F = 2.0$:

$$\frac{\tan \phi}{F} = \frac{0.364}{2.0} = 0.182 \quad (\phi' = 10.25^\circ)$$

$$\text{From the charts } N = 0.016 \Rightarrow F_{c'} = \frac{12.5}{7.95} = 1.57$$

Try $F = 1.9$:

$$\frac{\tan \phi}{F} = \frac{0.364}{1.9} = 0.192 \quad (\phi' = 11^\circ)$$

$$\text{From the charts } N = 0.013 \Rightarrow F_{c'} = \frac{12.5}{6.45} = 1.94 \quad (\text{acceptable})$$

Factor of safety for slope = 1.9

13.3.2 Bishop & Morgenstern charts: homogeneous slope with a constant pore pressure ratio

If on a trial slip circle the value of F is determined for various values of r_u and the results plotted, a linear relationship is found between F and r_u (see Example 13.5). The usual values of r_u encountered in practice range from 0.0 to 0.7 and it has been established that this linear relationship between F and r_u applies over this range. The factor of safety, F , may therefore be determined from the expression:

$$F = m - nr_u$$

in which m is the factor of safety with respect to total stresses (i.e. when no pore pressures are assumed) and n is the coefficient which represents the effect of the pore pressures on the factor of safety. These terms m and n are known as stability coefficients and were evolved by Bishop and Morgenstern (1960); they depend upon $c'/\gamma H$ (the stability number), $\cot \beta$ (the cotangent of the slope angle, e.g. a 5:1 slope means 5 horizontal to 1 vertical), and ϕ' (the effective angle of shearing resistance).

Bishop and Morgenstern prepared charts of m and n for three sets of $c'/\gamma H$ values (0.0, 0.025, 0.05), which are reproduced at the end of this chapter and cover slopes from 2:1 (26.5°) to 5:1 (11.5°). Extrapolation, within reason, is possible for a case outside this range.

Graphs to cover depth factor values, D , up to 1.5 were produced for $c'/\gamma H = 0.05$, but for the other two cases D values greater than 1.25 were not calculated as such values are not critical in these instances. As in Taylor's analysis, the effect of tension cracks has not been included. O'Connor and Mitchell (1977) extended the work of Bishop and Morgenstern to include $c'/\gamma H = 0.075$ to 0.150.

Determination of an average value for r_u

Generally r_u will not be constant over the cross-section of an embankment and the following procedure can be used to determine an average value.

In Fig. 13.26 the stability of the downstream slope is to be determined. From the centre line of the cross-section, divide the base of the dam into a suitable number of vertical slices (a , b , c , d), and on the centre line of each slice determine r_u values for a series of points as shown. Then the average pore pressure ratio on the centre line of a particular slice is

$$r_u = \frac{h_1 r_{u1} + h_2 r_{u2} + h_3 r_{u3} + \dots}{h_1 + h_2 + h_3 + \dots}$$

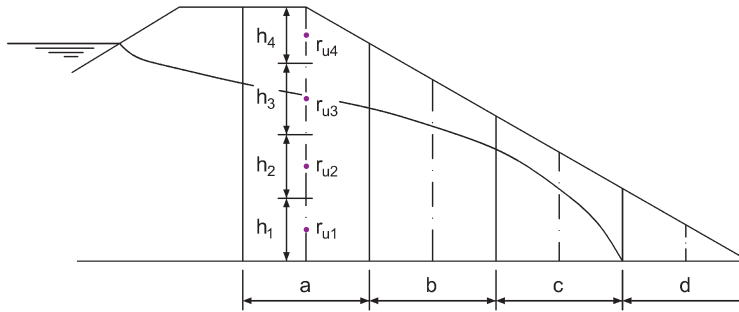


Fig. 13.26 Determination of average r_u value.

The average r_u for whole cross-section

$$= \frac{A_a r_{ua} + A_b r_{ub} + A_c r_{uc} + \dots}{A_a + A_b + A_c + \dots}$$

where A_a = area of the slice a, and r_{ua} = average r_u value in slice a.

Example 13.8: Bishop and Morgenstern's charts (i)

A proposed embankment will have a slope of 1 vertical to 2 horizontal. The properties of the soil are $c' = 9 \text{ kPa}$ and $\phi' = 20^\circ$, and the unit weight of the compacted fill will be $\gamma = 18 \text{ kN/m}^3$. The height of the embankment will be 10m and the average pore pressure ratio is anticipated to be 0.2.

Using Bishop and Morgenstern's charts, determine the factor of safety for the slope.

Solution:

A series of dotted lines labelled r_{ue} are plotted on the charts of n values. If the relevant r_{ue} value is less than the actual design r_u then the set of charts with the next highest depth factor should be used. The procedure therefore becomes as follows.

Calculate $c'/\gamma H$ and, using the chart with $D = 1.0$, check that r_u is less than r_{ue} . If it is, then this is the correct chart to use: if r_u is not less than r_{ue} select the next chart ($D = 1.25$). In the case of $c'/\gamma H = 0.05$, r_{ue} should again be checked and if r_u is greater than this value then the chart for $D = 1.5$ should be used.

$$\frac{c'}{\gamma H} = \frac{9}{18 \times 10} = 0.05$$

Select the chart with $D = 1.0$

$$r_{ue} = 0.64 \Rightarrow \text{this chart is acceptable (since } r_{ue} > r_u \text{)}$$

$$m = 1.39$$

$$n = 1.07$$

$$\Rightarrow F = 1.39 - (0.2 \times 1.07) = 1.18$$

Example 13.9: Bishop and Morgenstern's charts (ii)

Slope = 1 vertical to 4 horizontal, $c' = 7.5 \text{ kPa}$, $\phi' = 20^\circ$, $\gamma = 17.5 \text{ kN/m}^3$, $H = 17 \text{ m}$, $r_u = 0.35$. Find F .

Solution:

$$\frac{c'}{\gamma H} = \frac{7.5}{17.5 \times 17} = 0.025$$

Using $D = 1.0$, $r_{ue} = 0.0$ ($r_{ue} \neq r_u$).

Therefore use chart for $D = 1.25$:

$$m = 1.97$$

$$n = 1.78$$

$$F = 1.97 - (0.35 \times 1.78) = 1.35$$

Example 13.10: Bishop and Morgenstern's charts (iii)

Slope angle = 24° , $c' = 5 \text{ kPa}$, $\gamma = 20 \text{ kN/m}^3$, $\phi' = 30^\circ$, $r_u = 0.3$, $H = 13 \text{ m}$. Find F .

Solution:

Slope (24°) = 1 vertical to 2.25 horizontal

$$\frac{c'}{\gamma H} = \frac{5}{20 \times 13} = 0.019$$

$$\text{Chart } \frac{c'}{\gamma H} = 0.025; D = 1.0$$

$$m = 1.76$$

$$n = 1.68$$

$$F = 1.76 - (0.3 \times 1.68) = 1.26$$

$$\text{Chart } \frac{c'}{\gamma H} = 0.00$$

$$m = 1.3$$

$$n = 1.54$$

$$F = 1.3 - (0.3 \times 1.54) = 0.84$$

The actual F value can be found by interpolation:

$$\begin{aligned} F &= 0.84 + (1.26 - 0.84) \frac{0.019}{0.025} \\ &= 0.84 + 0.32 = 1.16 \end{aligned}$$

Note: It is preferable to calculate the two F values and then interpolate rather than to determine the m and n values by interpolation.

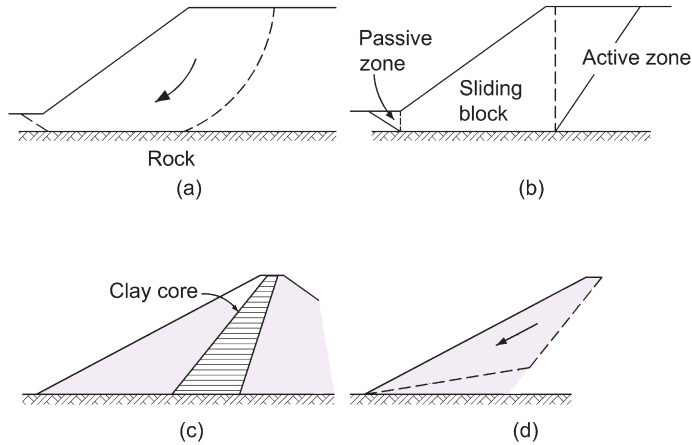


Fig. 13.27 Sliding block or wedge failure.

13.4 Wedge failure

When the potential sliding mass of the soil is bounded by two or three straight lines we have a wedge failure. Wedge failures can be brought about by a variety of geological conditions, and one example is shown in Fig. 13.27a with the design approximation illustrated in Fig. 13.27b.

The form of construction within an earth structure can also dictate that any stability failure will be of a wedge type. One example is that of an earth dam with a sloping impermeable core (Fig. 13.27c). Various wedge failure patterns could be assumed for the purpose of analysis. One such form is illustrated in Fig. 13.27d.

Example 13.11: Wedge failure

The cross-section of a sloping core dam is shown in Fig. 13.28a and a probable form of wedge failure.

Using the suggested failure shape determine the factor of safety of the dam.

Relevant properties: rock fill: $\phi' = 40^\circ$, $\gamma = 18 \text{ kN/m}^3$; core: $c_u = 80 \text{ kPa}$.

Solution:

The forces acting on wedges (1) and (2) are shown in Fig. 13.28b. In the diagram $\phi_m =$ angle of friction mobilised in the rock fill and $c_m =$ cohesion mobilised in the core.

$$T_1 = c_m BE \text{ kN/m run of dam}; \quad T_2 = N_2 \tan \phi_m \text{ kN/m run of dam}$$

The procedure starts by selecting suitable F values and evaluating the corresponding values for ϕ_m and c_m :

$$F = 1.0 \quad c_m = 80 \text{ kPa}; \quad \phi_m = 40^\circ$$

$$F = 1.2 \quad c_m = 66.7 \text{ kPa}; \quad \phi_m = \tan^{-1} \frac{\tan \phi}{1.2} = 35^\circ$$

$$F = 1.5 \quad c_m = 53.3 \text{ kPa}; \quad \phi_m = 29^\circ$$

$$F = 2.0 \quad c_m = 40 \text{ kPa}; \quad \phi_m = 23^\circ$$

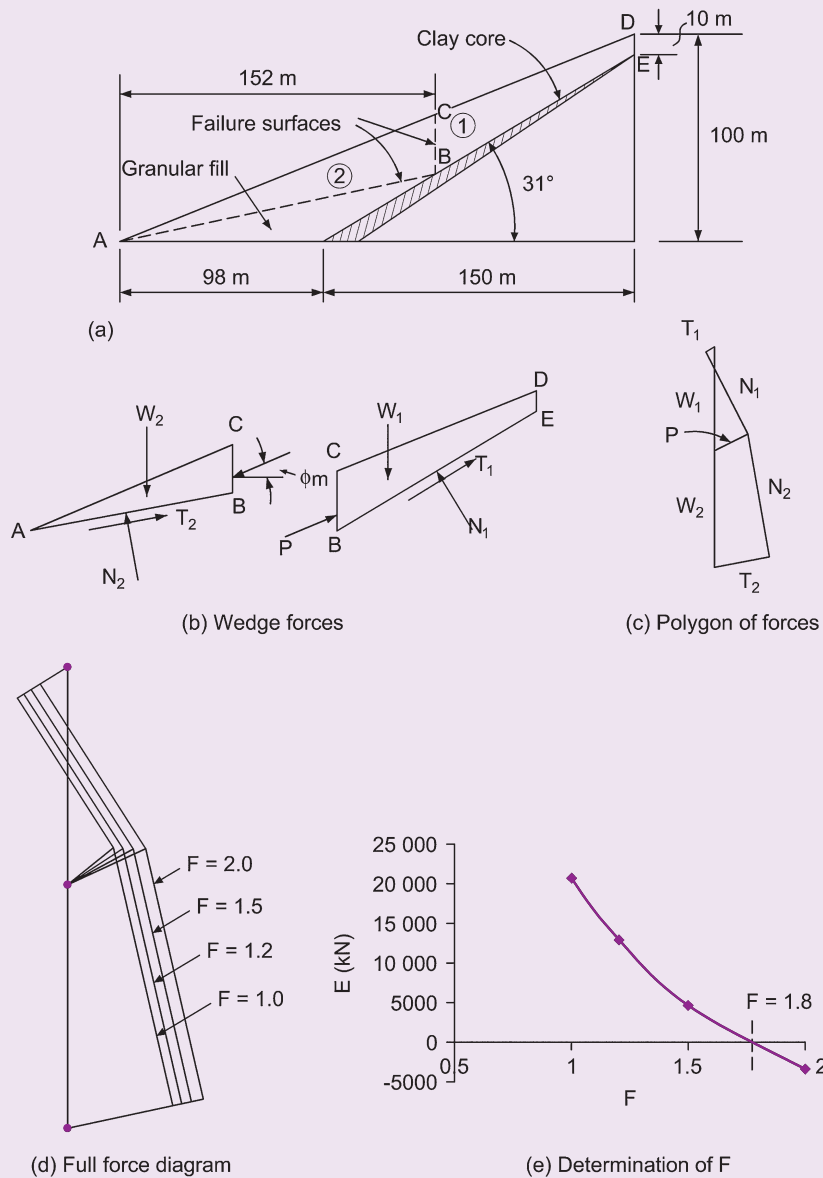


Fig. 13.28 Example 13.11.

For each value of F a polygon of forces for slice (1) is drawn and the force P obtained. Using this value for P the polygon of forces for wedge (2) is now drawn to give the total force diagram shown in Fig. 13.28c.

A typical set of calculations (for $F = 2.0$) is set out below.

$$W_1 = \left(\frac{10 + 29}{2} \right) 96 \times 18 = 33\,696 \text{ kN}$$

$$T_1 = 40 \times 112 = 4480 \text{ kN} \quad (112 \text{ m is the base length of wedge 1})$$

$$W_2 = \frac{29}{2} \times 152 \times 18 = 39\,672 \text{ kN}; \quad \phi_m = 23^\circ$$

As the directions of P and T_2 are known, the value obtained for N_2 will be correct. The error of closure, E , can therefore be assessed by comparing the value of T_2 determined from the force diagram with the value calculated from $N_2 \tan \phi_m$.

The force diagrams for the four chosen values for F are shown superimposed on each other in Fig. 13.28d. The corresponding values of N_2 and T_2 are set out below.

F	N_2 (kN)	T_2 (kN)	$N_2 \tan \phi_m$ (kN)	E (kN)
1.0	42750	15080	35871	20791
1.2	42500	16700	29759	13059
1.5	42250	18800	23420	4620
2.0	41500	21000	17616	-3384

By plotting F against E we see that the value of $E = 0$ when $F = 1.8$. Hence, for the wedge failure surfaces chosen, $F = 1.8$ (Fig. 13.28e).

13.5 Slope stability analysis to Eurocode 7

The principles of Eurocode 7, described in Chapter 5, apply to the assessment of slope stability and the reader is advised to refer back to that chapter whilst studying the following few pages.

The overall stability of slopes is covered in Section 11 of Eurocode 7, and the GEO limit state is the principal state that is considered. The procedure to check overall stability uses the methods described earlier in this chapter and applies to both the undrained and drained states. Partial factors are applied to the characteristic values of the soils shear strength parameters, and to the representative values of the actions (e.g. weights of slices) to obtain the design values.

For circular failure surfaces, during a method of slices analysis, the weight of a single slice can contribute to the disturbing moment or it may contribute to the restoring moment, as illustrated by Example 13.4 (Fig. 13.19). In that example, slices 2–5 contribute to the disturbing moment and slice 1 contributes to the restoring moment. This follows from the particular choice of position of the centre of the slip circle: had the centre of the slip circle been in a different location the directions of the moment of each slice might have been different.

As explained in Chapter 5, an action is considered as either favourable or unfavourable. However, as we have just seen, the choice of the position of the centre of the circle influences whether the weight of a slice would be favourable or unfavourable and because of this it is impossible to know from the outset whether an action will be favourable or unfavourable. When using Design Approach 1 Combination 1, the partial factors (see Table 5.1) are different for favourable and unfavourable actions, whereas for Combination 2 the partial factors are the same ($=1.0$). To this end, when using Design Approach 1 for circular failure surfaces, Combination 2 will almost always be used to check the overall stability.

The GEO limit state requirement is satisfied if the design effect of the actions (E_d) is less than or equal to the design resistance (R_d), i.e. $E_d \leq R_d$. Here E_d is the design value of the disturbing moment (or force, for planar failure surfaces) and R_d is the design value of the restoring moment (or force). By representing the ratio of the restoring moment (or force) to the disturbing moment (or force) as the over-design factor, Γ , it is seen that the limit state requirement is satisfied if $\Gamma \geq 1$.

Example 13.12: Taylor's charts to Eurocode 7

Using Taylor's charts, determine the margin of safety of a proposed motorway cutting slope, as detailed below, using the procedures of Eurocode 7 GEO limit state Design Approaches 1 and 2 for both the short- and the long-term conditions.

The slope will be constructed from a regular, homogeneous clay deposit and will have the following properties:

Height of slope, $H = 15$ m

Angle of slope, $\beta = 21^\circ$

Weight density, $\gamma_k = 20$ kN/m³

Undrained shear strength, $c_{u,k} = 90$ kPa

Effective cohesion, $c'_k = 5$ kPa

Effective angle of shearing resistance $\phi'_k = 25^\circ$

Solution:

As seen in Section 13.3.1, when using Taylor's chart, the factor of safety applied to each component of the shear strength (c' and $\tan \phi'$) is the same. However, when applying partial factors of safety in a Eurocode 7 design, different factors are applied to these two components and thus the use of Taylor's charts in a Eurocode 7 design is slightly more complex. The stability number is calculated using the design values of shear strength, together with the design weight of the slope (i.e. the permanent, unfavourable design action acting).

(a) Design Approach 1

1. Combination 1 (partial factor sets A1 + M1 + R1)

From Table 5.1: $\gamma_G; \text{unfav} = 1.35$; $\gamma_{cu} = 1.0$; $\gamma_c = 1.0$; $\gamma_{\phi'} = 1.0$;

$$\text{Design material properties: } c_{u,d} = \frac{c_u}{\gamma_{cu}} = \frac{90}{1} = 90 \text{ kPa}$$

$$c'_d = \frac{c'}{\gamma_c} = \frac{5}{1} = 5 \text{ kPa}$$

$$\phi'_d = \tan^{-1} \left(\frac{\tan \phi'}{\gamma_{\phi'}} \right) = 25^\circ$$

$$\text{Short-term: } N_d = \frac{c_{u,d}}{H \times \gamma \times \gamma_G} = \frac{90}{15 \times 20 \times 1.35} = 0.222$$

From Fig. 13.24: For $N = 0.222$, $\phi_{u,d} = 0^\circ$:

maximum achievable slope angle, $\beta = 77^\circ$

i.e. the GEO limit state requirement is satisfied since $77^\circ > 21^\circ$

$$\text{Long-term: } N_d = \frac{c'_d}{H \times \gamma \times \gamma_G} = \frac{5}{15 \times 20 \times 1.35} = 0.012$$

From Fig. 13.24: For $N = 0.012$, $\phi'_d = 25^\circ$:

maximum achievable slope angle, $\beta = 32^\circ$

i.e. the GEO limit state requirement is satisfied since $32^\circ > 21^\circ$

2. Combination 2 (partial factor sets A2 + M2 + R1)

From Table 5.1: $\gamma_{G; \text{unfav}} = 1.0$; $\gamma_{cu} = 1.4$; $\gamma_{c'} = 1.25$; $\gamma_{\phi'} = 1.25$.

Design material properties:

$$c_{u,d} = \frac{c_u}{\gamma_{cu}} = \frac{90}{1.4} = 64.3 \text{ kPa}; c'_d = \frac{c'}{\gamma_{c'}} = \frac{5}{1.25} = 4 \text{ kPa}; \phi'_d = \tan^{-1}\left(\frac{\tan \phi'}{\gamma_{\phi'}}\right) = 20.5^\circ$$

$$\text{Short-term: } N_d = \frac{c_{u,d}}{H \times \gamma \times \gamma_G} = \frac{64.3}{15 \times 20 \times 1.0} = 0.214$$

From Fig. 13.24: For $N = 0.214$, $\phi_{u,d} = 0^\circ$:

maximum achievable slope angle, $\beta = 72^\circ$

i.e. the GEO limit state requirement is satisfied since $72^\circ > 21^\circ$

$$\text{Long-term: } N_d = \frac{c'_d}{H \times \gamma \times \gamma_G} = \frac{4}{15 \times 20 \times 1.0} = 0.013$$

From Fig. 13.24: For $N = 0.013$, $\phi'_d = 20.5^\circ$:

maximum achievable slope angle, $\beta = 25^\circ$

i.e. the GEO limit state requirement is satisfied since $25^\circ > 21^\circ$

(b) Design Approach 2

(Partial factor sets A1 + M1 + R2)

From Table 5.1: $\gamma_{G; \text{unfav}} = 1.35$; $\gamma_{cu} = 1.0$; $\gamma_{c'} = 1.0$; $\gamma_{\phi'} = 1.0$; $\gamma_{Rh} = 1.1$.

Design material properties:

$$c_{u,d} = \frac{c_u}{\gamma_{cu}} = \frac{90}{1} = 90 \text{ kPa}; c'_d = \frac{c'}{\gamma_{c'}} = \frac{5}{1} = 5 \text{ kPa}; \phi'_d = \tan^{-1}\left(\frac{\tan \phi'}{\gamma_{\phi'}}\right) = 25^\circ$$

In Design Approach 2, the design resistance is obtained by reducing the characteristic resistance by the relevant partial factor on resistance (see Section 5.4.7 and EN1977-1:2004, Annex B). In this case, it is clear that the partial factor on sliding resistance is to be used.

$$\text{Short-term: } N_d = \frac{c_{u,d}}{H \times \gamma \times \gamma_G \times \gamma_{Rh}} = \frac{90.0}{15 \times 20 \times 1.35 \times 1.1} = 0.202$$

From Fig. 13.24: For $N = 0.202$, $\phi_{u,d} = 0^\circ$:

maximum achievable slope angle, $\beta = 65^\circ$

i.e. the GEO limit state requirement is satisfied since $65^\circ > 21^\circ$

$$\text{Long-term: } N_d = \frac{c'_d}{H \times \gamma \times \gamma_G \times \gamma_{Rh}} = \frac{5}{15 \times 20 \times 1.35 \times 1.1} = 0.011$$

From Fig. 13.24: For $N = 0.011$, $\phi'_d = 25^\circ$:

maximum achievable slope angle, $\beta = 32^\circ$

i.e. the GEO limit state requirement is satisfied since $32^\circ > 21^\circ$

It is seen that the proposed design satisfies the requirements of both Design Approach 1 and Design Approach 2.

Example 13.13: GEO limit state (rotational failure)

Check the GEO limit state for the earth dam described in Example 13.4 using Design Approach 1, Combination 2.

Solution:

From Table 5.1, the relevant partial factors are: $\gamma_{\phi'} = 1.25$; and $\gamma_{c'} = 1.25$.

The design shear strength parameters c'_d and ϕ'_d are determined:

$$c'_d = \frac{c'}{\gamma_{c'}} = \frac{12}{1.25} = 9.6 \text{ kPa}$$

$$\phi'_d = \tan^{-1} \left(\frac{\tan \phi'}{\gamma_{\phi'}} \right) = \tan^{-1} \left(\frac{\tan 20^\circ}{1.25} \right) = 16.2^\circ$$

(a) *Conventional method:* Using c'_d and ϕ'_d the conventional analysis is performed and the calculations are set out in Fig. 13.29.

$$c'_d \times l = 9.6 \times 9.15 \times \frac{\pi}{180} \times 89 = 136.4 \text{ kN}$$

$$\text{Over-design factor, } \Gamma = \frac{85.2 + 136.4}{207.9} = 1.07$$

Since $\Gamma > 1$, the GEO limit state requirement is satisfied.

(b) *Rigorous method:* The calculations are set out in Fig. 13.30.

$$\text{Over-design factor, } \Gamma = \frac{\sum(6)}{\sum(1)} = \frac{237.3}{207.9} = 1.14$$

that is, the GEO limit state requirement is satisfied.

Slice	z (m)	b (m)	W (kN)	α ($^\circ$)	cos α	sec α	r_w (m)	r_u	cos $\alpha - r_u \sec \alpha$	$W(\cos \alpha - r_u \sec \alpha) \times \tan \phi'$	sin α	W(sin α)
1	0.95	2.35	42.9	-10	0.985	1.015	0.654	0.352	0.985	12.3	-0.174	-7.4
2	2.44	2.35	110.1	4	0.998	1.002	1.958	0.410	0.587	18.8	0.070	7.7
3	3.32	2.35	149.8	20	0.940	1.064	2.440	0.376	0.540	23.6	0.342	51.2
4	3.50	2.35	157.9	35	0.819	1.221	2.020	0.295	0.459	21.1	0.574	90.6
5	1.74	2.35	78.5	57	0.545	1.836	0.246	0.072	0.412	9.4	0.839	65.8
										$\Sigma 85.2$		$\Sigma 207.9$

Fig. 13.29 Example 13.13: Conventional method.

Slice	z (m)	b (m)	W (kN)	α (°)	sin α	W sin α	c'b	$W(1 - r_u) \times \tan \phi'$	(2) + (3)	sec α	tan α	(5)		(6)	
												$\frac{\sec \alpha}{1 + \frac{\tan \phi' \tan \alpha}{F}}$		(4) × (5)	
												F = 1.5	F = 1.17	F = 1.5	F = 1.17
1	0.95	2.35	42.9	-10	-0.17	-7.4	22.6	8.1	30.7	1.015	-0.18	1.051	1.062	32.2	32.5
2	2.44	2.35	110.1	4	0.07	7.7	22.6	18.9	41.5	1.002	0.07	0.989	0.985	41.0	40.9
3	3.32	2.35	149.8	20	0.34	51.2	22.6	27.2	49.8	1.064	0.36	0.994	0.976	49.5	48.6
4	3.50	2.35	157.9	35	0.57	90.6	22.6	32.4	55.0	1.221	0.70	1.075	1.040	59.1	57.2
5	1.74	2.35	78.5	57	0.84	65.8	22.6	21.2	43.8	1.836	1.54	1.414	1.328	61.9	58.1
$\Sigma 207.9$												$\Sigma 243.7$		237.3	

Fig. 13.30 Example 13.13: Rigorous method.

Example 13.14: Geo limit state (planar failure)

Consider an infinite slope, constructed at an angle of $\beta = 20^\circ$ to the horizontal using the granular soil described in Example 13.1. Check the GEO limit state against failure along a plane parallel and 2m beneath the surface of the slope, using Design Approach 1.

Solution:

(i) *Combination 1 (partial factor sets A1 + M1 + R1)*

From Table 5.1, the relevant partial factors are: $\gamma_{G,unfav} = 1.35$; $\gamma_{\phi'} = 1.0$.

From Section 13.1 it was seen that the sliding force, per unit area = $W \sin \beta$

$$\begin{aligned} \text{Design sliding force per unit area, } G_d &= \gamma \times z \times \sin \beta \times \gamma_{G,unfav} \\ &= 18 \times 2 \times \sin 20^\circ \times 1.35 \\ &= 16.6 \text{ kPa} \end{aligned}$$

No other actions contribute to the sliding force so $E_d = G_d = 16.6 \text{ kPa}$.

$$\phi'_d = \tan^{-1} \left(\frac{\tan \phi'}{\gamma_{\phi'}} \right) = \tan^{-1} \left(\frac{\tan 30^\circ}{1.0} \right) = 30^\circ$$

$$\begin{aligned} \text{Design resisting force per unit area, } R_d &= \gamma \times z \times \cos \beta \times \tan \phi'_d \\ &= 18 \times 2 \times \cos 20^\circ \times \tan 30^\circ \\ &= 19.5 \text{ kPa} \end{aligned}$$

Therefore the limit state requirement is satisfied since $E_d \leq R_d$.

(ii) *Combination 2 (partial factor sets A2 + M2 + R1)*

From Table 5.1: $\gamma_{G,unfav} = 1.0$; $\gamma_{\phi'} = 1.25$.

$$\begin{aligned} \text{Design sliding force per unit area, } G_d &= \gamma \times z \times \sin \beta \times \gamma_{G,unfav} \\ &= 18 \times 2 \times \sin 20^\circ \times 1.0 \\ &= 12.3 \text{ kPa} \end{aligned}$$

that is, $E_d = 12.3 \text{ kPa}$.

$$\phi'_d = \tan^{-1} \left(\frac{\tan \phi'}{\gamma_{\phi'}} \right) = \tan^{-1} \left(\frac{\tan 30^\circ}{1.25} \right) = 24.8^\circ$$

$$\begin{aligned} \text{Design resisting force per unit area, } R_d &= \gamma \times z \times \cos \beta \times \tan \phi'_d \\ &= 18 \times 2 \times \cos 20^\circ \times \tan 24.8^\circ \\ &= 15.6 \text{ kPa} \end{aligned}$$

Once again, the limit state requirement is satisfied since $E_d \leq R_d$.



Exercises

Exercise 13.1

A proposed cutting is to have the dimensions shown in Fig. 13.31. The soil has the following properties: $\phi' = 15^\circ$, $c' = 13.5 \text{ kPa}$, $\gamma = 19.3 \text{ kN/m}^3$.

Determine the factor of safety against slipping for the slip circle shown (i) ignoring tension cracks and (ii) allowing for a tension crack.

Answer (i) 1.7, (ii) 1.6

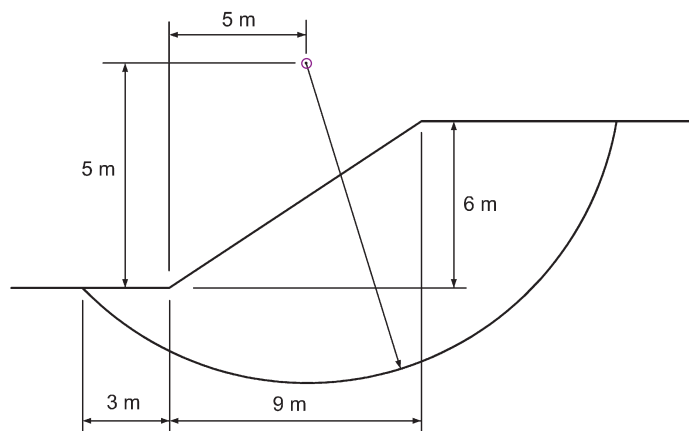


Fig. 13.31 Exercise 13.1.

Exercise 13.2

Investigate the stability of the embankment shown in Fig. 13.32. The embankment consists of granular fill placed upon a deep deposit of clay. Both soils have a bulk

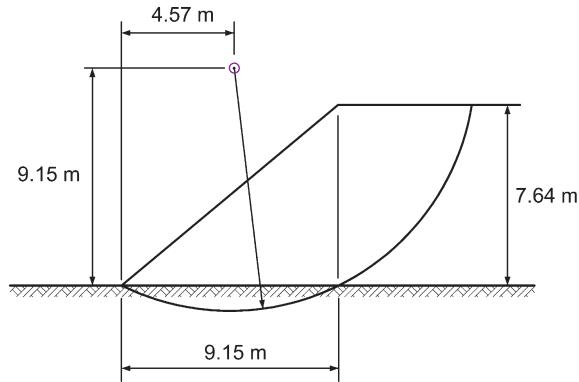


Fig. 13.32 Exercise 13.2.

unit weight of 19.3 kN/m^3 . The fill has $c' = 7.2 \text{ kPa}$ and $\phi' = 30^\circ$, whilst the clay soil has $c_u = 32.5 \text{ kPa}$.

Analyse the slip circle shown (ignore tension cracks).

Answer $F = 1.2$

Exercise 13.3

The surface of a granular soil mass is inclined at 25° to the horizontal. The soil is saturated throughout with a water content of 15.8%, particle specific gravity of 2.65 and an effective angle of shearing resistance of 38° .

At a depth of 1.83 m water is seeping through the soil parallel to the surface.

Determine the factor of safety against slipping on a plane parallel to the surface of the soil at a vertical depth of 3.05 m below the surface.

Answer 1.37

What would be the factor of safety for the same plane if the level of the seeping water lifted up to the surface of the soil?

Answer 0.91

Exercise 13.4

Using Taylor's curves, determine the factor of safety for the following slopes (assume $D = 1.0$):

$$H = 30.5 \text{ m}, \beta = 40^\circ, c' = 10.8 \text{ kPa}, \phi' = 25^\circ, \gamma = 14.4 \text{ kN/m}^3$$

Answer Approximately 0.95

$$H = 15.25 \text{ m}, \beta = 20^\circ, c_u = 24.0 \text{ kPa}, \gamma = 19.3 \text{ kN/m}^3$$

Answer 0.8

$$H = 22.8 \text{ m}, \beta = 30^\circ, c' = 9.6 \text{ kPa}, \phi' = 25^\circ, \gamma = 16.1 \text{ kN/m}^3$$

Answer 1.2

Exercise 13.5

During the analysis of a trial slip circle on a soil slope the rotating mass of the soil was divided into five vertical slices as shown in Fig. 13.33. The position of the GWT is also shown.

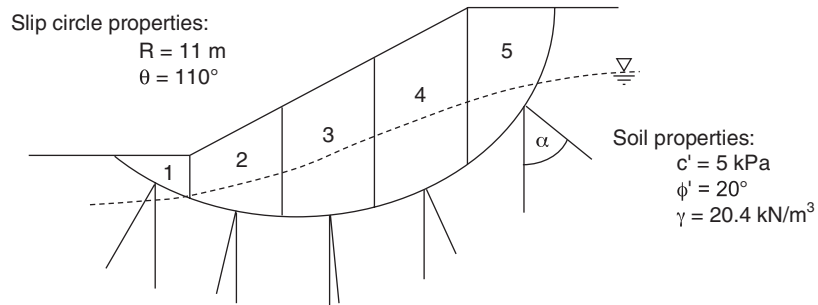


Fig. 13.33 Exercise 13.5.

The following measurements were made:

Slice no.	b (m)	z (m)	h_w (m)	α (degrees)
1	2.8	1.0	0	-20
2	3.4	3.0	0.8	-12
3	3.4	5.0	2.0	4
4	3.4	6.0	2.4	18
5	3.4	3.4	0.6	48

Determine the factor of safety of the slope using Bishop's conventional method of analysis.

Answer 1.70

Exercise 13.6

In the stability analysis of an earth embankment the slip circle shown in Fig. 13.34 was used and the following figures obtained:

Slice no.	Breadth b (m)	Weight W (kN)	α (degrees)
1	5.65	372	-26
2	5.65	656	-7
3	5.65	1070	12
4	5.65	1220	30
5	5.65	686	54

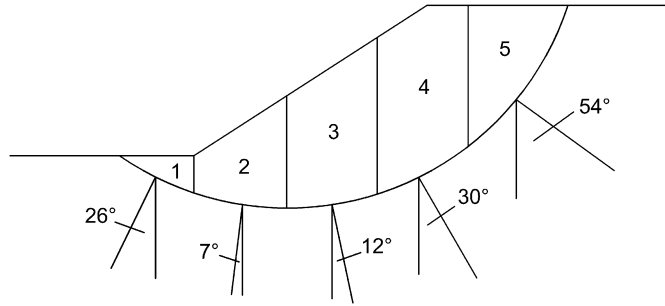


Fig. 13.34 Exercise 13.6.

With the values, and using the conventional method, determine the safety factor of the slope at the end of construction assuming the pore pressure ratio to be 0.4 and the cohesion of soil and the angle of shearing resistance (with regard to effective stresses) to be 10 kPa and 30°, respectively. The radius of the slip circle was 18.8 m and the angle subtended at the centre of the circle was 100°.

Answer 1.12

Exercise 13.7

Using the slip circle shown in Fig. 13.35, determine the F values for $r_u = 0.4, 0.6$ and 0.8. Plot r_u against F. $\gamma = 21 \text{ kN/m}^3, c' = 5 \text{ kPa}, \phi' = 37.5^\circ$.

Answer By rigorous method

F	1.3	0.8	0.4
r_u	0.4	0.6	0.8

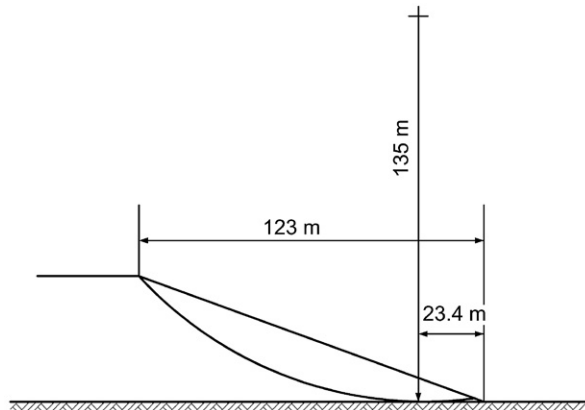


Fig. 13.35 Exercise 13.7.

Exercise 13.8

Using Bishop and Morgenstern's charts, determine the factors of safety for the following slopes:

(i) $r_u = 0.5$, $c' = 6.8 \text{ kPa}$, $\phi' = 40^\circ$, $\gamma = 18 \text{ kN/m}^3$, $H = 15 \text{ m}$, slope = 3:1.

Answer 1.6

(ii) $r_u = 0.3$, $c' = 3 \text{ kPa}$, $\phi' = 39^\circ$, $\gamma = 19 \text{ kN/m}^3$, $H = 22 \text{ m}$, slope = 2:1.

Answer 1.19

(iii) $r_u = 0.5$, $c' = 20 \text{ kPa}$, $\gamma = 17.7 \text{ kN/m}^3$, $\phi' = 25^\circ$, $H = 25 \text{ m}$, angle of slope = 20° .

Answer 1.2

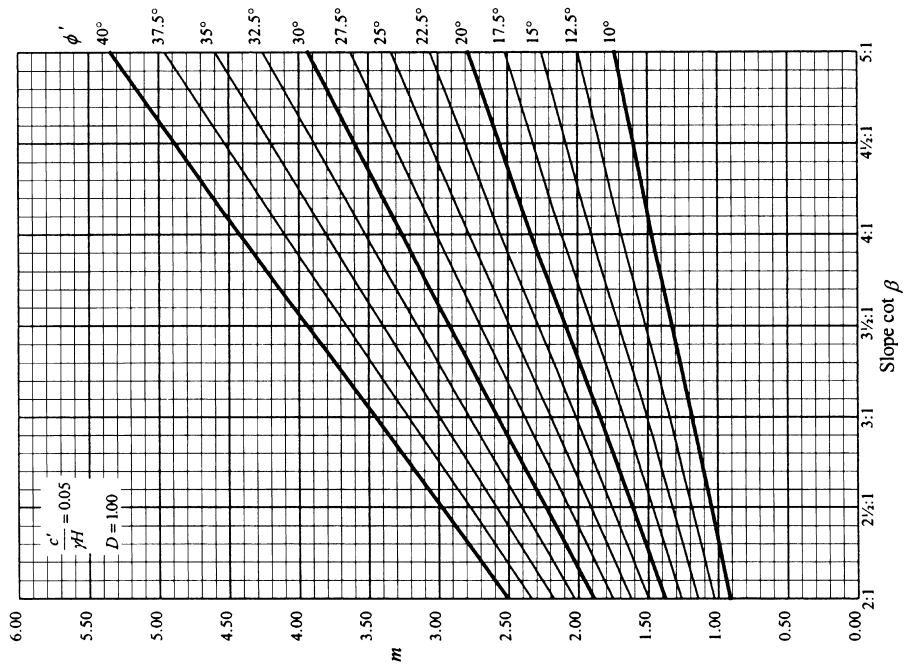
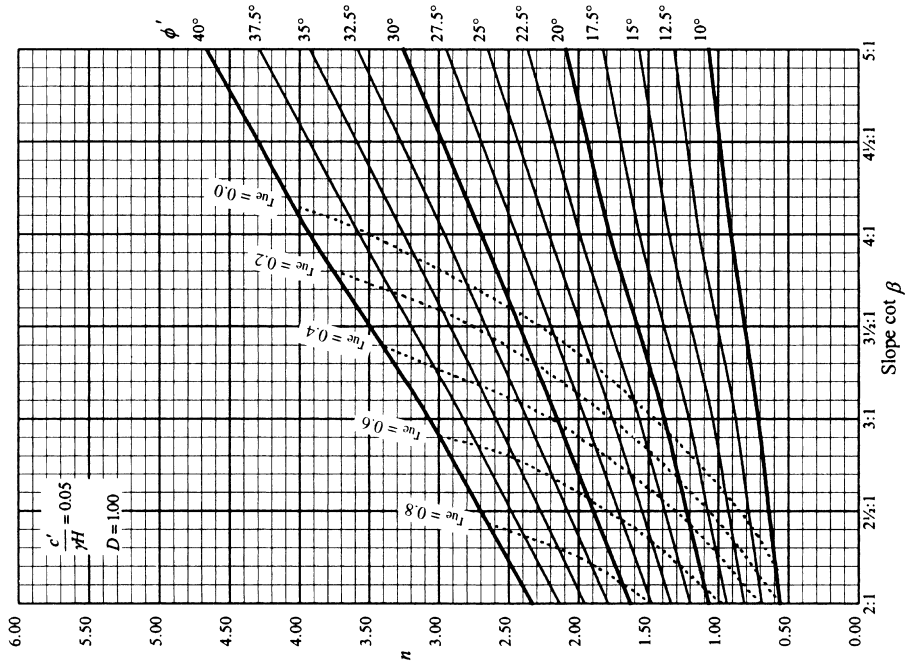
Exercise 13.9

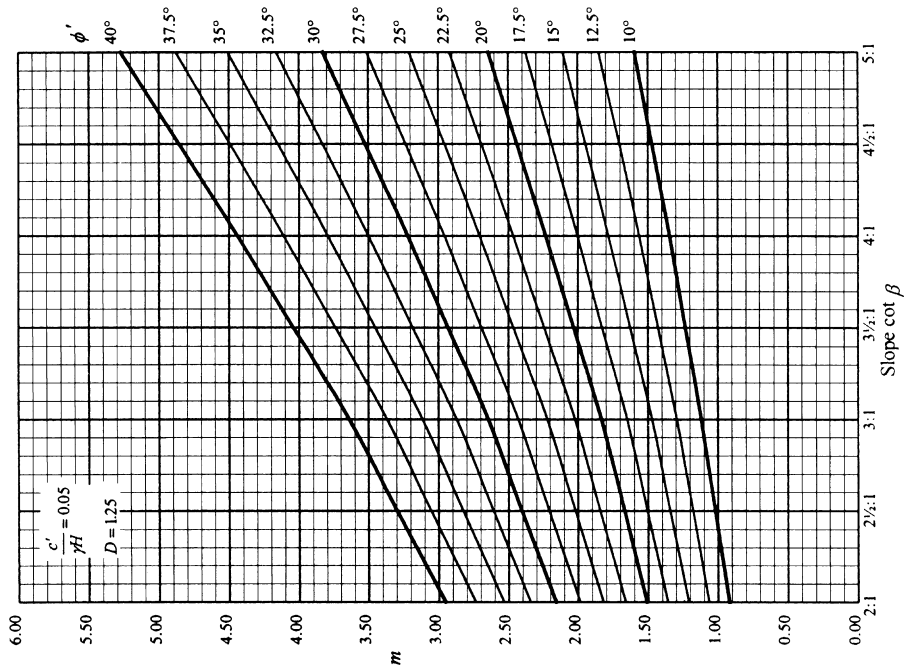
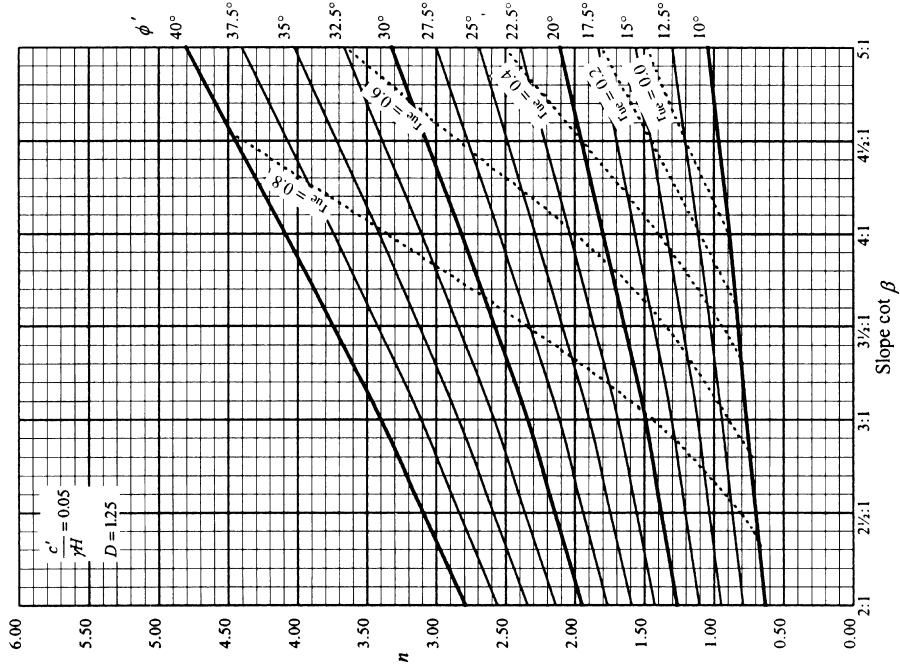
Check the GEO limit state requirement for stability for the embankment described in Exercise 13.6 using Eurocode 7 Design Approach 1, Combination 2.

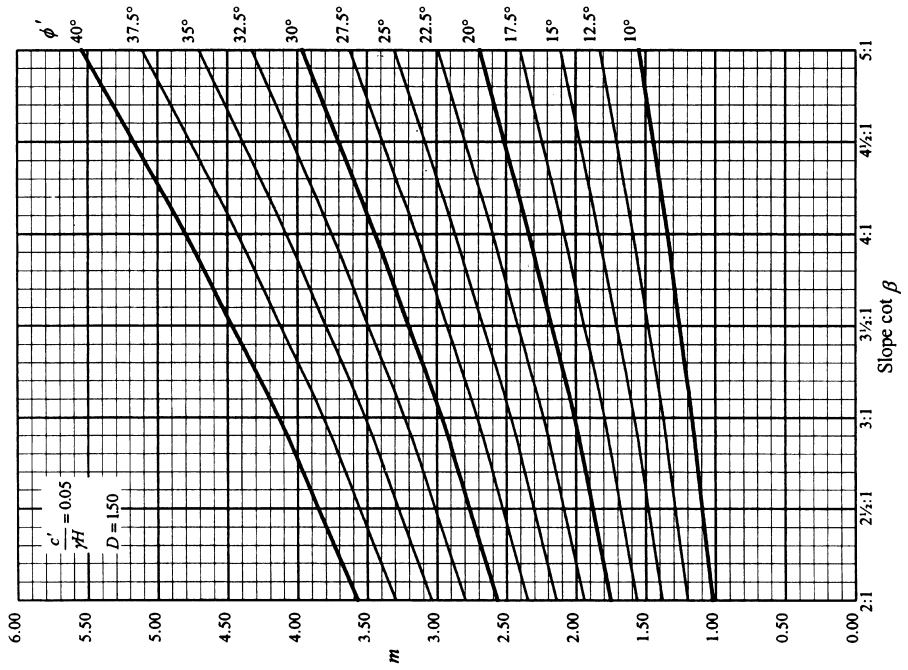
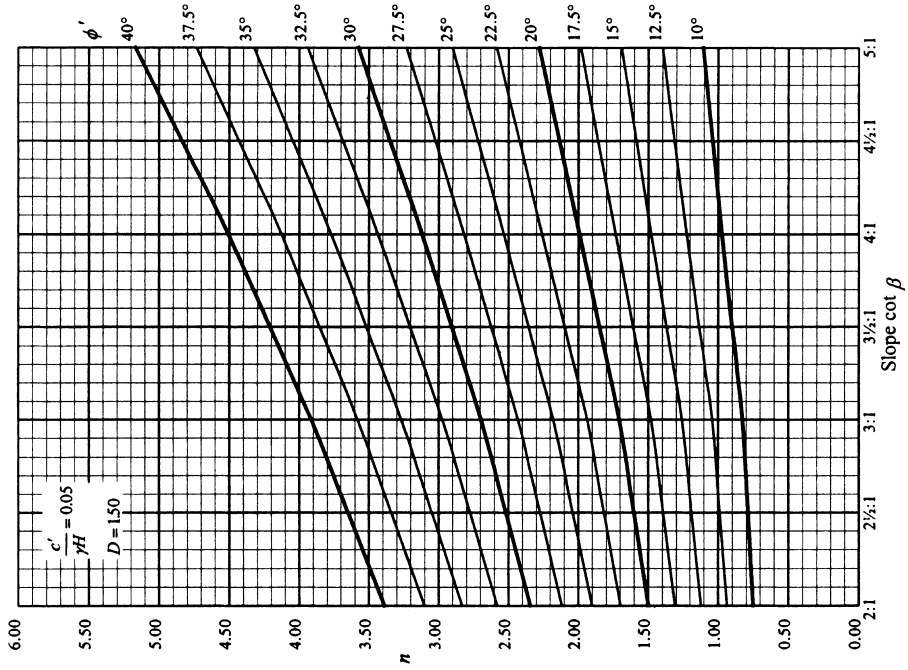
Answer $\Gamma = 0.9$

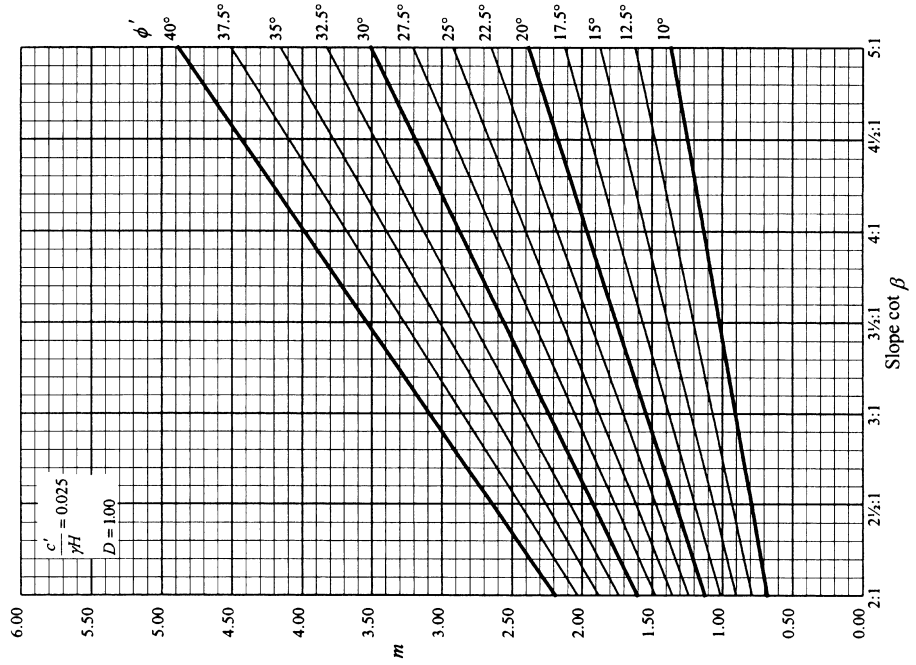
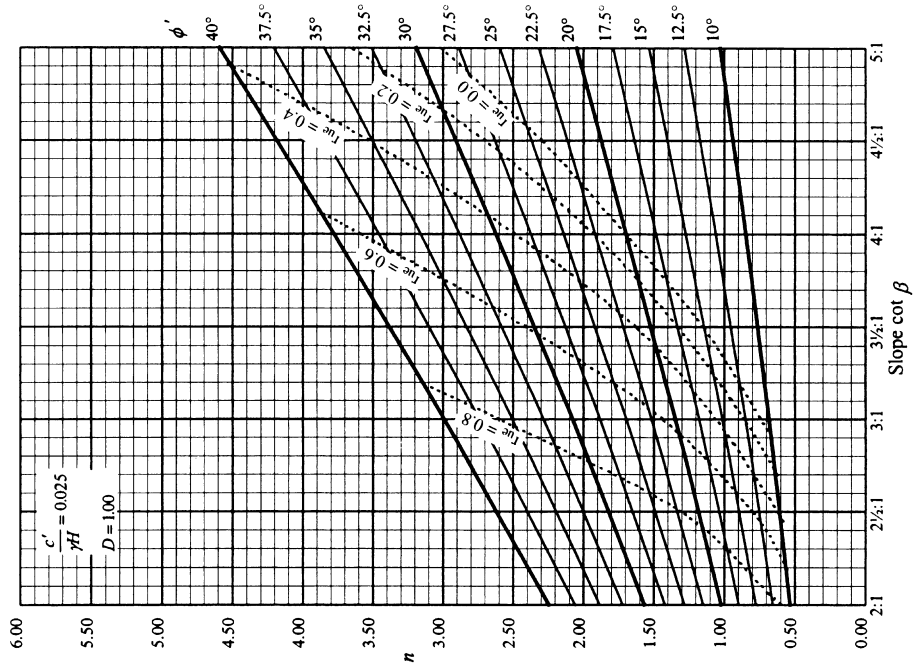
Stability coefficients for earth slopes

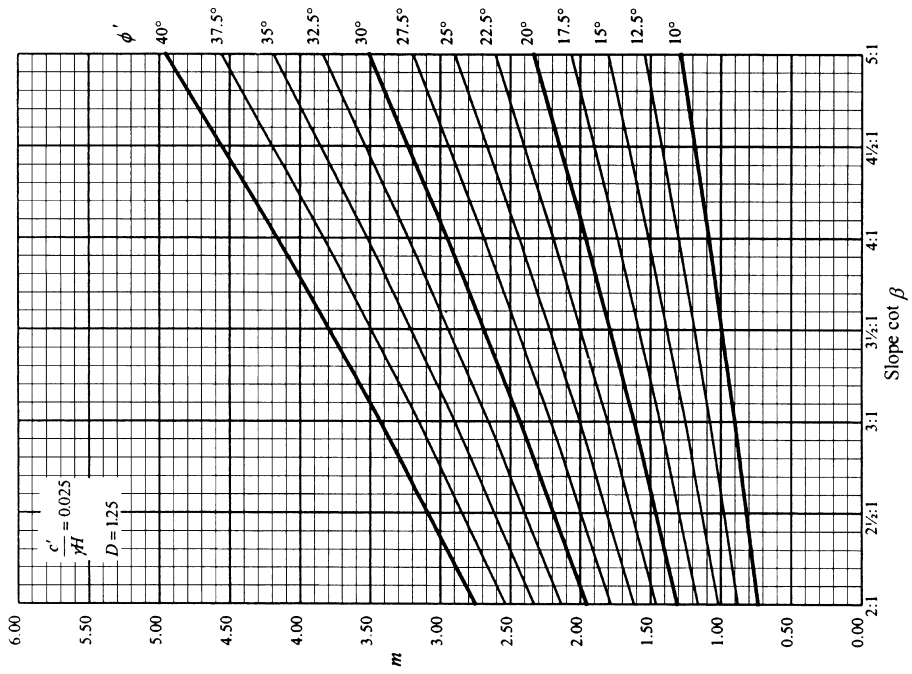
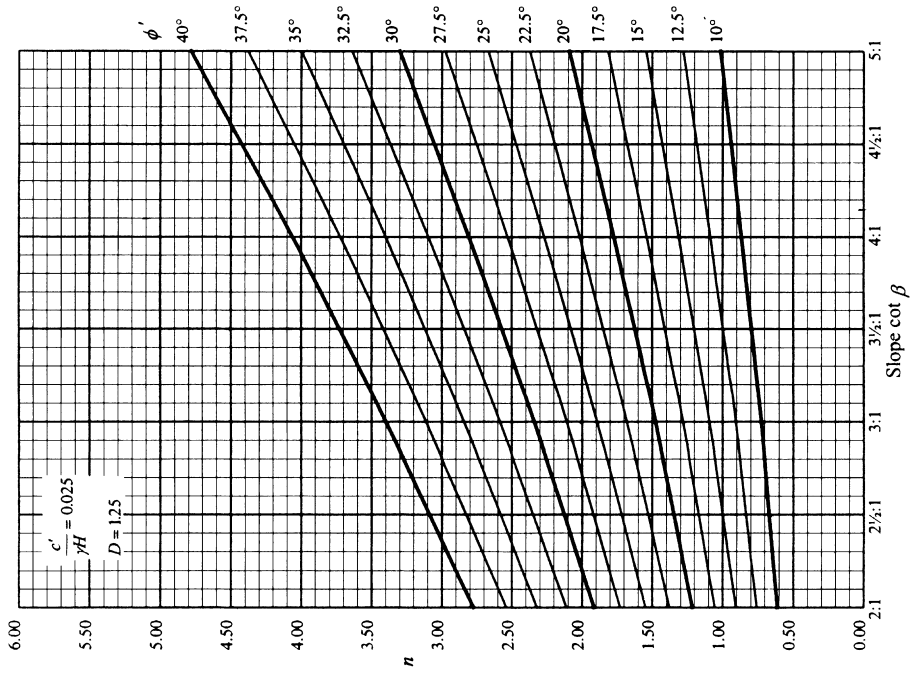
Adapted from originals by A. W. Bishop and N. Morgenstern.

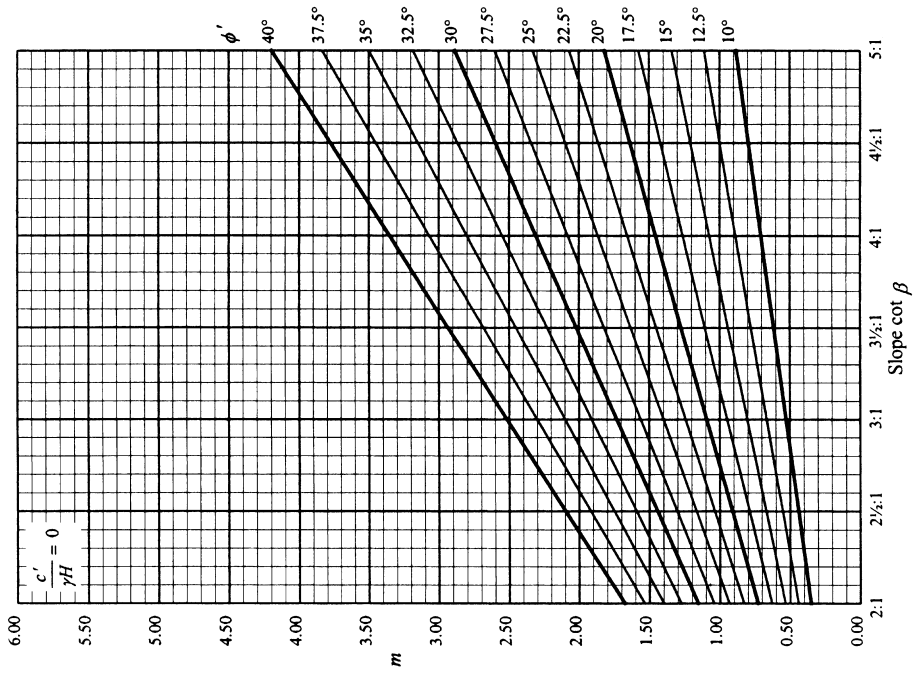
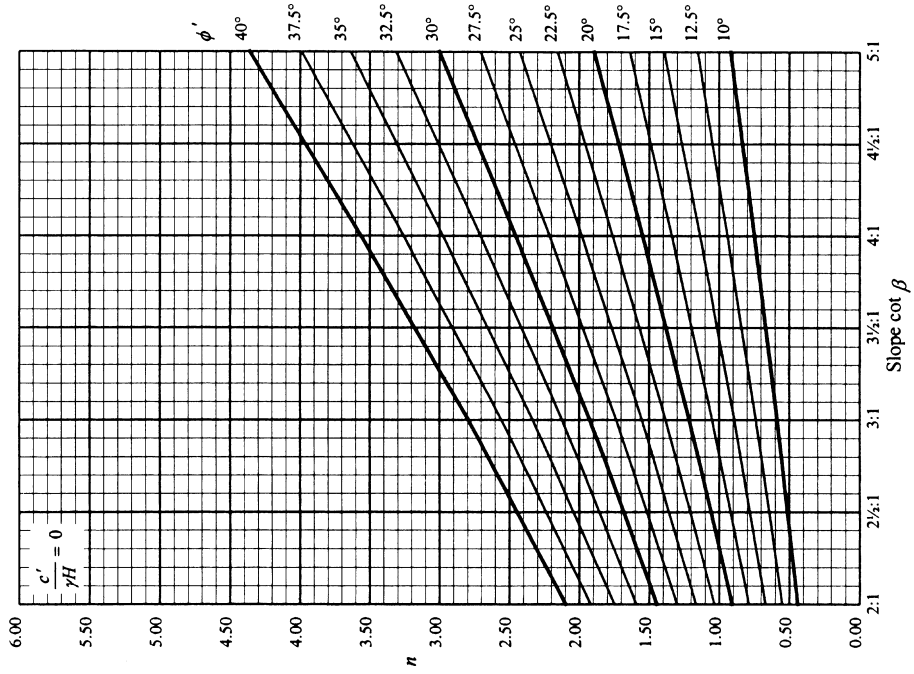












Chapter 14

Compaction and Soil Mechanics Aspects of Highway Design

Soil compaction is extensively employed in the construction of embankments and in strengthening the subgrades of roads and runways. The purpose of compaction is to reduce the volume of the soil by mechanical means thus reducing its permeability and compressibility and increasing its shear strength. By applying mechanical energy to the soil, the solid particles are packed together, by the expulsion of air. This results in a reduction of void ratio and an increase in the soil density.

The compaction of a soil, measured in terms of dry density, is a function of moisture content, compactive effort and the nature of the soil. Laboratory compaction tests are used to determine the relationship between the dry density, ρ_{ds} , and water content, w . For a given compactive effort, the maximum dry density for a soil occurs at the soil's optimum moisture content.

14.1 Field compaction of soils

The compaction plant used to compact wide areas of subgrade or placed fill are almost always rollers, of which there are several forms. These can be categorised in terms of total mass and the effective depth of soil which they can compact in a single passing. Obviously the greater the mass of a roller, the greater its compactive effort and the static mass per metre width of roller is defined as the total mass on the roller divided by its width. Where a roller has more than one axle the machine's mass category is determined using the roller which gives the greatest value of mass per unit width.

Smooth wheeled roller

Probably the most commonly used roller in the world is the smooth wheeled roller. It consists of hollow steel drums so that its weight distribution can be altered by the addition of ballast (sand or water) to the rollers. These rollers vary in mass/m width from about 2100kg to over 54000kg and are suitable for the compaction of most soils except uniform and silty sands. They are usually self-propelled although towable units are also available.

The successful operation of smooth wheeled rollers is difficult (and often impossible) when site conditions are wet, and in these circumstances rollers that can be towed by either track-laying or wheeled tractors are used. Both dead weight and vibratory units are available.

Vibratory roller

The smooth wheeled vibratory roller is either self propelled or towed and has a mass/ m width value from 270kg to over 5000kg. The compactive effort is raised by vibration, generally in the form of a rotating

shaft (powered by the propulsion unit) that carries out-of-balance weights. Tests have shown that the best results on both heavy clays and granular soils are obtained when the frequency of vibration is in the range 2200–2400 cycles per minute. Vibration is obviously more effective in granular soil but the effect of vibration on a 200 mm layer of cohesive soil can effectively double the compactive effort.

A vibrating roller operating without vibration is regarded as being a smooth wheeled roller.

Pneumatic-tyred roller

In its usual form the pneumatic-tyred roller is a container or platform mounted between two axles, the rear axle generally having three wheels and the forward axle two (so arranged that they track in with the rear wheels), although some models have five wheels at the back and four at the front. The dead load is supplied by weights placed in the container to give a mass per wheel range from 1000 kg to over 12000 kg. The mass per wheel is simply the total mass of the unit divided by the number of wheels. A certain amount of vertical movement of the wheels is provided for so that the roller can exert a steady pressure on uneven ground – a useful facility in the initial stages of a fill.

This type of roller originated as a towed unit but is now widely available as a self-propelled vehicle. It is suitable for most types of soil and has particular advantages on wet cohesive materials.

Sheepsfoot roller

This roller consists of a hollow steel drum from which the feet project, dead weight being provided by placing water or wet sand inside the drum. It is generally used as a towed assembly (although self-propelled units are available), with the drums mounted either singly or in pairs.

The feet are usually either club-shaped (100 × 75 mm) or tapered (57 × 57 mm), the number on a 5000 kg roller varying between 64 and 88. Variations in the shape of the feet have been tried in the USA with a view to increasing the operating speed.

The sheepsfoot roller is only satisfactory on cohesive soils, but at low moisture contents the resulting compaction of such soils is probably better than can be obtained with other forms of plant. Their use in the UK is rather infrequent because of the generally wet conditions.

Deep impact rollers

Recent advances in the development of compaction equipment has seen the introduction of rollers that can compact significant depths of soil in a single pass. High weight polygonal drum rollers can achieve much greater compaction efficiency and depths than equivalent weight smooth wheeled rollers. Weighing around 32000 kg these machines can be used to compact large extents of subgrade on highway construction projects in about half the time of alternative dead weight rollers.

The grid roller

This is a towed unit consisting of rolls made up from 38 mm diameter steel bars at 130 mm centres, giving spaces of 90 mm square. The usual mass of the roller is about 5500 kg which can be increased to around 11000 kg by the addition of dead weights; there are generally two rolls, but a third can be added to give greater coverage. The grid roller is suitable for many soil types, but wet clays tend to adhere to the grid and convert it into a form of smooth roller.

Rammers and vibrators

Manually controlled power rammers can be used for all soil types and are useful when rolling is impractical due to restricted site conditions. Vibrating plates produce high dry densities at low moisture content in sand and gravels and are particularly useful when other plant cannot be used.

14.2 Laboratory compaction of soils

14.2.1 British Standard compaction tests

Three different compaction tests are specified in BS 1377-4:1990 and these are briefly described below.

The 2.5 kg rammer method

An air dried representative sample of the soil under test is passed through a 20 mm sieve and 5 kg is collected. This soil is then thoroughly mixed with enough water to give a fairly low value of water content. For sands and gravelly soils the commencing value of w should be about 5% but for cohesive soils it should be about 8 to 10% less than the plastic limit of the soil tested.

The soil is then compacted in a metal mould of internal diameter 105 mm using a 2.5 kg rammer, of 50 mm diameter, free falling from 300 mm above the top of the soil: see Fig. 14.1. Compaction is effected in three layers, of approximately equal depth. Each layer is given 27 blows, which are spread evenly over the surface of the soil.

The compaction can be considered as satisfactory when the compacted soil is not more than 6 mm above the top of the mould (otherwise the test results become inaccurate and should be discarded). The top of the compacted soil is trimmed level with the top of the mould. The base of the mould is removed and the mould and the test sample it encloses are weighed.

Samples for water content determination are then taken from the top and the base of the soil sample, the rest of the soil being removed from the mould and broken down and mixed with the remainder of the original sample that passed the 20 mm sieve. A suitable increment of water (to give about 2% increase in water content) is thoroughly mixed into the soil and the compaction is repeated. The test should involve not less than five sets of compaction but it is usually continued until the weight of the wet soil in the mould passes some maximum value and begins to decrease.

Eventually, when the test has been completed, the values of water content corresponding to each volume of compacted soil are determined and it becomes possible to plot the dry density to moisture content relationship.

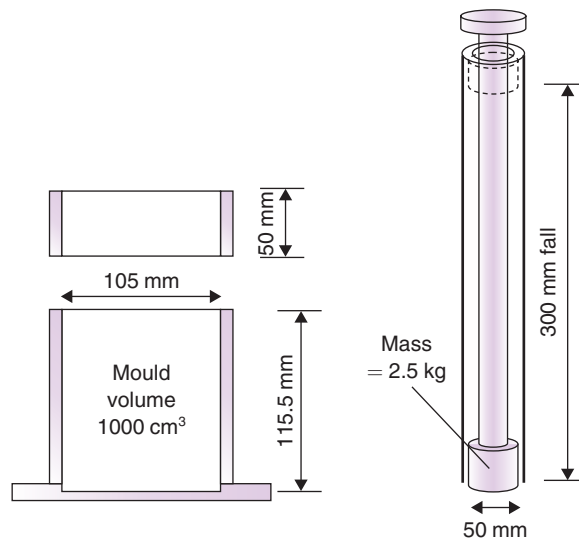


Fig. 14.1 Equipment for the 2.5 kg rammer compaction test.

The 4.5 kg rammer method

In this compaction test, the mould and the amount of dry soil used are the same as for the 2.5 kg rammer method but a heavier compactive effort is applied to the test sample. The rammer has a mass of 4.5 kg with a free fall of 450 mm above the surface of the soil. The number of blows per layer remains the same, 27, but the number of layers compacted is increased to five.

The vibrating hammer method

It is possible to obtain the dry density/water content relationship for a granular soil with the use of a heavy electric vibrating hammer, such as the Kango. A suitable hammer, according to BS 1377-4:1990, would have a frequency between 25 and 45 Hz, and a power consumption of 600 to 750 W: it should be in good condition and have been correctly maintained. The hammer is fitted with a special tamper (see Fig. 14.2) and for gravels and sands is considered to give more reliable results than the dynamic compaction techniques just described.

The British Standard vibrating hammer test is carried out on soil in the 152 mm diameter mould, with a mould volume of 2305 cm³, the soil having passed the 37.5 mm sieve.

The soil is mixed with water, as for any compaction test, and is compacted in the mould in three approximately equal layers by pushing the tamper firmly down on to the soil and operating the hammer for 60 seconds, per layer.

The vibrating hammer method should only be used for fine-grained granular soils and for the fraction of medium and coarse grained granular soils passing the 37.5 mm sieve. For highly permeable soils, such as clean gravels and uniformly graded coarse sands, compaction by the vibrating hammer usually gives more dependable results than compaction by either the 2.5 kg rammer or the 4.5 kg rammer.

14.2.2 Soils susceptible to crushing during compaction

The procedure for each of the three compaction tests just described is based on the assumption that the soils tested are not susceptible to crushing during compaction. Because of this, each newly compacted specimen can be broken out of the mould and mixed with the remaining soil for the next compaction.

This technique cannot be used for soils that crush when compacted. With these soils, at least five separate 2.5 kg air dried samples of soil are prepared at different water contents and each sample is compacted, once only, and then discarded.

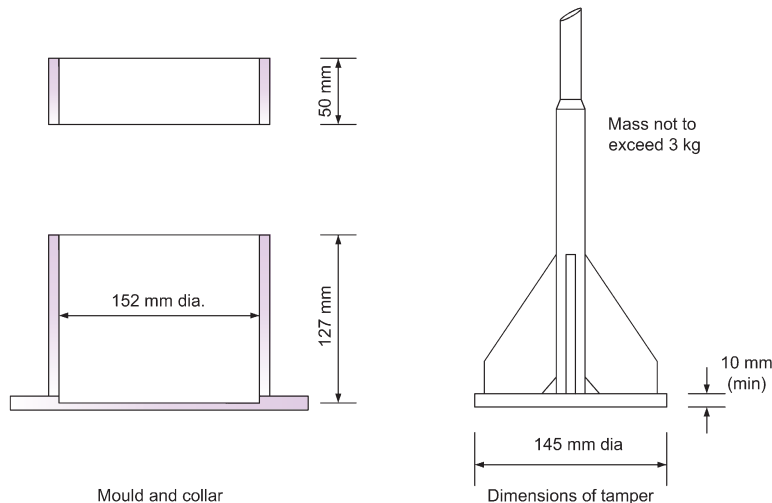


Fig. 14.2 The vibrating hammer compaction test.

Preparation of the soil at different water contents

It is important, when water is added to a soil sample, that it is mixed thoroughly to give a uniform dispersion. Inadequate mixing can lead to varying test results and some form of mechanical mixer should be used. Adequate mixing is particularly important with cohesive soils and with highly plastic soils it may be necessary to place the mixed sample in an air tight container for at least 16 hours, in order to allow the moisture to migrate throughout the soil.

14.2.3 Determination of the dry density–moisture content relationship

For each of the three compaction tests described the following readings must be obtained for each compaction:

M_1 = Mass of mould

M_2 = Mass of mould + soil

w = moisture content (as a decimal)

The bulk density and the dry density values for each compaction can now be obtained:

$$\rho_b = \frac{M_2 - M_1}{1000} \text{ Mg/m}^3 \quad (\text{for the 2.5 and 4.5 kg rammers})$$

$$= \frac{M_2 - M_1}{2305} \text{ Mg/m}^3 \quad (\text{for the vibrating hammer test})$$

$$\rho_d = \frac{\rho_b}{1 + w} \text{ Mg/m}^3$$

When the values of dry density and moisture content are plotted the resulting curve has a peak value of dry density. The corresponding moisture content is known as the optimum moisture content (omc). The reason for this is that at low w values the soil is stiff and difficult to compact, resulting in a low dry density with a high void ratio. As w is increased however, the water lubricates the soil, increasing the workability and producing high dry density and low void ratio. However beyond omc pore water pressures begin to develop and the water tends to keep the soil particles apart resulting in low dry densities and high void ratios.

With all soils an increase in the compactive effort results in an increase in the maximum dry density and a decrease in the optimum moisture content (Fig. 14.3).

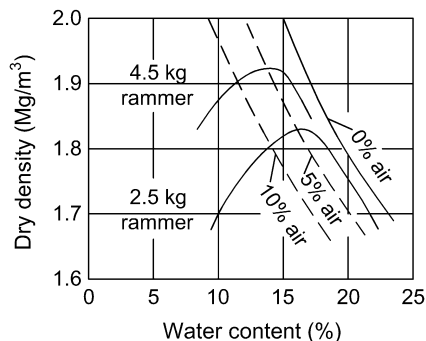


Fig. 14.3 Typical compaction test results.

14.2.4 Percentage air voids, V_a

Saturation line

Figure 14.3 illustrates the saturation line, or zero air voids line as it is often called. It represents the dry densities that would be obtained if all the air in the soil could be expelled, so that after compaction the sample became fully saturated; this state is impossible to achieve by compaction either in the laboratory or in the field, but with the compactive efforts now available it is quite common for a soil to have as little as 5% air voids after compaction.

BS 1377-4:1990 expresses the percentage air voids as the volume of air in the soil expressed as a percentage of the total volume, rather than as a percentage of the void volume. Hence 5% air voids does not mean the same as 95% degree of saturation.

Air voids line

Just as for the saturation line, it is possible to draw a line showing the dry density to water content relationship for a particular air voids percentage. (See Fig. 14.3.)

$$V_a = \frac{\text{Air volume}}{\text{Total volume}} = \frac{V_v - V_w}{V_v + V_s} = \frac{1 - S_r}{1 + 1/e} \quad (\text{dividing by } V_v)$$

hence:

$$V_a = n(1 - S_r) \quad \text{or} \quad S_r = 1 - \frac{V_a}{n}$$

In a partially saturated soil:

$$e = \frac{wG_s}{S_r}$$

and, substituting in the above expression for S_r :

$$e = \frac{wG_s + V_a}{1 - V_a}$$

and substituting in the expression

$$\rho_d = \frac{\rho_w G_s}{1 + e}$$

$$\rho_d = \frac{\rho_w G_s}{1 + \frac{wG_s + V_a}{1 - V_a}}$$

which eventually leads to:

$$\rho_d = \rho_w \left(\frac{1 - V_a}{\frac{1}{G_s} + w} \right)$$

It is seen that by putting $V_a = 0$ in the above expression we obtain the relationship between dry density and water content for zero air voids, i.e. the saturation line.

14.2.5 Correction for gravel content

As noted, the standard compaction test is carried out on soil that has passed the 20mm sieve. Any coarse gravel or cobbles in the soil is removed.

Provided that the percentage of excluded material, X , does not exceed 5% there will be little effect on the derived maximum dry density and optimum moisture content.

If X is much greater than 5% then the test values will be affected and may be quite different to those pertaining to the natural soil. There is no generally accepted method to allow for this problem but for X up to 30% some form of correction to allow for the removal of the gravel can be applied as set out below.

The percentage of material retained on the 20mm sieve, X , can be obtained either by weighing the amount on the sieve (if the soil is oven dried) or else from the particle size distribution curve.

In the compacted soil this percentage of coarse gravel and cobbles has been replaced by an equal mass of soil of a smaller size. Generally the particle specific gravity of the gravel will be greater than that of the soil of smaller size so the volume of the gravel excluded would occupy a smaller volume than that of the soil which replaced it.

If ρ_d = maximum dry density obtained from the test then:

$$\text{Mass of gravel excluded} = \frac{X}{100} \rho_d$$

Considering unit volume, the volume of soil that replaced the gravel = X , so:

$$\text{Volume of gravel omitted} = \frac{X}{100} \frac{\rho_d}{\rho_w G_s}$$

where G_s = particle specific gravity of excluded gravel.

$$\Rightarrow \text{Difference in volume} = \frac{X}{100} - \frac{X}{100} \frac{\rho_d}{\rho_w G_s} = \frac{X}{100} \left(1 - \frac{\rho_d}{\rho_w G_s} \right)$$

$$\begin{aligned} \text{Corrected maximum dry density} &= \frac{\rho_d}{1 - \frac{X}{100} \left(1 - \frac{\rho_d}{\rho_w G_s} \right)} \\ &= \frac{\rho_d}{1 + \frac{X}{100} \left(\frac{\rho_d}{\rho_w G_s} - 1 \right)} \end{aligned}$$

Similarly:

$$\text{Corrected optimum moisture content} = \frac{100 - X}{100} w$$

where w = the optimum moisture content obtained from the test.

Even when a gravel correction is applied, compaction test results are not representative for a soil with X more than 30%. BS 1377 suggests that in such cases the CBR mould (a mould 152mm in diameter and 127mm high) can be used. The compaction procedure is similar to that for the standard test except that the soil is compacted in the bigger mould in three equal layers with the same 2.5kg rammer falling 300mm but the number of blows per layer is increased to 62.

Correction for the excluded gravel (i.e. the particles greater than 37.5mm) can be carried out in the manner proposed for the 20mm size.

Example 14.1: 2.5 kg compaction test

The following results were obtained from a compaction test using the 2.5 kg rammer.

Mass of mould + wet soil (g)	2783	3057	3224	3281	3250	3196
Moisture content (%)	8.1	9.9	12.0	14.3	16.1	18.2

The weight of the compaction mould, less its collar and base, was 1130g and the soil had a particle specific gravity of 2.70.

Plot the curve of dry density against moisture content and determine the optimum moisture content. On your diagram plot the lines for 5% and 0% air voids.

Solution:

The calculations are best tabulated:

w (%)	Mass of mould + wet soil (g)	Mass of wet soil = M_1 (g)	Mass of dry soil, $M_2 = M_1/(1 + w)$ (g)	Dry density $\rho_d = M_2/1000$ (Mg/m ³)
8.1	2783	1653	1529	1.53
9.9	3057	1927	1753	1.75
12.0	3224	2094	1870	1.87
14.3	3281	2151	1882	1.88
16.1	3250	2120	1826	1.83
18.2	3196	2066	1748	1.75

The relationship between ρ_d and V_a is given by the expression:

$$\rho_d = \rho_w \frac{1 - V_a}{\frac{1}{G_s} + w}$$

Values for the 0% and 5% air voids lines can be obtained by substituting $V_a = 0$ and $V_a = 0.05$ in the above formula along with different values for w.

w (%)	8	10	12	14	16	18
	ρ_d (Mg/m ³)					
$V_a = 0$	2.22	2.13	2.04	1.96	1.89	1.81
$V_a = 0.05$	2.11	2.02	1.94	1.86	1.79	1.73

The complete plot is shown in Fig. 14.4.

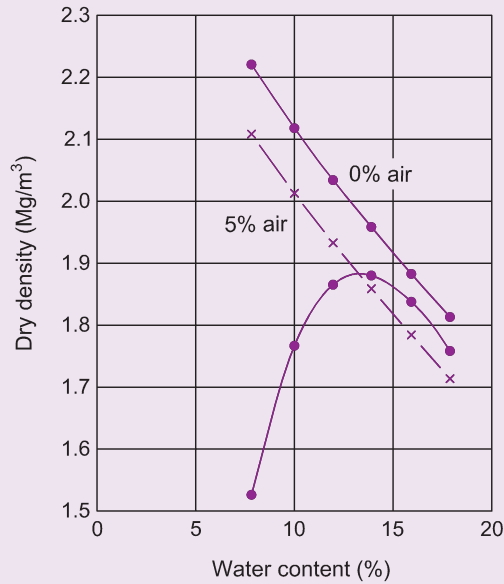


Fig. 14.4 Example 14.1.

Example 14.2: Corrected ρ_{dmax} and omc for gravel content

A 2.5kg rammer compaction test on a soil sample that had been passed through a 20mm sieve gave a maximum dry density of 1.91Mg/m³ and an optimum moisture content of 13.7%. If the percentage mass of the soil retained on the sieve was 20, determine more correct values for ρ_{dmax} and the omc. The particle specific gravity of the retained particles was 2.78.

Solution:

$$\begin{aligned} \rho_{dmax} &= \frac{\rho_d}{1 + \frac{X}{100} \left(\frac{\rho_d}{\rho_w G_s} - 1 \right)} \\ &= \frac{1.91}{1 + 0.2 \left(\frac{1.91}{1.0 \times 2.78} - 1 \right)} \\ &= 2.04 \text{ Mg/m}^3 \\ \text{omc} &= \frac{100 - X}{100} w = \frac{80}{100} \times 0.137 = 11\% \end{aligned}$$

14.3 Specification of the field compacted density

With the main types of compaction plant the optimum moisture contents of many soils are fairly close to their natural moisture contents and in such cases compaction can be carried out without variation of water content.

In Britain, the *Design manual for roads and bridges* (DMRB) is used as the basis for highway design and is generally referred to in parallel with the *Specification for highway works* (Highways Agency, 2009a) (SHW). The DMRB emphasises the importance of placing and compacting soils whose natural moisture contents render them in an *acceptable* state. Soils in an acceptable state will generally achieve the degree of compaction required and will be able to be excavated, transported and placed satisfactorily. The DMRB gives guidance on the limits of acceptability for different types of soil, and the methods of test by which acceptability should be assessed for each. In both the SHW and DMRB different types of soil (e.g. cohesive, granular) together with their anticipated use (e.g. general fill, landscape fill) are identified apart by a *Class* type. The DMRB recommends different types of test (e.g. moisture content, compaction, MCV (see Section 14.5.8)) and appropriate limits of acceptability for each class, and if the soil is placed at a moisture content within the limits, a satisfactory degree of compaction should be achieved.

Overcompaction

Care should be taken to ensure that the compactive effort in the field does not place the soil into the range beyond optimum moisture content. In Fig. 14.5 the point A represents the maximum dry density corresponding to the optimum moisture content. If the soil being compacted has a moisture content just below the optimum value the dry density attained will be point B, but if compaction is continued after this stage the optimum moisture content decreases (to point D) and the soil will reach the density shown by point C. Although the dry density is higher, point C is well past the optimum value and the soil will therefore be much softer than if compaction had been stopped once point B had been reached.

14.3.1 Compactive effort in the field

The amount of compactive effort delivered to a point in a soil during compaction depends upon both the mass of the compacting unit and the number of times that it runs over the point (i.e. the number of passes). Obviously the greater the number of passes the greater the compactive effort but, as discussed in the previous section, this greater compactive effort will not necessarily achieve a higher dry density. The number of passes must correspond to the compactive effort required for maximum dry density when the actual water content of the soil is the optimum moisture content and is usually somewhere between 3 and 10. Specification by *method compaction* is when the contractor is instructed to use a particular compaction machine and a fixed number of passes.

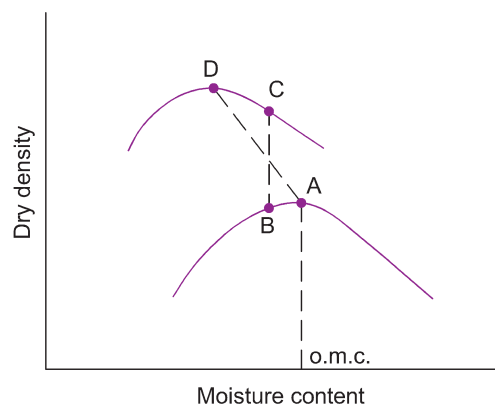


Fig. 14.5 Overcompaction.

14.3.2 Relative compaction

Laboratory compaction tests use different compactive efforts from those of many of the big machines so results from these tests cannot always be used directly to predict the maximum dry density values that will be achieved in the field. What can be used is the *relative compaction*, which is the percentage ratio of the *in situ* maximum dry density of the compacted fill material to the maximum dry density obtained with the relevant laboratory compaction test. Specification by *end product compaction* is when the contractor is directed to achieve a certain minimum value relative compaction and is allowed to select his own plant.

14.3.3 Method compaction

The Highways Agency Specification for Highway Works (2009a), gives two tables (6.1 and 6.4) from which, knowing the classification characteristics of the soil, it is possible to decide upon the most suitable compaction machine together with the number of passes that it must use. With this information a specification by method compaction can be prepared. The tables are too large to reproduce here.

14.3.4 End-product compaction

The values of the maximum dry density and the optimum moisture content are obtained using the 2.5 kg rammer or the vibrating hammer test, depending upon which is more relevant to the expected field compaction. The value of the required relative compaction should be equal to or greater than the value quoted in Table 6.1 of the SHW (2009a), usually 90 to 95%.

14.3.5 Air voids percentage

Another form of end-product specification is to instruct that a certain minimum value of air voids percentage is to be obtained in the compacted soil. This value of V_a was for many years taken as between 5 and 10%, but more recent research has suggested that a value of less than 5% is required to remove the risk of collapse on inundation sometime after construction (Trenter and Charles, 1996, Charles *et al.*, 1998).

14.4 Field measurement tests

During construction, tests for bulk density and moisture content should be carried out at regular intervals if proper control of the compaction is to be achieved. The number and spacing of tests is governed by the nature of the particular project and by the type of the compaction activities taking place.

14.4.1 Bulk density determination

These tests are described in BS1377-9:1990.

Core-cutter method

Details of the core-cutter apparatus, which is suitable for cohesive soils, are given in Fig. 14.6. After the cutter has been first pressed into the soil and then dug out, the soil is trimmed to the size of the cutter and both cutter and soil are weighed; given the weight and dimensions of the cutter, the bulk density of the soil can be obtained.

Sand replacement test

For granular soils the apparatus shown in Fig. 14.7 is used. A small round hole (about 100 mm diameter and 150 mm deep) is dug and the mass of the excavated material is carefully determined. The volume of

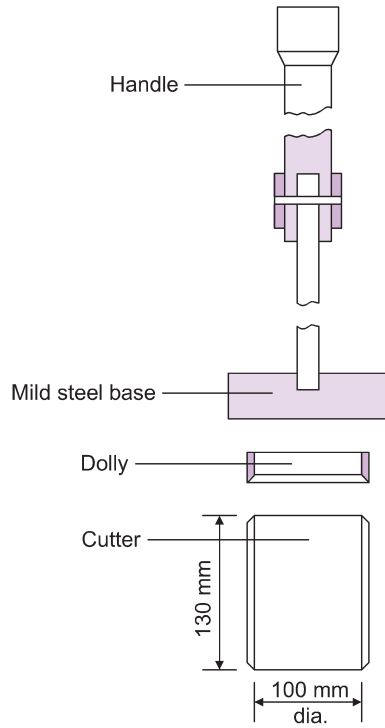


Fig. 14.6 Core cutter for clay soil.

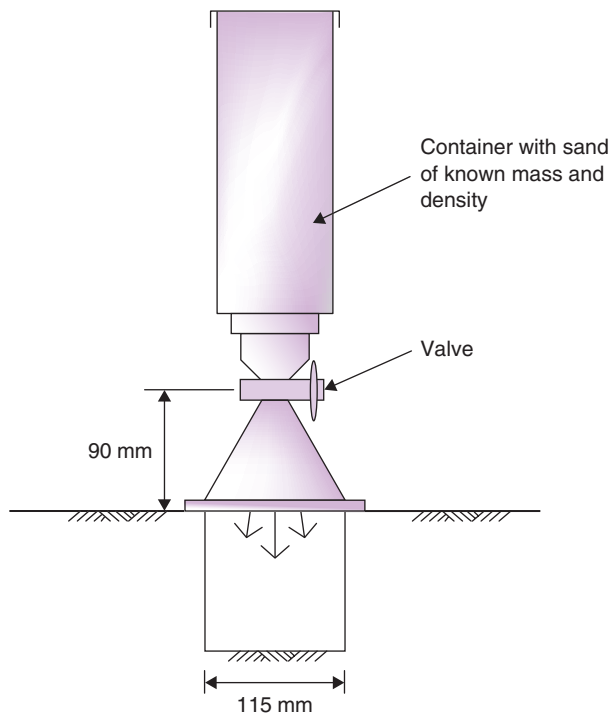


Fig. 14.7 The sand replacement method.

the hole thus formed is obtained by pouring into it sand of known density from a special graduated container; given the weight of sand in the container before and after the test, the weight of sand in the hole and hence the volume of the hole can be determined.

The apparatus shown in Fig. 14.7 is suitable for fine to medium grained soils and is known as the small pouring cylinder method.

For coarse grained soils a larger pouring cylinder is used. This cylinder has an internal diameter of 215mm and a height of 170mm to the valve or shutter. The excavated hole in this case should be about 200mm in diameter and some 250mm deep. This larger pouring cylinder can also be used for fine to medium grained soils.

Example 14.3: Sand replacement test

During construction of a highway, a sand replacement test was performed to determine the in-situ density of the subgrade. The following results were obtained:

Total mass of sand used in test	= 8500 g
Mass of sand retained in cylinder at end of test	= 2500 g
Mass of soil removed from hole	= 5036 g

Previously the following had been established in the laboratory:

Mass of sand held in cone beneath cylinder	= 1760 g
Density of sand	= 1.6 Mg/m ³ .

Determine the bulk density of the subgrade soil.

Solution:

$$\text{Mass of sand in hole, } M_{\text{sand}} = 8500 - 2500 - 1760 = 4240 \text{ g}$$

$$\Rightarrow \text{Volume of hole, } V = \frac{M_{\text{sand}}}{\rho_{\text{sand}}} = \frac{4240 \times 10^{-6}}{1.6} = 2.65 \times 10^{-3} \text{ m}^3.$$

$$\Rightarrow \rho_b = \frac{M_{\text{soil}}}{V} = \frac{5036 \times 10^{-6}}{2.65 \times 10^{-3}} = 1.90 \text{ Mg/m}^3.$$

Nuclear density gauge

This instrument consists of an aluminium probe which is pushed into the soil, connected to a detection and measuring unit placed on the soil surface. Neutrons emitted from a source in the probe lose their energy by collision with soil and water particles. A detector fitted to the instrument then picks up the number of slow neutrons deflected back to the instrument. Since this number depends upon the amount of water present in the soil, measurements of the water content, the bulk density and the dry density of the soil can be obtained directly. The apparatus gives a rapid and dependable reading and thus the test has become much more widely used than the sand replacement method test. However, as the apparatus uses a nuclear source, strict legislation exists as to its use which can render it unapproved for use on some projects.

14.4.2 Moisture content determination

Quick moisture content determinations are essential if compaction work is to proceed smoothly, and the Highways Agency *Manual of contract documents for highway works, MCHW 2 (2009b)* permits the use

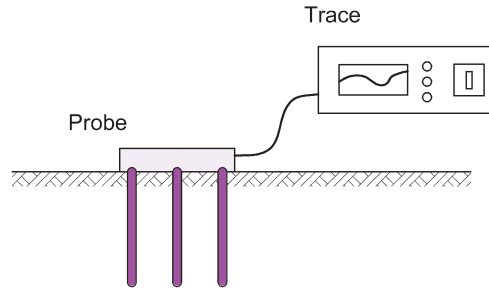


Fig. 14.8 Time domain reflectometry probe.

of quicker drying techniques than are specified in BS 1377. The most common of these tests are described below. Nevertheless it is standard practice to calibrate these results occasionally by collecting suitable soil samples and determining their water content values accurately by oven drying.

Time domain reflectometry (TDR)

The TDR method for the measurement of soil water content is relatively new and an early review of the method was given by Topp and Davis (1985). The technique involves the determination of the propagation velocity of an electromagnetic pulse sent down a fork-like probe installed in the soil (Fig. 14.8). The velocity is determined by measuring the time taken for the pulse to travel down the probe and be reflected back from its end. The propagation velocity depends on the dielectric constant of the material in contact with the probe (i.e. the soil). The dielectric constant of free water is 80 and that of a soil matrix is typically 3 to 6. Hence as the moisture content of the soil changes, there is a measurable change in the dielectric constant of the system, which affects the velocity of the pulse. Therefore, by measuring the time taken by the pulse we can establish the moisture content of the soil around the probe.

Soil moisture capacitance probe

Descriptions of the capacitance technique for determining soil moisture content are given by Dean *et al.* (1987) and Bell *et al.* (1987). The probe utilises the same principle as TDR, i.e. that the capacitance of a material depends on its dielectric constant. The probe is used inside a PVC access tube installed vertically into the soil. Indirect measurements of the capacitance of the surrounding soil are determined at the required depth and these are translated into soil moisture content using a simple formula. A description of the use of a capacitance probe for measuring soil moisture content is given by Smith *et al.* (1997).

Neutron probe

Nuclear moisture gauges have been discussed in the previous section.

Speedy moisture tester

A known mass of the wet soil is placed in a pressurised container and a quantity of calcium carbide is added, the chamber then being sealed and the two materials brought into contact by shaking. The reaction of the carbide on the water in the soil produces acetylene gas, the amount (and hence the pressure) of which depends upon the quantity of water in the soil. A pressure gauge, calibrated for moisture content, is fitted at the base of the cylinder and from this the moisture content can be read off as soon as the needle records a steady level. A characteristic of the apparatus that must be corrected for is that the value of moisture content obtained is in terms of the wet weight of soil.

14.5 Highway design

Highway design in the UK is based on the Highways Agency *Design manual for roads and bridges* (Highways Agency, 2013). The main concern in the design of a highway pavement structure is that its overall thickness from soil to running surface, is such that the soil beneath the road will not be overstressed by the imposed traffic loads. A useful reference document for readers interested in this subject area is the *ICE Manual of highway design and management* (Walsh, 2011).

The basic components of a road

Both a road and a runway consist of two basic parts, the pavement and the subgrade.

- *Pavement*: distributes wheel loads over an area so that the bearing capacity of the subgrade is not exceeded. It usually consists of two or more layers of material: a top layer or wearing surface which is durable and waterproof, and a base material. For economical reasons the base material is sometimes split into two layers, a base and a sub-base (Fig. 14.9).
- *Subgrade*: the natural soil upon which the pavement is laid. The subgrade is seldom strong enough to carry a wheel load directly. There are two possibilities:
 - (a) improve the strength of the subgrade and thereby reduce the required pavement thickness;
 - (b) design and construct a sufficiently thick pavement to suit the subgrade.

Types of pavement

- *Flexible*: lean concrete bases, cement-bound granular bases, tar or bitumen-bound macadam, all overlaid with bituminous surfaces.
- *Rigid*: reinforced concrete base and surface.

The choice of pavement depends largely upon the local economic considerations. However, rigid pavements are becoming increasingly rare in the UK as the cost and surface running noise associated with these structures are considered excessive.

14.5.1 Assessment of subgrade strength and stiffness

The strength of the subgrade is the main factor in determining the thickness of the pavement although its susceptibility to frost must also be considered.

The value of the stiffness modulus of the subgrade is required if the stresses and strains in the pavement and the subgrade are to be calculated.

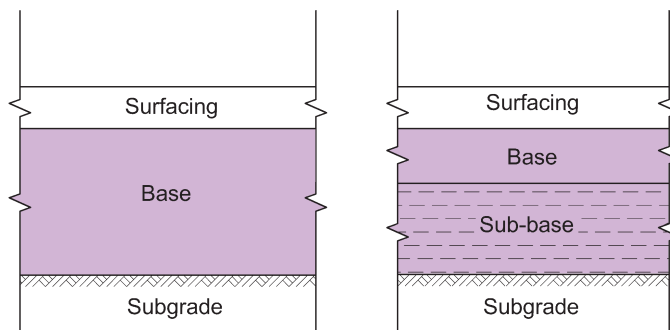


Fig. 14.9 Pavement construction.

The California Bearing Ratio test

Subgrade strength is expressed in terms of its California Bearing Ratio (CBR) value. The CBR value is measured by an empirical test devised by the California State Highway Association and is simply the resistance to a penetration of 2.5 mm of a standard cylindrical plunger of 49.65 mm diameter, expressed as a percentage of the known resistance of the plunger to various penetrations in crushed aggregate, notably 13.2 kN at 2.5 mm penetration and 20.0 kN at 5.0 mm penetration.

The reason for the odd dimension of 49.65 mm for the diameter of the plunger is that the test was originally devised in the USA and used a plunger with a cross-sectional area of 3.0 square inches. This area translates as 1935 mm² and, as the test is international, it is impossible to vary this area and therefore the plunger has a diameter of 49.65 mm.

Laboratory CBR test

The laboratory CBR test is generally carried out on remoulded samples of the subgrade, and is described in BS 1377-4:1990. The usual form of the apparatus is illustrated in Fig. 14.10. The sample must be compacted to the expected field dry density at the appropriate water content. The appropriate water content is the *in situ* value used for the field compaction. However if the final strength of the subgrade is required a further CBR test must be carried out with the soil at the same dry density but with the water content adjusted to the value that will eventually be reached in the subgrade after construction. This value of water content is called the *equilibrium moisture content*.

The dry density value can only be truly determined from full-sized field tests using the compaction equipment that will eventually be used for the road construction. Where this is impracticable, the dry density can be taken as that corresponding to 5% air voids at a moisture content corresponding to the omc of the standard compaction test. In some soils this will not be satisfactory – it is impossible to give a general rule; for example, in silts, a spongy condition may well be achieved if a compaction to 5% air voids is attempted. This state of the soil would not be allowed to happen *in situ* and the laboratory tester must therefore increase the air voids percentage until the condition disappears.

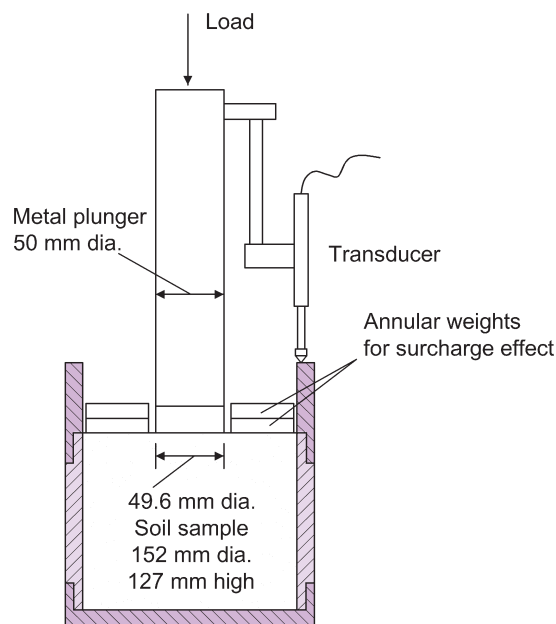


Fig. 14.10 The California bearing ratio test.

With its collar, the mould into which the soil is placed has a diameter of 152 mm and a depth of 177 mm. The soil is broken down, passed through a 20 mm sieve and adjusted to have the appropriate moisture content. The final compacted sample has dimensions 152 mm diameter and 127 mm height.

- (i) *Static compaction*: sufficient wet soil to fill the mould when compacted is weighed out and placed in the mould. The soil is now compressed into the mould in a compression machine to the required height dimension. This is the most satisfactory method.
- (ii) *Dynamic compaction*: the weighed wet soil is compacted into the mould in five layers using either the BS 2.5 kg rammer or the 4.5 kg rammer. The number of blows for each layer is determined by experience, several trial runs being necessary before the amount of compactive effort required to leave the soil less than 6 mm proud of the mould top is determined. The soil is now trimmed and the mould weighed so that the density can be determined.

After compaction the plunger is first seated into the top of the sample under a specific load: 50 N for CBR values up to 30% and 250 N for soils with CBR values above 30%.

The plunger is made to penetrate into the soil at the rate of 1.0 mm/minute and the plunger load is recorded for each 0.25 mm penetration up to a maximum of 7.5 mm.

Test results are plotted in the form of a load–penetration diagram by drawing a curve through the experimental points. Usually the curve will be convex upwards (Curve Test 1 in Fig. 14.11), but sometimes the initial part of the curve is concave upwards and, over this section, a correction becomes necessary. The correction consists of drawing a tangent to the curve at its steepest slope and producing it back to cut the penetration axis. This point is regarded as the origin of the penetration scale for the corrected curve.

The plunger resistance at 2.5 mm is expressed as a percentage of 13.2 kN and the plunger resistance at 5.00 mm is expressed as a percentage of 20.0 kN. The higher of these two percentages is taken as the CBR value of the soil tested.

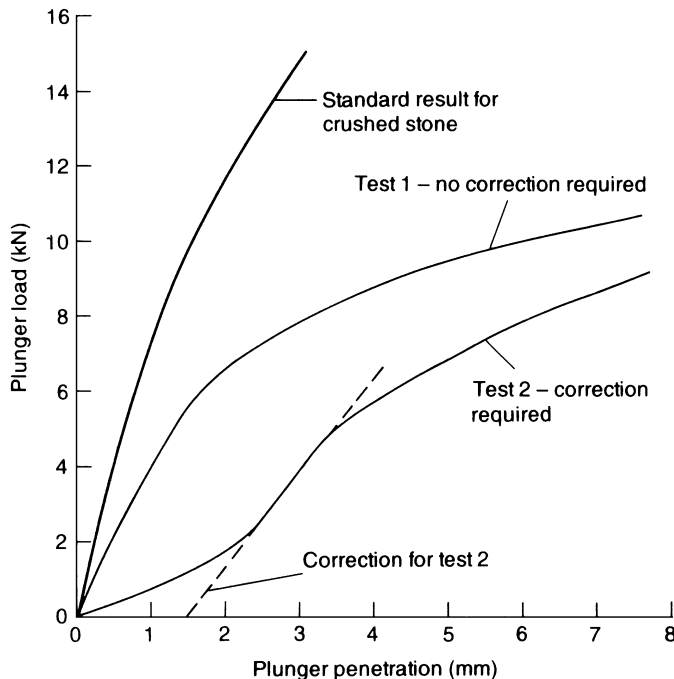


Fig. 14.11 Typical CBR results.

Surcharge effect

When a subgrade or a sub-base material is to be tested the increase in strength due to the road construction material placed above can be allowed for. Surcharge weights, in the form of annular discs with a mass of 2kg can be placed on top of the soil test sample. The plunger penetrates through a hole in the disc to reach the soil. Each 2kg disc is roughly equivalent to 75mm of surcharge material.

In situ CBR test

When an existing road is to be reconstructed the value of the subgrade strength must be determined. For such a situation the CBR test can be carried out *in situ* but it must be remembered that the water content of the soil should be the equilibrium value so that the test should be carried out in a newly excavated pit, not less than 1 m deep, on the freshly exposed soil. The test procedure for the determination of the *in situ* CBR is described in BS1377-9:1990.

Estimation of CBR values

Table C1 in the Transport and Road Research Laboratory Report LR 1132 (Powell *et al.*, 1984) gives estimates of equilibrium CBR values for most common soils in Britain for various conditions of construction, groundwater and pavement thickness. The TRRL table is reproduced here as Table 14.1.

A high water table is taken as one that is 300mm below foundation level whilst a low water table is one that is 1000mm below foundation level. For water tables at depths between these limits the CBR value may be found by interpolation.

In Table 14.1 a thick pavement has a total thickness of 1200mm including any capping layer (used for motorways) and a thin pavement has a total thickness of 300mm. For pavement thicknesses between these limits the value of the CBR may be interpolated.

14.5.2 Drainage and weather protection

Whenever practical the water table should be prevented from rising above a depth of 300 mm below the foundation level. This is usually achieved by the installation of French drains at a depth of 600mm.

14.5.3 Capping layer

If the subgrade is weak, a *capping layer* of relatively cheap material can be placed between the subgrade and the sub-base to improve the strength of the structure. The *Design manual for roads and bridges* gives the required thickness of capping and sub-base layers: the thickness of each depends on the CBR of the subgrade. The method given in the manual permits alternative combinations of capping and sub-base layer thickness. However, for subgrades of CBR less than 15%, the manual states that the minimum thickness of aggregate layer (capping or sub-base) shall be 150mm, and for a subgrade of CBR less than 3%, the first layer of aggregate placed (as capping or sub-base) shall be at least 200mm thick. Possible measures to be taken for cases where the subgrade is particularly soft (CBR less than 2%) are also given in the manual.

14.5.4 Subgrade stiffness

Once the CBR value of a subgrade has been determined it can be converted to a value of stiffness or elastic modulus. The TRRL Laboratory Report LR1132 (Powell *et al.*, 1984) suggests the following lower bound relationship:

$$E = 17.6(\text{CBR})^{0.64} \text{MPa}$$

where CBR is in %.

Table 14.1 Equilibrium suction-index CBR values. Reproduced from TRRL Report LR1132 (1984).

Type of soil	Plasticity index	High water table						Low water table					
		Construction conditions:						Construction conditions:					
		Poor		Average		Good		Poor		Average		Good	
	Thin	Thick	Thin	Thick	Thin	Thick	Thin	Thick	Thin	Thick	Thin	Thick	
Heavy clay	70	1.5	2	2	2	2	2	1.5	2	2	2	2	2.5
	60	1.5	2	2	2	2	2	1.5	2	2	2	2	2.5
	50	1.5	2	2	2.5	2	2	2	2	2	2	2.5	2.5
Silty clay	40	2	2.5	2.5	3	2.5	3	2.5	2.5	3	3	3	3.5
	30	2.5	3.5	3	4	3.5	5	3	3.5	4	4	4	6
	20	2.5	4	4	5	4.5	7	3	4	5	6	6	8
Sandy clay	10	1.5	3.5	3	6	3.5	7	2.5	4	4.5	7	6	>8
	—	1	1	1	1	2	2	1	1	2	2	2	2
	—	—	—	—	—	—	—	—	—	—	—	—	—
Sand (poorly graded)	—	—	—	—	—	—	—	—	—	—	—	—	—
	—	—	—	—	—	—	—	—	—	—	—	—	—
	—	—	—	—	—	—	—	—	—	—	—	—	—
Sandy gravel (well graded)	—	—	—	—	—	—	—	—	—	—	—	—	—
	—	—	—	—	—	—	—	—	—	—	—	—	—
	—	—	—	—	—	—	—	—	—	—	—	—	—

* estimated assuming some probability of material saturating.

Example 14.4: CBR test

A CBR test on a sample of subgrade gave the following results:

Plunger penetration (mm)	0.25	0.5	0.75	1.0	1.25	1.5	1.75	2.0
Plunger load (kN)	1.0	1.6	2.4	3.6	4.5	5.3	6.0	6.8
Plunger penetration (mm)	2.25	2.5	2.75	3.0	3.25	3.5	3.75	4.0
Plunger load (kN)	7.5	8.3	9.0	9.4	10.1	10.7	11.2	11.7
Plunger penetration (mm)	4.25	4.5	4.75	5.0	5.25	5.5	5.75	6.0
Plunger load (kN)	12.2	12.7	13.0	13.5	14.1	14.4	14.6	14.9

The standard force penetration curve, corresponding to 100% CBR has the following values:

Plunger penetration (mm)	2	4	6	8
Plunger load (kN)	11.5	17.6	22.2	26.3

Determine the CBR value of the subgrade.

Solution:

The standard penetration curve is shown drawn in Fig. 14.12.

The test points are plotted and a smooth curve drawn through them. In this case there is no need for the correction procedure as the curve is concave upwards in its initial stages.

From the test curve it is seen that at 2.5 mm the plunger load is 8.3 kN and at 5.0 mm the penetration is 13.5 kN.

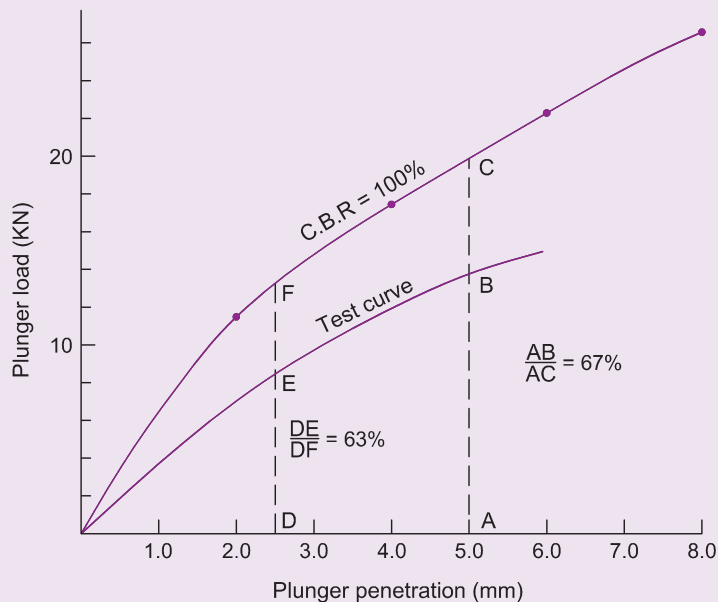


Fig. 14.12 Example 14.4.

The CBR value is therefore either

$$\frac{8.3}{13.2} \times 100 \quad \text{or} \quad \frac{13.5}{20.0} \times 100$$

i.e. 63% or 67%.

The higher value is taken as the CBR, i.e. CBR = 67%.

Note CBR values are rounded off as follows:

to nearest 1% for CBR values up to 30%;

to nearest 5% for CBR values between 30 and 100%;

to nearest 10% for CBR values greater than 100%.

14.5.5 Frost susceptibility of subgrades and base materials

Cohesive soils: can be regarded as non-frost-susceptible when I_p is greater than 15% for well drained soils and 20% for poorly drained soils (i.e. water table within 600 mm of formation level).

Non-cohesive soils: except for limestone gravels, may be regarded as non-frost-susceptible if with less than 10% fines.

Limestone gravels are likely to be frost-susceptible if the average saturation moisture content of the limestone aggregate exceeds 2%.

Chalks: all crushed chalks are frost-susceptible. Magnitude of heave increases linearly with the saturation moisture content of the chalk aggregate.

Limestone: all oolitic and magnesian limestones with an average saturation moisture content of 3% or more must be regarded as frost-susceptible.

All hard limestones with less than 2% of average saturation moisture content within the aggregate and with 10% or less fines can be regarded as non-frost-susceptible.

Granites: crushed granites with less than 10% fines can be regarded as non-frost susceptible.

Burnt colliery shales: very liable to frost heave. No relationship is known, so that tests on representative samples are regarded as essential before the material is used in the top 450 mm of the road structure.

Slags: crushed, graded slags are not liable to frost heave if they have less than 10% fines.

Pulverised fuel ash: coarse fuel ashes with less than 40% fines are unlikely to be frost-susceptible.

Fine ashes may be frost-susceptible and tests should be carried out before such materials are used in the top 450 mm.

14.5.6 Traffic assessment

Within the DMRB, traffic assessment is carried out in accordance with the procedures set out in document HD 24/06. The traffic assessment serves two functions: to estimate the *design traffic* for new roads, and to estimate past and future *design traffic* for the maintenance of existing roads. The traffic loads imposed on the running surface stress the layers that comprise the pavement and in turn stress the subgrade beneath. Considering new roads, it is important that the traffic assessment is performed so that the correct required thickness of pavement is established such that the subgrade will not be overstressed by the traffic loadings.

The flow of commercial vehicles (i.e. those greater than 15 kN unladen vehicle weight) is established in order to determine the cumulative design traffic. Commercial vehicles are placed into categories depending on the type of the vehicle (e.g. coach or lorry), the number of axles and the vehicle rigidity. Buses and coaches are placed in the *public service vehicle* (PSV) category, and lorries are placed into one of two *other goods vehicles* categories (OGV1 and OGV2) depending on their size. Traffic flow data should be

determined from traffic studies and, from these, the percentage of OGV2 vehicles in the total flow is determined. To establish the cumulative design traffic, use is made of design charts. The charts give the cumulative design traffic (in millions of standard axles) depending on the forecast traffic flow at opening together with the percentage of OGV2 vehicles in the flow. Consideration is also given to wear of the pavement through the traffic loads and the growth in traffic anticipated during the road's design life.

14.5.7 Design life of a road

An important part in the design of a road is the decision as to the number of years of life for which the road can be economically built. The DMRB suggests a design life of 20 years for bituminous roads, because their life may be extended by a strengthening overlay. However, during the design of streets in residential areas, a design life of 40 years may be considered.

14.5.8 The moisture condition value, MCV

The selection of a satisfactory soil for earthworks in road construction involves the visual identification of unsuitable soils, the classification tests described in Chapter 1 together with the use of at least one of the three compaction tests described in this chapter. The compaction test chosen is the one that uses a compactive effort nearest to the expected construction compactive effort and is used to determine the optimum moisture content value, i.e. the upper value of water content beyond which the soil becomes unworkable. The system can give good results, particularly with experienced engineers, but there are occasions when the assessment of a particular soil's suitability for earthworks is still difficult.

The moisture condition test is an attempt to remove some of the selection difficulties and was proposed by Parsons in 1976. It is essentially a strength test in which the compactive effort necessary to achieve near full compaction of the test sample is determined. The moisture condition value, MCV, is a measure of this compactive effort and is correlated with the undrained shear strength, c_u , or the CBR value, that the soil will attain when subjected to the same level of compaction (Parsons and Boden, 1979).

The test procedure is given in BS177-4:1990 and details of the apparatus are shown in Fig. 14.13. The test consists of placing a 1.5 kg sample of soil that has passed through a 20 mm sieve into a cylindrical mould of internal diameter 100 mm. The sample is then compacted to maximum bulk density with blows from a 7 kg rammer, 97 mm in diameter and falling 250 mm. After a selected number of blows (see Example 14.5), the penetration of the rammer into the mould is measured by a vernier attachment and noted. The test is terminated when no further significant penetration is noted or as soon as water is seen to extrude from the base of the mould. The latter requirement is essential if the water content of the sample is not to change.

MCV tests are intended to replace the previous techniques of defining an upper limit of moisture content for soil acceptability. Generally speaking a soil with an MCV of not less than 8.5, which is comparable to the *in situ* compactive effort of present day plant, will be acceptable for earthworks. Although no difficulty will be experienced with testing the majority of soils, particularly those of a cohesive nature, problems can arise with granular soils with a low fines content, such as glacial tills.

Required calculations

The difference in penetration for a given number of blows, B, and a further three times as many blows (i.e. 4B blows) is calculated and is plotted against the logarithm of B. The calculation is repeated for all relevant B values so that a plot similar to Fig. 14.14 of Example 14.5 is obtained. The MCV is taken to be $10 \log_{10} B$ where B = the number of blows at which the change of penetration = 5 mm. As is seen from Fig. 14.14 the chart can be prepared so that the value of $10 \log_{10} B$, to the nearest 0.1, can be read directly from the plot. The value of 5 mm for the change in penetration value was arbitrarily selected as the point at which no further significant increase in density can occur. This avoids having to extrapolate the point at which zero penetration change occurs.

The MCV for a soil at its natural moisture content can be obtained with one test, the wet soil being first passed through a 20 mm sieve and a 1.5 kg sample collected.

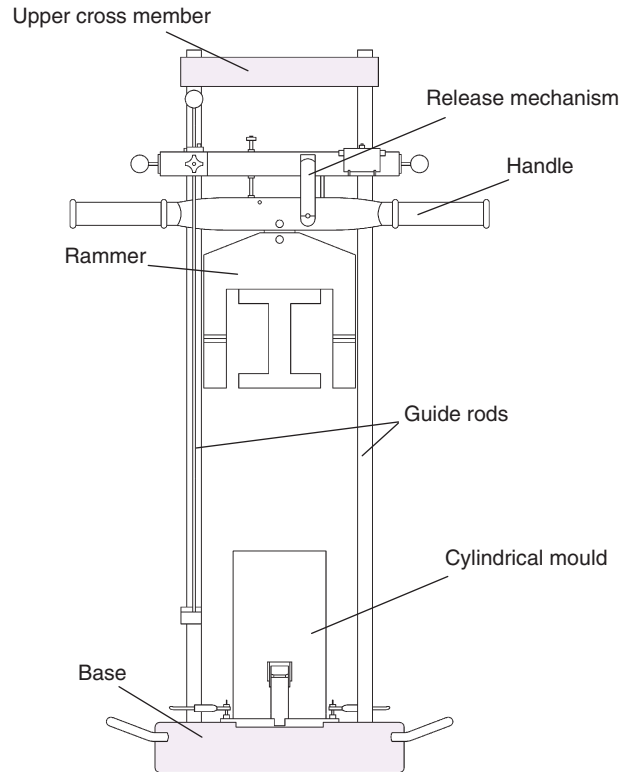


Fig. 14.13 The original moisture content apparatus (MCA) (reproduced from Parsons and Boden, 1979). A modified version is in use nowadays.

Example 14.5: MCV test

A sample of silty clay was subjected to a moisture condition test at its natural water content. The results obtained are set out below.

No. of blows, B	Penetration (mm)
1	45.6
2	55.3
3	62.7
4	67.1
6	74.5
8	79.5
12	86.1
16	90.7
24	96.6
32	99.4
48	101.9
64	102.9
96	103.5
128	103.8

Determine the MCV for the soil.

Solution:

The calculations are best tabulated:

No. of blows, B	Penetration (mm)	Change in penetration with additional 3B blows (mm)
1	45.6	21.5
2	55.3	24.2
3	62.7	23.4
4	67.1	23.6
6	74.5	22.1
8	79.5	19.9
12	86.1	15.8
16	90.7	12.2
24	96.6	6.9
32	99.4	4.4
48	101.9	
64	102.9	
96	103.5	
128	103.8	

The plot of change in penetration to number of blows is shown in Fig. 14.14. The plot crosses the line at $B = 30.2$. Hence the MCV of the soil is $10 \times \log_{10} 30.2 = 14.8$. The value of MCV can be read directly on the bottom scale.

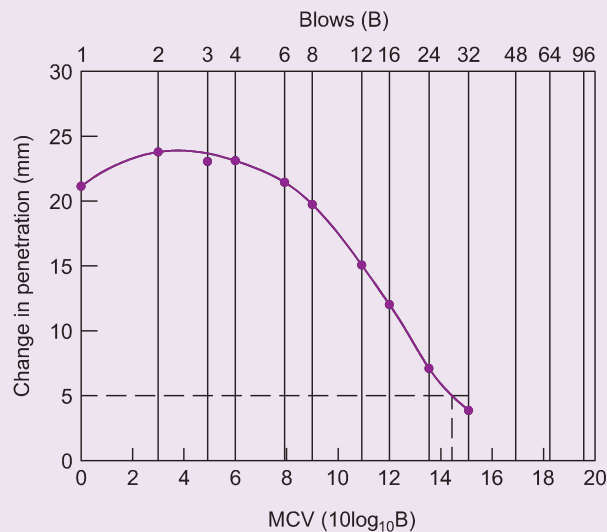


Fig. 14.14 Example 14.5.

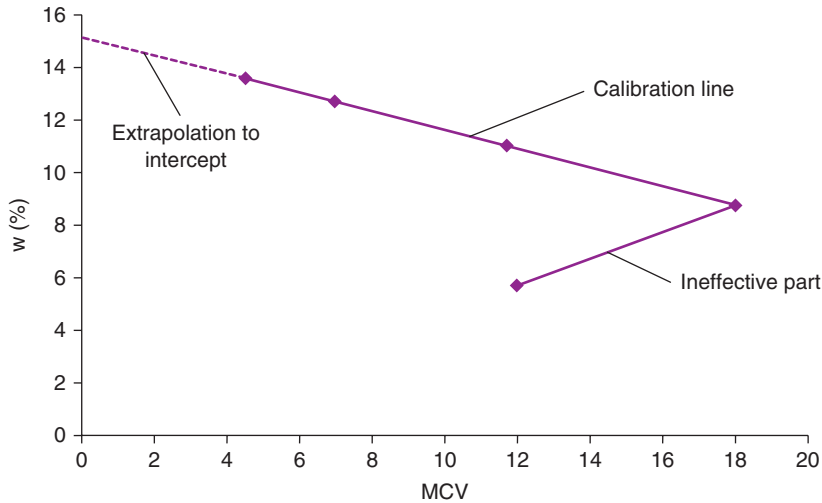


Fig. 14.15 Typical MCV calibration line.

The calibration line of a soil

If the relationship of MCV to water content is required, then a sample (approximately 25 kg) of the soil is air dried and passed through the 20 mm BS sieve. At least four sub-samples are taken and mixed thoroughly with different quantities of water to give a suitable range of moisture contents. Ideally, the range of moisture contents should be such as to yield MCVs between 3 and 15.

Test samples of mass 1.5 kg are prepared from each sub-sample and tested in the same manner as for the natural test and a series of MCVs are thus obtained. The moisture contents of the test samples are determined and a plot of the series of moisture contents against MCVs is produced. The best-fit plot is linear and is referred to as the *MCV calibration line*. An example of a calibration line is shown in Fig. 14.15.

The purpose of the best straight line plot is to gain a value of the *sensitivity* of the soil and a range of moisture contents within which the MCV test is applicable. The sensitivity is a measure of the change in value of MCV for a specified change in moisture content and is equal to the reciprocal of the slope of the calibration line. If required, the calibration line is extrapolated back to the moisture content axis (y-axis) to give the *intercept*. Often an ineffective part of the calibration line can be detected if samples are tested at sufficiently low moisture contents (Fig. 14.15).

The equation of the calibration line is:

$$w = a - b(\text{MCV})$$

Where

w = moisture content at MCV (%)

a = intercept (%)

b = slope of line.

The use of calibration lines in site investigation

To determine the equation of a calibration line it is only necessary to know its slope, b , and its intercept, a . This information can be extremely useful in deciding whether or not a soil is suitable for earthworks. Typical calibration lines for different soils are shown in Fig. 14.16. It is important to realise, however, that MCV calibration test results determined in the laboratory do not give an accurate picture of the conditions

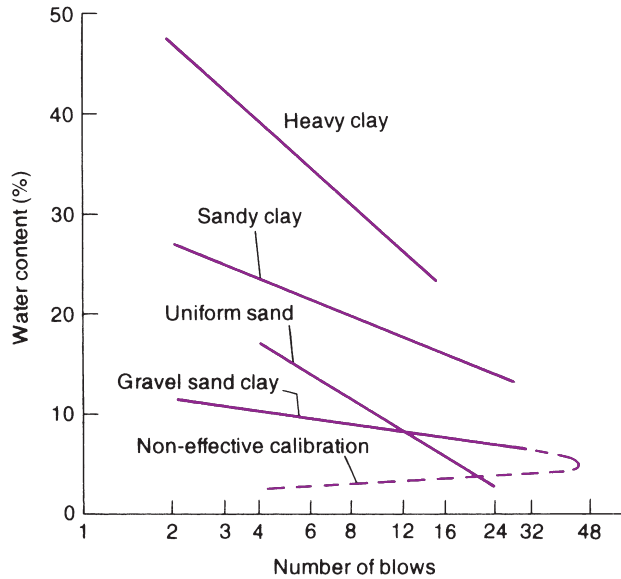


Fig. 14.16 Typical calibration line for different soils (after Parsons, 1976).

likely to be experienced in the field. As a result, a degree of care and judgement is required when using values of sensitivity and intercept to judge a soil's *in situ* acceptability for earthworking.

The value of the intercept gives a measure of the potential of the soil to retain moisture when in a state of low compaction. This potential increases with the value of the intercept.

The slope of the line gives a measure of the soil's change in MCV value, i.e. in strength, with variation in water content. The steeper the slope the more acceptable the soil. A soil with a very low slope will suffer significant changes in its MCV value over a small range of water content and could well be an ideal soil for compaction on a fine day yet utterly unsuitable in rainy or misty conditions. Such a soil has a very high sensitivity to moisture content changes and would therefore be considered unacceptable for earthworks. Sensitivity to water content change is simply the reciprocal of the slope of the calibration line.



Exercises

Exercise 14.1

The results of a compaction test on a soil are set out below.

Moisture content (%)	9.0	10.2	12.5	13.4	14.8	16.0
Bulk density (Mg/m ³)	1.923	2.051	2.220	2.220	2.179	2.096

Plot the dry density to moisture content curve and determine the maximum dry density and the optimum moisture content.

If the particle specific gravity of the soil was 2.68, determine the air void percentage at maximum dry density.

Answer $\rho_{d_{\max}} = 1.97 \text{ Mg/m}^3$
 $\text{omc} = 13\%$
 Percentage air voids = 1.0

Exercise 14.2

A 2.5 kg rammer compaction test was carried out in a 105 mm diameter mould of volume 1000 cm^3 and a mass of 1125 g.

Test results were:

Moisture content (%)	10.0	11.0	12.0	13.0	14.0
Mass of wet soil and mould (g)	3168	3300	3334	3350	3320

Plot the curve of dry density against moisture content and determine the test value for $\rho_{d_{\max}}$ and omc.

On your diagram plot the zero and 5% air voids lines (take G_s as 2.65). If the percentage of gravel omitted from the test (particle specific gravity = 2.73) was 10%, determine more correct values for $\rho_{d_{\max}}$ and the omc.

Answer From test: $\rho_{d_{\max}} = 1.97 \text{ Mg/m}^3$; omc = 12%
 Corrected values: $\rho_{d_{\max}} = 2.03 \text{ Mg/m}^3$; omc = 11%

Exercise 14.3

An MCV test carried out on a soil sample gave the following results:

No. of blows, B	Penetration (mm)
1	38.0
2	45.1
3	64.0
4	72.3
6	78.1
8	80.1
12	81.0
16	81.5
24	81.7
32	81.7
48	81.7

Determine the MCV of the soil.

Answer MCV = 7.5

Exercise 14.4

An MCV test carried out on a glacial till gave the results set out below:

w (%)	5.6	6.8	7.8	8.0	8.5	9.0	9.5
MCV	13.3	13.5	13.7	13.1	11.1	8.5	6.0

Plot the MCV/w relationship and hence determine the equation of the calibration line and determine its sensitivity.

Show that the MCV values obtained for the two lowest water content values form the ineffective part of the calibration line.

Answer $w = 10.7 - 0.21\text{MCV}$
Sensitivity = $1/0.21 = 4.8$

References

- American Society for Testing and Materials (1980) *Natural Building Stones, Soil and Rock*. Annual book of ASTM Standards. Philadelphia, Pennsylvania.
- Atkinson, J.H. (2007) *The Mechanics of Soils and Foundations*, 2nd edn. Taylor & Francis, Oxon.
- Atterberg, A. (1911) Die Plastizität der Tone. *Int. Mitt. für Bodenkunden*, 1, (1) 10–43, Berlin.
- Barden, L. (1974) Sheet pile wall design based on Rowe's method. Part III of CIRIA Technical Report No. 54 – A comparison of quay wall design methods. CIRIA, London.
- Barron, R.A. (1948) Consolidation of fine grained soils by drain wells. *Transactions ASCE*, 113.
- Bell, A.L. (1915) Lateral pressure and resistance of clay and the supporting power of clay foundations. *Minutes Proc. Inst. Civil. Engrs*, London.
- Bell, J.P., Dean, T.J. and Hodnett, M.G. (1987) Soil moisture measurement by an improved capacitance technique, Part II. Field techniques, evaluation and calibration. *Jour. Hydrology*, 93, pp. 79–90.
- Berezantzev, V.G., Khristoforov, V. and Golubkov, V. (1961) Load bearing capacity and deformation of piled foundations. *Proc. 5th Int. Conf. ISSMFE*, 2, pp. 11–15, Paris.
- Biot, M.A. (1941) General theory of three dimensional consolidation. *Jour. Appl. Phys.*, 12, (2), pp. 155–164.
- Bishop, A.W. (1948) A new sampling tool for use in cohesionless sands below groundwater level. *Géotechnique*, 1, pp. 125–131.
- Bishop, A.W. (1954) The use of pore-pressure coefficients in practice. *Géotechnique*, 4, (2), pp. 148–152.
- Bishop, A.W. (1955) The use of the slip circle in the stability analysis of slopes. *Géotechnique*, 5, (1), pp. 7–17.
- Bishop, A.W. (1960) Opening discussion. *Proc. Conf. on Pore Pressure and Suction in Soils*. Butterworth, London.
- Bishop, A.W. (1966) The strength of soils as engineering materials. *Géotechnique*, 16, (2), pp. 148–152.
- Bishop, A.W. and Henkel, D.J. (1962) *The Measurement of Soil Properties in the Triaxial Test*. Edward Arnold, London.
- Bishop, A.W. and Morgenstern, N. (1960) Stability coefficients for earth slopes. *Géotechnique*, 10, (4), pp. 129–153.
- Bishop, A.W., Alpan, I., Blight, G.E. and Donald, I.B. (1960) Factors controlling the strength of partially saturated cohesive soils. *Proc. of Research Conf. on Shear Strength of Cohesive Soils*, ASCE, Colorado.
- Bishop, A.W., Green, G.E., Garga, V.K., Andresen, A. and Brown, J.D. (1971) A new ring shear apparatus and its application to the measurement of residual strength. *Géotechnique*, 21, (4), pp. 273–238.
- Bond A. and Harris A. (2008) *Decoding Eurocode 7*. Taylor and Francis, London.
- Bond, A.J. (2011) A procedure for determining the characteristic value of a geotechnical parameter. *Proc. 3rd Int Symp on Geotechnical Safety and Risk (ISGSR)*, pp. 537–547, Munich, Germany.
- Boussinesq, J. (1885) *Application des Potentiels à l'Étude de l'Équilibre et de Mouvement des Solides Élastiques*. Gauthier-Villard, Paris.
- Bowles, J.E. (1982) *Foundation Analysis and Design*, 3rd edn. McGraw-Hill Book Co., New York.
- Bright, N.J. and Roberts, J.J. (2004) *Students' Guide to the Eurocodes*. British Standards Institution, London.
- British Standards Institution (1986) *Code of Practice for Foundations*. BS 8004. BSI, London.
- British Standards Institution (1990) *British Standard Methods of Test for Soils for Civil Engineering Purposes*. BS 1377, Parts 1–9. BSI, London.
- British Standards Institution (1994) *Code of Practice for Earth Retaining Structures*. BS 8002. BSI, London. Reprinted with revisions, 2001.
- British Standards Institution (1995) *Code of Practice for Strengthened/Reinforced Soils and Other Fills*. BS 8006. BSI, London.
- British Standards Institution (1999) *Code of Practice for Site Investigations*. BS 5930. BSI, London.
- British Standards Institution (2002) *Eurocode – Basis of Structural Design*. BS EN 1990. BSI, London.

Smith's Elements of Soil Mechanics, 9th Edition. Ian Smith.

© 2014 John Wiley & Sons, Ltd. Published 2014 by John Wiley & Sons, Ltd.

- British Standards Institution (2004) *Eurocode 7: Geotechnical Design – Part 1: General Rules*. BS EN 1997-1. BSI, London.
- British Standards Institution (2007) *Eurocode 7: Geotechnical Design – Part 2: Ground Investigation and Testing*. BS EN 1997-2. BSI, London.
- British Standards Institution (2007) *UK National Annex to Eurocode 7 – Geotechnical Design – Part 1: General Rules*. UK NA to BS EN 1997-1:2004. BSI, London.
- British Standards Institution (2009) *UK National Annex to Eurocode 7 – Geotechnical Design – Part 2: Ground Investigation and Testing*. UK NA to BS EN 1997-2:2007. BSI, London.
- British Standards Institution (2002) BS EN ISO 14688-1 *Geotechnical Investigation and Testing – Identification and Classification of Soil – Part 1: Identification and Description*. BSI, London.
- British Standards Institution (2003) BS EN ISO 14689-1 *Geotechnical Investigation and Testing – Identification and Classification of Rock – Part 1: Identification and Description*. BSI, London.
- British Standards Institution (2004) BS EN ISO 14688-2 *Geotechnical Investigation and Testing – Identification and Classification of Soil – Part 2: Principles for a Classification*. BSI, London.
- British Standards Institution (2004) BS EN ISO 17892 *Geotechnical Investigation and Testing – Laboratory Testing of Soil*. BSI, London.
- British Standards Institution (2006) BS EN ISO 22475 *Geotechnical Investigation and Testing – Sampling Methods and Groundwater Measurements, Part 1: Technical Principles for Execution*. BSI, London.
- British Standards Institution (2012) BS EN ISO 22282 *Geotechnical Investigation and Testing – Geohydraulic Testing, Parts 1–6*. BSI, London.
- British Standards Institution (2012) BS EN ISO 22476 *Geotechnical Investigation and Testing – Field Testing, Parts 1–13*. BSI, London.
- British Standards Institution (forthcoming) BS EN ISO 22477 *Geotechnical Investigation and Testing – Testing of Geotechnical Structures, Parts 1–3: Pile load testing*. BSI, London.
- British Steel (1997) *British Steel Piling Handbook*, 7th edn. British Steel, Scunthorpe.
- Broms, B.B. (1966) Methods of calculating the ultimate bearing capacity of piles, a summary. *Sols–Soils*, 5, (18 and 19), pp. 21–31.
- Broms, B.B. (1971) Lateral earth pressures due to compaction of cohesionless soils. *Proc. 4th Int. Conf. Soil Mech.*, Budapest, pp. 373–384.
- Brown, J.D. and Meyerhof, G.C. (1969) Experimental study of bearing capacity in layered clays. *Proc. 7th Int. Conf. ISSMFE*, 2, pp. 45–51, Mexico City.
- Burland, J.B., Potts, D.M. and Walsh, N.M. (1981) The overall stability of free and propped embedded cantilever retaining walls. *Ground Engineering*, 14, (5), London, pp. 28–38.
- C & LG (2007). *A Designers' Simple Guide to BS EN 1997*. Communities and Local Government, London.
- Campbell, G.S. and Gee, G.W. (1986) Water potential: miscellaneous methods. In *Methods of Soil Analysis. Part 1. Physical and Mineralogical Methods – Agronomy Monograph No. 9*, 2nd edn. American Society of Agronomy–Soil Science Society of America.
- Casagrande, A. (1936) The determination of the preconsolidation loads and its practical significance. *Proc. 1st Int. Conf. ISSMFE*, 3, pp. 60–64, Harvard University, Cambridge, Mass.
- Casagrande, A. (1937) Seepage through earth dams. *Jour. New England Water Works Association*, 51, (2). Reprinted in Harvard University Publ. No. 209 (1937) and in 1940 in *Contributions to Soil Mechanics 1925–1940*. Boston Society of Civil Engineers, Boston.
- Casagrande, A. (1947a) Classification and identification of soils. *Proc. Am. Soc. Civ. Engrs*, 73.
- Casagrande, L. (1947b) *The Application of Electro-Osmosis to Practical Problems in Foundations and Earthworks*. Department Scientific and Industrial Res., Building Res. Tech. Paper No. 30, HMSO, London.
- Charles, J.A., Skinner, H.D. and Watts, K.S. (1998) The specification of fills to support buildings on shallow foundations: the “95% fixation”. *Ground Engineering*, January, London.
- Chen, W.F. (1975) *Limit Analysis and Soil Plasticity*. Elsevier, Oxford.
- Clayton, C.R.I. (1993) *Retaining structures*. Proceedings of the conference held by ICE, at Cambridge, July 1992, Thomas Telford, London.
- Clayton, C.R.I. (1995) *The Standard Penetration Test (SPT): Methods and Use*. CIRIA Report 143, London.
- Clayton, C.R.I. and Jukes, A.W. (1978) A one-point cone penetrometer liquid limit test. *Géotechnique*, 28, (4), pp. 469–472.
- Clayton, C.R.I. and Symons, I.F. (1992) The pressure of compacted fill on retaining walls (Technical Note). *Géotechnique*, 42, (1), pp. 127–130.
- Clayton, C.R.I., Matthews, M.C. and Simons, N.E. (1995) *Site Investigation: A Handbook for Engineers*, 2nd edn. Blackwell Science, Oxford.

- Coulomb, C.A. (1766) Essais sur une application des règles des maxims et minimis à quelques problèmes de statique relatifs à l'architecture. *Mem. Acad. Roy. Pres. Divers, Sav.* 5, 7, Paris.
- Culmann, K. (1866) *Die Graphische Statik, Section 8, Theorie der Stütz und Futtermauern*. Meyer and Zeller, Zurich.
- Darcy, H. (1856) *Les Fontaines Publiques de la Ville de Dijon*. Dalmont, Paris.
- Dean, T.J., Bell, J.P. and Baty, A.J.B. (1987) Soil moisture measurement by an improved capacitance technique, Part 1. Sensor design and performance. *Jour. Hydrology*, 93, pp. 67–78.
- De Beer, E.E. (1963) The scale effect in the transposition of the results of deep sounding tests on the ultimate bearing capacity of piles and caisson foundations. *Géotechnique*, 13, (1), pp. 39–75.
- De Beer, E.E. (1970) Experimental determination of the shape factor and the bearing capacity factors for sand. *Géotechnique*, 20, (4), pp. 387–411.
- De Beer, E.E. and Martens, A. (1957) Method of computation of an upper limit for the influence of the homogeneity of sand layers in the settlement of bridges. *Proc. 4th Int. Conf. ISSMFE*, 1, London.
- De Cock, F., Legrand, C. and Huybrechts, N. (2003) Axial static pile load test in compression or in tension – Recommendations from ISSMGE subcommittee ERTC 3 – Piles. *Proc. 13th Eur. Conf. Soil Mech. and Geotech. Enging*, 3, pp. 717–741, Prague.
- Department of Transport (1978) *Reinforced Earth Retaining Walls and Bridge Abutments for Embankments*. Technical Memorandum (Bridges) BE 3/78, revised 1987.
- Dunnicliff, J. (1993) *Geotechnical Instrumentation for Monitoring Field Performance*. John Wiley & Sons, Chichester.
- Fadum, R.E. (1948) Influence values for estimating stresses in elastic foundations. *Proc. 2nd Int. Conf. ISSMFE*, Rotterdam, 3.
- Fellenius, W. (1927) *Erdstatische Berechnungen*. Ernst, Berlin.
- Fellenius, W. (1936) Calculation of stability of earth dams. *Trans. 2nd Congress on Large Dams*.
- Fox, E.N. (1948) The mean elastic settlement of a uniformly loaded area and its practical significance. *Proc. 2nd Int. Conf. ISSMFE*, Rotterdam.
- Frank, R., Bauduin, C., Driscoll, R., Kavvas, M., Krebs Ovesen, N., Orr, T. and Schuppener, B. (2004) *Designer's Guide to EN 1997-1, Eurocode 7: Geotechnical Design – General Rules*. Thomas Telford, London.
- Fredlund, D.G., Rahardjo, H. and Fredlund, M.D. (2012) *Unsaturated Soil Mechanics in Engineering Practice*. John Wiley & Sons, New York.
- Gassler, G. (1990) 'In-situ techniques of reinforced soil'. In: *Performance of Reinforced Soil Structures*. (Edited by A. McGown, K.C. Yeo and K.Z. Andrawes.). Thomas Telford, London, pp. 185–196.
- Gibbs, H.J. and Holtz, W.G. (1957) Research on determining the density of sands by spoon penetration test. *Proc. 4th Int. Conf. ISSMFE*, 1, London.
- Gibson, R.E. (1958) The progress of consolidation in a clay layer increasing in thickness with time. *Géotechnique*, 8, pp. 171–182.
- Gibson, R.E. and Lumb, P. (1953) Numerical solution for some problems in the consolidation of clay. *Proc. Inst. Civ. Engrs*, Part 1, London.
- Hansen, J.B. (1957) Foundation of structures – General report. *Proc. 4th Int. Conf. ISSMFE*, London.
- Hansen, J.B. (1970) A revised and extended formula for bearing capacity. *Danish Geotech. Inst., Bulletin 28*, Copenhagen.
- Head, K.H. (1992) *Manual of Soil Laboratory Testing*. Vols 1, 2 and 3 (1,238 pp.). Pentech Press, London.
- Henkel, D.J. (1965) *The shear strength of saturated remoulded clays*. *Proc. Res. Conf. on Shear Strength of Cohesive Soils*. ASCE, Boulder, Colorado.
- Her Majesty's Stationery Office (1952) *Soil Mechanics for Road Engineers*. HMSO, London.
- Hicks M. (2013). An explanation of characteristic values of soil properties in Eurocode 7, in *Modern Geotechnical Design Codes of Practice* (Eds P. Arnold et al.). IOS Press, Amsterdam.
- Highways Agency, Scottish Executive, Welsh Assembly Government and The Department for Regional Development Northern Ireland (2006) *Design Manual for Roads and Bridges, Section 2 Pavement Design and Construction, HD 24/06; Volume 7, Pavement design and maintenance*. The Stationery Office, London.
- Highways Agency, Scottish Executive, Welsh Assembly Government and The Department for Regional Development Northern Ireland (2009a) *Manual of Contract Documents for Highway Works, MCHW 1; Specification for Highway Works: Series 600*. Earthworks, London.
- Highways Agency, Scottish Executive, Welsh Assembly Government and The Department for Regional Development Northern Ireland (2009b) *Manual of Contract Documents for Highway Works, MCHW 2; Notes for Guidance on the Specification for Highway Works: Series NG 600*. Earthworks, London.
- Highways Agency, Scottish Executive, Welsh Assembly Government and The Department for Regional Development Northern Ireland (2013) *Design Manual for Roads and Bridges*. The Stationery Office, London.
- Institution of Structure Engineers (1951) *Earth Retaining Structures*. CP2. Institution of Structure Engineers, London.
- ISSMFE (1985) *Lexicon in Eight Languages*. Publication of the International Society for Soil Mechanics and Foundation Engineering.

- Jaky, J. (1944) The coefficient of earth pressure at rest. *Jour. Soc. Hungarian Architects and Engineers*, 78, (22).
- Janbu, N. (1957) Earth pressure and bearing capacity calculations by generalised procedure of slices. *Proc. 4th Int. Conf. ISSMFE*, London.
- Jumikis, A.R. (1962) *Soil Mechanics*. Van Nostrand, New York.
- Jürgenson, L. (1934) The application of theories of elasticity and plasticity to foundation problems. *Proc. Boston Soc. Civil Engrs*, Boston.
- Kerisel, J. and Absi, E. (1990) *Active and Passive Earth Pressure Tables*, 3rd edn. Balkema, Rotterdam.
- Kjellman, W., Kallstenius, T. and Wager, O. (1950) Soil sampler with metal foils. *Proc. Royal Swed. Geot. Inst.*, No. 1.
- Lambe, T.W. (1964) Methods of estimating settlement. *Conf. on the Design of Foundations for Control of Settlements. Jour. ASCE*, 90, (SM5).
- Lambe, T.W. (1967) Stress path method. *Jour. ASCE*, 93, (SM6).
- Logan, J. (1964) Estimating transmissibility from routine production tests of water wells. *Ground Water*, 2, pp. 35–37.
- Lumb, P. (1963) Rate of settlement of a clay layer due to a gradually applied load. *Civ. Engine. Pub. Works Review*, London.
- Lunne, T., Robertson, P.K. and Powell, J.J.M. (1997) *Cone Penetration Testing in Geotechnical Practice*. E & FN Spon, London.
- Meigh, A.C. (1987) *Cone Penetration Testing Methods and Interpretation*. CIRIA, Butterworth, London.
- Meigh, A.C. and Nixon, I.K. (1961) Comparison of *in situ* tests for granular soils. *Proc. 5th Int. Conf. ISSMFE*, 1, pp. 449–507, Paris.
- Meigh, A.C. and Skipp, B.O. (1960) Gamma-ray and neutron methods of measuring soil density and moisture. *Géotechnique*, 10, (2), pp. 110–126.
- Meyerhof, G.G. (1951) The ultimate bearing capacity of foundations. *Géotechnique*, 1, (4), pp. 301–332.
- Meyerhof, G.G. (1953) The bearing capacity of foundations under eccentric and inclined loads. *Proc. 3rd Int. Conf. ISSMFE*, Zurich.
- Meyerhof, G.G. (1956) Penetration tests and bearing capacity of cohesionless soils. *Proc. ASCE, Jour. Soil. Mech. Found. Div.*, 85, (SM6), pp. 1–19.
- Meyerhof, G.G. (1959) Compaction of sands and bearing capacity of piles. *Proc. ASCE, Jour. Soil Mech. Found. Div.*, 85, (SM6), pp. 1–30.
- Meyerhof, G.G. (1963) Some recent research on the bearing capacity of foundations. *Canadian Geotech. Jour.*, 1, (1), pp. 16–23.
- Meyerhof, G.G. (1974) State-of-the-art of penetration testing in countries outside Europe. *Proc. 1st Euro. Symp. on Penetration Testing*, 2, pp. 40–48, Stockholm.
- Meyerhof, G.G. (1976) Bearing capacity and settlement of piled foundations. *Jour. Geotech. Engng. Div.*, ASCE, 102, (GT3), pp. 195–228.
- Mikkelsen, P.E. and Green, G.E. (2003) Piezometers in fully grouted boreholes. *Proc. Symp Field Measurements in Geomech.*, Oslo, Norway.
- Muir Wood, D. (1991) *Soil Behaviour and Critical State Soil Mechanics*. Cambridge University Press, Cambridge.
- Murray, H.H. (2006) *Applied Clay Mineralogy*. Elsevier, Amsterdam.
- Myles, B. and Bridle, R.J. (1991) Fired soil nails – the machine. *Ground Engineering*, July/August, London.
- Newmark, N.M. (1942) *Influence Charts for Computation of Stresses in Elastic Foundations*. University of Illinois Engng Exp. Stn., Bull. No. 338.
- Ng, C. W. W. and Menzies, J. (2007) *Advanced Unsaturated Soil Mechanics and Engineering*. Taylor & Francis, London.
- O'Connor, M.J. and Mitchell, R.J. (1977) An extension to the Bishop and Morgenstern slope stability charts. *Canadian Geotechnical Jour.*, 14, pp. 144–151.
- Oliphant, J. and Winter, M.G. (1997) Limits of use of the moisture condition apparatus. *Proceedings Institution of Civil Engineers, Transp.*, 123, pp. 17–29.
- Orr, T. (2012) How Eurocode 7 has affected geotechnical design: a review. *Proc ICE - Geotech Eng*, 165, (6), pp. 337–350.
- Padfield, C.J. and Mair, R.J. (1984) *Design of Retaining Walls Embedded in Stiff Clay*. CIRIA Report 104, London.
- Parry, R.H.G. (1960) Triaxial compression and extension tests on remoulded saturated clay. *Géotechnique*, 10, pp. 166–180.
- Parsons, A.W. (1976) *The Rapid Determination of the Moisture Condition of Earthwork Material*. Department of Environment, Department of Transport, TRRL Report LR750, Crowthorne, Berks.
- Parsons, A.W. and Boden, J.B. (1979) *The Moisture Condition Test and its Potential Applications in Earthworks*. Department of Environment, Department of Transport, TRRL Report SR522, Crowthorne, Berks.
- Pokharel, G. and Ochiai, T. (1997) Design and construction of a new soil nailing (PAN Wall[®]) method. *Proc 3rd Int. Conf. Ground Improvement Geosystems*. (Edited by M.C.R. Davies and F. Schlosser), London.

- Potts, D.M. and Fourie, A.B. (1984) The behaviour of a propped retaining wall: Results of a numerical experiment. *Géotechnique*, 34, pp. 383–404.
- Poulos, H.G. and Davis, E.H. (1974) *Elastic Solutions for Soil and Rock Mechanics*. John Wiley & Sons Inc., New York.
- Powell, W.D., Potter, J.F., Mayhew, H.C. and Nunn, M.E. (1984) *The Structural Design of Bituminous Roads*. Department of Environment, Department of Transport, TRRL Report LR1132, Crowthorne, Berks.
- Prandtl, L. (1921) Über die Eindringungsfestigkeit plastischer Baustoffe und die Festigkeit von Schneiden. *Zeitschrift für Angewandte Mathematik*, 1, (1), pp. 15–20.
- Rankine, W.J.M. (1857) On the stability of loose earth. *Philosophical Trans. Royal Soc.*, Part 1, 147, pp. 9–27. London.
- RDGC (1991) *Renforcement Des Sols par Clouage: Programme Clouterre*. Projets Nationaux de Recherche Développement en Génie Civil, Paris.
- Ridley, A.M. and Wray, W.K. (1995) Suction measurement: A review of current theory and practices. *Proc. 1st. Int. Conf. on Unsaturated Soils*. Paris, Vol. 3.
- Rowe, P.W. (1952) Anchored sheet-pile walls. *Proc. Inst. Civ. Engrs.*, Part 1, 1, pp. 27–70, London.
- Rowe, P.W. (1957) Sheet-pile walls in clay. *Proc. Inst. Civ. Engrs.*, 7, pp. 629–654, London.
- Rowe, P.W. (1958) Measurements in sheet-pile walls driven into clay. *Proc. Brussels Conf. 58 on Earth Pressure Problems*. Belgian group of ISSMFE, Brussels.
- Rowe, P.W. (1959) Measurement of the coefficient of consolidation of lacustrine clay, *Géotechnique*, 9, pp. 107–118.
- Rowe, P.W. and Barden, L. (1966) A new consolidation cell. *Géotechnique*, 16, (2), pp. 162–170.
- Schlosser, F. and Long, N.T. (1974) Recent results in French research on reinforced earth. *Jour. Const. Div. Am. Soc. Civ. Engrs*, 100.
- Schlosser F. (1982) Behaviour and design of soil nailing. *Proceedings International Symposium on Recent Developments in Ground Improvement Techniques*, Bangkok, Balkema, pp. 399–413.
- Schlosser, F. and de Buhan, P. (1990) Theory and design related to the performance of reinforced soil structures, State-of-the-art review. *Performance of Reinforced Soil Structures*. (Edited by A. McGowan, K.C. Yeo and K.Z. Andrewes.) held at University of Strathclyde. Thomas Telford, London, pp. 1–14.
- Schmertmann, J.H. (1953) Estimating the true consolidation behaviour of clay from laboratory test results. *Proc. ASCE*, 120.
- Schmertmann, J.H. (1970) Static cone to compute settlement over sand. *Proc. ASCE, Jour. Soil Mech. Found. Div.*, 96 (SM3), pp. 1001–1043.
- Schmertmann, J.H., Hartman, I.P. and Brown, P.R. (1978) Improved strain influence factor diagrams. *Proc. ASCE, Jour. Geotech. Engng. Div.*, 104 (GT8), pp. 1131–1135.
- Schneider H. and Schneider M. (2013) Dealing with uncertainties in EC7 with emphasis on determination of characteristic soil properties, in *Modern Geotechnical Design Codes of Practice* (Eds P. Arnold et al.). IOS Press, Amsterdam.
- Schofield, A.N. and Wroth, C.P. (1968) *Critical State Soil Mechanics*. McGraw-Hill, London.
- Schuppener B. (2008) Personal communication, *Eurocodes Background and Applications: "Dissemination of Information for Training" workshop*, Brussels.
- Sherard J.L., Dunnigan L.P. and Talbot J.R. (1984a) Basic properties of sand and gravel filters. *ASCE Jour. Geotech. Engng.*, 110, (6), pp. 684–700.
- Sherard J.L., Dunnigan L.P. and Talbot J.R. (1984b) Filters for silts and clays. *ASCE Jour. Geotech. Engng.*, 110, (6), pp. 701–718.
- Simpson, B. (2011) *Concise Eurocodes: Geotechnical design, BS EN 1997-1: Eurocode 7, Part 1*. BSI, London.
- Skempton, A.W. (1951) The bearing capacity of clays. *Proc. Building Research Congress*, pp. 180–189, London.
- Skempton, A.W. (1953) The colloidal activity of clays. *Proc. 3rd Int. Conf. ISSMFE 1*, Zurich.
- Skempton, A.W. (1954) The pore pressure coefficient A and B. *Géotechnique*, 4, (4), pp. 143–147.
- Skempton, A.W. (1960) Effective stress in soils, concrete and rocks. *Proc. Conf. on Pore Pressure and Suction in Soils*. Butterworth, London.
- Skempton, A.W. (1964) Long term stability of clay slopes. *Géotechnique*, 14, (2), pp. 77–102.
- Skempton, A.W. and Bjerrum, L. (1957) A contribution to settlement analysis of foundations on clay. *Géotechnique*, 7, (4), pp. 168–178.
- Skempton, A.W. and Northey, A. (1952) The sensitivity of clays. *Géotechnique*, 3, (1), pp. 30–53.
- Smith, G.N. (1968a) *Determining the Settlements of Embankments on Soft Clay*. Highways and Public Works, London.
- Smith, G.N. (1968b) Construction pore pressures in an earth dam. *Civ. Engng. Publ. Wks. Review*. London.
- Smith, G.N. (1971) *An Introduction to Matrix and Finite Element Methods in Civil Engineering*. Applied Science Publishers, London.
- Smith, I., Oliphant, J. and Wallis, S.G. (1997) Field validation of a computer model for forecasting mean weekly *in situ* moisture condition value. *The Electronic Jour. Geotechnical Engineering*, Issue 2, <http://www.ejge.com/1997/JourTOC2.htm>.

- Smolczyk, U. (1985) Axial pile loading test – Part 1: static loading. *Geotechnical Testing Journal*, 8, pp. 79–90.
- Sokolovski, V.V. (1960) *Statics of Soils Media*. (Trans. by D.H. Jones and A.N. Schofield.) Butterworth & Co. Ltd., London.
- Stannard, D.I. (1992) Tensiometers – theory, construction and use. *Geotechnical Testing Jour.*, 15, (1).
- Steinbrenner, W. (1934) *Tafeln zur Setzungsberechnung*. Die Strasse, 1, pp. 121–124.
- Taylor, D.W. (1948) *Fundamentals of Soil Mechanics*. John Wiley & Sons Inc., New York.
- Terzaghi, K. (1925) *Erdbaumechanik auf Bodenphysikalischer Grundlage*. Deuticke, Vienna.
- Terzaghi, K. (1943) *Theoretical Soil Mechanics*. John Wiley, London and New York.
- Terzaghi, K. and Peck, R.B. (1948) *Soil Mechanics in Engineering Practice*. Chapman and Hall, London.
- Terzaghi, K., Peck, R.B. and Mesri, G. (1996) *Soil Mechanics in Engineering Practice*, 3rd edn., John Wiley, New York.
- Thenault, L. (2012) *Design of sheet pile walls to Eurocode 7: the effect of passive pressure*. MEng Dissertation, Edinburgh Napier University.
- Topp, G.C. and Davis, J.L. (1985) Measurement of soil water content using time-domain reflectometry (TDR): a field evaluation. *Soil Science Society of America Jour.*, 49, pp. 19–24.
- Trenter, N.A. and Charles, J.A. (1996) A model specification for engineered fills for building purposes. *Proceedings Institution of Civil Engineers, Geotechnical Engineering*, 119, (4), pp. 219–230.
- Tsagareli, Z.V. (1967) *New Methods of Light Weight Wall Construction*. (In Russian.) Stroizdat, Moscow.
- Vesic, A.S. (1963) *Bearing Capacity of Deep Foundations in Sand*. Soil Mechanics Lab. Report, Georgia Inst. of Technology.
- Vesic, A.S. (1970) Tests on instrumented piles, Ogeechee River site. *Jour. Soil Mechs, and Found Div.*, ASCE, 96, (SM2), pp. 561–584.
- Vesic, A.S. (1973) Analysis of ultimate loads of shallow foundations. *Jour. Soil Mechs, and Found. Div.*, ASCE, 99, (SM1), pp. 45–73.
- Vesic, A.S. (1975) Bearing capacity of shallow foundations. Chapter 3 in: *Foundation Engineering Handbook*, (Eds H.F. Winterkorn & H.Y. Fang). Van Nostrand, Reinhold Co., New York.
- Vidal, H. (1966) La terre armée. *Annales de l'Institut Technique du Bâtiment et des Travaux Publics*, 19, (223 and 224), France.
- Walsh, I.D. (2011) *Manual of Highway Design and Management*, ICE manuals (Ed. I.D. Walsh). Institution of Civil Engineers, London.
- Wilson, G. (1941) The calculation of the bearing capacity of footings on clay. *Jour. Inst. Civ. Engrs*, London, pp. 87–96.
- Wise, W.R. (1992) A new insight on pore structure and permeability. *Water Resources Research*, 28, (2), pp. 189–198.

Index

- A-line, 15, 18
- active earth pressure, 183, 185, 195, 216
 - choice of method, 210
 - cohesion, 191
 - worked example, 187, 188, 189, 196, 197, 200
- activity of a clay, 14
- adhesion, 199, 204, 210, 290, 296
- adsorbed water, 4, 56, 57
- aeration zone, 33, 34
- aerial photographs, 157, 158
- agricultural, 1
- air voids, 437, 442
- allowable bearing pressure, 255
- anchored sheet pile wall, 243
- angle of shearing resistance, 95, 97, 98, 120, 183, 185, 191, 195, 201, 210, 239, 260, 297, 386, 408, 411
 - worked example, 95
- anisotropic soil, 63, 369
- area ratio, 168
- Atterberg tests, 9
- auger, 160

- backfill, 210
- basalt, 2
- basis of geotechnical design, Eurocode 7, 139
- bearing capacity, 255–288, 296–300
 - allowable bearing pressure, 286, 287, 320
 - coefficients, 260–262, 264–266, 270
 - depth factors, 266
 - earth pressure theory, 256
 - eccentric loading, 268, 273
 - effect of groundwater, 264
 - estimate from *in situ* testing, 285
 - Eurocode 7 design, 269
 - general equation, 265
 - inclined loading, 269
 - non-homogeneous soil, 284
 - pile foundation, 296–300
 - plastic failure, 259
 - Prandtl's analysis, 260
 - safe bearing capacity, 263
 - shallow foundation, 255–288
 - shape factors, 266
 - slip circle method, 257
 - soil parameters, 262
 - terms, 255
 - Terzaghi analysis, 260
 - ultimate bearing capacity, 256
 - worked example, 262, 263, 267, 270, 272, 276, 281
- bearing pressure, retaining wall, 227
- bentonite, 5
- Bishop's conventional method, 400
- Bishop's routine method, 401
- bored piles, 293
- boreholes, 160, 161, 164, 165
- boulder clay, 6
- Boussinesq stress distribution, 81
- braced excavation, 248
- British soil classification system, 15
- bulbs of pressure, 85–87
- bulk density, 29
- bulk unit weight, 25, 29
- buoyant unit weight, 26, 49
- buoyant uplift, 52

- cable percussion boring, 161, 165
- California bearing ratio (CBR), 447
- cantilever sheet pile wall, 237
- cantilever wall, 221
- capillarity, 33, 54, 55, 56
- capillary fringe, 33, 34
- capping layer, 449
- CBR testing, 447
- CEN, 136

- chalk, 3
- characteristic values, Eurocode 7, 140
- classification of soil, 14–19
- clay, 4, 5, 38, 42, 56, 96, 98, 116, 119, 124, 130, 131, 132, 194, 217, 228, 312, 316, 317, 325, 338, 369
- clay auger, 160
- clay cutter, 162
- clay minerals, 4
- clay, activity, 14
- clay, macrostructure, 5
- clay, microstructure, 5
- clay, normally consolidated, 116, 119, 120, 121, 122, 124, 130, 183, 217, 218, 303, 332, 333, 334, 335, 338, 346, 348, 349
- clay, overconsolidated, 116, 120, 121, 122, 124, 130, 132, 217, 219, 296, 333, 335, 338
- clay, sampling, 164
- clay, sensitivity, 129
- coefficient of consolidation, 358, 360, 362, 363
- coefficient of permeability, approximation of, 42
- coefficient of permeability, 36, 362
- coefficient of volume compressibility, 328, 329, 343
- cohesion, 96, 97, 98, 191, 195, 199, 204, 210, 228, 232, 257, 258, 408
- cohesionless, 4, 88, 183, 185, 195, 297, 320, 323
- cohesive, 4, 9, 50, 88, 96, 98, 106, 120, 131, 164, 191, 193, 264, 296, 312, 316, 390, 392, 433
- cohesive soil, settlement, 316

- compaction, 432–442
 core cutter, 442
 end-product compaction, 442
 equipment (site plant), 432–433
 field measurement, 442
 frost susceptibility, 452
 in the field, 441
 in the laboratory, 434–440
 method compaction, 442
 moisture content determination, 444
 nuclear density gauge, 444
 relative compaction, 442
 sand replacement test, 442
 sand replacement test, worked example, 444
 specification, 441
 testing (laboratory), 434–440
 testing, worked example, 439
 compression, 183, 315–352, 361
 compression index, 333, 334, 346
 cone penetration test (CPT), 172, 301
 cone penetration test (liquid limit), 11
 cone resistance, 321
 consolidated undrained test, 109
 consolidation, 303, 315, 316, 325–352, 355–378, 380
 average degree of, 359
 coefficient of, 358, 360, 362, 363
 coefficient of volume compressibility, 328, 329, 343
 compression curve for normally consolidated clay, 333
 compression curve for overconsolidated clay, 333
 compression index, 334
 degree of, 5, 355, 359, 365, 378, 381
 degree of, worked example, 365, 373
 drainage, 369, 378
 drainage path, 359
 during construction, 366
 e-p curve, 326, 331, 332
 general, 336
 hydraulic cell, 39
 in the field, worked example, 365
 isotropic, 344, 346
 model law, 365
 normal consolidation line, 345
 numerical analysis, 369, 376, 377
 one-dimensional, 325
 pore pressure, 355, 374, 378
 pore pressure, worked example, 375
 rate of, 355–378
 recompression, 335, 336
 stage in triaxial test, 108, 109
 swelling line, 345
 Terzaghi's theory, 355
 virgin curve, 332
 volume change, 315, 325, 327, 355, 356, 357, 363
 consolidation cell, 39
 consolidation settlement, 325–348, 355–378
 consolidation test, 326, 360, 361
 worked example, 329, 363
 constant head permeameter, 36
 worked example, 37
 contact pressure, 88
 contiguous bored pile wall, 225
 continuous sampler, 166
 core cutter, 442
 Coulomb's law, 96, 98
 Coulomb's theory, 195, 202
 worked example, 202
 CPT, 172
 crib wall, 223
 critical hydraulic gradient, 49
 critical state, 124–129
 Culmann line, 197, 198
 dams, 59–62, 374
 Darcy's law, 36
 degree of consolidation, 5, 355, 359, 365, 378, 381
 degree of sample disturbance, 167
 degree of saturation, 22, 29
 density, 24, 25, 26, 97, 103, 123, 132, 169, 432, 434, 436, 441, 453
 density index, 29, 30, 174, 175
 density, water, 23, 25
 description of soils, 21
 design effect of actions, Eurocode 7, 144
 design resistance, Eurocode 7, 144, 145
 design values, Eurocode 7, 142, 143
 desk study, 157
 deviator stress, 105, 108, 320
 diaphragm wall, 224
 dilatancy, 5
 disturbed samples, 164
 downdrag, 303
 drainage, 51, 77, 96, 100, 108, 158, 190, 210, 211, 213, 328, 358, 359, 361, 362, 369, 374, 378, 380, 381, 398, 449
 drainage path, 359
 drainage system, 211, 248, 264
 drained shear, 121
 drained test, 107
 drilling, rotary, 162, 164
 drilling, sonic, 163
 driven piles, 291
 dry density, 29, 434, 436, 437, 438, 447
 dry density-moisture content relationship, 436
 dry unit weight, 26, 30
 Dutch cone penetrometer, 172
 dynamic probing test, 176
 earth pressure, 183
 active, 183
 passive, 183
 surcharge, 205
 surcharge, worked example, 206, 207
 eccentric loading, 268
 effective size, 7
 effective stress, 77, 78, 97
 worked example, 78, 79
 effective unit weight, 26
 elastic compression, 315
 embedded wall, 224
 end-product compaction, 442
 EQU limit state, 144, 145, 146, 147
 equipotential lines, 45
 Eurocode 7, 136–155, 156–159, 168–169, 179–182, 229–248, 269–284, 303–311, 343, 416–421
 actions, partial factors, 148
 basis of geotechnical design, 139
 bearing resistance, 269
 bearing resistance, worked example, 270, 272, 276, 281
 buoyant uplift, worked example, 53
 cautious estimate, 141
 characteristic values of geotechnical parameters, 140
 contents, 138
 correlation factor, 143
 degree of utilisation, 153
 design approaches, 150
 design approaches, worked example, 151, 152
 design approaches, partial factor sets, 151
 design by prescriptive method, 284
 design effect of actions, 144

- Eurocode 7 (cont'd)
- design of pile foundations, 303–311
 - design of retaining structures, 229–248
 - design of shallow/spread foundations, 269–284
 - design of slopes, 416–421
 - design resistance, 144, 145
 - design value of action, 143
 - design value of action, worked example, 143
 - design value of geometrical data, 144
 - design value of geotechnical parameters, 143
 - design value of geotechnical parameters, worked example, 144
 - design values, 142, 143
 - destabilising action, 147
 - EQU limit state, 144, 145, 146, 147
 - EQU limit state, worked example, 149
 - GEO limit state, 145, 146, 150, 237, 238, 244, 271, 391, 416
 - GEO limit state, worked example, 153, 271, 272, 276, 281
 - geotechnical design by calculation, 139
 - geotechnical design report, 155
 - geotechnical parameters, partial factors, 148
 - ground investigation and testing, 156
 - how to use Eurocode 7, 136–155
 - HYD limit state, 145, 146
 - nationally derived parameters (NDP), 137, 304
 - over-design factor, 153
 - Part 1, 138
 - Part 1, National Annex, 304
 - Part 2, 138, 156
 - partial factors of safety, 142
 - pile foundations design, 303–311
 - pile foundations ground tests, 309
 - pile foundations ground tests, worked example, 309
 - pile testing, 304, 305
 - pile testing, worked example, 306, 307
 - resistances, partial factors, 148
 - retaining structures, 229–248
 - sample quality class, 168
 - serviceability limit state, 155, 343
 - serviceability limit state, worked example, 343
 - shallow/spread foundation design, 269–284
 - site investigation and Eurocode 7, 156–159, 168–169, 179–182
 - slope stability, 416–421
 - slope stability, worked example, 417, 419, 420
 - stabilising action, 147
 - STR limit state, 145, 146
 - table of partial factors, 148
 - UPL limit state, 145, 146
 - Eurocodes, 136–137
 - National Annex, 137
 - programme, 136
 - timeline, 137
 - Euronorm, 136
 - excess hydrostatic head, 35
 - falling head permeameter, 38
 - worked example, 39
 - field vane test, 177
 - worked example, 179
 - filters, 51
 - worked example, 53
 - flow lines, 45
 - flow nets, 45
 - drawing, 47
 - flow of water, 35
 - flow, general differential equation, 42
 - foundations, 255–288, 290–313, 315–352, 355–378
 - Eurocode 7 design, 269–284, 303–311
 - pile (see also pile foundations), 256, 290–313
 - settlement (see also settlement), 294, 305, 312, 315–352, 355–369
 - shallow (see also shallow foundations), 256–288
 - types of, 255
 - friction, 50, 91, 96, 97, 172, 185, 191, 195, 199, 203, 204, 210, 227, 228, 290, 297, 302, 303
 - gabbro, 2
 - gabion wall, 223
 - GEO limit state, 145–146, 150, 237, 238, 244, 391, 416
 - geological maps, 157
 - geotechnical design by calculation, Eurocode 7, 139
 - geotechnical engineering, 1
 - geotechnical reports, 179–182
 - glacial till, 6
 - grading, 7
 - granite, 2
 - granular, 4, 7, 21, 29, 51, 123, 185, 190, 195, 250, 312, 386
 - granular soils, 202, 218, 227
 - gravel, 5, 42, 123, 173, 210, 211, 217, 300, 312
 - gravel auger, 160
 - gravel content, 438
 - gravity wall, 221
 - ground investigation, 156–182
 - area ratio, 168
 - area ratio, worked example, 168
 - boreholes, 160–165
 - continuous sampler, 166
 - degree of sample disturbance, 167
 - depths of investigation points, 159
 - desk study, 157
 - field and lab testing, 158
 - field testing, 172
 - piston sampler, 166
 - planning, 157
 - rock sampling, 170
 - sample quality class, 168
 - sampling, 164–167
 - thin-walled tube sampler, 166
 - trial pits, 160, 164
 - window sampler, 166
 - groundwater, 2, 33, 34, 40, 41, 160, 213, 247, 264, 397
 - level, 33, 34
 - measurement, 170
 - hardpan, 1
 - highway design, 432, 446–453
 - HYD limit state, 145, 146
 - hydraulic consolidation cell, 39
 - hydraulic gradient, 45
 - critical, 49
 - hydraulic head, 35
 - hydrostatic head, 35, 213
 - hygroscopic water, 34
 - hysteresis, 57
 - igneous rocks, 2
 - illite, 4
 - immediate settlement, 316, 337, 344
 - inclined loading, 269
 - index tests, 9
 - intermediate belt, 34
 - intrusive igneous, 2
 - isotropic consolidation, 344, 346

- isotropic consolidation pressure, 346
- kaolinite, 4
- kappa, or swelling, line, 345
- lamda, or normal consolidation, line, 345
- lateral earth pressure, 183–219
- laterites, 3
- liquid limit, 9
test, 11
worked example, 13
- liquidity index, 10, 130
- Maclaurin's series, 369
- magma, 2
- marble, 3
- matric suction, 56, 57
- MCV, 453, 454, 456
calibration line, 456
worked example, 454
moisture condition apparatus, 454
test procedure, 453
- metamorphic rocks, 2, 3
- method compaction, 442
- modulus of elasticity, 320
- Mohr circle, 92, 93, 94, 95
- Mohr-Coulomb, 98
- moisture content determination, *in situ*, 444
- montmorillonite, 4
- negative skin friction, 303
- normal consolidation, or lamda, line, 345
- normally consolidated, 116, 174
- normally consolidated clay, 119, 120, 121, 122, 124, 130, 183, 217, 218, 303, 332, 333, 334, 335, 338, 346, 348, 349
- nuclear density gauge, 444, 445
- oedometer, 326
- oedometer (Rowe), 328
- operative strength, 122, 123, 124
- optimum moisture content, 436
- organic soil, 3
- osmotic suction, 57
- overburden, 89, 119, 174, 219, 264, 297, 320, 322, 333, 335
- overconsolidated, 116, 174
- overconsolidated clay, 120, 121, 122, 124, 130, 132, 217, 219, 296, 333, 335, 338
- overconsolidation ratio, 120
- pad footing, 255
- partial factors of safety, Eurocode 7, 142
- partially saturated soil, 22, 28, 33, 56, 437
- particle density, 22
- particle size distribution, 7
worked example, 8
- particle specific gravity, 29
- passive earth pressure, 183, 190, 202, 218
Eurocode 7, 238
- pavement, 446
- peat, 3
- permeability, 36, 66
determination in the field, 40
determination in the laboratory, 36–39
- phreatic water, 33
- piezometer, 170, 171
- pile foundations, 256, 290–313
adhesion factor, 296
bearing capacity, 296
bored piles, 293, 294, 301
classification of, 290
combination piles, 290
design failure load, 295
design to Eurocode 7, 303–311
downdrag, 303
drained analysis, 297
drained analysis, worked example, 299
driven piles, 291, 293, 300
end bearing, 290
Eurocode 7 Part 1, National Annexe, 304
Franki pile, 294
friction piles, 290
ground testing, 300, 301, 309
ground testing, worked example, 302, 309
group settlement, 312
groups, 311
installation, 291
jacked piles, 292
jetted piles, 292
negative skin friction, 303
pile testing, 294, 304
precast concrete piles, 291
screw piles, 293
settlement, 294, 305, 312
steel piles, 292
timber piles, 291
undrained analysis, 296
undrained analysis, worked example, 298
- pile testing, 294
constant rate test, 295
design failure load, 295
- dynamic load test, 296, 311
ground tests, 296
maintained load test, 294, 307
static load test, 294, 304
- pipng, 51
- piston sampler, 166
- planar failure of slopes, 386
- plastic limit, 9
- plastic limit test, 12
- plasticity chart, 18
- plasticity index, 10
- plate loading test, 176, 285, 325
- pore pressure (*see also* pore water pressure), 76, 77, 78, 103, 106, 108, 113, 122, 172, 316, 335, 336, 355, 356, 357, 361, 366, 374, 378, 388, 392, 395, 397, 411
- pore pressure coefficients A and B, 112, 113, 114, 115, 116, 117, 118
worked example, 117
- pore pressure ratio, 388, 397, 411
- pore pressure, excess, 315, 316, 325, 326, 355, 358, 359
- pore water, 35, 76, 77, 78
- pore water pressure (*see also* pore pressure), 56, 76, 77, 98, 108, 109, 121, 122, 124, 145, 171, 172, 173, 217, 315, 328, 329, 335, 336, 348, 357, 362, 369, 374, 436
- pore water pressure, excess, 123, 315, 325, 326, 329, 336, 357, 362, 369, 378, 387, 388
- porosity, 22, 29, 357
- pressuremeter test, 176
- primary compression, 315
- principal stress, 92, 105
- psychrometer, 58
- pumping in test, 42
- pumping out test, 40
worked example, 41
- quartzite, 3
- quicksand, 50
- raft foundation, 255
- Rankine's theory, 185, 190, 256
- rapid drawdown, 399
- reinforced concrete wall, 221
- reinforced soil, 250
- relative compaction, 442
- relative density, 298
- residual soil, 3
- residual strength, 130, 131, 132

- retaining structures, 221–252
 - bearing pressure, 227
 - braced excavation, 248
 - cantilever wall, 221
 - contiguous bored pile wall, 225
 - crib wall, 223
 - design, 226–247
 - diaphragm wall, 224
 - embedded wall, 224
 - Eurocode 7, worked example, 229, 232
 - failure modes, 225
 - gabion wall, 223
 - gravity wall, 221
 - gravity wall design, 226
 - reinforced soil, 250
 - secant bore piled wall, 225
 - sheet pile wall, 224
 - sheet pile wall design, 236
 - sheet pile wall, worked example, 240, 245, 247
 - sliding resistance, 227, 228
 - soil nailing, 251
 - traditional design, worked example, 232
- road, 446
- rock, 2
- rock sampling, 170
- rollers, 432
- rotary drilling, 162, 164
- rotational failure of slopes, 390
- Rowe cell, 39
- Rowe oedometer, 328

- safe bearing capacity, 255
- sample disturbance, 167
- sample quality class, 168
- sampling, 164
- sand, 5, 37, 42, 100, 103, 123, 132, 167, 173, 174, 217, 300, 312, 320
- sand drains, 378–382
 - worked example, 382
- sand replacement test, 442
- sandstone, 3
- saturated density, 29
- saturated flow, 35, 36
- saturated unit weight, 25, 30
- saturation line, 437
- saturation zone, 33, 34
- secant bore piled wall, 225
- secondary compression, 315
- sedimentary rocks, 2
- seepage, 35, 36, 44, 45, 47, 50, 59–71, 211, 213, 247, 386, 387, 398
- seepage forces, 50
- seepage velocity, 35
- sensitivity of clays, 129

- serviceability limit states, Eurocode 7, 155, 343
- settlement, 81, 88, 138, 155, 176, 284, 286, 287, 294, 295, 315–352, 355–378
 - analysis, 336, 340
 - soil compression, 315–352
 - cohesive soil, 316
 - consolidation, 325–348, 355–378
 - de Beer and Martens' method, 321, 323
 - worked example, 318, 319, 323, 334, 338, 367
 - foundations, 315–354, 355–368
 - immediate, 316, 317, 320, 321, 337, 339
 - Meyerhof's method, 320
 - of pile groups, 312
 - rate of, 355–378
 - recompression, 327, 335, 336, 344
 - Schmertmann's method, 321, 324
 - thin clay layer, 317
- shale, 3
- shallow foundations, 255, 256–288
 - bearing capacity, 256–285
 - design, 269–284
 - settlement, 315–354, 355–368
- shear box test, 99
 - worked example, 100, 101
- shear strength, 81, 87, 91–135, 168, 169, 176, 285, 296, 320, 392, 416, 453
 - effect of density, 103
 - shear box, 99
 - triaxial test, 104
- unconfined compression test, 106
- shear strength parameters, determination, 99
- shear stress, 87
- shear, consolidated undrained, 121
 - drained, 121
 - undrained, 120
- shearing resistance, 94
- shearing resistance, angle of, 95, 97, 98, 120, 183, 185, 191, 195, 201, 210, 239, 260, 297, 386, 408, 411
- sheet pile wall, 224
 - design, 236
 - groundwater, 247
 - reduction of design moment, 247
- shrinkage limit, 10
- sieve analysis, 7


- silt, 5, 42, 96, 123, 132, 217, 219, 301
- site investigation, 156–182
- site reconnaissance, 158
- skin friction, 296, 297, 298, 303
- slate, 3
- sliding resistance, 227, 228
- slopes, 386–421
 - Bishop and Morgenstern charts, 411, 426
 - Bishop and Morgenstern charts, worked example, 412, 413
 - Bishop's conventional method, 400
 - Bishop's methods, worked example, 403, 406
 - Bishop's routine method, 401
 - design charts, 408
 - effective stress analysis, 400
 - Eurocode 7, 416–421
 - granular, 386
 - method of slices, 394
 - planar failure, 386
 - planar slip, 389
 - pore pressure ratio, 388, 397
 - rapid drawdown, 386, 399
 - rotational failure, 390
 - rotational failure, worked example, 393
 - stability, 386
 - Swedish method of slices, 394, 395
 - Swedish method of slices, worked example, 395
 - Taylor's charts, 408
 - worked example, 409, 410, 417
 - tension crack, 392
 - total stress analysis, 392
 - wedge failure, 414
 - wedge failure, worked example, 414
- soil,
 - drying, 6
 - field identification, 5
 - general 2, 3
 - laboratory classification, 6
 - physical relations, 29
 - unsaturated, 54–59
- soil belt, 34
- soil classification, 14–19
 - worked example, 18, 19
- soil description, 15–19, 21
- soil mechanics, 1
- soil moisture capacitance probe, 445
- soil nailing, 251
- soil properties, 21
- soil suction, 56–58
 - measurement, 57, 58

- soil survey maps, 157
- soil testing, consolidation, 326
- sonic drilling, 163
- specific gravity, 22
 - determination, 23
 - worked example, 24
- speedy moisture tester, 445
- SPT, 173, 287, 300, 302, 340
 - correction factors, 174, 175
 - worked example, 175, 288
- stability of slopes (*see also* slopes, stability), 386–421
- standard penetration test (SPT), 173
- STR limit state, 145, 146
- strength,
 - critical, 124
 - residual, 129–132
- stress paths, 125–127
 - worked example, 350
 - general consolidation, 349
 - oedometer, 348
 - two dimensional, 346
- stress-strain relationship, 74
- stress,
 - bulbs of pressure, 85–87
 - complex, 91
 - due to point load, 81, 82
 - due to rectangular load, 82
 - due to surface loading, 80
 - principal, 92
- strip foundation, 255
- sub-base, 446
- subgrade, 446, 449, 452
- submerged density, 29
- submerged unit weight, 30
- subsoil, 1
- subsurface water, 33, 34
- suction, 56, 57
- surface tension, 54–56
- swelling, or kappa, line, 345
- table of partial factors, Eurocode 7, 148
- Taylor's series, 370
- tensiometer, 58
- tension crack, 193, 194, 218, 392
 - worked example, 193
- tension zone, 193
- thin-walled tube sampler, 166
- thixotropy, 130
- time domain reflectometry, 445
- topographical maps, 157
- topsoil, 1
- total stress, 75, 76, 77, 78
 - worked example, 78, 79
- traffic assessment, 452
- transported soil, 3
- trial pits, 160, 164
- triaxial extension test, 118
- triaxial test, 104
- triaxial testing, 106–109
 - back pressures, 109
 - consolidated undrained test, 109
 - drained test, 107
 - worked example, 107, 108, 110, 111, 116, 117
- two dimensional stress paths, 346
- ultimate bearing capacity, 255, 256
- unconfined compression test, 106
- undisturbed samples (cohesive soils), 164
- undisturbed samples (sands), 167
- undrained shear, 120
- uniformity coefficient, 7
- unit weight, 24, 25, 26, 76, 148, 183, 264, 399, 408
 - bulk, 25, 29
 - buoyant, 26, 49
 - dry, 26, 30
 - effective, 26, 264
 - worked example, 26
 - saturated, 25, 30
 - submerged, 30
 - water, 25, 26, 55
- unsaturated soil, 54–59
- UPL limit state, 145, 146
- vane test, 177
- void ratio, 22, 29, 357, 437
- wall adhesion, 199
- water content, 6, 9, 10, 11, 29, 56, 57, 58, 130, 169, 434, 436, 445, 453
 - determination, 6
 - worked example, 6
 - natural, 10
- water in soil, 33, 34
 - flow, 35
 - free, 34
 - held, 34
 - phreatic, 33
 - subsurface, 33, 34
- water retention, 57
- water table, 33, 34
- wearing course, 446
- wedge failure of slope, 414
- weight density, 25, 142, 143, 148
- window sampler, 166

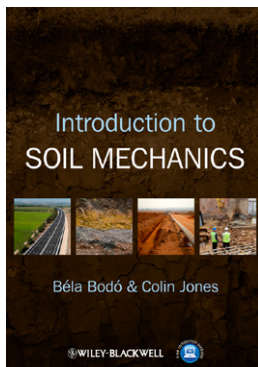
WILEY Blackwell




Also available from Wiley Blackwell




Civil Engineering Hydraulics, 5th Edition
Martin Marriott
978-1-4051-6195-4




Introduction to Soil Mechanics
Béla Bodó, Colin Jones
978-0-470-65943-4




Unsaturated Soils
E. J. Murray, V. Sivakumar
978-1-4443-3212-4



Engineering Project Appraisal, 2nd Edition
Martin Rogers, Aidan Duffy
978-0-470-67299-0



Reconstructing Project Management
Peter W.G. Morris
978-0-470-65907-6



Handbook of Tunnel Engineering I
Bernhard Maidl, Markus Thewes, Ulrich Maidl
978-3-433-03048-6

www.wiley.com/go/construction

WILEY END USER LICENSE AGREEMENT

Go to www.wiley.com/go/eula to access Wiley's ebook EULA.